

Adda247

SSC GD

CONSTABLE 2023 EBOOK



INCLUDES

- VACANCY TREND
- ELIGIBILITY
- CUT OFF TREND
- EXAM PATTERN & SYLLABUS
- PREVIOUS YEAR PAPERS

SSC GD Notification 2023: Overview

SSC has announced 75768 SSC GD Vacancy 2023-24 for Constable posts for BSF, CISF, CRPF, SSB, ITBP, AR, SSF, NIA forces through an SSC GD Notification. Here is a brief provided about the SSC GD Constable 2023 in the below table.

| SSC GD 2023 Notification: Overview | |
|---------------------------------------|--|
| Organization | Staff Selection Commission (SSC) |
| Post Name | Constables (GD) in Central Armed Police Forces (CAPFs), SSF and Rifleman (GD) in Assam Rifles (AR) and Sepoy in Narcotics Control Bureau |
| SSC GD Vacancy 2023-24 | 75768 |
| Category | Govt Jobs |
| Online Application Mode | Online |
| Exam Mode | Online |
| Exam Type | National Level Exam |
| SSC GD Notification 2023 Release Date | 17 November 2023 |
| Online Registration Dates | 24 November 2023 to 28 December 2023 |
| SSC GD Exam Date 2023-24 | 20th, 21st, 22nd, 23rd, 24th, 26th, 27th, 28th, 29th, February and 1st, 5th, 6th, 7th, 11th, 12th March, 2024 [NEW] |
| Job Location | PAN India |
| Age Limit | 18-23 years |
| Educational Qualification | 10th Pass |
| Selection Process | <ul style="list-style-type: none"> • CBT • PST • PET • Medical Examination |
| Official Website | www.ssc.nic.in |

SSC GD Notification 2023: Eligibility Criteria

All the important eligibility criteria including age limit and educational qualification are provided in this article.

SSC GD Constable Nationality

- Candidates willing to apply for the vacancies released under SSC GD Recruitment 2023 must be a resident of India.

SSC GD Constable Education Qualification (As of 01/01/2023)

- To be eligible for the SSC GD Constable Recruitment 2023, candidates must ensure they have cleared matriculation or 10th class from a recognized Board/ University before applying for the General Duty Examination.

SSC GD Constable Age Limit

- The age of the applicant must not be less than 18 years and should not be more than 23 years.
- The crucial date to calculate the age limit is 01 August 2023.

Age Relaxation

The relaxation in Age Limit will also be given to the candidates of backward categories according to government rules and regulations which is 3 years for the candidates of the OBC category and 5 years for the applicants of SC/ST Categories.

SSC GD Previous Year Cut Off

SSC GD Constable Cut Off 2022 (Candidates qualified against All India vacancies of Sepoy in NCB)


| Category | Cut Off Marks | Part A Marks | Part B Marks | DOB |
|----------|---------------|--------------|--------------|------------|
| EWS | 136.75 | 36 | 23 | 11/07/2003 |
| SC | 127.33 | 38 | 16 | 02/02/2004 |
| ST | 123.04 | 35 | 27.5 | 02/12/1994 |
| ESM | 71.83 | 24.5 | 4.5 | 24/06/1986 |
| OBC | 137.64 | 36 | 22 | 20/03/1998 |
| UR | 139.32 | 38 | 26 | 28/12/1999 |

SSC GD Constable Cut Off 2022 (Female candidates qualified against All-India vacancies of SSF)

| Category | Cut Off Marks | Part A Marks | Part B Marks | DOB |
|----------|---------------|--------------|--------------|------------|
| EWS | 128.41 | 33.5 | 20 | 15/07/2002 |
| SC | 115.25 | 37.5 | 18 | 15/08/2000 |
| ST | 112.13 | 34 | 3.5 | 07/01/2002 |
| OBC | 130.78 | 37.5 | 12 | 16/05/2003 |
| UR | 132.70 | 36 | 19 | 06/05/2000 |

SSC GD Constable Cut Off 2022 (Male candidates qualified against All-India vacancies of SSF)

| Category | Cut Off Marks | Part A Marks | Part B Marks | DOB |
|----------|---------------|--------------|--------------|------------|
| EWS | 139.16 | 38 | 23.5 | 20/04/2003 |
| SC | 129.75 | 33.5 | 19.5 | 01/03/2002 |
| ST | 126.45 | 26.5 | 26 | 15/05/1998 |
| ESM | 75.01 | 26 | 16 | 06/01/1974 |
| OBC | 140.75 | 37.5 | 13.5 | 05/11/2000 |
| UR | 142.03 | 40 | 14.5 | 02/10/2004 |



SSC GD Vacancy Trend

| Year | No. Of Vacancy |
|------|----------------|
| 2023 | 76768 |
| 2022 | 50187 |
| 2021 | 25271 |
| 2020 | 60210 |
| 2019 | 54593 |

SSC GD 2023 Application Fees

| Category | Application Fee |
|----------------------------|-----------------|
| General Male | Rs. 100 |
| Female/SC/ST/Ex-serviceman | No Fee |

SSC GD 2023 Selection Process

The SSC GD Constable selection process consists of four different stages. The candidates who qualify in all the stages of the examination will have to appear for document verification.

1. Computer Based Test (CBT)
2. Physical Standard Test (PST)
3. Physical Efficiency Test (PET)
4. Medical Test

SSC GD 2023 Exam Pattern

- Each question will carry 2 marks
- There will be a negative marking of 0.50 marks for each wrong answer

| Parts | Name of Disciplines | Questions | Marks | Duration |
|--------|---|-----------|------------|------------|
| Part-A | General Intelligence and reasoning | 20 | 40 | 60 minutes |
| Part-B | General Awareness and General Knowledge | 20 | 40 | |
| Part-C | Elementary Mathematics | 20 | 40 | |
| Part-D | English/Hindi | 20 | 40 | |
| | Total | 80 | 160 | |

SSC GD Constable Physical Efficiency Test Exam Pattern

Candidates have to clear the race within the following time limits:-

| Male | Female | Category |
|------------------|------------------|--|
| 5 km in 24 min | 1.6 km in 8½ min | For candidates other than those belonging to the Ladakh region |
| 1.6 km in 6½ min | 800 m in 4 min | For candidates of the Ladakh region |

SSC GD Constable Physical Standard Test Exam Pattern

| Standard | For Male Candidates | For Female Candidates |
|-------------------------------------|---------------------|-----------------------|
| Height (General, SC & OBC) | 170 | 157 |
| Height (ST) | 162.5 | 150 |
| Chest Expansion (General, SC & OBC) | 80/ 5 | N/A |
| Chest Expansion (ST) | 76 / 5 | N/A |

SSC GD 2023 Syllabus

SSC GD Constable Paper comprises four Sections/Subjects that are mentioned below: Check complete SSC GD Syllabus here.

- General Intelligence and Reasoning
- General Knowledge and General Awareness
- Elementary Mathematics
- English/ Hindi

The SSC GD syllabus contains Computer Based Examination which includes an objective-type paper carrying 160 marks for 80 questions.

SSC GD Syllabus For General Intelligence & Reasoning

This General Intelligence section consists of both verbal and non-verbal types of reasoning questions. This test particularly includes questions that test the candidate's analytical and logical reasoning skills and his/ her ability to observe and distinguish patterns. The topics included in the syllabus are as follows:

- Reasoning Analogies
- Arithmetic Number Series
- Arithmetical Reasoning
- Coding-Decoding
- Discrimination
- Figural Classification
- Non-verbal Series
- Observation
- Relationship Concepts – Blood Relations
- Similarities and Differences
- Spatial Orientation
- Spatial Visualization
- Visual Memory

SSC GD Syllabus For General Knowledge and General Awareness

This section depends on current news affairs and some general knowledge. These questions do not require the candidate to have special knowledge of any particular discipline. The questions in this component revolve around matters of everyday observations and test the candidate's knowledge of the environment around him/ her and topics related to India and its neighboring countries such as:

- Culture
- Economic Scene
- General Polity
- Geography
- History
- Indian Constitution
- Scientific Research
- Sports

ENGLISH

SSC 2023-24

SSC GD

TOPIC WISE + MOCK TESTS

COMPLETE PACK

360 + TOTAL TESTS

SSC GD Syllabus For Elementary Mathematics

This section is based on high-school-level mathematical problems. According to the SSC GD syllabus, the following topics are:

- Averages
- Computation of Whole Numbers
- Decimals and Fractions
- Discount
- Fundamental Arithmetical Operations
- Interest
- Mensuration
- Number Systems
- Percentages
- Profit and Loss
- Ratio and Proportion
- Ratio and Time
- Relationship between Numbers
- Time and Distance
- Time and Work

SSC GD Syllabus For English/ Hindi

This is to check the basic knowledge of candidates in Hindi or English. The syllabus is as follows:

- Error Spotting
- Fill in the Blanks: Articles, Prepositions, etc.
- Phrase replacements
- Cloze test
- Synonyms & Antonyms
- Phrase and idioms meaning
- One Word Substitution
- Spellings
- Reading comprehension

SSC GD 2023 Salary

| Particulars | Details |
|-----------------|----------------------|
| Sepoy in NIA | Rs. 18,000 to 56,900 |
| All Other Posts | Rs. 21,700 to 69,100 |

SSC GD Notification 2023: Job Profile

SSC GD's salary is high compared to the other government posts. The duties and responsibilities of this post are also higher. Let us go through the job profiles for the SSC GD Constable.

- GD Constable in BSF
- GD Constable in ITBP
- GD Constable in CISF
- GD Constable in SSB
- GD Constable in CRPF
- GD Constable in Assam Rifles
- GD Constable in SSF

BILINGUAL

SSC PRIME TEST PACK

CGL | CHSL | GD | MTS

1000+ TOTAL TESTS



SSC GD GARUDA BATCH



ENGLISH

SSC 2023-24 SSC GD

TOPIC WISE + MOCK TESTS
COMPLETE PACK

360 + TOTAL TESTS

BILINGUAL

SSC PRIME **TEST PACK**

CGL | CHSL | GD | MTS

1000+ TOTAL TESTS

Constable GD in CAPFs SSF Rifleman GD in Assam Rifles and Sepoy in NCB Examination 2022

| | |
|----------------|-------------------------------|
| Roll Number | |
| Candidate Name | |
| Venue Name | Cds Infotech |
| Exam Date | 10/01/2023 |
| Exam Time | 9:00 AM - 10:00 AM |
| Subject | Constable GD Examination 2022 |

Section : Part-A-General Intelligence and Reasoning

Q.1 Select the correct mirror image of the given figure when the mirror is placed at MN as shown below.

CLkv38z

M ————— N

Ans

✗ 1. **CTKΛε8Σ**

✗ 2. **CTKΛv38Σ**

✓ 3. **CTKΛ38Σ**

✗ 4. **Σ8εvκJc**

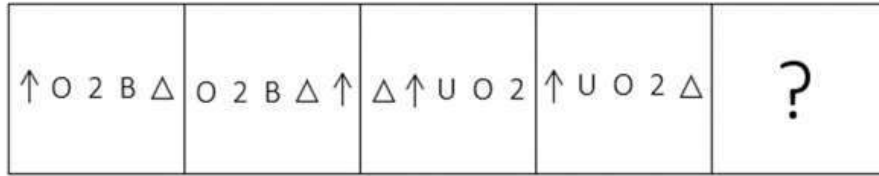


Bankers Adda

Question ID : 26433080804
 Status : Answered
 Chosen Option : 3

മലയാളം

Q.2 Which figure should replace the question mark (?) if the series were to be continued?



Ans

✗ 1. Δ 2 O U ↑

✓ 2. 2 Δ ☆ ↑ U

✗ 3. 2 Δ O ↑ U

✗ 4. Δ 2 F U ↑

Question ID : 26433076637

Status : Answered

Chosen Option : 2

Q.3 Select the option that is related to the fifth letter-cluster in the same way as the second letter-cluster is related to the first letter-cluster and the fourth letter-cluster is related to the third letter-cluster.

YOUR: XPEJ :: TONE: SPLW :: BANK: ?

Ans ✗ 1. XYOP

✗ 2. CBOL

✓ 3. ABLQ

✗ 4. YZMP

Question ID : 26433057494

Status : Answered

Chosen Option : 3

Q.4 Select the option that is related to the fifth letter-cluster in the same way as the second letter-cluster is related to the first letter-cluster and the fourth letter-cluster is related to the third letter-cluster.

COMFORT : OCFMTRO :: CONTROL : OCTNLOR :: DIGITAL : ?

- Ans 1. IDIGLAT
 2. GITALDI
 3. GIDLATI
 4. LATIGID

Question ID : 26433069633
Status : Answered
Chosen Option : 1

Q.5 In a certain code language, 'cart light' is coded as 'straw handle', 'plug light' is coded as 'toes handle', and 'cart plug' is coded as 'toes straw'. What is the code word for 'cart'?

- Ans 1. plug
 2. straw
 3. handle
 4. toes

Question ID : 26433079367
Status : Answered
Chosen Option : 2

Q.6 Which of the following numbers will replace the question mark (?) in the given series?
1, 6, 31, 156, ?, 3906

- Ans 1. 781
 2. 2125
 3. 985
 4. 1225

Question ID : 26433070219
Status : Answered
Chosen Option : 1

Q.7 Which two signs should be interchanged to make the below equation mathematically correct?

$$72 \times 6 + 18 \div 5 - 9 = 93$$

- Ans 1. \times and $+$
 2. $+$ and $-$
 3. \div and $-$
 4. \times and \div

Question ID : 264330117495
Status : Answered
Chosen Option : 4

Q.8 Which of the following numbers will replace the question mark (?) in the given series?
33, 47, 44, 58, 56, 70, 69, ?

- Ans
- 1. 80
 - 2. 82
 - 3. 84
 - 4. 83

Question ID : 26433067879

Status : Answered

Chosen Option : 4

Q.9 Select the set in which the numbers are related in the same way as are the numbers of the following set.

(NOTE : Operations should be performed on the whole numbers, without breaking down the numbers into its constituent digits. E.g. 13 – Operations on 13 such as adding /subtracting/multiplying etc. to 13 can be performed. Breaking down 13 into 1 and 3 and then performing mathematical operations on 1 and 3 is NOT allowed)
(20, 30, 450)
(35, 25, 540)

- Ans
- 1. (9, 17, 264)
 - 2. (20, 9, 297)
 - 3. (7, 18, 225)
 - 4. (8, 15, 227)

Question ID : 26433076487

Status : Answered

Chosen Option : 3

Q.10 In a certain code language, FORCE is coded as 47, and GREEN is coded as 49. How will FLAVOUR be coded in that language?

- Ans
- 1. 98
 - 2. 92
 - 3. 95
 - 4. 100

Question ID : 26433067995

Status : Answered

Chosen Option : 3

Q.11 Six people are sitting around a circular table facing the centre. Kaya is the immediate neighbour of Jaya and Tara. Sonal is the immediate neighbour of Priya and Swati. Sonal is sitting immediate right of Priya, Tara and Swati are not sitting immediately next to each other. Who is sitting to the immediate left of Priya?

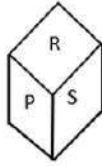
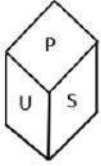
- Ans
- 1. Tara
 - 2. Kaya
 - 3. Jaya
 - 4. Swati

Question ID : 26433069665

Status : Answered

Chosen Option : 1

Q.12 Two different positions of the same dice are shown having alphabets P to U. Find the alphabet on the face opposite the face showing 'U'.



- Ans
- 1. Q
 - 2. S
 - 3. T
 - 4. R

Question ID : 26433085526

Status : Answered

Chosen Option : 4

Q.13 Six colleagues A, B, C, D, E and F are having lunch together on a circular table at equal distance, facing the centre of the circle. D is the immediate neighbour of E and B while C is the immediate neighbour of A and F. If A is to the immediate left of E, then who is on the immediate left of C?

- Ans
- 1. D
 - 2. F
 - 3. B
 - 4. E

Question ID : 26433079052

Status : Answered

Chosen Option : 2

Q.14 Which of the following terms will replace the question mark (?) in the given series?
EZG, GXH, KTL, QNR, ?

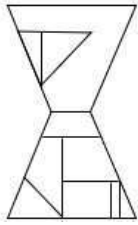
- Ans
- 1. WEY
 - 2. YGY
 - 3. YFZ
 - 4. XFZ

Question ID : 26433068304

Status : Answered

Chosen Option : 2

Q.15 Select the option figure which is embedded in the given figure. (Rotation is NOT allowed)

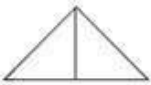


Ans

1.



2.



3.



4.



Question ID : 26433069337

Status : Answered

Chosen Option : 4

Q.16 Which two signs should be interchanged to make the below equation mathematically correct?

$$42 + 16 \div 7 - 36 \times 16 = 76$$

Ans 1. + and -

2. + and ×

3. × and +

4. + and +

Question ID : 264330114197

Status : Answered

Chosen Option : 3

Q.17 Which letter-cluster will replace the question mark (?) to complete the given series?
ZACF, WXZC, ?, QRTW, NOQT

Ans 1. XUVZ

2. XUYZ

3. VWZC

4. TUWZ

Question ID : 26433067712

Status : Answered

Chosen Option : 4

Q.18 In this question, three statements are given, followed by two conclusions numbered I and II. Assuming the statements to be true, even if they seem to be at variance with commonly known facts, decide which of the conclusions logically follows/follow from the statements.

Statements:

All bottles are bags.

Some bags are pencils.

Some pencils are sharpeners.

Conclusions:

I. Some sharpeners are bottles.

II. Some bottles are pencils.

- Ans
- 1. Both conclusions I and II follow.
 - 2. Neither conclusion I nor II follows.
 - 3. Only conclusion II follows.
 - 4. Only conclusion I follows.

Question ID : 26433070393

Status : Answered

Chosen Option : 2

Q.19 Which option represents the correct order of the given words as they would appear in the English dictionary?

1 manner

2 manage

3 masculine

4 magic

5 matter

- Ans
- 1. 1,2,4,3,5
 - 2. 1,4,3,2,5
 - 3. 4,2,1,3,5
 - 4. 4,1,2,5,3

Question ID : 26433069285

Status : Answered

Chosen Option : 3

Q.20 'A + B' means 'B is the father of A'
'A # B' means 'B is the sister of A'
'A @ B' means 'B is the brother of A'
If A @ B # C + D + E, then how is E related to A?

- Ans
- 1. Son
 - 2. Father
 - 3. Father's father
 - 4. Father's brother

Question ID : 26433068535

Status : Answered

Chosen Option : 3

Q.1 Jagoi is a major style of which of the following forms of Indian classical dance?

- Ans
- 1. Sattriya
 - 2. Kathak
 - 3. Manipuri
 - 4. Odissi

Question ID : 26433070839
Status : Answered
Chosen Option : 1

Q.2 Identify a way to reduce the pollution caused due to burning of fossil fuels

- Ans
- 1. By lowering the temperature of burning
 - 2. By increasing the efficiency of the combustion process
 - 3. By increasing the number of carbon molecules
 - 4. By decreasing the latent heat

Question ID : 26433096234
Status : Answered
Chosen Option : 4

Q.3 Tapan Kumar Pattanayak won the Sangeet natak Akademi Award in which dance form?

- Ans
- 1. Kuchipudi
 - 2. Chhau
 - 3. Sattriya
 - 4. Odissi

Question ID : 264330115827
Status : Not Answered
Chosen Option : --

Q.4 Who was the first Indian to conquer the English Channel from Dover to Calais in 1958, and also the only man to swim the oceans of the five continents in one calendar year in 1966?

- Ans
- 1. Mihir Sen
 - 2. Ramanathan Krishnan
 - 3. Ajit Patel
 - 4. Khashaba Jadhav

Question ID : 26433089924
Status : Answered
Chosen Option : 2

Q.5 Rs. 2000 banknote of Mahatma Gandhi (New) Series has _____ motif on its back.

- Ans
- 1. Rani Ki Vav
 - 2. Mangalyaan
 - 3. Sun Temple, Konark
 - 4. Red Fort

Question ID : 264330115382
Status : Answered
Chosen Option : 2

Q.6 Who commissioned India's first indigenous aircraft carrier INS Vikrant in Kochi in September 2022?

- Ans
- 1. Rajnath Singh
 - 2. Amit Shah
 - 3. Jyotiraditya Scindia
 - 4. Narendra Modi

Question ID : 264330114916
Status : Answered
Chosen Option : 1

Q.7 Which latitude line passes through the middle of India influencing the climate of the country?

- Ans
- 1. Equator
 - 2. Tropic of Capricorn
 - 3. Tropic of Cancer
 - 4. Antarctic Circle

Question ID : 264330115984
Status : Answered
Chosen Option : 2

Q.8 During the reign of which of the following Mauryan kings, the Kalinga War was fought?

- Ans
- 1. Bindusara
 - 2. Ashoka
 - 3. Chandragupta
 - 4. Dasaratha

Question ID : 264330115454
Status : Answered
Chosen Option : 2

Q.9 When was the first complete Census conducted in India?

- Ans 1. 1882
 2. 1880
 3. 1887
 4. 1881

Question ID : 264330116036
Status : Answered
Chosen Option : 1

Q.10 Who has been appointed as the "State Brand Ambassador" of Uttarakhand government in August 2022?

- Ans 1. Dinesh Karthik
 2. Rishabh Pant
 3. Akshay Kumar
 4. Rohit Shetty

Question ID : 264330114985
Status : Answered
Chosen Option : 2

Q.11 The President of India is elected by _____.

- Ans 1. Only the Members of State Legislative Assemblies
 2. Only the elected members of both Houses of Parliament
 3. Only the members' of Council of States
 4. the Elected Members of both Houses of Parliament and State Legislative Assemblies.

Question ID : 264330115663
Status : Answered
Chosen Option : 4

Q.12 Which of the following is the thanksgiving festival of Maharashtra, where bulls are honoured as they are considered indispensable to farming?

- Ans 1. Makar Sankranti
 2. Pola Festival
 3. Gudi Padwa
 4. Kala Ghoda Arts Festival

Question ID : 264330106205
Status : Answered
Chosen Option : 3

Q.13 Original text of the Indian Constitution contained _____ articles.

- Ans 1. 376
 2. 395
 3. 386
 4. 440

Question ID : 264330115691
Status : Answered
Chosen Option : 3

Q.14 Which of the following was one of the main objectives of the Seventh Five-Year Plan?

- Ans 1. Increase in Infrastructure
 2. Increase in production of Food Grains
 3. Elimination of poverty
 4. Improve the standard of living

Question ID : 264330116126
Status : Answered
Chosen Option : 1

Q.15 Moss and Marchantia comes under which of the following?

- Ans 1. Algae
 2. Gymnosperms
 3. Pteridophytes
 4. Bryophytes

Question ID : 264330115210
Status : Not Answered
Chosen Option : --

Q.16 Revenue receipts are _____ as they do not lead to a claim on the government.

- Ans 1. capital receipts
 2. reinforceable
 3. redeemable
 4. non-redeemable

Question ID : 264330115282
Status : Answered
Chosen Option : 4

Q.17 During emergency which fundamental rights cannot be suspended?

- Ans 1. Article 14-15
 2. Article 20-21
 3. Article 18-19
 4. Article 16-17

Question ID : 264330115617
Status : Answered
Chosen Option : 1

Q.18 In which among the following states, Arabica coffee grown in India?

- Ans
- 1. Assam
 - 2. Uttarakhand
 - 3. West Bengal
 - 4. Karnataka

Question ID : 264330115529
Status : Answered
Chosen Option : 3

Q.19 _____ falls under the Ministry of textiles.

- Ans
- 1. Samarth Scheme
 - 2. Ambekar Social Innovation & Incubation Mission
 - 3. MPLADS (Members of Parliament Local Area Development Scheme)
 - 4. Merchandise Export From India Scheme

Question ID : 264330116173
Status : Answered
Chosen Option : 1

Q.20 Which State won the Vijay Hazare Trophy in 2017-18?

- Ans
- 1. Uttar Pradesh
 - 2. Kerala
 - 3. Maharashtra
 - 4. Karnataka

Question ID : 264330116255
Status : Not Answered
Chosen Option : --

Section : Part-C-Elementary Mathematics

Q.1 A shopkeeper allows a discount of 40% on his articles and still makes a profit of 20%. How much cost price does shopkeeper pay for an article whose marked price is ₹ 2,400?

- Ans
- 1. ₹1,728
 - 2. ₹1,200
 - 3. ₹1,440
 - 4. ₹1,132

Question ID : 26433062686
Status : Answered
Chosen Option : 2

Q.2 A man covers a certain distance by scooter at 64 km/h and he returns to the starting place riding a bicycle at 16 km/h. Find the average speed for the whole journey.

- Ans 1. 25.6 km/h
 2. 26.5 km/h
 3. 40 km/h
 4. 51.2 km/h

Question ID : 26433076200
Status : Answered
Chosen Option : 1

Q.3 5 women can complete a work in 8 days, while 8 children take 10 days to complete the same work. How many days will 2 women and 4 children take to complete the work?

- Ans 1. 10
 2. 12
 3. 40
 4. 8

Question ID : 26433076384
Status : Answered
Chosen Option : 1

Q.4 The diameter of a right circular cylinder is 14 cm and height is 2 cm. The sum of its curved surface area and the total surface area is: (use $\pi = \frac{22}{7}$)

- Ans 1. 484 cm²
 2. 308 cm²
 3. 176 cm²
 4. 968 cm²

Question ID : 26433087416
Status : Answered
Chosen Option : 1

Q.5 What is the fourth proportional to $\sqrt{6}$, $\sqrt{8}$ and $\sqrt{21}$?

- Ans 1. $3\sqrt{7}$
 2. $2\sqrt{7}$
 3. $8\sqrt{7}$
 4. $5\sqrt{7}$

Question ID : 26433079869
Status : Answered
Chosen Option : 2

Q.6 A can paint a painting in 12 days. B can paint the same in 8 days. C can paint the same in 10 days. Find the (approximate) number of days in which the painting can be painted by A if he is accompanied by both B and C together on alternate days and A starts painting on the first day alone.

- Ans
- 1. 4.4 days
 - 2. 5.4 days
 - 3. 7.2 days
 - 4. 8.5 days

Question ID : 264330116857
Status : Answered
Chosen Option : 2

Q.7 The population of bears in a city has been growing at 3% every year. If the present population of bears in the city is 21,218, what was the population of bears two years ago?

- Ans
- 1. 18000
 - 2. 19000
 - 3. 18500
 - 4. 20000

Question ID : 26433075412
Status : Answered
Chosen Option : 4

Q.8 The income of a person is ₹95,000 and his expenditure is ₹75,000. If his income is increased by 18% and the expenditure by 12%, then what will be the percentage increase in his saving?

- Ans
- 1. 40.6%
 - 2. 40.8%
 - 3. 40.4%
 - 4. 40.5%

Question ID : 26433080161
Status : Answered
Chosen Option : 4

Q.9 Mohan is selling a table at Rs.2,832. If his profit is 18%, then what is the cost price of the table?

- Ans
- 1. Rs.2,480
 - 2. Rs.2,500
 - 3. Rs.2,440
 - 4. Rs.2,400

Question ID : 26433075652
Status : Answered
Chosen Option : 4

Q.10 In how much time (in years) would ₹80,000 amount to ₹1,17,128 at 10% per annum rate of interest, compounded yearly?

- Ans 1. 4 years
 2. 2 years
 3. 2.5 years
 4. 3.5 years

Question ID : 26433076229
Status : Answered
Chosen Option : 1

Q.11 5 bells start commencing together at 9 AM. They ring at the intervals of 12 seconds, 18 seconds, 24 seconds, 36 seconds and 45 seconds. At what time do the bells ring together again?

- Ans 1. 9:10 AM
 2. 9:06 AM
 3. 9:08 AM
 4. 9:05 AM

Question ID : 264330116633
Status : Answered
Chosen Option : 2

Q.12 A spends 45% of his salary on food and donates 5 % of his salary on old age homes. If he spends Rs.28,500 on food and old age homes, then what will be the salary of A?

- Ans 1. Rs. 52,000
 2. Rs. 57,000
 3. Rs. 50,000
 4. Rs. 55,000

Question ID : 26433081016
Status : Answered
Chosen Option : 2

Q.13 A cone of radius 9 cm and height 15 cm is melted and made into a cylinder of height 45 cm. The diameter of the cylinder is:

- Ans 1. 3 cm
 2. 5 cm
 3. 10 cm
 4. 6 cm

Question ID : 26433075332
Status : Answered
Chosen Option : 4

Q.14 A person rides bicycle on four different ways to reach the destination. Determine the average speed during this whole journey.

| Way | Speed (km/h) | Distance (km) |
|-----|--------------|---------------|
| A | 5 | 20 |
| B | 3 | 15 |
| C | 2 | 10 |
| D | 4 | 24 |

Ans

✗ 1. $4.5 \frac{\text{km}}{\text{hr}}$

✓ 2. $3.45 \frac{\text{km}}{\text{hr}}$

✗ 3. $5.5 \frac{\text{km}}{\text{hr}}$

✗ 4. $2.45 \frac{\text{km}}{\text{hr}}$

Question ID : 26433076001

Status : Answered

Chosen Option : 2

Q.15 Divya bought a car for ₹ 3,50,000 and sold it for ₹ 4,35,000. What is her percentage profit (correct up to one decimal place)?

Ans

✗ 1. 23.3%

✓ 2. 24.3%

✗ 3. 21.5%

✗ 4. 20.7%

Question ID : 26433075543

Status : Answered

Chosen Option : 2

Q.16

If $(5x - 2y) : (x - 2y) = 9 : 17$, then find the value of $\frac{9x}{13y}$.

Ans

1. $\frac{72}{421}$
2. $\frac{151}{1731}$
3. $\frac{36}{247}$
4. $\frac{144}{1001}$

Question ID : 26433080030

Status : Answered

Chosen Option : 3

Q.17 A car covered 240 km in 5 h. If it travels with half of its usual speed, then how much more time will be taken to cover the same distance?

- Ans 1. 3 h
2. 5 h
3. 10 h
4. 4 h

Question ID : 26433076306

Status : Answered

Chosen Option : 2

Q.18 X bought 40 pencils for a total of Rs 180 and bought 2 dozens of pens for Rs 180. Find the difference between the price of one pen and one pencil.

- Ans 1. Rs 3.5
2. Rs 3
3. Rs 2
4. Rs 2.5

Question ID : 264330116689

Status : Answered

Chosen Option : 2

Q.19 How many prime numbers are there between 40 and 50?

- Ans 1. 4
2. 5
3. 3
4. 2

Question ID : 26433080282

Status : Answered

Chosen Option : 3

Q.20 A dealer allowed a discount of 20 percent on marked price of Rs. 72000 on an article and incurred a loss of 10 percent. What discount should he allow on the marked price, so that he gains Rs. 440 on the article?

- Ans** 1. 10.5 percent
 2. 8.5 percent
 3. 9.5 percent
 4. 11.5 percent

Question ID : 264330116742
Status : Answered
Chosen Option : 1

Section : Part-D-English

Q.1 Identify the correctly spelt sentence.

- Ans** 1. The events arranged or organised in order of time are known as chronoligal order.
 2. The events arranged or organised in order of time are known as chronological order.
 3. The events arranged or organised in order of time are known as chronologikal order.
 4. The events arranged or organised in order of time are known as chronoloigal order.

Question ID : 26433072826
Status : Answered
Chosen Option : 2

Q.2 Select the most appropriate ANTONYM of the given word.

Timid

- Ans** 1. Diffident
 2. Shy
 3. Bold
 4. Fearful

Question ID : 26433073571
Status : Answered
Chosen Option : 3

Q.3 Select the most appropriate synonym of the given word.

Blast

- Ans** 1. Blow up
 2. Recall
 3. Plead
 4. Share

Question ID : 26433089107
Status : Answered
Chosen Option : 1

Q.4 Select the most appropriate option that can substitute the underlined segment in the given sentence.

I regarded my brother on passing his graduation examination.

- Ans 1. congratulated
 2. disparaged
 3. flattered
 4. kowtowed

Question ID : 26433088163
Status : Answered
Chosen Option : 1

Q.5 Select the most appropriate ANTONYM of the given word.

Liability

- Ans 1. Resource
 2. Responsibility
 3. Asset
 4. Strike

Question ID : 26433072269
Status : Answered
Chosen Option : 4

Q.6 Select the most appropriate homophone to fill in the blank.

In many road accidents people break their bones mainly because their vehicle _____ fails.

- Ans 1. brake
 2. broke
 3. brow
 4. bleak

Question ID : 26433088794
Status : Answered
Chosen Option : 1

Q.7 Select the correct word for the blanks in the given sentence.

Sivakashi is famous for its _____ box industry, and I am unable to find a _____ for my purple dress.

- Ans 1. sweat
 2. match
 3. chatter
 4. bread

Question ID : 26433060538
Status : Answered
Chosen Option : 2

Q.8 Select the most appropriate option to fill in the blank.

Truthfully speaking, the victories of peace and harmony have a more _____ impact on human civilisation than the so-called victories of war.

- Ans
- 1. Superior
 - 2. Transient
 - 3. Lasting
 - 4. Greater

Question ID : 26433074420
Status : Answered
Chosen Option : 4

Q.9 Select the most appropriate option to substitute the underlined segment in the given sentence.

Purchasing furniture at a low cost could not involve abandoning design or quality.

- Ans
- 1. should not entail sacrificing
 - 2. did not provoke compromising
 - 3. have not done regretting
 - 4. cannot force forgetting

Question ID : 26433092914
Status : Answered
Chosen Option : 1

Q.10 Select the most appropriate synonym of the given word.

Colloquial

- Ans
- 1. Lexical
 - 2. Conversational
 - 3. Prosodic
 - 4. Linguistic

Question ID : 26433073635
Status : Answered
Chosen Option : 1

Q.11 Select the option that expresses the given sentence in future tense form.

There are multiple facilities available for reaching the island.

- Ans
- 1. There will be multiple facilities available for reaching the island.
 - 2. There have been multiple facilities available for reaching the island.
 - 3. There had been multiple facilities available for reaching the island.
 - 4. There were multiple facilities available for reaching the island.

Question ID : 26433089292
Status : Answered
Chosen Option : 1

Q.12 Select the INCORRECTLY spelt word.

- Ans 1. Maladjusted
 2. Stakeholder
 3. Permenent
 4. Longitude

Question ID : 26433073513
Status : Answered
Chosen Option : 3

Q.13 Select the most appropriate ANTONYM of the given word.

Rancid

- Ans 1. Rotten
 2. Urgent
 3. Fresh
 4. Rough

Question ID : 26433071977
Status : Answered
Chosen Option : 3

Q.14 Select the most appropriate meaning of the given idiom.

At your beck and call

- Ans 1. To have absolute control over someone
 2. To call someone respectfully
 3. To have no control over someone
 4. To call someone and then deny

Question ID : 26433072224
Status : Answered
Chosen Option : 1

Q.15 Select the most appropriate meaning of the given idiom.

A night owl

- Ans 1. Someone who has good eyesight
 2. Someone who works very hard
 3. Someone who never works
 4. A person who prefers to be awake late at night

Question ID : 26433072675
Status : Answered
Chosen Option : 4

Comprehension:

In the following passage, some words have been deleted. Read the passage carefully and select the most appropriate option to fill in each blank.

The companies in the present era (1) _____ priority, during recruitment, to the candidates who have Emotional Intelligence. EI is the ability to understand, analyse and control emotions. Possessing very high EI creates a (2) _____ impact on a person's life. People who have EI always maintain emotional stability even in difficult situations. They can be nice even in socially awkward situations. As they are very good at controlling emotions, they make others feel (3) _____. It is proven that it will make leaders more effective as they understand the feelings of teammates. It allows one (4) _____ impactfully with others. Stress and conflict can be handled so easily. As it allows great empathy towards others, they can be very good at interpersonal relationship. These people strengthen the relationship (5) _____ the people with their interaction and coordination both in personal and professional life. Companies are well aware of the benefits with the employees who have EI.

SubQuestion No : 16**Q.16 Select the most appropriate option to fill in blank number 1.**

- Ans 1. has been giving
 2. have been given
 3. are giving
 4. is giving

Question ID : 26433072166

Status : Answered

Chosen Option : 3

Comprehension:

In the following passage, some words have been deleted. Read the passage carefully and select the most appropriate option to fill in each blank.

The companies in the present era (1) _____ priority, during recruitment, to the candidates who have Emotional Intelligence. EI is the ability to understand, analyse and control emotions. Possessing very high EI creates a (2) _____ impact on a person's life. People who have EI always maintain emotional stability even in difficult situations. They can be nice even in socially awkward situations. As they are very good at controlling emotions, they make others feel (3) _____. It is proven that it will make leaders more effective as they understand the feelings of teammates. It allows one (4) _____ impactfully with others. Stress and conflict can be handled so easily. As it allows great empathy towards others, they can be very good at interpersonal relationship. These people strengthen the relationship (5) _____ the people with their interaction and coordination both in personal and professional life. Companies are well aware of the benefits with the employees who have EI.

SubQuestion No : 17**Q.17 Select the most appropriate option to fill in blank number 2.**

- Ans 1. creative
 2. positive
 3. colonial
 4. memorable

Question ID : 26433072167

Status : Answered

Chosen Option : 2

Comprehension:

In the following passage, some words have been deleted. Read the passage carefully and select the most appropriate option to fill in each blank.

The companies in the present era (1) _____ priority, during recruitment, to the candidates who have Emotional Intelligence. EI is the ability to understand, analyse and control emotions. Possessing very high EI creates a (2) _____ impact on a person's life. People who have EI always maintain emotional stability even in difficult situations. They can be nice even in socially awkward situations. As they are very good at controlling emotions, they make others feel (3) _____. It is proven that it will make leaders more effective as they understand the feelings of teammates. It allows one (4) _____ impactfully with others. Stress and conflict can be handled so easily. As it allows great empathy towards others, they can be very good at interpersonal relationship. These people strengthen the relationship (5) _____ the people with their interaction and coordination both in personal and professional life. Companies are well aware of the benefits with the employees who have EI.

SubQuestion No : 18

Q.18 Select the most appropriate option to fill in blank number 3.

- Ans 1. comfortable
 2. tolerable
 3. favourable
 4. manageable

Question ID : 26433072168
Status : Answered
Chosen Option : 1

Comprehension:

In the following passage, some words have been deleted. Read the passage carefully and select the most appropriate option to fill in each blank.

The companies in the present era (1) _____ priority, during recruitment, to the candidates who have Emotional Intelligence. EI is the ability to understand, analyse and control emotions. Possessing very high EI creates a (2) _____ impact on a person's life. People who have EI always maintain emotional stability even in difficult situations. They can be nice even in socially awkward situations. As they are very good at controlling emotions, they make others feel (3) _____. It is proven that it will make leaders more effective as they understand the feelings of teammates. It allows one (4) _____ impactfully with others. Stress and conflict can be handled so easily. As it allows great empathy towards others, they can be very good at interpersonal relationship. These people strengthen the relationship (5) _____ the people with their interaction and coordination both in personal and professional life. Companies are well aware of the benefits with the employees who have EI.

SubQuestion No : 19

Q.19 Select the most appropriate option to fill in blank number 4.

- Ans 1. communicate
 2. to communicating
 3. to be communicated
 4. to communicate

Question ID : 26433072169
Status : Answered
Chosen Option : 4

Comprehension:

In the following passage, some words have been deleted. Read the passage carefully and select the most appropriate option to fill in each blank.

The companies in the present era (1) _____ priority, during recruitment, to the candidates who have Emotional Intelligence. EI is the ability to understand, analyse and control emotions. Possessing very high EI creates a (2) _____ impact on a person's life. People who have EI always maintain emotional stability even in difficult situations. They can be nice even in socially awkward situations. As they are very good at controlling emotions, they make others feel (3) _____. It is proven that it will make leaders more effective as they understand the feelings of teammates. It allows one (4) _____ impactfully with others. Stress and conflict can be handled so easily. As it allows great empathy towards others, they can be very good at interpersonal relationship. These people strengthen the relationship (5) _____ the people with their interaction and coordination both in personal and professional life. Companies are well aware of the benefits with the employees who have EI.

SubQuestion No : 20

Q.20 Select the most appropriate option to fill in blank number 5.

- Ans 1. in reference with
 2. between
 3. along with
 4. among

Question ID : 26433072170
Status : Answered
Chosen Option : 4

Section : Part-D-Hindi

Q.1 इस वाक्य के रिक्त स्थान पर रेखांकित शब्द का उपयुक्त विलोम शब्द कौन-सा होगा?

भारत में कहीं अतिवृष्टि से बाढ़ आती है तो कहीं _____ से सूखा पड़ता है।

- Ans 1. लघुवृष्टि
 2. अनावृष्टि
 3. वृष्टि
 4. सुवरिष्टि

Question ID : 26433066909
Status : Not Answered
Chosen Option : --

Q.2 'करण खाने बीच मिठाई लाया'

उपरोक्त वाक्य में कारक सम्बन्धी त्रुटि पहचानकर निम्नलिखित में से शुद्ध वाक्य चुनिए।

- Ans 1. करण खाने बाद मिठाई लाया।
 2. करण खाने की मिठाई लाया।
 3. करण खाने के लिए मिठाई लाया।
 4. करण खाने साथ मिठाई लाया।

Question ID : 26433066967
Status : Not Answered
Chosen Option : --

Q.3 'सुनैना खाना खा रही है'
उपरोक्त वाक्य का भाववाच्य में रूपांतरण होगा-

- Ans 1. सुनैना खाना खा रही थी।
 2. सुनैना से खाना नहीं खाया जाता।
 3. सुनैना खाना खा रही होगी।
 4. सुनैना खाना नहीं खा रही है।

Question ID : 26433066980
Status : Not Answered
Chosen Option : --

Q.4 दिए गए शब्दों में से उचित शब्द से वाक्य पूर्ण करें --
वैद्य जी _____ देखकर इलाज करते हैं।

- Ans 1. नारी
 2. नीड़
 3. नीर
 4. नाड़ी

Question ID : 26433062909
Status : Not Answered
Chosen Option : --

Q.5 'टिप्पस भिड़ाना' मुहावरे का अर्थ होगा-

- Ans 1. सिफारिश करवाना
 2. अक्ल लगाना
 3. लोगों को आपस में लड़वाना
 4. नयी योजना बनाना

Question ID : 26433069947
Status : Not Answered
Chosen Option : --

Q.6 निम्नलिखित वाक्य के किस खंड में अशुद्धि है?
गौतम बुद्ध ने पाली भाषा में उपदेश दिया

- Ans 1. भाषा
 2. उपदेश
 3. दिया
 4. पाली

Question ID : 26433066753
Status : Not Answered
Chosen Option : --

Q.7 वाक्य में रेखांकित अंश के लिए उचित मुहावरा दिए गए विकल्पों में से चुनिए-
तुम किस काम के हो!

- Ans 1. कोढ़ में खाज
 2. किस मर्ज की दवा
 3. कोल्हू का बैल
 4. कूप मंडूक

Question ID : 26433062304
Status : Not Answered
Chosen Option : --

Q.8 'सरस्वती' के पर्यायवाची शब्द से वाक्य की पूर्ति कीजिए।

प्रातःकाल _____ का स्तोत्र पढ़िए।

- Ans 1. धात्री
 2. कान्ता
 3. शारदा
 4. उमा

Question ID : 26433079242
Status : Not Answered
Chosen Option : --

Q.9 निम्नलिखित वाक्य के किस खंड में त्रुटि है?
जीवन और साहित्य का घोर संबंध है।

- Ans 1. संबंध
 2. घोर
 3. साहित्य
 4. जीवन

Question ID : 26433066756
Status : Not Answered
Chosen Option : --

Q.10 'वह व्यक्ति जो विद्यार्थियों को पढ़ाने का कार्य करता है' वाक्यांश के लिए सार्थक शब्द है-

- Ans 1. शिक्षार्थी
 2. शिक्षक
 3. छात्र
 4. विद्यार्थी

Question ID : 26433062230
Status : Not Answered
Chosen Option : --

Q.11 लकड़ियों का समूह।
रेखांकित पद 'समूह' के बदले उपयुक्त शब्द का प्रयोग कीजिए।

- Ans
- 1. रेवड़
 - 2. ढेर
 - 3. टुकड़ा
 - 4. गड्ढर

Question ID : 26433062691
Status : Not Answered
Chosen Option : --

Q.12 'शरीर का कोई भाग' वाक्यांश के लिए उचित शब्द बताइए -

- Ans
- 1. अवयव
 - 2. अभिन्न
 - 3. कृशांग
 - 4. दृष्टि

Question ID : 26433065908
Status : Not Answered
Chosen Option : --

Q.13 निम्न में से किस वाक्य में 'उत्कंठा' के सही पर्यायवाची शब्द का प्रयोग हुआ है?

- Ans
- 1. नव्या में अब कोई लालसा शेष नहीं थी।
 - 2. नेहा श्रेष्ठ गायिका है।
 - 3. रघु में उत्साह की कमी है।
 - 4. लता ने अपनी उदारता का परिचय दिया।

Question ID : 26433067015
Status : Not Answered
Chosen Option : --

Q.14 पेड़ बढ़ता गया।

इस वाक्य में प्रयुक्त संयुक्त क्रिया का नाम बताइए।

- Ans
- 1. नित्यताबोधक संयुक्त क्रिया
 - 2. अवकाशबोधक संयुक्त क्रिया
 - 3. अनुमतिबोधक संयुक्त क्रिया
 - 4. समाप्तिबोधक संयुक्त क्रिया

Question ID : 26433063048
Status : Not Answered
Chosen Option : --

Q.15 निम्नलिखित वाक्यांश के लिए उपयुक्त सार्थक शब्द है:
जो कहा न जा सके

- Ans 1. कहना
 2. कहानी
 3. अकथ्य
 4. कथन

Question ID : 26433065756
Status : Not Answered
Chosen Option : --

Comprehension:

निम्नलिखित गद्यांश में कुछ शब्दों को हटा दिया गया है। दिए गए विकल्पों की सहायता से रिक्त स्थानों की पूर्ति कीजिए। प्रत्येक संख्या के लिए सबसे उपयुक्त विकल्प का चयन करें।

मैत्री भाव सकारात्मक तथा 1. _____ वर्ग में गिना जाता है। मित्रता ऐसा उपहार है जो 2. _____ को प्राप्त होता है। सच्चा मित्र वही होता है जिसके कारण हमें कभी भी 3. _____ ना हो। जब भी हमारी ऐसी कोई आदत होती है जिससे दूसरे को परेशानी होती है तो ऐसी आदत 4. _____ में ही भलाई है। मनुष्य तो 5. _____ प्राणी है।

SubQuestion No : 16

Q.16 रिक्त स्थान 1 की पूर्ति के लिए सबसे उपयुक्त विकल्प का चयन कीजिए।

- Ans 1. नकारात्मक
 2. निम्न
 3. मध्यम
 4. उच्च

Question ID : 264330110993
Status : Not Answered
Chosen Option : --

Comprehension:

निम्नलिखित गद्यांश में कुछ शब्दों को हटा दिया गया है। दिए गए विकल्पों की सहायता से रिक्त स्थानों की पूर्ति कीजिए। प्रत्येक संख्या के लिए सबसे उपयुक्त विकल्प का चयन करें।

मैत्री भाव सकारात्मक तथा 1. _____ वर्ग में गिना जाता है। मित्रता ऐसा उपहार है जो 2. _____ को प्राप्त होता है। सच्चा मित्र वही होता है जिसके कारण हमें कभी भी 3. _____ ना हो। जब भी हमारी ऐसी कोई आदत होती है जिससे दूसरे को परेशानी होती है तो ऐसी आदत 4. _____ में ही भलाई है। मनुष्य तो 5. _____ प्राणी है।

SubQuestion No : 17

Q.17 रिक्त स्थान 2 की पूर्ति के लिए सबसे उपयुक्त विकल्प का चयन कीजिए।

- Ans 1. सबको
 2. अमीर
 3. भाग्यशाली
 4. गरीब

Question ID : 264330110994
Status : Not Answered
Chosen Option : --

Comprehension:

निम्नलिखित गद्यांश में कुछ शब्दों को हटा दिया गया है। दिए गए विकल्पों की सहायता से रिक्त स्थानों की पूर्ति कीजिए। प्रत्येक संख्या के लिए सबसे उपयुक्त विकल्प का चयन करें।

मैत्री भाव सकारात्मक तथा 1. _____ वर्ग में गिना जाता है। मित्रता ऐसा उपहार है जो 2. _____ को प्राप्त होता है। सच्चा मित्र वही होता है जिसके कारण हमें कभी भी 3. _____ ना हो। जब भी हमारी ऐसी कोई आदत होती है जिससे दूसरे को परेशानी होती है तो ऐसी आदत 4. _____ में ही भलाई है। मनुष्य तो 5. _____ प्राणी है।

SubQuestion No : 18

Q.18 रिक्त स्थान 3 की पूर्ति के लिए सबसे उपयुक्त विकल्प का चयन कीजिए।

- Ans 1. पश्चाताप
 2. उत्साह
 3. खुशी
 4. भलाई

Question ID : 264330110995

Status : Not Answered

Chosen Option : --

Comprehension:

निम्नलिखित गद्यांश में कुछ शब्दों को हटा दिया गया है। दिए गए विकल्पों की सहायता से रिक्त स्थानों की पूर्ति कीजिए। प्रत्येक संख्या के लिए सबसे उपयुक्त विकल्प का चयन करें।

मैत्री भाव सकारात्मक तथा 1. _____ वर्ग में गिना जाता है। मित्रता ऐसा उपहार है जो 2. _____ को प्राप्त होता है। सच्चा मित्र वही होता है जिसके कारण हमें कभी भी 3. _____ ना हो। जब भी हमारी ऐसी कोई आदत होती है जिससे दूसरे को परेशानी होती है तो ऐसी आदत 4. _____ में ही भलाई है। मनुष्य तो 5. _____ प्राणी है।

SubQuestion No : 19

Q.19 रिक्त स्थान 4 की पूर्ति के लिए सबसे उपयुक्त विकल्प का चयन कीजिए।

- Ans 1. छोड़ने
 2. गिनाने
 3. दिखाने
 4. अपनाने

Question ID : 264330110996

Status : Not Answered

Chosen Option : --

Comprehension:

निम्नलिखित गद्यांश में कुछ शब्दों को हटा दिया गया है। दिए गए विकल्पों की सहायता से रिक्त स्थानों की पूर्ति कीजिए। प्रत्येक संख्या के लिए सबसे उपयुक्त विकल्प का चयन करें।

मैत्री भाव सकारात्मक तथा 1. _____ वर्ग में गिना जाता है। मित्रता ऐसा उपहार है जो 2. _____ को प्राप्त होता है। सच्चा मित्र वही होता है जिसके कारण हमें कभी भी 3. _____ ना हो। जब भी हमारी ऐसी कोई आदत होती है जिससे दूसरे को परेशानी होती है तो ऐसी आदत 4. _____ में ही भलाई है। मनुष्य तो 5. _____ प्राणी है।

SubQuestion No : 20

Q.20 रिक्त स्थान 5 की पूर्ति के लिए सबसे उपयुक्त विकल्प का चयन कीजिए।

Ans ✓ 1. सामाजिक

✗ 2. दिखावा

✗ 3. परेशान

✗ 4. भयानक

Question ID : 264330110997

Status : Not Answered

Chosen Option : --

Bankers Adda
मेराउडो

Constable GD in CAPFs SSF Rifleman GD in Assam Rifles and Sepoy in NCB Examination 2022

| | |
|----------------|-------------------------------|
| Roll Number | |
| Candidate Name | |
| Venue Name | iON Digital Zone iDZ Kanti |
| Exam Date | 11/01/2023 |
| Exam Time | 9:00 AM - 10:00 AM |
| Subject | Constable GD Examination 2022 |

Section : **Part-A-General Intelligence and Reasoning**

Q.1 Six people U, V, W, X, Y, and Z are sitting in a circle facing opposite to the centre. U is sitting third to the right of Y. W is sitting to the immediate left of U. W is sitting third to the left of V. Z is not sitting next to U. Who is sitting between W and Y?

- Ans
- 1. Z
 - 2. X
 - 3. U
 - 4. V

Question ID : 264330114206
Status : Answered
Chosen Option : 1

Q.2 Which option represents the correct order of the given words as they would appear in the English dictionary?

- 1 kind
- 2 kite
- 3 knit
- 4 king
- 5 kindle

- Ans
- 1. 1,5,4,2,3
 - 2. 1,4,2,5,3
 - 3. 1,5,2,4,3
 - 4. 1,4,5,2,3

Question ID : 26433069300
Status : Answered
Chosen Option : 1

Q.3 Which letter-cluster will replace the question mark (?) to complete the given series?
XCMQ, YDNR, ?, AFPT, BGQU

- Ans
- 1. ZEOR
 - 2. ZEPS
 - 3. ZEUS
 - 4. ZEOS

Question ID : 26433067941
Status : Answered
Chosen Option : 4

Q.4 Three Statements are given followed by Three conclusions numbered I, II and III. Assuming the statements to be true, even if they seem to be at variance with commonly known facts, decide which of the conclusions logically follow(s) from the statements.

Statements:

All bags are rubber.

Some rubber are chairs.

All chairs are tables.

Conclusions:

I. Some rubber are bags.

II. Some chairs are rubber.

III. Some chairs are tables.

- Ans
- 1. Both conclusions I and III follow.
 - 2. Both conclusions I and II follow.
 - 3. All conclusions follow.
 - 4. Both conclusions II and III follow.

Question ID : 26433074639

Status : Answered

Chosen Option : 3

Q.5 Which of the mathematical signs should be interchanged in the below equation to make it mathematically correct?
 $144 - 12 + 18 \times 6 \div 24 = 96$

- Ans
- 1. - and +
 - 2. - and \times
 - 3. \times and +
 - 4. - and +

Question ID : 264330117489

Status : Answered

Chosen Option : 1

Q.6 'A + B' means 'B is the brother of A'
'A - B' means 'B is the sister of A'
'A % B' means 'B is the daughter of A'
'A & B' means 'B is the wife of A'
If A & B % C + D - E, then how is E related to A?

- Ans
- 1. Mother
 - 2. Wife
 - 3. Daughter
 - 4. Sister

Question ID : 26433068529

Status : Answered

Chosen Option : 3

Q.7 Seven friends are sitting around a circular table facing the centre. T is an immediate neighbour of K and U. S is sitting immediate right of K. W is an immediate neighbour of U and M. Who is sitting third to the left of K?

- Ans
- 1. W
 - 2. M
 - 3. U
 - 4. T

Question ID : 26433080433

Status : Answered

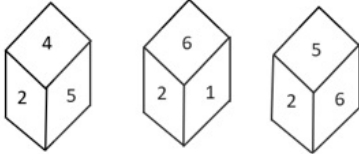
Chosen Option : 1

Q.8 Which number will replace the question mark (?) in the following series?
6, 24, 60, 120, ?

- Ans
- 1. 150
 - 2. 180
 - 3. 135
 - 4. 210

Question ID : 26433067838
Status : Answered
Chosen Option : 4

Q.9 Three different positions of the same dice are shown. Find the number on the face opposite the face showing '2'.

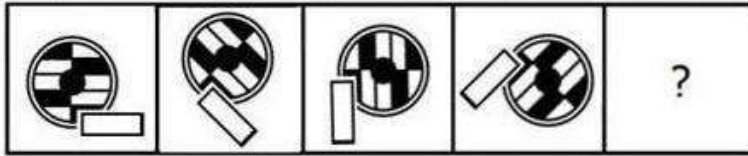


- Ans
- 1. 5
 - 2. 1
 - 3. 4
 - 4. 3

Question ID : 26433090067
Status : Answered
Chosen Option : 4

Bankers Adda
മലയാളം

Q.10 Select the figure that will come next in the following series.



Ans


✗ 1.



✗ 2.



✓ 3.



✗ 4.



Question ID : 26433078969

Status : Answered

Chosen Option : 3

Q.11 Select the option that is related to the third word in the same way as the second word is related to the first word. (The words must be considered as meaningful English words and must not be related to each other based on the number of letters/number of consonants/vowels in the word.)

Kite : Claw :: Horse : ?

Ans ✗ 1. Strong

✗ 2. Fast

✗ 3. Power

✓ 4. Hoof

Question ID : 26433069578

Status : Answered

Chosen Option : 4

Q.12 In a certain code language, 'GHOST' is written as 'JCRNW' and 'FIRED' is written as 'IDUZG'. How will 'RIFLE' be written in the same code language?

Ans ✓ 1. UDIGH

✗ 2. VEJFH

✗ 3. PDBGH

✗ 4. UIDBH

Question ID : 26433068145

Status : Answered

Chosen Option : 1

Q.13 Select the option that is related to the fifth letter-cluster in the same way as the second letter-cluster is related to the first letter-cluster and the fourth letter-cluster is related to the third letter-cluster.

PAE : HCQ :: ESH: KUF :: FDN : ?

- Ans
- 1. QFG
 - 2. KFG
 - 3. KGP
 - 4. PFH

Question ID : 26433057713
Status : Answered
Chosen Option : 1

Q.14 Which letter-cluster will replace the question mark (?) to complete the given series?
QJKE, SHIG, UFGI, ?, YBCM

- Ans
- 1. WCFM
 - 2. VEFL
 - 3. VDEN
 - 4. WDEK

Question ID : 26433068036
Status : Answered
Chosen Option : 4

Q.15 Select the correct mirror image of the given combination when the mirror is placed at 'PQ' as shown below.

G C P U W K | P
Q

- Ans
- 1. K W U P C E
 - 2. E C B U M K
 - 3. K M U P C E
 - 4. K W U M E C

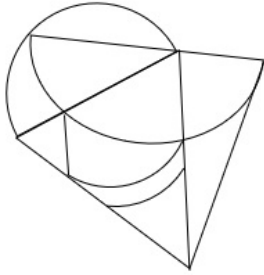
Question ID : 26433081696
Status : Answered
Chosen Option : 1

Q.16 In a certain code language, 'SLOWLY' is written as 'TMNXMZ' and 'FRIEND' is written as 'GSHDOE'. How will 'BORING' be written in that language?

- Ans
- 1. CPSNOH
 - 2. CNSHOH
 - 3. CNSJOH
 - 4. CNSHOF

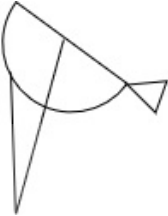
Question ID : 26433081760
Status : Answered
Chosen Option : 2

Q.17 Select the option figure which is embedded in the given figure. (Rotation is NOT allowed)

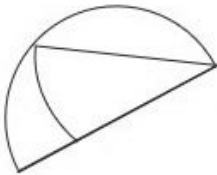


Ans

✗ 1.



✓ 2.



✗ 3.



✗ 4.



Question ID : 26433069331

Status : Answered

Chosen Option : 2

Q.18 Which of the following numbers will replace the question mark (?) in the given series?
62498, 61874, ?, 60644, 60038, 59438

Ans ✓ 1. 61256

✗ 2. 61656

✗ 3. 60544

✗ 4. 60446

Question ID : 26433076751

Status : Answered

Chosen Option : 1

Q.19 Select the set in which the numbers are related in the same way as are the numbers of the following sets.

(NOTE : Operations should be performed on the whole numbers, without breaking down the numbers into its constituent digits. E.g. 13 – Operations on 13 such as adding/subtracting/multiplying etc. to 13 can be performed. Breaking down 13 into 1 and 3 and then performing mathematical operations on 1 and 3 is not allowed)

(11, 78, 15)

(12, 90, 18)

- Ans
- 1. (12, 89, 17)
 - 2. (11, 91, 19)
 - 3. (13, 96, 19)
 - 4. (10, 54, 17)

Question ID : 26433076541
Status : Answered
Chosen Option : 1

Q.20 Select the correct combination of mathematical signs to sequentially replace the * signs and to balance the given equation.

$10 * 18 * 19 * 2 * 1 * 217$

- Ans
- 1. $\times, +, \times, +, =$
 - 2. $\times, +, \times, -, =$
 - 3. $\times, +, -, -, =$
 - 4. $+, +, \times, -, =$

Question ID : 26433082881
Status : Answered
Chosen Option : 2

Section : Part-B-General Knowledge and General awareness

Q.1 Government of India has approved a new Central Sector Scheme entitled "National Beekeeping & Honey Mission (NBHM)" which is associated to _____ revolution.

- Ans
- 1. savoury
 - 2. sweet
 - 3. honey
 - 4. golden

Question ID : 264330116185
Status : Answered
Chosen Option : 3

Q.2 _____ are a narrow belt of high altitude (above 12,000 m) westerly winds in the troposphere. Their speed varies from about 110 km/h in summer to about 184 km/h in winter.

- Ans
- 1. Jet Streams
 - 2. Whirlwind
 - 3. Derecho
 - 4. Hurricane

Question ID : 264330115978
Status : Not Answered
Chosen Option : --

Q.3 After independence, India launched its First five year plan in _____.

- Ans
- 1. 1952
 - 2. 1953
 - 3. 1950
 - 4. 1951

Question ID : 264330116134
Status : Answered
Chosen Option : 1

Q.4 Which Indian dancer among the following was the Youngest recipient of Padma Vibhushan in 2003?

- Ans
- 1. Uday Shankar
 - 2. Sonal Mansingh
 - 3. Pandit Birju Maharaj
 - 4. Kelucharan Mohapatra

Question ID : 264330115839
Status : Not Answered
Chosen Option : --

Q.5 What is the chemical formula of Calcium Carbonate?

- Ans
- 1. CaSO_4
 - 2. CaCO_3
 - 3. CaCO_2
 - 4. CaO

Question ID : 264330115166
Status : Answered
Chosen Option : 3

Q.6 Which vitamin is also known as Thiamin?

- Ans
- 1. Vitamin B2
 - 2. Vitamin B3
 - 3. Vitamin B1
 - 4. Vitamin B12

Question ID : 264330115222
Status : Answered
Chosen Option : 3

Q.7 Who took oath as the Governor of Meghalaya in October 2022?

- Ans
- 1. Banwarilal Purohit
 - 2. Tathagata Roy
 - 3. Satya Pal Malik
 - 4. B. D. Mishra

Question ID : 264330114979
Status : Answered
Chosen Option : 2

Q.8 Gandhi-Irwin pact was signed in which year?

- Ans 1. 1931
 2. 1935
 3. 1929
 4. 1933

Question ID : 264330115685
Status : Answered
Chosen Option : 1

Q.9 एक बजट दस्तावेज, जो किसी विशेष वित्तीय वर्ष के लिए सरकार की राजस्व प्राप्ति और राजस्व व्यय से संबंधित होता है, _____ कहलाता है।

- Ans 1. राजस्व बजट
 2. शून्य बजट
 3. दीर्घकालिक बजट
 4. पूंजीगत बजट

Question ID : 264330115276
Status : Not Attempted and Marked For Review
Chosen Option : --

Q.10 The last article of the Constitution of India has been given the number _____. (as on May 2022).

- Ans 1. 380
 2. 390
 3. 395
 4. 385

Question ID : 264330115611
Status : Answered
Chosen Option : 3

Q.11 As of November 2022, who is the Union Minister for Education in India?

- Ans 1. Dharmendra Pradhan
 2. Mansukh Mandaviya
 3. Anurag Thakur
 4. Kiren Rijju

Question ID : 264330114931
Status : Answered
Chosen Option : 1

Q.12 Which union territory has the highest sex ratio as per the 2011 Census?

- Ans 1. Lakshwadeep
 2. Puducherry
 3. Daman & Diu
 4. Chandigarh

Question ID : 264330116048
Status : Answered
Chosen Option : 1

Q.13 _____ is celebrated as Gujarati New Year in India.

Ans 1. Bestu Varas

2. Vishu

3. Losar

4. Losoong

Question ID : 264330115107
Status : Answered
Chosen Option : 2

Q.14 Primary raw material for sugar industry is _____.

Ans 1. chemical sweetners

2. sweet potato

3. apple

4. sugar cane

Question ID : 264330115395
Status : Answered
Chosen Option : 4

Q.15 Which among the following classical dance forms was introduced in the 16th century by Vaishnava saint Mahapurusha Sankaradeva?

Ans 1. Kuchipudi

2. Sattriya

3. Odissi

4. Manipuri

Question ID : 264330115062
Status : Not Answered
Chosen Option : --

Q.16 In which city is the Mohun Bagan Athletic club situated?

Ans 1. Jaipur

2. Kolkata

3. Lucknow

4. Bulandshahr

Question ID : 26433092324
Status : Not Answered
Chosen Option : --

Q.17 Who hosted the FIFA World Cup 2022?

Ans 1. Brazil

2. Qatar

3. Spain

4. Germany

Question ID : 264330115926
Status : Answered
Chosen Option : 2

Q.18 Removal of president of the country from the office is known as _____.

- Ans 1. Impeachment
 2. Termination of Services
 3. Resignation
 4. Voluntary Retirement from services

Question ID : 264330115666
Status : Answered
Chosen Option : 1

Q.19 Who among the following Greek rulers sent Megasthenes to the court of Chandragupta Maurya?

- Ans 1. Seleucus Nicator
 2. Amyntas II
 3. Amyntas III
 4. Phillip II

Question ID : 26433090574
Status : Answered
Chosen Option : 2

Q.20 विरासत का अधिकार (right of inheritance) किस ओर ले जाता है?

- Ans 1. अनुपजाऊ भूमि
 2. भूमि प्रदूषण
 3. भूमि का विभाजन
 4. भूमि की कमी

Question ID : 264330115523
Status : Answered
Chosen Option : 3

Section : Part-C-Elementary Mathematics

Q.1 Manish bought an air conditioner for Rs.46,875, its value is depreciating at the rate of 8% yearly. What will be the price of the air conditioner after 3 years?

- Ans 1. Rs.33,786
 2. Rs.32,245
 3. Rs.36,501
 4. Rs.35,602

Question ID : 26433080339
Status : Answered
Chosen Option : 4

Q.2 एक व्यक्ति पहले दिन पर 6 घंटे में 240 kms, दूसरे दिन पर 8 घंटे में 360 kms और तीसरे दिन पर 6 घंटे में 450 kms की दूरी पूरी करता है। 3 दिनों में उसके द्वारा पूरी की गई प्रति घंटे की औसत दूरी ज्ञात करें।

- Ans 1. 52.5 kms
 2. 50.5 kms
 3. 51 kms
 4. 48 kms

Question ID : 264330116683
Status : Answered
Chosen Option : 3

Q.3 An increase of 25 percent in the price of onions enables a woman to buy 5 kg less for Rs. 200. The increased price of onions per kg is:

- Ans
- 1. Rs. 5 per kg
 - 2. Rs. 8 per kg
 - 3. Rs. 10 per kg
 - 4. Rs. 15 per kg

Question ID : 264330116789
Status : Answered
Chosen Option : 3

Q.4 A person travels in a car for 600 km at an average speed of 50 km/h and 100 km at 100 km/h, and finally reaches his destination by travelling 50 km at a speed of 25 km/h. Determine the average speed during the whole journey.

- Ans
- 1. 50 km/h
 - 2. 75 km/h
 - 3. 58.33 km/h
 - 4. 25 km/h

Question ID : 26433071334
Status : Answered
Chosen Option : 1

Q.5 There are 90 female members and 60 male members in a club. If the average age of female members is 35 years, and the average age of male members is 45 years, then find the average age (in years) of the whole club?

- Ans
- 1. 39
 - 2. 36
 - 3. 40
 - 4. 47

Question ID : 26433082705
Status : Answered
Chosen Option : 1

Q.6 The difference between the two numbers is 15% of their sum. Find the ratio of the smaller number to the larger number.

- Ans
- 1. $\frac{13}{17}$
 - 2. $\frac{17}{13}$
 - 3. $\frac{17}{23}$
 - 4. $\frac{23}{17}$

Question ID : 26433080366
Status : Answered
Chosen Option : 3

Q.7 The radius of a cone is 5 cm and its slant height is 16 cm. It's total surface area (in cm^2) will be:

- Ans 1. 330
 2. 300
 3. 310
 4. 320

Question ID : 26433085772
Status : Answered
Chosen Option : 1

Q.8 Ruby bought 20 buttons for Rs.1. How many buttons she must sell for Rs.1 in order to get a profit of 25%?

- Ans 1. 15
 2. 17
 3. 14
 4. 16

Question ID : 26433080304
Status : Answered
Chosen Option : 4

Q.9 In a proportion, the product of the 1st and 4th term is 70 and that of 2nd and 3rd term is $3.5x$. The value of x is:

- Ans 1. 21
 2. 35
 3. 2
 4. 20

Question ID : 26433074931
Status : Answered
Chosen Option : 4

Q.10 A and B together can do a piece of the work in 50 hours, B and C together can do the same work in 75 hours and A and C together can do the same in 25 hours. Find the time in which A, B, and C together will complete the task.

- Ans 1. 400/11 hours
 2. 150/11 hours
 3. 131/11 hours
 4. 300/11 hours

Question ID : 264330116869
Status : Answered
Chosen Option : 4

Q.11 Find the difference between the greatest and the smallest 4-digit numbers exactly divisible by 36 and 48.

- Ans 1. 8928
 2. 8892
 3. 8298
 4. 8982

Question ID : 264330116648
Status : Answered
Chosen Option : 1

Q.12 If machine A and B can produce 1100 units in 9 h and 12 h respectively. In how many hours can machine A and B working together at these constant rates produce 1100 units?

Ans

1. $\frac{36}{7}$

2. $\frac{37}{7}$

3. $\frac{39}{7}$

4. $\frac{38}{7}$

Question ID : 26433074312

Status : Answered

Chosen Option : 1

Q.13 Robin travels one-fourth of the distance at 20 km/h, another one-fourth at 10 km/h, and the remaining distance at 80 km/h. Find Robin's average speed for the entire distance (correct to 2 decimal places)?

Ans

1. 25 km/h

2. 22.86 km/h

3. 20 km/h

4. 18.2 km/h

Question ID : 26433065292

Status : Answered

Chosen Option : 2

Q.14 The marked price of an item was Rs. 100000, but the shopkeeper offered a double discount of 20 percent and 10 percent. At what price did he finally sell the item?

Ans

1. Rs. 72000

2. Rs. 80000

3. Rs. 70000

4. Rs. 82000

Question ID : 264330116754

Status : Answered

Chosen Option : 1

Q.15 If $2^{305} + 303$ is divided by 9, then the remainder is:

Ans

1. 2

2. 4

3. 6

4. 1

Question ID : 26433079904

Status : Answered

Chosen Option : 1

Q.16 A chair is bought for ₹800 and sold for ₹1,100. Find the gain percentage.

- Ans
- 1. 40%
 - 2. 30%
 - 3. 37.5%
 - 4. 32.3%

Question ID : 26433074276
Status : Answered
Chosen Option : 3

Q.17 The curved surface area of right circular cylinder of height 14 cm is 110 cm^2 . What is the base diameter of the cylinder?

(Use $\pi = \frac{22}{7}$)

- Ans
- 1. 2.7 cm
 - 2. 2.4 cm
 - 3. 2.5 cm
 - 4. 2.6 cm

Question ID : 26433079779
Status : Answered
Chosen Option : 3

Q.18 The marked price on an item was Rs 2000/- but the shopkeeper offered a discount of 20 percent. How much did he finally sell the item for?

- Ans
- 1. Rs.1400
 - 2. Rs. 1200
 - 3. Rs. 1500
 - 4. Rs. 1600

Question ID : 264330116715
Status : Answered
Chosen Option : 4

Q.19 In how many years will ₹800 amount to ₹926.10 at 10% per annum, compounded half-yearly?

- Ans
- 1. 3
 - 2. 2
 - 3. 2.5
 - 4. 1.5

Question ID : 26433082403
Status : Answered
Chosen Option : 1

Q.20 If $a + b = 25$ and $a - b = 7$, then determine the mean proportion of a and b.

- Ans
- 1. 12
 - 2. 15
 - 3. 6
 - 4. 9

Question ID : 26433080114
Status : Answered
Chosen Option : 1

Q.1 Select the most appropriate ANTONYM of the given word.

Compassionate

- Ans 1. Likeable
 2. Merciful
 3. Cruel
 4. Fashionable

Question ID : 26433072211
Status : Answered
Chosen Option : 3

Q.2 Select the most appropriate synonym for the underlined word in the given sentence.

An oxygen cylinder is used to deliver oxygen through the patient's nasal orifice.

- Ans 1. origin
 2. ornate
 3. ordained
 4. opening

Question ID : 26433073754
Status : Answered
Chosen Option : 2

Q.3 Select the most appropriate ANTONYM of the given word.

Feeble

- Ans 1. Anxious
 2. Weak
 3. Sturdy
 4. Curious

Question ID : 26433073918
Status : Answered
Chosen Option : 3

Q.4 The sentence below is divided into four segments. Select the option that has an error of tense.

I has been / visiting my / family and relatives / during the winter vacation.

- Ans 1. during the winter vacation
 2. family and relatives
 3. visiting my
 4. I has been

Question ID : 26433092945
Status : Answered
Chosen Option : 4

Q.5 Select the most appropriate option that can substitute the underlined segment in the given sentence.

My uncle has an extremely large bungalow which has six bedrooms, five bathrooms and four living rooms.

- Ans**
- 1. enormous
 - 2. meagre
 - 3. great
 - 4. oversize

Question ID : 26433086460
Status : Answered
Chosen Option : 1

Q.6 Select the most appropriate meaning of the underlined idiom in the given sentence.

Siraj-ud Daula's defeat can be attributed to a snake in the grass.

- Ans**
- 1. A devoted attendant
 - 2. A disloyal soldier
 - 3. A deceitful person
 - 4. A coiled serpent

Question ID : 26433071996
Status : Answered
Chosen Option : 3

Q.7 Select the most appropriate option to fill in the blank.

He is an absolutely _____ man.

- Ans**
- 1. chased
 - 2. chaste
 - 3. chest
 - 4. crazed

Question ID : 26433090388
Status : Answered
Chosen Option : 2

Q.8 Select the most appropriate ANTONYM of the bracketed word to fill in the blank.

The medicine was so _____ (sweet) that a man had to choose sugar along with it.

- Ans**
- 1. rancid
 - 2. sour
 - 3. stale
 - 4. fetid

Question ID : 26433060720
Status : Answered
Chosen Option : 4

Q.9 Select the option in which all the words are spelt correctly.

- Ans**
- 1. The sage preached that we are accountable to God in this life.
 - 2. The sage preached that we are akountable to God in this life.
 - 3. The sage preached that we are accuuntable to God in this life.
 - 4. The sage preached that we are accountable to God in this life.

Question ID : 26433072287
Status : Answered
Chosen Option : 1

Q.10 Select the most appropriate option to fill in the blank.

He indeed is intelligent who _____ this and succeeds in making all work truly great.

- Ans
- 1. was noticed
 - 2. noticed
 - 3. notices
 - 4. noticing

Question ID : 26433088957
Status : Answered
Chosen Option : 3

Q.11 Select the INCORRECTLY spelt word.

- Ans
- 1. Skulptor
 - 2. Miraculous
 - 3. Vision
 - 4. Succeed

Question ID : 26433073733
Status : Answered
Chosen Option : 1

Q.12 Select the most appropriate synonym of the given word.

Ideal

- Ans
- 1. Excellent
 - 2. Hefty
 - 3. Bad
 - 4. Intact

Question ID : 26433088925
Status : Answered
Chosen Option : 4

Q.13 Select the most appropriate option that can substitute the underlined segment in the given sentence. If there is no need to substitute it, select 'No substitution'.
I visited the hospital to enquire about eyes surgery.

- Ans
- 1. enquire about eye surgery
 - 2. enquire for eyes surgery
 - 3. enquired about eye surgery
 - 4. No substitution

Question ID : 26433093072
Status : Answered
Chosen Option : 2

Q.14 Select the most appropriate meaning of the given idiom.

To call in question

- Ans
- 1. Show indifference
 - 2. Take a resolute stand
 - 3. Challenge
 - 4. Dislike the arrangement

Question ID : 26433073874
Status : Not Answered
Chosen Option : --

Q.15 Complete the sentence using correct pair of words from the options given.

My brother _____ apples during his fast.

- Ans** 1. ate; eight
 2. eight; eight
 3. ate; ate
 4. eight; ate

Question ID : 26433088870
Status : **Answered**
Chosen Option : 1

Comprehension:

In the following passage, some words have been deleted. Read the passage carefully and select the most appropriate option to fill in each blank.

One certain benefit of online communication either through email or even communicating through WhatsApp nowadays is that there is a (1) _____ dependence on paper. It is said that to make a ton of paper 17 trees have to be cut down. With the already existing demand for paper to meet (2) _____ needs, it would be horrendous to keep (3) _____ the demand for paper worldwide. Online communication is a boon as many documents are now sent by mail through PDF, Microsoft Word or the JPEG format. This means that there is certainly a (4) _____ in the use of paper due to online communication. Many people read online newspapers nowadays, which means there is a decline in the number of people buying offline versions of (5) _____.

SubQuestion No : 16

Q.16 Select the most appropriate option to fill in blank number 1.

- Ans** 1. restless
 2. crest
 3. less
 4. dress

Question ID : 26433088749
Status : **Answered**
Chosen Option : 3

Comprehension:

In the following passage, some words have been deleted. Read the passage carefully and select the most appropriate option to fill in each blank.

One certain benefit of online communication either through email or even communicating through WhatsApp nowadays is that there is a (1) _____ dependence on paper. It is said that to make a ton of paper 17 trees have to be cut down. With the already existing demand for paper to meet (2) _____ needs, it would be horrendous to keep (3) _____ the demand for paper worldwide. Online communication is a boon as many documents are now sent by mail through PDF, Microsoft Word or the JPEG format. This means that there is certainly a (4) _____ in the use of paper due to online communication. Many people read online newspapers nowadays, which means there is a decline in the number of people buying offline versions of (5) _____.

SubQuestion No : 17

Q.17 Select the most appropriate option to fill in blank number 2.

- Ans** 1. controversial
 2. various
 3. rare
 4. handle

Question ID : 26433088750
Status : **Answered**
Chosen Option : 2

Comprehension:

In the following passage, some words have been deleted. Read the passage carefully and select the most appropriate option to fill in each blank.

One certain benefit of online communication either through email or even communicating through WhatsApp nowadays is that there is a (1) _____ dependence on paper. It is said that to make a ton of paper 17 trees have to be cut down. With the already existing demand for paper to meet (2) _____ needs, it would be horrendous to keep (3) _____ the demand for paper worldwide. Online communication is a boon as many documents are now sent by mail through PDF, Microsoft Word or the JPEG format. This means that there is certainly a (4) _____ in the use of paper due to online communication. Many people read online newspapers nowadays, which means there is a decline in the number of people buying offline versions of (5) _____.

SubQuestion No : 18

Q.18 Select the most appropriate option to fill in blank number 3.

- Ans** 1. planning
 2. increasing
 3. contriving
 4. depriving

Question ID : 26433088751
Status : Answered
Chosen Option : 4

Comprehension:

In the following passage, some words have been deleted. Read the passage carefully and select the most appropriate option to fill in each blank.

One certain benefit of online communication either through email or even communicating through WhatsApp nowadays is that there is a (1) _____ dependence on paper. It is said that to make a ton of paper 17 trees have to be cut down. With the already existing demand for paper to meet (2) _____ needs, it would be horrendous to keep (3) _____ the demand for paper worldwide. Online communication is a boon as many documents are now sent by mail through PDF, Microsoft Word or the JPEG format. This means that there is certainly a (4) _____ in the use of paper due to online communication. Many people read online newspapers nowadays, which means there is a decline in the number of people buying offline versions of (5) _____.

SubQuestion No : 19

Q.19 Select the most appropriate option to fill in blank number 4.

- Ans** 1. traction
 2. reduction
 3. induction
 4. gumption

Question ID : 26433088752
Status : Answered
Chosen Option : 2

Comprehension:

In the following passage, some words have been deleted. Read the passage carefully and select the most appropriate option to fill in each blank.

One certain benefit of online communication either through email or even communicating through WhatsApp nowadays is that there is a (1) _____ dependence on paper. It is said that to make a ton of paper 17 trees have to be cut down. With the already existing demand for paper to meet (2) _____ needs, it would be horrendous to keep (3) _____ the demand for paper worldwide. Online communication is a boon as many documents are now sent by mail through PDF, Microsoft Word or the JPEG format. This means that there is certainly a (4) _____ in the use of paper due to online communication. Many people read online newspapers nowadays, which means there is a decline in the number of people buying offline versions of (5) _____.

SubQuestion No : 20

Q.20 Select the most appropriate option to fill in blank number 5.

- Ans**
- 1. fliers
 - 2. magazines
 - 3. newspapers
 - 4. canvas

Question ID : 26433088753
Status : Answered
Chosen Option : 3

Section : Part-D-Hindi

Q.1 विकल्पों में से निम्नलिखित वाक्यांश के लिए उपयुक्त शब्द चुनें।
जो इंद्रियों से परे हो

- Ans**
- 1. अतींद्रिय
 - 2. ज्ञानेंद्रिय
 - 3. जितेंद्रिय
 - 4. कर्मेन्द्रिय

Question ID : 26433069992
Status : Not Answered
Chosen Option : --

Q.2 निम्नलिखित वाक्य के रेखांकित अंश के स्थान पर विकल्पों में सबसे उपयुक्त शब्द का चयन कीजिए।
शोक है कि मैं आपके पत्र का उत्तर नहीं दे सका।

- Ans**
- 1. पता
 - 2. खुशी
 - 3. कष्ट
 - 4. खेद

Question ID : 26433066868
Status : Not Answered
Chosen Option : --

Q.3 'गंगा नदी भारत देश में हजारों लोगों की जीवनदायिनी है।' निम्नलिखित में से कौन सा शब्द 'गंगा' का पर्यायवाची शब्द नहीं है।

- Ans**
- 1. हंसजा
 - 2. देवपगा
 - 3. विष्णुपदी
 - 4. सुरसरिता

Question ID : 26433069737
Status : Not Answered
Chosen Option : --

Q.4 सिंह की सवारी सबके बस की बात नहीं है।
उस विकल्प का चयन कीजिए जो उपरोक्त वाक्य में रेखांकित शब्द का पर्यायवाची शब्द नहीं है।

- Ans
- 1. सिंह
 - 2. केसरी
 - 3. मणि
 - 4. वनराज

Question ID : 26433091341
Status : Not Answered
Chosen Option : --

Q.5 'सारे शरीर की हड्डियों का ढांचा' वाक्यांश के लिए सार्थक शब्द है-

- Ans
- 1. शरीर की हड्डियां
 - 2. कंकाल
 - 3. हड्डी का ढांचा
 - 4. मांसपेशी

Question ID : 26433062224
Status : Not Answered
Chosen Option : --

Q.6 'जो कहा गया है' वाक्यांश के लिए सार्थक शब्द है-

- Ans
- 1. अकथ्य
 - 2. कल्पित
 - 3. कथित
 - 4. वचनातीत

Question ID : 26433065864
Status : Not Answered
Chosen Option : --

Q.7 निम्नलिखित में से अशुद्ध वाक्य कौन-सा है?

- Ans
- 1. कोयल पेड़ में बैठी है।
 - 2. अंजना ने नई साड़ी खरीदी।
 - 3. वसुंधरा बहुत सुरीला गायी है।
 - 4. सुमेध आज छुट्टी पर है।

Question ID : 26433066989
Status : Not Answered
Chosen Option : --

Q.8 'आफिसर ने कर्मचारी को फ़ाइल लाने का आदेश दिया।' इस वाक्य में प्रयुक्त 'आदेश' शब्द का अर्थ क्या है?

- Ans
- 1. छोटों को बहकाना
 - 2. आज्ञा पालन के लिए कहना
 - 3. अपने कर्मचारियों की अवज्ञा करना
 - 4. अपने से छोटों को डांटना

Question ID : 26433080915
Status : Not Answered
Chosen Option : --

Q.9 निम्न विकल्पों में से अशुद्ध वाक्य छाँटिए।

- Ans 1. लड़की पुस्तक पढ़ती है।
 2. लड़के ने घर जाना है।
 3. मुझे उस पर दया आती है।
 4. शीला को नाटक अच्छा लगा।

Question ID : 26433063035
Status : Not Answered
Chosen Option : --

Q.10 'निरक्षर' शब्द का विलोम क्या होगा?

- Ans 1. अपढ़
 2. महान
 3. अनपढ़
 4. साक्षर

Question ID : 26433067090
Status : Not Answered
Chosen Option : --

Q.11 निम्नलिखित वाक्य के किस भाग में वर्तनी सम्बन्धी त्रुटि है?
'आजकल दिल्ली के प्रगति मैदान में हस्तशिल्प प्रदर्शिनी चल रही है।'

- Ans 1. प्रगति मैदान में
 2. आजकल दिल्ली के
 3. हस्तशिल्प प्रदर्शिनी
 4. चल रही है।

Question ID : 26433063025
Status : Not Answered
Chosen Option : --

Q.12 मुहावरों और उनके अर्थ का निम्नलिखित में से कौन सा युग्म सही है?

- Ans 1. दाल न गलना-पूरा बस चलना
 2. दिन का फेर होना-दिनभर भटकते रहना
 3. त्रिशंकु होना-अधर में लटकते रहना
 4. दो दिन का मेहमान-लम्बे समय तक जीना

Question ID : 26433062559
Status : Not Answered
Chosen Option : --

Q.13 तब की बात कुछ और थी। फिर ऐसा नहीं होगा।
उपरोक्त वाक्य में प्रयुक्त 'तब', 'फिर' समानार्थक क्रिया-विशेषणों के सही अर्थ क्या हैं?

- Ans 1. 'तब' का अर्थ बाद में और 'फिर' का अर्थ बार – बार
 2. 'तब' का अर्थ उस समय और 'फिर' का अर्थ दुबारा
 3. 'तब' का अर्थ उस समय और 'फिर' का अर्थ अलग
 4. 'तब' का अर्थ कहाँ और 'फिर' का अर्थ वर्तमान

Question ID : 26433079232
Status : Not Answered
Chosen Option : --

Q.14 निम्नलिखित वाक्य के किस भाग में शब्द-चयन सम्बन्धी अशुद्धि है?
'हिन्दी के प्रचार में बहुत बड़े-बड़े संकट हैं।'

- Ans 1. बड़े-बड़े संकट हैं।
 2. बहुत
 3. प्रचार में
 4. हिन्दी के

Question ID : 26433062806
Status : Not Answered
Chosen Option : --

Q.15 निम्नलिखित मुहावरे के लिए उपयुक्त सार्थक शब्द है-
टका-सा जवाब देना

- Ans 1. साफ इंकार करना
 2. हिचकना
 3. बहाना करना
 4. लालच देना

Question ID : 26433065771
Status : Not Answered
Chosen Option : --

Comprehension:

निम्नलिखित गद्यांश में कुछ शब्दों को हटा दिया गया है। दिए गए विकल्पों की सहायता से रिक्त स्थानों की पूर्ति कीजिए। प्रत्येक संख्या के लिए सबसे उपयुक्त विकल्प का चयन करें।

वैसे तो सभी आयु-वर्ग के लोग अपने-अपने जन्मदिन 1. _____ मनाते हैं, पर बच्चों में इस दिन को मनाने की उत्सुकता कुछ 2. _____ ही होती है। पूरे वर्ष वे इस दिन की 3. _____ करते रहते हैं। जब भी किसी के जन्मदिन में 4. _____ होते हैं लौटकर ज़रूर पूछते हैं कि हमारा जन्मदिन कब मनाया जाएगा। जन्मदिन पर घर को सजाया जाता है। इस दिन सभी मित्र 5. _____ होते हैं।

SubQuestion No : 16

Q.16 रिक्त स्थान 1 की पूर्ति के लिए सबसे उपयुक्त विकल्प का चयन कीजिए।

- Ans 1. उत्सुकता
 2. प्रसन्नतापूर्वक
 3. स्वाभाविक
 4. रोज़

Question ID : 264330111083
Status : Not Answered
Chosen Option : --

Comprehension:

निम्नलिखित गद्यांश में कुछ शब्दों को हटा दिया गया है। दिए गए विकल्पों की सहायता से रिक्त स्थानों की पूर्ति कीजिए। प्रत्येक संख्या के लिए सबसे उपयुक्त विकल्प का चयन करें।

वैसे तो सभी आयु-वर्ग के लोग अपने-अपने जन्मदिन 1. _____ मनाते हैं, पर बच्चों में इस दिन को मनाने की उत्सुकता कुछ 2. _____ ही होती है। पूरे वर्ष वे इस दिन की 3. _____ करते रहते हैं। जब भी किसी के जन्मदिन में 4. _____ होते हैं लौटकर ज़रूर पूछते हैं कि हमारा जन्मदिन कब मनाया जाएगा। जन्मदिन पर घर को सजाया जाता है। इस दिन सभी मित्र 5. _____ होते हैं।

SubQuestion No : 17

Q.17 रिक्त स्थान 2 की पूर्ति के लिए सबसे उपयुक्त विकल्प का चयन कीजिए।

- Ans 1. अधिक
 2. प्रायः
 3. हमेशा
 4. कम

Question ID : 264330111084
Status : Not Answered
Chosen Option : --

Comprehension:

निम्नलिखित गद्यांश में कुछ शब्दों को हटा दिया गया है। दिए गए विकल्पों की सहायता से रिक्त स्थानों की पूर्ति कीजिए। प्रत्येक संख्या के लिए सबसे उपयुक्त विकल्प का चयन करें।

वैसे तो सभी आयु-वर्ग के लोग अपने-अपने जन्मदिन 1. _____ मनाते हैं, पर बच्चों में इस दिन को मनाने की उत्सुकता कुछ 2. _____ ही होती है। पूरे वर्ष वे इस दिन की 3. _____ करते रहते हैं। जब भी किसी के जन्मदिन में 4. _____ होते हैं लौटकर ज़रूर पूछते हैं कि हमारा जन्मदिन कब मनाया जाएगा। जन्मदिन पर घर को सजाया जाता है। इस दिन सभी मित्र 5. _____ होते हैं।

SubQuestion No : 18

Q.18 रिक्त स्थान 3 की पूर्ति के लिए सबसे उपयुक्त विकल्प का चयन कीजिए।

- Ans 1. प्रतीक्षा
 2. सहायता
 3. विकसित
 4. सार्थकता

Question ID : 264330111085
Status : Not Answered
Chosen Option : --

Comprehension:

निम्नलिखित गद्यांश में कुछ शब्दों को हटा दिया गया है। दिए गए विकल्पों की सहायता से रिक्त स्थानों की पूर्ति कीजिए। प्रत्येक संख्या के लिए सबसे उपयुक्त विकल्प का चयन करें।

वैसे तो सभी आयु-वर्ग के लोग अपने-अपने जन्मदिन 1. _____ मनाते हैं, पर बच्चों में इस दिन को मनाने की उत्सुकता कुछ 2. _____ ही होती है। पूरे वर्ष वे इस दिन की 3. _____ करते रहते हैं। जब भी किसी के जन्मदिन में 4. _____ होते हैं लौटकर ज़रूर पूछते हैं कि हमारा जन्मदिन कब मनाया जाएगा। जन्मदिन पर घर को सजाया जाता है। इस दिन सभी मित्र 5. _____ होते हैं।

SubQuestion No : 19

Q.19 रिक्त स्थान 4 की पूर्ति के लिए सबसे उपयुक्त विकल्प का चयन कीजिए।

- Ans 1. सामाजिक
 2. अभिव्यक्त
 3. विचलित
 4. सम्मिलित

Question ID : 264330111086
Status : Not Answered
Chosen Option : --

Comprehension:

निम्नलिखित गद्यांश में कुछ शब्दों को हटा दिया गया है। दिए गए विकल्पों की सहायता से रिक्त स्थानों की पूर्ति कीजिए। प्रत्येक संख्या के लिए सबसे उपयुक्त विकल्प का चयन करें।

वैसे तो सभी आयु-वर्ग के लोग अपने-अपने जन्मदिन 1. _____ मनाते हैं, पर बच्चों में इस दिन को मनाने की उत्सुकता कुछ 2. _____ ही होती है। पूरे वर्ष वे इस दिन की 3. _____ करते रहते हैं। जब भी किसी के जन्मदिन में 4. _____ होते हैं लौटकर ज़रूर पूछते हैं कि हमारा जन्मदिन कब मनाया जाएगा। जन्मदिन पर घर को सजाया जाता है। इस दिन सभी मित्र 5. _____ होते हैं।

SubQuestion No : 20

Q.20 रिक्त स्थान 5 की पूर्ति के लिए सबसे उपयुक्त विकल्प का चयन कीजिए।

- Ans**
- 1. प्रेरणा
 - 2. संबंधित
 - 3. एकत्रित
 - 4. प्रसिद्धि

Question ID : 264330111087

Status : Not Answered

Chosen Option : --



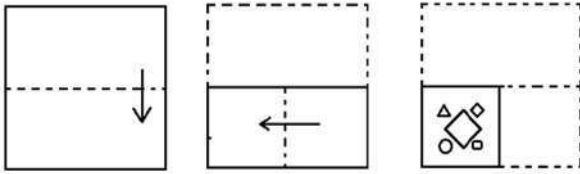
**Constable GD in CAPFs SSF Rifleman GD in Assam Rifles and
Sepoy in NCB Examination 2022**

| | |
|----------------|-------------------------------|
| Roll Number | |
| Candidate Name | |
| Venue Name | TCS Gito Bitan |
| Exam Date | 10/01/2023 |
| Exam Time | 11:45 AM - 12:45 PM |
| Subject | Constable GD Examination 2022 |

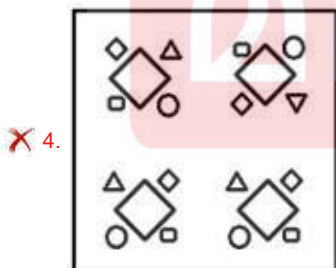
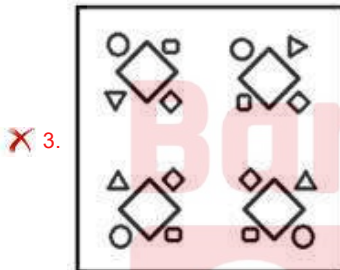
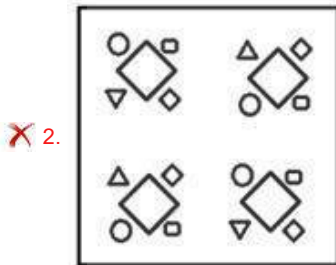
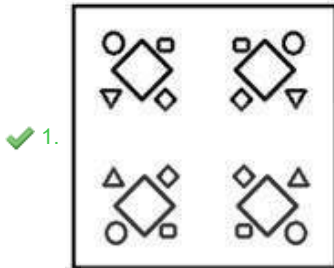
Section : Part-A-General Intelligence and Reasoning



Q.1 The sequence of folding a piece of paper and the manner in which the folded paper has been cut is shown below. Select the figure which would most closely resemble the unfolded form of the paper.



Ans



Question ID : 26433087095
 Status : Answered
 Chosen Option : 1

Q.2 Six girls D, K, M, P, R and S are sitting around a circular table, facing the centre. S is sitting third to the left of R. P is sitting to the immediate right of R and to the immediate left of D. M is sitting to the immediate left of R. K is sitting to the immediate right of S and to the immediate left of M. Who is the immediate neighbour of K and D?

- Ans
- 1. R
 - 2. P
 - 3. M
 - 4. S

Question ID : 26433080472
Status : Answered
Chosen Option : 4

Q.3 Which two signs should be interchanged to make the below equation mathematically correct?

$$42 + 12 \div 24 \times 84 - 14 = 91$$

- Ans
- 1. + and ×
 - 2. ÷ and -
 - 3. - and +
 - 4. × and ÷

Question ID : 264330117505
Status : Answered
Chosen Option : 1

Q.4 Select the option that is related to the third word in the same way as the second word is related to the first word (The words must be considered as meaningful English words and must not be related to each other based on the number of letters/consonants/vowels in the word).

Pediatrician : Children :: Dermatologist : ?

- Ans
- 1. Feet
 - 2. Bones
 - 3. Plant
 - 4. Skin

Question ID : 26433078823
Status : Answered
Chosen Option : 4

Q.5 Which option represents the correct order of the given words as they would appear in the English dictionary?

- 1 lonely
- 2 longitude
- 3 lovely
- 4 lounge
- 5 locker

- Ans
- 1. 5,1,2,3,4
 - 2. 5,2,1,3,4
 - 3. 5,1,2,4,3
 - 4. 5,4,3,1,2

Question ID : 26433069317
Status : Answered
Chosen Option : 3

Q.6 Which letter-cluster will replace the question mark (?) to complete the given series?
UERB, RHOE, ?, LNIK, IQFN

- Ans
- 1. OKMH
 - 2. OKNI
 - 3. OKLH
 - 4. OLMl

Question ID : 26433068574

Status : Answered

Chosen Option : 3

Q.7 Select the set in which the numbers are related in the same way as are the numbers of the following sets.

(NOTE : Operations should be performed on the whole numbers, without breaking down the numbers into its constituent digits. E.g. 13 – Operations on 13 such as adding/subtracting/multiplying etc. to 13 can be performed. Breaking down 13 into 1 and 3 and then performing mathematical operations on 1 and 3 is not allowed)
(20, 90, 10)
(25, 135, 10)

- Ans
- 1. (18, 72, 10)
 - 2. (19, 80, 15)
 - 3. (22, 150, 7)
 - 4. (30, 169, 12)

Question ID : 26433076546

Status : Answered

Chosen Option : 1

Q.8 Which of the following interchange of numbers (not digits) would make the given equation correct?

$$8 \times 15 \div 3 + 14 - 4 = 26$$

- Ans
- 1. 15, 26
 - 2. 4, 8
 - 3. 14, 15
 - 4. 3, 4

Question ID : 26433087045

Status : Answered

Chosen Option : 2

Q.9 A @ B means 'A is the husband of B'.

A & B means 'A is the mother of B'.

A # B means 'A is the daughter of B'.

A % B means 'A is the sister of B'.

If G % V @ K & P and G # S % M, then how is S related to P?

- Ans
- 1. Father's mother
 - 2. Mother-in-law
 - 3. Son's son
 - 4. Father-in-law

Question ID : 26433069614

Status : Answered

Chosen Option : 1

Q.10 Which of the following numbers will replace the question mark (?) in the given series?
7, 50, 351, 2458, ?

- Ans 1. 17207
 2. 18000
 3. 13582
 4. 15265

Question ID : 26433082002
Status : Answered
Chosen Option : 1

Q.11 Which of the following terms will replace the question mark (?) in the given series?
DBA, JHG, PNM, ?

- Ans 1. VTU
 2. VTQ
 3. VTS
 4. KMV

Question ID : 26433068631
Status : Answered
Chosen Option : 3

Q.12 Three Statements are given followed by Three conclusions numbered I, II and III.
Assuming the statements to be true, even if they seem to be at variance with commonly known facts, decide which of the conclusions logically follow(s) from the statements.

Statements:

Some cabbages are rocks.

All rocks are wheels.

No wheel is a scissor.

Conclusions:

I. All cabbages are wheels.

II. Some rocks are wheels.

III. Some wheels are not scissors.

- Ans 1. Both conclusions I and II follow.
 2. Both conclusions I and III follow.
 3. Both conclusions II and III follow.
 4. All conclusions follow.

Question ID : 26433081792
Status : Answered
Chosen Option : 3

Q.13 Eight people are sitting in two parallel rows with 4 people each in such a way that there is equal distance between adjacent persons and they are facing each other. In row I – L, M, N and O are seated and all of them are facing south. In row II – P, Q, R and S are seated and all of them are facing north. N sits next to the person at the extreme right end of their row and is facing R. S sits at the extreme left end of their row. Q sits to the immediate right of R and is facing L. O sits at the extreme left end of their row. Who sits at the extreme right end of the row of people facing South?

- Ans
- 1. N
 - 2. M
 - 3. L
 - 4. O

Question ID : 26433068745
 Status : Answered
 Chosen Option : 2

Q.14 Select the correct mirror image of the given figure when the mirror is placed at MN as shown below.



- Ans
- 1. 9 d b 7 n o m 4 e
 - 2. 9 d b 7 m o n 4 e
 - 3. e d b 7 m o n 4 9
 - 4. 9 b d 7 m o n 4 e

Question ID : 26433082331
 Status : Answered
 Chosen Option : 2

Q.15 In a certain code language, 'MONTH' is written as '141213719' and 'YEAR' is written as '222269'. How will 'WEEK' be written in that language?

- Ans
- 1. 1444424
 - 2. 2444416
 - 3. 4222261
 - 4. 4222216

Question ID : 26433068228
 Status : Answered
 Chosen Option : 4

Q.16 In a certain code language, 'BUYER' is written as 'CSZCS' and 'CHILD' is written as 'DFJJE'. How will 'DEATH' be written in that language?

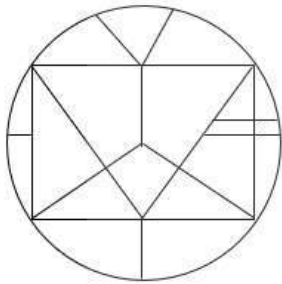
- Ans
- 1. GFCRJ
 - 2. EBCUJ
 - 3. FFBUI
 - 4. ECBRI

Question ID : 26433082558

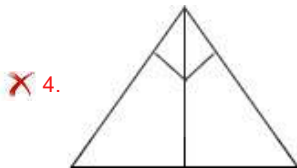
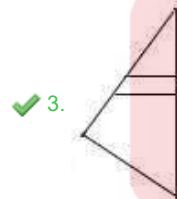
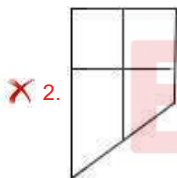
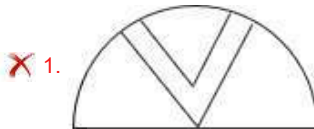
Status : Answered

Chosen Option : 4

Q.17 Select the option figure which is embedded in the given figure. (Rotation is NOT allowed)



Ans

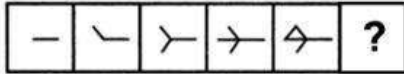


Question ID : 26433069349

Status : Answered

Chosen Option : 3

Q.18 Select the figure from among the given options that can replace the question mark (?) in the following series.



Ans

- 1.
- 2.
- 3.
- 4.

Question ID : 26433080494

Status : Answered

Chosen Option : 4

Q.19 Select the option that is related to the fifth letter-cluster in the same way as the second letter-cluster is related to the first letter-cluster and the fourth letter-cluster is related to the third letter-cluster.

UCE : FEX :: PGS : TIS :: HKR : ?

- Ans
- 1. SNK
 - 2. SMJ
 - 3. SMK
 - 4. RKH

Question ID : 26433057745

Status : Answered

Chosen Option : 3

Q.20 Which of the following numbers will replace the question mark (?) in the given series?
7, 17, ?, 137, 407, 1217

- Ans
- 1. 57
 - 2. 34
 - 3. 51
 - 4. 47

Question ID : 26433068096

Status : Answered

Chosen Option : 4

Q.1 Sadanam P.V Balakrishnan won the Sangeet Natak Akademi Award in which dance form?

- Ans**
- 1. Lavani
 - 2. Kathakali
 - 3. Bharatnatyam
 - 4. Kuchipudi

Question ID : 264330115844
Status : Not Answered
Chosen Option : --

Q.2 Who among the following was the first Indian to be recruited in Indian Civil Service in British India?

- Ans**
- 1. Satyendranath Tagore
 - 2. Rahimtulla M Sayani
 - 3. Rabindranath Tagore
 - 4. Surendra Nath Banerjee

Question ID : 26433090582
Status : Not Answered
Chosen Option : --

Q.3 In badminton each game consist of how many points?

- Ans**
- 1. 15
 - 2. 21
 - 3. 11
 - 4. 20

Question ID : 264330115928
Status : Not Answered
Chosen Option : --

Q.4 Who was the first flag bearer for India in the Olympics?

- Ans**
- 1. Purma Banerjee
 - 2. Dhyan Chand
 - 3. Lal Shah Bokhari
 - 4. Zafar Iqbal

Question ID : 264330116258
Status : Not Answered
Chosen Option : --

Q.5 Rs. 50 banknote of Mahatma Gandhi (New) series has base colour of _____.

- Ans
- 1. chocolate brown
 - 2. stone grey
 - 3. fluorescent blue
 - 4. lavender

Question ID : 264330115292
Status : Not Answered
Chosen Option : --

Q.6 Which of the following is a classical dance form from Andhra Pradesh?

- Ans
- 1. Bharatanatyam
 - 2. Mohiniyattam
 - 3. Kuchipudi
 - 4. Manipuri

Question ID : 26433074069
Status : Not Attempted and Marked For Review
Chosen Option : --

Q.7 Identify a redox reaction.

- Ans
- 1. $2\text{Pb}(\text{NO}_3)_2(\text{s}) \xrightarrow{\text{Heat}} 2\text{PbO}(\text{s}) + 4\text{NO}_2(\text{g}) + \text{O}_2(\text{g})$
 - 2. $\text{CaCO}_3(\text{s}) \xrightarrow{\text{Heat}} \text{CaO}(\text{s}) + \text{CO}_2(\text{g})$
 - 3. $\text{MnO}_2 + 4\text{HCl} \rightarrow \text{MnCl}_2 + 2\text{H}_2\text{O} + \text{Cl}_2$
 - 4. $\text{Pb}(\text{s}) + \text{CuCl}_2(\text{aq}) \rightarrow \text{PbCl}_2(\text{aq}) + \text{Cu}(\text{s})$

Question ID : 26433091479
Status : Not Answered
Chosen Option : --

Q.8 Maha Shivratri is celebrated in the honour of the Hindu deity, Lord Shiva in the Hindu month of _____.

- Ans
- 1. Kartika
 - 2. Chaitra
 - 3. Phalguna
 - 4. Vaishakha

Question ID : 264330115124
Status : Not Answered
Chosen Option : --

Q.9 The plan between fifth five year plan and sixth five year plan is known as _____.

- Ans
- 1. Forward
 - 2. Equality
 - 3. Rolling
 - 4. Integrated

Question ID : 264330116139
Status : Answered
Chosen Option : 3

Q.10 According to Xuan Zang, the _____ of Nalanda Buddhist monastery asks new entrants difficult questions which were very difficult to answer

- Ans
- 1. chief of monastery
 - 2. gatekeeper
 - 3. youngest monk
 - 4. oldest monk

Question ID : 26433085220
Status : Not Answered
Chosen Option : --

Q.11 As on October 2022, who is the General Secretary of the Communist Party of India ?

- Ans
- 1. Sitaram Yechury
 - 2. D. Raja
 - 3. Indrajit Gupta
 - 4. Binoy Viswam

Question ID : 264330114995
Status : Not Answered
Chosen Option : --

Q.12 Skill India Mission's Governing Council is chaired by the _____.

- Ans
- 1. Chief Minister
 - 2. President
 - 3. Prime Minister
 - 4. Home Minister

Question ID : 264330116190
Status : Not Answered
Chosen Option : --

Q.13 The contribution made by each sector of the economy into GDP is called _____.

- Ans
- 1. structural composition
 - 2. nominal composition
 - 3. real GDP
 - 4. real composition

Question ID : 26433082165
Status : Not Answered
Chosen Option : --

Q.14 In Nomadic herding, herdsmen move from place to place with their animals for _____ and _____ along defined routes.

- Ans
- 1. money and water
 - 2. shelter and money
 - 3. fodder and water
 - 4. shelter and fodder

Question ID : 264330115539
Status : Not Answered
Chosen Option : --

Q.15 Who among the following was elected as Member of Rajya Sabha from Tripura, India in September 2022?

- Ans
- 1. Arun Singh
 - 2. Miriam Rengma
 - 3. Radha Mohan Das
 - 4. Biplab Kumar Deb

Question ID : 264330114948
Status : Not Answered
Chosen Option : --

Q.16 Which article of the Indian Constitution deals with the 'protection of life and personal liberty'?

- Ans
- 1. Article 19
 - 2. Article 21
 - 3. Article 20
 - 4. Article 22

Question ID : 26433089906
Status : Answered
Chosen Option : 2

Q.17 Which of the following case is NOT a criminal law case?

- Ans
- 1. Murder
 - 2. Harassment for dowry
 - 3. Theft
 - 4. Divorce case

Question ID : 26433089183
Status : Answered
Chosen Option : 4

Q.18 Name the state which has the highest female literacy rate in India as per census 2011.

- Ans 1. Mizoram
 2. Kerala
 3. Karnataka
 4. Maharashtra

Question ID : 264330116053
Status : Not Answered
Chosen Option : --

Q.19 In human body, the food passes through a continuous canal which begins at _____ and ends at anus.

- Ans 1. stomach
 2. buccal cavity
 3. food pipe
 4. rectum

Question ID : 264330115227
Status : Answered
Chosen Option : 1

Q.20 Tamil Nadu coast gets a large portion of its rain during _____ and _____.

- Ans 1. April and May
 2. October and November
 3. May and June
 4. August and September

Question ID : 26433087879
Status : Not Answered
Chosen Option : --

Section : Part-C-Elementary Mathematics

Q.1 A and B can complete a work separately in 10 days and 15 days, respectively. B alone work for 3 days and then he left the work. In how many days will A finish the remaining work?

- Ans 1. 6
 2. 9
 3. 8
 4. 7

Question ID : 26433081081
Status : Answered
Chosen Option : 3

Q.2 Find the product of the numbers whose HCF and LCM are 8 and 40 respectively.

- Ans 1. 240
 2. 300
 3. 320
 4. 360

Question ID : 264330116665
Status : Answered
Chosen Option : 3

Q.3 The difference between compound interest and simple interest is ₹228 for a certain sum of money at 8% per annum for $1\frac{1}{2}$ years, when compound interest is compounded half-yearly and simple interest is computed yearly. What is the sum?

- Ans 1. ₹46,900
 2. ₹46,531
 3. ₹47,000
 4. ₹46,875

Question ID : 26433090258
Status : Not Answered
Chosen Option : --

Q.4 John borrowed some amount of money from a bank at the rate of 10% per annum on compound interest for which interest is compounded annually. If he repaid his loan by paying ₹21,961.50 at the end of 4 years, what is the amount he borrowed?

- Ans 1. ₹17,000
 2. ₹15,000
 3. ₹16,000
 4. ₹14,000

Question ID : 26433071233
Status : Not Answered
Chosen Option : --

Q.5 A bus travels from station P to station Q at a speed of 70 km/h, and from station Q to station P at a speed of 90 km/h. What is the average speed of the bus during the entire journey?

- Ans 1. 75.78 km/h
 2. 78.75 km/h
 3. 80.25 km/h
 4. 82.35 km/h

Question ID : 26433080375
Status : Answered
Chosen Option : 2

Q.6 Sonal and Arjun together can finish a piece of work in 57 days, Arjun and Rohan in 38 days, and Rohan and Sonal in 38 days, then Sonal, Arjun, and Rohan together can finish the same work in how many days?

- Ans
- 1. 31.5 days
 - 2. 28.5 days
 - 3. 26.5 days
 - 4. 24.5 days

Question ID : 264330116874
Status : Answered
Chosen Option : 2

Q.7 On selling a table fan at Rs.2,827.06, the value of gain is 14% more than the value of loss incurred on selling it at Rs.2,230. In order to gain 14%, the selling price will be:

- Ans
- 1. Rs.3,045
 - 2. Rs.2,890
 - 3. Rs.2,860.26
 - 4. Rs.2,844.50

Question ID : 26433074923
Status : Not Answered
Chosen Option : --

Q.8 The ratio between the fourth proportional of 7, 5 and 3 to the third proportional of 7 and 13 is:

- Ans
- 1. 75 : 448
 - 2. 15 : 169
 - 3. 21 : 25
 - 4. 25 : 21

Question ID : 26433079943
Status : Answered
Chosen Option : 2

Q.9 A cylindrical tank has a capacity of 5632 m^3 . If the diameter of its base is 16 m, find its depth.

- Ans
- 1. 28 m
 - 2. 32 m
 - 3. 30 m
 - 4. 34 m

Question ID : 26433079807
Status : Answered
Chosen Option : 1

Q.10 A shopkeeper sells goods at a profit of 12% and uses a weight which is 15% less than the original weight. Find his total percentage gain. (Correct to 2 decimal places)

Ans 1. 31.76%

2. 30.24%

3. 28.75%

4. 25.80%

Question ID : 26433080164

Status : Answered

Chosen Option : 1

Q.11 If $A : B = 5 : 6$ and $B : C = 6 : 7$, then $(A + B) : (B + C) : (C + A)$ is:

Ans 1. 12 : 13 : 11

2. 11 : 13 : 12

3. 11 : 12 : 13

4. 13 : 11 : 12

Question ID : 26433074990

Status : Answered

Chosen Option : 2

Q.12 The LCM of two numbers is 15 times their HCF. The sum of the LCM and the HCF is 112. If one of the numbers is 49, then the other number is:

Ans 1. 18

2. 21

3. 24

4. 15

Question ID : 26433079829

Status : Answered

Chosen Option : 4

Q.13 In a circular race of 400 m in length, A and B start at speeds of 10 m/s and 16 m/s, respectively, at the same time from the same point. After how much time will they meet for the first time at the starting point when running in the same direction?

Ans 1. 180 s

2. 200 s

3. 240 s

4. 220 s

Question ID : 26433074968

Status : Not Answered

Chosen Option : --

Q.14 What is the length of the longest pole that can be placed in a room of dimensions 10 m × 10 m × 5 m?

- Ans 1. 20 m
 2. 25 m
 3. 15 m
 4. 10 m

Question ID : 26433066369
Status : Answered
Chosen Option : 3

Q.15 A clothing store announced a discount of 30 percent on shirts. Rivaan wanted to save Rs. 810 in discount. How many shirts should he buy to do so, if marked price of each shirt is Rs. 540?

- Ans 1. 6
 2. 5
 3. 4
 4. 8

Question ID : 264330116759
Status : Answered
Chosen Option : 2

Q.16 A train 120 m long passes a bridge in 18 seconds moving at a speed of 60 km/h. Find out the length of the bridge.

- Ans 1. 150 m
 2. 160 m
 3. 170 m
 4. 180 m

Question ID : 26433075415
Status : Answered
Chosen Option : 4

Q.17 A dealer marks his goods 15% above the cost price. Then he allows 20% discount on it. What will be his loss percentage?

- Ans 1. 7%
 2. 8%
 3. 5%
 4. 6%

Question ID : 26433082970
Status : Answered
Chosen Option : 2

Q.18 Number 350 is increased by 20% and then decreased by 25%. Find the new number.

- Ans 1. 320
 2. 3244
 3. 340
 4. 315

Question ID : 26433080004
Status : Answered
Chosen Option : 4

Q.19 The average cost of 10 items is Rs.89. If one item costs Rs.35, then find the average cost of remaining 9 items (in Rs.).

- Ans 1. 90
 2. 95
 3. 85
 4. 80

Question ID : 26433075717
Status : Answered
Chosen Option : 2

Q.20 Due to illness the weight of a person has reduced from 80 kg to 64 kg in a month. The percent decrease in the weight of the person is:

- Ans 1. 16 percent
 2. 14 percent
 3. 24 percent
 4. 20 percent

Question ID : 264330116794
Status : Answered
Chosen Option : 4

Section : Part-D-English

Q.1 Select the most appropriate meaning of the given idiom.
Bed of roses

- Ans 1. As one wishes
 2. Be bound to obey
 3. A pleasant condition of life
 4. With all of one's belonging

Question ID : 26433084689
Status : Answered
Chosen Option : 3

Q.2 Select the most appropriate meaning of the given idiom.

Bag and baggage

- Ans
- 1. Lots of bags
 - 2. To make a beginning
 - 3. Close friends
 - 4. With all belongings

Question ID : 26433072538
Status : Not Answered
Chosen Option : --

Q.3 Select the most appropriate option to fill in the blank.

Alas! The forest turned into a _____ land.

- Ans
- 1. bare
 - 2. beer
 - 3. bear
 - 4. buyer

Question ID : 26433090391
Status : Not Answered
Chosen Option : --

Q.4 Select the most appropriate option that can substitute the underlined segment in the given sentence. If there is no need to substitute it, select 'No substitution'.

The turtle can live in water as well as land.

- Ans
- 1. No substitution
 - 2. and also land
 - 3. also on land
 - 4. as well as on land.

Question ID : 26433093077
Status : Answered
Chosen Option : 4

Q.5 Select the most appropriate option that can substitute the underlined segment in the given sentence.

Baldness is quite very usual among youngsters these days.

- Ans
- 1. happening very surely
 - 2. having very certain
 - 3. getting very common
 - 4. hitting very severely

Question ID : 26433088503
Status : Not Answered
Chosen Option : --

Q.6 Select the most appropriate synonym of the given word.
Conceal

- Ans**
- 1. Manifest
 - 2. Disclose
 - 3. Confess
 - 4. Hide

Question ID : 26433084681
Status : Answered
Chosen Option : 4

Q.7 Select the most appropriate ANTONYM to substitute the underlined word in the given sentence.

Her lively demeanour makes her the ideal choice for this job.

- Ans**
- 1. dreamy
 - 2. slimy
 - 3. grainy
 - 4. gloomy

Question ID : 26433074010
Status : Answered
Chosen Option : 1

Q.8 Select the most appropriate ANTONYM of the given word.

Cruel

- Ans**
- 1. Trunk
 - 2. Brutal
 - 3. Kind
 - 4. Savage

Question ID : 26433086374
Status : Answered
Chosen Option : 3

Q.9 Select the INCORRECTLY spelt word.

- Ans**
- 1. Dribbling
 - 2. Slice
 - 3. Temperament
 - 4. Solvant

Question ID : 26433073501
Status : Answered
Chosen Option : 3

Q.10 Select the most appropriate ANTONYM of the given word.

Steadfast

- Ans 1. Dishonest
 2. Unwavering
 3. Immobile
 4. Dependable

Question ID : 26433072216
Status : Not Answered
Chosen Option : --

Q.11 Select the most appropriate option to fill in the blanks and make the sentence meaningful.

They were not _____ to eat during the _____.

- Ans 1. allowed; brake
 2. aloud; break
 3. allowed; break
 4. aloud; brake

Question ID : 26433092101
Status : Marked For Review
Chosen Option : 3

Q.12 Select the option that can be used as a one-word substitute for the given group of words.

The possible results of an action

- Ans 1. Implementation
 2. Decision
 3. Ramification
 4. Causation

Question ID : 26433089380
Status : Not Answered
Chosen Option : --

Q.13 Select the most appropriate synonym of the given word.

Bankrupt

- Ans 1. Well-off
 2. Invert
 3. Insolvent
 4. Careless

Question ID : 26433072187
Status : Not Answered
Chosen Option : --

Q.14 Select the INCORRECTLY spelt word.

- Ans
- 1. Ignorance
 - 2. Misspell
 - 3. Harass
 - 4. Occassion

Question ID : 26433073738
Status : Answered
Chosen Option : 3

Q.15 The following sentence has been split into four segments. Identify the segment that contains an error.

Nandu will / leave for the airport / as soon as / a taxi arrive.

- Ans
- 1. a taxi arrive
 - 2. leave for the airport
 - 3. Nandu will
 - 4. as soon as

Question ID : 26433099601
Status : Answered
Chosen Option : 1

Comprehension:

In the following passage, some words have been deleted. Read the passage carefully and select the most appropriate option to fill in each blank.

A natural gas barrier in the upper atmosphere called the ozone layer (1.) _____ people and other living things from the sun's harmful ultraviolet (UV) radiation. Ozone exists in tiny concentrations (2.) _____ the atmosphere, but the majority (about 90%) is found in the stratosphere, a layer that is 10 to 50 kilometres (3.) _____ the surface of Earth. The ozone layer is essential to life on Earth because it (4.) _____ out the majority of the sun's harmful UV rays. In the 1970s, researchers (5.) _____ that the ozone layer was thinning.

SubQuestion No : 16

Q.16 Select the most appropriate option to fill in blank number 1.

- Ans
- 1. attracts
 - 2. flourishes
 - 3. discovers
 - 4. shields

Question ID : 26433089803
Status : Answered
Chosen Option : 4

Comprehension:

In the following passage, some words have been deleted. Read the passage carefully and select the most appropriate option to fill in each blank.

A natural gas barrier in the upper atmosphere called the ozone layer (1.) _____ people and other living things from the sun's harmful ultraviolet (UV) radiation. Ozone exists in tiny concentrations (2.) _____ the atmosphere, but the majority (about 90%) is found in the stratosphere, a layer that is 10 to 50 kilometres (3.) _____ the surface of Earth. The ozone layer is essential to life on Earth because it (4.) _____ out the majority of the sun's harmful UV rays. In the 1970s, researchers (5.) _____ that the ozone layer was thinning.

SubQuestion No : 17

Q.17 Select the most appropriate option to fill in blank number 2.

- Ans 1. below
 2. in
 3. throughout
 4. under

Question ID : 26433089804

Status : Answered

Chosen Option : 2

Comprehension:

In the following passage, some words have been deleted. Read the passage carefully and select the most appropriate option to fill in each blank.

A natural gas barrier in the upper atmosphere called the ozone layer (1.) _____ people and other living things from the sun's harmful ultraviolet (UV) radiation. Ozone exists in tiny concentrations (2.) _____ the atmosphere, but the majority (about 90%) is found in the stratosphere, a layer that is 10 to 50 kilometres (3.) _____ the surface of Earth. The ozone layer is essential to life on Earth because it (4.) _____ out the majority of the sun's harmful UV rays. In the 1970s, researchers (5.) _____ that the ozone layer was thinning.

SubQuestion No : 18

Q.18 Select the most appropriate option to fill in blank number 3.

- Ans 1. into
 2. onto
 3. above
 4. at

Question ID : 26433089805

Status : Answered

Chosen Option : 3

Comprehension:

In the following passage, some words have been deleted. Read the passage carefully and select the most appropriate option to fill in each blank.

A natural gas barrier in the upper atmosphere called the ozone layer (1.) _____ people and other living things from the sun's harmful ultraviolet (UV) radiation. Ozone exists in tiny concentrations (2.) _____ the atmosphere, but the majority (about 90%) is found in the stratosphere, a layer that is 10 to 50 kilometres (3.) _____ the surface of Earth. The ozone layer is essential to life on Earth because it (4.) _____ out the majority of the sun's harmful UV rays. In the 1970s, researchers (5.) _____ that the ozone layer was thinning.

SubQuestion No : 19

Q.19 Select the most appropriate option to fill in blank number 4.

- Ans 1. blames
 2. builds
 3. brims
 4. blocks

Question ID : 26433089806

Status : Answered

Chosen Option : 4

Comprehension:

In the following passage, some words have been deleted. Read the passage carefully and select the most appropriate option to fill in each blank.

A natural gas barrier in the upper atmosphere called the ozone layer (1.) _____ people and other living things from the sun's harmful ultraviolet (UV) radiation. Ozone exists in tiny concentrations (2.) _____ the atmosphere, but the majority (about 90%) is found in the stratosphere, a layer that is 10 to 50 kilometres (3.) _____ the surface of Earth. The ozone layer is essential to life on Earth because it (4.) _____ out the majority of the sun's harmful UV rays. In the 1970s, researchers (5.) _____ that the ozone layer was thinning.

SubQuestion No : 20

Q.20 Select the most appropriate option to fill in blank number 5.

- Ans 1. learning
 2. learns
 3. learnt
 4. learn

Question ID : 26433089807

Status : Answered

Chosen Option : 3

Section : Part-D-Hindi

Q.1 निम्नलिखित मुहावरे के लिय उपयुक्त सार्थक शब्द है-
नानी याद आना

- Ans 1. नानी को याद करना
 2. छुप कर बैठ जाना
 3. मुसीबत देखकर घबरा जाना
 4. किसी से मिलने का मन करना

Question ID : 26433065776

Status : Not Answered

Chosen Option : --

Q.2 'समुद्र की सीमा अनंत है।' वाक्य में प्रयुक्त 'अनंत' शब्द का विलोम शब्द बताइए -

- Ans
- 1. अंतहीन
 - 2. अंत
 - 3. अनंग
 - 4. असीमित

Question ID : 26433069745
Status : Not Answered
Chosen Option : --

Q.3 निम्नलिखित में से अव्यय से बना विशेषण शब्द नहीं है -

- Ans
- 1. अगला
 - 2. बाहरी
 - 3. पिछला
 - 4. कैसा

Question ID : 26433085056
Status : Not Answered
Chosen Option : --

Q.4 'आज विद्यालय में शिक्षिका ने अंताक्षरी खेलने को कहा।' वाक्य में अशुद्ध वर्तनी वाला शब्द है -

- Ans
- 1. शिक्षिका
 - 2. विद्यालय
 - 3. खेलने को कहा
 - 4. अंताक्षरी

Question ID : 26433069698
Status : Not Answered
Chosen Option : --

Q.5 मूल क्रिया, प्रथम प्रेरणार्थक क्रिया और द्वितीय प्रेरणार्थक क्रिया का सही शब्द-क्रम चुनिए।

- Ans
- 1. बजवाना - बजना - बजाना
 - 2. कराना - करना - करावाना
 - 3. उठना - उठाना - उठवाना
 - 4. सुनना - सुनवाना - सुनाना

Question ID : 26433063044
Status : Not Answered
Chosen Option : --

Q.6 'दोपहर _____'

उपर्युक्त वाक्य में रिक्त स्थान का उपयुक्त विकल्प निम्न में से क्या होगा?

- Ans
- 1. का अर्थ होता है दो पहरों का संग्राम
 - 2. का अर्थ होता है दो पहरों का कदाचार
 - 3. का अर्थ होता है दो पहरों का समाहार
 - 4. का अर्थ होता है दो पहरों का अनाचार

Question ID : 26433067041
Status : Not Answered
Chosen Option : --

Q.7 'जिसका खण्डन न हो सके' वाक्यांश के लिए उचित शब्द बताइए -

- Ans
- 1. खंडित
 - 2. खण्डनीय
 - 3. अखण्डनीय
 - 4. समूल

Question ID : 26433065906
Status : Not Answered
Chosen Option : --

Q.8 रेखांकित शब्द-समूह के लिए सर्वाधिक उपयुक्त विकल्प चुनें।
मुसीबत का मारा वह किसी और स्थान पर जा बसा।

- Ans
- 1. तत्र
 - 2. अन्यत्र
 - 3. सर्वत्र
 - 4. अत्र

Question ID : 26433062287
Status : Not Answered
Chosen Option : --

Q.9 इस जल में अनेक जीव हैं।

रेखांकित शब्द के विलोम शब्द का चयन कीजिए।

- Ans
- 1. सलिल
 - 2. तालाब
 - 3. थल
 - 4. स्थान

Question ID : 26433079643
Status : Not Answered
Chosen Option : --

Q.10 दो घोड़ों पर सवार होने से तुम सफल नहीं रहोगे।
उपरोक्त वाक्य में रेखांकित अंश के लिए कौन - सा शब्द उपयुक्त होगा?

- Ans
- 1. त्रिरंगी नीति
 - 2. दुरंगी नीति
 - 3. सवारी नीति
 - 4. सफल नीति

Question ID : 26433063059
Status : Not Answered
Chosen Option : --

Q.11 'ऊँट के मुँह में जीरा' मुहावरे का सही अर्थ है -

- Ans
- 1. अधिक खाने वाले को कम देना
 - 2. ऊँट को जीरा खिलाना
 - 3. खाने में जीरा डालना
 - 4. मित्रता करना

Question ID : 26433065923
Status : Not Answered
Chosen Option : --

Q.12 निम्नलिखित वाक्य में से अशुद्धि पहचानें-
वह आया परंतु मैं नहीं गया।

- Ans
- 1. आया
 - 2. गया
 - 3. परंतु
 - 4. वह

Question ID : 26433066827
Status : Not Answered
Chosen Option : --

Q.13 निम्नलिखित वाक्यांश के लिए उपयुक्त शब्द का चयन विकल्पों में से कीजिए।
जिसने चित्त किसी विषय में दिया (लगाया) है

- Ans
- 1. दत्तचित्त
 - 2. विषयचित्त
 - 3. अग्रसोची
 - 4. अग्रगामी

Question ID : 26433069997
Status : Not Answered
Chosen Option : --

Q.14 हिमालय भारत का ताज है।

रेखांकित शब्द के उचित पर्यायवाची शब्द का चयन कीजिए।

- Ans
- 1. प्रभा
 - 2. गिरिराज
 - 3. मदन
 - 4. आसव

Question ID : 26433079626

Status : Not Answered

Chosen Option : --

Q.15 'आकलन' शब्द के लिए इनमें से उपयुक्त पर्यायवाची शब्द कौन-सा है?

- Ans
- 1. अगणन
 - 2. गणना
 - 3. शरण
 - 4. नूतन

Question ID : 26433066893

Status : Not Answered

Chosen Option : --

Comprehension:

निम्न गद्यांश में से कुछ शब्दों को हटा दिया गया है। गद्यांश के नीचे पूछे गए प्रश्नों में इन रिक्त स्थानों के लिए उपयुक्त शब्द का चयन विकल्पों में से कीजिए।

राष्ट्र के 1. _____ विकास के लिए चरित्र निर्माण परम आवश्यक है। जिस प्रकार वर्तमान में भौतिक निर्माण का कार्य अनेक योजनाओं के माध्यम से तीव्र गति के साथ सम्पन्न हो रहा है, वैसे ही वर्तमान की सबसे बड़ी आवश्यकता यह है कि देशवासियों के चरित्र निर्माण के लिए भी प्रयत्न किया जाए। उत्तम चरित्रवान व्यक्ति ही 2. _____ की सर्वोच्च संपदा है। जनतंत्र के लिए तो यह एक महान 3. _____ योजना है। जन-समाज में राष्ट्र, संस्कृति, 4. _____ एवं परिवार के प्रति हमारा क्या कर्तव्य है इसका पूर्ण रूप से बोध कराना एवं राष्ट्र में व्याप्त समग्र भ्रष्टाचार के प्रति निषेधात्मक वातावरण का निर्माण करना ही चरित्र निर्माण का प्रथम 5. _____ है।

SubQuestion No : 16

Q.16 रिक्त स्थान 1 के लिए सर्वाधिक उपयुक्त शब्द इनमें से क्या होगा?

- Ans
- 1. सभी
 - 2. पूरे
 - 3. अधिक
 - 4. सर्वांगीण

Question ID : 26433072588

Status : Not Answered

Chosen Option : --

Comprehension:

निम्न गद्यांश में से कुछ शब्दों को हटा दिया गया है। गद्यांश के नीचे पूछे गए प्रश्नों में इन रिक्त स्थानों के लिए उपयुक्त शब्द का चयन विकल्पों में से कीजिए।

राष्ट्र के 1. _____ विकास के लिए चरित्र निर्माण परम आवश्यक है। जिस प्रकार वर्तमान में भौतिक निर्माण का कार्य अनेक योजनाओं के माध्यम से तीव्र गति के साथ सम्पन्न हो रहा है, वैसे ही वर्तमान की सबसे बड़ी आवश्यकता यह है कि देशवासियों के चरित्र निर्माण के लिए भी प्रयत्न किया जाए। उत्तम चरित्रवान व्यक्ति ही 2. _____ की सर्वोच्च संपदा है। जनतंत्र के लिए तो यह एक महान 3. _____ योजना है। जन-समाज में राष्ट्र, संस्कृति, 4. _____ एवं परिवार के प्रति हमारा क्या कर्तव्य है इसका पूर्ण रूप से बोध कराना एवं राष्ट्र में व्याप्त समग्र भ्रष्टाचार के प्रति निषेधात्मक वातावरण का निर्माण करना ही चरित्र निर्माण का प्रथम 5. _____ है।

SubQuestion No : 17

Q.17 रिक्त स्थान 2 के लिए सर्वाधिक उपयुक्त शब्द इनमें से क्या होगा?

- Ans
- 1. राज्य
 - 2. मोहल्ले
 - 3. राष्ट्र
 - 4. प्रदेश

Question ID : 26433072589

Status : Not Answered

Chosen Option : --

Comprehension:

निम्न गद्यांश में से कुछ शब्दों को हटा दिया गया है। गद्यांश के नीचे पूछे गए प्रश्नों में इन रिक्त स्थानों के लिए उपयुक्त शब्द का चयन विकल्पों में से कीजिए।

राष्ट्र के 1. _____ विकास के लिए चरित्र निर्माण परम आवश्यक है। जिस प्रकार वर्तमान में भौतिक निर्माण का कार्य अनेक योजनाओं के माध्यम से तीव्र गति के साथ सम्पन्न हो रहा है, वैसे ही वर्तमान की सबसे बड़ी आवश्यकता यह है कि देशवासियों के चरित्र निर्माण के लिए भी प्रयत्न किया जाए। उत्तम चरित्रवान व्यक्ति ही 2. _____ की सर्वोच्च संपदा है। जनतंत्र के लिए तो यह एक महान 3. _____ योजना है। जन-समाज में राष्ट्र, संस्कृति, 4. _____ एवं परिवार के प्रति हमारा क्या कर्तव्य है इसका पूर्ण रूप से बोध कराना एवं राष्ट्र में व्याप्त समग्र भ्रष्टाचार के प्रति निषेधात्मक वातावरण का निर्माण करना ही चरित्र निर्माण का प्रथम 5. _____ है।

SubQuestion No : 18

Q.18 रिक्त स्थान 3 के लिए सर्वाधिक उपयुक्त शब्द इनमें से क्या होगा?

- Ans
- 1. हितकारी
 - 2. लाभकारी
 - 3. कल्याणकारी
 - 4. मनोहारी

Question ID : 26433072590

Status : Not Answered

Chosen Option : --

Comprehension:

निम्न गद्यांश में से कुछ शब्दों को हटा दिया गया है। गद्यांश के नीचे पूछे गए प्रश्नों में इन रिक्त स्थानों के लिए उपयुक्त शब्द का चयन विकल्पों में से कीजिए।

राष्ट्र के 1. _____ विकास के लिए चरित्र निर्माण परम आवश्यक है। जिस प्रकार वर्तमान में भौतिक निर्माण का कार्य अनेक योजनाओं के माध्यम से तीव्र गति के साथ सम्पन्न हो रहा है, वैसे ही वर्तमान की सबसे बड़ी आवश्यकता यह है कि देशवासियों के चरित्र निर्माण के लिए भी प्रयत्न किया जाए। उत्तम चरित्रवान व्यक्ति ही 2. _____ की सर्वोच्च संपदा है। जनतंत्र के लिए तो यह एक महान 3. _____ योजना है। जन-समाज में राष्ट्र, संस्कृति, 4. _____ एवं परिवार के प्रति हमारा क्या कर्तव्य है इसका पूर्ण रूप से बोध कराना एवं राष्ट्र में व्याप्त समग्र भ्रष्टाचार के प्रति निषेधात्मक वातावरण का निर्माण करना ही चरित्र निर्माण का प्रथम 5. _____ है।

SubQuestion No : 19

Q.19 रिक्त स्थान 4 के लिए सर्वाधिक उपयुक्त शब्द इनमें से क्या होगा?

- Ans
- 1. राज्य
 - 2. लोग
 - 3. राष्ट्र
 - 4. समाज

Question ID : 26433072591

Status : Not Answered

Chosen Option : --

Comprehension:

निम्न गद्यांश में से कुछ शब्दों को हटा दिया गया है। गद्यांश के नीचे पूछे गए प्रश्नों में इन रिक्त स्थानों के लिए उपयुक्त शब्द का चयन विकल्पों में से कीजिए।

राष्ट्र के 1. _____ विकास के लिए चरित्र निर्माण परम आवश्यक है। जिस प्रकार वर्तमान में भौतिक निर्माण का कार्य अनेक योजनाओं के माध्यम से तीव्र गति के साथ सम्पन्न हो रहा है, वैसे ही वर्तमान की सबसे बड़ी आवश्यकता यह है कि देशवासियों के चरित्र निर्माण के लिए भी प्रयत्न किया जाए। उत्तम चरित्रवान व्यक्ति ही 2. _____ की सर्वोच्च संपदा है। जनतंत्र के लिए तो यह एक महान 3. _____ योजना है। जन-समाज में राष्ट्र, संस्कृति, 4. _____ एवं परिवार के प्रति हमारा क्या कर्तव्य है इसका पूर्ण रूप से बोध कराना एवं राष्ट्र में व्याप्त समग्र भ्रष्टाचार के प्रति निषेधात्मक वातावरण का निर्माण करना ही चरित्र निर्माण का प्रथम 5. _____ है।

SubQuestion No : 20

Q.20 रिक्त स्थान 5 के लिए सर्वाधिक उपयुक्त शब्द इनमें से क्या होगा?

- Ans
- 1. तरीका
 - 2. रास्ता
 - 3. सोपान
 - 4. कदम

Question ID : 26433072592

Status : Not Answered

Chosen Option : --

**Constable GD in CAPFs SSF Rifleman GD in Assam Rifles and
Sepoy in NCB Examination 2022**

| | |
|----------------|-------------------------------|
| Roll Number | |
| Candidate Name | |
| Venue Name | TCS Gito Bitan |
| Exam Date | 10/01/2023 |
| Exam Time | 2:30 PM - 3:30 PM |
| Subject | Constable GD Examination 2022 |

Section : **Part-A-General Intelligence and Reasoning**

Q.1 In this question, three statements are given, followed by two conclusions numbered I and II. Assuming the statements to be true, even if they seem to be at variance with commonly known facts, decide which of the conclusions logically follows/follow from the statements.

Statements:
1. All tube lights are fans.

2. All fans are bulbs.

Ans 1. Only conclusion II follows.

3. All bulbs are tube lights.

4. No tube lights are new.

2. Only conclusion I follows.

Conclusions:
I. Fans are new.

II. Some bulbs are new.

3. Neither conclusion I nor II follows.

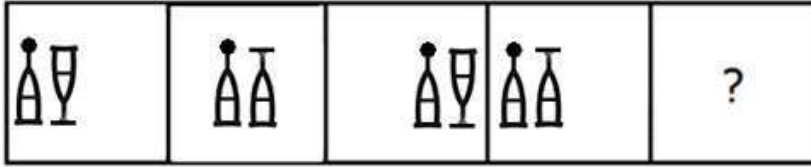
4. Both conclusions I and II follow.

Question ID : 26433070381

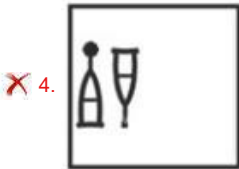
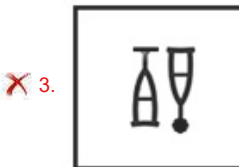
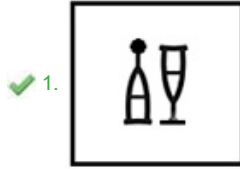
Status : **Answered**

Chosen Option : 3

Q.2 Select the figure that will come next in the following series.



Ans



Question ID : 26433079024
Status : Answered
Chosen Option : 1

Q.3 Select the option that is related to the fifth letter-cluster in the same way as the second letter-cluster is related to the first letter-cluster and the fourth letter-cluster is related to the third letter-cluster.
ROOT : QQTV :: STEM : VGUO :: LEAF : ?

- Ans
- ✓ 1. GCNH
 - ✗ 2. GCHN
 - ✗ 3. GDNH
 - ✗ 4. NGCH

Question ID : 26433057247
Status : Answered
Chosen Option : 1

Q.4 Which letter-cluster will replace the question mark (?) to complete the given series?
AJRZ, DMTC, ?, JSXI, MVZL

- Ans
- ✗ 1. GRVF
 - ✗ 2. HRVF
 - ✗ 3. HPVF
 - ✓ 4. GPVF

Question ID : 26433067947
Status : Answered
Chosen Option : 1

Q.5 'A + B' means 'A is the son of B'
'A - B' means 'A is the sister of B'
'A × B' means 'A is the brother of B'
'A ÷ B' means 'A is the wife of B'
If $A + B \div C \times D - E + F$, then which of the following statements is NOT correct?

- Ans
- 1. A is the grandson of F.
 - 2. A is the son of C.
 - 3. E is the brother of B.
 - 4. D is the daughter of F.

Question ID : 26433090050
Status : Answered
Chosen Option : 3

Q.6 In a certain code language, 'FINGER' is written as 'HHPIDT' and 'DESTINY' is written as 'FDUVHPA'. How will 'GRANTED' be written in that language?

- Ans
- 1. ITZPVDF
 - 2. HTZPVCE
 - 3. IQCMVDF
 - 4. HTC OVCE

Question ID : 26433081767
Status : Answered
Chosen Option : 3

Q.7 Which two signs should be interchanged to make the below equation mathematically correct?
 $136 \div 17 + 102 - 3 \times 2 = 187$

- Ans
- 1. + and ×
 - 2. ÷ and ×
 - 3. × and -
 - 4. ÷ and -

Question ID : 264330117569
Status : Answered
Chosen Option : 4

Q.8 Seven people A, H, D, F, T, E, and G are sitting in a straight row, facing north. Only three people sit to the left of E. G and H are immediate neighbours of E. A sits at the extreme right of the row. D is the immediate neighbour of A. F sits second to the left of E. Who sits at the extreme left of the row?

- Ans
- 1. T
 - 2. D
 - 3. A
 - 4. F

Question ID : 26433095009
Status : Answered
Chosen Option : 1

Q.9 6 Friends F, U, K, S, M, and A, are sitting around a circular table facing the centre. A and S are immediate neighbours of K. F is sitting opposite to K. S is not a neighbour of F. M is an immediate neighbour of A and F. Who is the immediate neighbour of A and F if M and S exchange their positions?

- Ans
- 1. U
 - 2. K
 - 3. S
 - 4. M

Question ID : 26433068077
Status : Not Answered
Chosen Option : --

Q.10 In a certain code language, 'find a solution' is coded as '418', 'be attentive' is coded as '29' and 'answers are correct' is coded as '737'. How will 'check the question' be coded in that language?

- Ans
- 1. 835
 - 2. 427
 - 3. 538
 - 4. 649

Question ID : 26433067779
Status : Answered
Chosen Option : 3

Q.11 Select the set in which the numbers are related in the same way as are the numbers of the following set.

(NOTE : Operations should be performed on the whole numbers, without breaking down the numbers into its constituent digits. E.g. 13 – Operations on 13 such as adding /subtracting/multiplying etc. to 13 can be performed. Breaking down 13 into 1 and 3 and then performing mathematical operations on 1 and 3 is NOT allowed)
(216, 12, 15)
(432, 23, 31)

- Ans
- 1. (304, 14, 24)
 - 2. (380, 24, 18)
 - 3. (150, 11, 14)
 - 4. (484, 16, 32)

Question ID : 26433076475
Status : Not Attempted and Marked For Review
Chosen Option : --

Q.12 Which option represents the correct order of the given words as they would appear in the English dictionary?

- 1 Seminar
- 2 Semolina
- 3 Senior
- 4 September
- 5 Serious

- Ans
- 1. 5,4,3,2,1
 - 2. 1,3,4,2,5
 - 3. 1,2,3,4,5
 - 4. 5,3,4,1,2

Question ID : 26433069306
Status : Answered
Chosen Option : 3

Q.13 Which of the following numbers will replace the question mark (?) in the given series?
3, 21, 147, ?, 7203

- Ans**
- 1. 882
 - 2. 1323
 - 3. 1218
 - 4. 1029

Question ID : 26433092490
Status : Answered
Chosen Option : 4

Q.14 Select the option that is related to the third word in the same way as the second word is related to the first word.
(The words must be considered as meaningful English words and must not be related to each other based on the number of letters/number of consonants/vowels in the word.)

Mumbai : Maharashtra :: Bhopal : ?

- Ans**
- 1. Madhya Pradesh
 - 2. Delhi
 - 3. Uttar Pradesh
 - 4. Andhra Pradesh

Question ID : 26433087260
Status : Answered
Chosen Option : 1

Q.15 Select the number from among the given options that can replace the question mark (?) in the following series.
213, 216, 225, 240, 261, ?

- Ans**
- 1. 286
 - 2. 288
 - 3. 289
 - 4. 268

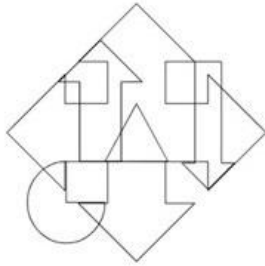
Question ID : 26433078921
Status : Answered
Chosen Option : 2

Q.16 Which of the following terms will replace the question mark (?) in the given series?
LPKT, NNMR, PLOP, ?, THSL

- Ans**
- 1. RJQN
 - 2. SJQN
 - 3. SJQO
 - 4. RIQN


Question ID : 26433080688
Status : Answered
Chosen Option : 4

Q.17 Select the option figure which is embedded in the given figure. (Rotation is NOT allowed)

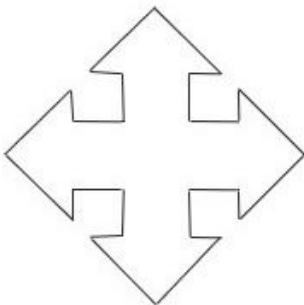


Ans

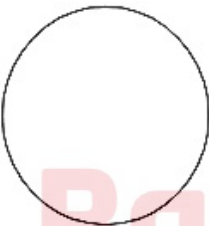
✗ 1.



✓ 2.



✗ 3.



✗ 4.



Bankers Adda
മലയാളം

Question ID : 26433085754
Status : Answered
Chosen Option : 2

Q.18 Select the correct combination of mathematical signs to replace the * signs and balance the given equation.

$$89 * 5 * 15 * 32 * 8 * 18$$

Ans

✗ 1. ÷ , + , - , × , =

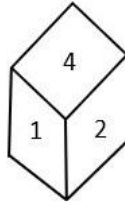
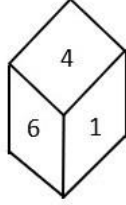
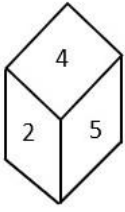
✗ 2. × , + , ÷ , - , =

✗ 3. + , - , ÷ , × , =

✓ 4. - , × , + , ÷ , =

Question ID : 26433085357
Status : Answered
Chosen Option : 4

Q.19 Three different positions of the same dice are shown. Find the number on the face opposite the face showing '4'.

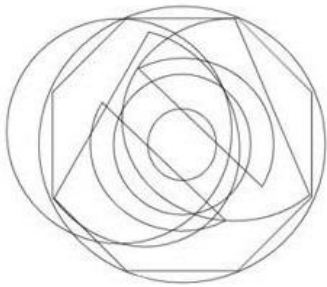


- Ans**
- 1. 2
 - 2. 3
 - 3. 5
 - 4. 1

Question ID : 26433090076
Status : Answered
Chosen Option : 2



Q.20 Select the option figure which is embedded in the given figure. (Rotation is NOT allowed)



Ans

1.



2.



3.



4.



Question ID : 26433085752
Status : Answered
Chosen Option : 1

Section : **Part-B-General Knowledge and General awareness**

Q.1 In the Indian Constitution 'the abolition of untouchability' provision is mentioned in _____.

Ans 1. Article 14

2. Article 17

3. Article 19

4. Article 32

Question ID : 26433090671
Status : Answered
Chosen Option : 2

Q.2 What is the colour of the flame when magnesium burns in the presence of oxygen?

- Ans** 1. Yellow
 2. Red
 3. White
 4. Green

Question ID : 26433087842
Status : Answered
Chosen Option : 4

Q.3 Who among the following Gupta rulers was hailed as 'Indian Napoleon' because of his military achievements?

- Ans** 1. Chandragupta I
 2. Chandragupta II
 3. Srigupta
 4. Samudragupta

Question ID : 264330115455
Status : Answered
Chosen Option : 4

Q.4 E.Krishna Iyer is associated with which form of dance?

- Ans** 1. Kathak
 2. Odissi
 3. Kuchipudi
 4. Bharatanatyam

Question ID : 26433086576
Status : Answered
Chosen Option : 4

Q.5 In India, the population census is conducted once every _____.

- Ans** 1. 5 years
 2. 12 years
 3. 10 years
 4. 15 years

Question ID : 264330116024
Status : Answered
Chosen Option : 3

Q.6 Which of the following country is not a part of the Lusofonia Games?

- Ans** 1. Portugal
 2. Germany
 3. India
 4. Macau

Question ID : 264330115941
Status : Answered
Chosen Option : 3

Q.7 Radio broadcasting started in India in 1923 by the _____.

- Ans 1. Radio Club of Bombay
 2. Lions Club of Bombay
 3. Rotary Club of Bombay
 4. Rotaract Club Of Bombay

Question ID : 264330115603
Status : Answered
Chosen Option : 1

Q.8 Which Article of the Constitution of India talks about Superintendence, direction and control of elections?

- Ans 1. Article 324
 2. Article 333
 3. Article 356
 4. Article 367

Question ID : 26433074899
Status : Answered
Chosen Option : 1

Q.9 As of November 2022, who among the following is the Lieutenant Governor of Delhi, India?

- Ans 1. Anil Bajjal
 2. Vinai Kumar Saxena
 3. Arvind Kejriwal
 4. Manoj Sinha

Question ID : 264330114937
Status : Answered
Chosen Option : 2

Q.10 While computing the national income, _____ is taken as a factor.

- Ans 1. Chemical used
 2. Electricity bill
 3. Export
 4. Road construction

Question ID : 264330115356
Status : Answered
Chosen Option : 3

Q.11 Which among the following festival marks the menstruation period of the Goddess Kamakhya in Assam?

- Ans 1. Moatsu
 2. Chapchar Kut
 3. Wangala
 4. Ambubachi Mela

Question ID : 264330115113
Status : Answered
Chosen Option : 4

Q.12 The _____ industry covers a wide range of products from transistor sets to television.

- Ans
- 1. fertilizer
 - 2. canal irrigation
 - 3. electronics
 - 4. jute processing

Question ID : 264330115401
Status : Answered
Chosen Option : 3

Q.13 Three of the following four are examples of Coelenterata phylum, and therefore form a group. Which is the one that does not belong to that group?

- Ans
- 1. Sea-pen
 - 2. Liver fluke
 - 3. Brain coral
 - 4. Sea anemone

Question ID : 264330115186
Status : Not Answered
Chosen Option : --

Q.14 _____ launched on 25th June 2015 , intends to provide housing for all in urban areas by year 2022.

- Ans
- 1. O-SMART Scheme
 - 2. Pradhan Mantri Garib Kalyan Anna Yojana
 - 3. Pradhan Mantri Awas Yojana (Urban)
 - 4. Global Housing Technology Challenge

Question ID : 264330116161
Status : Answered
Chosen Option : 3

Q.15 In which of the following places was the Indian Grand Prix-4 held in June 2021?

- Ans
- 1. Ludhiana
 - 2. Patiala
 - 3. Amritsar
 - 4. Jalandhar

Question ID : 26433072892
Status : Not Answered
Chosen Option : --

Q.16 A _____ is a barrier across flowing water that obstructs, directs or retards the flow, often creating a reservoir, lake or impoundment.

- Ans
- 1. meander
 - 2. dam
 - 3. tributary
 - 4. moat

Question ID : 26433092218
Status : Answered
Chosen Option : 2

Q.17 Who won the Sangeet Natak Akademi Award in Bharatnatyam in 2018?

- Ans 1. Madambi Subramanian Namboodiri
 2. Radha Sridhar
 3. Pasumurthy Ramalinga Sastry
 4. Akham Lakshmi Devi

Question ID : 264330115815
Status : Not Answered
Chosen Option : --

Q.18 Which Union Minister launched the India water pitch-pilot-scale start-up challenge in March 2022?

- Ans 1. Kaushal Kishore
 2. D Thara
 3. Manoj Joshi
 4. Hardeep Singh Puri

Question ID : 26433081828
Status : Answered
Chosen Option : 3

Q.19 Swami Dayanand Saraswati founded the _____, an organisation that attempted to reform Hinduism.

- Ans 1. Arya Samaj
 2. Adi Hindu Samaj
 3. Vedant Samaj
 4. Adi Dharam Samaj

Question ID : 264330103802
Status : Answered
Chosen Option : 1

Q.20 As per RBI, in India, services sector accounted for _____ of the GDP in the 1980s.

- Ans 1. 58.6 per cent
 2. 38.6 per cent
 3. 18.6 per cent
 4. 78.6 per cent

Question ID : 264330116114
Status : Answered
Chosen Option : 1

Section : Part-C-Elementary Mathematics

Q.1 The value of an article depreciated from ₹18,000 to ₹14,580 in 2 years. Find the yearly rate of depreciation in the value of the article.

- Ans 1. 10%
 2. 12%
 3. 9%
 4. 8%

Question ID : 26433082406
Status : Not Answered
Chosen Option : --

Q.2 Ramu and Mohan can separately complete a work in 10 hours and 16 hours, respectively. After working for 2 hours together, Mohan leaves the work. In how many hours will Ramu finish the remaining work?

Ans

1. $6\frac{1}{4}$

2. $6\frac{3}{4}$

3. $5\frac{3}{4}$

4. $7\frac{3}{4}$

Question ID : 26433075573

Status : Not Answered

Chosen Option : --

Q.3 A car covers a certain distance in 3 h with a speed of 108 km/h. If the speed is reduced by 27 km/h, then the time taken by the car to cover the same distance will be:

Ans

1. $2\frac{1}{2}$ h

2. 2 h

3. $3\frac{1}{2}$ h

4. 4 h

Question ID : 26433087375

Status : Answered

Chosen Option : 4

Q.4 Rahul travels a certain distance at a speed of 4 km/h and returns at a speed of 3 km/h via same route. What was his average speed for the entire journey (correct to 2 decimal places)?

Ans

1. 3.43 km/h

2. 5.92 km/h

3. 1.23 km/h

4. 2.5 km/h

Question ID : 26433065293

Status : Not Answered

Chosen Option : --

Q.5 Rohan divides his complete journey in three equal parts and covers the first part at a speed of 30 km/h, the second part at 40 km/h and the last part at 50 km/h with his car. What is the average speed (in km/h) of his car during his entire journey?

Ans

1. $38\frac{14}{47}$

2. $35\frac{14}{47}$

3. 40

4. 45

Question ID : 26433075541

Status : Not Answered

Chosen Option : --

Q.6 A can do a piece of work in 8 days and B in 24 days. They begin together, but 4 days before the completion of the work, A leaves. Find the number of days taken by A and B to complete the entire work.

- Ans
- 1. 11 days
 - 2. 8 days
 - 3. 9 days
 - 4. 7 days

Question ID : 264330116845
Status : Answered
Chosen Option : 2

Q.7 A thief started his journey at a speed of 60 km/h. After 30 minutes, police started from the same place but at a speed of 80 km/h. How much time (in hours) will the police take to catch the thief?

- Ans
- 1. $\frac{3}{2}$ hours
 - 2. $\frac{1}{2}$ hours
 - 3. $\frac{1}{3}$ hours
 - 4. $\frac{5}{2}$ hours

Question ID : 26433081044
Status : Answered
Chosen Option : 1

Q.8 What is the difference between the compound interest on Rs.5,750 for one year at 16% per annum compounded yearly and compounded half-yearly?

- Ans
- 1. Rs.49.76
 - 2. Rs.36.80
 - 3. Rs.29.50
 - 4. Rs.32.58

Question ID : 26433064989
Status : Not Answered
Chosen Option : --

Q.9

Evaluate the following expression.

$$\left[\frac{-4}{7} \div \frac{1}{12}\right] \div \left[-\frac{4}{5} \times \{(-2) - \left(-\frac{2}{7}\right)\}\right]$$

- Ans
- 1. -5
 - 2. $-\frac{1}{5}$
 - 3. $\frac{1}{5}$
 - 4. 5

Question ID : 26433090248
Status : Answered
Chosen Option : 1

Q.10 The volumes of two cones are in the ratio of 3 : 2 and their radii are in the ratio 3 : 4. The ratio of their heights is:

- Ans 1. 8:3
 2. 9:4
 3. 4:9
 4. 2:1

Question ID : 26433075481
Status : Not Answered
Chosen Option : --

Q.11 In an election, there were two candidates A and B. The total number of voters in the constituency was 90000 and 70% of the total votes were polled. If 60% of the polled votes were cast in favour of A, how many votes were received by B?

- Ans 1. 28500
 2. 25200
 3. 28700
 4. 28600

Question ID : 26433079770
Status : Not Answered
Chosen Option : --

Q.12 The curved surface area of a sphere is 1386 cm^2 . The volume of this sphere is:

- Ans 1. 4815 cm^3
 2. 4851 cm^3
 3. 2425.5 cm^3
 4. 1617 cm^3

Question ID : 26433087406
Status : Not Answered
Chosen Option : --

Q.13 The ratio of milk and water in two containers of 20 litres and 36 litres are in the ratio 3 : 7 and 7 : 5, respectively. What will be the ratio of milk and water if the two containers are mixed together?

- Ans 1. 9 : 13
 2. 27 : 29
 3. 21 : 23
 4. 21 : 25

Question ID : 26433091899
Status : Not Answered
Chosen Option : --

Q.14 The square of 28 is divided by the largest number that can exactly divide both 42 and 56. What is the result?

- Ans 1. 28
 2. 14
 3. 42
 4. 56

Question ID : 264330116654
Status : Answered
Chosen Option : 1

Q.15 A table whose marked price ₹300 is sold at two successive discounts of 20% and 10%. If in addition, a discount of 5% is offered on cash payment, then the cash price for the table is:

- Ans
- 1. ₹210.25
 - 2. ₹216.50
 - 3. ₹240.25
 - 4. ₹205.20

Question ID : 26433082095
Status : Not Answered
Chosen Option : --

Q.16 The price of petrol is raised to Rs.96.5 per litre from Rs.92 per litre. What is the percentage increase in price of petrol?

- Ans
- 1. 4.5%
 - 2. 4.7%
 - 3. 4.9%
 - 4. 5.1%

Question ID : 26433071246
Status : Not Answered
Chosen Option : --

Q.17 The third proportional to 24 and 36 is:

- Ans
- 1. 45
 - 2. 64
 - 3. 54
 - 4. 46

Question ID : 26433074993
Status : Not Answered
Chosen Option : --

Q.18 Under a discount scheme, after allowing a discount of 20%, there is still a gain of 10%. The marked price is what percentage more than the cost price?

- Ans
- 1. 39%
 - 2. 37.5%
 - 3. 40%
 - 4. 35.2%

Question ID : 26433083042
Status : Not Answered
Chosen Option : --

Q.19 Harshi bought a new sweatshirt at the store, when they were giving a 40 percent discount. If the marked price of the sweatshirt was Rs. 2999, then how much did Harshi pay with the discount?

- Ans
- 1. Rs. 2099.20
 - 2. Rs. 1799.40
 - 3. Rs. 2399.50
 - 4. Rs. 1899.80

Question ID : 264330116730
Status : Not Answered
Chosen Option : --

Q.20 A man sold two chairs for Rs.475 each, gaining 25% on one and losing 20% on the other. Had he sold the two chairs for Rs.575 each, what would have been his gain/loss percentage (rounded off to the nearest integer)?

- Ans
- 1. 45% gain
 - 2. 18% gain
 - 3. 41% gain
 - 4. 25% loss

Question ID : 26433071284
Status : Not Answered
Chosen Option : --

Section : Part-D-English

Q.1 Select the most appropriate option to fill in the blank.

We would _____ to travel by train rather than bus due to the poor road conditions in the village.

- Ans
- 1. prefer
 - 2. assure
 - 3. make it
 - 4. drop

Question ID : 26433091877
Status : Answered
Chosen Option : 1

Q.2 Select the most appropriate option that can substitute the underlined segment in the given sentence.

The participants are rehearse their roles.

- Ans
- 1. are rehearsed
 - 2. has been rehearsing
 - 3. have rehearse
 - 4. are rehearsing

Question ID : 26433091869
Status : Answered
Chosen Option : 4

Q.3 Select the option with the correct spelling to replace the underlined word in the given sentence.

She hit him in a moment of abomination.

- Ans
- 1. aberation
 - 2. abberation
 - 3. aberattion
 - 4. aberration

Question ID : 26433094408
Status : Answered
Chosen Option : 1

Q.4 Select the most appropriate **ANTONYM** of the given word.

Anxious

- Ans 1. Considerate
 2. Unconcerned
 3. Stealthy
 4. Haughty

Question ID : 26433074380
Status : Answered
Chosen Option : 3

Q.5 Identify the correctly spelt sentence.

- Ans 1. My grandfather planted couliflower in the garden.
 2. My grandfather planted kauliflower in the garden.
 3. My grandfather planted cauleflower in the garden.
 4. My grandfather planted cauliflower in the garden.

Question ID : 26433072831
Status : Answered
Chosen Option : 4

Q.6 Select the most appropriate synonym of the underlined word.

Music is a therapy for everyone – plants, birds, animals and human-beings – to flourish and rejuvenate.

- Ans 1. modify
 2. prosper
 3. refreshen
 4. fortify

Question ID : 26433089100
Status : Answered
Chosen Option : 3

Q.7 Select the most appropriate meaning of the given idiom.

After one's own heart

- Ans 1. Having a face as one's own
 2. Having likes and dislikes dissimilar to one's own
 3. Having likes and dislikes far to one's own
 4. Having likes and dislikes similar to one's own

Question ID : 26433072278
Status : Answered
Chosen Option : 4

Q.8 The following sentence has been divided into parts. One of them may contain an error. Select the part that contains the error from the given options. If you don't find any error, mark 'No error' as your answer.
Our soldiers have being / making a clean sweep of the / sheep and poultry on the route.

- Ans**
- 1. No error
 - 2. sheep and poultry on the route
 - 3. Our soldiers have being
 - 4. making a clean sweep of the

Question ID : 264330114510
Status : **Answered**
Chosen Option : 4

Q.9 Select the most appropriate ANTONYM of the italicised word in the given sentence.

It is *absurd* to argue about this.

- Ans**
- 1. facetious
 - 2. fundamental
 - 3. reasonable
 - 4. amazing

Question ID : 26433096209
Status : **Answered**
Chosen Option : 3

Q.10 Select the most appropriate option to fill in the blank.

_____ men command respect.

- Ans**
- 1. Holy
 - 2. Holey
 - 3. Holly
 - 4. Wholly

Question ID : 26433073934
Status : **Answered**
Chosen Option : 1

Q.11 Select the most appropriate synonym of the given word.

Sumptuous

- Ans**
- 1. Mammoth
 - 2. Humble
 - 3. Minuscule
 - 4. Lavish

Question ID : 26433073980
Status : **Not Answered**
Chosen Option : --

Q.12 Select the most appropriate idiom to substitute the underlined group of words in the given sentence.

Once in a year, the management of the institute surveys the whole situation.

- Ans**
- 1. take stock of
 - 2. perplexed with
 - 3. makes a mark
 - 4. comes to the front

Question ID : 26433073878
Status : **Answered**
Chosen Option : 3

Q.13 Select the correct pair of words for the blanks in the given sentence.

My cousin likes _____ root and _____ around the bush is one of the idioms in English.

- Ans**
- 1. beat; beat
 - 2. beat; beet
 - 3. beet; beat
 - 4. beet; beet

Question ID : 26433060543
Status : **Not Answered**
Chosen Option : --

Q.14 Select the most appropriate homonym to fill in the blank.
He confessed about his affairs as the _____ made him sleepless.

- Ans**
- 1. guilt
 - 2. gilled
 - 3. gild
 - 4. guild

Question ID : 26433058525
Status : **Not Answered**
Chosen Option : --

Q.15 Select the most appropriate option that can substitute the underlined segment in the given sentence.

The students were boring by the lecture delivered on environmental issues.

- Ans**
- 1. The students were bores
 - 2. The students bored
 - 3. The students were barring
 - 4. The students were bored

Question ID : 26433091771
Status : **Answered**
Chosen Option : 2

Comprehension:

In the following passage, some words have been deleted. Read the passage carefully and select the most appropriate option to fill in each blank.

Children especially (1)_____ avoid such foods or try to reduce intake and instead, eat healthy food for (2)_____ growth. Schools can (3)_____ the quality of the food being sold in the canteens and also ensure that the children bring wholesome nutrition food (4)_____ home. (5)_____ should be appointed to check the calories content and food value of food served in the canteens and setting definite tiffin patterns.

SubQuestion No : 16

Q.16 Select the most appropriate option to fill in blank number 1.

- Ans** 1. might
 2. will
 3. should
 4. shall

Question ID : 26433089046
Status : Answered
Chosen Option : 3

Comprehension:

In the following passage, some words have been deleted. Read the passage carefully and select the most appropriate option to fill in each blank.

Children especially (1)_____ avoid such foods or try to reduce intake and instead, eat healthy food for (2)_____ growth. Schools can (3)_____ the quality of the food being sold in the canteens and also ensure that the children bring wholesome nutrition food (4)_____ home. (5)_____ should be appointed to check the calories content and food value of food served in the canteens and setting definite tiffin patterns.

SubQuestion No : 17

Q.17 Select the most appropriate option to fill in blank number 2.

- Ans** 1. elegant
 2. proper
 3. interesting
 4. awkward

Question ID : 26433089047
Status : Answered
Chosen Option : 2

Comprehension:

In the following passage, some words have been deleted. Read the passage carefully and select the most appropriate option to fill in each blank.

Children especially (1)_____ avoid such foods or try to reduce intake and instead, eat healthy food for (2)_____ growth. Schools can (3)_____ the quality of the food being sold in the canteens and also ensure that the children bring wholesome nutrition food (4)_____ home. (5)_____ should be appointed to check the calories content and food value of food served in the canteens and setting definite tiffin patterns.

SubQuestion No : 18

Q.18 Select the most appropriate option to fill in blank number 3.

- Ans** 1. allow
 2. show
 3. proclaim
 4. monitor

Question ID : 26433089048
Status : Answered
Chosen Option : 4

Comprehension:

In the following passage, some words have been deleted. Read the passage carefully and select the most appropriate option to fill in each blank.

Children especially (1)_____ avoid such foods or try to reduce intake and instead, eat healthy food for (2)_____ growth. Schools can (3)_____ the quality of the food being sold in the canteens and also ensure that the children bring wholesome nutrition food (4)_____ home. (5)_____ should be appointed to check the calories content and food value of food served in the canteens and setting definite tiffin patterns.

SubQuestion No : 19

Q.19 Select the most appropriate option to fill in blank number 4.

- Ans** 1. through
 2. with
 3. from
 4. in

Question ID : 26433089049
Status : Answered
Chosen Option : 3

Comprehension:

In the following passage, some words have been deleted. Read the passage carefully and select the most appropriate option to fill in each blank.

Children especially (1)_____ avoid such foods or try to reduce intake and instead, eat healthy food for (2)_____ growth. Schools can (3)_____ the quality of the food being sold in the canteens and also ensure that the children bring wholesome nutrition food (4)_____ home. (5)_____ should be appointed to check the calories content and food value of food served in the canteens and setting definite tiffin patterns.

SubQuestion No : 20

Q.20 Select the most appropriate option to fill in blank number 5.

- Ans** 1. Technicians
 2. Dieticians
 3. Paediatricians
 4. Opticians

Question ID : 26433089050
Status : Answered
Chosen Option : 2

Section : Part-D-Hindi

Q.1 'नव्या ने सुमति की बहुत भर्त्सना की'
उक्त वाक्य में प्रयुक्त 'भर्त्सना' के स्थान पर उसके विलोम शब्द का प्रयोग निम्न में से किस वाक्य में किया गया है?

- Ans** 1. नव्या ने सुमति की बहुत बुराई की।
 2. नव्या ने सुमति की बहुत आलोचना की।
 3. नव्या ने सुमति की बहुत निंदा की।
 4. नव्या ने सुमति की बहुत प्रशंसा की।

Question ID : 26433067027
Status : Not Answered
Chosen Option : --

Q.2 वाक्य में रेखांकित शब्द को दिए गए शब्दों में से उचित शब्द से बदलें।
भरत को कैकयी की करनी पर करूणा हुई।

- Ans 1. क्षोभ
 2. दया
 3. दुःख
 4. पश्चात्ताप

Question ID : 26433062873
Status : Not Answered
Chosen Option : --

Q.3 निम्नलिखित वाक्यांश के लिय उपयुक्त सार्थक शब्द है-
बिना स्वार्थ के कार्य करने वाला

- Ans 1. हितेषी
 2. सहायक
 3. निस्वार्थी
 4. स्वार्थी

Question ID : 26433065765
Status : Not Answered
Chosen Option : --

Q.4 निम्नलिखित वाक्यों में रिक्त स्थान की पूर्ति उचित एकार्थी शब्द-युग्म से करें-
साहसी व्यक्ति _____ हो जाता है। कछुआ _____-चर जीव है।

- Ans 1. भय सहित- केवल एक
 2. जिसमें भय हो- जिसमें भय ना हो
 3. साथ साथ- ऊपर
 4. अभय-उभय

Question ID : 26433091326
Status : Not Answered
Chosen Option : --

Q.5 'लेने के देने पड़ना' मुहावरे का उचित अर्थ है-

- Ans 1. लाभ के बदले हानि
 2. कुछ न देना
 3. बहुत अधिक लाभ होना
 4. व्यापार करना

Question ID : 26433065879
Status : Not Answered
Chosen Option : --

Q.6 वर्तनी की दृष्टि से दिए गए वाक्य के अशुद्ध भाग का चयन कीजिए-
पूर्ण स्वस्थ के लिए शुद्ध आहार-विहार आवश्यक है।

- Ans 1. आहार-विहार
 2. पूर्ण स्वस्थ
 3. के लिए शुद्ध
 4. आवश्यक है।

Question ID : 26433062885
Status : Not Answered
Chosen Option : --

Q.7 निम्न में से कौन-सा शब्द 'हाथ' शब्द का पर्यायवाची शब्द नहीं है?

- Ans
- 1. बाहु
 - 2. पाणि
 - 3. कर
 - 4. दन्त

Question ID : 26433067083
Status : Not Answered
Chosen Option : --

Q.8 निम्नलिखित में से शुद्ध वाक्य का चयन कीजिए-

- Ans
- 1. आप कब्बे आए?
 - 2. आप कब आए?
 - 3. आप कब आया?
 - 4. आप कब आयो?

Question ID : 26433091312
Status : Not Answered
Chosen Option : --

Q.9 'हिमालय की चोटियाँ तो _____ करती हैं।' वाक्य में रिक्त स्थान की पूर्ति उचित मुहावरे द्वारा कीजिए।

- Ans
- 1. गगनचुम्बी हैं
 - 2. आसमान चूमती है
 - 3. आसमान से बातें करती हैं
 - 4. राई का पहाड़ है

Question ID : 26433062610
Status : Not Answered
Chosen Option : --

Q.10 'वह धन जो आधिकारिक रूप से राज्य को मिलता हो' - वाक्यांश के लिए एक शब्द होगा

- Ans
- 1. कर
 - 2. राजस्व
 - 3. चुंगी
 - 4. राजधन

Question ID : 26433065729
Status : Not Answered
Chosen Option : --

Q.11 निम्नलिखित विकल्पों में से किस एक वाक्य में संख्यावाचक विशेषण का उचित प्रयोग नहीं किया गया है?

- Ans
- 1. नव्या के काले बाल हैं।
 - 2. दुर्घटना में पहलवान को अधिक घाव हो गए हैं।
 - 3. हमारी बगिया में कुछ अधिक वृक्ष हो गए हैं।
 - 4. महात्मा गाँधी बहुत थोड़े कपड़े पहनते थे।

Question ID : 26433062966
Status : Not Answered
Chosen Option : --

Q.12 किसी पदार्थ या राज्य का दूसरे पदार्थ या राज्य में मिल जाना - वाक्यांश के लिए एक शब्द होगा-

- Ans
- 1. संगम
 - 2. सहयोग
 - 3. विलय
 - 4. एकीकरण

Question ID : 26433065727
Status : Not Answered
Chosen Option : --

Q.13 निम्न में से कौन-सा शब्द 'कुबेर' शब्द का पर्यायवाची शब्द नहीं है?

- Ans
- 1. धनपति
 - 2. किन्नरपति
 - 3. मुनि
 - 4. यक्ष

Question ID : 26433067085
Status : Not Answered
Chosen Option : --

Q.14 निम्नलिखित विकल्पों में से कौन सा एक वाक्य प्रश्नवाचक सर्वनाम से संबंधित नहीं है?

- Ans
- 1. यह मूर्खता किसने की है?
 - 2. संसार का संचालन और नियमन कौन करता है?
 - 3. यह गाड़ी किसकी है?
 - 4. किसी ने जोर से चीत्कार की?

Question ID : 26433091239
Status : Not Answered
Chosen Option : --

Q.15 दिए गये वाक्य के अशुद्ध भाग का चयन कीजिए।
एक मेरे प्रिय मेधावी छात्र ने अच्छा नाम कमाया।

- Ans
- 1. प्रिय मेधावी
 - 2. छात्र ने अच्छा
 - 3. नाम कमाया।
 - 4. एक मेरे

Question ID : 26433085086
Status : Not Answered
Chosen Option : --

Comprehension:

निम्नलिखित गद्यांश में कुछ शब्दों को हटा दिया गया है। दिए गए विकल्पों की सहायता से रिक्त स्थानों की पूर्ति कीजिए। प्रत्येक संख्या के लिए सबसे उपयुक्त विकल्प का चयन करें।

आज का जीवन 1. _____ से भरा है। महत्त्वपूर्ण और अनिवार्य 2. _____ को पूरा करने में अत्यधिक संघर्ष करना पड़ता है। महँगाई बहुत 3. _____ गई है। इसके साथ ही बच्चों से लेकर 4. _____ तक की आवश्यकताएँ इतनी अधिक हो गई हैं कि परिवार के प्रत्येक सदस्य को धनोपार्जन के लिए घर से बाहर जाना पड़ता है। घर और अपनों के लिए समय ही नहीं होता। जीवन संघर्ष का 5. _____ बन गया है।

SubQuestion No : 16

Q.16 रिक्त स्थान 1 की पूर्ति के लिए सबसे उपयुक्त विकल्प का चयन कीजिए।

- Ans**
- 1. कार्य
 - 2. सदस्यों
 - 3. खेल-कूद
 - 4. भागदौड़

Question ID : 264330111119
Status : Not Answered
Chosen Option : --

Comprehension:

निम्नलिखित गद्यांश में कुछ शब्दों को हटा दिया गया है। दिए गए विकल्पों की सहायता से रिक्त स्थानों की पूर्ति कीजिए। प्रत्येक संख्या के लिए सबसे उपयुक्त विकल्प का चयन करें।

आज का जीवन 1. _____ से भरा है। महत्त्वपूर्ण और अनिवार्य 2. _____ को पूरा करने में अत्यधिक संघर्ष करना पड़ता है। महँगाई बहुत 3. _____ गई है। इसके साथ ही बच्चों से लेकर 4. _____ तक की आवश्यकताएँ इतनी अधिक हो गई हैं कि परिवार के प्रत्येक सदस्य को धनोपार्जन के लिए घर से बाहर जाना पड़ता है। घर और अपनों के लिए समय ही नहीं होता। जीवन संघर्ष का 5. _____ बन गया है।

SubQuestion No : 17

Q.17 रिक्त स्थान 2 की पूर्ति के लिए सबसे उपयुक्त विकल्प का चयन कीजिए।

- Ans**
- 1. आवश्यकताओं
 - 2. अवसर
 - 3. भावना
 - 4. घटना

Question ID : 264330111120
Status : Not Answered
Chosen Option : --

Comprehension:

निम्नलिखित गद्यांश में कुछ शब्दों को हटा दिया गया है। दिए गए विकल्पों की सहायता से रिक्त स्थानों की पूर्ति कीजिए। प्रत्येक संख्या के लिए सबसे उपयुक्त विकल्प का चयन करें।

आज का जीवन 1. _____ से भरा है। महत्त्वपूर्ण और अनिवार्य 2. _____ को पूरा करने में अत्यधिक संघर्ष करना पड़ता है। महँगाई बहुत 3. _____ गई है। इसके साथ ही बच्चों से लेकर 4. _____ तक की आवश्यकताएँ इतनी अधिक हो गई हैं कि परिवार के प्रत्येक सदस्य को धनोपार्जन के लिए घर से बाहर जाना पड़ता है। घर और अपनों के लिए समय ही नहीं होता। जीवन संघर्ष का 5. _____ बन गया है।

SubQuestion No : 18

Q.18 रिक्त स्थान 3 की पूर्ति के लिए सबसे उपयुक्त विकल्प का चयन कीजिए।

- Ans**
- 1. नीचे
 - 2. बन
 - 3. कम
 - 4. बढ़

Question ID : 264330111121
Status : Not Answered
Chosen Option : --

Comprehension:

निम्नलिखित गद्यांश में कुछ शब्दों को हटा दिया गया है। दिए गए विकल्पों की सहायता से रिक्त स्थानों की पूर्ति कीजिए। प्रत्येक संख्या के लिए सबसे उपयुक्त विकल्प का चयन करें।

आज का जीवन 1. _____ से भरा है। महत्त्वपूर्ण और अनिवार्य 2. _____ को पूरा करने में अत्यधिक संघर्ष करना पड़ता है। महँगाई बहुत 3. _____ गई है। इसके साथ ही बच्चों से लेकर 4. _____ तक की आवश्यकताएँ इतनी अधिक हो गई हैं कि परिवार के प्रत्येक सदस्य को धनोपार्जन के लिए घर से बाहर जाना पड़ता है। घर और अपनों के लिए समय ही नहीं होता। जीवन संघर्ष का 5. _____ बन गया है।

SubQuestion No : 19

Q.19 रिक्त स्थान 4 की पूर्ति के लिए सबसे उपयुक्त विकल्प का चयन कीजिए।

- Ans 1. बूढ़ों
 2. सरकार
 3. बाहर
 4. किसी की भी

Question ID : 264330111122
Status : Not Answered
Chosen Option : --

Comprehension:

निम्नलिखित गद्यांश में कुछ शब्दों को हटा दिया गया है। दिए गए विकल्पों की सहायता से रिक्त स्थानों की पूर्ति कीजिए। प्रत्येक संख्या के लिए सबसे उपयुक्त विकल्प का चयन करें।

आज का जीवन 1. _____ से भरा है। महत्त्वपूर्ण और अनिवार्य 2. _____ को पूरा करने में अत्यधिक संघर्ष करना पड़ता है। महँगाई बहुत 3. _____ गई है। इसके साथ ही बच्चों से लेकर 4. _____ तक की आवश्यकताएँ इतनी अधिक हो गई हैं कि परिवार के प्रत्येक सदस्य को धनोपार्जन के लिए घर से बाहर जाना पड़ता है। घर और अपनों के लिए समय ही नहीं होता। जीवन संघर्ष का 5. _____ बन गया है।

SubQuestion No : 20

Q.20 रिक्त स्थान 5 की पूर्ति के लिए सबसे उपयुक्त विकल्प का चयन कीजिए।

- Ans 1. प्रकार
 2. सहायक
 3. कारण
 4. पर्याय

Question ID : 264330111123
Status : Not Answered
Chosen Option : --

Constable GD in CAPFs SSF Rifleman GD in Assam Rifles and Sepoy in NCB Examination 2022

| | |
|----------------|----------------------------------|
| Roll Number | |
| Candidate Name | |
| Venue Name | iON Digital Zone iDZ 1 Sector 62 |
| Exam Date | 10/01/2023 |
| Exam Time | 5:15 PM - 6:15 PM |
| Subject | Constable GD Examination 2022 |

Section : **Part-A-General Intelligence and Reasoning**

Q.1 Select the option that is related to the third word in the same way as the second word is related to the first word. (The words must be considered as meaningful English words and must not be related to each other based on the number of letters/number of consonants/vowels in the word.)
Meghalaya : Shillong :: Kerala : ?

- Ans
- 1. Panaji
 - 2. Chennai
 - 3. Thiruvananthapuram
 - 4. Bengaluru

Question ID : 26433067371
Status : Answered
Chosen Option : 3

Q.2 Select the option that is related to the fifth number in the same way as the second number is related to the first number and the fourth number is related to the third number.
48 : 5 :: 30 : 3 :: 57 : ?

- Ans
- 1. 2
 - 2. 4
 - 3. 6
 - 4. 7

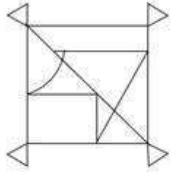
Question ID : 26433069418
Status : Answered
Chosen Option : 3

Q.3 Which of the following numbers will replace the question mark (?) in the given series?
23, 27, 35, ?, 63, 83, 107

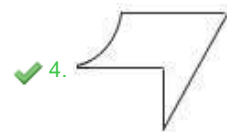
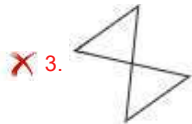
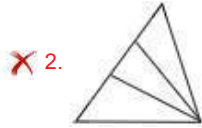
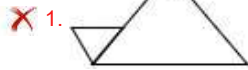
- Ans
- 1. 47
 - 2. 43
 - 3. 55
 - 4. 39

Question ID : 26433068090
Status : Answered
Chosen Option : 1

Q.4 Select the option figure which is embedded in the given figure. (Rotation is NOT allowed)



Ans



Question ID : 26433069343
Status : Answered
Chosen Option : 4

Q.5 Which two signs should be interchanged to make the given equation correct?
 $561 \div 11 \times 22 + 6 - 25 = 158$

Ans ✓ 1. + and ×

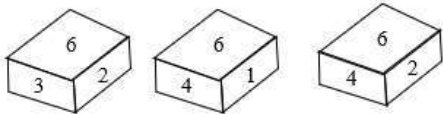
✗ 2. ÷ and ×

✗ 3. ÷ and +

✗ 4. + and -

Question ID : 26433082742
Status : Answered
Chosen Option : 1

Q.6 Three different positions of the same dice are shown. Find the number on the face opposite the face showing '6'.



- Ans
- 1. 4
 - 2. 1
 - 3. 3
 - 4. 5

Question ID : 26433090066
Status : Answered
Chosen Option : 4

Q.7 In a certain code language, 'STATION' is written as 'UVYVGMP' and 'TRIUMPH' is written as 'VTGSORJ'. How will 'HOLIDAY' be written in that language?

- Ans
- 1. JMNGFXW
 - 2. JMNGBXW
 - 3. JMNGFCW
 - 4. JMNGFYA

Question ID : 26433081759
Status : Answered
Chosen Option : 4

Q.8 In a certain code language, 'TABLE' is written as '£@6#%', 'LARK' is written as '#@28' and 'BUCKET' is written as '6\$+8%£'. How will 'CLARET' be written in that language?

- Ans
- 1. +#@2%£
 - 2. +#26%\$
 - 3. 8#2%6+
 - 4. 8#@6%£

Question ID : 26433069608
Status : Answered
Chosen Option : 1

Q.9 Which letter-cluster will replace the question mark (?) to complete the given series?
CTUJ, EVWL, ?, IZAP, KBCR

- Ans
- 1. GXYN
 - 2. FXYO
 - 3. FXYN
 - 4. GXYO

Question ID : 26433067940
Status : Answered
Chosen Option : 1

Q.10 Which of the following numbers will replace the question mark (?) in the given series?
115, 102, 107, 94, 99, ?

- Ans
- 1. 92
 - 2. 84
 - 3. 96
 - 4. 86

Question ID : 26433076749
Status : Answered
Chosen Option : 4

Q.11 Select the option that is related to the fifth letter-cluster in the same way as the second letter-cluster is related to the first letter-cluster and the fourth letter-cluster is related to the third letter-cluster.

PENALTY : QFOBMUZ :: OFFENSE : PGGFOTF :: NERVOUS : ?

- Ans
- 1. VOUSNER
 - 2. SUOVREN
 - 3. RENVOUS
 - 4. OFSWPVT

Question ID : 26433069637
Status : Answered
Chosen Option : 4

Q.12 There are 7 people sitting around a circular table facing towards the centre - A, B, C, D, E, F, and G. A is sitting to the immediate right of C and immediate left of D. G is sitting to the immediate left of C and immediate right of F. E is sitting to the immediate left of F and immediate right of B. B is sitting second right of A. Who is the immediate neighbour of A and B?

- Ans
- 1. G
 - 2. F
 - 3. E
 - 4. D

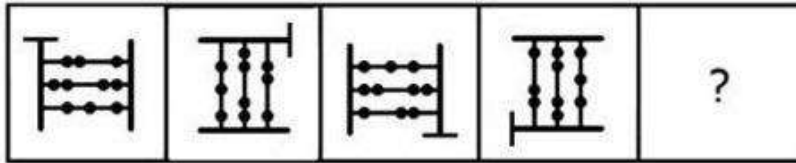
Question ID : 26433074607
Status : Answered
Chosen Option : 4

Q.13 Which of the following terms will replace the question mark (?) in the given series?
MQEV, ?, QOIT, SNKS, UMMR

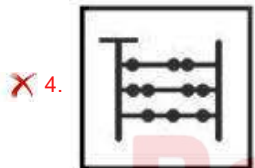
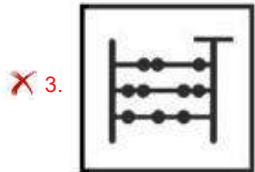
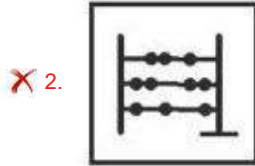
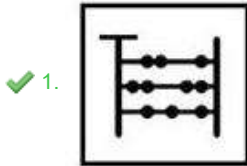
- Ans
- 1. OPHU
 - 2. NPGU
 - 3. OPGU
 - 4. PPHV

Question ID : 26433068308
Status : Answered
Chosen Option : 3

Q.14 Select the figure that will come next in the following series.



Ans



Question ID : 26433078968


Status : Answered

Chosen Option : 1

Bankers Adda
മലയാളം

Q.15 Select the correct mirror image of the given figure when the mirror is placed at MN as shown below.

PsyCHoLoGy



Ans

✓ 1. 

✗ 2. 

✗ 3. 

✗ 4. 

Question ID : 26433085562

Status : Answered

Chosen Option : 1

Q.16 Seven people A, B, C, D, E, F, and G are sitting in a straight row facing the North. A is sitting in the centre of the row. G and E are sitting at the ends of the row. B is sitting to the immediate left of A. F is sitting to the immediate right of G. D is sitting to the immediate left of E. C is sitting to the second left of E. Who is sitting between G and B?

Ans ✗ 1. A

✗ 2. C

✓ 3. F

✗ 4. D

Question ID : 26433074622

Status : Answered

Chosen Option : 3

Q.17 Which option represents the correct order of the given words as they would appear in the English dictionary?

1 inside

2 inertia

3 instruction

4 insight

5 individual

Ans ✗ 1. 5,3,1,2,4

✓ 2. 5,2,1,4,3

✗ 3. 5,1,2,3,4

✗ 4. 5,1,3,4,2

Question ID : 26433069299

Status : Answered

Chosen Option : 2

Q.18 A @ B means 'A is the sister of B'.
A & B means 'A is the brother of B'.
A # B means 'A is the wife of B'.
A ^ B means 'A is the mother of B'.
A + B means 'A is the father of B'.
If $X + T \wedge M \# G \& C \wedge K @ H \wedge Q$, then which of the following statements is NOT correct?

- Ans
- 1. G is the son-in-law of T.
 - 2. G is the father of K.
 - 3. C is the mother of H.
 - 4. X is the maternal grandfather of M.

Question ID : 26433068952
Status : Answered
Chosen Option : 2

Q.19 Three statements are given followed by three conclusions. Assuming the statements to be true, even if they seem to be at variance with commonly known facts, decide which of the conclusions logically follow(s) from the statements.

Statements:

Some computers are phones.
All phones are calculators.
All calculators are i-pads.

Conclusions:

1. Some i-pads are computers.
2. All calculators are phones.
3. Some i-pads are phones.

- Ans
- 1. All conclusions follow.
 - 2. Only conclusions 1 and 2 follow.
 - 3. Only conclusions 2 and 3 follow.
 - 4. Only conclusions 1 and 3 follow.

Question ID : 26433089424
Status : Answered
Chosen Option : 4

Q.20 Which two signs should be interchanged to make the below equation mathematically correct?

$$48 - 96 \times 4 \div 3 + 58 = 34$$

- Ans
- 1. + and -
 - 2. \times and +
 - 3. - and \div
 - 4. \div and \times

Question ID : 264330117499
Status : Answered
Chosen Option : 4

Q.1 Which of the following Articles of the Constitution of India deals with the state executive?

- Ans**
- 1. Articles 134-143
 - 2. Articles 123-132
 - 3. Articles 153-167
 - 4. Articles 145-150

Question ID : **26433086852**
Status : **Answered**
Chosen Option : **3**

Q.2 The 'Method of Election of the president' in the Indian Constitution has been borrowed from the _____ constitution.

- Ans**
- 1. Irish
 - 2. South African
 - 3. German
 - 4. United States of America

Question ID : **26433064813**
Status : **Not Answered**
Chosen Option : **--**

Q.3 Mohiniyattam is a solo classical dance form related to which of the following states?

- Ans**
- 1. Kerala
 - 2. Uttar Pradesh
 - 3. Karnataka
 - 4. Bihar

Question ID : **26433071658**
Status : **Answered**
Chosen Option : **1**

Q.4 Which Indian origin Sikh has been given New South Wales Australian of the Year award 2023 for supporting the community affected by floods, bushfires, drought and Covid-19?

- Ans**
- 1. Navjit Kaur Brar
 - 2. Amar Singh
 - 3. Jatinder Singh
 - 4. Kamaljit Arora

Question ID : **264330114989**
Status : **Not Answered**
Chosen Option : **--**

Q.5 In India, in which year was the National Food for Work Programme scheme launched?

- Ans
- 1. 2005
 - 2. 2000
 - 3. 2004
 - 4. 2003

Question ID : 264330116078
Status : Not Answered
Chosen Option : --

Q.6 Makar Sankranti is celebrated as Pedda Panduga in which of the following states?

- Ans
- 1. Andhra Pradesh
 - 2. Tamil Nadu
 - 3. Karnataka
 - 4. Kerala

Question ID : 264330115106
Status : Answered
Chosen Option : 2

Q.7 Pick the odd one out (Hint: fiber crops)

- Ans
- 1. rubber
 - 2. cotton
 - 3. hemp
 - 4. jute

Question ID : 264330115533
Status : Answered
Chosen Option : 3

Q.8 The mode of nutrition in which organisms take in nutrients from dead and decaying matter is called _____ nutrition.

- Ans
- 1. Monotrophic
 - 2. Saprotrophic
 - 3. Autotrophic
 - 4. Heterotrophic

Question ID : 264330115254
Status : Answered
Chosen Option : 3

Q.9 'Mother of Mohiniyattam' is a docu-fiction based on _____.

- Ans
- 1. Shovana Narayan
 - 2. Kalamandalam Kallyanikutty Amma
 - 3. Mahaboob Subhani
 - 4. Anuradha Pandey

Question ID : 264330115878
Status : Answered
Chosen Option : 2

Q.10 Budget documents classify total expenditure into _____.

- Ans 1. services and non- goods services
 2. goods and incomes
 3. part and whole expenditure
 4. plan and non-plan expenditure

Question ID : 264330115286
Status : Answered
Chosen Option : 4

Q.11 Which of the following was the main demand of the peasant movement of Kheda?

- Ans 1. Free irrigation facility to be provided
 2. Plantation system to be dropped
 3. Revenue collection be relaxed
 4. Hybrid seeds to be provided

Question ID : 26433089883
Status : Not Answered
Chosen Option : --

Q.12 In India, during October-November, with the apparent movement of the sun towards the south, the _____ over the northern plains becomes weaker.

- Ans 1. Upper level trough
 2. Monsoon trough
 3. Lee trough
 4. Inverted trough

Question ID : 264330115988
Status : Answered
Chosen Option : 1

Q.13 Techniques of making silk were first invented in China around _____ years ago.

- Ans 1. 20000
 2. 15000
 3. 7000
 4. 30000

Question ID : 26433090573
Status : Not Answered
Chosen Option : --

Q.14 Which Union Minister of Government of India inaugurated the Tech Conclave 2022 in March?

- Ans
- 1. Amit Shah
 - 2. Smriti Irani
 - 3. Rajnath Singh
 - 4. Ashwini Vaishnaw

Question ID : 264330114930
Status : Answered
Chosen Option : 1

Q.15 Which of the following player was the highest scorer in the final match of cricket world cup 1983?

- Ans
- 1. Krishnamachari Srikkanth
 - 2. Mohinder Amarnath
 - 3. Sunil Gavaskar
 - 4. Kapil Dev

Question ID : 264330116295
Status : Answered
Chosen Option : 4

Q.16 Which country hosted the Asian Athletics Championship in 2019?

- Ans
- 1. South Korea
 - 2. Jordan
 - 3. Philippines
 - 4. Qatar

Question ID : 264330115925
Status : Not Answered
Chosen Option : --

Q.17 Lime stone is the raw material of _____, among the given industries.

- Ans
- 1. plastic industry
 - 2. Furniture industry
 - 3. cement industry
 - 4. electronic industry

Question ID : 264330115394
Status : Answered
Chosen Option : 3

Q.18 The Supreme Court of India passed a judgment in _____ in which it declared the practice of Triple Talaq as unconstitutional and the practice of the same be void.

- Ans 1. 2018
 2. 2014
 3. 2017
 4. 2013

Question ID : 264330116224
Status : Not Answered
Chosen Option : --

Q.19 At independence, about _____ percent of the India's population was dependent on agriculture.

- Ans 1. 90
 2. 50
 3. 100
 4. 75

Question ID : 264330116158
Status : Answered
Chosen Option : 1

Q.20 H_2SO_4 is the chemical formula for _____.

- Ans 1. Oil of Vitriol
 2. Green Vitriol
 3. Muriatic Acid
 4. Blue Vitriol

Question ID : 264330115165
Status : Answered
Chosen Option : 3

Section : Part-C-Elementary Mathematics

Q.1 A batsman makes a score of 97 runs in 15th inning and thus increases his average by 5. Find his average after 15th inning.

- Ans 1. 15
 2. 82
 3. 27
 4. 92

Question ID : 26433082642
Status : Answered
Chosen Option : 1

Q.2 The population of a town increased from 145000 to 200000 in a decade. What will be the simple growth rate percent of population per annum?

- Ans
- 1. 4.856 percent
 - 2. 5.789 percent
 - 3. 3.793 percent
 - 4. 2.165 percent

Question ID : 264330116828
Status : Answered
Chosen Option : 3

Q.3 A can paint seven chairs in an hour and B can paint four chairs in an hour. Determine how much time they will require to paint 55 chairs when they work together.

- Ans
- 1. 7 hours
 - 2. 5 hours
 - 3. 6 hours
 - 4. 4 hours

Question ID : 26433074311
Status : Answered
Chosen Option : 2

Q.4 A sum of Rs.1,875 at 4% per annum increased to Rs.2,028 in certain time. If interest is compounded yearly, then what is the time period?

- Ans
- 1. 2.5 years
 - 2. 3 years
 - 3. 3.5 years
 - 4. 2 years

Question ID : 26433075677
Status : Answered
Chosen Option : 4

Q.5 37 is what percentage of 55? (correct up to two decimal places)

- Ans
- 1. 67.27%
 - 2. 64.91%
 - 3. 69.41%
 - 4. 62.77%

Question ID : 26433080298
Status : Answered
Chosen Option : 1

Q.6 Calculate the volume (in cm^3) of the cylinder having height 20 cm and base radius 14 cm.

- Ans
- 1. $13,230 \text{ cm}^3$
 - 2. $13,300 \text{ cm}^3$
 - 3. $12,320 \text{ cm}^3$
 - 4. $12,200 \text{ cm}^3$

Question ID : 26433075821
Status : Answered
Chosen Option : 3

Q.7 The current population of a city is 125000. If the population grows at the rate of 2% per year, what will be the population of the city after 3 years?

- Ans
- 1. 133512
 - 2. 132651
 - 3. 130896
 - 4. 132165

Question ID : 26433080338
Status : Answered
Chosen Option : 2

Q.8 The marked price of a washing machine is Rs.23,500 and the shopkeeper sold it for Rs.20,915. What is the percentage of discount offered by the shopkeeper?

- Ans
- 1. 10%
 - 2. 9%
 - 3. 12%
 - 4. 11%

Question ID : 26433075189
Status : Answered
Chosen Option : 4

Q.9 A dealer professes to sell his goods at a loss of 16%, but weights 750 gm in place of a kg weight. Find his total profit percentage.

- Ans
- 1. 15 Percent
 - 2. 11 Percent
 - 3. 14 Percent
 - 4. 12 Percent

Question ID : 26433080170
Status : Answered
Chosen Option : 4

Q.10 The LCM of 32 and 40 equals to 9 less than the square of X. Find the positive value of X.

- Ans
- 1. 14
 - 2. 11
 - 3. 12
 - 4. 13

Question ID : 264330116647
Status : Answered
Chosen Option : 4

Q.11 A man buys a toy car for ₹135 and sells it for ₹150, find his gain percentage.

- Ans
- 1. 10.10%
 - 2. 10%
 - 3. 11%
 - 4. 11.11%

Question ID : 26433076173
Status : Answered
Chosen Option : 4

Q.12 The curved surface area of a cone is $4,455 \text{ cm}^2$ and its diameter is 105 cm. What is its slant height? Take $\pi = \frac{22}{7}$

- Ans
- 1. 23 cm
 - 2. 21 cm
 - 3. 25 cm
 - 4. 27 cm

Question ID : 26433076253
Status : Answered
Chosen Option : 4

Q.13 In a linear race of 1000 m, Saloni beat Shweta by 100 m, while Shweta beat Sonam by 150 m. By how many metres does Saloni beat Sonam, in the same race?

- Ans
- 1. 220 m
 - 2. 250 m
 - 3. 225 m
 - 4. 235 m

Question ID : 26433080378
Status : Answered
Chosen Option : 2

Q.14 Four prime numbers are arranged in ascending order. The product of the first three numbers is 255 and that of the last three is 1955. The largest prime number is:

- Ans 1. 23
 2. 31
 3. 17
 4. 29

Question ID : 26433081471
Status : Answered
Chosen Option : 3

Q.15 A boy travelled from the home to the college at the rate of 35 km/h and walked back at the rate of 3 km/h. If the whole journey took 6 h 30 min, then the distance of the college from the home (correct to 2 decimal places) is:

- Ans 1. 18.01 km
 2. 17.58 km
 3. 17.25 km
 4. 17.96 km

Question ID : 26433081594
Status : Not Answered
Chosen Option : --

Q.16 Aman, Ram, and Kapil can complete a work in 68 days, 51 days, and 17 days respectively. If they work on alternate days such that Aman works on first day, Ram works on second day, Kapil works on third day and then again Aman works on fourth day and so on, then find the approximate number of days in which 50% of the work is completed.

- Ans 1. 19 days
 2. 16 days
 3. 15 days
 4. 18 days

Question ID : 264330116908
Status : Not Answered
Chosen Option : --

Q.17 Find the mean proportional between 0.64 and 0.81.

- Ans 1. 0.70
 2. 0.72
 3. 0.66
 4. 0.68

Question ID : 26433080113
Status : Answered
Chosen Option : 2

Q.18 Two numbers are in the ratio 3 : 8. If 8 is added to each number, then the ratio becomes 1 : 2. If 4 is subtracted from each number, then the ratio will become:

- Ans
- 1. 7 : 2
 - 2. 8 : 3
 - 3. 2 : 7
 - 4. 3 : 8

Question ID : 26433087371
Status : Answered
Chosen Option : 3

Q.19 A farmer has 10 Parrots and 40 horses. Find the average number of legs per animal.

- Ans
- 1. 3.2
 - 2. 3.4
 - 3. 3.6
 - 4. 3.8

Question ID : 264330116693
Status : Answered
Chosen Option : 3

Q.20 With a 10% discount on the marked price, a seller earns a 5% profit. If the marked price is increased by 5% and two successive discounts of 5% each are offered, how much percentage profit does the seller earn?

- Ans
- 1. 10.5%
 - 2. 10%
 - 3. 11%
 - 4. 11.5%

Question ID : 26433085450
Status : Not Answered
Chosen Option : --

Section : Part-D-English

Q.1 Select the most appropriate option that can substitute the underlined segment in the given sentence.

As of now, they have finished the construction of the ground flour.

- Ans
- 1. construction of the ground flavor
 - 2. construction of the ground floor
 - 3. construction of the ground flower
 - 4. construction of the ground flounder

Question ID : 264330100991
Status : Not Answered
Chosen Option : --

Q.2 Select the most appropriate option that can substitute the underlined segment in the given sentence.

I was delight in the moment I saw her.

- Ans
- 1. delighted at
 - 2. had delightful
 - 3. was delighting
 - 4. was delighted

Question ID : 26433088167
Status : Not Answered
Chosen Option : --

Q.3 Select the most appropriate synonym of the word given in brackets to fill in the blank.

Jack met with a/an _____ (deadly) accident.

- Ans
- 1. vital
 - 2. deaden
 - 3. fatal
 - 4. explicit

Question ID : 26433089076
Status : Not Answered
Chosen Option : --

Q.4 Select the most appropriate ANTONYM of the given word.

Solitary

- Ans
- 1. Indifferent
 - 2. Lone
 - 3. Gregarious
 - 4. Loan

Question ID : 26433073867
Status : Not Answered
Chosen Option : --

Q.5 Select the most appropriate synonym for the underlined word in the given sentence.

The pearls produced in that oyster farm have lost all their lustre.

- Ans
- 1. front
 - 2. shine
 - 3. lustful
 - 4. gloom

Question ID : 26433073753
Status : Not Answered
Chosen Option : --

Q.6 Select the most appropriate option to fill in the blank.
The person in ragged clothes sleeping on the street is a _____ man.

- Ans
- 1. cunning
 - 2. learned
 - 3. homeless
 - 4. wealthy

Question ID : 26433085600
Status : Not Answered
Chosen Option : --

Q.7 Select the most appropriate synonym of the underlined word in the given sentence.

The country has an abundant supply of minerals.

- Ans
- 1. Artificial
 - 2. Sparse
 - 3. Ample
 - 4. Natural

Question ID : 26433072061
Status : Not Answered
Chosen Option : --

Q.8 Select the most appropriate meaning of the given idiom.

The whys and wherefores

- Ans
- 1. Underlying reason
 - 2. Summary
 - 3. Interrogation
 - 4. Minute observation

Question ID : 26433072433
Status : Not Answered
Chosen Option : --

Q.9 Select the most appropriate ANTONYM of the given word.

Acceptance

- Ans
- 1. Stoppage
 - 2. Allocation
 - 3. Rejection
 - 4. Trouble

Question ID : 26433073797
Status : Not Answered
Chosen Option : --

Q.10 The sentence given below has one misspelt word. Spot the INCORRECTLY spelt word and select its correct spelling.

He wishes to be an orthopidic surgeon.

- Ans
- 1. Orthapedic
 - 2. Ortopeedic
 - 3. Orthopaedic
 - 4. Orthopadic

Question ID : 26433073557
Status : Not Answered
Chosen Option : --

Q.11 The following sentence has been split into four segments. Identify the segment that contains a grammatical error.

My aunt Geeta, / is knowing / my friend Rudransh / very well.

- Ans
- 1. very well
 - 2. My aunt Geeta
 - 3. is knowing
 - 4. my friend Rudransh

Question ID : 26433086457
Status : Not Answered
Chosen Option : --

Q.12 Select the INCORRECTLY spelt word.

- Ans
- 1. Spead
 - 2. Task
 - 3. Salt
 - 4. Brand

Question ID : 26433073495
Status : Not Answered
Chosen Option : --

Q.13 Select the most appropriate ANTONYM of the given word.

Captivity

- Ans
- 1. Persistent
 - 2. Accused
 - 3. Liberty
 - 4. Haemorrhage

Question ID : 26433089114
Status : Not Answered
Chosen Option : --

Q.14 Select the most appropriate homonym to fill in the blank.

What _____ of a movie is this?

- Ans 1. kind
 2. can
 3. keen
 4. con

Question ID : 26433088791
Status : Not Answered
Chosen Option : --

Q.15 Select the most appropriate option to fill in the blank.

The Conjuring is not a movie for the _____ of heart.

- Ans 1. faint
 2. emotional
 3. strong
 4. paint

Question ID : 26433084604
Status : Not Answered
Chosen Option : --

Comprehension:

In the following passage, some words have been deleted. Read the passage carefully and select the most appropriate option to fill in each blank.

The blockade of the national highways leading to the Manipur valley, called by the United Naga Council (UNC), has been in place since 1 November. This has severely affected life in the State, with shortages and (1) _____ costs of essential supplies such as fuel and food, even as demonetisation has (2) _____ problems. Blockades like this are not new to Manipur. In 2011, there was initially a hundred-day- plus blockade enforced by Kuki-led groups, and countered later by Naga groups, which together had a (3) _____ effect on life in Manipur. This time the blockade is in place to oppose the creation of new districts by the Okram Ibobi Singh government. On 9 December it issued a (4) _____ notification for the creation of seven new districts by bifurcating seven (of a total of nine) districts. This decision had as much to do with long-pending demands — in particular, for a new Kuki-majority district to be carved out of the larger Senapati hill district — as with easing administrative access to (5) _____ areas from the district headquarters.

SubQuestion No : 16

Q.16 Select the most appropriate option to fill in blank number 1.

- Ans 1. diminishing
 2. upfront
 3. varying
 4. escalating

Question ID : 26433088621
Status : Not Answered
Chosen Option : --

Comprehension:

In the following passage, some words have been deleted. Read the passage carefully and select the most appropriate option to fill in each blank.

The blockade of the national highways leading to the Manipur valley, called by the United Naga Council (UNC), has been in place since 1 November. This has severely affected life in the State, with shortages and (1)_____ costs of essential supplies such as fuel and food, even as demonetisation has (2)_____ problems. Blockades like this are not new to Manipur. In 2011, there was initially a hundred-day- plus blockade enforced by Kuki-led groups, and countered later by Naga groups, which together had a (3)_____ effect on life in Manipur. This time the blockade is in place to oppose the creation of new districts by the Okram Ibobi Singh government. On 9 December it issued a (4) _____ notification for the creation of seven new districts by bifurcating seven (of a total of nine) districts. This decision had as much to do with long-pending demands — in particular, for a new Kuki-majority district to be carved out of the larger Senapati hill district — as with easing administrative access to (5)_____ areas from the district headquarters.

SubQuestion No : 17

Q.17 Select the most appropriate option to fill in blank number 2.

Ans 1. vindicated

2. exacerbated

3. pacified

4. exceed

Question ID : 26433088622

Status : Not Answered

Chosen Option : --

Comprehension:

In the following passage, some words have been deleted. Read the passage carefully and select the most appropriate option to fill in each blank.

The blockade of the national highways leading to the Manipur valley, called by the United Naga Council (UNC), has been in place since 1 November. This has severely affected life in the State, with shortages and (1)_____ costs of essential supplies such as fuel and food, even as demonetisation has (2)_____ problems. Blockades like this are not new to Manipur. In 2011, there was initially a hundred-day- plus blockade enforced by Kuki-led groups, and countered later by Naga groups, which together had a (3)_____ effect on life in Manipur. This time the blockade is in place to oppose the creation of new districts by the Okram Ibobi Singh government. On 9 December it issued a (4) _____ notification for the creation of seven new districts by bifurcating seven (of a total of nine) districts. This decision had as much to do with long-pending demands — in particular, for a new Kuki-majority district to be carved out of the larger Senapati hill district — as with easing administrative access to (5)_____ areas from the district headquarters.

SubQuestion No : 18

Q.18 Select the most appropriate option to fill in blank number 3.

Ans 1. counter

2. acting

3. debilitating

4. befitting

Question ID : 26433088623

Status : Not Answered

Chosen Option : --

Comprehension:

In the following passage, some words have been deleted. Read the passage carefully and select the most appropriate option to fill in each blank.

The blockade of the national highways leading to the Manipur valley, called by the United Naga Council (UNC), has been in place since 1 November. This has severely affected life in the State, with shortages and (1)_____ costs of essential supplies such as fuel and food, even as demonetisation has (2)_____ problems. Blockades like this are not new to Manipur. In 2011, there was initially a hundred-day- plus blockade enforced by Kuki-led groups, and countered later by Naga groups, which together had a (3)_____ effect on life in Manipur. This time the blockade is in place to oppose the creation of new districts by the Okram Ibobi Singh government. On 9 December it issued a (4) _____ notification for the creation of seven new districts by bifurcating seven (of a total of nine) districts. This decision had as much to do with long-pending demands — in particular, for a new Kuki-majority district to be carved out of the larger Senapati hill district — as with easing administrative access to (5)_____ areas from the district headquarters.

SubQuestion No : 19

Q.19 Select the most appropriate option to fill in blank number 4.

- Ans
- 1. detail
 - 2. lively
 - 3. gazette
 - 4. live

Question ID : 26433088624

Status : Not Answered

Chosen Option : --

Comprehension:

In the following passage, some words have been deleted. Read the passage carefully and select the most appropriate option to fill in each blank.

The blockade of the national highways leading to the Manipur valley, called by the United Naga Council (UNC), has been in place since 1 November. This has severely affected life in the State, with shortages and (1)_____ costs of essential supplies such as fuel and food, even as demonetisation has (2)_____ problems. Blockades like this are not new to Manipur. In 2011, there was initially a hundred-day- plus blockade enforced by Kuki-led groups, and countered later by Naga groups, which together had a (3)_____ effect on life in Manipur. This time the blockade is in place to oppose the creation of new districts by the Okram Ibobi Singh government. On 9 December it issued a (4) _____ notification for the creation of seven new districts by bifurcating seven (of a total of nine) districts. This decision had as much to do with long-pending demands — in particular, for a new Kuki-majority district to be carved out of the larger Senapati hill district — as with easing administrative access to (5)_____ areas from the district headquarters.

SubQuestion No : 20

Q.20 Select the most appropriate option to fill in blank number 5.

- Ans
- 1. far-flung
 - 2. offshore
 - 3. outskirts
 - 4. secluded

Question ID : 26433088625

Status : Not Answered

Chosen Option : --

Q.1 मैंने विद्यालय के प्रधानाचार्य से प्रार्थना की कि मुझे छात्रवृत्ति प्रदान करें।
उपरोक्त वाक्य में प्रयुक्त 'प्रार्थना' शब्द का सही अर्थ है -

- Ans
- 1. अपनी बात मनवाने के लिए कहना
 - 2. आग्रह पूर्वक विनती करना
 - 3. विनय पूर्वक विनती करना
 - 4. तर्क से अपनी बात रखना

Question ID : 26433080914
Status : Answered
Chosen Option : 2

Q.2 निम्नलिखित वाक्य में त्रुटि पहचानें-
मैंने हाथ जोड़ दिया।

- Ans
- 1. दीया
 - 2. हाथ
 - 3. मैंने
 - 4. जोड़

Question ID : 26433066821
Status : Answered
Chosen Option : 4

Q.3 रेखांकित शब्द-समूह के लिए सर्वाधिक उपयुक्त विकल्प चुनें।
आकाश में इतने तारे हैं कि गिने न जा सकें।

- Ans
- 1. असंख्य
 - 2. गणनीय
 - 3. गिनती के
 - 4. अनगिनत

Question ID : 26433062281
Status : Answered
Chosen Option : 4

Q.4 वाक्यांश और उसके लिए एक शब्द का निम्न में से कौन सा युग्म अशुद्ध है?

- Ans
- 1. लाभ पाने की इच्छा-लिप्सा
 - 2. जो किसी से जीता न जा सके-अजेय
 - 3. सात दिन का समूह-सप्ताह
 - 4. नाप तौलकर खर्च करने वाला-मितभाषी

Question ID : 264330109529
Status : Answered
Chosen Option : 4

Q.5 अरे ! साँप कहाँ गया ?

इस वाक्य में प्रयुक्त क्रिया विशेषण 'कहाँ' किस प्रकार का क्रियाविशेषण है ?

- Ans 1. साधारण क्रिया विशेषण
 2. अनुबद्ध क्रिया विशेषण
 3. मूल क्रिया विशेषण
 4. यौगिक क्रिया विशेषण

Question ID : 26433079231

Status : Answered

Chosen Option : 4

Q.6 रिक्त स्थान की पूर्ति उचित कारक चिन्ह से करें-

श्याम मीरा _____ खिलौने लाया।

- Ans 1. में
 2. के लिए
 3. ने
 4. का

Question ID : 26433085031

Status : Answered

Chosen Option : 2

Q.7 निम्न वाक्य में अनुपयुक्त शब्द-प्रयोग सम्बन्धी अशुद्धि दूर करने के लिए, रेखांकित भाग को उचित विकल्प चुनकर प्रतिस्थापित करें-

'हिन्दी-साहित्य में आचार्य रामचंद्र शुक्ल एक बड़े व्याख्याता माने जाते हैं।'

- Ans 1. बड़े अच्छे वक्ता
 2. एक उत्कृष्ट विश्लेषक
 3. एक अच्छे वर्चक
 4. एक बड़े साहित्यक

Question ID : 26433062805

Status : Answered

Chosen Option : 2

Q.8 निम्नलिखित मुहावरे के लिए उपयुक्त सार्थक शब्द है-
जी अच्छा होना

- Ans 1. तबियत ठीक होना
 2. बहाना करना
 3. हिम्मत करना
 4. रंग विरंगी

Question ID : 26433065770

Status : Answered

Chosen Option : 1

Q.9 निम्न में से कौन सा 'जल' शब्द का पर्यायवाची है?

- Ans
- 1. अंबुधि
 - 2. नीरज
 - 3. नीर
 - 4. वारिज

Question ID : 26433092014
Status : Answered
Chosen Option : 2

Q.10 रितेश को जब कक्षा में प्रथम आने का समाचार मिला, तो उसकी _____ खिल गई।
रिक्त स्थान की पूर्ति उचित शब्द द्वारा कीजिए।

- Ans
- 1. बाँछें
 - 2. आँखे
 - 3. मुस्कान
 - 4. चेहरा

Question ID : 26433062618
Status : Answered
Chosen Option : 2

Q.11 निम्नलिखित में से शुद्ध वाक्य है-

- Ans
- 1. बहुत लोग एक साथ दौड़ पड़े।
 - 2. बहुत लोग एक सथ दौड़ पड़े।
 - 3. बहुत लोग ईक साथ दौड़ पड़े।
 - 4. बहुत लोग एक साथ दौठ पड़े।

Question ID : 26433066842
Status : Answered
Chosen Option : 1

Q.12 दिए गए विकल्पों में से कौन सा शब्द निम्नलिखित वाक्य में रेखांकित शब्द का पर्यायवाची नहीं है?

रासबिहारी बोस दिल्ली 'षड्यन्त्र' के मुख्य अभियुक्त थे।

- Ans
- 1. साजिद
 - 2. दुरभिसंधि
 - 3. कुचक्र
 - 4. साजिश

Question ID : 26433091340
Status : Answered
Chosen Option : 1

Q.13 भगवान द्विवाकर जीवनदायी हैं।

रेखांकित शब्द के उचित पर्यायवाची शब्द का चयन कीजिए।

- Ans 1. सूर्य
 2. नयन
 3. शशि
 4. अब्ज

Question ID : 26433079620

Status : Answered

Chosen Option : 1

Q.14 निम्नलिखित वाक्य में रेखांकित खंड के स्थान पर प्रयुक्त होने वाले सबसे उपयुक्त विकल्प का चयन कीजिए-

वह अतिथि सेवा के तत्पर लिए है।

- Ans 1. के लिए तत्पर है
 2. के लिए है तत्पर
 3. तत्पर है के लिए
 4. तत्पर के लिए है

Question ID : 26433070051

Status : Answered

Chosen Option : 1

Q.15 'अनुसंधान _____'

उपर्युक्त वाक्य में रिक्त स्थान के लिए उपयुक्त वाक्यांश का चयन विकल्पों में से कीजिए।

- Ans 1. की अर्थ में खोज होता है।
 2. खोज का अनर्थ होता है।
 3. द्वारा खोज का अर्थ होता है।
 4. का अर्थ खोज होता है।

Question ID : 26433067035

Status : Answered

Chosen Option : 4

Comprehension:

निम्नलिखित गद्यांश में कुछ शब्दों को हटा दिया गया है। दिए गए विकल्पों की सहायता से रिक्त स्थानों की पूर्ति कीजिए। प्रत्येक संख्या के लिए सबसे उपयुक्त विकल्प का चयन करें।

आत्मनिर्भरता से तात्पर्य है- अपने ऊपर 1. _____ रहना। जब मनुष्य अपने कार्य 2. _____ करता है तो आत्मनिर्भर कहलाता है। बहुत से कार्य वह दूसरों के 3. _____ करता है। आत्मनिर्भरता का अर्थ यह है कि जब किसी कार्य को करने का मन करे, उसके लिए पूर्ण 4. _____ और लगन का परिचय दे। स्वयं अपने सहारे उसे सिद्ध करने का 5. _____ करें।

SubQuestion No : 16

Q.16 रिक्त स्थान 1 की पूर्ति के लिए सबसे उपयुक्त विकल्प का चयन कीजिए।

- Ans
- 1. प्रवृत्ति
 - 2. दूभर
 - 3. सहारा
 - 4. निर्भर

Question ID : 264330111077

Status : Answered

Chosen Option : 4

Comprehension:

निम्नलिखित गद्यांश में कुछ शब्दों को हटा दिया गया है। दिए गए विकल्पों की सहायता से रिक्त स्थानों की पूर्ति कीजिए। प्रत्येक संख्या के लिए सबसे उपयुक्त विकल्प का चयन करें।

आत्मनिर्भरता से तात्पर्य है- अपने ऊपर 1. _____ रहना। जब मनुष्य अपने कार्य 2. _____ करता है तो आत्मनिर्भर कहलाता है। बहुत से कार्य वह दूसरों के 3. _____ करता है। आत्मनिर्भरता का अर्थ यह है कि जब किसी कार्य को करने का मन करे, उसके लिए पूर्ण 4. _____ और लगन का परिचय दे। स्वयं अपने सहारे उसे सिद्ध करने का 5. _____ करें।

SubQuestion No : 17

Q.17 रिक्त स्थान 2 की पूर्ति के लिए सबसे उपयुक्त विकल्प का चयन कीजिए।

- Ans
- 1. नहीं
 - 2. स्वयं
 - 3. श्रेष्ठ
 - 4. कल

Question ID : 264330111078

Status : Answered

Chosen Option : 2

Comprehension:

निम्नलिखित गद्यांश में कुछ शब्दों को हटा दिया गया है। दिए गए विकल्पों की सहायता से रिक्त स्थानों की पूर्ति कीजिए। प्रत्येक संख्या के लिए सबसे उपयुक्त विकल्प का चयन करें।

आत्मनिर्भरता से तात्पर्य है- अपने ऊपर 1. _____ रहना। जब मनुष्य अपने कार्य 2. _____ करता है तो आत्मनिर्भर कहलाता है। बहुत से कार्य वह दूसरों के 3. _____ करता है। आत्मनिर्भरता का अर्थ यह है कि जब किसी कार्य को करने का मन करे, उसके लिए पूर्ण 4. _____ और लगन का परिचय दे। स्वयं अपने सहारे उसे सिद्ध करने का 5. _____ करें।

SubQuestion No : 18

Q.18 रिक्त स्थान 3 की पूर्ति के लिए सबसे उपयुक्त विकल्प का चयन कीजिए।

- Ans
- 1. स्थिति
 - 2. सहारे
 - 3. लक्ष्य
 - 4. प्रकार

Question ID : 264330111079

Status : Answered

Chosen Option : 2

Comprehension:

निम्नलिखित गद्यांश में कुछ शब्दों को हटा दिया गया है। दिए गए विकल्पों की सहायता से रिक्त स्थानों की पूर्ति कीजिए। प्रत्येक संख्या के लिए सबसे उपयुक्त विकल्प का चयन करें।

आत्मनिर्भरता से तात्पर्य है- अपने ऊपर 1. _____ रहना। जब मनुष्य अपने कार्य 2. _____ करता है तो आत्मनिर्भर कहलाता है। बहुत से कार्य वह दूसरों के 3. _____ करता है। आत्मनिर्भरता का अर्थ यह है कि जब किसी कार्य को करने का मन करे, उसके लिए पूर्ण 4. _____ और लगन का परिचय दे। स्वयं अपने सहारे उसे सिद्ध करने का 5. _____ करें।

SubQuestion No : 19

Q.19 रिक्त स्थान 4 की पूर्ति के लिए सबसे उपयुक्त विकल्प का चयन कीजिए।

- Ans
- 1. तत्परता
 - 2. सहायता
 - 3. विफलता
 - 4. अकर्मण्यता

Question ID : 264330111080

Status : Answered

Chosen Option : 1

Comprehension:

निम्नलिखित गद्यांश में कुछ शब्दों को हटा दिया गया है। दिए गए विकल्पों की सहायता से रिक्त स्थानों की पूर्ति कीजिए। प्रत्येक संख्या के लिए सबसे उपयुक्त विकल्प का चयन करें।

आत्मनिर्भरता से तात्पर्य है- अपने ऊपर 1. _____ रहना। जब मनुष्य अपने कार्य 2. _____ करता है तो आत्मनिर्भर कहलाता है। बहुत से कार्य वह दूसरों के 3. _____ करता है। आत्मनिर्भरता का अर्थ यह है कि जब किसी कार्य को करने का मन करे, उसके लिए पूर्ण 4. _____ और लगन का परिचय दे। स्वयं अपने सहारे उसे सिद्ध करने का 5. _____ करें।

SubQuestion No : 20

Q.20 रिक्त स्थान 5 की पूर्ति के लिए सबसे उपयुक्त विकल्प का चयन कीजिए।

- Ans**
- 1. पाठ
 - 2. प्रयास
 - 3. विकास
 - 4. ध्यान

Question ID : 264330111081

Status : Answered

Chosen Option : 2

Bankers Adda
मेराउत्सव

| | |
|-------------|--------------------|
| | |
| | |
| | |
| Exam Date | 16/11/2021 |
| Exam Time : | 9:00 AM - 10:30 AM |
| Subject | Constable GD 2021 |

Section : Part A General Intelligence and Reasoning

Q.1 Five friends, P, Q, R, S and T are sitting in a row facing south. Q is sitting in the centre position. P is sitting at the west end. T and R are sitting on one side of Q. Two persons are sitting between P and R. Who is sitting between Q and P?

- Ans
- 1. Q
 - 2. T
 - 3. S
 - 4. R

Question ID : 65497828355
Status : Answered
Chosen Option : 3

Q.2 Select the option that is related to the third term in the same way as the second term is related to the first term.

Bhubaneswar : Odisha :: Aizawl : ?

- Ans
- 1. Mizoram
 - 2. Meghalaya
 - 3. Manipur
 - 4. Tripura

Question ID : 65497828354
Status : Answered
Chosen Option : 1

Q.3 Select the number from among the given options that can replace the question mark (?) in the following series.

19, 23, 32, 48, 73, ?

- Ans
- 1. 109
 - 2. 108
 - 3. 111
 - 4. 103

Question ID : 65497828351
Status : Answered
Chosen Option : 1

Q.4 Study the given pattern carefully and select the number that can replace the question mark (?) in it.

13 26 39
30 42 ?
17 16 15

- Ans 1. 40
 2. 45
 3. 54
 4. 60

Question ID : 65497828341

Status : Not Attempted and Marked For Review

Chosen Option : --

Q.5 In a certain code language, 'ARROW' is written as 'FOOSE' and 'GERM' is written as 'THOR'. How will 'MOWER' be written in that language?

- Ans 1. SHORE
 2. ROSHE
 3. RSEHO
 4. HORSE

Question ID : 65497828339

Status : Answered

Chosen Option : 3

Q.6 Select the combination of letters that when sequentially placed in the blanks of the given series will complete the series.

C 2 _ X 2 C C _ X X 2 _ C 2 _ X _ C

- Ans 1. C2X2X
 2. X2CX2
 3. AXX2C
 4. XCX2C

Question ID : 65497828350

Status : Answered

Chosen Option : 2

Q.7 The sequence of folding a piece of paper and the manner in which the folded paper has been cut is shown in the following figures. How would this paper look when unfolded?



Ans



Question ID : 65497828343

Status : Answered

Chosen Option : 3

Q.8 Select the letter-cluster from among the given options that can replace the question mark (?) in the following series.

SKH, PMG, MOF, JQE, ?

Ans 1. GSD

2. SDF

3. GTD

4. HSD

Question ID : 65497828353

Status : Answered

Chosen Option : 1

Q.9 Four letter-clusters have been given, out of which three are alike in some manner and one is different. Select the letter-cluster that is different.

Ans 1. HIJ

2. QRS

3. DEF

4. NMP

Question ID : 65497828357

Status : Answered

Chosen Option : 4

Q.10 Eight friends, A, B, C, D, E, F, G and H, are sitting in a straight line, all facing the north. F is sitting between D and G. B is sitting between H and A. E is third to the left of G. G is sitting at one of the corners. H is third to the left of C. Who is sitting between A and E?

- Ans
- 1. B
 - 2. H
 - 3. D
 - 4. C

Question ID : 65497828344
Status : Answered
Chosen Option : 4

Q.11 Two different positions of the same dice marked with the letters/symbols X, S, Y, &, Z and @ are shown. Select the letter/symbol that will be on the face opposite to the face having the symbol S.



- Ans
- 1. &
 - 2. Z
 - 3. @
 - 4. X

Question ID : 65497828347
Status : Answered
Chosen Option : 1

Q.12 In a certain code language, 'India is my country' means '8573', 'Sam is my friend' means '8634', 'My country' means '73' and 'Team India' means '59'. What number is the code for 'Country'?

- Ans
- 1. 5
 - 2. 7
 - 3. 8
 - 4. 3

Question ID : 65497828358
Status : Answered
Chosen Option : 2

Q.13 'R+S' means 'R is the daughter of S'. 'R-S' means 'R is the husband of S'. 'R x S' means 'R is the brother of S'. If 'T x V + Z', then which of the following options is true?

- Ans
- 1. T is the uncle of Z.
 - 2. T is the father of Z.
 - 3. T is the son of Z.
 - 4. T is the brother of Z.

Question ID : 65497828363
Status : Answered
Chosen Option : 3

Q.14 Select the correct option that indicates the arrangement of the given words in the order in which they appear in an English dictionary.

1. Prestige
2. Pristine
3. Prescribe
4. Prepaid
5. Premium

- Ans
- 1. 4, 5, 3, 2, 1
 - 2. 5, 3, 4, 1, 2
 - 3. 5, 4, 3, 1, 2
 - 4. 4, 5, 3, 1, 2

Question ID : 65497828349
Status : Answered
Chosen Option : 3

Q.15 Select the option that is related to the third term in the same way as the second term is related to the first term.

BLOCK : LBPKC :: MARGIN : ?

- Ans
- 1. OHQHBL
 - 2. OHBHQL
 - 3. OBHQHL
 - 4. OHHQBL

Question ID : 65497828361
Status : Answered
Chosen Option : 4

Q.16 Select the option in which the given figure is embedded (rotation is NOT allowed).



Ans

- 1.
- 2.
- 3.
- 4.

Question ID : 65497828348
Status : Answered
Chosen Option : 1

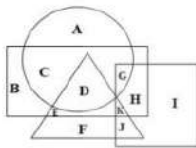
Q.17 Select the number from among the given options that can replace the question mark (?) in the following series.

24, 40, 64, 104, ?, 312

- Ans 1. 228
 2. 176
 3. 154
 4. 168

Question ID : 65497828359
Status : Answered
Chosen Option : 2

Q.18 In the following Venn diagram, the circle represents 'vegetables', the triangle represents 'roots', the square represents 'hard soil', and the rectangle represents 'summer'. Which of the following letters represents root vegetables that grow in summer but NOT in hard soil?



- Ans 1. D
 2. K
 3. E
 4. G

Question ID : 65497828356
Status : Answered
Chosen Option : 1

Q.19 Select the option that is related to the third number in the same way as the second number is related to the first number.

31 : 90 :: 43 : ?

- Ans 1. 130
 2. 125
 3. 102
 4. 75

Question ID : 65497828345
Status : Not Attempted and Marked For Review
Chosen Option : --

Q.20 Read the given statements and conclusions carefully. Assuming that the information given in the statements is true, even if it appears to be at variance with commonly known facts, decide which of the given conclusions logically follow(s) from the statements.

Statements:

All blues are whites.
Some whites are greys.

Conclusions:

I. All greys are whites.
II. All greys are blues.

Ans ✓ 1. Neither conclusion I nor conclusion II follows

- ✗ 2. Only conclusion I follows
- ✗ 3. Only conclusion II follows
- ✗ 4. Both the conclusions follow

Question ID : 65497828340

Status : Answered

Chosen Option : 1

Q.21 When a number is added to its multiple of 5 and its square, the sum of these three numbers is 91. Find the number.

Ans ✗ 1. 9

✗ 2. 11

✓ 3. 7

✗ 4. 6

Question ID : 65497828342

Status : Not Attempted and Marked For Review

Chosen Option : --

Q.22 In a certain code language, 'CIRCLE' is written as 'DLWAHY'. How will 'SQUARE' be written in that language?

Ans ✗ 1. TTPNKY

✗ 2. TNZYVY

✓ 3. TTZYNY

✗ 4. TNPYVY

Question ID : 65497828362

Status : Answered

Chosen Option : 3

Q.23 In an imaginary mathematical system, symbol '-' stands for addition, symbol '+' stands for division, symbol 'x' stands for subtraction, and symbol '÷' stands for multiplication. All other rules of mathematics are the same as in the existing system. What is the value of the following expression?

$$240 \times 72 + 8 \div 24 - 6$$

Ans ✓ 1. 30

✗ 2. 36

✗ 3. 26

✗ 4. 19

Question ID : 65497828346

Status : Answered

Chosen Option : 1

Q.24 Select the correct mirror image of the given combination when the mirror is placed at 'PQ' as shown.



- Ans
- 1. M8VGI2CVF
 - 2. JA22GIA8M
 - 3. M8VIG2CVF
 - 4. JA22GIA8M

Question ID : 65497828360
 Status : Answered
 Chosen Option : 4

Q.25 Select the figure from among the given options that can replace the question mark (?) in the following series.



- Ans
- 1.
 - 2.
 - 3.
 - 4.

Question ID : 65497828352
 Status : Answered
 Chosen Option : 3

Q.1 Which of the following Articles of the Constitution of India is related to the promotion of co-operative societies?

- Ans 1. 43A
 2. 43B
 3. 31A
 4. 31B

Question ID : **65497828376**
Status : **Answered**
Chosen Option : **2**

Q.2 Which of the following nations was India's top trading partner in the financial year 2019-20?

- Ans 1. China
 2. The US
 3. Mauritius
 4. Japan

Question ID : **65497828365**
Status : **Not Answered**
Chosen Option : **--**

Q.3 After the death of Guru Gobind Singh in 1708, the Khalsa revolted against the Mughal authority under the leadership of _____.

- Ans 1. Guru Angad
 2. Guru Amar Das
 3. Banda Bahadur
 4. Guru Nanak Dev

Question ID : **65497828385**
Status : **Not Attempted and Marked For Review**
Chosen Option : **--**

Q.4 Who among the following founded the newspaper 'Sambad Kaumudi'?

- Ans 1. Rash Bihari Bose
 2. Raja Ram Mohan Roy
 3. Shishir Kumar Ghosh
 4. Ishwar Chandra Vidyasagar

Question ID : **65497828366**
Status : **Not Answered**
Chosen Option : **--**

Q.5 Which of the following set of countries participated in the Malabar Naval Exercise 2020?

- Ans 1. India, Japan and the US
 2. India, Israel and the US
 3. India, Australia, Israel and the US
 4. India, Australia, Japan and the US

Question ID : **65497828375**
Status : **Not Answered**
Chosen Option : **--**

Q.6 Sarayu river is a tributary of which river?

- Ans 1. Pindar
 2. Bhagirathi
 3. Tons
 4. Sharda

Question ID : 65497828364
Status : Not Answered
Chosen Option : --

Q.7 On 26 January 2019, the Constitution of India completed 69 years of its existence. In these years, it was amended _____ times (as on 12 January 2019).

- Ans 1. 100
 2. 103
 3. 109
 4. 106

Question ID : 65497828386
Status : Answered
Chosen Option : 2

Q.8 Which year marks the beginning of phase 2 of the Swachh Bharat Mission (Grameen)?

- Ans 1. 2020-21
 2. 2019-20
 3. 2018-19
 4. 2021-22

Question ID : 65497828388
Status : Answered
Chosen Option : 2

Q.9 Who among the following represents India in archery?

- Ans 1. Deepika Kumari
 2. Soumyajit Ghosh
 3. Neeraj Chopra
 4. Manika Batra

Question ID : 65497828367
Status : Answered
Chosen Option : 1

Q.10 _____ represents the high point of an eclectic art, which, in the 7th and 8th centuries under the Chalukya dynasty, achieved a harmonious blend of architectural forms from northern and southern India.

- Ans 1. Kochi
 2. Pattadakal
 3. Konark
 4. Bhimbetka

Question ID : 65497828368
Status : Not Answered
Chosen Option : --

Q.11 _____ is known as viticulture.

- Ans
- 1. growing vegetables, flowers and fruits
 - 2. cultivation of grapes
 - 3. breeding of fish
 - 4. rearing of silkworms

Question ID : 65497828382
Status : Not Answered
Chosen Option : --

Q.12 Who among the following is best known for his plays 'Yayati' and 'Tughlaq'?

- Ans
- 1. Viju Khote
 - 2. Shreeram Lagoo
 - 3. Girish Karnad
 - 4. Mohammed Zahur Khayyam

Question ID : 65497828371
Status : Not Answered
Chosen Option : --

Q.13 Faqir Chand Kohli, who passed away in November 2020, was known as the '_____'.
Ans

- 1. Father of Indian Civil Services
- 2. Father of Indian Space Programme
- 3. Father of Indian Prehistory
- 4. Father of Indian Software (IT) Industry

Question ID : 65497828380
Status : Not Answered
Chosen Option : --

Q.14 In a molecule of water, the ratio of the mass of hydrogen to that of oxygen is:

- Ans
- 1. 1 : 8
 - 2. 1 : 4
 - 3. 1 : 2
 - 4. 1 : 16

Question ID : 65497828370
Status : Marked For Review
Chosen Option : 4

Q.15 Union Minister of Education launched a free mobile app called _____, on 5 September 2020.

- Ans
- 1. EnglishPro
 - 2. Beelinguapp
 - 3. Duolingo
 - 4. Hello Talk

Question ID : 65497828387
Status : Not Answered
Chosen Option : --

Q.16 α particles are doubly charged ions of _____.

- Ans
- 1. lithium
 - 2. beryllium
 - 3. helium
 - 4. hydrogen

Question ID : 65497828369
Status : Not Answered
Chosen Option : --

Q.17 Which of the following institutions started the 'Team Halo' initiative in November 2020?

- Ans
- 1. World Bank
 - 2. United Nations
 - 3. World Health Organization
 - 4. World Trade Organization

Question ID : 65497828377
Status : Not Answered
Chosen Option : --

Q.18 With which of the following sports would you associate the team 'Kerala Blasters'?

- Ans
- 1. Football
 - 2. Badminton
 - 3. Kabaddi
 - 4. Cricket

Question ID : 65497828383
Status : Marked For Review
Chosen Option : 3

Q.19 Which of the following is the traditional bamboo dance of the Mizos?

- Ans
- 1. Moyashai
 - 2. Udoho
 - 3. Cheraw
 - 4. Aaluyattu

Question ID : 65497828378
Status : Not Answered
Chosen Option : --

Q.20 The Third Battle of Panipat between the Marathas and Ahmad Shah Durrani , the ruler of Afghanistan was fought in the year:

- Ans
- 1. 1781
 - 2. 1851
 - 3. 1761
 - 4. 1831

Question ID : 65497828374
Status : Not Answered
Chosen Option : --

Q.21 In November 2020, the Board of Control for Cricket in India (BCCI) announced _____ as Team India's kit sponsor till 2023.

- Ans
- 1. Byju's
 - 2. Nike
 - 3. MPL Sports
 - 4. Oppo

Question ID : 65497828381
Status : Answered
Chosen Option : 3

Q.22 Raja Todar Mal was the Revenue Minister during the reign of which of the following Mughal emperors?

- Ans
- 1. Humayun
 - 2. Shah Jahan
 - 3. Jahangir
 - 4. Akbar

Question ID : 65497828384
Status : Answered
Chosen Option : 4

Q.23 As per calculations done in 2011-2012, the poverty line for a person of rural India got fixed at _____ per month.

- Ans
- 1. ₹816
 - 2. ₹752
 - 3. ₹1,000
 - 4. ₹687

Question ID : 65497828372
Status : Not Answered
Chosen Option : --

Q.24 Five rivers from Punjab (India) enter the river _____ at Mithankot in Pakistan.

- Ans
- 1. Indus
 - 2. Yamuna
 - 3. Ganga
 - 4. Brahmaputra

Question ID : 65497828379
Status : Answered
Chosen Option : 1

Q.25 _____ is a simple device that is used to either break the electric circuit, or to complete it.

- Ans
- 1. Transistor
 - 2. Switch
 - 3. Capacitor
 - 4. Resistor

Question ID : 65497828373
Status : Answered
Chosen Option : 2

Q.1 The perimeter of an equilateral triangle is $36\sqrt{3}$ cm. Find its height.

- Ans
- 1. 18 cm
 - 2. 9 cm
 - 3. 10 cm
 - 4. 6 cm

Question ID : 65497828400
Status : Answered
Chosen Option : 1

Q.2 A person crosses a 1600 m long street in 4 min. What is his speed (in km/h)?

- Ans
- 1. 22
 - 2. 14
 - 3. 20
 - 4. 24

Question ID : 65497828398
Status : Answered
Chosen Option : 4

Q.3 A chair is sold for ₹720 after giving a discount of 10% on its marked price. The cost price of the chair is ₹640. If it is sold at the marked price, then the profit percentage will be:

- Ans
- 1. 30%
 - 2. 20%
 - 3. 18%
 - 4. 25%

Question ID : 65497828407
Status : Answered
Chosen Option : 4

Q.4 What is 12% of 4% of 7% of 2×10^6 ?

- Ans
- 1. 386
 - 2. 583
 - 3. 672
 - 4. 121

Question ID : 65497828403
Status : Answered
Chosen Option : 3

Q.5 A solid metallic rectangular block of dimensions $112 \text{ cm} \times 44 \text{ cm} \times 25 \text{ cm}$ is melted and recast into a cylinder of radius 35 cm. The curved surface area (in cm^2) of the cylinder is: (Take $\pi = \frac{22}{7}$)

- Ans
- 1. 7260
 - 2. 6600
 - 3. 7040
 - 4. 6160

Question ID : 65497828413

Status : **Not Attempted and Marked For Review**

Chosen Option : --

Q.6 Find the value of $45 - 3 \times (4 \text{ of } 6 + 12 \div 3 \times 6 - 4 \times 5) + 6$.

- Ans
- 1. -45
 - 2. -135
 - 3. -33
 - 4. -30

Question ID : 65497828408

Status : **Answered**

Chosen Option : 3

Q.7 By selling 36 m of jute, a shopkeeper gains an amount equal to the selling price of 12 m of jute. Find the gain percentage.

- Ans
- 1. 50%
 - 2. 40%
 - 3. 45%
 - 4. 55%

Question ID : 65497828409

Status : **Answered**

Chosen Option : 1

Q.8 Divide ₹2,760 in to two parts such that when these are invested for 2 and 4 years, respectively, at the rate of 5 % per annum simple interest, the amounts received are equal. What is the second part (in ₹) invested?

- Ans
- 1. 1,100
 - 2. 1,500
 - 3. 1,320
 - 4. 1,440

Question ID : 65497828396

Status : **Not Attempted and Marked For Review**

Chosen Option : --

Q.9 A 725 m long train passes a tunnel 235 m long in 48 seconds. Find the speed of the train.

- Ans**
- 1. 42 km/h
 - 2. 72 km/h
 - 3. 36 km/h
 - 4. 100 km/h

Question ID : 65497828405
Status : Answered
Chosen Option : 2

Q.10 A batsman scored 124 runs, which included 6 boundaries and 10 sixes. What percentage of his total score did he make by running between the wickets?

- Ans**
- 1. $28\frac{19}{31}\%$
 - 2. $24\frac{1}{31}\%$
 - 3. $32\frac{8}{31}\%$
 - 4. $35\frac{3}{31}\%$

Question ID : 65497828390
Status : Answered
Chosen Option : 3

Q.11 The salaries of Ravi and Sumit are in the ratio 4 : 5. If the salary of each is increased by ₹6,000 the new ratio becomes 35 : 40. What will be Sumit's increased salary?

- Ans**
- 1. ₹26,000
 - 2. ₹36,000
 - 3. ₹16,000
 - 4. ₹1,60,000

Question ID : 65497828399
Status : Answered
Chosen Option : 3

Q.12 Anu is four times as good as Binni in completing a task. Together they finish the same task in 7 hours. In how many hours will Anu alone complete the task?

- Ans**
- 1. 22
 - 2. $35/4$
 - 3. $31/4$
 - 4. 24

Question ID : 65497828404
Status : Answered
Chosen Option : 2

Q.13 The number of students in class IX and class X is 42 and 45, respectively. The ratio of the number of boys to girls in classes IX and X is 9 : 5 and 8 : 7, respectively. What is the difference between the total number of boys and the total number of girls in both the classes taken together?

- Ans**
- 1. 11
 - 2. 12
 - 3. 17
 - 4. 15

Question ID : **65497828411**
Status : **Answered**
Chosen Option : **4**

Q.14 P, Q and R can complete a work in 10 days, 20 days and 30 days, respectively, working alone. How soon can the work be completed if P is assisted by Q and R on alternate days?

- Ans**
- 1. $7\frac{1}{17}$ days
 - 2. 9 days
 - 3. 5 days
 - 4. $6\frac{1}{2}$ days

Question ID : **65497828410**
Status : **Not Answered**
Chosen Option : **--**

Q.15 A loss of $10\frac{1}{2}\%$ gets converted into a profit of $11\frac{3}{5}\%$ when the selling price is increased by ₹132.60. The cost price (in ₹) of the article is:

- Ans**
- 1. 750
 - 2. 800
 - 3. 600
 - 4. 500

Question ID : **65497828391**
Status : **Answered**
Chosen Option : **3**

Q.16 The greatest number that will divide 398, 437 and 5425 leaving 7, 12 and 2 as remainders, respectively, is:

- Ans**
- 1. 11
 - 2. 15
 - 3. 17
 - 4. 19

Question ID : **65497828393**
Status : **Answered**
Chosen Option : **3**

Q.17 If the average of two numbers is 13 and the square root of their product is 12, then the difference between the numbers is:

- Ans 1. 10
 2. 18
 3. 8
 4. 12

Question ID : 65497828394
Status : Answered
Chosen Option : 1

Q.18 The average of 10 observations is 46. It was realised later that an observation was misread as 42 in place of 142. The correct average is:

- Ans 1. 52
 2. 46
 3. 58
 4. 56

Question ID : 65497828401
Status : Answered
Chosen Option : 4

Q.19 The ratio of A's and B's salary is 6 : 7. If B's salary is increased by $5\frac{1}{2}\%$, then his total salary becomes ₹1,47,700. The salary (in ₹) of A is:

- Ans 1. 1,10,000
 2. 1,20,000
 3. 1,40,000
 4. 1,35,000

Question ID : 65497828395
Status : Answered
Chosen Option : 2

Q.20 The certain sum amounts to ₹9,982.50 in $2\frac{1}{2}$ years at 12% p.a., interest compounded 10-monthly. The sum (in ₹) is:

- Ans 1. 8,500
 2. 7,800
 3. 8,000
 4. 7,500

Question ID : 65497828412
Status : Not Attempted and Marked For Review
Chosen Option : --

Q.21 A nine-digit number $89563x87y$ is divisible by 72. What is the value of $\sqrt{7x - 3y}$?

- Ans
- 1. 8
 - 2. 5
 - 3. 6
 - 4. 4

Question ID : 65497828389
Status : Answered
Chosen Option : 3

Q.22 The value of $3 \times 7 + 5 - 6 \div 3 - 9 + 45 \div 5 \times 4 - 45$ is:

- Ans
- 1. 9
 - 2. 6
 - 3. 7
 - 4. 36

Question ID : 65497828397
Status : Answered
Chosen Option : 2

Q.23 A TV was available for ₹14,500. The price came down to ₹11,890 during the Diwali sale. What is the percentage discount?

- Ans
- 1. 19.56%
 - 2. 19%
 - 3. 18%
 - 4. 17.6%

Question ID : 65497828402
Status : Answered
Chosen Option : 3

Q.24 A shopkeeper sold an article at a gain of 20%. Had he bought it for 20% less than the original cost and sold it for ₹10 less, he would have gained 25%. Then the Cost Price of the article is:

- Ans
- 1. ₹50
 - 2. ₹40
 - 3. ₹60
 - 4. ₹45

Question ID : 65497828406
Status : Answered
Chosen Option : 1

Q.25 A certain sum amounts to ₹13200 after 4 years and to ₹16400 after 8 years at the same rate per cent p.a. at simple interest. The simple interest (in ₹) on the same sum at 10% p.a. for $3\frac{1}{5}$ years will be:

- Ans
- 1. 4000
 - 2. 3200
 - 3. 2500
 - 4. 3500

Question ID : 65497828392
Status : Answered
Chosen Option : 2

Section : Part D English

Q.1 Select the most appropriate synonym of the given word.

Visible

- Ans
- 1. Secret
 - 2. Apparent
 - 3. Vague
 - 4. Hidden

Question ID : 65497828415
Status : Marked For Review
Chosen Option : 2

Q.2 Select the most appropriate option that can substitute the underlined word in the given sentence.

Microwave ovens heat food quickly, anxiously and safely, but do not brown or bake food in the way that conventional ovens do.

- Ans
- 1. angrily
 - 2. efficiently
 - 3. beautifully
 - 4. accidentally

Question ID : 65497828416
Status : Answered
Chosen Option : 2

Q.3 Select the most appropriate option to fill in the blank.

A _____ mind rarely meets a dead end; it continues the search for the answers.

- Ans
- 1. peculiar
 - 2. weird
 - 3. curious
 - 4. strange

Question ID : 65497828419
Status : Answered
Chosen Option : 3

Q.4 The following sentence has been divided into parts. One of them may contain an error. Select the part that contains the error from the given options. If you don't find any error, mark 'No error' as your answer.

She left / hers umbrella / at the office.

- Ans 1. No error
 2. hers umbrella
 3. She left
 4. at the office

Question ID : 65497828414
Status : Answered
Chosen Option : 2

Q.5 Select the option that can be used as a one-word substitute for the given group of words.

A person who knows everything

- Ans 1. Naive
 2. Omniscient
 3. Intelligent
 4. Omnipresent

Question ID : 65497828420
Status : Answered
Chosen Option : 3

Q.6 The following sentence has been split into four segments. Identify the segment that contains a grammatical error.

Mohan told to / Sagar that he / was looking / very pale.

- Ans 1. very pale
 2. Sagar that he
 3. Mohan told to
 4. was looking

Question ID : 65497828422
Status : Answered
Chosen Option : 3

Q.7 Select the most appropriate option that can substitute the underlined segment in the given sentence. If there is no need to substitute it, select 'No substitution required'.

I'm sure he will grab the chance to earn some extra money.

- Ans 1. No substitution required
 2. of earns
 3. to earned
 4. to earns

Question ID : 65497828429
Status : Answered
Chosen Option : 1

Q.8 Select the option that can be used as a one-word substitute for the given group of words.

One who examines a company's financial records

- Ans
- 1. Conductor
 - 2. Author
 - 3. Auditor
 - 4. Instructor

Question ID : 65497828424
Status : Answered
Chosen Option : 3

Q.9 Select the most appropriate option to fill in the blank.

The doctor _____ her to stop eating fried food.

- Ans
- 1. advised
 - 2. considered
 - 3. arranged
 - 4. expressed

Question ID : 65497828421
Status : Answered
Chosen Option : 1

Q.10 Select the most appropriate option that can substitute the underlined segment in the given sentence. If there is no need to substitute it, select 'No substitution required'.

You need to get the cholesterol from out of your system.

- Ans
- 1. out of your system
 - 2. No substitution required
 - 3. out your system
 - 4. from out off your system

Question ID : 65497828430
Status : Answered
Chosen Option : 1

Q.11 Select the most appropriate option to fill in the blank.

A dialogue is a _____ between two or more people.

- Ans
- 1. conversation
 - 2. commission
 - 3. convertible
 - 4. conversion

Question ID : 65497828427
Status : Answered
Chosen Option : 1

Q.12 Select the most appropriate meaning of the given idiom.

Play for time

- Ans
- 1. To do something in the stipulated time
 - 2. To make excuses or do things to gain time
 - 3. To play something for the sake of old times
 - 4. To play music in the time provided

Question ID : 65497828428

Status : Not Attempted and Marked For Review

Chosen Option : --

Q.13 Select the INCORRECTLY spelt word.

- Ans
- 1. Aniversary
 - 2. Felicitate
 - 3. Congratulations
 - 4. Response

Question ID : 65497828418

Status : Answered

Chosen Option : 1

Q.14 Select the most appropriate meaning of the given idiom.

To breathe one's last

- Ans
- 1. To take a major decision
 - 2. To give final verdict
 - 3. To make a plot
 - 4. To die

Question ID : 65497828417

Status : Answered

Chosen Option : 4

Q.15 Select the INCORRECTLY spelt word.

- Ans
- 1. Delivery
 - 2. Stationary
 - 3. Dictionary
 - 4. Voluntary

Question ID : 65497828425

Status : Answered

Chosen Option : 3

Q.16 The following sentence has been split into four segments. Identify the segment that contains a grammatical error.

Neither the manager / nor the employees was / aware of the / shortage of raw materials.

- Ans
- 1. Neither the manager
 - 2. shortage of raw materials
 - 3. nor the employees was
 - 4. aware of the

Question ID : 65497828431
Status : Answered
Chosen Option : 3

Q.17 Select the option that can be used as a one-word substitute for the given group of words.

Anything that leads to death

- Ans
- 1. Scary
 - 2. Serious
 - 3. Fatal
 - 4. Ominous

Question ID : 65497828433
Status : Answered
Chosen Option : 3

Q.18 Select the most appropriate ANTONYM of the given word.

Vital

- Ans
- 1. Critical
 - 2. Trivial
 - 3. Manual
 - 4. Crucial

Question ID : 65497828423
Status : Answered
Chosen Option : 2

Q.19 Select the most appropriate ANTONYM of the given word.

Precarious

- Ans
- 1. Safe
 - 2. Dangerous
 - 3. Uncertain
 - 4. Perilous

Question ID : 65497828426
Status : Not Answered
Chosen Option : --

Q.20 Select the most appropriate SYNONYM of the given word.

Threat

- Ans** 1. Suggestion
 2. Proof
 3. Attention
 4. Risk

Question ID : 65497828432

Status : Answered

Chosen Option : 4

Comprehension:

In the following passage, some words have been deleted. Read the passage carefully and select the most appropriate option to fill in each blank.

When the air is clear, the sunset (1)_____ yellow, because the light from the sun has passed a long distance through air and the blue light (2)_____ scattered away. If the air is polluted with small particles, natural (3)_____ otherwise, the sunset will be more red. Sunsets over the sea may also be orange, (4)_____ salt particles in the air. The sky (5)_____ the sun is seen reddened, as well as the light coming directly from the sun.

SubQuestion No : 21

Q.21 Select the most appropriate option to fill in blank no. 1.

- Ans** 1. is
 2. appears
 3. has appeared
 4. appeared

Question ID : 65497828435

Status : Answered

Chosen Option : 2

Comprehension:

In the following passage, some words have been deleted. Read the passage carefully and select the most appropriate option to fill in each blank.

When the air is clear, the sunset (1)_____ yellow, because the light from the sun has passed a long distance through air and the blue light (2)_____ scattered away. If the air is polluted with small particles, natural (3)_____ otherwise, the sunset will be more red. Sunsets over the sea may also be orange, (4)_____ salt particles in the air. The sky (5)_____ the sun is seen reddened, as well as the light coming directly from the sun.

SubQuestion No : 22

Q.22 Select the most appropriate option to fill in blank no. 2.

- Ans** 1. has
 2. was
 3. will be
 4. has been

Question ID : 65497828436

Status : Answered

Chosen Option : 4

Comprehension:

In the following passage, some words have been deleted. Read the passage carefully and select the most appropriate option to fill in each blank.

When the air is clear, the sunset (1)_____ yellow, because the light from the sun has passed a long distance through air and the blue light (2)_____ scattered away. If the air is polluted with small particles, natural (3)_____ otherwise, the sunset will be more red. Sunsets over the sea may also be orange, (4)_____ salt particles in the air. The sky (5)_____ the sun is seen reddened, as well as the light coming directly from the sun.

SubQuestion No : 23**Q.23 Select the most appropriate option to fill in blank no. 3.**

- Ans 1. if
 2. but
 3. or
 4. and

Question ID : 65497828437

Status : Answered

Chosen Option : 3

Comprehension:

In the following passage, some words have been deleted. Read the passage carefully and select the most appropriate option to fill in each blank.

When the air is clear, the sunset (1)_____ yellow, because the light from the sun has passed a long distance through air and the blue light (2)_____ scattered away. If the air is polluted with small particles, natural (3)_____ otherwise, the sunset will be more red. Sunsets over the sea may also be orange, (4)_____ salt particles in the air. The sky (5)_____ the sun is seen reddened, as well as the light coming directly from the sun.

SubQuestion No : 24**Q.24 Select the most appropriate option to fill in blank no. 4.**

- Ans 1. for
 2. due to
 3. because
 4. as

Question ID : 65497828438

Status : Answered

Chosen Option : 2

Comprehension:

In the following passage, some words have been deleted. Read the passage carefully and select the most appropriate option to fill in each blank.

When the air is clear, the sunset (1)_____ yellow, because the light from the sun has passed a long distance through air and the blue light (2)_____ scattered away. If the air is polluted with small particles, natural (3)_____ otherwise, the sunset will be more red. Sunsets over the sea may also be orange, (4)_____ salt particles in the air. The sky (5)_____ the sun is seen reddened, as well as the light coming directly from the sun.

SubQuestion No : 25**Q.25 Select the most appropriate option to fill in blank no. 5.**

- Ans 1. across
 2. through
 3. along
 4. around

Question ID : 65497828439

Status : Answered

Chosen Option : 3

Q.1 रिक्त स्थान भरने के लिए सबसे उपयुक्त शब्द का चयन करें।

तीनों _____ के स्वामी हैं इसलिए त्रिलोकीनाथ कहलाते हैं।

- Ans
- 1. धरती
 - 2. भवनों
 - 3. भुवनों
 - 4. आकाशों

Question ID : 65497828446
Status : Not Answered
Chosen Option : --

Q.2 इस प्रश्न में, एक शब्द चार अलग-अलग प्रकार से लिखा गया है, जिसमें से केवल एक को सही ढंग से लिखा गया है। सही वर्तनी वाले शब्द का चयन करें।

- Ans
- 1. अनाधिकार
 - 2. अनाधीकार
 - 3. अनधिकार
 - 4. अनधीकार

Question ID : 65497828444
Status : Not Answered
Chosen Option : --

Q.3 दिए गए वाक्य में रेखांकित खंड को प्रतिस्थापित करने के लिए सबसे उपयुक्त विकल्प का चयन करें। यदि इसे प्रतिस्थापित करने की आवश्यकता नहीं है, तो विकल्प 'किसी बदलाव की आवश्यकता नहीं है' का चयन करें।

मेरी गाय को छूने का उत्साह कभी कोई नहीं कर सकता क्योंकि वह मारती है।

- Ans
- 1. मेरी गाय को छूने की मेहनत
 - 2. मेरी गाय को छूने का हिम्मत
 - 3. किसी बदलाव की आवश्यकता नहीं है।
 - 4. मेरी गाय को छूने का साहस

Question ID : 65497828447
Status : Not Answered
Chosen Option : --

Q.4 दिए गए शब्द का विलोम चुनें।

द्रुत

- Ans
- 1. मंथर
 - 2. अद्वैत
 - 3. जड़
 - 4. वेग

Question ID : 65497828448
Status : Not Answered
Chosen Option : --

Q.5 दिए गए वाक्य में रेखांकित खंड को प्रतिस्थापित करने के लिए सबसे उपयुक्त विकल्प का चयन करें। यदि इसे प्रतिस्थापित करने की आवश्यकता नहीं है, तो विकल्प 'किसी बदलाव की आवश्यकता नहीं है' का चयन करें।

पिताजी मेरे लिए कुछ कपड़े ले आये।

- Ans
- 1. मेरे को
 - 2. मुझे
 - 3. किसी बदलाव की आवश्यकता नहीं है।
 - 4. मेरे के लिए

Question ID : 65497828450

Status : Not Answered

Chosen Option : --

Q.6 दिए गए शब्द के समानार्थी शब्द का चयन करें।

कमल

- Ans
- 1. अमिय
 - 2. अमृत
 - 3. अरविन्द
 - 4. आयतन

Question ID : 65497828452

Status : Not Answered

Chosen Option : --

Q.7 मुझे मज़ा आती है। - रेखांकित शब्द की वृत्ति बताइए-

- Ans
- 1. लिंग के कारण
 - 2. वचन के कारण
 - 3. विशेषण के कारण
 - 4. कारक के कारण

Question ID : 65497828456

Status : Not Answered

Chosen Option : --

Q.8 इस प्रश्न में, एक शब्द चार अलग-अलग प्रकार से लिखा गया है, जिसमें से केवल एक को सही ढंग से लिखा गया है। सही वर्तनी वाले शब्द का चयन करें।

- Ans
- 1. मातर्हीन
 - 2. मातृहीन
 - 3. मार्तहीन
 - 4. मातृहिन

Question ID : 65497828445

Status : Not Answered

Chosen Option : --

Q.9 रिक्त स्थान को भरने के लिए सबसे उपयुक्त विकल्प का चयन करें।

मेरी _____ है कि मुझे चार दिन की छुट्टी दी जाए।

- Ans
- 1. प्रार्थना
 - 2. याचना
 - 3. पूजा
 - 4. आराधना

Question ID : 65497828459
Status : Not Answered
Chosen Option : --

Q.10 'वह बात जो जन साधारण में चलती आ रही है' इस वाक्यांश के लिए एक सार्थक शब्द दीजिए।

- Ans
- 1. कूपमंडूक
 - 2. किंवदंती
 - 3. किंकर्तव्य
 - 4. कपोल-कल्पित

Question ID : 65497828440
Status : Not Answered
Chosen Option : --

Q.11 दिए गए शब्द के समानार्थी शब्द का चयन करें।

यमुना

- Ans
- 1. अर्कजा
 - 2. तड़ाग
 - 3. आपगा
 - 4. निम्नगा

Question ID : 65497828443
Status : Not Answered
Chosen Option : --

Q.12 'सामान्य नियम के विरुद्ध बात' वाक्यांश के लिए एक शब्द होगा-

- Ans
- 1. विवाद
 - 2. संवाद
 - 3. वाद
 - 4. अपवाद

Question ID : 65497828455
Status : Not Answered
Chosen Option : --

Q.13 'आँख लगाना' मुहावरे का सही अर्थ है-

- Ans
- 1. गहरी नींद आना
 - 2. आँख में दर्द होना
 - 3. गले पड़ना
 - 4. झपकी आना

Question ID : 65497828454
Status : Not Answered
Chosen Option : --

Q.14 निम्नलिखित प्रश्न में, दिए गए चार विकल्पों में से, उस विकल्प का चयन करें, जो मुहावरे का अर्थ व्यक्त करता है।

कथा के बैंगन

- Ans
- 1. मन गढ़ंत बातें
 - 2. कृपण व्यक्ति
 - 3. असंभव वस्तु
 - 4. केवल दूसरों के लिए उपदेश

Question ID : 65497828449

Status : Not Answered

Chosen Option : --

Q.15 'गुणदोष का समरूप मूल्यांकन करने वाले' के लिए एक शब्द लिखिए-

- Ans
- 1. शास्त्रज्ञ
 - 2. ज्योतिषी
 - 3. जिज्ञासु
 - 4. समीक्षक

Question ID : 65497828458

Status : Not Answered

Chosen Option : --

Q.16 दिए गए वाक्य में रेखांकित खंड को प्रतिस्थापित करने के लिए सबसे उपयुक्त विकल्प का चयन करें। यदि इसे प्रतिस्थापित करने की आवश्यकता नहीं है, तो विकल्प 'किसी बदलाव की आवश्यकता नहीं है' का चयन करें।

मैं आपका दर्शन करने आया हूँ।

- Ans
- 1. किसी बदलाव की आवश्यकता नहीं है।
 - 2. मैं आपकी
 - 3. मैं आपके
 - 4. मैं आपसे

Question ID : 65497828453

Status : Not Answered

Chosen Option : --

Q.17 दिए गए वाक्य का वह भाग ज्ञात करें जिसमें कोई त्रुटि है। यदि कोई त्रुटि नहीं है, तो 'कोई त्रुटि नहीं है' विकल्प को चुनें।

स्टेशन पहुँचते ही वह फोन कर दिया।

- Ans
- 1. फोन कर दिया
 - 2. कोई त्रुटि नहीं है
 - 3. स्टेशन पहुँचते ही
 - 4. वह

Question ID : 65497828442

Status : Not Answered

Chosen Option : --

Q.18 दिए गए वाक्य का वह भाग ज्ञात करें जिसमें कोई त्रुटि है। यदि कोई त्रुटि नहीं है, तो 'कोई त्रुटि नहीं है' चुनें।

प्रधानाचार्य ने (1)/ हिंदी अध्यापक (2)/ को बुलाये। (3)/ कोई त्रुटि नहीं है(4)

Ans 1. 3

2. 4

3. 2

4. 1

Question ID : 65497828451

Status : Not Answered

Chosen Option : --

Q.19 रिक्त स्थान भरने के लिए सबसे उपयुक्त शब्द का चयन करें।

_____ से गहने बनते हैं।

Ans 1. टीन

2. सोने

3. लोहे

4. सोना

Question ID : 65497828441

Status : Not Answered

Chosen Option : --

Q.20 सद्भाव - रेखांकित शब्द का सही विलोम बताइए-

Ans 1. दुर्भाव

2. गुस्सा

3. स्वभाव

4. क्षम्य

Question ID : 65497828457

Status : Not Answered

Chosen Option : --

Comprehension:

गद्यांश को पढ़कर पूछे गये प्रश्नों के उत्तर लिखिए-

एक साधु थे। भिक्षाटन से मजे से दिन गुजारते और आनंदपूर्वक भजन करते थे। एक दिन महत्वाकांक्षा सिर पर चढ़ी, झोपड़ी के चूहों से निपटने के लिए एक बिल्ली पाली। बिल्ली के लिए दूध की जरूरत पड़ी - तो गाय खरीद कर लाए। गाय को साज-संभाल के लिए महिला की आवश्यकता पड़ी। महिला से शादी कर ली। परिवार बना। संत बनकर लोक कल्याण करने का लक्ष्य कहीं से कहीं चला गया। भौतिक आकांक्षाओं का जाल-जंजाल इतना बढ़ गया कि परमार्थ का लक्ष्य पूरा करने के लिए कुछ भी नहीं बचता था। सारी क्षमता उसी में खत्म जाती थी। सपनों का जमघट ही शेष रह जाता है। कहने का तात्पर्य यह है कि हमें हमारे लक्ष्य की ओर ध्यान देना चाहिए।

SubQuestion No : 21

Q.21 साधु अपना निर्वाह _____ करके करता था। रिक्त स्थान की पूर्ति कीजिए।

Ans 1. भिक्षाटन करके

2. बच्चों को पढ़ाकर

3. नौकरी करके

4. खेती करके

Question ID : 65497828461

Status : Not Answered

Chosen Option : --

Comprehension:

गद्यांश को पढ़कर पूछे गये प्रश्नों के उत्तर लिखिए-

एक साधु थे। भिक्षाटन से मजे से दिन गुजारते और आनंदपूर्वक भजन करते थे। एक दिन महत्वाकांक्षा सिर पर चढ़ी, झोपड़ी के चूहों से निपटने के लिए एक बिल्ली पाली। बिल्ली के लिए दूध की जरूरत पड़ी - तो गाय खरीद कर लाए। गाय को साज-संभाल के लिए महिला की आवश्यकता पड़ी। महिला से शादी कर ली। परिवार बना। संत बनकर लोक कल्याण करने का लक्ष्य कहीं से कहीं चला गया। भौतिक आकांक्षाओं का जाल-जंजाल इतना बढ़ गया कि परमार्थ का लक्ष्य पूरा करने के लिए कुछ भी नहीं बचता था। सारी क्षमता उसी में खत्म जाती थी। सपनों का जमघट ही शेष रह जाता है। कहने का तात्पर्य यह है कि हमें हमारे लक्ष्य की ओर ध्यान देना चाहिए।

SubQuestion No : 22**Q.22 'आवश्यकता' के स्थान पर उचित शब्द लिखिए।**

- Ans
- 1. अक्लमंद
 - 2. जरूरत
 - 3. परिश्रम
 - 4. अवश्य

Question ID : 65497828462

Status : Not Answered

Chosen Option : --

Comprehension:

गद्यांश को पढ़कर पूछे गये प्रश्नों के उत्तर लिखिए-

एक साधु थे। भिक्षाटन से मजे से दिन गुजारते और आनंदपूर्वक भजन करते थे। एक दिन महत्वाकांक्षा सिर पर चढ़ी, झोपड़ी के चूहों से निपटने के लिए एक बिल्ली पाली। बिल्ली के लिए दूध की जरूरत पड़ी - तो गाय खरीद कर लाए। गाय को साज-संभाल के लिए महिला की आवश्यकता पड़ी। महिला से शादी कर ली। परिवार बना। संत बनकर लोक कल्याण करने का लक्ष्य कहीं से कहीं चला गया। भौतिक आकांक्षाओं का जाल-जंजाल इतना बढ़ गया कि परमार्थ का लक्ष्य पूरा करने के लिए कुछ भी नहीं बचता था। सारी क्षमता उसी में खत्म जाती थी। सपनों का जमघट ही शेष रह जाता है। कहने का तात्पर्य यह है कि हमें हमारे लक्ष्य की ओर ध्यान देना चाहिए।

SubQuestion No : 23**Q.23 महत्वाकांक्षा रेखांकित शब्द का उचित अर्थ लिखिए।**

- Ans
- 1. दयालु
 - 2. लायक न होना
 - 3. उन्नति को प्राप्त करने की इच्छा
 - 4. बलवान होना

Question ID : 65497828463

Status : Not Answered

Chosen Option : --

Comprehension:

गद्यांश को पढ़कर पूछे गये प्रश्नों के उत्तर लिखिए-

एक साधु थे। भिक्षाटन से मजे से दिन गुजारते और आनंदपूर्वक भजन करते थे। एक दिन महत्वाकांक्षा सिर पर चढ़ी, झोपड़ी के चूहों से निपटने के लिए एक बिल्ली पाली। बिल्ली के लिए दूध की जरूरत पड़ी - तो गाय खरीद कर लाए। गाय को साज-संभाल के लिए महिला की आवश्यकता पड़ी। महिला से शादी कर ली। परिवार बना। संत बनकर लोक कल्याण करने का लक्ष्य कहीं से कहीं चला गया। भौतिक आकांक्षाओं का जाल-जंजाल इतना बढ़ गया कि परमार्थ का लक्ष्य पूरा करने के लिए कुछ भी नहीं बचता था। सारी क्षमता उसी में खत्म जाती थी। सपनों का जमघट ही शेष रह जाता है। कहने का तात्पर्य यह है कि हमें हमारे लक्ष्य की ओर ध्यान देना चाहिए।

SubQuestion No : 24**Q.24 परमार्थ- रेखांकित शब्द का विलोम बताइए।**

- Ans
- 1. दुष्ट
 - 2. स्वार्थ
 - 3. क्रोधी
 - 4. लालची

Question ID : 65497828464

Status : Not Answered

Chosen Option : --

Comprehension:

गद्यांश को पढ़कर पूछे गये प्रश्नों के उत्तर लिखिए-

एक साधु थे। भिक्षाटन से मजे से दिन गुजारते और आनंदपूर्वक भजन करते थे। एक दिन महत्वाकांक्षा सिर पर चढ़ी, झोपड़ी के चूहों से निपटने के लिए एक बिल्ली पाली। बिल्ली के लिए दूध की जरूरत पड़ी - तो गाय खरीद कर लाए। गाय को साज-संभाल के लिए महिला की आवश्यकता पड़ी। महिला से शादी कर ली। परिवार बना। संत बनकर लोक कल्याण करने का लक्ष्य कहीं से कहीं चला गया। भौतिक आकांक्षाओं का जाल-जंजाल इतना बढ़ गया कि परमार्थ का लक्ष्य पूरा करने के लिए कुछ भी नहीं बचता था। सारी क्षमता उसी में खत्म जाती थी। सपनों का जमघट ही शेष रह जाता है। कहने का तात्पर्य यह है कि हमें हमारे लक्ष्य की ओर ध्यान देना चाहिए।

SubQuestion No : 25

Q.25 झोपड़ी के चूहों से निपटने के लिए साधु ने क्या किया?

Ans ✓ 1. बिल्ली पाली

✗ 2. दवा डालकर चूहों को मार दिया।

✗ 3. कुत्ते को पाला

✗ 4. कुछ भी नहीं किया

Question ID : 65497828465

Status : Not Answered

Chosen Option : --

Bankers Adda
मेधावती

| | |
|-------------|--------------------|
| | |
| | |
| | |
| Exam Date | 16/11/2021 |
| Exam Time : | 12:30 PM - 2:00 PM |
| Subject | Constable GD 2021 |

Section : Part A General Intelligence and Reasoning

Q.1 Four letter-clusters have been given, out of which three are alike in some manner and one is different. Select the letter-cluster that is different.

- Ans
- 1. FDB
 - 2. OMK
 - 3. JHF
 - 4. USP

Question ID : 65497829500
Status : Answered
Chosen Option : 4

Q.2 In a certain code language, 'MANGO' is written as 'QERKS' and 'APPLE' is written as 'ETTPI'. How will 'GUAVA' be written in that language?

- Ans
- 1. KYFXF
 - 2. KYGZE
 - 3. KYEZE
 - 4. KXEZE

Question ID : 65497829482
Status : Answered
Chosen Option : 3

Q.3 In a certain code language, GAME is written as TUZANOVW, and CAR is written as XYZAIJ. How will POST be written in that language?

- Ans
- 1. OQNPRTSV
 - 2. QRPQTUUV
 - 3. KLLMHIGH
 - 4. KLMNJKGH

Question ID : 65497829505
Status : Answered
Chosen Option : 3

Q.4 Select the option that is related to the third number in the same way as the second number is related to the first number.

20 : 480 :: 25 : ?

- Ans
- 1. 700
 - 2. 725
 - 3. 655
 - 4. 625

Question ID : 65497829488
Status : Answered
Chosen Option : 2

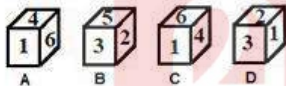
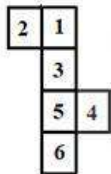
Q.5 Select the option that is related to the third term in the same way as the second term is related to the first term.

ZYGOTE : ZYTOGE :: SEQUENCE : ?

- Ans
- 1. USQNEEEC
 - 2. USQENCEE
 - 3. SUQNEEEC
 - 4. USNQEEEC

Question ID : 65497829504
Status : Marked For Review
Chosen Option : 2

Q.6 Select the dice that can be formed by folding the given sheet along the lines.



- Ans
- 1. Only B and D
 - 2. Only B, C and D
 - 3. Only B
 - 4. Only A and C

Question ID : 65497829490
Status : Answered
Chosen Option : 2

Q.7 Aditi is the daughter of Sanket. Vritti is the daughter of Ankit. Kriti is the mother of Mahi. Neeta is Sanket's wife. Neeta is the mother-in-law of Vritti's mother Kriti. Which of the following statements is NOT correct?

- Ans
- 1. Ankit is the father of Mahi.
 - 2. Vritti is the sister of Mahi.
 - 3. Aditi is the daughter of Neeta.
 - 4. Kriti is the daughter of Sanket.

Question ID : 65497829506
Status : Answered
Chosen Option : 4

Q.8 If 'A' denotes 'addition', 'B' denotes 'multiplication', 'C' denotes 'subtraction', and 'D' denotes 'division', then what will be the value of the following expression?

100 D (1 B 4) A 2 B (13 A 11) C 3 B (17 C 12)


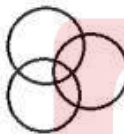
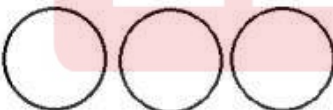
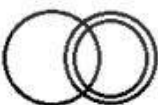
- Ans
- 1. 52
 - 2. 58
 - 3. 49
 - 4. 60

Question ID : 65497829489
Status : Answered
Chosen Option : 2

Q.9 Select the Venn diagram that best represents the relationship between the following classes.

School, Teacher, Employee

Ans

- 1. 
- 2. 
- 3. 
- 4. 

Question ID : 65497829499
Status : Answered
Chosen Option : 1

Q.10 Select the number from among the given options that can replace the question mark (?) in the following series.

5, 9, 18, 34, ?, 95

- Ans
- 1. 65
 - 2. 69
 - 3. 63
 - 4. 59

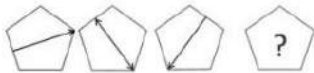
Question ID : 65497829502
Status : Answered
Chosen Option : 4

Q.11 Four number triads have been given, out of which three are alike in some manner and one is different. Select the number triad that is different.

- Ans
- 1. (46, 65, 82)
 - 2. (54, 73, 90)
 - 3. (21, 40, 57)
 - 4. (39, 48, 75)

Question ID : 65497829484
Status : Answered
Chosen Option : 4

Q.12 Select the figure from among the given options that can replace the question mark (?) in the following series.



Ans

- 1.
- 2.
- 3.
- 4.

Question ID : 65497829495
Status : Answered
Chosen Option : 4

Q.13 Select the correct option that indicates the arrangement of the given words in the order in which they appear in an English dictionary.

1. Dermatitis
2. Desistance
3. Derogation
4. Descendant
5. Dereliction

Ans 1. 5, 4, 1, 3, 2
 2. 5, 1, 3, 2, 4
 3. 5, 2, 1, 3, 4
 4. 5, 1, 3, 4, 2

Question ID : 65497829492

Status : Answered

Chosen Option : 4

Q.14 Select the combination of letters that when sequentially placed in the blanks of the given series will complete the series.

A _ _ B _ _ A B _ C A _ B B C

Ans 1. B, C, A, A, A, B
 2. B, A, B, A, C, B
 3. A, B, C, A, B, A
 4. B, B, C, C, A, B

Question ID : 65497829493

Status : Answered

Chosen Option : 3

Q.15 O, P, Q, R, S, T and U are sitting in a row facing north. U is sitting to the immediate right of T. Q is sitting in between R and O. P, who is on the extreme right, is sitting to the immediate right of O. S is sitting to the immediate left of R. Who is sitting in the middle of the row?

Ans 1. S
 2. R
 3. T
 4. Q

Question ID : 65497829498

Status : Answered

Chosen Option : 2

Q.16 Read the given statements and conclusions carefully. Assuming that the information given in the statements is true, even if it appears to be at variance with commonly known facts, decide which of the given conclusions logically follow(s) from the statements.

Statements:

Some cats are animals.
All animals are plants.

Conclusions:

I. All cats are plants.
II. Some plants are cats.
III. Some plants are animals.
IV. All animals are cats.

- Ans
- 1. Only conclusion I follows
 - 2. All the conclusions follow
 - 3. Only conclusions I, II and III follow
 - 4. Only conclusions II and III follow

Question ID : 65497829483

Status : Answered

Chosen Option : 4

Q.17 Six friends are sitting in a straight line. E is 4th from the right. E is between B and D. A is adjacent to B. D is adjacent to C. D is between E and C. F is adjacent to C. Who is sitting between F and D?

- Ans
- 1. A
 - 2. E
 - 3. C
 - 4. B

Question ID : 65497829487

Status : Answered

Chosen Option : 3

Q.18 Select the number from among the given options that can replace the question mark (?) in the following series.

153, 149, 143, 135, ?

- Ans
- 1. 131
 - 2. 125
 - 3. 129
 - 4. 127

Question ID : 65497829494

Status : Answered

Chosen Option : 2

Q.19 If the diagonal of a square is increased by 4 cm, its area increases by 56 cm^2 . Find the ratio of the new area of the square to the initial area of the square.

- Ans
- 1. 16 : 9
 - 2. 13 : 8
 - 3. 18 : 11
 - 4. 12 : 5

Question ID : 65497829485

Status : Not Answered

Chosen Option : --

Q.20 Select the letter-cluster from among the given options that can replace the question mark (?) in the following series.

IOM, NTR, SYW, ?

Ans ✓ 1. XDB

✗ 2. JPN

✗ 3. NSX

✗ 4. OTZ

Question ID : 65497829496

Status : Answered

Chosen Option : 1

Q.21 Select the correct mirror image of the given combination when the mirror is placed at 'PQ' as shown.

MERCHANT |
P
Q

Ans ✓ 1. TИAHCЯEM

✗ 2. MEBCNVI

✗ 3. TИCHЯEM

✗ 4. MEBCNVI

Question ID : 65497829503

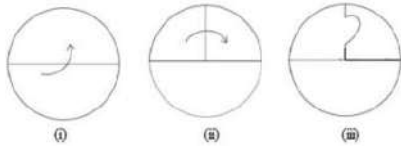
Status : Answered

Chosen Option : 1

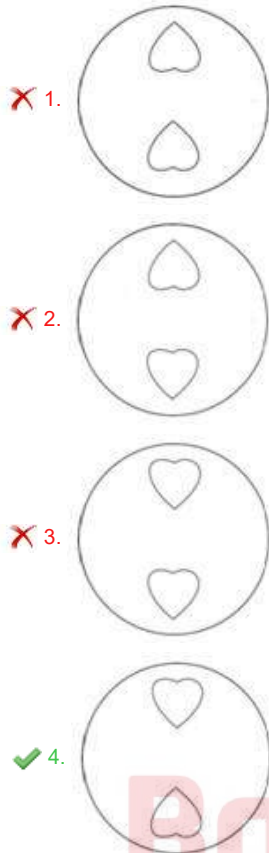
Bankers Adda

മലയാളം

Q.22 The sequence of folding a piece of paper and the manner in which the folded paper has been cut is shown in the following figures. How would this paper look when unfolded?



Ans



Question ID : 65497829486

Status : Answered

Chosen Option : 4

Q.23 In a certain code language, 'PHENYL' is coded as '9-11-17-8-5-13' and 'COLONY' is coded as '6-12-13-12-8-5'. How will 'COLONEL' be coded in that language?

- Ans**
- 1. 6-12-12-13-8-17-13
 - 2. 6-12-13-12-8-17-13
 - 3. 6-12-12-13-8-11-13
 - 4. 6-17-12-13-8-13-11

Question ID : 65497829501

Status : Answered

Chosen Option : 2

Q.24 Select the option in which the given figure is embedded (rotation is NOT allowed).



Ans

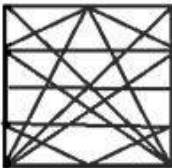
1.



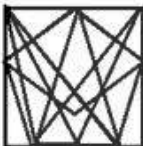
2.



3.



4.



Question ID : 65497829491
Status : Answered
Chosen Option : 3

Q.25 'Experimenter' is related to 'Lab' in the same way as 'Chef' is related to '_____':

Ans

1. Cooking

2. Food

3. Dishes

4. Kitchen

Question ID : 65497829497
Status : Answered
Chosen Option : 4

Section : Part B General Knowledge and General Awareness

Q.1 _____ launched the Fit India Mobile App at an event at Major Dhyan Chand National Stadium, New Delhi in August 2021.

Ans

1. Anurag Singh Thakur

2. Nisith Pramanik

3. Ravi Mittal

4. Usha Sharma

Question ID : 65497829530
Status : Answered
Chosen Option : 1

Q.2 The acceleration of an object is said to be _____ when an object travels in a straight line and its velocity increases or decreases by equal amount in equal intervals of time.

- Ans
- 1. negative
 - 2. non-uniform
 - 3. uniform
 - 4. positive

Question ID : 65497829516
Status : Answered
Chosen Option : 3

Q.3 Who was appointed as the State Election Commissioner of Jammu and Kashmir on October 30, 2020?

- Ans
- 1. Kewal Kumar Sharma
 - 2. V Bhaskaran
 - 3. Shatrunjay Kumar Singh
 - 4. Manoj Kumar

Question ID : 65497829520
Status : Not Answered
Chosen Option : --

Q.4 Which of the following animals breathes through its skin?

- Ans
- 1. Frog
 - 2. Rabbit
 - 3. Peacock
 - 4. Deer

Question ID : 65497829514
Status : Answered
Chosen Option : 1

Q.5 Which of the following is the most reactive metal?

- Ans
- 1. Silver
 - 2. Aluminium
 - 3. Iron
 - 4. Potassium

Question ID : 65497829513
Status : Answered
Chosen Option : 4

Q.6 Which non-metal among the following is poly-atomic?

- Ans
- 1. Sulphur
 - 2. Argon
 - 3. Oxygen
 - 4. Helium

Question ID : 65497829525
Status : Answered
Chosen Option : 1

Q.7 Who among the following was appointed as the first Municipal Commissioner of Bombay in 1865?

- Ans
- 1. William Hunter
 - 2. Charles Atkinson
 - 3. H Fowler
 - 4. Arthur Crawford

Question ID : 65497829510
Status : Not Answered
Chosen Option : --

Q.8 'La Liga' title is associated with _____.

- Ans
- 1. tennis
 - 2. football
 - 3. cricket
 - 4. sprinting

Question ID : 65497829508
Status : Answered
Chosen Option : 2

Q.9 In which of the following states is the Boramdeo temple located, where each year in the last week of March 'Bhoramdeo Mahotsav' is celebrated?

- Ans
- 1. West Bengal
 - 2. Karnataka
 - 3. Tamil Nadu
 - 4. Chhattisgarh

Question ID : 65497829512
Status : Answered
Chosen Option : 1

Q.10 Who became the first Indian Air Force pilot to perform a wingsuit skydive jump? S/he achieved this feat in July 2019.

- Ans
- 1. Shital Mahajan Rane
 - 2. Archana Sardana
 - 3. Rachel Thomas
 - 4. Tarun Chaudhri

Question ID : 65497829518
Status : Not Answered
Chosen Option : --

Q.11 _____ was the son of a Chief of the Jnatrika (or Jhatrika) Kshatriya clan.

- Ans
- 1. Gautama Buddha
 - 2. Rishabhanath
 - 3. Vardhamana Mahavira
 - 4. Parshvanath

Question ID : 65497829527
Status : Not Answered
Chosen Option : --

Q.12 _____ was the residence of the Mughal emperors of India for nearly 200 years until 1857.

- Ans
- 1. Jehangir Mahal
 - 2. Red Fort
 - 3. Agra Fort
 - 4. Pari Mahal

Question ID : 65497829521
Status : Answered
Chosen Option : 3

Q.13 Which of the following states won the 'Best Tableau' award at the 71st Republic Day parade in January 2020?

- Ans
- 1. Assam
 - 2. Goa
 - 3. Odisha
 - 4. Uttar Pradesh

Question ID : 65497829523
Status : Answered
Chosen Option : 4

Q.14 The Uttar Pradesh cabinet approved a proposal to name a zoological garden at _____ after the freedom fighter and revolutionary Ashfaqullah Khan.

- Ans
- 1. Gorakhpur
 - 2. Faizabad
 - 3. Shahjahanpur
 - 4. Ghaziabad

Question ID : 65497829517
Status : Answered
Chosen Option : 1

Q.15 Which of the following statements about the Mahanadi river is INCORRECT?

- Ans
- 1. It rises in the highlands of Chhattisgarh.
 - 2. It drains into the Arabian Sea.
 - 3. A part of its river basin lies in Maharashtra.
 - 4. It is about 860 km long.

Question ID : 65497829522
Status : Answered
Chosen Option : 2

Q.16 Who is the author of the book 'Courts of India: Past to Present'?

- Ans
- 1. Shashi Tharoor
 - 2. Satyarth Nayak
 - 3. Jayanta Kalita
 - 4. Ranjan Gogoi

Question ID : 65497829515
Status : Answered
Chosen Option : 4

Q.17 The Government of India approved the Ayushman Bharat Pradhan Mantri Jan Arogya Yojana (AB-PM-JAY) in the year _____.

- Ans 1. 2018
 2. 2014
 3. 2019
 4. 2015

Question ID : 65497829531
Status : Answered
Chosen Option : 3

Q.18 The money value of all the final goods and services produced within the country during a particular year is called _____.

- Ans 1. per capita income
 2. net Domestic Product
 3. national Income
 4. gross Domestic Product

Question ID : 65497829511
Status : Answered
Chosen Option : 4

Q.19 Which of the following options gives the correct chronological order of rulers of the Mauryan Empire?

- Ans 1. Brihadratha - Chandragupta - Bindusara - Ashoka
 2. Ashoka - Brihadratha - Chandragupta - Bindusara
 3. Chandragupta - Bindusara - Ashoka - Brihadratha
 4. Bindusara - Chandragupta - Ashoka - Brihadratha

Question ID : 65497829528
Status : Answered
Chosen Option : 3

Q.20 Which of the following is NOT a fundamental right under the 44th Amendment Act, 1978 of Indian constitution?

- Ans 1. Right to property
 2. Right to equality
 3. Right against exploitation
 4. Right to religion

Question ID : 65497829519
Status : Answered
Chosen Option : 1

Q.21 Which of the following countries hosted the 13th edition of the 2020 ICC Under 19 Cricket World Cup?

- Ans 1. England
 2. South Africa
 3. Australia
 4. India

Question ID : 65497829526
Status : Answered
Chosen Option : 2

Q.22 In which state is the Hogenakkal Falls located?

- Ans 1. Andhra Pradesh
 2. Kerala
 3. Maharashtra
 4. Tamil Nadu

Question ID : 65497829507
Status : Not Answered
Chosen Option : --

Q.23 The Life Insurance Corporation of India Act was passed by the Parliament in the year _____.

- Ans 1. 1956
 2. 1948
 3. 1971
 4. 1965

Question ID : 65497829529
Status : Not Answered
Chosen Option : --

Q.24 Which of the following is a biometric enabled digital service for pensioners launched by the Government of India?

- Ans 1. Pradhan Mantri Jeevan Jyoti Beema Yojna
 2. Pradhan Mantri Mudra Yojna
 3. Pradhan Mantri Jan Dhan Yojna
 4. Jeevan Pramaan

Question ID : 65497829509
Status : Answered
Chosen Option : 4

Q.25 Tvesa Malik is an Indian _____ player.

- Ans 1. volleyball
 2. golf
 3. chess
 4. basketball

Question ID : 65497829524
Status : Not Answered
Chosen Option : --

Q.1 The value of $42 \div 9$ of $6 - [64 \div 48 \times 3 - 15 \div 8 \times (11 - 17) \div 9] \div 14$ is:

- Ans
- 1. $\frac{19}{36}$
 - 2. $\frac{7}{18}$
 - 3. $\frac{29}{72}$
 - 4. $\frac{5}{12}$

Question ID : 65497829551

Status : Not Answered

Chosen Option : --

Q.2 A can do $\frac{2}{5}$ of a work in 6 days and B can do 30% of the same work in 3 days. They worked together for 4 days. The remaining work was completed by C alone in 6 days. B and C together can complete 70% of the original work in:

- Ans
- 1. $5\frac{1}{2}$ days
 - 2. 4 days
 - 3. 5 days
 - 4. $4\frac{1}{2}$ days

Question ID : 65497829553

Status : Answered

Chosen Option : 4

Q.3 The amount of a certain sum in 3 years at simple interest at $x\%$ p.a. is ₹5,472 and the amount of the same sum in $7\frac{1}{2}$ years at the same rate, at simple interest is ₹6,930. The value of x is:

- Ans
- 1. 7.2
 - 2. 8.5
 - 3. 8
 - 4. 6.5

Question ID : 65497829555

Status : Not Answered

Chosen Option : --

Q.4 There are two sections A and B of a class, consisting of 38 and 42 students, respectively. If the average weight of the students of section A is 55 kg and that of section B is 32 kg, find the average weight of all the students in the class.

- Ans
- 1. 42 kg
 - 2. 42.925 kg
 - 3. 44.925 kg
 - 4. 40.925 kg

Question ID : 65497829537

Status : Answered

Chosen Option : 2

Q.5 A dealer sold an article at a loss of 4%. Had he sold it for ₹120 more, he would have gained 8%. To gain 11%, he should sell the article for?

- Ans**
- ✓ 1. ₹1,110
 - ✗ 2. ₹1,200
 - ✗ 3. ₹1,320
 - ✗ 4. ₹1,210

Question ID : 65497829549
Status : Answered
Chosen Option : 1

Q.6 A sum fetched a simple interest of ₹3,040 at the rate of 8 % p.a. in 5 years. What is the sum?

- Ans**
- ✗ 1. ₹8,600
 - ✓ 2. ₹7,600
 - ✗ 3. ₹7,700
 - ✗ 4. ₹6,600

Question ID : 65497829539
Status : Answered
Chosen Option : 2

Q.7 The greatest number that on dividing 2675 and 2320 leaves the remainders 5 and 6, respectively, is:

- Ans**
- ✗ 1. 168
 - ✗ 2. 170
 - ✗ 3. 187
 - ✓ 4. 178

Question ID : 65497829536
Status : Answered
Chosen Option : 4

Q.8 Speed of an aircraft is 120 km/min. This speed in m/sec is:

- Ans**
- ✗ 1. 120000
 - ✗ 2. 12000
 - ✗ 3. 1200
 - ✓ 4. 2000

Question ID : 65497829543
Status : Answered
Chosen Option : 4

Q.9 A and B can complete a piece of work in 120 days, B and C can complete it in 150 days, and A and C can complete it in 200 days. In how many days can B alone complete two-fifths of the same work?

- Ans**
- 1. 200
 - 2. 100
 - 3. 80
 - 4. 175

Question ID : 65497829547
Status : Answered
Chosen Option : 3

Q.10 If the sides of a triangle measure 21 cm, 35 cm and 28 cm, what is the measure of its in radius? (in cm)

- Ans**
- 1. 8 cm
 - 2. 7 cm
 - 3. 21 cm
 - 4. 9 cm

Question ID : 65497829541
Status : Not Answered
Chosen Option : --

Q.11 After giving a discount of 20% on the marked price of an article, it is sold for ₹120. Had the discount not been given, the profit would have been 20%. What is the cost price of the article?

- Ans**
- 1. ₹120
 - 2. ₹130
 - 3. ₹100
 - 4. ₹125

Question ID : 65497829550
Status : Answered
Chosen Option : 4

Q.12 A discount of 20% on the price of an article is the same as a discount of 25% on the price of another article. The prices of the two articles will be, respectively:

- Ans**
- 1. ₹40 and ₹50
 - 2. ₹60 and ₹50
 - 3. ₹50 and ₹40
 - 4. ₹50 and ₹60

Question ID : 65497829545
Status : Answered
Chosen Option : 3

Q.13 The sides of a triangular park are 96 m, 110 m and 146 m. Its area is equal to the area of a field in the shape of a rhombus, one of whose diagonals is 60 m. The length (in m) of its other diagonal is:

- Ans
- 1. 176
 - 2. 132
 - 3. 218
 - 4. 88

Question ID : 65497829556
Status : Not Answered
Chosen Option : --

Q.14 What is the third proportional to 9 and 36?

- Ans
- 1. 72
 - 2. 288
 - 3. 144
 - 4. 122

Question ID : 65497829540
Status : Answered
Chosen Option : 3

Q.15 Solve the following:

$$523 + 523 \times 523 \div 523$$

- Ans
- 1. 1005
 - 2. 1235
 - 3. 1542
 - 4. 1046

Question ID : 65497829542
Status : Answered
Chosen Option : 4

Q.16 A shopkeeper has some toys. He sells two-third of the toys at a profit of 35% and the remaining toys at 10% loss. What is his overall percentage of profit?

- Ans
- 1. 16%
 - 2. 20%
 - 3. 18%
 - 4. 25%

Question ID : 65497829552
Status : Answered
Chosen Option : 2

Q.17 Two trains start from places A and B, respectively, and travel towards each other at the speeds of 60 km/h and 50 km/h, respectively. By the time they meet, the faster train has travelled 110 km more than the slower train. What is the distance between A and B?

- Ans**
- 1. 1100 km
 - 2. 1200 km
 - 3. 1150 km
 - 4. 1210 km

Question ID : 65497829548
Status : Answered
Chosen Option : 4

Q.18 The ratio of two numbers is 9 : 5. If 8 is added to the larger number and 4 is subtracted from the smaller number, the greater number becomes twice the smaller number. The larger number is:

- Ans**
- 1. 110
 - 2. 104
 - 3. 144
 - 4. 114

Question ID : 65497829538
Status : Answered
Chosen Option : 3

Q.19 Vignesh spends 42% of his monthly salary on food, 16% on house rent, 11% on entertainment and 7% on conveyance. But due to some family function, he has to borrow ₹12,000 from a money lender to meet the expenses of ₹18,000. What is his monthly salary?

- Ans**
- 1. ₹20,000
 - 2. ₹24,000
 - 3. ₹30,000
 - 4. ₹25,000

Question ID : 65497829535
Status : Answered
Chosen Option : 4

Q.20 The average of 4, 6, 8, 12 and x is 7 and the average of x , 9, 13, 15 and y is 9. What is the value of $2x - 3y$?

- Ans**
- 1. 5
 - 2. 3
 - 3. 19
 - 4. 1

Question ID : 65497829544
Status : Answered
Chosen Option : 4

Q.21 If the compound interest on a certain sum of money for two years at 9% p.a. is ₹3,762, then the sum is:

- Ans
- 1. ₹20,000
 - 2. ₹18,000
 - 3. ₹25,000
 - 4. ₹24,000

Question ID : 65497829533
Status : Answered
Chosen Option : 1

Q.22 The ratio of the ages of A, B and C, 5 years ago, was 4 : 5 : 7. The sum of their present ages is 135 years. What will be the sum of the ages (in years) of B and C, 3 years from now?

- Ans
- 1. 100
 - 2. 96
 - 3. 106
 - 4. 112

Question ID : 65497829554
Status : Answered
Chosen Option : 2

Q.23 Three numbers are in the ratio 4 : 9 : 13 and their LCM is 2340. Their HCF is:

- Ans
- 1. 7
 - 2. 3
 - 3. 4
 - 4. 5

Question ID : 65497829534
Status : Answered
Chosen Option : 4

Q.24 A man sells two articles at ₹9,180 each. He gains 8% on one article and loses 15% on the other. His overall profit or loss is:

- Ans
- 1. Profit ₹840
 - 2. Loss ₹840
 - 3. Loss ₹940
 - 4. Profit ₹940

Question ID : 65497829532
Status : Not Answered
Chosen Option : --

Q.25 The price of a car increased by 5% while its sales decreased by 16%. What is the percentage change in the total revenue?

- Ans
- 1. 5% decrease
 - 2. 9% increase
 - 3. 9% decrease
 - 4. 5% increase

Question ID : 65497829546
Status : Not Answered
Chosen Option : --

Q.1 Select the most appropriate meaning of the given idiom.

To be on the same page

- Ans
- 1. To be published together
 - 2. To read a book together
 - 3. To understand what the other says
 - 4. To agree on something

Question ID : 65497829571
Status : Answered
Chosen Option : 3

Q.2 Select the option that can be used as a one-word substitute for the given group of words.

One who collects coins

- Ans
- 1. Fatalist
 - 2. Philatelist
 - 3. Numismatist
 - 4. Anthropologist

Question ID : 65497829567
Status : Answered
Chosen Option : 3

Q.3 Select the most appropriate ANTONYM of the given word.

Spellbound

- Ans
- 1. Amazed
 - 2. Captivated
 - 3. Enthralled
 - 4. Disenchanted

Question ID : 65497829569
Status : Answered
Chosen Option : 4

Q.4 The following sentence has been split into four segments. Identify the segment that contains a grammatical error.

We'll look at / your pet / when you go / on a vacation.

- Ans
- 1. We'll look at
 - 2. on a vacation
 - 3. when you go
 - 4. your pet

Question ID : 65497829574
Status : Answered
Chosen Option : 1

Q.5 Select the most appropriate option that can substitute the underlined word in the given sentence.

Besides generating revenue, tourism brings a break from the ceremony of daily life.

- Ans
- 1. scrutiny
 - 2. symphony
 - 3. monotony
 - 4. company

Question ID : 65497829559
Status : Answered
Chosen Option : 3

Q.6 Select the correctly spelt word.

- Ans
- 1. Asassination
 - 2. Bureaucracy
 - 3. Philanthropist
 - 4. Peadeatrician

Question ID : 65497829568
Status : Answered
Chosen Option : 2

Q.7 Select the most appropriate meaning of the given idiom.

Tickled pink

- Ans
- 1. Fond of pink
 - 2. Very sensitive
 - 3. Very pleased
 - 4. Easily teased

Question ID : 65497829560
Status : Answered
Chosen Option : 3

Q.8 Select the most appropriate option to fill in the blank.

My sister bought the _____ watch.

- Ans
- 1. antipathy
 - 2. colloquial
 - 3. antilocal
 - 4. antique

Question ID : 65497829570
Status : Answered
Chosen Option : 4

Q.9 Select the most appropriate SYNONYM of the given word.

Ample

- Ans 1. Sparse
 2. Sufficient
 3. Limited
 4. Scarce

Question ID : 65497829575
Status : Answered
Chosen Option : 2

Q.10 Select the option that can be used as a one-word substitute for the given group of words.

Many fish swimming together

- Ans 1. Shoal
 2. Bevy
 3. Brood
 4. Flock

Question ID : 65497829561
Status : Answered
Chosen Option : 3

Q.11 Select the option that can be used as a one-word substitute for the given group of words.

A person who supervises during an examination

- Ans 1. Invigilator
 2. Examinee
 3. Principal
 4. Administrator

Question ID : 65497829576
Status : Answered
Chosen Option : 1

Q.12 The following sentence has been split into four segments. Identify the segment that contains a grammatical error.

The most important / of all my goals / are to/ learn English.

- Ans 1. of all my goals
 2. The most important
 3. are to
 4. learn English

Question ID : 65497829557
Status : Answered
Chosen Option : 3

Q.13 Select the most appropriate option that can substitute the underlined segment in the given sentence. If there is no need to substitute it, select 'No substitution required'.

The condition of the house had been so deteriorated from lack of maintenance that nobody wanted to purchase it.

- Ans
- 1. No substitution required
 - 2. was deteriorating
 - 3. was so deteriorated
 - 4. had so deteriorated

Question ID : 65497829572
Status : Answered
Chosen Option : 3

Q.14 Select the most appropriate synonym of the given word.

Submissive

- Ans
- 1. Adamant
 - 2. Obdurate
 - 3. Obedient
 - 4. Obstinate

Question ID : 65497829558
Status : Answered
Chosen Option : 4

Q.15 Select the option that will improve the underlined part of the given sentence. In case no improvement is needed, select 'No improvement required'.

The new President has bring in many reforms.

- Ans
- 1. No improvement required
 - 2. brought about
 - 3. bring up
 - 4. brought out

Question ID : 65497829573
Status : Not Answered
Chosen Option : --

Q.16 Select the most appropriate ANTONYM of the given word.

Fictitious

- Ans
- 1. False
 - 2. Factual
 - 3. Imaginative
 - 4. Subjective

Question ID : 65497829566
Status : Answered
Chosen Option : 2

Q.17 Select the most appropriate option to fill in the blank.

She _____ why I had not sent her an invitation.

- Ans
- 1. granted
 - 2. enquired
 - 3. desired
 - 4. denied

Question ID : 65497829564
Status : Answered
Chosen Option : 2

Q.18 Select the most appropriate option to fill in the blank.

The government should take steps to _____ pollution.

- Ans
- 1. control
 - 2. convey
 - 3. conduct
 - 4. consume

Question ID : 65497829562
Status : Answered
Chosen Option : 1

Q.19 Select the INCORRECTLY spelt word.

- Ans
- 1. Wistle
 - 2. Cereal
 - 3. Tunnel
 - 4. Rustle

Question ID : 65497829563
Status : Answered
Chosen Option : 1

Q.20 The following sentence has been split into four segments. Identify the segment that contains a grammatical error.

I wish / I am / the Principal / of the school!

- Ans
- 1. I wish
 - 2. of the school
 - 3. I am
 - 4. the Principal

Question ID : 65497829565
Status : Answered
Chosen Option : 3

Comprehension:

In the following passage, some words have been deleted. Read the passage carefully and select the most appropriate option to fill in each blank.

Writing is a form (1)_____, and neat handwriting is important when writing (2)_____ that will be read by someone else. We (3)_____ by the quality of our handwriting, and (4)_____ our handwriting is poor, we (5)_____ to be lazy or incompetent.

SubQuestion No : 21

Q.21 Select the most appropriate option to fill in blank no. 1.

- Ans
- 1. in expression
 - 2. to expressing
 - 3. for expression
 - 4. of expression

Question ID : 65497829578

Status : Answered

Chosen Option : 4

Comprehension:

In the following passage, some words have been deleted. Read the passage carefully and select the most appropriate option to fill in each blank.

Writing is a form (1)_____, and neat handwriting is important when writing (2)_____ that will be read by someone else. We (3)_____ by the quality of our handwriting, and (4)_____ our handwriting is poor, we (5)_____ to be lazy or incompetent.

SubQuestion No : 22

Q.22 Select the most appropriate option to fill in blank no. 2.

- Ans
- 1. nothing
 - 2. everything
 - 3. anything
 - 4. each thing

Question ID : 65497829579

Status : Answered

Chosen Option : 3

Comprehension:

In the following passage, some words have been deleted. Read the passage carefully and select the most appropriate option to fill in each blank.

Writing is a form (1)_____, and neat handwriting is important when writing (2)_____ that will be read by someone else. We (3)_____ by the quality of our handwriting, and (4)_____ our handwriting is poor, we (5)_____ to be lazy or incompetent.

SubQuestion No : 23

Q.23 Select the most appropriate option to fill in blank no. 3.

- Ans
- 1. should be often judged
 - 2. are often judged
 - 3. have been often judged
 - 4. judged often

Question ID : 65497829580

Status : Answered

Chosen Option : 2

Comprehension:

In the following passage, some words have been deleted. Read the passage carefully and select the most appropriate option to fill in each blank.

Writing is a form (1)_____, and neat handwriting is important when writing (2)_____ that will be read by someone else. We (3)_____ by the quality of our handwriting, and (4)_____ our handwriting is poor, we (5)_____ to be lazy or incompetent.

SubQuestion No : 24**Q.24 Select the most appropriate option to fill in blank no. 4.**

- Ans
- 1. as
 - 2. while
 - 3. where
 - 4. when

Question ID : 65497829581

Status : Answered

Chosen Option : 4

Comprehension:

In the following passage, some words have been deleted. Read the passage carefully and select the most appropriate option to fill in each blank.

Writing is a form (1)_____, and neat handwriting is important when writing (2)_____ that will be read by someone else. We (3)_____ by the quality of our handwriting, and (4)_____ our handwriting is poor, we (5)_____ to be lazy or incompetent.

SubQuestion No : 25**Q.25 Select the most appropriate option to fill in blank no. 5.**

- Ans
- 1. appear
 - 2. see
 - 3. expose
 - 4. look

Question ID : 65497829582

Status : Answered

Chosen Option : 1

Section : Part D Hindi

Q.1 दिए गए वाक्य में रेखांकित खंड को प्रतिस्थापित करने के लिए सबसे उपयुक्त विकल्प का चयन करें। यदि इसे प्रतिस्थापित करने की आवश्यकता नहीं है, तो विकल्प 'किसी बदलाव की आवश्यकता नहीं है' का चयन करें।

भाई साहब को मुझे एक रुपया दिया है।

- Ans
- 1. भाई साहब द्वारा
 - 2. भाई साहब
 - 3. किसी बदलाव की आवश्यकता नहीं है।
 - 4. भाई साहब ने

Question ID : 65497829593

Status : Not Answered

Chosen Option : --

Q.2 रिक्त स्थान की पूर्ति के लिए सबसे उपयुक्त शब्द का चयन करें-

वह वृक्ष की _____ डाली काट रहा था।

- Ans
- 1. सुखी
 - 2. सखी
 - 3. सूखी
 - 4. सामान्य

Question ID : 65497829587
Status : Not Answered
Chosen Option : --

Q.3 रिक्त स्थान की पूर्ति के लिए सबसे उपयुक्त शब्द का चयन करें-

रोगी ने चिकित्सक से _____ लिया।

- Ans
- 1. मंत्रणा
 - 2. आज्ञा
 - 3. परामर्श
 - 4. अनुदान

Question ID : 65497829586
Status : Not Answered
Chosen Option : --

Q.4 दिए गए वाक्य का वह भाग ज्ञात करें जिसमें कोई त्रुटि है। यदि कोई त्रुटि नहीं है, तो 'कोई त्रुटि नहीं है' चुनें।

कई रेलवे के(1)/ कर्मचारियों की(2)/ गिरफ्तारी हुई।(3)/ कोई त्रुटि नहीं है।(4)

- Ans
- 1. 3
 - 2. 1
 - 3. 4
 - 4. 2

Question ID : 65497829594
Status : Not Answered
Chosen Option : --

Q.5 दिए गए वाक्य में रेखांकित खंड को प्रतिस्थापित करने के लिए सबसे उपयुक्त विकल्प का चयन करें। यदि इसे प्रतिस्थापित करने की आवश्यकता नहीं है, तो विकल्प 'किसी बदलाव की आवश्यकता नहीं है' का चयन करें।

रात दस बजे से दिल्ली में जंक्शन से हम कश्मीर मेल में सवार हुए।

- Ans
- 1. किसी बदलाव की आवश्यकता नहीं है।
 - 2. रात दस बजे तक दिल्ली में जंक्शन में हम
 - 3. रात दस बजे से, दिल्ली के जंक्शन से हम
 - 4. रात दस बजे, दिल्ली के जंक्शन से हम

Question ID : 65497829588
Status : Not Answered
Chosen Option : --

Q.6 'ऊपर की ओर जाने वाला' वाक्यांश के लिए एक शब्द होगा-

- Ans
- 1. आगामी
 - 2. प्रतिगामी
 - 3. ऊर्ध्वगामी
 - 4. अधोगामी

Question ID : 65497829601
Status : Not Answered
Chosen Option : --

Q.7 उस विकल्प का चयन करें जो निम्न मुहावरे का अर्थ व्यक्त करता है।

कलेजा ठंडा होना

- Ans
- 1. मन में शान्ति होना
 - 2. धीरज रखना
 - 3. प्रिय होना
 - 4. बहुत दुखी होना

Question ID : 65497829592
Status : Not Answered
Chosen Option : --

Q.8 दिए गए वाक्यांश के लिए एक शब्द दीजिए।

प्रार्थना या निवेदन करने वाला

- Ans
- 1. प्रार्थी
 - 2. स्तुति
 - 3. भक्त वत्सल
 - 4. भजन

Question ID : 65497829583
Status : Not Answered
Chosen Option : --

Q.9 दिए गए शब्द का विलोम चुनें।

निर्मल

- Ans
- 1. मैला
 - 2. गंदा
 - 3. मलिन
 - 4. विमल

Question ID : 65497829591
Status : Not Answered
Chosen Option : --

Q.10 'विशाल' का विलोम शब्द होगा-

- Ans
- 1. विराट
 - 2. क्षणिक
 - 3. लघु
 - 4. विकराल

Question ID : 65497829600
Status : Not Answered
Chosen Option : --

Q.11 दिए गए शब्द का समानार्थी शब्द चुनें-

युक्ति

- Ans 1. युक्त
 2. उपाय
 3. जुड़ा हुआ
 4. संलग्न

Question ID : 65497829595
Status : Not Answered
Chosen Option : --

Q.12 सही वर्तनी वाले शब्द का चयन करें।

- Ans 1. प्रलहाद
 2. प्रहलाद
 3. प्रल्हाद
 4. पहलाद

Question ID : 65497829590
Status : Not Answered
Chosen Option : --

Q.13 चंद्रमा के समान मुखवाला - वाक्यांश के लिए एक शब्द लिखिए-

- Ans 1. दसमुख
 2. चंद्रमुख
 3. लौहपुरुष
 4. गदाधर

Question ID : 65497829598
Status : Not Answered
Chosen Option : --

Q.14 सही वर्तनी वाले शब्द का चयन करें।

- Ans 1. वनस्पति
 2. बनस्पती
 3. वनस्पती
 4. वनास्पती

Question ID : 65497829589
Status : Not Answered
Chosen Option : --

Q.15 दिये गये वाक्य में रेखांकित अंश को प्रतिस्थापित करने के लिए सबसे उपयुक्त विकल्प का चयन करें।

उसे व्याकरण का अच्छा बोध है।

- Ans 1. आभास
 2. ज्ञान
 3. समझ
 4. भान

Question ID : 65497829596
Status : Not Answered
Chosen Option : --

Q.16 रिक्त स्थान की पूर्ति के लिए सबसे उपयुक्त विकल्प का चयन करें।

श्याम को रोगी पर _____ आ गई।

- Ans 1. दया
 2. क्षमा
 3. कृपा
 4. अनुकंपा

Question ID : 65497829602
Status : Not Answered
Chosen Option : --

Q.17 दिए गए वाक्य का वो भाग ज्ञात करें जिसमें कोई त्रुटि है। यदि कोई त्रुटि नहीं है, तो 'कोई त्रुटि नहीं है' चुनें।

शकीला भोपाली (1)\ प्रसिद्ध कव्वाली (2)\ गायकी हैं (3)\ कोई त्रुटि नहीं है (4)

- Ans 1. 2
 2. 4
 3. 3
 4. 1

Question ID : 65497829584
Status : Not Answered
Chosen Option : --

Q.18 दिये गये वाक्य के किस भाग में त्रुटि है?

मैंने सारा माल उसके हाथ में बेच दिया है।

- Ans 1. मैंने सारा माल
 2. दिया है।
 3. उसके हाथ में
 4. बेच

Question ID : 65497829599
Status : Not Answered
Chosen Option : --

Q.19 'आग में कूदना' मुहावरे का सही अर्थ है-

- Ans 1. मूर्ख होना
 2. मदद करना
 3. जान जोखिम में डालना
 4. पश्चाताप करना

Question ID : 65497829597
Status : Not Answered
Chosen Option : --

Q.20 दिए गए शब्द का समानार्थी शब्द बताइए-

कोयल

- Ans 1. काक
 2. कीर
 3. शिखी
 4. कोकिला

Question ID : 65497829585

Status : Not Answered

Chosen Option : --

Comprehension:

भारतवर्ष (1) _____ है और देश में भाषाएं चाहे जितनी भी हों, लेकिन उन सबके भीतर भारत की एक ही (2) _____ अपने को (3) _____ करती है। एक ही गंगोत्री का जल है जो अनेक नदियों में बह रहा है, एक ही सूर्य का (4) _____ है जो अनेक पात्रों में जगमगा रहा है और एक ही (5) _____ है जो अनेक छंदों में फूट रहा है। वेद, उपनिषद, रामायण और महाभारत – ये ही वे घाट हैं जहां पर हमारी सभी भाषाएं पानी पीती हैं।

निम्न प्रश्नों के उत्तर उपरोक्त गद्यांश के आधार पर दीजिए।

SubQuestion No : 21

Q.21 गद्यांश के रिक्त स्थान (1) के लिए सर्वाधिक उपयुक्त शब्द होगा-

- Ans 1. भिन्न
 2. एक
 3. अनेक
 4. प्रत्येक

Question ID : 65497829604

Status : Not Answered

Chosen Option : --

Comprehension:

भारतवर्ष (1) _____ है और देश में भाषाएं चाहे जितनी भी हों, लेकिन उन सबके भीतर भारत की एक ही (2) _____ अपने को (3) _____ करती है। एक ही गंगोत्री का जल है जो अनेक नदियों में बह रहा है, एक ही सूर्य का (4) _____ है जो अनेक पात्रों में जगमगा रहा है और एक ही (5) _____ है जो अनेक छंदों में फूट रहा है। वेद, उपनिषद, रामायण और महाभारत – ये ही वे घाट हैं जहां पर हमारी सभी भाषाएं पानी पीती हैं।

निम्न प्रश्नों के उत्तर उपरोक्त गद्यांश के आधार पर दीजिए।

SubQuestion No : 22

Q.22 गद्यांश के रिक्त स्थान (2) के लिए सर्वाधिक उपयुक्त शब्द होगा-

- Ans 1. परमात्मा
 2. आत्मा
 3. निष्ठा
 4. प्रतिष्ठा

Question ID : 65497829605

Status : Not Answered

Chosen Option : --

Comprehension:

भारतवर्ष (1) _____ है और देश में भाषाएं चाहे जितनी भी हों, लेकिन उन सबके भीतर भारत की एक ही (2) _____ अपने को (3) _____ करती है। एक ही गंगोत्री का जल है जो अनेक नदियों में बह रहा है, एक ही सूर्य का (4) _____ है जो अनेक पात्रों में जगमगा रहा है और एक ही (5) _____ है जो अनेक छंदों में फूट रहा है। वेद, उपनिषद, रामायण और महाभारत – ये ही वे घाट हैं जहां पर हमारी सभी भाषाएं पानी पीती हैं।

निम्न प्रश्नों के उत्तर उपरोक्त गद्यांश के आधार पर दीजिए।

SubQuestion No : 23

Q.23 गद्यांश के रिक्त स्थान (3) के लिए सर्वाधिक उपयुक्त शब्द होगा-

- Ans 1. संशोधित
 2. अभिव्यक्त
 3. अर्पित
 4. प्रदर्शित

Question ID : 65497829606

Status : Not Answered

Chosen Option : --

Comprehension:

भारतवर्ष (1) _____ है और देश में भाषाएं चाहे जितनी भी हों, लेकिन उन सबके भीतर भारत की एक ही (2) _____ अपने को (3) _____ करती है। एक ही गंगोत्री का जल है जो अनेक नदियों में बह रहा है, एक ही सूर्य का (4) _____ है जो अनेक पात्रों में जगमगा रहा है और एक ही (5) _____ है जो अनेक छंदों में फूट रहा है। वेद, उपनिषद, रामायण और महाभारत – ये ही वे घाट हैं जहां पर हमारी सभी भाषाएं पानी पीती हैं।

निम्न प्रश्नों के उत्तर उपरोक्त गद्यांश के आधार पर दीजिए।

SubQuestion No : 24

Q.24 गद्यांश के रिक्त स्थान (4) के लिए सर्वाधिक उपयुक्त शब्द होगा-

- Ans 1. रस
 2. चित्र
 3. दर्पण
 4. बिम्ब

Question ID : 65497829607

Status : Not Answered

Chosen Option : --

Comprehension:

भारतवर्ष (1) _____ है और देश में भाषाएं चाहे जितनी भी हों, लेकिन उन सबके भीतर भारत की एक ही (2) _____ अपने को (3) _____ करती है। एक ही गंगोत्री का जल है जो अनेक नदियों में बह रहा है, एक ही सूर्य का (4) _____ है जो अनेक पात्रों में जगमगा रहा है और एक ही (5) _____ है जो अनेक छंदों में फूट रहा है। वेद, उपनिषद, रामायण और महाभारत – ये ही वे घाट हैं जहां पर हमारी सभी भाषाएं पानी पीती हैं।

निम्न प्रश्नों के उत्तर उपरोक्त गद्यांश के आधार पर दीजिए।

SubQuestion No : 25

Q.25 गद्यांश के रिक्त स्थान (5) के लिए सर्वाधिक उपयुक्त शब्द होगा-

- Ans 1. भाव
 2. नाम
 3. बल
 4. अर्थ

Question ID : 65497829608

Status : Not Answered

Chosen Option : --

| | |
|-------------|-------------------|
| | |
| | |
| | |
| Exam Date | 16/11/2021 |
| Exam Time : | 4:00 PM - 5:30 PM |
| Subject | Constable GD 2021 |

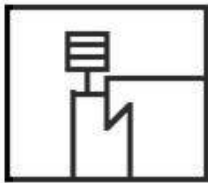
Section : Part A General Intelligence and Reasoning

Q.1 Select the option in which the given figure is embedded (rotation is NOT allowed).

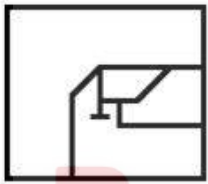


Ans

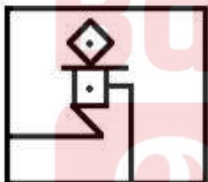
✗ 1.



✗ 2.



✗ 3.



✓ 4.



Question ID : 65497828854

Status : Answered

Chosen Option : 4

Q.2 Select the option that is related to the third number in the same way as the second number is related to the first number and the sixth number is related to the fifth number.

16 : 120 :: 18 : ? :: 22 : 231

- Ans 1. 134
 2. 153
 3. 531
 4. 513

Question ID : 65497828851
Status : Answered
Chosen Option : 2

Q.3 Select the correct mirror image of the given combination when the mirror is placed to its right side.

4 2 5 3 e f

- Ans 1. Ɔ ɹ ɹ ɹ Ɔ Ɔ Ɔ
 2. 4 5 2 3 e Ɔ
 3. Ɔ ɹ ɹ ɹ Ɔ Ɔ Ɔ
 4. Ɔ ɹ ɹ ɹ Ɔ Ɔ Ɔ

Question ID : 65497828871
Status : Answered
Chosen Option : 1

Q.4 Select the letter-cluster from among the given options that can replace the question mark (?) in the following series.

DOK, ENL, FMM, GLN, ?

- Ans 1. HLP
 2. HKO
 3. GHP
 4. GLO

Question ID : 65497828859
Status : Answered
Chosen Option : 2

Q.5 Select the number from among the given options that can replace the question mark (?) in the following series.

14, 15, 24, 49, 98, 179, ?

- Ans 1. 312
 2. 290
 3. 300
 4. 340

Question ID : 65497828870
Status : Answered
Chosen Option : 3

Q.6 Select the correct option that indicates the arrangement of the given words in the order in which they appear in an English dictionary.

1. Pitted
2. Pivot
3. Pixie
4. Pivotal
5. pity

- Ans**
- 1. 1, 5, 4, 2, 3
 - 2. 1, 2, 3, 4, 5
 - 3. 2, 1, 4, 5, 3
 - 4. 1, 5, 2, 4, 3

Question ID : 65497828855

Status : Answered

Chosen Option : 4

Q.7 Select the option that is related to the third letter-cluster in the same way as the second letter-cluster is related to the first letter-cluster.

HOST : FMQR :: DRON : ?

- Ans**
- 1. BPML
 - 2. BLMP
 - 3. BPLM
 - 4. BMPL

Question ID : 65497828847

Status : Answered

Chosen Option : 1

Q.8 (i) Anupama, Bavya, Chahal, Dilip, Sourab, Varun and Govind are sitting in a circle, facing the centre and playing cards.
(ii) Sourab is the neighbour of Anupama and Dilip.
(iii) Govind is not between Varun and Chahal.
(iv) Varun is to the immediate right of Anupama.
Which of the following pairs of persons is NOT sitting adjacent to each other?

- Ans**
- 1. Govind, Dilip
 - 2. Bavya, Anupama
 - 3. Chahal, Bavya
 - 4. Dilip, Sourab

Question ID : 65497828850

Status : Answered

Chosen Option : 2

Q.9 Read the given statements and conclusions carefully. Assuming that the information given in the statements is true, even if it appears to be at variance with commonly known facts, decide which of the given conclusions logically follow(s) from the statements.

Statements:

No boy is an engineer.
No engineer is a driver.
All girls are boys.

Conclusions:

I. All boys are drivers.
II. No girl is an engineer.

- Ans**
- 1. Only conclusion I follows
 - 2. Only conclusion II follows
 - 3. Both conclusions I and II follow
 - 4. Either conclusion I or II follows

Question ID : 65497828863

Status : Answered

Chosen Option : 2

Q.10 Select the combination of letters that when sequentially placed in the blanks of the given series will complete the series.

D _ _ S H T _ _ R I S H _ _ D R I _ _ T I D R I S _ _ I

- Ans**
- 1. RDII TISHHT
 - 2. RDIISHTIHT
 - 3. RIIDTISHHT
 - 4. RITIDTSHHT

Question ID : 65497828856

Status : Answered

Chosen Option : 3

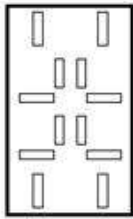
Bankers Adda
മലയാളം

Q.11 The sequence of folding a piece of paper and the manner in which the folded paper has been cut is shown in the following figures. How would this paper look when unfolded?

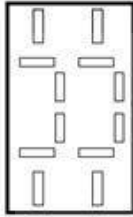


Ans

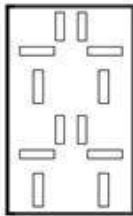
1.



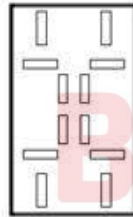
2.



3.



4.



Question ID : 65497828866
 Status : Answered
 Chosen Option : 3

Q.12 Select the number from among the given options that can replace the question mark (?) in the following series.

209, 205, 196, 180, ?, 119

Ans

1. 155

2. 160

3. 149

4. 165

Question ID : 65497828857
 Status : Answered
 Chosen Option : 1

Q.13 In a certain code language, MORSEL is written as LESROM. How will GATEWAY be written in that language?

- Ans 1. YAWETAG
 2. AWYETAG
 3. YAWTEAG
 4. YAWATEG

Question ID : 65497828861
Status : Answered
Chosen Option : 1

Q.14 'Cricket' is related to 'LBW' in the same way as 'Chess' is related to '_____'.

- Ans 1. Deuce
 2. Hit wicket
 3. Checkmate
 4. Backstroke

Question ID : 65497828860
Status : Answered
Chosen Option : 3

Q.15 Seema, pointing towards a photo, said to me, "He is the son of your father." What is the relation of the person in the photo with me?

- Ans 1. Uncle
 2. Grandfather
 3. Brother
 4. Father

Question ID : 65497828849
Status : Answered
Chosen Option : 3

Q.16 Select the option in which the numbers are related in the same way as are the numbers in the given set.

11, 4, 137

- Ans 1. 10, 5, 148
 2. 9, 8, 145
 3. 12, 7, 190
 4. 15, 14, 205

Question ID : 65497828864
Status : Answered
Chosen Option : 3

Q.17 In a certain code language, APRIL is written as $\alpha\beta\alpha@$ and MARCH is written as $\epsilon+\beta\textcircled{\infty}$. How will PARAM be written in that language?

- Ans 1. $x+\beta+\epsilon$
 2. $+\alpha+\epsilon\beta$
 3. $\beta\alpha+\textcircled{\infty}$
 4. $+\beta\alpha+\epsilon$

Question ID : 65497828848
Status : Answered
Chosen Option : 1

Q.18 If 21 March 2007 is a Wednesday, what would be the day of the week on 25 May 2015?

- Ans
- 1. Tuesday
 - 2. Wednesday
 - 3. Monday
 - 4. Sunday

Question ID : 65497828865
Status : Answered
Chosen Option : 3

Q.19 If 'A' denotes 'addition', 'B' denotes 'multiplication', 'C' denotes 'subtraction', and 'D' denotes 'division', then what will be the value of the following expression?

60 D 2 A 3 B 6 C 5 C (4 B 3)

- Ans
- 1. 41
 - 2. 31
 - 3. 35
 - 4. 45

Question ID : 65497828852
Status : Answered
Chosen Option : 2

Q.20 Six girls A, B, C, D, E and F stand in two vertical lines; all girls face the north. three girls are there in each line. E is immediately behind D. F is to the left of A. C is just ahead of B. A is immediately ahead of D. Which two girls stand in the last position of lines?

- Ans
- 1. A, B
 - 2. C, E
 - 3. A, F
 - 4. B, E

Question ID : 65497828862
Status : Answered
Chosen Option : 4

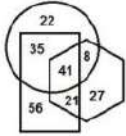
Q.21 Three different positions of the same dice are shown. Select the number/symbol that will be on the face opposite to the face showing the symbol '&'.



- Ans
- 1. 9
 - 2. \$
 - 3. %
 - 4. #

Question ID : 65497828853
Status : Answered
Chosen Option : 3

Q.22 In the following diagram, the 'hexagon' stands for 'engineers', the 'circle' stands for 'music lovers', and the 'rectangle' stands for 'morning walkers'. The numbers given in the different segments represent the number of persons of that category.

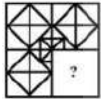


How many morning walkers are music-lovers but are NOT engineers?

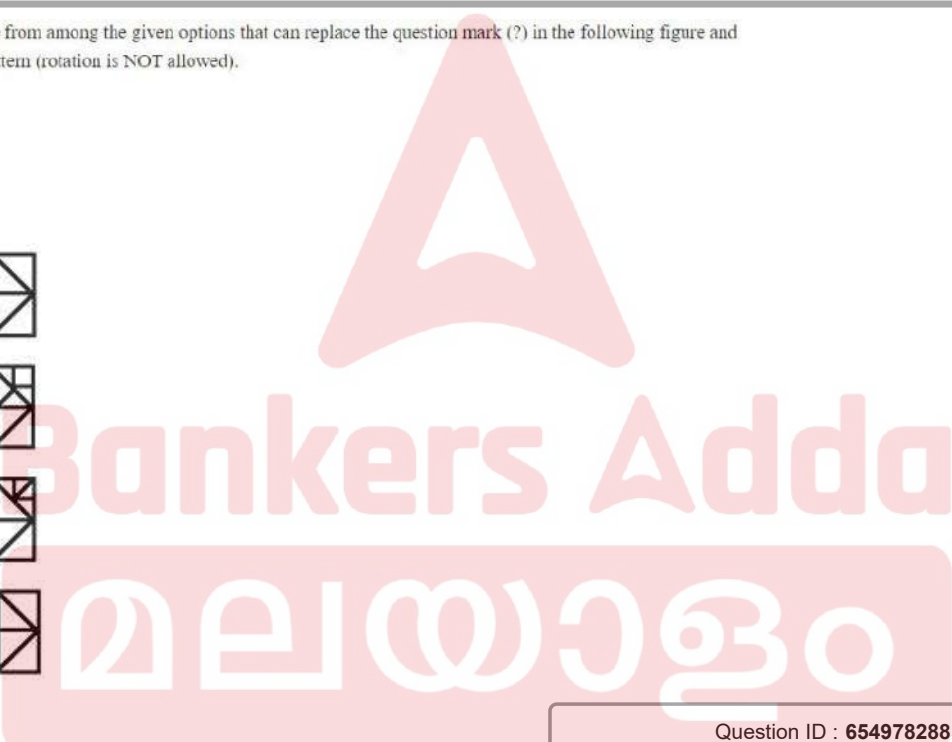
- Ans
- 1. 21
 - 2. 35
 - 3. 41
 - 4. 8

Question ID : 65497828867
 Status : Answered
 Chosen Option : 2

Q.23 Select the figure from among the given options that can replace the question mark (?) in the following figure and complete the pattern (rotation is NOT allowed).



- Ans
- 1.
 - 2.
 - 3.
 - 4.



Question ID : 65497828858
 Status : Answered
 Chosen Option : 4

Q.24 Four letter-clusters have been given, out of which three are alike in some manner and one is different. Select the letter-cluster that is different.

- Ans
- 1. AEU
 - 2. AEI
 - 3. IOU
 - 4. ZDK

Question ID : 65497828868
 Status : Answered
 Chosen Option : 4

Q.25 In a certain code language, ALARMING is coded as 150. How will FLOATER be coded in that language?

- Ans
- 1. 124
 - 2. 156
 - 3. 141
 - 4. 154

Question ID : 65497828869
Status : Answered
Chosen Option : 4

Section : Part B General Knowledge and General Awareness

Q.1 The Central Pollution Control Board (CPCB) was constituted under _____.

- Ans
- 1. The Air (Prevention and Control of Pollution) Act, 1981
 - 2. The Water (Prevention and Control of Pollution) Act, 1974
 - 3. The National Environmental Tribunal Act, 1995
 - 4. The National Environment Appellate Authority Act, 1997

Question ID : 65497828888
Status : Answered
Chosen Option : 1

Q.2 In which of the following years was the first cotton textile mill established in Bombay?

- Ans
- 1. 1845
 - 2. 1867
 - 3. 1876
 - 4. 1854

Question ID : 65497828873
Status : Not Answered
Chosen Option : --

Q.3 Which of the following banks features in the Fortune Global 500 list 2021?

- Ans
- 1. State Bank of India
 - 2. Bank of Baroda
 - 3. ICICI Bank
 - 4. HDFC Bank

Question ID : 65497828896
Status : Not Answered
Chosen Option : --

Q.4 In October 2020, World Bank expected India's GDP to contract by how much per cent in the fiscal year 2020-21?

- Ans
- 1. 9.5
 - 2. 9.8
 - 3. 9
 - 4. 9.6

Question ID : 65497828877
Status : Not Answered
Chosen Option : --

Q.5 The religious festival of Ganesh Chaturthi is especially associated with which of the following states?

- Ans
- 1. Punjab
 - 2. Maharashtra
 - 3. Uttar Pradesh
 - 4. Haryana

Question ID : 65497828879
Status : Answered
Chosen Option : 2

Q.6 Which of the following statements is true?

- Ans
- 1. Bases are bitter in taste.
 - 2. Acids change the colour of red litmus to blue.
 - 3. Acids are salty in taste.
 - 4. Bases change the colour of the blue litmus to red.

Question ID : 65497828883
Status : Answered
Chosen Option : 1

Q.7 Talaja Caves are located in the state of _____.

- Ans
- 1. Madhya Pradesh
 - 2. Maharashtra
 - 3. Andhra Pradesh
 - 4. Gujarat

Question ID : 65497828890
Status : Not Answered
Chosen Option : --

Q.8 11 July is observed as _____ every year.

- Ans
- 1. World Health Day
 - 2. World Environment Day
 - 3. World Population Day
 - 4. World Water Day

Question ID : 65497828894
Status : Not Answered
Chosen Option : --

Q.9 In which of the following states are the Abor hills located?

- Ans
- 1. West Bengal
 - 2. Arunachal Pradesh
 - 3. Assam
 - 4. Sikkim

Question ID : 65497828878
Status : Answered
Chosen Option : 3

Q.10 Diego Maradona, the great football legend, died in November 2020. Which of the following countries did he represent?

- Ans
- 1. Brazil
 - 2. France
 - 3. Spain
 - 4. Argentina

Question ID : 65497828876
Status : Answered
Chosen Option : 1

Q.11 When was the Imperial Bank of India established?

- Ans
- 1. 1947
 - 2. 1921
 - 3. 1919
 - 4. 1948

Question ID : 65497828886
Status : Answered
Chosen Option : 2

Q.12 Prime Minister Narendra Modi visited Bangladesh in March 2021 in connection with the commemoration of three events. Which of the following is NOT one of them?

- Ans
- 1. 50 years of Bangladesh's war of liberation.
 - 2. Birth centenary of Sheikh Mujibur Rahman.
 - 3. 10 years of signing of the India-Bangladesh Land Boundary Agreement (LBA).
 - 4. 50 years of the establishment of diplomatic ties between India and Bangladesh.

Question ID : 65497828889
Status : Answered
Chosen Option : 4

Q.13 Actress Kangana Ranaut won the 'Best Actress' award at the 67th National Film Awards, 2019 for the films _____.

- Ans
- 1. 'Panga' and 'Judgementall Hai Kya'
 - 2. 'Manikarnika: The Queen of Jhansi' and 'Panga'
 - 3. 'Judgementall Hai Ky and 'Manikarnika: The Queen of Jhansi'
 - 4. 'Judgementall Hai Kya' and 'Simran'

Question ID : 65497828892
Status : Answered
Chosen Option : 2

Q.14 Water which is purified and fit for drinking is known as _____.

- Ans
- 1. hard water
 - 2. potable water
 - 3. diluted water
 - 4. river water

Question ID : 65497828880
Status : Answered
Chosen Option : 2

Q.15 Who among the following became the first Mughal emperor after defeating Ibrahim Lodi?

- Ans
- 1. Nadir Shah
 - 2. Shah Jahan
 - 3. Babur
 - 4. Aurangzeb

Question ID : 65497828872
Status : Answered
Chosen Option : 3

Q.16 The _____ Schedule of the Constitution of India added by the Constitution (Fifty-Second Amendment) Act, 1985 deals with the disqualification of a person for being a member of either house of Parliament or the Legislative Assembly or Legislative Council of a State, on the ground of defection.

- Ans
- 1. Tenth
 - 2. Sixth
 - 3. Third
 - 4. Fifth

Question ID : 65497828874
Status : Answered
Chosen Option : 1

Q.17 In November 2020, Twitter launched tweets that disappear in 24 hours called ' _____ ' globally.

- Ans
- 1. fleets
 - 2. bleats
 - 3. meets
 - 4. greets

Question ID : 65497828885
Status : Not Answered
Chosen Option : --

Q.18 Shariatullah Khan was a part of the _____ against the British.

- Ans
- 1. Faqir/Fakir Rebellion
 - 2. Wahabi Movement
 - 3. Sanyasi Rebellion
 - 4. Farazi/Faraizi Movement

Question ID : 65497828887
Status : Answered
Chosen Option : 2

Q.19 Which of the following is NOT a consequence of deforestation?

- Ans
- 1. Decrease in level of ground water
 - 2. Increase in pollution level on earth
 - 3. Increase in level of oxygen in the atmosphere
 - 4. Disturbance in the overall balance of nature

Question ID : 65497828881
Status : Answered
Chosen Option : 3

Q.20 _____, the newly elected Prime Minister of Somalia, took office in September 2020.

- Ans
- 1. Omar Sharmarke
 - 2. Hassan Ali Khaire
 - 3. Abdi Farah Shirdon
 - 4. Mohamed Hussein Roble

Question ID : 65497828882
Status : Not Answered
Chosen Option : --

Q.21 Mir Jafar was reinstated as the Nawab of Bengal in the year _____.

- Ans
- 1. 1764
 - 2. 1647
 - 3. 1674
 - 4. 1746

Question ID : 65497828884
Status : Answered
Chosen Option : 1

Q.22 As of September 2021, India has won _____ medals in the Paralympic Games since their introduction in 1960.

- Ans
- 1. 9 gold, 10 silver and 12 bronze
 - 2. 7 gold, 9 silver and 11 bronze
 - 3. 9 gold, 12 silver and 10 bronze
 - 4. 7 gold, 11 silver and 9 bronze

Question ID : 65497828895
Status : Answered
Chosen Option : 4

Q.23 As per the Census of India–2011, there are _____ statutory towns in the country.

- Ans
- 1. 10,756
 - 2. 1,362
 - 3. 4,041
 - 4. 7,935

Question ID : 65497828891
Status : Not Answered
Chosen Option : --

Q.24 The Scheme of Mega Food Park aims at providing a mechanism of direct linkage from farm to processing and then to consumer markets through a network of collection centres and primary processing centres. In which of the following states did Narendra Singh Tomar virtually inaugurate Mega Food Park in November 2020?

- Ans
- 1. Gujarat
 - 2. Rajasthan
 - 3. Punjab
 - 4. Odisha

Question ID : 65497828875
Status : Answered
Chosen Option : 3

Q.25 Who among the following is an Indian badminton player?

- Ans
- 1. Satish Kumar
 - 2. Ashish Kumar
 - 3. B Sai Praneeth
 - 4. Vikas Krishan

Question ID : 65497828893
Status : Answered
Chosen Option : 3

Section : Part C Elementary Mathematics

Q.1 A loss of 12% gets converted into a profit of 8.5% when the selling price of an article is increased by ₹164. The cost price of the article is:

- Ans
- 1. ₹760
 - 2. ₹840
 - 3. ₹850
 - 4. ₹800

Question ID : 65497828902
Status : Answered
Chosen Option : 4

Q.2 Pens are bought by a shopkeeper at the rate of ₹1,200 for 150 pens and sold at the rate of ₹1,620 for 180 pens. His profit or loss per cent is:

- Ans
- 1. Profit 12%
 - 2. Profit 12.5%
 - 3. Loss 12%
 - 4. Profit 14%

Question ID : 65497828900
Status : Answered
Chosen Option : 2

Q.3 The value of $8 - [88 \div 2 \text{ of } 11 - (22 - 72 \div 4)]$ is:

- Ans
- 1. 0
 - 2. 6
 - 3. 4
 - 4. 8

Question ID : 65497828899
Status : Answered
Chosen Option : 4

Q.4 If the compound interest on a certain sum for 2 years at 4% per annum is ₹1530. What would be the simple interest on the same sum for the same period and at the same rate?

- Ans**
- 1. ₹1400
 - 2. ₹1500
 - 3. ₹1350
 - 4. ₹1510

Question ID : 65497828920
Status : Answered
Chosen Option : 2

Q.5 A takes 15 days to complete $\frac{5}{7}$ of a work. With the help of B, they finish the whole work in 12 days. In how many days, B alone will complete the same work?

- Ans**
- 1. 18 days
 - 2. 20 days
 - 3. 28 days
 - 4. 25 days

Question ID : 65497828901
Status : Answered
Chosen Option : 3

Q.6 A shopkeeper sells an item for ₹1,638 after offering a discount of 16% on its list price. Had he not offered any discount, he would have earned a profit of 30%. What is the cost price (in ₹) of the article?

- Ans**
- 1. 1,500
 - 2. 1,425
 - 3. 1,400
 - 4. 1,450

Question ID : 65497828917
Status : Answered
Chosen Option : 1

Q.7 There are five numbers. The average of the first four numbers is $\frac{5}{6}$ of the fifth number. If the average of all the five numbers is 26, then what is the fifth number?

- Ans**
- 1. 28
 - 2. 29
 - 3. 30
 - 4. 32

Question ID : 65497828911
Status : Answered
Chosen Option : 3

Q.8 The HCF of 2091, 3485 and 4879 is x . The sum of the digits of x is:

- Ans
- 1. 20
 - 2. 22
 - 3. 19
 - 4. 23

Question ID : 65497828910
Status : Answered
Chosen Option : 1

Q.9 Working together, A, B and C can do a certain work in 10 days. A is 20% more efficient than B, and C is 50% less than efficient than B. B alone can complete the same work in:

- Ans
- 1. $22\frac{1}{2}$ days
 - 2. 27 days
 - 3. 30 days
 - 4. 25 days

Question ID : 65497828915
Status : Answered
Chosen Option : 2

Q.10 A trader marked the price of an article so as to earn a profit of 28% on its cost price. He sold it by giving 15% discount on its marked price. What was his actual profit percentage?

- Ans
- 1. 13%
 - 2. 9%
 - 3. 8.8%
 - 4. 12.5%

Question ID : 65497828912
Status : Answered
Chosen Option : 3

Q.11 The lengths of the sides of a right-angled triangle are in the ratio 5 : 12 : 13 and its perimeter is 90 cm. What is the area (in cm^2) of the triangle?

- Ans
- 1. 540
 - 2. 780
 - 3. 270
 - 4. 702

Question ID : 65497828921
Status : Answered
Chosen Option : 3

Q.12 There is 70% increase in an amount in 7 years at simple interest. What will be the compound interest on ₹8,000 after 3 years at the same rate of interest?

- Ans**
- 1. ₹2,640
 - 2. ₹2,548
 - 3. ₹2,654
 - 4. ₹2,648

Question ID : 65497828903
Status : Answered
Chosen Option : 4

Q.13 The income of A is 70% more than the income of B, and the income of C is 80% of the combined income of A and B. By what percentage is the income of A less than that of C? (Correct to one decimal place)

- Ans**
- 1. 27.1%
 - 2. 20.4%
 - 3. 21.3%
 - 4. 19.8%

Question ID : 65497828913
Status : Answered
Chosen Option : 2

Q.14 The prices of two woolen jackets A and B are in the ratio 7 : 9. If jacket A costs ₹380 less than jacket B, then find the price of jacket B.

- Ans**
- 1. ₹1680
 - 2. ₹1330
 - 3. ₹1710
 - 4. ₹1650

Question ID : 65497828919
Status : Answered
Chosen Option : 3

Q.15 If three numbers are in the ratio of 3 : 5 : 7 and their LCM is 2415, what is the difference between the second number and the first number?

- Ans**
- 1. 46
 - 2. 92
 - 3. 23
 - 4. 69

Question ID : 65497828904
Status : Answered
Chosen Option : 1

Q.16 A wire encloses an area of 18634 cm^2 , when it is bent in the form of a circle. The same wire is now bent to form a rectangle whose sides are in the ratio $5 : 6$. The length (in cm) of the shorter side of the rectangle is (Take $\pi = \frac{22}{7}$):

- Ans
- 1. 100
 - 2. 132
 - 3. 110
 - 4. 154

Question ID : 65497828898
Status : Answered
Chosen Option : 3

Q.17 If the average of the following six observations: $x + 2, x + 5, x + 8, x + 11, x + 14$ and $x + 17$ is 12.5, what is the average of the first three observations?

- Ans
- 1. 3
 - 2. 9
 - 3. 8
 - 4. 6

Question ID : 65497828905
Status : Answered
Chosen Option : 3

Q.18 By selling 18 oranges for ₹151.20, a man loses 20%. How many oranges should he sell for ₹19 to earn a profit of 30%?

- Ans
- 1. 50
 - 2. 65
 - 3. 60
 - 4. 45

Question ID : 65497828918
Status : Answered
Chosen Option : 3

Q.19 A car covers the first 41 km of its journey in 45 min and covers the remaining 23 km in 35 min. What is the average speed (in m/sec) of the car?

- Ans
- 1. $13\frac{1}{3}$
 - 2. 15
 - 3. 16
 - 4. $16\frac{2}{3}$

Question ID : 65497828909
Status : Answered
Chosen Option : 1

Q.20 Somu has borrowed ₹10,000 from a money lender with simple interest at a rate of 7% per 6 months. How much amount will he pay to the money lender after 3 years?

- Ans
- 1. ₹13,000
 - 2. ₹14,200
 - 3. ₹12,500
 - 4. ₹12,100

Question ID : 65497828907
Status : Answered
Chosen Option : 2

Q.21 If a sum of ₹6225 is divided into three parts such that 4 times the first part is equal to 5 times the second part and 7 times the third part. The difference between the first and second part (in ₹) is:

- Ans
- 1. 525
 - 2. 300
 - 3. 600
 - 4. 450

Question ID : 65497828897
Status : Answered
Chosen Option : 1

Q.22 The value of $\left(\frac{7}{16} \div 10\frac{1}{2} \text{ of } 7\frac{1}{5}\right) \times 3\frac{3}{5} - 1\frac{1}{3} \times 1\frac{1}{8} \div \frac{1}{2} + \frac{3}{4}$ is:

- Ans
- 1. $-\frac{179}{48}$
 - 2. $\frac{61}{8}$
 - 3. $\frac{181}{24}$
 - 4. $-\frac{107}{48}$

Question ID : 65497828908
Status : Answered
Chosen Option : 4

Q.23 A boat can go 10 km upstream and 11 km downstream in a total time of 52 minutes. If the speed of the stream is 5 km/h, then what is the speed (in km/h) of the boat when going downstream?

- Ans
- 1. 30
 - 2. 20
 - 3. 35
 - 4. 25

Question ID : 65497828916
Status : Answered
Chosen Option : 4

Q.24 In a mixture of 75 litres, the ratio of milk to water is 3 : 2. If the ratio is to be 1 : 2, how much of water should be added?

- Ans**
- 1. 65 litres
 - 2. 90 litres
 - 3. 60 litres
 - 4. 50 litres

Question ID : 65497828906
Status : Answered
Chosen Option : 3

Q.25 In 2021, a cricket team wants to win 80% of the matches out of 225 matches. Out of 120 matches already played, the success rate is 70%. What should be the success rate for the remaining matches in order to reach the target?

- Ans**
- 1. $89\frac{5}{7}\%$
 - 2. 86%
 - 3. 90%
 - 4. $91\frac{3}{7}\%$

Question ID : 65497828914
Status : Answered
Chosen Option : 4

Section : Part D English

Q.1 Select the most appropriate option to fill in the blank.

The man felt exhausted after climbing a _____ of stairs.

- Ans**
- 1. heap
 - 2. fleet
 - 3. pack
 - 4. flight

Question ID : 65497828941
Status : Not Answered
Chosen Option : --

Q.2 Select the most appropriate meaning of the given idiom.

Come to blows

- Ans**
- 1. Insult someone
 - 2. Agree on a plan
 - 3. Get into a fight physically
 - 4. Return a favour

Question ID : 65497828939
Status : Not Answered
Chosen Option : --

Q.3 Parts of the given sentence have been given as options. One of them contains a grammatical error. Select the option that has the error.

Pray to the Almighty God with utmost devotion and help the needy and poored people.

- Ans
- 1. with utmost devotion
 - 2. help the needy
 - 3. to the Almighty God
 - 4. poored people

Question ID : 65497828930
Status : Not Answered
Chosen Option : --

Q.4 Select the INCORRECTLY spelt word.

- Ans
- 1. Quarantine
 - 2. Commitment
 - 3. Bouquet
 - 4. Procedure

Question ID : 65497828936
Status : Not Answered
Chosen Option : --

Q.5 The following sentence has been split into four segments. Identify the segment that contains a grammatical error.

I saw some / children playing happily / below the shade / of a tree.

- Ans
- 1. I saw some
 - 2. children playing happily
 - 3. below the shade
 - 4. of a tree

Question ID : 65497828933
Status : Not Answered
Chosen Option : --

Q.6 The following sentence has been split into four segments. Identify the segment that contains a grammatical error.

The man turned to him with a look of disapprove.

- Ans
- 1. The man
 - 2. with a look
 - 3. of disapprove
 - 4. turned to him

Question ID : 65497828924
Status : Not Answered
Chosen Option : --

Q.7 Select the most appropriate ANTONYM of the given word.

Criticise

- Ans 1. Analyse
 2. Approve
 3. Oppose
 4. Clarify

Question ID : 65497828934
Status : Not Answered
Chosen Option : --

Q.8 Select the most appropriate option to fill in the blank.

The Egyptians developed ways to prevent the dead body from _____.

- Ans 1. decaying
 2. destroying
 3. drooping
 4. dying

Question ID : 65497828927
Status : Not Answered
Chosen Option : --

Q.9 Select the option that will improve the underlined part of the given sentence. In case no improvement is needed, select 'No improvement required'.

My teacher said me that I would be famous one day.

- Ans 1. say to me
 2. told me
 3. No improvement required
 4. asked me

Question ID : 65497828940
Status : Not Answered
Chosen Option : --

Q.10 Select the most appropriate option to fill in the blank.

She is on six months' _____ leave.

- Ans 1. material
 2. paternity
 3. paternal
 4. maternity

Question ID : 65497828929
Status : Not Answered
Chosen Option : --

Q.11 Select the INCORRECTLY spelt word.

- Ans 1. Eraser
 2. Erode
 3. Erosion
 4. Eratic

Question ID : 65497828928
Status : Not Answered
Chosen Option : --

Q.12 Select the most appropriate ANTONYM of the given word.

Prudent

- Ans 1. Shrewd
 2. Wasteful
 3. Cautious
 4. Clever

Question ID : 65497828937
Status : Not Answered
Chosen Option : --

Q.13 Select the most appropriate option that can substitute the underlined segment in the given sentence. If there is no need to substitute it, select 'No substitution required'.

Using a word processor for writing have a number of advantages.

- Ans 1. for writing having number
 2. No substitution required
 3. to write have a number
 4. for writing has a number

Question ID : 65497828923
Status : Not Answered
Chosen Option : --

Q.14 Select the most appropriate meaning of the given idiom.

Cool as a cucumber

- Ans 1. Calm
 2. Lazy
 3. Wise
 4. Scared

Question ID : 65497828938
Status : Not Answered
Chosen Option : --

Q.15 Select the option that can be used as a one-word substitute for the given group of words.

That which is lawful

- Ans
- 1. Proper
 - 2. Illegal
 - 3. Valid
 - 4. Legal

Question ID : 65497828926
Status : Not Answered
Chosen Option : --

Q.16 Select the most appropriate synonym of the given word.

Recommend

- Ans
- 1. Oppose
 - 2. Adhere
 - 3. Reward
 - 4. Approve

Question ID : 65497828925
Status : Not Answered
Chosen Option : --

Q.17 Select the most appropriate option that can substitute the underlined segment in the given sentence. If there is no need to substitute it, select 'No substitution required'.

Wool and silk are materials those are the easiest to dye.

- Ans
- 1. that is easy
 - 2. that are the easiest
 - 3. No substitution required
 - 4. that are the easier

Question ID : 65497828922
Status : Not Answered
Chosen Option : --

Q.18 Select the option that can be used as a one-word substitute for the given group of words.

A piece of land where fruit trees are grown

- Ans
- 1. Pasture
 - 2. Orchard
 - 3. Barnyard
 - 4. Meadow

Question ID : 65497828935
Status : Not Answered
Chosen Option : --

Q.19 Select the most appropriate synonym of the given word.

Substitution

- Ans 1. Give
 2. Exchange
 3. Logical
 4. Hold

Question ID : 65497828931
Status : Not Answered
Chosen Option : --

Q.20 Select the option that can be used as a one-word substitute for the given group of words.

A volume containing several books previously published separately

- Ans 1. Thesaurus
 2. Dictionary
 3. Novel
 4. Omnibus

Question ID : 65497828932
Status : Not Answered
Chosen Option : --

Comprehension:

In the following passage, some words have been deleted. Read the passage carefully and select the most appropriate option to fill in each blank.

A giant plane carrying 43 passengers was (1) _____ to crash-land when its landing gear got (2) _____. Only the skill of the pilot was able to (3) _____ a major tragedy. Expert mechanics laboured (4) _____ hours before they could find the (5) _____ of the mechanical failure.

SubQuestion No : 21

Q.21 Select the most appropriate option to fill in blank no.1.

- Ans 1. bumped
 2. poked
 3. forced
 4. pushed

Question ID : 65497828943
Status : Not Answered
Chosen Option : --

Comprehension:

In the following passage, some words have been deleted. Read the passage carefully and select the most appropriate option to fill in each blank.

A giant plane carrying 43 passengers was (1) _____ to crash-land when its landing gear got (2) _____. Only the skill of the pilot was able to (3) _____ a major tragedy. Expert mechanics laboured (4) _____ hours before they could find the (5) _____ of the mechanical failure.

SubQuestion No : 22

Q.22 Select the most appropriate option to fill in blank no.2.

- Ans 1. glued
 2. caught
 3. stuck
 4. fixed

Question ID : **65497828944**
Status : **Not Answered**
Chosen Option : --

Comprehension:

In the following passage, some words have been deleted. Read the passage carefully and select the most appropriate option to fill in each blank.

A giant plane carrying 43 passengers was (1) _____ to crash-land when its landing gear got (2) _____. Only the skill of the pilot was able to (3) _____ a major tragedy. Expert mechanics laboured (4) _____ hours before they could find the (5) _____ of the mechanical failure.

SubQuestion No : 23

Q.23 Select the most appropriate option to fill in blank no.3.

- Ans 1. forbid
 2. limit
 3. prevent
 4. restrict

Question ID : **65497828945**
Status : **Not Answered**
Chosen Option : --

Comprehension:

In the following passage, some words have been deleted. Read the passage carefully and select the most appropriate option to fill in each blank.

A giant plane carrying 43 passengers was (1) _____ to crash-land when its landing gear got (2) _____. Only the skill of the pilot was able to (3) _____ a major tragedy. Expert mechanics laboured (4) _____ hours before they could find the (5) _____ of the mechanical failure.

SubQuestion No : 24

Q.24 Select the most appropriate option to fill in blank no.4.

- Ans 1. over
 2. from
 3. at
 4. for

Question ID : **65497828946**
Status : **Not Answered**
Chosen Option : --

Comprehension:

In the following passage, some words have been deleted. Read the passage carefully and select the most appropriate option to fill in each blank.

A giant plane carrying 43 passengers was (1) _____ to crash-land when its landing gear got (2) _____. Only the skill of the pilot was able to (3) _____ a major tragedy. Expert mechanics laboured (4) _____ hours before they could find the (5) _____ of the mechanical failure.

SubQuestion No : 25

Q.25 Select the most appropriate option to fill in blank no.5.

- Ans 1. plan
 2. motive
 3. agency
 4. cause

Question ID : 65497828947
Status : Not Answered
Chosen Option : --

Section : Part D Hindi

Q.1 रिक्त स्थान को भरने के लिए सबसे उपयुक्त शब्द का चयन करें।

सफलता पाने के लिए कठोर _____ करना पड़ता है।

- Ans 1. श्रम
 2. अध्ययन
 3. अनुशासन
 4. आवागमन

Question ID : 65497828954
Status : Answered
Chosen Option : 1

Q.2 दिए गए वाक्य का वह भाग ज्ञात करें जिसमें कोई त्रुटि है। यदि कोई त्रुटि नहीं है, तो 'कोई त्रुटि नहीं है' चुनें।

कभी-कभी, आकाश में दिखाई देने वाला उल्कापतन एक विलक्षण घटना है।

- Ans 1. दिखाई देने वाला
 2. उल्कापतन एक विलक्षण घटना है।
 3. कभी-कभी, आकाश में
 4. कोई त्रुटि नहीं है।

Question ID : 65497828948
Status : Answered
Chosen Option : 2

Q.3 दिये गये वाक्यांश के लिए एक शब्द दीजिये।

अपने पास रखी हुई, दूसरे की वस्तु

- Ans 1. धरनी
 2. धराऊ
 3. धरोहर
 4. धनज्ञ

Question ID : 65497828953
Status : Answered
Chosen Option : 3

Q.4 'खून का घूँट पीना' मुहावरे का सही अर्थ है-

- Ans
- 1. घृणा करना
 - 2. गुस्सा पचा जाना
 - 3. भयभीत होना
 - 4. अत्यंत क्रोधित होना

Question ID : 65497828959
Status : Answered
Chosen Option : 2

Q.5 दिये गये वाक्य में रेखांकित अंश को प्रतिस्थापित करने के लिए सबसे उपयुक्त विकल्प का चयन करें।

मोहन के गए पर वह उठ बैठा।

- Ans
- 1. उठने पर
 - 2. दौड़ने पर
 - 3. मरने पर
 - 4. जाने पर

Question ID : 65497828961
Status : Answered
Chosen Option : 4

Q.6 दिए गए शब्द के समानार्थी शब्द का चयन करें।

बाण

- Ans
- 1. अगम
 - 2. नाराच
 - 3. तनय
 - 4. दहन

Question ID : 65497828952
Status : Answered
Chosen Option : 2

Q.7 'पंकज' किसका पर्यायवाची है?

- Ans
- 1. वस्त्र
 - 2. किरण
 - 3. कमल
 - 4. आँख

Question ID : 65497828965
Status : Answered
Chosen Option : 3

Q.8 दिए गए वाक्य में रेखांकित खंड को प्रतिस्थापित करने के लिए सबसे उपयुक्त विकल्प का चयन करें। यदि इसे प्रतिस्थापित करने की आवश्यकता नहीं है, तो विकल्प 'किसी बदलाव की आवश्यकता नहीं है' का चयन करें।

इस कार्य के विग्र बन कर तुम आए हो।

- Ans
- 1. किसी बदलाव की आवश्यकता नहीं है।
 - 2. इस कार्य का
 - 3. इस कार्य में
 - 4. इस कार्य की

Question ID : 65497828955
Status : Answered
Chosen Option : 3

Q.9 सही वर्तनी वाले शब्द का चयन करें।

- Ans
- 1. स्थायीत्व
 - 2. स्थायित्व
 - 3. इस्थायित्व
 - 4. स्थाईत्व

Question ID : 65497828956
Status : Answered
Chosen Option : 1

Q.10 दिए गए वाक्य का वह भाग ज्ञात करें जिसमें कोई त्रुटि है। यदि कोई त्रुटि नहीं है, तो 'कोई त्रुटि नहीं है' चुनें।

महेश जी बता रहे थे कि उनका भतीजा अपने लक्ष्य पर नजर रखते हैं।

- Ans
- 1. महेश जी बता रहे थे
 - 2. अपने लक्ष्य पर नजर रखते हैं।
 - 3. कोई त्रुटि नहीं है।
 - 4. कि उनका भतीजा

Question ID : 65497828951
Status : Answered
Chosen Option : 2

Q.11 दिये गये वाक्य में रेखांकित अंश को प्रतिस्थापित करने के लिए सबसे उपयुक्त विकल्प का चयन करें।

पृथ्वी का रूप गोल है।

- Ans
- 1. स्वरूप
 - 2. प्रकार
 - 3. आकार
 - 4. प्रारूप

Question ID : 65497828960
Status : Answered
Chosen Option : 3

Q.12 रिक्त स्थान को भरने के लिए सबसे उपयुक्त विकल्प का चयन करें।

शिशु _____ और अबोध होता है।

- Ans 1. अज्ञ
 2. भिन्न
 3. बहुज्ञ
 4. अल्पज्ञ

Question ID : 65497828962
Status : Answered
Chosen Option : 4

Q.13 दिये गये वाक्य के किस भाग में त्रुटि है?

उसने अवाज देकर पूछा।

- Ans 1. पूछा।
 2. देकर
 3. अवाज
 4. उसने

Question ID : 65497828964
Status : Answered
Chosen Option : 2

Q.14 सही वर्तनी वाले शब्द का चयन करें।

- Ans 1. शूर्पणखा
 2. शुपर्णखा
 3. सुपनखा
 4. सूर्पनखा

Question ID : 65497828957
Status : Answered
Chosen Option : 1

Q.15 रिक्त स्थान को भरने के लिए सबसे उपयुक्त विकल्प का चयन करें।

शिक्षक दिवस पर छात्रों ने शिक्षक को पुस्तक _____ की।

- Ans 1. हस्तगत
 2. प्रदान
 3. दान
 4. भेंट

Question ID : 65497828967
Status : Answered
Chosen Option : 4

Q.16 'धन से संबंध रखने वाला' वाक्यांश के लिए एक शब्द होगा-

- Ans 1. अर्थशास्त्र
 2. भौतिक
 3. आर्थिक
 4. संपत्तिशास्त्र

Question ID : 65497828966
Status : Answered
Chosen Option : 1

Q.17 'पसीना पसीना होना' मुहावरे का सही अर्थ है-

- Ans
- 1. क्रोधित होना
 - 2. शर्मिंदा होना
 - 3. प्यासा होना
 - 4. भयभीत होना

Question ID : 65497828963

Status : Answered

Chosen Option : 4

Q.18 दिये गये वाक्यांश के लिए एक शब्द दीजिये।

खेतों में, मेंड़ों से बनाए गए छोटे-छोटे, वर्गाकार या आयताकार भाग

- Ans
- 1. नहर
 - 2. परनाला
 - 3. क्यारी
 - 4. नाली

Question ID : 65497828950

Status : Answered

Chosen Option : 3

Q.19 दिए गए शब्द का विलोम चुनें।

जातीय

- Ans
- 1. विजातीय
 - 2. अजातीय
 - 3. प्रजातीय
 - 4. सजातीय

Question ID : 65497828949

Status : Answered

Chosen Option : 4

Q.20 'कृपण' का विलोम शब्द होगा-

- Ans
- 1. सरल
 - 2. कठोर
 - 3. दाता
 - 4. कर्मठ

Question ID : 65497828958

Status : Answered

Chosen Option : 3

Comprehension:

दिए गए अनुच्छेद में कुछ शब्द हटा दिए गए हैं। दिए गए विकल्पों की सहायता से रिक्त स्थान भरें। प्रत्येक संख्या के लिए सबसे उपयुक्त विकल्प का चयन करें-

भारत के गाँव (1) _____ के मनोरम स्थल हैं। वहाँ का निवासी प्रकृति की (2) _____ में ही पल रहा है परन्तु (3) _____ दृष्टि से पिछड़े हुए गाँवों की स्थिति अत्यन्त ही (4) _____ है क्योंकि वहाँ के लोग (5) _____ पर ही निर्भर रहते हैं।

SubQuestion No : 21**Q.21** गद्यांश के रिक्त स्थान (1) के लिए सर्वाधिक उपयुक्त शब्द होगा-

- Ans
- 1. राज्य
 - 2. त्रिलोक
 - 3. प्रकृति
 - 4. शहरों

Question ID : 65497828969

Status : Answered

Chosen Option : 3

Comprehension:

दिए गए अनुच्छेद में कुछ शब्द हटा दिए गए हैं। दिए गए विकल्पों की सहायता से रिक्त स्थान भरें। प्रत्येक संख्या के लिए सबसे उपयुक्त विकल्प का चयन करें-

भारत के गाँव (1) _____ के मनोरम स्थल हैं। वहाँ का निवासी प्रकृति की (2) _____ में ही पल रहा है परन्तु (3) _____ दृष्टि से पिछड़े हुए गाँवों की स्थिति अत्यन्त ही (4) _____ है क्योंकि वहाँ के लोग (5) _____ पर ही निर्भर रहते हैं।

SubQuestion No : 22**Q.22** गद्यांश के रिक्त स्थान (2) के लिए सर्वाधिक उपयुक्त शब्द होगा-

- Ans
- 1. साथ
 - 2. हाथ
 - 3. छाँव
 - 4. गोद

Question ID : 65497828970

Status : Answered

Chosen Option : 4

Comprehension:

दिए गए अनुच्छेद में कुछ शब्द हटा दिए गए हैं। दिए गए विकल्पों की सहायता से रिक्त स्थान भरें। प्रत्येक संख्या के लिए सबसे उपयुक्त विकल्प का चयन करें-

भारत के गाँव (1) _____ के मनोरम स्थल हैं। वहाँ का निवासी प्रकृति की (2) _____ में ही पल रहा है परन्तु (3) _____ दृष्टि से पिछड़े हुए गाँवों की स्थिति अत्यन्त ही (4) _____ है क्योंकि वहाँ के लोग (5) _____ पर ही निर्भर रहते हैं।

SubQuestion No : 23**Q.23** गद्यांश के रिक्त स्थान (3) के लिए सर्वाधिक उपयुक्त शब्द होगा-

- Ans
- 1. राजनीतिक
 - 2. आर्थिक
 - 3. शारीरिक
 - 4. मानसिक

Question ID : 65497828971

Status : Answered

Chosen Option : 2

Comprehension:

दिए गए अनुच्छेद में कुछ शब्द हटा दिए गए हैं। दिए गए विकल्पों की सहायता से रिक्त स्थान भरें। प्रत्येक संख्या के लिए सबसे उपयुक्त विकल्प का चयन करें-

भारत के गाँव (1) _____ के मनोरम स्थल हैं। वहाँ का निवासी प्रकृति की (2) _____ में ही पल रहा है परन्तु (3) _____ दृष्टि से पिछड़े हुए गाँवों की स्थिति अत्यन्त ही (4) _____ है क्योंकि वहाँ के लोग (5) _____ पर ही निर्भर रहते हैं।

SubQuestion No : 24

Q.24 गद्यांश के रिक्त स्थान (4) के लिए सर्वाधिक उपयुक्त शब्द होगा-

- Ans 1. कठिन
 2. दयनीय
 3. स्तरीय
 4. सम्पन्न

Question ID : 65497828972

Status : Answered

Chosen Option : 2

Comprehension:

दिए गए अनुच्छेद में कुछ शब्द हटा दिए गए हैं। दिए गए विकल्पों की सहायता से रिक्त स्थान भरें। प्रत्येक संख्या के लिए सबसे उपयुक्त विकल्प का चयन करें-

भारत के गाँव (1) _____ के मनोरम स्थल हैं। वहाँ का निवासी प्रकृति की (2) _____ में ही पल रहा है परन्तु (3) _____ दृष्टि से पिछड़े हुए गाँवों की स्थिति अत्यन्त ही (4) _____ है क्योंकि वहाँ के लोग (5) _____ पर ही निर्भर रहते हैं।

SubQuestion No : 25

Q.25 गद्यांश के रिक्त स्थान (5) के लिए सर्वाधिक उपयुक्त शब्द होगा-

- Ans 1. कृषि
 2. प्रकृति
 3. सरकार
 4. पंचायत

Question ID : 65497828973

Status : Answered

Chosen Option : 1

Bankers Adda
मलयालम



SSC GD GARUDA BATCH



ENGLISH

SSC 2023-24 SSC GD

TOPIC WISE + MOCK TESTS
COMPLETE PACK

360 + TOTAL TESTS

BILINGUAL

SSC PRIME **TEST PACK**

CGL | CHSL | GD | MTS

1000+ TOTAL TESTS