

BEL PE

Previous Year Paper
(Computer Science)
17 Dec, 2023 Shift 1



Test Prime

**ALL EXAMS,
ONE SUBSCRIPTION**



70,000+
Mock Tests



**Personalised
Report Card**



**Unlimited
Re-Attempt**



600+
Exam Covered



**Previous Year
Papers**



500%
Refund



ATTEMPT FREE MOCK NOW



Bharat Electronics Limited

Government of India, Ministry of Defence
A Navratna Company

Participant ID	
Participant Name	
Test Center Name	
Test Date	17/12/2023
Test Time	8:30 AM - 10:30 AM
Subject	Probationary Engineer Computer Science

Section : General Aptitude

Q.1 Which of the following is a key component of India's infrastructure development?

- Ans
- 1. Space exploration
 - 2. Deep-sea fishing
 - 3. Mountaineering facilities
 - 4. High-speed railways

Question ID : 630680515491
 Option 1 ID : 6306802014369
 Option 2 ID : 6306802014371
 Option 3 ID : 6306802014372
 Option 4 ID : 6306802014370
 Status : Answered
 Chosen Option : 4

Q.2 What is the primary goal of sustainable development?

- Ans
- 1. Exploitation of natural resources to meet current needs
 - 2. Rapid economic growth at any cost
 - 3. Preservation of natural resources for future generations
 - 4. Immediate improvement of living standards without considering environmental impact

Question ID : 630680515485
 Option 1 ID : 6306802014348
 Option 2 ID : 6306802014345
 Option 3 ID : 6306802014346
 Option 4 ID : 6306802014347
 Status : Answered
 Chosen Option : 3

Q.3 Which article of the Indian Constitution deals with Fundamental Duties?

- Ans
- 1. Article 31B
 - 2. Article 48A
 - 3. Article 39C
 - 4. Article 51A

Question ID : 630680515492
Option 1 ID : 6306802014373
Option 2 ID : 6306802014376
Option 3 ID : 6306802014375
Option 4 ID : 6306802014374
Status : Answered
Chosen Option : 4

Q.4 Which of the following is a characteristic feature of the Animal Kingdom?

- Ans
- 1. Cell walls made of cellulose
 - 2. Autotrophic nutrition
 - 3. Heterotrophic mode of nutrition
 - 4. Presence of chloroplasts

Question ID : 630680515494
Option 1 ID : 6306802014381
Option 2 ID : 6306802014382
Option 3 ID : 6306802014384
Option 4 ID : 6306802014383
Status : Answered
Chosen Option : 1

Q.5 Which socio-religious reform movement in modern history aimed at eradicating social evils such as untouchability, caste discrimination, and promoting education and women's rights?

- Ans
- 1. The Aligarh Movement
 - 2. The Deoband Movement
 - 3. The Brahmo Samaj
 - 4. The Arya Samaj

Question ID : 630680515486
Option 1 ID : 6306802014352
Option 2 ID : 6306802014350
Option 3 ID : 6306802014349
Option 4 ID : 6306802014351
Status : Answered
Chosen Option : 3

Q.6 Which of the following is a Constitutional Body in India?

Ans 1. Election Commission of India (ECI)

2. Planning Commission

3. National Investigation Agency (NIA)

4. Reserve Bank of India (RBI)

Question ID : 630680515493

Option 1 ID : 6306802014378

Option 2 ID : 6306802014379

Option 3 ID : 6306802014380

Option 4 ID : 6306802014377

Status : Answered

Chosen Option : 2

Q.7 What is the purpose of pasteurization in food processing?

Ans 1. To increase the nutritional content of food.

2. To enhance the colour of the food.

3. To add flavour to the food.

4. To destroy pathogenic microorganisms present in the food

Question ID : 630680515495

Option 1 ID : 6306802014387

Option 2 ID : 6306802014388

Option 3 ID : 6306802014385

Option 4 ID : 6306802014386

Status : Answered

Chosen Option : 4

Q.8 Which language is recognized as a Classical Language by the Government of India?

Ans 1. Sanskrit

2. Bengali

3. Hindi

4. English

Question ID : 630680515488

Option 1 ID : 6306802014359

Option 2 ID : 6306802014360

Option 3 ID : 6306802014357

Option 4 ID : 6306802014358

Status : Answered

Chosen Option : 1

Q.9 Which sports award is considered the highest sporting honour in India?

- Ans
- 1. Dronacharya Award
 - 2. Arjuna Award
 - 3. Major Dhyan Chand Khel Ratna
 - 4. Padma Bhushan

Question ID : 630680515489
Option 1 ID : 6306802014362
Option 2 ID : 6306802014361
Option 3 ID : 6306802014363
Option 4 ID : 6306802014364
Status : Answered
Chosen Option : 3

Q.10 What is the primary function of the Reserve Bank of India (RBI)?

- Ans
- 1. Regulating stock markets
 - 2. Conducting monetary policy
 - 3. Implementing fiscal policy
 - 4. Managing foreign relations

Question ID : 630680515484
Option 1 ID : 6306802014342
Option 2 ID : 6306802014341
Option 3 ID : 6306802014344
Option 4 ID : 6306802014343
Status : Answered
Chosen Option : 3

Q.11 Which of the following Ruler was responsible for erecting the iron pillar of Delhi?

- Ans
- 1. Samudragupta
 - 2. Sri Gupta
 - 3. Kumara Gupta
 - 4. Chandragupta II

Question ID : 630680515487
Option 1 ID : 6306802014354
Option 2 ID : 6306802014355
Option 3 ID : 6306802014356
Option 4 ID : 6306802014353
Status : Answered
Chosen Option : 3

Q.12 Which river is known as the "Dakshina Ganga" in India?

- Ans 1. Brahmaputra
 2. Yamuna
 3. Godavari
 4. Krishna

Question ID : 630680515490
Option 1 ID : 6306802014367
Option 2 ID : 6306802014365
Option 3 ID : 6306802014366
Option 4 ID : 6306802014368
Status : Answered
Chosen Option : 1

Section : Reasoning

Q.1 Which of the following letter will replace the question mark (?) in the given series?
R, U, X, A, D, ?

- Ans 1. G
 2. H
 3. F
 4. I

Question ID : 630680515499
Option 1 ID : 6306802014401
Option 2 ID : 6306802014403
Option 3 ID : 6306802014402
Option 4 ID : 6306802014404
Status : Answered
Chosen Option : 1

Q.2 Three Statements are given followed by two conclusions numbered I and II. Assuming the statements to be true, even if they seem to be at variance with commonly known facts, decide which of the conclusions logically follow(s) from the statements.

Statement I: All fruits are vegetables.
Statement II: Some vegetables are green.
Statement III: Some green things are ugly.

Conclusion I: Some vegetables are fruits.
Conclusion II: Some green things are not ugly.

- Ans 1. Both conclusions I and II follow
 2. Only conclusion I follows
 3. Neither conclusion I nor II follows
 4. Only conclusion II follows

Question ID : 630680515498
Option 1 ID : 6306802014399
Option 2 ID : 6306802014397
Option 3 ID : 6306802014400
Option 4 ID : 6306802014398
Status : Answered
Chosen Option : 1

Q.3 Select the option that is related to the third number in the same way as the second number is related to the first number.
57 : 228 :: 79 : ?

- Ans 1. 316
 2. 341
 3. 333
 4. 329

Question ID : 630680515508
 Option 1 ID : 6306802014437
 Option 2 ID : 6306802014440
 Option 3 ID : 6306802014438
 Option 4 ID : 6306802014439
 Status : Answered
 Chosen Option : 1

Q.4 If, B denotes 'addition', C denotes 'division', and D denotes 'subtraction', then what will be the value of the following equation?
12 D 4 C 2 B 3 = ?

- Ans 1. 14
 2. 13
 3. 15
 4. 12

Question ID : 630680515506
 Option 1 ID : 6306802014431
 Option 2 ID : 6306802014430
 Option 3 ID : 6306802014429
 Option 4 ID : 6306802014432
 Status : Answered
 Chosen Option : 2

Q.5 Which two signs should be interchanged to make the given equation correct?
16 = 4 × 5 ÷ 2 - 8 + 18

- Ans 1. + and ×
 2. - and =
 3. + and -
 4. = and +

Question ID : 630680515507
 Option 1 ID : 6306802014433
 Option 2 ID : 6306802014435
 Option 3 ID : 6306802014434
 Option 4 ID : 6306802014436
 Status : Answered
 Chosen Option : 4

Q.6 Seven friends Alice, Bob, Carol, David, Eve, Frank, and Grace are sitting around a circular table facing the centre. Alice is sitting to the immediate right of Bob. Bob and Carol are neighbours. Frank is sitting exactly between David and Eve. Grace is not sitting next to Carol or Eve. Who is sitting between Alice and David?

- Ans
- 1. Eve
 - 2. Bob
 - 3. Grace
 - 4. Frank

Question ID : 630680515496
Option 1 ID : 6306802014392
Option 2 ID : 6306802014390
Option 3 ID : 6306802014389
Option 4 ID : 6306802014391
Status : Answered
Chosen Option : 1

Q.7 Select the option that is related to the fifth word in the same way as the fourth word is related to the third word, and the second word is related to the first word.
KANGAROO : JOEY :: BEAR : ?

- Ans
- 1. Calf
 - 2. Puppy
 - 3. Chick
 - 4. Cub

Question ID : 630680515502
Option 1 ID : 6306802014413
Option 2 ID : 6306802014416
Option 3 ID : 6306802014415
Option 4 ID : 6306802014414
Status : Answered
Chosen Option : 4

Q.8 Which of the following numbers will replace the question mark (?) in the given series?
14, 13, 15, 12, 16, 11, ?

- Ans
- 1. 17
 - 2. 16
 - 3. 18
 - 4. 15

Question ID : 630680515505
Option 1 ID : 6306802014425
Option 2 ID : 6306802014426
Option 3 ID : 6306802014428
Option 4 ID : 6306802014427
Status : Answered
Chosen Option : 1

Q.9 Rohan says, "Ajay's wife is the sister of my father's only son." How is Ajay related to Rohan?

- Ans
- 1. Husband
 - 2. Brother
 - 3. Sister's husband
 - 4. Mother's father

Question ID : 630680515501
 Option 1 ID : 6306802014412
 Option 2 ID : 6306802014409
 Option 3 ID : 6306802014410
 Option 4 ID : 6306802014411
 Status : Answered
 Chosen Option : 3

Q.10 There are 133 boxes kept one above the other. What will be the position of the box from the bottom whose position from the top is 27th?

- Ans
- 1. 139
 - 2. 142
 - 3. 123
 - 4. 107

Question ID : 630680515497
 Option 1 ID : 6306802014393
 Option 2 ID : 6306802014395
 Option 3 ID : 6306802014396
 Option 4 ID : 6306802014394
 Status : Answered
 Chosen Option : 4

Q.11 Four letter-clusters have been given, out of which three are alike in some manner and one is different. Select the odd letter-cluster.

- Ans
- 1. VWX
 - 2. RSU
 - 3. FGI
 - 4. JKM

Question ID : 630680515503
 Option 1 ID : 6306802014419
 Option 2 ID : 6306802014417
 Option 3 ID : 6306802014420
 Option 4 ID : 6306802014418
 Status : Answered
 Chosen Option : 1

Q.12 Which of the following numbers will replace the question mark (?) in the given series?
1076, ?, 688, 494, 300, 106

- Ans 1. 882
 2. 872
 3. 831
 4. 858

Question ID : 630680515504
 Option 1 ID : 6306802014423
 Option 2 ID : 6306802014424
 Option 3 ID : 6306802014421
 Option 4 ID : 6306802014422
 Status : Answered
 Chosen Option : 1

Q.13 In a certain code language, if RESCUE is coded as 'EUCRES' and HANDLE is coded as 'ELDHAN', then what will DANGER be coded as?

- Ans 1. REGDAN
 2. RGEDAN
 3. REGADN
 4. REGDND

Question ID : 630680515500
 Option 1 ID : 6306802014408
 Option 2 ID : 6306802014407
 Option 3 ID : 6306802014405
 Option 4 ID : 6306802014406
 Status : Answered
 Chosen Option : 1

Section : Question based on Computer Science Engineering

Q.1 Which of the following statement is CORRECT with reference to syntax-directed Translation Schemes?

- I. Synthesized translation defines the value of the translation of the nonterminal on the left side of the production as a function of the translations of the nonterminal on the right side.
- II. Translation of a non-terminal on the right side of the production is defined in terms of a translation of the non-terminal on left. Such translation is called inherited translation.

- Ans 1. Both I and II
 2. Only I
 3. Only II
 4. Neither I nor II

Question ID : 630680515556
 Option 1 ID : 6306802014631
 Option 2 ID : 6306802014629
 Option 3 ID : 6306802014630
 Option 4 ID : 6306802014632
 Status : Answered
 Chosen Option : 2

Q.2 Which of the following is the single path shortest path algorithm?

- Ans
- 1. Topological sort
 - 2. Binary search
 - 3. Tree search
 - 4. Dijkstra's algorithm

Question ID : 630680515541
Option 1 ID : 6306802014569
Option 2 ID : 6306802014570
Option 3 ID : 6306802014572
Option 4 ID : 6306802014571
Status : Answered
Chosen Option : 4

Q.3 What is the decimal conversion of $(630.4)_8$?

- Ans
- 1. 640.4
 - 2. 408.5
 - 3. 650
 - 4. 670

Question ID : 630680515510
Option 1 ID : 6306802014446
Option 2 ID : 6306802014445
Option 3 ID : 6306802014447
Option 4 ID : 6306802014448
Status : Answered
Chosen Option : 1

Q.4 Identify the category of the multithreading which allow a program to continue running even if part of it is blocked or is performing a lengthy operation.

- Ans
- 1. Economy
 - 2. Scalability
 - 3. Responsiveness
 - 4. Resource sharing

Question ID : 630680515561
Option 1 ID : 6306802014651
Option 2 ID : 6306802014652
Option 3 ID : 6306802014650
Option 4 ID : 6306802014649
Status : Answered
Chosen Option : 4

Q.5 Match the phases of compiler with its function.

	Phases		Function
I	Intermediate code generator	1	Keeps track of the names used by the program
II	Code generation	2	Create a stream of simple instructions
III	Table management	3	Produces the object code

- Ans
- 1. I - 1; II - 2; III - 3
 - 2. I - 1; II - 3; III - 2
 - 3. I - 2; II - 3; III - 1
 - 4. I - 2; II - 1; III - 3

Question ID : 630680515552
 Option 1 ID : 6306802014614
 Option 2 ID : 6306802014616
 Option 3 ID : 6306802014613
 Option 4 ID : 6306802014615
 Status : Answered
 Chosen Option : 3

Q.6 Which of the following statement is CORRECT regarding Referential Integrity Constants in Relational Database Management System?

- I. Referential Integrity Constants is a rule that maintains consistency among the rows of two tables (relations).
- II. Referential Integrity rule States that of there is a foreign key in one relation, either each foreign key value must match a primary key value in the other table or else the foreign key value must be null.

- Ans
- 1. Only II
 - 2. Both I and II
 - 3. Only I
 - 4. Neither I nor II

Question ID : 630680515573
 Option 1 ID : 6306802014698
 Option 2 ID : 6306802014699
 Option 3 ID : 6306802014697
 Option 4 ID : 6306802014700
 Status : Answered
 Chosen Option : 3

Q.7 A ____ defines an action the database should take when same database-related event occurs that causes a change in the content of a table in a database.

- Ans
- 1. Trigger
 - 2. Hit
 - 3. Field
 - 4. Relation

Question ID : 630680515574
 Option 1 ID : 6306802014701
 Option 2 ID : 6306802014704
 Option 3 ID : 6306802014703
 Option 4 ID : 6306802014702
 Status : Answered
 Chosen Option : 1

Q.8 In context of computer networks, based on data transmission speed which of the following are the bases categories of communication channels (paths)?

- I. Narrow band
- II. Voice band
- III. Broad band

- Ans
- 1. Only I and II
 - 2. I, II and III
 - 3. Only II and III
 - 4. Only I and III

Question ID : 630680515577
 Option 1 ID : 6306802014713
 Option 2 ID : 6306802014716
 Option 3 ID : 6306802014714
 Option 4 ID : 6306802014715
 Status : Answered
 Chosen Option : 4

Q.9 As per ISO 25010 quality model which of the following is not the characteristics which describe quality in use model?

- Ans
- 1. Efficiency
 - 2. Effectiveness
 - 3. Compatibility
 - 4. Satisfaction

Question ID : 630680515591
 Option 1 ID : 6306802014770
 Option 2 ID : 6306802014769
 Option 3 ID : 6306802014771
 Option 4 ID : 6306802014772
 Status : Answered
 Chosen Option : 3

Q.10 In context of computer Database, _____ language includes command to enable users to enter and manipulate data in a database.

- Ans
- 1. Data Definition
 - 2. Data Security
 - 3. Data Manipulation
 - 4. Data Integrity

Question ID : 630680515569
 Option 1 ID : 6306802014681
 Option 2 ID : 6306802014683
 Option 3 ID : 6306802014682
 Option 4 ID : 6306802014684
 Status : Answered
 Chosen Option : 3

Q.11 In context of OSI model of computer networks _____ layer provides means of establishing, maintaining and transmitting a dialogue between two end users.

- Ans
- 1. Presentation
 - 2. Transport
 - 3. Session
 - 4. Application

Question ID : 630680515583
Option 1 ID : 6306802014739
Option 2 ID : 6306802014737
Option 3 ID : 6306802014738
Option 4 ID : 6306802014740
Status : Answered
Chosen Option : 4

Q.12 Which of the following pair is CORRECT?

- I. Half adder - A combinational circuit that performs the addition of two bits
- II. Full adder - A combinational circuit that performs the addition of three bits

- Ans
- 1. Neither I nor II
 - 2. Only II
 - 3. Only I
 - 4. Both I and II

Question ID : 630680515514
Option 1 ID : 6306802014464
Option 2 ID : 6306802014462
Option 3 ID : 6306802014461
Option 4 ID : 6306802014463
Status : Answered
Chosen Option : 3

Q.13 Convert $(1111)_2$ into decimal equivalents.

- Ans
- 1. 16
 - 2. 11
 - 3. 20
 - 4. 15

Question ID : 630680515525
Option 1 ID : 6306802014507
Option 2 ID : 6306802014505
Option 3 ID : 6306802014508
Option 4 ID : 6306802014506
Status : Answered
Chosen Option : 3

Q.14 In context of OSI model of computer networks _____ layer provides services that directly support end users of networks and is a collection of miscellaneous protocols for various commonly used applications such as electronic mail, file transfer etc.

- Ans
- 1. Transport
 - 2. Application
 - 3. Presentation
 - 4. Session

Question ID : 630680515580
Option 1 ID : 6306802014728
Option 2 ID : 6306802014726
Option 3 ID : 6306802014725
Option 4 ID : 6306802014727
Status : Answered
Chosen Option : 2

Q.15 Which of the following algorithms is an example of the divide and conquer approach?

- Ans
- 1. Matrix-chain multiplication
 - 2. Quick sort
 - 3. Prim's algorithm
 - 4. Longest common subsequence

Question ID : 630680515534
Option 1 ID : 6306802014543
Option 2 ID : 6306802014541
Option 3 ID : 6306802014542
Option 4 ID : 6306802014544
Status : Answered
Chosen Option : 4

Q.16 In context of OSI model of computer networks, which of the following is a Transport Layer Protocol?

- I. Transport Control Protocol
- II. User Datagram Protocol

- Ans
- 1. Only I
 - 2. Neither I nor II
 - 3. Both I and II
 - 4. Only II

Question ID : 630680515579
Option 1 ID : 6306802014721
Option 2 ID : 6306802014724
Option 3 ID : 6306802014723
Option 4 ID : 6306802014722
Status : Answered
Chosen Option : 4

Q.17 A merchant allows a discount of 10 percent on marked price. If he wants to earn a profit of 10 percent, then marked price will be how much percentage more than the cost price?

- Ans
- 1. 50.66 percent
 - 2. 30 percent
 - 3. 22.22 percent
 - 4. 33.33 percent

Question ID : 630680515601
Option 1 ID : 6306802014812
Option 2 ID : 6306802014811
Option 3 ID : 6306802014809
Option 4 ID : 6306802014810
Status : Answered
Chosen Option : 3

Q.18 A _____ is a combinational circuit that selects binary information from one of many input lines and directs it to a single output line.

- Ans
- 1. half adder
 - 2. digital multiplexer
 - 3. full adder
 - 4. half subtractor

Question ID : 630680515516
Option 1 ID : 6306802014469
Option 2 ID : 6306802014470
Option 3 ID : 6306802014472
Option 4 ID : 6306802014471
Status : Answered
Chosen Option : 2

Q.19 In First-Come-First-Served CPU scheduling algorithm when all the other processes wait for one big process to get off the CPU is known as _____.

- Ans
- 1. Belady's Anomaly
 - 2. Aging
 - 3. Convoy effect
 - 4. Starvation

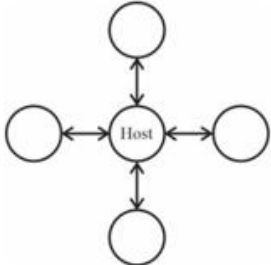
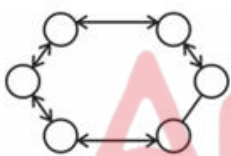
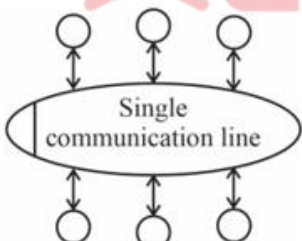
Question ID : 630680515563
Option 1 ID : 6306802014660
Option 2 ID : 6306802014659
Option 3 ID : 6306802014657
Option 4 ID : 6306802014658
Status : Answered
Chosen Option : 4

Q.20 Parser is categorized into which type of context-free grammar?

- Ans 1. Three
 2. Two
 3. Four
 4. One

Question ID : 630680515553
 Option 1 ID : 6306802014619
 Option 2 ID : 6306802014618
 Option 3 ID : 6306802014620
 Option 4 ID : 6306802014617
 Status : Answered
 Chosen Option : 1

Q.21 Match the following network diagram with the correct topology.

	Network diagram		Topology
I		1	Ring network
II		2	Bus network
III		3	Star network

- Ans 1. I - 3; II - 1; III - 2
 2. I - 1; II - 2; III - 3
 3. I - 3; II - 2; III - 1
 4. I - 1; II - 3; III - 2

Question ID : 630680515578
 Option 1 ID : 6306802014718
 Option 2 ID : 6306802014717
 Option 3 ID : 6306802014720
 Option 4 ID : 6306802014719
 Status : Answered
 Chosen Option : 1

Q.22 Which of the following is the type of parallel processor system as per Flynn's taxonomy?

- I. Single instruction, single data (SISD) stream
- II. Single instruction, multiple data (SIMD) stream

- Ans
- 1. Neither I nor II
 - 2. Both I and II
 - 3. Only II
 - 4. Only I

Question ID : 630680515518
Option 1 ID : 6306802014480
Option 2 ID : 6306802014479
Option 3 ID : 6306802014478
Option 4 ID : 6306802014477
Status : Not Answered
Chosen Option : --

Q.23 How many steps are required to construct a string abbbb from the grammar given by using right most derivation?

- $S \rightarrow aAB$
- $A \rightarrow bBb$
- $B \rightarrow A/E$

- Ans
- 1. 4
 - 2. 7
 - 3. 5
 - 4. 6

Question ID : 630680515548
Option 1 ID : 6306802014597
Option 2 ID : 6306802014600
Option 3 ID : 6306802014598
Option 4 ID : 6306802014599
Status : Answered
Chosen Option : 1

Q.24 According to memory hierarchy as one goes down the hierarchy what will NOT occur?

- Ans
- 1. Increasing capacity
 - 2. Decreasing cost per bit
 - 3. Increasing access time
 - 4. Increasing frequency of access of the memory by the processor

Question ID : 630680515524
Option 1 ID : 6306802014502
Option 2 ID : 6306802014501
Option 3 ID : 6306802014503
Option 4 ID : 6306802014504
Status : Answered
Chosen Option : 4

Q.25 Which of the given option is CORRECT?

- Ans
- 1. $(2/5) < (11/13) < (90/110)$
 - 2. $(16/19) < (3/7) < (40/90)$
 - 3. $(17/27) < (15/22) < (13/17)$
 - 4. $(4/9) < (3/8) < (2/7)$

Question ID : 630680515608
Option 1 ID : 6306802014838
Option 2 ID : 6306802014837
Option 3 ID : 6306802014839
Option 4 ID : 6306802014840
Status : Answered
Chosen Option : 1

Q.26 Which of the following is NOT the problems of synchronization?

- Ans
- 1. The Bounded-Buffer problem
 - 2. The Readers-Writer problem
 - 3. The Knapsack problem
 - 4. The Dining-Philosophers problem

Question ID : 630680515564
Option 1 ID : 6306802014661
Option 2 ID : 6306802014663
Option 3 ID : 6306802014662
Option 4 ID : 6306802014664
Status : Answered
Chosen Option : 2

Q.27 Which of the following is NOT an input device?

- Ans
- 1. Keyboard
 - 2. Voice response system
 - 3. Speech recognition devices
 - 4. Point and draw devices

Question ID : 630680515521
Option 1 ID : 6306802014489
Option 2 ID : 6306802014492
Option 3 ID : 6306802014491
Option 4 ID : 6306802014490
Status : Answered
Chosen Option : 4

Q.28 Given an array X = (22, 33, 55, 88, 96) and key = 88

How many iterations are required to find the key using binary search?


- Ans 1. 3
 2. 2
 3. 1
 4. 4

Question ID : 630680515535
 Option 1 ID : 6306802014547
 Option 2 ID : 6306802014546
 Option 3 ID : 6306802014545
 Option 4 ID : 6306802014548
 Status : Answered
 Chosen Option : 3

Q.29 Consider a hash table with 10 slots. What is the sequence of the following elements in a hash table if hash function is $k \text{ mode } 10$ and the collision is resolved using liner probing?

44, 26, 12, 93, 80, 57, 56, 23, 46, 36

- Ans 1. 80, 46, 12, 93, 44, 23, 26, 57, 56, 36
 2. 80, 36, 12, 93, 44, 23, 26, 57, 56, 46
 3. 80, 36, 12, 93, 44, 23, 26, 56, 46, 57
 4. 12, 23, 26, 36, 44, 46, 56, 57, 80, 93



Question ID : 630680515538
 Option 1 ID : 6306802014559
 Option 2 ID : 6306802014558
 Option 3 ID : 6306802014560
 Option 4 ID : 6306802014557
 Status : Answered
 Chosen Option : 1

Q.30 Which of the following machine learning algorithm does NOT use clustering?

- Ans 1. Linear Discriminant Analysis
 2. Expectation Maximization
 3. K-means
 4. K-Medians

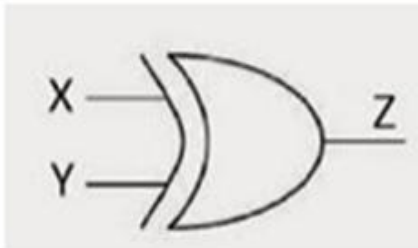
Question ID : 630680515595
 Option 1 ID : 6306802014788
 Option 2 ID : 6306802014787
 Option 3 ID : 6306802014785
 Option 4 ID : 6306802014786
 Status : Not Answered
 Chosen Option : --

Q.31 Full-Subtractor has ____ inputs and ____ outputs.

- Ans
- 1. 2; 2
 - 2. 2; 3
 - 3. 3; 2
 - 4. 3; 3

Question ID : 630680515515
 Option 1 ID : 6306802014468
 Option 2 ID : 6306802014466
 Option 3 ID : 6306802014465
 Option 4 ID : 6306802014467
 Status : Answered
 Chosen Option : 3

Q.32 What is the output function of the given XOR gate?



- Ans
- 1. $Z = X.Y$
 - 2. $Z = (X + Y)'$
 - 3. $Z = X + Y$
 - 4. $Z = XY' + X'Y$



Question ID : 630680515513
 Option 1 ID : 6306802014457
 Option 2 ID : 6306802014459
 Option 3 ID : 6306802014458
 Option 4 ID : 6306802014460
 Status : Answered
 Chosen Option : 2

Q.33 Any address generated by the CPU is commonly referred to as a ____ where an address seen by the memory unit i.e. the one loaded into the memory address register is known as ____.

- Ans
- 1. absolute address; physical address
 - 2. logical address; absolute address
 - 3. logical address; physical address
 - 4. physical address; relocatable address

Question ID : 630680515566
 Option 1 ID : 6306802014672
 Option 2 ID : 6306802014669
 Option 3 ID : 6306802014670
 Option 4 ID : 6306802014671
 Status : Answered
 Chosen Option : 2

Q.34 Context free grammar is _____ grammar according to the Chomsky hierarchy.

- Ans 1. Type 2
 2. Type 3
 3. Type 0
 4. Type 1

Question ID : 630680515546
 Option 1 ID : 6306802014590
 Option 2 ID : 6306802014589
 Option 3 ID : 6306802014592
 Option 4 ID : 6306802014591
 Status : Answered
 Chosen Option : 1

Q.35 Sort the following list using radix sort:
 429, 557, 757, 939, 536, 820, 455
 What is the output of the algorithm after the first pass?

- Ans 1. 820, 455, 536, 557, 757, 429, 939
 2. 429, 455, 557, 536, 757, 820, 939
 3. 820, 429, 536, 939, 455, 557, 757
 4. 939, 820, 757, 557, 536, 455, 429

Question ID : 630680515537
 Option 1 ID : 6306802014553
 Option 2 ID : 6306802014555
 Option 3 ID : 6306802014554
 Option 4 ID : 6306802014556
 Status : Answered
 Chosen Option : 3

Q.36 In context of data normalization in database management system, relation is in Boyce-Codd Normal Form if and only if every determinant is a _____.

- Ans 1. Foreign key
 2. Non-primary key
 3. Alternate key
 4. Candidate key

Question ID : 630680515570
 Option 1 ID : 6306802014685
 Option 2 ID : 6306802014688
 Option 3 ID : 6306802014687
 Option 4 ID : 6306802014686
 Status : Answered
 Chosen Option : 4

Q.37

What is the value of $\frac{21}{46} \div \frac{1}{6}$ of $\frac{23}{42} + \frac{96}{576} \times \frac{24}{3} - \left(\frac{88}{56} \times \frac{7}{9} \div \frac{5}{36} \right)$?

Ans

- 1. $\frac{5}{2}$
- 2. $\frac{7}{2}$
- 3. $\frac{11}{2}$
- 4. $\frac{9}{2}$

Question ID : 630680515605

Option 1 ID : 6306802014828

Option 2 ID : 6306802014827

Option 3 ID : 6306802014825

Option 4 ID : 6306802014826

Status : Answered

Chosen Option : 1

Q.38 Which of the following change brought about by the iterative waterfall model to the classical waterfall model?

- Ans 1. Addition of feedback paths
2. Easy to accommodate change request
3. Efficient error correction
4. Overlapping of phases

Question ID : 630680515585

Option 1 ID : 6306802014745

Option 2 ID : 6306802014746

Option 3 ID : 6306802014747

Option 4 ID : 6306802014748

Status : Answered

Chosen Option : 3

Q.39 Database designers use _____ to define the structure of a database (database scheme) which typically includes definition of all data elements of the database and organization of data elements into records, tables etc.

- Ans 1. Query by example
2. Data Manipulation Language
3. Find Command Language
4. Data Definition Language

Question ID : 630680515568

Option 1 ID : 6306802014678

Option 2 ID : 6306802014677

Option 3 ID : 6306802014680

Option 4 ID : 6306802014679

Status : Answered

Chosen Option : 4

Q.40 Choose the CORRECT sequence of steps involved in machine learning cycle.

Ans 1.

Data identification → Data preparation → Selection of machine learning algorithm → Train model → Deploy the model → Evaluate the model

2.

Data identification → Data preparation → Selection of machine learning algorithm → Train model → Evaluate the model → Deploy the model

3.

Data identification → Data preparation → Selection of machine learning algorithm → Evaluate the model → Train model → Deploy the model

4.

Data identification → Selection of machine learning algorithm → Data preparation → Train model → Evaluate the model → Deploy the model

Question ID : 630680515594
Option 1 ID : 6306802014784
Option 2 ID : 6306802014781
Option 3 ID : 6306802014783
Option 4 ID : 6306802014782

Status : Answered

Chosen Option : 3

Q.41 What is the approximate value of $149.832 \div 25.0138 + 7.10 \times 2.008$?

Ans 1. 35

2. 20

3. 11

4. 27

Question ID : 630680515603
Option 1 ID : 6306802014820
Option 2 ID : 6306802014817
Option 3 ID : 6306802014818
Option 4 ID : 6306802014819

Status : Answered

Chosen Option : 2

Q.42 In context of computer networks which of the following is a data transmission mode?

- I. Simplex
- II. Half Simplex
- III. Full Duplex

Ans 1. Only I and II

2. I, II and III

3. Only II and III

4. Only I and III

Question ID : 630680515576
Option 1 ID : 6306802014709
Option 2 ID : 6306802014712
Option 3 ID : 6306802014710
Option 4 ID : 6306802014711

Status : Answered

Chosen Option : 4

Q.43 Which of the following pair of Application layer protocol of OSI model and its services is CORRECT?

- I. X.400 – Directory
II. X.500 – Electronic Mail protocol

- Ans 1. Neither I nor II
 2. Both I and II
 3. Only I
 4. Only II

Question ID : 630680515582
Option 1 ID : 6306802014736
Option 2 ID : 6306802014735
Option 3 ID : 6306802014733
Option 4 ID : 6306802014734
Status : Answered
Chosen Option : 4

Q.44 Name the phase of compiler, which separates characters of the source language into groups that logically belong together, these groups are called tokens.

- Ans 1. Code optimization
 2. Syntax analysis
 3. Error handling
 4. Lexical analysis

Question ID : 630680515551
Option 1 ID : 6306802014611
Option 2 ID : 6306802014610
Option 3 ID : 6306802014612
Option 4 ID : 6306802014609
Status : Answered
Chosen Option : 4

Q.45 Which of the following is the CORRECT for O- notation?

- Ans 1.
 $O(g(n)) = \{f(n) : \text{there exist positive constant } C \text{ and } n_0 \text{ such that } 0 \leq f(n) \leq cg(n) \text{ for all } n \geq n_0\}$
 2.
 $O(g(n)) = \{f(n) : \text{there exist positive constant } C \text{ and } n_0 \text{ such that } 0 \leq Cg(n) \leq f(n) \text{ for all } n \geq n_0\}$
 3.
 $O(g(n)) = \{f(n) : \text{there exist positive constant } C_1, C_2 \text{ and } n_0 \text{ such that } 0 \leq C_1g(n) \leq f(n) \leq C_2g(n) \text{ for all } n \geq n_0\}$
 4.
 $O(g(n)) = \{f(n) : \text{there exist positive constant } C \text{ and } n_0 \text{ such that } 0 \geq f(n) \geq cg(n) \text{ for all } n \geq n_0\}$

Question ID : 630680515540
Option 1 ID : 6306802014565
Option 2 ID : 6306802014567
Option 3 ID : 6306802014568
Option 4 ID : 6306802014566
Status : Answered
Chosen Option : 2

Q.46 Which of the following is the external sorting?

- Ans 1. Insertion sort
 2. Merge sort
 3. Quick sort
 4. Selection sort

Question ID : 630680515539
 Option 1 ID : 6306802014561
 Option 2 ID : 6306802014564
 Option 3 ID : 6306802014562
 Option 4 ID : 6306802014563
 Status : Answered
 Chosen Option : 4

Q.47 Match the following algorithms with the data structure it uses.

	Algorithm		Data structure
I	Breadth first search	1	Stacks
II	Heap sort	2	Queue
III	Depth first search	3	Arrays

- Ans 1. I - 1; II - 2; III - 3
 2. I - 3; II - 1; III - 2
 3. I - 2; II - 3; III - 1
 4. I - 3; II - 2; III - 1



Question ID : 630680515530
 Option 1 ID : 6306802014527
 Option 2 ID : 6306802014526
 Option 3 ID : 6306802014525
 Option 4 ID : 6306802014528
 Status : Answered
 Chosen Option : 3

Q.48 What is the total number of swaps performed to sort the following list of elements 18, 32, 17, 19, 41, 15, 23 in an ascending order, using bubble sort?

- Ans 1. 12
 2. 13
 3. 10
 4. 11

Question ID : 630680515536
 Option 1 ID : 6306802014550
 Option 2 ID : 6306802014549
 Option 3 ID : 6306802014552
 Option 4 ID : 6306802014551
 Status : Answered
 Chosen Option : 2

Q.49 Mixture of milk and water in three bottles of equal capacity is in the ratio 3 : 4, 1 : 2 and 9 : 5 respectively. These three bottles are emptied into a large bottle. What will be the ratio of milk and water respectively in the large bottle?

Ans 1. 59 : 67

2. 49 : 37

3. 59 : 57

4. 69 : 57

Question ID : 630680515604

Option 1 ID : 6306802014821

Option 2 ID : 6306802014822

Option 3 ID : 6306802014824

Option 4 ID : 6306802014823

Status : Answered

Chosen Option : 3

Q.50 Which of the following array representation is CORRECT for the max heap of the following data elements?

20, 30, 70, 10, 5, 50, 80

Ans 1. 80, 70, 50, 30, 20, 10, 5

2. 5, 10, 20, 30, 50, 70, 80

3. 70, 20, 80, 10, 5, 30, 50

4. 80, 20, 70, 10, 5, 30, 50

Question ID : 630680515533

Option 1 ID : 6306802014538

Option 2 ID : 6306802014537

Option 3 ID : 6306802014539

Option 4 ID : 6306802014540

Status : Answered

Chosen Option : 1

Q.51 Which of the following is NOT the action performed by a shift – reduce parser?

Ans 1. Shift

2. Accept

3. Debase

4. Error

Question ID : 630680515555

Option 1 ID : 6306802014625

Option 2 ID : 6306802014627

Option 3 ID : 6306802014626

Option 4 ID : 6306802014628

Status : Answered

Chosen Option : 4

Q.52 Match the following type of software maintenance to the situation where it carried out.


	Maintenance		Situation
I	Corrective	1	Carried out to improve the performance of the system or to enhance the functionalities of the system
II	Perfective	2	Usually required for porting the software to work in new environment
III	Adaptive	3	Carried out to correct errors that were not discovered during the product development phase

- Ans
- 1. I - 1; II - 2; III - 3
 - 2. I - 3; II - 2; III - 1
 - 3. I - 1; II - 3; III - 2
 - 4. I - 3; II - 1; III - 2

Question ID : 630680515584
 Option 1 ID : 6306802014742
 Option 2 ID : 6306802014741
 Option 3 ID : 6306802014744
 Option 4 ID : 6306802014743
 Status : Not Answered
 Chosen Option : --

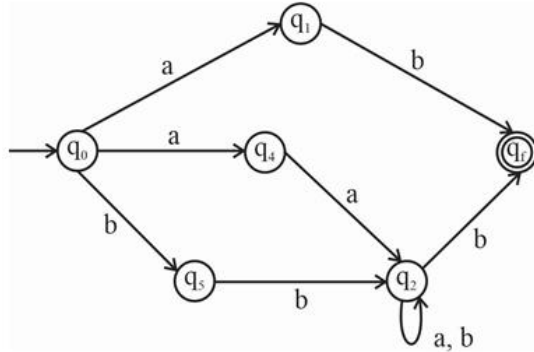
Q.53 In context of Relational Algebra of Database Management System, SELECT operation is used to select a subset of the tuples from a relation that satisfy a _____.

- Ans
- 1. Attribute Criteria
 - 2. Block Criteria
 - 3. Selection Criteria
 - 4. Relation Criteria



Question ID : 630680515572
 Option 1 ID : 6306802014696
 Option 2 ID : 6306802014694
 Option 3 ID : 6306802014693
 Option 4 ID : 6306802014695
 Status : Answered
 Chosen Option : 4

Q.54 The given finite automata is equivalent to which of the following regular expression?



- Ans
- 1. $(a + b)^* (aa + bb) (a + b)^*$
 - 2. $ab + (aa + bb) (a + b)^* b$
 - 3. $ab (aa + bb)(a + b)^* b$
 - 4. $ab (aa + b) (a + b)^* a$

Question ID : 630680515545
 Option 1 ID : 6306802014585
 Option 2 ID : 6306802014587
 Option 3 ID : 6306802014586
 Option 4 ID : 6306802014588
 Status : Answered
 Chosen Option : 3

Q.55 What is the decimal conversion of $(1010.011)_2$?

- Ans
- 1. 12
 - 2. 14
 - 3. 10.375
 - 4. 11.375

Question ID : 630680515509
 Option 1 ID : 6306802014443
 Option 2 ID : 6306802014444
 Option 3 ID : 6306802014441
 Option 4 ID : 6306802014442
 Status : Answered
 Chosen Option : 4

Q.56 The following C function is an example of what type of recursion?

```
int f(int n)
{
    if(n==1)
        return 1;
    else if(n==0)
        return 0;
    else
        return(f(n-1)+f(n-2));
}
```

Ans 1. Binary

2. Tail

3. Linear

4. Head

Question ID : 630680515527

Option 1 ID : 6306802014514

Option 2 ID : 6306802014515

Option 3 ID : 6306802014513

Option 4 ID : 6306802014516

Status : Answered

Chosen Option : 1

Q.57 In context of Database, which of the following is the CORRECT order for creating a database?

A → Defining its structure (scheme)

B → Entering data into the database

C → Designing forms (custom screens) for displaying and entering data

Ans 1. C → A → B

2. A → B → C

3. A → C → B

4. B → A → C

Question ID : 630680515567

Option 1 ID : 6306802014676

Option 2 ID : 6306802014673

Option 3 ID : 6306802014675

Option 4 ID : 6306802014674

Status : Answered

Chosen Option : 1

Q.58 Which of the following identities of regular expression is NOT correct?

- Ans
- 1. $\phi + R = R$
 - 2. $R^* R^* = R^*$
 - 3. $\Lambda R = R$
 - 4. $\phi R = R$

Question ID : 630680515544
Option 1 ID : 6306802014581
Option 2 ID : 6306802014584
Option 3 ID : 6306802014583
Option 4 ID : 6306802014582
Status : Answered
Chosen Option : 4

Q.59 Consider the following confusion matrix.

	Positive (Predicted)	Negative (Predicted)
Positive (Actual)	100	50
Negative (Actual)	150	9700

What is the value of False Negative in this confusion matrix?

- Ans
- 1. 9700
 - 2. 50
 - 3. 100
 - 4. 150

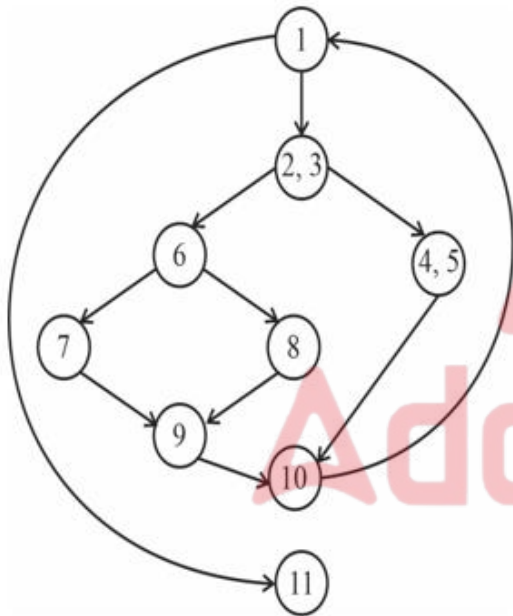
Question ID : 630680515598
Option 1 ID : 6306802014800
Option 2 ID : 6306802014798
Option 3 ID : 6306802014797
Option 4 ID : 6306802014799
Status : Answered
Chosen Option : 2

Q.60 The time dispatcher takes and for the dispatcher to stop one process and start another running is known as _____.

- Ans
- 1. dispatch wasting time
 - 2. dispatch latency
 - 3. dispatch turnaround time
 - 4. dispatch response time

Question ID : 630680515562
 Option 1 ID : 6306802014656
 Option 2 ID : 6306802014655
 Option 3 ID : 6306802014653
 Option 4 ID : 6306802014654
 Status : Answered
 Chosen Option : 2

Q.61 What is the cyclomatic complexity of the given flow graph?



- Ans
- 1. 3
 - 2. 6
 - 3. 4
 - 4. 5

Question ID : 630680515589
 Option 1 ID : 6306802014761
 Option 2 ID : 6306802014764
 Option 3 ID : 6306802014762
 Option 4 ID : 6306802014763
 Status : Answered
 Chosen Option : 4

Q.62 What is the output of the following postfix expression?

5, 6, 2, +, *, 8, 4, /, -

- Ans
- 1. 39
 - 2. 36
 - 3. 38
 - 4. 37

Question ID : 630680515528

Option 1 ID : 6306802014520

Option 2 ID : 6306802014517

Option 3 ID : 6306802014519

Option 4 ID : 6306802014518

Status : Answered

Chosen Option : 3

Q.63 Which of the following is NOT the part of the organization of C programming language Activation Record?

- Ans
- 1. Argument count
 - 2. Return address
 - 3. Local data
 - 4. Formal parameters

Question ID : 630680515557

Option 1 ID : 6306802014635

Option 2 ID : 6306802014636

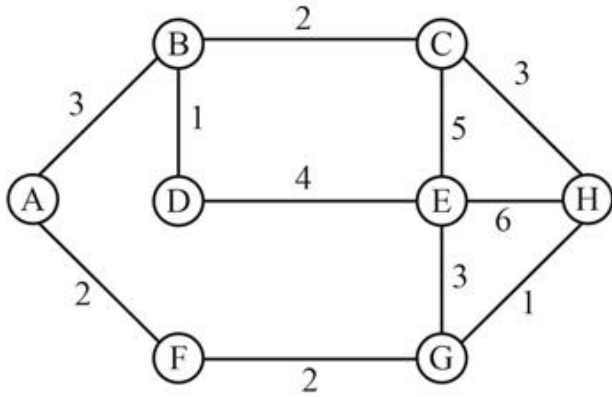
Option 3 ID : 6306802014634

Option 4 ID : 6306802014633

Status : Answered

Chosen Option : 1

Q.64 What is the minimum cost of the spanning tree of the given graph?



- Ans
- 1. 12
 - 2. 13
 - 3. 11
 - 4. 14

Question ID : 630680515531
 Option 1 ID : 6306802014530
 Option 2 ID : 6306802014531
 Option 3 ID : 6306802014529
 Option 4 ID : 6306802014532

Status : Answered
 Chosen Option : 4

Q.65 Which of the following statement is CORRECT about software testing?

- I. White box testing is performed early in the testing phase.
- II. Black box testing tends to be applied during later stages of testing.

- Ans
- 1. Neither I nor II
 - 2. Only II
 - 3. Both I and II
 - 4. Only I

Question ID : 630680515592
 Option 1 ID : 6306802014776
 Option 2 ID : 6306802014774
 Option 3 ID : 6306802014775
 Option 4 ID : 6306802014773

Status : Answered
 Chosen Option : 2

Q.66 Consider the following queue of character, implemented using array of 7 memory, Front = 3 Rear = 4 Queue: -, -, A, B, -, -, -, where '-' denote empty memory cell. What is the value of front and rear after the following operation?

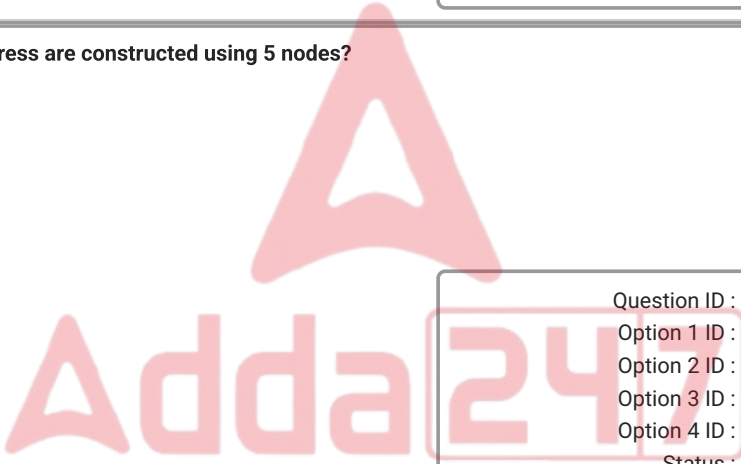
Enqueue C, D
Dequeue
Enqueue E, F
Dequeue

- Ans
- 1. Front = 3 Rear = 6
 - 2. Front = 4 Rear = 7
 - 3. Front = 5 Rear = 1
 - 4. Front = 1 Rear = 4

Question ID : 630680515529
 Option 1 ID : 6306802014524
 Option 2 ID : 6306802014523
 Option 3 ID : 6306802014522
 Option 4 ID : 6306802014521
 Status : Answered
 Chosen Option : 3

Q.67 How many distinct binary trees are constructed using 5 nodes?

- Ans
- 1. 42
 - 2. 30
 - 3. 16
 - 4. 5



Question ID : 630680515532
 Option 1 ID : 6306802014534
 Option 2 ID : 6306802014536
 Option 3 ID : 6306802014535
 Option 4 ID : 6306802014533
 Status : Answered
 Chosen Option : 2

Q.68 Which of the following is the CORRECT sequence of the phases of a compiler?

- Ans
- 1. Lexical analysis, syntax analysis, intermediate code generation, code generation, code optimization
 - 2. Lexical analysis, intermediate code generation, syntax analysis, code generation, code optimization
 - 3. Lexical analysis, intermediate code generation, syntax analysis, code optimization, code generation
 - 4. Lexical analysis, syntax analysis, intermediate code generation, code optimization, code generation

Question ID : 630680515558
 Option 1 ID : 6306802014639
 Option 2 ID : 6306802014638
 Option 3 ID : 6306802014637
 Option 4 ID : 6306802014640
 Status : Answered
 Chosen Option : 4

Q.69 $10 + (1010)^* [\wedge + (1010)^*]$ is equivalent to _____, where \wedge represent null.

- Ans
- 1. $(1010)^*$
 - 2. $(1010)^* + 10$
 - 3. $(1100)^*$
 - 4. $10 + (1010)^*$

Question ID : 630680515543
 Option 1 ID : 6306802014577
 Option 2 ID : 6306802014579
 Option 3 ID : 6306802014580
 Option 4 ID : 6306802014578
 Status : Answered
 Chosen Option : 4

Q.70 A process is _____, if it cannot affect or be affected by the other processes executing in the system.

- Ans
- 1. dependent
 - 2. independent
 - 3. co-operating
 - 4. self-supporting

Question ID : 630680515560
 Option 1 ID : 6306802014646
 Option 2 ID : 6306802014647
 Option 3 ID : 6306802014645
 Option 4 ID : 6306802014648
 Status : Answered
 Chosen Option : 2

Q.71 Which derivation is also known as canonical derivations?

- Ans
- 1. Left most derivation in reverse
 - 2. Left most derivation
 - 3. Right most derivation
 - 4. Right most derivations in reverse

Question ID : 630680515554
 Option 1 ID : 6306802014622
 Option 2 ID : 6306802014623
 Option 3 ID : 6306802014624
 Option 4 ID : 6306802014621
 Status : Answered
 Chosen Option : 4

Q.72 K-Nearest Neighbours algorithm is a _____ classification algorithm that classifies new data point based on the nearest data point.

- Ans
- 1. Unsupervised
 - 2. Supervised
 - 3. Reinforcement
 - 4. Deep learning

Question ID : 630680515596
 Option 1 ID : 6306802014790
 Option 2 ID : 6306802014789
 Option 3 ID : 6306802014791
 Option 4 ID : 6306802014792
 Status : Not Answered
 Chosen Option : --

Q.73 Match the following algorithm with its average complexity.

	Algorithm		Average Complexity
I	Binary search	1	$O(n^2)$
II	Quick sort	2	$O(\log n)$
III	Linear search	3	$O(n \log n)$
IV	Selection sort	4	$O(n)$

- Ans
- 1. I - 4; II - 3; III - 2; IV - 1
 - 2. I - 2; II - 3; III - 4; IV - 1
 - 3. I - 1; II - 4; III - 2; IV - 3
 - 4. I - 3; II - 1; III - 2; IV - 4



Question ID : 630680515542
 Option 1 ID : 6306802014576
 Option 2 ID : 6306802014575
 Option 3 ID : 6306802014573
 Option 4 ID : 6306802014574
 Status : Answered
 Chosen Option : 1

Q.74 In any computer network, a communication protocol normally perform, which of the following functions for efficient and error free transmission of data?

- I. Data Routing
- II. Procedure and order of Transmission
- III. Data security
- IV. Data formatting

- Ans
- 1. Only II, III and IV
 - 2. Only I, II and III
 - 3. I, II, III and IV
 - 4. Only I, III, IV

Question ID : 630680515581
 Option 1 ID : 6306802014730
 Option 2 ID : 6306802014729
 Option 3 ID : 6306802014732
 Option 4 ID : 6306802014731
 Status : Answered
 Chosen Option : 4

Q.75 What is the least number which when divided by 12, 16, 18 and 30 leaves a remainder of 4 in each case but is completely divisible by 7?

- Ans
- 1. 4245
 - 2. 4242
 - 3. 2324
 - 4. 2884

Question ID : 630680515606
 Option 1 ID : 6306802014830
 Option 2 ID : 6306802014829
 Option 3 ID : 6306802014832
 Option 4 ID : 6306802014831
 Status : Answered
 Chosen Option : 3

Q.76 Which of the following is NOT a process state?

- Ans
- 1. Ready
 - 2. Start
 - 3. New
 - 4. Running

Question ID : 630680515559
 Option 1 ID : 6306802014644
 Option 2 ID : 6306802014641
 Option 3 ID : 6306802014642
 Option 4 ID : 6306802014643
 Status : Answered
 Chosen Option : 2

Q.77 Match of the language with its machine format.

	Language		Machine
I	Unrestricted language	1	Finite automata
II	Context sensitive language	2	Push down automata
III	Context free language	3	Linear bounded automata
IV	Regular expression	4	Turing machine

- Ans
- 1. I - 2; II - 3; III - 4; IV - 1
 - 2. I - 4; II - 2; III - 1; IV - 3
 - 3. I - 3; II - 4; III - 1; IV - 2
 - 4. I - 4; II - 3; III - 2; IV - 1

Question ID : 630680515547
 Option 1 ID : 6306802014593
 Option 2 ID : 6306802014595
 Option 3 ID : 6306802014594
 Option 4 ID : 6306802014596
 Status : Answered
 Chosen Option : 4

Q.78 Which of the following statement is CORRECT?

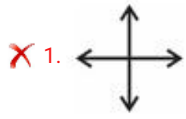
- I. An input device is an electromechanical device that accepts data from the outside world and translates it into a form a computer can interpret.
- II. An output device is an electromechanical device that accepts data from a computer and translates them into a form suitable for use by outside world.

- Ans
- 1. Only II
 - 2. Both I and II
 - 3. Only I
 - 4. Neither I nor II

Question ID : 630680515520
 Option 1 ID : 6306802014486
 Option 2 ID : 6306802014487
 Option 3 ID : 6306802014485
 Option 4 ID : 6306802014488
 Status : Answered
 Chosen Option : 3

Q.79 In the context of Relational Algebra of Database Management System, which of the following is a symbol JOIN operation?

Ans



Question ID : 630680515575
 Option 1 ID : 6306802014706
 Option 2 ID : 6306802014708
 Option 3 ID : 6306802014707
 Option 4 ID : 6306802014705

Status : Answered
 Chosen Option : 4

Q.80 Which of the following pair is CORRECT?

- I. Associative law : $(x*y)*z = x*(y*z)$
- II. Distributive law : $x*(y+z) = (x*y)+(x*z)$

- Ans
- ✗ 1. Only II
 - ✓ 2. Both I and II
 - ✗ 3. Only I
 - ✗ 4. Neither I nor II

Question ID : 630680515512
 Option 1 ID : 6306802014454
 Option 2 ID : 6306802014455
 Option 3 ID : 6306802014453
 Option 4 ID : 6306802014456

Status : Answered
 Chosen Option : 2

Q.81 Which view of the quality argues that quality is something you immediately recognize but cannot explicitly define according to David Galvin of the Harvard Business school?

- Ans
- ✗ 1. Manufacturer's view
 - ✗ 2. Product view
 - ✓ 3. Transcendental view
 - ✗ 4. User view

Question ID : 630680515590
 Option 1 ID : 6306802014767
 Option 2 ID : 6306802014768
 Option 3 ID : 6306802014765
 Option 4 ID : 6306802014766

Status : Not Answered
 Chosen Option : --

Q.82 Name the phase of the unified process model where customer communication and planning take place.

- Ans
- 1. Construction phase
 - 2. Elaboration phase
 - 3. Transition phase
 - 4. Inception phase

Question ID : 630680515586
 Option 1 ID : 6306802014751
 Option 2 ID : 6306802014750
 Option 3 ID : 6306802014752
 Option 4 ID : 6306802014749
 Status : Answered
 Chosen Option : 1

Q.83 Consider 2 dimensional array A[10][15]. Assume that each element takes one memory location and base address of array A is 100. Consider the lower bound of row and column as 0. What is the address of A[i][j] if array A is stored in row major from?

- Ans
- 1. $i + 15j + 100$
 - 2. $10i + j + 100$
 - 3. $i + 10j + 100$
 - 4. $15i + j + 100$

Question ID : 630680515526
 Option 1 ID : 6306802014511
 Option 2 ID : 6306802014510
 Option 3 ID : 6306802014512
 Option 4 ID : 6306802014509
 Status : Answered
 Chosen Option : 3

Q.84 In the push down automata, transitional function δ is in the form _____.

- Ans
- 1. $Q \times \Sigma \times \Gamma \rightarrow Q$
 - 2. $Q \times \Sigma \rightarrow Q$
 - 3. $Q \times (\Sigma \cup \{\lambda\}) \times \Gamma \rightarrow (Q, \Gamma^*)$
 - 4. $Q \times \Sigma \rightarrow (Q, \Gamma)$

Question ID : 630680515549
 Option 1 ID : 6306802014604
 Option 2 ID : 6306802014602
 Option 3 ID : 6306802014601
 Option 4 ID : 6306802014603
 Status : Answered
 Chosen Option : 2

Q.85 _____ begins at the vortex of the spiral and concentrate on each component of the software as implemented in source code.

- Ans
- 1. Integration testing
 - 2. Validation testing
 - 3. System testing
 - 4. Unit testing

Question ID : 630680515588
 Option 1 ID : 6306802014758
 Option 2 ID : 6306802014759
 Option 3 ID : 6306802014760
 Option 4 ID : 6306802014757
 Status : Answered
 Chosen Option : 2

Q.86 Which of the following is part of the hierarchical storage system?

- I. Cache memory
- II. Near-line mass storage devices

- Ans
- 1. Only I
 - 2. Neither I nor II
 - 3. Only II
 - 4. Both I and II



Question ID : 630680515523
 Option 1 ID : 6306802014497
 Option 2 ID : 6306802014500
 Option 3 ID : 6306802014498
 Option 4 ID : 6306802014499
 Status : Answered
 Chosen Option : 1

Q.87 Match the component of software architecture with its roles.

	Component		Role
I	Control component	1	That implements a complete or partial function i.e. required by the customer
II	Problem domain component	2	Responsible for function that support the processing required in the problem domain
III	Infrastructure component	3	Co-ordinate the invocation of all other problem domain components

- Ans
- 1. I - 3; II - 2; III - 1
 - 2. I - 1; II - 3; III - 2
 - 3. I - 3; II - 1; III - 2
 - 4. I - 1; II - 2; III - 3

Question ID : 630680515587
 Option 1 ID : 6306802014753
 Option 2 ID : 6306802014756
 Option 3 ID : 6306802014755
 Option 4 ID : 6306802014754
 Status : Not Answered
 Chosen Option : --

Q.88 Which of the following is the mostly used activation function in the area of deep learning?

- Ans 1. Rectified linear unit function
 2. Identity function
 3. Step function
 4. Sigmoid function

Question ID : 630680515600
Option 1 ID : 6306802014805
Option 2 ID : 6306802014807
Option 3 ID : 6306802014806
Option 4 ID : 6306802014808
Status : Not Answered
Chosen Option : --

Q.89 Which of the following is NOT part of the mechanical diagram of the Turing machine?

- Ans 1. Queue
 2. Finite control
 3. Input tape
 4. Read-write head

Question ID : 630680515550
Option 1 ID : 6306802014608
Option 2 ID : 6306802014607
Option 3 ID : 6306802014605
Option 4 ID : 6306802014606
Status : Answered
Chosen Option : 1

Q.90 Dot-matrix printers are character printers that print _____ character at a time.

- Ans 1. one
 2. three
 3. two
 4. four

Question ID : 630680515522
Option 1 ID : 6306802014493
Option 2 ID : 6306802014495
Option 3 ID : 6306802014494
Option 4 ID : 6306802014496
Status : Answered
Chosen Option : 1

Q.91 Three unbiased dices are thrown, what is the probability of getting a sum of at least 11?

- Ans
- 1. $1/2$
 - 2. $13/36$
 - 3. $1/3$
 - 4. $11/36$

Question ID : 630680515607
 Option 1 ID : 6306802014834
 Option 2 ID : 6306802014836
 Option 3 ID : 6306802014833
 Option 4 ID : 6306802014835
 Status : Answered
 Chosen Option : 2

Q.92 _____ acts as a high-speed buffer between CPU and main memory and computer systems use it to store temporarily very active data and instructions during processing.

- Ans
- 1. EPROM
 - 2. Flash memory
 - 3. PROM
 - 4. Cache memory

Question ID : 630680515519
 Option 1 ID : 6306802014482
 Option 2 ID : 6306802014484
 Option 3 ID : 6306802014483
 Option 4 ID : 6306802014481
 Status : Answered
 Chosen Option : 4

Q.93 Which of the following statement is correct regarding complements?

- I. Complements are used in digital computers for simplifying the subtraction operation and for logical manipulations.
- II. There are two types of complements for each base-r system: the r's complement and (r-1)'s complement.

- Ans
- 1. Both I and II
 - 2. Only I
 - 3. Neither I nor II
 - 4. Only II

Question ID : 630680515511
 Option 1 ID : 6306802014451
 Option 2 ID : 6306802014449
 Option 3 ID : 6306802014452
 Option 4 ID : 6306802014450
 Status : Answered
 Chosen Option : 1

Q.94 Which of the following statement is CORRECT regarding FLIP-FLOPS?

I. A FLIP-FLOP circuit can maintain a binary state indefinitely (as long as power is applied) until directed by an input signal to switch states.

II. The major differences among various types of FLIP-FLOPS are in the number of inputs they possess and in the manner in which the inputs affect the binary state.

- Ans
- 1. Only II
 - 2. Neither I nor II
 - 3. Only I
 - 4. Both I and II

Question ID : 630680515517
Option 1 ID : 6306802014474
Option 2 ID : 6306802014476
Option 3 ID : 6306802014473
Option 4 ID : 6306802014475
Status : Not Answered
Chosen Option : --

Q.95 Which of the following formula is used to calculate the sensitivity of a model?

- Ans
- 1. $\frac{FP}{TP + FN}$
 - 2. $\frac{TN}{TP + FN}$
 - 3. $\frac{TP}{TP + FN}$
 - 4. $\frac{FN}{TP + FN}$

Question ID : 630680515599
Option 1 ID : 6306802014804
Option 2 ID : 6306802014801
Option 3 ID : 6306802014803
Option 4 ID : 6306802014802
Status : Not Answered
Chosen Option : --

Q.96 Match the machine learning technique with its way of working.

	Machine learning type		Methods
I	Supervised learning	1	Utilizes data that is not labelled and attempts to find patterns by clustering similar objects together
II	Unsupervised learning	2	Work on the principle of reward and punishment
III	Reinforcement	3	Utilizes a labelled dataset

- Ans
- 1. I - 1; II - 3; III - 2
 - 2. I - 1; II - 2; III - 3
 - 3. I - 3; II - 2; III - 1
 - 4. I - 3; II - 1; III - 2

Question ID : 630680515593
 Option 1 ID : 6306802014779
 Option 2 ID : 6306802014778
 Option 3 ID : 6306802014777
 Option 4 ID : 6306802014780
 Status : Not Answered
 Chosen Option : --

Q.97 If $w : x : y = 3 : 5 : 2$ and $y : z = 2 : 5$, then what is the value of $w : x : y : z$?

- Ans
- 1. 2 : 5 : 2 : 5
 - 2. 4 : 5 : 3 : 5
 - 3. 3 : 5 : 2 : 5
 - 4. 3 : 5 : 2 : 4

Question ID : 630680515602
 Option 1 ID : 6306802014815
 Option 2 ID : 6306802014816
 Option 3 ID : 6306802014814
 Option 4 ID : 6306802014813
 Status : Answered
 Chosen Option : 3

Q.98 In context to Database management system which of the following is CORRECT regarding query by example?

- I. A Query by example form collects all information from a user for composing query language statements for search criterion.
- II. Query by example relieves users from remembering query language keywords and using them with correct syntax to form queries.

- Ans
- 1. Only I
 - 2. Neither I nor II
 - 3. Both I and II
 - 4. Only II

Question ID : 630680515571
 Option 1 ID : 6306802014689
 Option 2 ID : 6306802014692
 Option 3 ID : 6306802014691
 Option 4 ID : 6306802014690
 Status : Answered
 Chosen Option : 1

Q.99 Which of the following is NOT the necessary condition for the deadlock?

- Ans 1. Preemption
 2. Circular wait
 3. Mutual exclusion
 4. Hold and wait

Question ID : 630680515565
Option 1 ID : 6306802014667
Option 2 ID : 6306802014668
Option 3 ID : 6306802014665
Option 4 ID : 6306802014666
Status : Answered
Chosen Option : 1

Q.100 Which of the following statement is CORRECT regarding Entropy of which is a measurement the uncertainty in data?

- I. Low entropy indicates that the data labels are quite uniform.
II. High entropy means the labels are in chaos.

- Ans 1. Both I and II
 2. Only II
 3. Neither I nor II
 4. Only I

Question ID : 630680515597
Option 1 ID : 6306802014795
Option 2 ID : 6306802014794
Option 3 ID : 6306802014796
Option 4 ID : 6306802014793
Status : Answered
Chosen Option : 2