

KVS PRT General English Memory Based Questions

Q1. Choose the correct antonym

PERPLEX

- (a) untangle
- (b) bewilder
- (c) confused
- (d) muddle

Ans.(a)

Q2. Choose the one that best expresses the meaning of the given idiom/phrase.

Gall and wormwood

- (a) Source of irritation
- (b) To be ready
- (c) To gamble everything you have
- (d) Very intimate friends

Ans.(a)

Q3. Choose the one which can be substituted for the given words/sentence.

Secret or illegal religious meeting

- (a) conventicler
- (b) carrion
- (c) haggle
- (d) savant

Ans.(a)

Q4. Select the correct form of tense:

Had you gone to the office, this issue wouldn't have arisen.

- (a) Present continuous tense
- (b) Present perfect continuous tense
- (c) Simple present tense
- (d) Present perfect tense

Ans.(d)

Q5. Choose the one that best expresses the meaning of the given idiom/phrase.

Can't cut the mustard

- (a) Someone who is not adequate enough to compete or participate
- (b) Angry about something that occurred in the past
- (c) Someone who is not able to walk properly
- (d) Someone who doesn't believe in God

Ans.(a)

Q6. Out of the four alternatives suggested, select the one which best expresses the same sentence in Passive/Active voice.

He had kept up his training regimen for a month.

- (a) Keeping up the training regimen had been done by him for a month.
- (b) For a month he has had been keeping his training regimen.
- (c) He is training and this has been kept for a month.
- (d) His training regimen had been kept up by him for a month.

Ans.(d)

Q7. Fill in the blank with the correct tense

At the moment the child ____ (play) in the park

- (a) Has been playing
- (b) Playing
- (c) Played
- (d) Is playing

Ans.(d)

Q8. Out of the four alternatives suggested, select the one which best expresses the same sentence in Indirect/Direct speech.

My son said to me, "I will not study."

- (a) My son tells me that he will not study.
- (b) My son tells me that he will not be studying.
- (c) My son told me that he would not study.
- (d) My son had told me that he would not be studying.

Ans.(d)

Directions (9-10): Find which part of speech the bolded word belongs to. Indicate your response accordingly.

Q9. Edible oil prices are likely to **soften** by December.

- (a) Adjective
- (b) Conjunction
- (c) Preposition
- (d) Verb

Ans.(d)

Q10. Soybean and palm oil **are** showing marginally declining trends.

- (a) Conjunction
- (b) Verb
- (c) Pronoun
- (d) Preposition

Ans.(b)

Q11. Choose the one which can be substituted for the given words/sentence.

Having the same source or origin

- (a) gibe
- (b) polemic
- (c) cognate
- (d) dais

Ans.(c)

Q12. Choose the one which can be substituted for the given words/sentence.

Bend over backward

- (a) To choose between two alternative choices
- (b) In Anxiety
- (c) Do whatever it takes to help, willing to do anything
- (d) To bend one's body the way one wants

Ans.(c)

Q13. Select the synonym of the given word.

ORDAIN

- (a) revoke
- (b) impose
- (c) abrogate
- (d) violate

Ans.(b)

Q14. Choose the correct antonym

BEHEST

- (a) bidding
- (b) behalf
- (c) reply
- (d) request

Ans.(c)

Q15. Fill in the blank with the correct article

My sister and I are going to a wedding reception. ____ reception is held on an open lawn at 9 p.m.

- (a) the
- (b) a
- (c) an
- (d) no article

Ans.(a)

KVS PRT General Hindi Memory **Based Questions**

Q1. संधि के संदर्भ में असंगत है-

- (a) प्रश्नोत्तर – गुण संधि
- (b) वधूजार्ज- दीर्घ संधि
- (c) स्विचवी – व्यंजन संधि
- (d) नमस्ते- व्यंजन संधि

Ans.(d)

Q2. 'आकार' शब्द का समानार्थी शब्द क्या होगा-

- (a) आकृति
- (b) निराकार
- (c) द्रश्य
- (d) नजारा

Ans.(a)

Q3. 'इनाम' का समानार्थी शब्द क्या होगा-

- (a) पुरस्कार
- (b) ईमानदारी
- (c) यश
- (d) इनमे से कोई नहीं

Ans.(a)

Q4. 'कृष्ण' का निम्न में से क्या अनेकार्थी शब्द नहीं होगा-

- (a) काला
- (b) वेदव्यास
- (c) कृति
- (d) एक पक्ष

Ans.(c)

Q5. राख की रस्सी लोककथा किस देश से सम्बन्धित है-

- (a) भारत
- (b) श्री लंका
- (c) तिब्बत
- (d) कोई नहीं

Ans.(c)

Q6. बेटा शब्द का पर्यायवाची क्या है-

- (a) पुत्र
- (b) वत्स
- (c) तनुज
- (d) उपरोक्त सभी सत्य है

Ans.(d)

Q7. लड़की शब्द में कौन सी संज्ञा है-

- (a) जाति वाचक
- (b) व्यक्तिवाचक
- (c) भाववाचक
- (d) द्रव्यवाचक

Ans.(a)

Q8. समझदारी का विलोम शब्द क्या होगा-

- (a) चालाकी
- (b) बेवकूफी
- (c) इमानदारी
- (d) उपरोक्त सभी सत्य है

Ans.(b)

Q9. राख की रस्सी क्या है-

- (a) लोककथा
- (b) उपन्यास
- (c) निबंध
- (d) यात्रा व्रतांत

Ans.(a)

Q10. निराकार का संधि विच्छेद –

- (a) निः +आकार- विसर्ग संधि
- (b) नी +आकार – गुण संधि
- (c) नई + आकर – व्यंजन संधि
- (d) उपरोक्त सभी गलत है

Ans.(a)

Q11. जो अव्यय शब्द दो पदों, पदबंधो या उपवाक्यो को जोड़ने का कार्य करते हैं, उन्हें क्या कहा जाता है-

- (a) क्रिया विशेषण
- (b) समुच्चय बोधक
- (c) सम्बन्ध बोधक
- (d) विस्मयादी बोधक

Ans.(b)

Q12. निम्नलिखित में से कौन सा सकर्मक वाच्य वाला वाक्य है-

- (a) माता जी पाठ पढ़ाती है
- (b) लड़के हंस रहे हैं
- (c) यहाँ नहीं सोया जायेगा
- (d) गरीबो को वस्त्र दिए गए

Ans.(d)

Q13. सुनीता अपनी बेटी से काम करवाती है, निम्न में से वाक्य किस क्रिया का उदाहरण है-

- (a) प्रेरणार्थक क्रिया
- (b) पूर्वकालीन क्रिया
- (c) संयुक्त क्रिया
- (d) द्विकर्मक क्रिया

Ans.(a)

Q14. निम्नलिखित शब्दों में से समूह का पर्यायवाची शब्द नहीं है-

- (a) पुंज
- (b) गण
- (c) व्रन्द
- (d) हेम

Ans.(d)

Q15. निम्नलिखित वाक्यों में से किस वाक्य में सर्वनाम का अशुद्ध प्रयोग हुआ है-

- (a) यह स्वयं यहाँ नहीं आना चाहती
- (b) आपके आग्रह पर मई दिल्ली जा रहा हूँ
- (c) मैं तेरे को एक घड़ी दूंगा
- (d) मुझे इस बैठक की सूचना नहीं थी

Ans.(c)

Q16. “शेर दहाड़ता है” यह वाक्यक्रिया के लिए उदहारण है-

- (a) सकर्मक
- (b) अकर्मक
- (c) द्विकर्मक
- (d) अधिकर्मक

Ans.(b)

Q17. राम तबला बजाता है, वाक्य में कौन सी क्रिया है –

- (a) अकर्मक
- (b) सकर्मक
- (c) संयुक्त
- (d) नमबोधक

Ans.(b)

Q18. निम्न में से कौन सा विकारी शब्द है-

- (a) उधर
- (b) खेलना
- (c) इसलिए
- (d) हाय !

Ans.(b)

Q19. खड़ी बोली हिंदी की किस उपभाषा के अंतर्गत आती है-

- (a) पूर्वी हिंदी
- (b) पश्चिमी हिंदी
- (c) बिहारी हिंदी
- (d) पहाड़ी हिंदी

Ans.(b)

Q20. विशाल हृदय में कौन सा समास है-

- (a) विशाल हृदय है जिसका – बहुब्रिही
- (b) विशाल और हृदय- द्वंद
- (c) विशाल रूपी हृदय- कर्मधारय
- (d) विशाल में हृदय – तत्पुरुष

Ans.(c)

**KVS PRT General Awareness &
Current Affairs Memory Based
Questions**

Q1. Which team won FIFA World Cup 2023?

- (a) France
- (b) Argentina
- (c) Brazil
- (d) India

Ans.(b)

Q2. Who won Best Actor in IFFI Award 2022 (Female)?

- (a) Angela molina
- (b) Daniela Marin Navarro
- (c) Usha Jadhav
- (d) None of the above

Ans.(b)

Q3. Who received Sahitya Academy Award 2022 for Dogri literature?

- (a) Anuradha Roy
- (b) Badri Narayan
- (c) Praveen Bandekar
- (d) Veena Gupta

Ans.(d)

Q4. Chiranjivi yojna belongs to which state?

- (a) Andhra Pradesh
- (b) Tamil Nadu
- (c) Kerala
- (d) Karnataka

Ans.(a)

Q5. How many digits are there in a Pin Code of any city?

- (a) 3
- (b) 4
- (c) 5
- (d) 6

Ans.(d)

Q6. Who has been appointed as a new president of BCCI?

- (a) Roger Binny
- (b) Saurav Ganguly
- (c) Sachin Tendulkar
- (d) Rahul Dravid

Ans.(a)

**KVS PRT Reasoning Ability Memory
Based Questions**

Q1. Direction: A, B, C, D, E, F, G, and H are eight friends sitting on a circular table, facing the center. E is 2nd to the left of A and is 4th to the right of G. F is 2nd to the right of B, who is 2nd to the right of H. C is to the immediate right of A, who is 4th to the right of D.

Who is 2nd to the left of H?

- (a) G
- (b) H
- (c) C
- (d) B

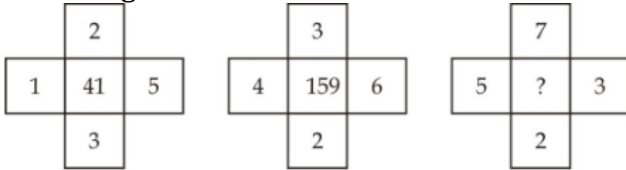
Ans.(c)

Q2. From a point, Lokesh starts walking towards south and after walking 30 m, he turns to his right and walks 20 metres, then he turns right and walks 30 metres. Finally turns his left and walk 40 m. In which direction is he from the starting point?

- (a) North-west
- (b) East
- (c) West
- (d) South

Ans.(c)

Q3. In the following question, select the number which can be placed at the sign of question mark from the given alternatives.

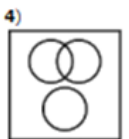
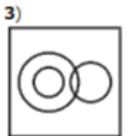
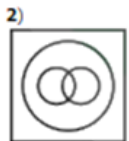
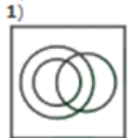


- (a) 189
- (b) 227
- (c) 277
- (d) 339

Ans.(b)

Q4. Identify the diagram that best represents the relationship among the given classes
Profession , doctor , lawyer

Options:



- (a) 1
- (b) 2
- (c) 3
- (d) 4

Ans.(b)

Q5. In the following question select the missing number from the given series.

7, 19, 42, 87, ?

- (a) 136
- (b) 176
- (c) 172
- (d) 216

Ans.(b)

KVS PRT Computer Literacy Memory Based Questions

Q1. Which of the following is not the action of a mouse?

- (a) Click
- (b) Right click
- (c) Double click
- (d) None of the above

Ans.(d)

Q2. Which among the following is an input device?

- (a) Mouse
- (b) Monitor
- (c) Printer
- (d) Speaker

Ans.(a)

Q3. CPU Stands for:

- (a) Central Processing Unit
- (b) Central Progressive Unit
- (c) Centralized Processing Unit
- (d) Central Programming Unit

Ans.(a)

Q4. _____ is also known as inkless printer.

- (a) Thermal printer
- (b) Inkjet printer
- (c) OCR
- (d) Dot Matrix printer

Ans.(a)

Q5. Which of the following is not a web browser?

- (a) Chrome
- (b) Mozilla firefox
- (c) Opera
- (d) MS DOS

Ans.(d)

**KVS PRT Perspectives on Education
and Leadership Memory Based
Questions**

Q1. What is the minimum number of hours of work per week teachers in the Right to Education Act, 2009?

- (a) 30
- (b) 56
- (c) 45
- (d) 70

Ans.(c)

Q2. Which of the following is the primary socialization agency?

- (a) school
- (b) media
- (c) government
- (d) family

Ans.(a)

Q3. Creativity is usually associated with:

- (a) convergent thinking
- (b) divergent thinking
- (c) modelling
- (d) imitation

Ans.(b)

Q4. Which of the following is not a guiding principle of NCF-2005?

- (a) connecting knowledge to life outside the world
- (b) ensuring that learning shifts from rote method
- (c) making examinations more flexible and interacting than with classroom shift
- (d) students need to appear in examinations regularly

Ans.(d)

Q5. Growth and development of children consists of

- (a) quantitative changes
- (b) qualitative changes
- (c) Both (a) and (b)
- (d) only physical changes in the body size and structure

Ans.(c)

Q6. Which of the following institutions has constructed the National Curriculum Framework for school education?

- (a) CBSE
- (b) UPPSC
- (c) NCERT
- (d) AICTE

Ans.(c)

Q7. The knowledge of which of these is most essential for a teacher of primary class?

- (a) child psychology
- (b) education philosophy
- (c) health science
- (d) social science

Ans.(a)

Q8. A child is getting spoiled in bad company. What would be your duty as a teacher?

- (a) to contact his parents
- (b) to ignore him
- (c) to counsel him by taking confidence
- (d) to scold him

Ans.(c)

Q9. A period of learning, where no improvement in performance is made, is called

- (a) learning curve
- (b) plateau of learning
- (c) memory
- (d) attention

Ans.(b)

Q10. Maturation of readiness refers to:

- (a) the learner's readiness and willpower to learn
- (b) the learner's ability to learn
- (c) maturation and willingness
- (d) none of these

Ans.(a)

Q11. Teaching being an activity should also be planned and then _____

- (a) communicated
- (b) executed
- (c) organized
- (d) formulated

Ans.(b)

Q12. What is the first approach to integration of ICT in education?

- (a) emerging approach
- (b) applying approach
- (c) infusing approach
- (d) transforming approach

Ans.(a)

Q13. Students having Autism can be identified by the challenges they face:

- (a) expressive and receptive communication
- (b) following a fixed routine
- (c) memorization of information
- (d) gross motor skills

Ans.(a)

Q14. Learning disability that affects physical coordination is:

- (a) dysgraphia
- (b) dyslexia
- (c) dysphasia
- (d) dyspraxia

Ans.(d)

Q15. The role of a teacher in an inclusive classroom is :

- (a) to give standard instructions
- (b) giving opportunities to all the children
- (c) use one fixed teaching method for all
- (d) to base expectations on the normative culture

Ans.(b)

Q16. The biological characteristics such as hunger, thirst, sleep, as well as reflexes, are inborn and they comprise what Freud has referred to as

- (a) Ego
- (b) Super ego
- (c) Id
- (d) Libido

Ans.(c)

Q17. Which of the following is NOT a suitable learning material for students who are partially sighted?

- (a) Talking books, felt bulletin boards
- (b) Small-print worksheets
- (c) Large-print books
- (d) Three-dimensional maps and charts

Ans.(b)

Q18. According to Erickson, resolving the crisis of identity versus identity diffusion is the

The psychological task of:

- (a) Childhood
- (b) Adolescence
- (c) Infancy
- (d) none of These

Ans.(b)

Q19. What are the school-related factors which influences students' adjustment in school?

- (a) Proper training to teachers
- (b) Partial school environment
- (c) Proper training to students
- (d) None of the above

Ans.(a)

Q20. Which of the following is most required characteristic of teacher as a leader?

- (a) Confidence
- (b) Inspires others
- (c) Unaccountable
- (d) Creative and innovative

Ans.(d)

Q21. National Education Policy 2020 lays emphasis on-

- (a) Rote learning
- (b) Learning only for exams
- (c) Practice and drill
- (d) Conceptual understanding

Ans.(d)

Q22. Which of the following are included in foundational Literacy and Numeracy?

- (a) Reading
- (b) Writing
- (c) Arithmetic
- (d) All of the above

Ans.(d)

Q23. Achieving physiological stability is a task of-

- (a) Infancy
- (b) Childhood
- (c) Adolescence
- (d) None of the above

Ans.(a)

Q24. Most psychologists believe that development is due

- (a) largely to nature
- (b) largely to nurture
- (c) to nature and nurture acting
- (d) to an interaction of nature and nurture

Ans.(d)

Q25. What is the basic idea behind the cultural acquisition?

- (a) Learning a culture
- (b) imbibing a culture
- (c) developing a culture
- (d) born with a culture

Ans.(b)

KVS PRT EVS Memory Based Questions

Q1. _____ is a place where changpa kept their goat and sheep.

- (a) stable
- (b) lekha
- (c) kennel
- (d) nest

Ans.(a)

Q2. Which of the following is synthetic fibre?

- (a) cotton
- (b) silk
- (c) nylon
- (d) jute

Ans.(c)

Q3. How one can protect himself from lightning?

- (a) stand under tree
- (b) stand in open park
- (c) take a walk on terrace
- (d) sit inside the car and close the window

Ans.(d)

Q4. Malaria is caused by

- (a) bacteria
- (b) female anopheles mosquito
- (c) virus
- (d) aedes mosquito

Ans.(b)

Q5. Animal who sleeps 17 hours a day.

- (a) sloth
- (b) elephant
- (c) tiger
- (d) snake

Ans.(a)

Q6. Pashmina shawl takes

- (a) 200 hrs
- (b) 250 hrs
- (c) 100 hrs
- (d) 150 hrs

Ans.(b)

Q7. Valley of flowers is a national park of _____

- (a) Kerala
- (b) Uttarakhand
- (c) Tamil Nadu
- (d) Rajasthan

Ans.(b)

Q8. The objective of NIPUN BHARAT Mission is that the child must gain proficiency in reading and writing when the child

- (a) enters school
- (b) reaches class 3
- (c) reaches class 6
- (d) reaches class 8

Ans.(b)

Q9. Length of alimentary canal _____

- (a) 100 cm
- (b) 3-4 m
- (c) 4-6 m
- (d) 6-9 m

Ans.(d)

Q10. Food which gives instant energy?

- (a) carbohydrates
- (b) fats
- (c) proteins
- (d) vitamins

Ans.(a)

Q11. For the cultivation of which crop is black soil most suitable

- (a) cotton
- (b) rice
- (c) jute
- (d) wheat

Ans.(a)

Q12. The national park that is declared a UNESCO World Heritage site:

- (a) Gangotri National Park
- (b) Khangchendzonga National Park
- (c) Gir Forest National Park
- (d) Desert National Park

Ans.(b)

Q13. The process in which nitrates are converted into simple nitrogen by the action of anaerobic bacteria is called

- (a) ammonification
- (b) assimilation
- (c) denitrification
- (d) nitrification

Ans.(c)

Q14. Microorganism act upon the dead plant to produce:

- (a) mushroom
- (b) sand
- (c) humus
- (d) wood

Ans.(c)

Q15. Which among the following acids proteins are made of ?

- (a) acetic acid
- (b) amino acid
- (c) nitric acid
- (d) sulphuric acid

Ans.(b)

Q16. Which of the following chemical is used to test the presence of protein in our food?

- (a) copper sulphate
- (b) caustic soda and copper sulphate
- (c) iodine and copper sulphate
- (d) iodine and caustic acid

Ans.(b)

Q17. Where is the Indian Robin built its nest?

- (a) among the thorns of cactus plant
- (b) between the stones
- (c) top of the tree
- (d) on the windows of house

Ans.(b)

Q18. In the gardens of which one of the following states the plants of Tejpatta, small and big cardamoms and black pepper grow.

- (a) west bengal
- (b) gujarat
- (c) kerala
- (d) M.P

Ans.(c)

Q19. Green manuring refers to

- (a) adding vermicides to the crop
- (b) growing green crops of leguminous plants
- (c) adding decomposed organic matter in soil
- (d) adding freshly prepared pesticide to the crop

Ans.(c)

Q20. A child keeps a pet and plays with it daily. How do it helps in his/her development?

- (a) strengthening
- (b) social upbringing
- (c) challenging
- (d) social facilitation

Ans.(d)

KVS PRT Maths Memory Based Questions

Q1. Largest 5 digit number which is divisible by 64:

- (a) 99964
- (b) 99684
- (c) 99968
- (d) 99989

Ans.(c)

Q2. 9900909 can be written as:

- (a) Ninety lac Nine hundred nine
- (b) Ninety lac Nine thousand nine
- (c) Ninety nice lac nine hundred nine
- (d) None of the above

Ans.(a)

Q3. The perimeter of a square is 264 cm, find its side?

- (a) 42
- (b) 62
- (c) 53
- (d) 66

Ans.(d)

Q4. In a school 56% students are boys and total number of girls are 462. Find the number of boys in that school?

- (a) 488
- (b) 489
- (c) 588
- (d) 589

Ans.(c)

Q5. Product of two numbers is 4272, and LCM is 12 then find its HCF?

- (a) 358
- (b) 357
- (c) 356
- (d) 359

Ans.(c)

Q6. Find total surface area in sq. cm of a brick of dimensions 12cm × 6cm × 10cm ?

- (a) 504 cm²
- (b) 512 cm²
- (c) 448 cm²
- (d) 552 cm²

Ans.(a)

Q7. The average of three numbers is 12, of which the largest number is 16. If the smallest number is half of the largest then the third number is.

- (a) 14
- (b) 10
- (c) 12
- (d) 15

Ans.(c)

Q8. By selling a watch for Rs. 380, Atul loses 5%. The cost price of watch is.

- (a) Rs. 372
- (b) Rs. 400
- (c) Rs. 396
- (d) Rs. 420

Ans.(b)

Q9. When a number is divided by 56, the remainder obtained is 19. What will be the remainder when the number is divided by 7?

- (a) 5
- (b) 6
- (c) 2
- (d) 3


Ans.(a)

Q10. If two-fifth of one-eighth of a number is 12. Then three-fifth of the number is.

- (a) 144
- (b) 156
- (c) 26
- (d) 512

Ans.(a)

Direction (11-12): The HR department of a company prepared a report. The pie chart from this report shows number of employees in all the departments that the company has. Study the diagram and answer the following questions.



Q11. The most number of employees belong to which department?

- (a) E
- (b) F
- (c) G
- (d) A

Ans.(a)

Q12. What is the total number of employees of the company?

- (a) 400
- (b) 600
- (c) 480
- (d) 540

Ans.(d)