



GOVT. OF NCT OF DELHI
Delhi Subordinate Services Selection Board
FC-18, Institutional Area, Karkardooma, Delhi – 110092.
www.dsssb.delhigovt.nic.in

Participant ID	
Participant Name	
Test Center Name	iON Digital Zone iDZ 1 GT Karnal Road
Test Date	24/06/2023
Test Time	8:30 AM - 10:30 AM
Subject	Assistant Teacher (Nursery)

Section : General intelligence and Reasoning Ability

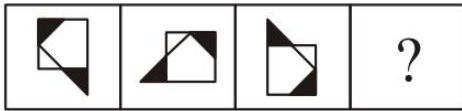
Q.1 If 'TERMINATES' is coded as 'JNSFUTFUBO' and 'TOWERS' is coded as 'XPUTSF', then how will 'MOVEMENT' be coded in the same code?

- Ans**
- 1. BNDSUOFN
 - 2. FWPNUOFN
 - 3. UFNBNFOP
 - 4. FUBNUONF

Question ID : 630680255826
Option 1 ID : 630680993258
Option 2 ID : 630680993257
Option 3 ID : 630680993256
Option 4 ID : 630680993255

Sandeep

Q.2 Select the figure from among the given options that can replace the question mark (?) in the following series.




Ans

✗ 1.



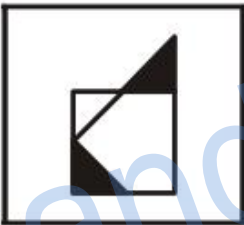
✓ 2.



✗ 3.



✗ 4.



Question ID : 630680255833

Option 1 ID : 630680993285

Option 2 ID : 630680993284

Option 3 ID : 630680993283

Option 4 ID : 630680993286

Q.3 Which two numbers should be interchanged to make the following equation correct?

$$20 + 21 \times 78 \div 13 - 50 = 156$$

Ans ✗ 1. 13 and 21

✗ 2. 21 and 50

✓ 3. 50 and 20

✗ 4. 21 and 20

Question ID : 630680255840

Option 1 ID : 630680993313

Option 2 ID : 630680993314

Option 3 ID : 630680993312

Option 4 ID : 630680993311

Q.4 Select the combination of letters that when sequentially placed in the blanks of the given series will complete the series.

f _ hfg _ _ g _ fghf _ h

- Ans**
- 1. gfggh
 - 2. ggffh
 - 3. ghfhg
 - 4. fggfg

Question ID : 630680255824
Option 1 ID : 630680993250
Option 2 ID : 630680993248
Option 3 ID : 630680993247
Option 4 ID : 630680993249

Q.5 In a row of 18 girls, when Natasha was shifted by two places towards the left, she became 9th from the left end. What was her earlier position from the right end of the row?

- Ans**
- 1. 10th
 - 2. 8th
 - 3. 7th
 - 4. 9th

Question ID : 630680255821
Option 1 ID : 630680993238
Option 2 ID : 630680993236
Option 3 ID : 630680993235
Option 4 ID : 630680993237

Q.6 Four word-pairs have been given, out of which three are alike in some manner and one is different. Select the one that is different.

- Ans**
- 1. Long : High
 - 2. All : None
 - 3. Broad : Narrow
 - 4. Pointed : Blunt

Question ID : 630680255830
Option 1 ID : 630680993272
Option 2 ID : 630680993271
Option 3 ID : 630680993273
Option 4 ID : 630680993274

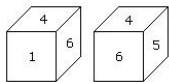
Q.7 Find the approximate value of the given expression.

$$(22.89 + 17.21) \div 1.988 \times 3.991 - 41.999 + 644.197 = ?$$

- Ans
- 1. 798
 - 2. 682
 - 3. 745
 - 4. 542

Question ID : 630680255839
Option 1 ID : 630680993307
Option 2 ID : 630680993309
Option 3 ID : 630680993310
Option 4 ID : 630680993308

Q.8 Two positions of the same dice are shown below. When number '1' is on the top, what number will be at the bottom?



- Ans
- 1. 5
 - 2. 2
 - 3. 6
 - 4. 3

Question ID : 630680255834
Option 1 ID : 630680993289
Option 2 ID : 630680993288
Option 3 ID : 630680993290
Option 4 ID : 630680993287

Q.9 Four letter-clusters have been given, out of which three are alike in some manner and one is different. Select the one that is different.

- Ans
- 1. PRT
 - 2. XVT
 - 3. CEG
 - 4. SUW

Question ID : 630680255831
Option 1 ID : 630680993278
Option 2 ID : 630680993277
Option 3 ID : 630680993275
Option 4 ID : 630680993276

Q.10 Select the number from among the given options that can replace the question mark (?) in the following series.

2, 8, 24, 60, 126, ?

- Ans
- 1. 236
 - 2. 240
 - 3. 228
 - 4. 232

Question ID : 630680255836

Option 1 ID : 630680993296

Option 2 ID : 630680993297

Option 3 ID : 630680993298

Option 4 ID : 630680993295

Q.11 Read the given statements and conclusions carefully. Assuming that the information given in the statements is true, even if it appears to be at variance with commonly known facts, decide which of the given conclusions logically follow(s) from the statements.

Statements:

All pencils are books.

All brushes are books.

Conclusions:

I. Some pencils are brushes.

II. Some books are brushes.

- Ans
- 1. Neither conclusion I nor II follows
 - 2. Both conclusions I and II follow
 - 3. Only conclusion I follows
 - 4. Only conclusion II follows

Question ID : 630680255822

Option 1 ID : 630680993242

Option 2 ID : 630680993241

Option 3 ID : 630680993239

Option 4 ID : 630680993240

Q.12 'X × Y' means 'X is the son of Y',

'X + Y' means 'X is the daughter of Y',

'X ÷ Y' means 'X is the wife of Y', and

'X - Y' means 'X is the father of Y',

If 'S ÷ T × V - W + Y', then which of the following relations is true?

- Ans
- 1. Y is the daughter of V.
 - 2. S is the daughter-in-law of Y.
 - 3. T is the brother of Y.
 - 4. S is the daughter-in-law of W.

Question ID : 630680255827

Option 1 ID : 630680993262

Option 2 ID : 630680993261

Option 3 ID : 630680993259

Option 4 ID : 630680993260

Q.13 Z is the brother of Y, who is the son of W. W is married to S. S's brother X is the only son of C. Q is the paternal grandmother of Y and married to P. B is the father-in-law of W.

How is P related to S?

- Ans**
- 1. Son-in-law
 - 2. Daughter-in-law
 - 3. Father-in-law
 - 4. Mother-in-law

Question ID : 630680255828

Option 1 ID : 630680993264

Option 2 ID : 630680993263

Option 3 ID : 630680993265

Option 4 ID : 630680993266

Q.14 Select the option that closely resembles the water image of the given figure (X).



(X)

Ans

- 1.
- 2.
- 3.
- 4.

Question ID : 630680255835

Option 1 ID : 630680993294

Option 2 ID : 630680993291

Option 3 ID : 630680993292

Option 4 ID : 630680993293

Q.15 Answer the given question based on the following series.

(Left) F J M P O W R N B E Y C K A V L D G X U H Q I S Z T (Right)

Which letter is eleventh to the right of the letter that is exactly the middle letter between F and D?

- Ans**
- 1. U
 - 2. X
 - 3. Q
 - 4. H

Question ID : 630680255825

Option 1 ID : 630680993251

Option 2 ID : 630680993252

Option 3 ID : 630680993254

Option 4 ID : 630680993253

Q.16 Four number-pairs have been given, out of which three are alike in some manner and one is different. Select the one that is different.

- Ans**
- 1. 30-14
 - 2. 74-38
 - 3. 54-26
 - 4. 86-42

Question ID : 630680255838

Option 1 ID : 630680993303

Option 2 ID : 630680993306

Option 3 ID : 630680993305

Option 4 ID : 630680993304

Q.17 Select the option that is related to the third letter-cluster in the same way as the second letter-cluster is related to the first letter-cluster.

BSTN : ATSO :: MSUB : ?

- Ans**
- 1. LTTC
 - 2. LTTA
 - 3. LRRC
 - 4. NTVC

Question ID : 630680255829

Option 1 ID : 630680993270

Option 2 ID : 630680993268

Option 3 ID : 630680993267

Option 4 ID : 630680993269

Q.18 Select the number from among the given options that can replace the question mark (?) in the following series.

2, 5, 11, 20, 32, ?, 65

- Ans
- 1. 45
 - 2. 48
 - 3. 47
 - 4. 46

Question ID : 630680255837
Option 1 ID : 630680993299
Option 2 ID : 630680993302
Option 3 ID : 630680993301
Option 4 ID : 630680993300

Q.19 Four letter-cluster pairs have been given, out of which three are alike in some manner and one is different. Select the one that is different.

- Ans
- 1. MJH-NQS
 - 2. FOP-ULK
 - 3. JAP-QZK
 - 4. KPL-MKO

Question ID : 630680255832
Option 1 ID : 630680993281
Option 2 ID : 630680993280
Option 3 ID : 630680993279
Option 4 ID : 630680993282

Q.20 Among five friends, Mohit is taller than Sohan but shorter than Rahul. Rahul is taller than Harish but shorter than Amrit. Who among them is the tallest?

- Ans
- 1. Amrit
 - 2. Mohit
 - 3. Rahul
 - 4. Harish

Question ID : 630680255823
Option 1 ID : 630680993244
Option 2 ID : 630680993245
Option 3 ID : 630680993243
Option 4 ID : 630680993246

Q.1 Registration of Births & Deaths Act was enacted in which of the following years?

Ans 1. 1971

2. 1969

3. 1960

4. 1965

Question ID : 630680255855

Option 1 ID : 630680993374

Option 2 ID : 630680993373

Option 3 ID : 630680993371

Option 4 ID : 630680993372

Q.2 In November 2022, for which of the following banks did the Government of India extend the deadline for sale bid submission till 7 January 2023?

Ans 1. UCO Bank

2. IDBI Bank

3. Indian Overseas Bank

4. Bank of Maharashtra

Question ID : 630680255852

Option 1 ID : 630680993362

Option 2 ID : 630680993359

Option 3 ID : 630680993361

Option 4 ID : 630680993360

Q.3 The Masroor Temples, also referred to as Masroor Temples or Rock-cut Temples, are located in which of the following states of India?

Ans 1. Uttar Pradesh

2. Himachal Pradesh

3. Rajasthan

4. Madya Pradesh

Question ID : 630680255849

Option 1 ID : 630680993350

Option 2 ID : 630680993348

Option 3 ID : 630680993349

Option 4 ID : 630680993347

Q.4 In December 2022, which of the following cyclones hit Tamil Nadu?

Ans 1. Medrack

2. Phantom

3. Amphan

4. Mandous

Question ID : 630680255853

Option 1 ID : 630680993364

Option 2 ID : 630680993365

Option 3 ID : 630680993366

Option 4 ID : 630680993363

Q.5 In India, which of the following awards are presented to brilliant and upcoming young researchers with the aim of discovering and promoting young talent in scientific research?

- Ans
- 1. Cipla Pharma Science Scholar Awards
 - 2. Sun Pharma Science Scholar Awards
 - 3. Cadila Pharma Science Scholar Awards
 - 4. Pfizer Pharma Science Scholar Awards

Question ID : 630680255842
Option 1 ID : 630680993319
Option 2 ID : 630680993321
Option 3 ID : 630680993320
Option 4 ID : 630680993322

Q.6 One molecule of citric acid contains how many hydrogen atoms?

- Ans
- 1. Eight
 - 2. Two
 - 3. Six
 - 4. Four

Question ID : 630680255857
Option 1 ID : 630680993382
Option 2 ID : 630680993379
Option 3 ID : 630680993381
Option 4 ID : 630680993380

Q.7 Elelakkari dance is mainly performed in which of the following states?

- Ans
- 1. Chhattisgarh
 - 2. Kerala
 - 3. Odisha
 - 4. Manipur

Question ID : 630680255850
Option 1 ID : 630680993352
Option 2 ID : 630680993351
Option 3 ID : 630680993354
Option 4 ID : 630680993353

Q.8 In December 2022, Ishan Kishan became the _____ Indian to score a double century in one-day international cricket.

- Ans
- 1. third
 - 2. fourth
 - 3. fifth
 - 4. second

Question ID : 630680255844
Option 1 ID : 630680993328
Option 2 ID : 630680993329
Option 3 ID : 630680993330
Option 4 ID : 630680993327

Q.9 As per Census 2011, what was the child sex ratio in India?

- Ans
- 1. 922
 - 2. 921
 - 3. 920
 - 4. 919

Question ID : 630680255854
Option 1 ID : 630680993370
Option 2 ID : 630680993369
Option 3 ID : 630680993368
Option 4 ID : 630680993367

Q.10 In December 2022, India tested which of the following nuclear-capable ballistic missiles?

- Ans
- 1. Agni III
 - 2. Agni II
 - 3. Agni V
 - 4. Agni IV

Question ID : 630680255841
Option 1 ID : 630680993316
Option 2 ID : 630680993315
Option 3 ID : 630680993318
Option 4 ID : 630680993317

Q.11 For which sport did Nikhat Zareen receive the Arjuna Award for outstanding performance in Sports and Games 2022?

- Ans
- 1. Athletics
 - 2. Boxing
 - 3. Judo
 - 4. Badminton

Question ID : 630680255845
Option 1 ID : 630680993333
Option 2 ID : 630680993331
Option 3 ID : 630680993334
Option 4 ID : 630680993332

Q.12 The folk vocal quartet 'Tetseo Sisters' is from which of the following states of India?

- Ans
- 1. Meghalaya
 - 2. Manipur
 - 3. Nagaland
 - 4. Sikkim

Question ID : 630680255851
Option 1 ID : 630680993358
Option 2 ID : 630680993355
Option 3 ID : 630680993356
Option 4 ID : 630680993357

Q.13 How many seats did Aam Aadmi Party win in the Gujarat assembly election 2022?

- Ans 1. 11
 2. 6
 3. 9
 4. 5

Question ID : 630680255860
Option 1 ID : 630680993391
Option 2 ID : 630680993393
Option 3 ID : 630680993392
Option 4 ID : 630680993394

Q.14 The Simla Agreement on Bilateral Relations between India and Pakistan was signed by Prime Minister Indira Gandhi and President of Pakistan ZA Bhutto in which of the following years?

- Ans 1. 1973
 2. 1972
 3. 1975
 4. 1974

Question ID : 630680255847
Option 1 ID : 630680993340
Option 2 ID : 630680993339
Option 3 ID : 630680993342
Option 4 ID : 630680993341

Q.15 Kakrapar Atomic Power Station is located in which of the following states of India?

- Ans 1. West Bengal
 2. Rajasthan
 3. Maharashtra
 4. Gujarat

Question ID : 630680255856
Option 1 ID : 630680993378
Option 2 ID : 630680993376
Option 3 ID : 630680993375
Option 4 ID : 630680993377

Q.16 In November 2022, which of India's neighbouring countries appointed the new Chief of Army Staff (COAS)?

- Ans 1. Pakistan
 2. Sri Lanka
 3. Afghanistan
 4. Bangladesh

Question ID : 630680255846
Option 1 ID : 630680993335
Option 2 ID : 630680993338
Option 3 ID : 630680993336
Option 4 ID : 630680993337

Q.17 'Nai Manzil', which is a scheme that aims to benefit the minority youth who do not have a formal school leaving certificate is partly funded by _____.

- Ans
- 1. Bank of Singapore
 - 2. World Bank
 - 3. UNICEF
 - 4. Bill & Melinda Gates Foundation

Question ID : 630680255843
Option 1 ID : 630680993325
Option 2 ID : 630680993324
Option 3 ID : 630680993323
Option 4 ID : 630680993326

Q.18 In December 2022, who took oath as Himachal Pradesh CM?

- Ans
- 1. Pratibha Singh
 - 2. Virbhadra Singh
 - 3. Sukhvinder Singh Sukhu
 - 4. Sushil Barongpa

Question ID : 630680255859
Option 1 ID : 630680993390
Option 2 ID : 630680993388
Option 3 ID : 630680993389
Option 4 ID : 630680993387

Q.19 In 1826, who visited a village named Harappa in Western Punjab (now in Pakistan) and discovered high walls and towers of a very old settlement of Harappa Civilization?

- Ans
- 1. Augustus Pitt Rivers
 - 2. Charles Masson
 - 3. Howard Carter
 - 4. John Evans

Question ID : 630680255848
Option 1 ID : 630680993346
Option 2 ID : 630680993344
Option 3 ID : 630680993343
Option 4 ID : 630680993345

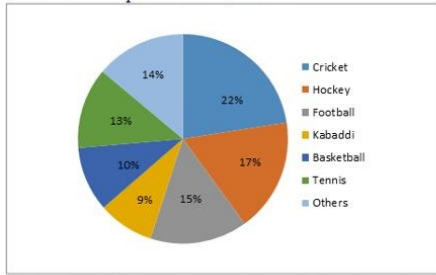
Q.20 Equality of opportunity in matters of public employment comes under which of the following Fundamental Rights?

- Ans
- 1. Right to Freedom
 - 2. Right against Exploitation
 - 3. Right to Equality
 - 4. Cultural and Educational Rights

Question ID : 630680255858
Option 1 ID : 630680993384
Option 2 ID : 630680993385
Option 3 ID : 630680993383
Option 4 ID : 630680993386

Section : Arithmetical and Numerical Ability

Q.1 The following pie chart shows the expenditure of a country on various sports during a particular year. Study the graph and answer the question that follows.



Approximately how much percentage less is spent on Kabaddi than on Cricket?

- Ans**
- 1. 67%
 - 2. 79%
 - 3. 71%
 - 4. 59%

Question ID : 630680255878
Option 1 ID : 630680993464
Option 2 ID : 630680993466
Option 3 ID : 630680993465
Option 4 ID : 630680993463

Q.2 The difference between the compound interest, compounded yearly, on a certain sum for 1 year at 16% p.a. and the compound interest on the same sum at the same rate and same period, compounded half-yearly, is ₹136. The sum (in ₹) is:

- Ans**
- 1. 21,200
 - 2. 21,350
 - 3. 21,150
 - 4. 21,250

Question ID : 630680255871
Option 1 ID : 630680993436
Option 2 ID : 630680993438
Option 3 ID : 630680993435
Option 4 ID : 630680993437

Q.3 The average age of a sports team of 15 members is 23.4 years. A new member joins the team and the average age now becomes 23 years. The age (in years) of the new member is:

- Ans**
- 1. 17
 - 2. 15
 - 3. 16
 - 4. 18

Question ID : 630680255863
Option 1 ID : 630680993405
Option 2 ID : 630680993403
Option 3 ID : 630680993404
Option 4 ID : 630680993406

Q.4 If an internet bill is paid before the due date, one gets a reduction of 8% on the amount of the bill. By paying the bill before due date, a person got a reduction of ₹126. The amount of his internet bill (in ₹) was:

- Ans**
- 1. 1,625
 - 2. 1,500
 - 3. 1,680
 - 4. 1,575

Question ID : 630680255867

Option 1 ID : 630680993421

Option 2 ID : 630680993419

Option 3 ID : 630680993422

Option 4 ID : 630680993420

Q.5 Ravi, Ramesh and Suresh can work together for ₹1,680. If Ravi and Ramesh together are to do $\frac{9}{16}$ of the work, then the share (in ₹) of the Suresh should be:

- Ans**
- 1. 825
 - 2. 945
 - 3. 975
 - 4. 735

Question ID : 630680255874

Option 1 ID : 630680993448

Option 2 ID : 630680993449

Option 3 ID : 630680993450

Option 4 ID : 630680993447

Q.6 If 25% of a number is 96 less than 45% of that number, then the number is:

- Ans**
- 1. 480
 - 2. 450
 - 3. 320
 - 4. 400

Question ID : 630680255864

Option 1 ID : 630680993410

Option 2 ID : 630680993409

Option 3 ID : 630680993407

Option 4 ID : 630680993408

Q.7 A man covers a certain distance at a certain speed. Had he moved 6 km/h faster, he would have taken 4 hours less. If he had moved 8 km/h slower, he would have taken 10 hours more. How much time (in hours) will he take to cover the same distance with his usual speed?

- Ans**
- 1. 20
 - 2. 12
 - 3. 18
 - 4. 15

Question ID : 630680255873

Option 1 ID : 630680993446

Option 2 ID : 630680993443

Option 3 ID : 630680993445

Option 4 ID : 630680993444

Q.8 The numbers of boys and girls in a college are in the ratio of 5 : 3. If 24% of the boys and 32% of the girls were not placed in campus placements, then the percentage of students who got jobs in campus placements is:

- Ans**
- 1. 68%
 - 2. 73%
 - 3. 82%
 - 4. 78%

Question ID : 630680255865

Option 1 ID : 630680993411

Option 2 ID : 630680993412

Option 3 ID : 630680993414

Option 4 ID : 630680993413

Q.9 The LCM and HCF of two numbers are 234 and 39, respectively. If one number lies between 60 and 110, then that number is:

- Ans**
- 1. 84
 - 2. 78
 - 3. 64
 - 4. 96

Question ID : 630680255862

Option 1 ID : 630680993401

Option 2 ID : 630680993400

Option 3 ID : 630680993399

Option 4 ID : 630680993402

Q.10 In how much time will the simple interest on a certain sum be 1.25 times the principal at 12.5% per annum?

- Ans
- 1. 4 years
 - 2. 10 years
 - 3. 8 years
 - 4. 6 years

Question ID : 630680255870
Option 1 ID : 630680993431
Option 2 ID : 630680993434
Option 3 ID : 630680993433
Option 4 ID : 630680993432

Q.11 Study the following table and answer the question.

Marks of five students (A, B, C, D and E) in four different subjects in an examination

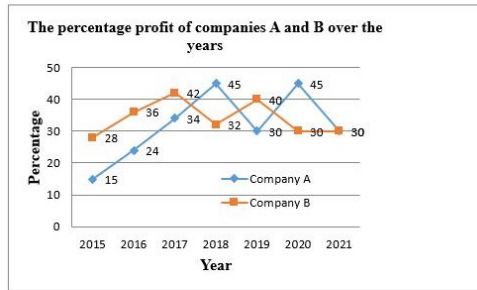
Subject	Maths	Physics	Chemistry	Computers
Max. marks\ Students	100	70	70	70
A	90	65	58	65
B	65	54	68	55
C	84	39	45	49
D	45	48	35	38
E	55	35	62	40

What is the overall percentage of C?

- Ans
- 1. 68%
 - 2. 70%
 - 3. 62%
 - 4. 65%

Question ID : 630680255876
Option 1 ID : 630680993457
Option 2 ID : 630680993458
Option 3 ID : 630680993455
Option 4 ID : 630680993456

Q.12 The following line graph shows the percentage profit earned by two companies A and B over the years. Study the graph and answer the question that follows.



$$\text{Profit percentage} = \frac{\text{Income} - \text{Expenditure}}{\text{Expenditure}} \times 100$$

If the income of the two companies were equal in 2019, then what was the ratio of the expenditure of Company A to that of company B in 2019?

- Ans**
- 1. 22 : 15
 - 2. 15 : 22
 - 3. 14 : 13
 - 4. 13 : 14

Question ID : 630680255877
 Option 1 ID : 630680993462
 Option 2 ID : 630680993461
 Option 3 ID : 630680993460
 Option 4 ID : 630680993459

Q.13 The outer surface area of a 5-cm-thick hollow sphere is $484\pi \text{ cm}^2$. What is the inner surface area (in cm^2) of this hollow sphere?

- Ans**
- 1. 196π
 - 2. 121π
 - 3. 144π
 - 4. 169π

Question ID : 630680255880
 Option 1 ID : 630680993474
 Option 2 ID : 630680993471
 Option 3 ID : 630680993472
 Option 4 ID : 630680993473

Q.14 Simplify the following.

$$\frac{5\frac{1}{3} \div 2\frac{1}{4} \times \frac{9}{4} \div \frac{1}{4} \text{ of } 7\frac{1}{2}}{\left(\frac{8}{3} \text{ of } 1\frac{1}{15}\right) \div 5}$$

- Ans
- 1. 3
 - 2. 5
 - 3. 15
 - 4. 9

Question ID : 630680255861
Option 1 ID : 630680993395
Option 2 ID : 630680993396
Option 3 ID : 630680993398
Option 4 ID : 630680993397

Q.15 In a four-sided field, the length of the longer diagonal is 98 m. The lengths of the perpendiculars from the opposite vertices up on this diagonal are 28 m and 23 m. Find the area of the field (in m²)?

- Ans
- 1. 2499
 - 2. 2519
 - 3. 2449
 - 4. 2469

Question ID : 630680255879
Option 1 ID : 630680993469
Option 2 ID : 630680993470
Option 3 ID : 630680993467
Option 4 ID : 630680993468

Q.16 A sum of ₹2,059 is divided among A, B and C so that A's share is equal to $\frac{3}{5}$ of B's share and C's share is equal to $\frac{5}{9}$ of A's share. The share (in ₹) of B is:

- Ans
- 1. 639
 - 2. 1,065
 - 3. 1,165
 - 4. 355

Question ID : 630680255868
Option 1 ID : 630680993424
Option 2 ID : 630680993425
Option 3 ID : 630680993426
Option 4 ID : 630680993423

Q.17 Suppose p varies as the sum of two quantities of which one varies directly as q and the other inversely as q . If $p = 11$ when $q = 2$ and $p = 25\frac{2}{5}$ when $q = 5$, then which of the following is true?

Ans

1. $p = 5q - \frac{2}{q}$

2. $p = 10q - \frac{2}{q}$

3. $p = 10q + \frac{2}{q}$

4. $p = 5q + \frac{2}{q}$

Question ID : 630680255869

Option 1 ID : 630680993428

Option 2 ID : 630680993430

Option 3 ID : 630680993429

Option 4 ID : 630680993427

Q.18 A television set marked at ₹17,500 is offered at ₹14,000. What is the discount (in %) offered?

Ans

1. 8%

2. 20%

3. 15%

4. 12%

Question ID : 630680255866

Option 1 ID : 630680993415

Option 2 ID : 630680993418

Option 3 ID : 630680993417

Option 4 ID : 630680993416

Q.19 When a man rides an electric bike at the speed of 12 km/h, he reaches his office at 10 a.m., and when he rides at the speed of 18 km/h, he reaches his office at 9 a.m. At what speed (in km/h) should he ride so that he reaches his office at 9.30 a.m.?

Ans

1. 15.2

2. 14.8

3. 14.0

4. 14.4

Question ID : 630680255872

Option 1 ID : 630680993442

Option 2 ID : 630680993441

Option 3 ID : 630680993439

Option 4 ID : 630680993440

Q.20 2 men and 3 women can do a piece of work in 30 days, whereas 5 men and 4 women can do it in 15 days. To complete the same work in 14 days, how many more women should work with 7 women?

- Ans 1. 8
 2. 6
 3. 10
 4. 5

Question ID : 630680255875
Option 1 ID : 630680993453
Option 2 ID : 630680993452
Option 3 ID : 630680993454
Option 4 ID : 630680993451

Section : Test of English Language and Comprehension

Q.1 Select the most appropriate option that can substitute the underlined segment in the given sentence. If there is no need to substitute it, select 'No substitution required'.

Though her favourite colour was red, since she chose the blue dress to match her eyes.

- Ans 1. she chose
 2. No substitution required
 3. and she chose
 4. therefore she chose

Question ID : 630680255888
Option 1 ID : 630680993504
Option 2 ID : 630680993506
Option 3 ID : 630680993503
Option 4 ID : 630680993505

Q.2 The following sentence has been split into four segments. Identify the segment that contains a grammatical error.

Samiksha, together / with her grandmother / and her parents, / are going to the beach.

- Ans 1. are going to the beach
 2. with her grandmother
 3. and her parents
 4. Samiksha, together

Question ID : 630680255894
Option 1 ID : 630680993530
Option 2 ID : 630680993528
Option 3 ID : 630680993529
Option 4 ID : 630680993527

Q.3 Select the option that contains no spelling error.

- Ans 1. She found him wearing a thick mackintosh that reached almost to his ankles.
 2. She found him wearing a thick makintosh that reached almost to his ankles.
 3. She found him wearing a thick mackentosh that reached almost to his ankles.
 4. She found him wearing a thick meckentosh that reached almost to his ankles.

Question ID : 630680255892
Option 1 ID : 630680993522
Option 2 ID : 630680993519
Option 3 ID : 630680993520
Option 4 ID : 630680993521

Q.4 Select the most appropriate ANTONYM of the underlined word to fill in the blank.

Though Ram and Shyam are twins, Ram is affable while Shyam is _____.

- Ans 1. urbane
 2. collected
 3. touchy
 4. pacific

Question ID : 630680255890
Option 1 ID : 630680993513
Option 2 ID : 630680993512
Option 3 ID : 630680993511
Option 4 ID : 630680993514

Q.5 Select the most appropriate option that can substitute the underlined segment in the given sentence. If there is no need to substitute it, select 'No substitution required'.

The employees of Taj Skyline Ahmedabad are required to observe total comply of rules.

- Ans 1. total complying of rules
 2. No substitution required
 3. total complies of rules
 4. total compliance of rules

Question ID : 630680255887
Option 1 ID : 630680993500
Option 2 ID : 630680993502
Option 3 ID : 630680993501
Option 4 ID : 630680993499

Q.6 Select the grammatically correct sentence.

- Ans 1. The strawberry shortcake tastes deliciously.
 2. The strawberry shortcake tastes delicious.
 3. The strawberry shortcake tasted deliciously.
 4. The strawberry shortcake tasting delicious.

Question ID : 630680255895
Option 1 ID : 630680993532
Option 2 ID : 630680993533
Option 3 ID : 630680993534
Option 4 ID : 630680993531

Q.7 Select the most appropriate option to fill in the blank with the correct collocation.

Simrin is _____ many talents.

- Ans
- 1. blessed with
 - 2. blessed within
 - 3. blessed from
 - 4. blessed in

Question ID : 630680255889
Option 1 ID : 630680993508
Option 2 ID : 630680993507
Option 3 ID : 630680993509
Option 4 ID : 630680993510

Q.8 Select the one-word substitute for the underlined group of words that can fill in the blank.

What do Leonardo DiCaprio, Bradley Cooper and Mila Kunis all have in common? They're famous _____, because they can speak several languages.

- Ans
- 1. polyglots
 - 2. agnostic
 - 3. linguistics
 - 4. bilinguists

Question ID : 630680255885
Option 1 ID : 630680993491
Option 2 ID : 630680993494
Option 3 ID : 630680993492
Option 4 ID : 630680993493

Q.9 Select the most appropriate option to fill in the blanks.

A few years back, I decided to do something that was totally out of my _____ zone. When I took the plunge, I knew that this was going to be very challenging, but it did not _____ me as my life mantra was "Get Uncomfortable, Achieve the Incredible". The first few months into doing that, I realised that it was _____ than what I imagined it to be. Yet deep inside, instead of panicking, I felt happy thinking about the _____ growth I may have out of this.

- Ans
- 1. comforted, cheer, tougher, trivial
 - 2. gloomy, calm, flexible, insignificant
 - 3. comfort, scare, tougher, massive
 - 4. gloomy, calm, easier, unimposing

Question ID : 630680255884
Option 1 ID : 630680993487
Option 2 ID : 630680993489
Option 3 ID : 630680993490
Option 4 ID : 630680993488

Q.10 Select the most appropriate option to fill in the blanks.

James Cook was one of the famous explorers _____ all times. As a young boy in England, Cook fell in love with the sea. _____ his childhood, his ambition was to be a sailor. Cook worked hard and became a superb seaman. As a sailor, he was not satisfied with sailing only to familiar cities. _____ he really wanted to do was to _____ strange unknown lands.

- Ans
- 1. in, Since, What, exploring
 - 2. of, Since, What, explore
 - 3. from, Since, When, explored
 - 4. off, Since, Where, explores

Question ID : 630680255883
Option 1 ID : 630680993484
Option 2 ID : 630680993485
Option 3 ID : 630680993486
Option 4 ID : 630680993483

Q.11 Sentences of a paragraph are given below in jumbled order. Arrange the sentences in the correct order to form a meaningful and coherent paragraph.

- 1) Despite her many accomplishments and successes as a businesswoman, she felt a sense of weariness and exhaustion wash over her.
- 2) As the sun began to dip below the horizon, Elizabeth stood at the edge of her balcony and surveyed the sprawling city below.
- 3) But the constant demands of the corporate world had begun to weigh on her, and she found herself longing for a moment of respite.
- 4) She worked tirelessly for weeks, her sharp mind and quick tongue driving her to ever-greater heights of success.

- Ans
- 1. 2-1-4-3
 - 2. 2-4-1-3
 - 3. 1-2-3-4
 - 4. 4-1-3-2

Question ID : 630680255882
Option 1 ID : 630680993479
Option 2 ID : 630680993482
Option 3 ID : 630680993480
Option 4 ID : 630680993481

Q.12 Select the option that contains no spelling error.

- Ans
- 1. The conversation meandered on for hours after the meeting was over.
 - 2. The conversation mieandered on for hours after the meeting was over.
 - 3. The conversation meendered on for hours after the meeting was over.
 - 4. The conversation meindered on for hours after the meeting was over.

Question ID : 630680255891
Option 1 ID : 630680993517
Option 2 ID : 630680993516
Option 3 ID : 630680993515
Option 4 ID : 630680993518

Q.13 Sentences of a paragraph are given below in jumbled order. Arrange the sentences in the correct order to form a meaningful and coherent paragraph.

- 1) The group reached Independence Missouri, which was considered the official start of the Oregon Trail, in the middle of May.
- 2) In April 1846, a group of eight families left Springfield Illinois to join the many heading west in search of a better life.
- 3) Among those joining him was the eponymous George Donner, who would become wagon captain, along with his wife and five daughters.
- 4) This caravan was being organised by a businessman and farmer named James Reed, who would travel with his wife and four children.

Ans 1. 1-2-3-4

2. 2-4-3-1

3. 2-4-1-3

4. 2-3-4-1

Question ID : 630680255881

Option 1 ID : 630680993475

Option 2 ID : 630680993476

Option 3 ID : 630680993478

Option 4 ID : 630680993477

Q.14 Select the most appropriate meaning of the given idiom.

Drive home

Ans 1. To be a chauffeur

2. To realise one's mistake

3. To make clearly understood

4. To get back to the starting point

Question ID : 630680255893

Option 1 ID : 630680993526

Option 2 ID : 630680993523

Option 3 ID : 630680993524

Option 4 ID : 630680993525

Q.15 Select the option that can be used as a one-word substitute for the given group of words.

A doctor who treats cancer and provides medical care for a person diagnosed with cancer

Ans 1. Urologist

2. Podiatrist

3. Geriatrics

4. Oncologist

Question ID : 630680255886

Option 1 ID : 630680993498

Option 2 ID : 630680993495

Option 3 ID : 630680993497

Option 4 ID : 630680993496

Comprehension:

Read the given passage and answer the questions that follow.

Man-made hazards are events that are caused by humans and occur in or close to human settlements for the sake of development, tourism, transportation, etc. The events leading up to a man-made hazard may be the result of deliberate or negligent human actions, but their impact is devastating. Events such as gas leaks, oil spills, nuclear meltdowns, industrial fires, disposal of industrial wastes and plastics in water body and deforestation have grave consequences.

Oil spills occurs due to leakage in oil tanker into the ocean while exporting or importing. Oil spills affects marine birds and mammals as well as fish and shellfish drastically. Oil destroys the insulating ability of fur-bearing mammals, such as sea otters, and the water repellence of a bird's feathers, thus exposing these creatures to the harsh elements.

When seals and otters try to clean oil matted on their coats, they ingest it. They also lose heat because spilled oil ruins their natural insulation, so they can die of hypothermia. Marine plastic pollution has affected over 267 species worldwide as a result of ingestion, starvation, suffocation, infection, drowning, and entanglement.

It is estimated that about 3-7 billion trees are cut annually. Some of the most affected regions of the world are The Amazon Rainforest, Sumatran jungles, British Columbia. Many wildlife has been marked as critically endangered like the Black Rhino, Amur Leopard, Orangutans are endangered like the tigers, vulnerable by the record of the Red Data Book. The rate at which the human activity is interfering with the wildlife and ecosystem, they are soon going to be get extinct soon.

Oil spills affect mangroves adversely by blocking the pneumatophores which help them in respiration and results into their death which serves in deforestation and loosening of soil.

Radiations, air pollution, noise pollution, global warming, heavy metal poisoning are also threatening wildlife to great extent. Radiation from nuclear waste and leak in nuclear reactors causes DNA damage and altering of DNA sequences. Noise pollution terrifies animals and makes them homeless. Global warming affects the climate due to which migration of birds alters and sometimes proves to be life threatening to them. So, before it's too late measures should be taken to prevent wildlife exploitation from man-made hazards.

SubQuestion No : 16

Q.16 Identify the most suitable title for the given passage.

- Ans
- 1. Man-made Hazards
 - 2. Interaction between Humans and Wildlife
 - 3. Effect of Manmade Hazards on Wildlife and Aquatic Life
 - 4. Exploitation of Marine Life

Question ID : 630680255897

Option 1 ID : 630680993535

Option 2 ID : 630680993537

Option 3 ID : 630680993538

Option 4 ID : 630680993536

Comprehension:

Read the given passage and answer the questions that follow.

Man-made hazards are events that are caused by humans and occur in or close to human settlements for the sake of development, tourism, transportation, etc. The events leading up to a man-made hazard may be the result of deliberate or negligent human actions, but their impact is devastating. Events such as gas leaks, oil spills, nuclear meltdowns, industrial fires, disposal of industrial wastes and plastics in water body and deforestation have grave consequences.

Oil spills occurs due to leakage in oil tanker into the ocean while exporting or importing. Oil spills affects marine birds and mammals as well as fish and shellfish drastically. Oil destroys the insulating ability of fur-bearing mammals, such as sea otters, and the water repellence of a bird's feathers, thus exposing these creatures to the harsh elements.

When seals and otters try to clean oil matted on their coats, they ingest it. They also lose heat because spilled oil ruins their natural insulation, so they can die of hypothermia. Marine plastic pollution has affected over 267 species worldwide as a result of ingestion, starvation, suffocation, infection, drowning, and entanglement.

It is estimated that about 3-7 billion trees are cut annually. Some of the most affected regions of the world are The Amazon Rainforest, Sumatran jungles, British Columbia. Many wildlife has been marked as critically endangered like the Black Rhino, Amur Leopard, Orangutans are endangered like the tigers, vulnerable by the record of the Red Data Book. The rate at which the human activity is interfering with the wildlife and ecosystem, they are soon going to be get extinct soon.

Oil spills affect mangroves adversely by blocking the pneumatophores which help them in respiration and results into their death which serves in deforestation and loosening of soil.

Radiations, air pollution, noise pollution, global warming, heavy metal poisoning are also threatening wildlife to great extent. Radiation from nuclear waste and leak in nuclear reactors causes DNA damage and altering of DNA sequences. Noise pollution terrifies animals and makes them homeless. Global warming affects the climate due to which migration of birds alters and sometimes proves to be life threatening to them. So, before it's too late measures should be taken to prevent wildlife exploitation from man-made hazards.

SubQuestion No : 17

Q.17 Identify the structure of the passage.

- Ans
- 1. Sequence
 - 2. Problem-solution
 - 3. Compare-contrast
 - 4. Cause-effect

Question ID : 630680255898

Option 1 ID : 630680993542

Option 2 ID : 630680993540

Option 3 ID : 630680993541

Option 4 ID : 630680993539

Comprehension:

Read the given passage and answer the questions that follow.

Man-made hazards are events that are caused by humans and occur in or close to human settlements for the sake of development, tourism, transportation, etc. The events leading up to a man-made hazard may be the result of deliberate or negligent human actions, but their impact is devastating. Events such as gas leaks, oil spills, nuclear meltdowns, industrial fires, disposal of industrial wastes and plastics in water body and deforestation have grave consequences.

Oil spills occurs due to leakage in oil tanker into the ocean while exporting or importing. Oil spills affects marine birds and mammals as well as fish and shellfish drastically. Oil destroys the insulating ability of fur-bearing mammals, such as sea otters, and the water repellence of a bird's feathers, thus exposing these creatures to the harsh elements.

When seals and otters try to clean oil matted on their coats, they ingest it. They also lose heat because spilled oil ruins their natural insulation, so they can die of hypothermia. Marine plastic pollution has affected over 267 species worldwide as a result of ingestion, starvation, suffocation, infection, drowning, and entanglement.

It is estimated that about 3-7 billion trees are cut annually. Some of the most affected regions of the world are The Amazon Rainforest, Sumatran jungles, British Columbia. Many wildlife has been marked as critically endangered like the Black Rhino, Amur Leopard, Orangutans are endangered like the tigers, vulnerable by the record of the Red Data Book. The rate at which the human activity is interfering with the wildlife and ecosystem, they are soon going to be get extinct soon.

Oil spills affect mangroves adversely by blocking the pneumatophores which help them in respiration and results into their death which serves in deforestation and loosening of soil.

Radiations, air pollution, noise pollution, global warming, heavy metal poisoning are also threatening wildlife to great extent. Radiation from nuclear waste and leak in nuclear reactors causes DNA damage and altering of DNA sequences. Noise pollution terrifies animals and makes them homeless. Global warming affects the climate due to which migration of birds alters and sometimes proves to be life threatening to them. So, before it's too late measures should be taken to prevent wildlife exploitation from man-made hazards.

SubQuestion No : 18

Q.18 From the given options identify the most appropriate ANTONYM of the underlined word as used in the passage.

When seals and otters try to clean oil matted on their coats, they ingest it.

- Ans
- 1. Twisted
 - 2. Unknotted
 - 3. Fuzzy
 - 4. Caked

Question ID : 630680255900

Option 1 ID : 630680993548

Option 2 ID : 630680993547

Option 3 ID : 630680993549

Option 4 ID : 630680993550

Comprehension:

Read the given passage and answer the questions that follow.

Man-made hazards are events that are caused by humans and occur in or close to human settlements for the sake of development, tourism, transportation, etc. The events leading up to a man-made hazard may be the result of deliberate or negligent human actions, but their impact is devastating. Events such as gas leaks, oil spills, nuclear meltdowns, industrial fires, disposal of industrial wastes and plastics in water body and deforestation have grave consequences.

Oil spills occurs due to leakage in oil tanker into the ocean while exporting or importing. Oil spills affects marine birds and mammals as well as fish and shellfish drastically. Oil destroys the insulating ability of fur-bearing mammals, such as sea otters, and the water repellence of a bird's feathers, thus exposing these creatures to the harsh elements.

When seals and otters try to clean oil matted on their coats, they ingest it. They also lose heat because spilled oil ruins their natural insulation, so they can die of hypothermia. Marine plastic pollution has affected over 267 species worldwide as a result of ingestion, starvation, suffocation, infection, drowning, and entanglement.

It is estimated that about 3-7 billion trees are cut annually. Some of the most affected regions of the world are The Amazon Rainforest, Sumatran jungles, British Columbia. Many wildlife has been marked as critically endangered like the Black Rhino, Amur Leopard, Orangutans are endangered like the tigers, vulnerable by the record of the Red Data Book. The rate at which the human activity is interfering with the wildlife and ecosystem, they are soon going to be get extinct soon.

Oil spills affect mangroves adversely by blocking the pneumatophores which help them in respiration and results into their death which serves in deforestation and loosening of soil.

Radiations, air pollution, noise pollution, global warming, heavy metal poisoning are also threatening wildlife to great extent. Radiation from nuclear waste and leak in nuclear reactors causes DNA damage and altering of DNA sequences. Noise pollution terrifies animals and makes them homeless. Global warming affects the climate due to which migration of birds alters and sometimes proves to be life threatening to them. So, before it's too late measures should be taken to prevent wildlife exploitation from man-made hazards.

SubQuestion No : 19

Q.19 Identify the tone of the passage.

- Ans**
- 1. Pedestrian
 - 2. Introspective
 - 3. Biased
 - 4. Speculative

Question ID : 630680255899

Option 1 ID : 630680993543

Option 2 ID : 630680993545

Option 3 ID : 630680993544

Option 4 ID : 630680993546

Comprehension:

Read the given passage and answer the questions that follow.

Man-made hazards are events that are caused by humans and occur in or close to human settlements for the sake of development, tourism, transportation, etc. The events leading up to a man-made hazard may be the result of deliberate or negligent human actions, but their impact is devastating. Events such as gas leaks, oil spills, nuclear meltdowns, industrial fires, disposal of industrial wastes and plastics in water body and deforestation have grave consequences.

Oil spills occurs due to leakage in oil tanker into the ocean while exporting or importing. Oil spills affects marine birds and mammals as well as fish and shellfish drastically. Oil destroys the insulating ability of fur-bearing mammals, such as sea otters, and the water repellence of a bird's feathers, thus exposing these creatures to the harsh elements.

When seals and otters try to clean oil matted on their coats, they ingest it. They also lose heat because spilled oil ruins their natural insulation, so they can die of hypothermia. Marine plastic pollution has affected over 267 species worldwide as a result of ingestion, starvation, suffocation, infection, drowning, and entanglement.

It is estimated that about 3-7 billion trees are cut annually. Some of the most affected regions of the world are The Amazon Rainforest, Sumatran jungles, British Columbia. Many wildlife has been marked as critically endangered like the Black Rhino, Amur Leopard, Orangutans are endangered like the tigers, vulnerable by the record of the Red Data Book. The rate at which the human activity is interfering with the wildlife and ecosystem, they are soon going to be get extinct soon.

Oil spills affect mangroves adversely by blocking the pneumatophores which help them in respiration and results into their death which serves in deforestation and loosening of soil.

Radiations, air pollution, noise pollution, global warming, heavy metal poisoning are also threatening wildlife to great extent. Radiation from nuclear waste and leak in nuclear reactors causes DNA damage and altering of DNA sequences. Noise pollution terrifies animals and makes them homeless. Global warming affects the climate due to which migration of birds alters and sometimes proves to be life threatening to them. So, before it's too late measures should be taken to prevent wildlife exploitation from man-made hazards.

SubQuestion No : 20

Q.20 From the given options identify the most appropriate SYNONYM of the underlined word as used in the passage.

Events such as gas leaks and oil spills in water bodies have grave consequences.

- Ans
- 1. Cemetery
 - 2. Jeopardous
 - 3. Unsmiling
 - 4. Insecure

Question ID : 630680255901

Option 1 ID : 630680993554

Option 2 ID : 630680993553

Option 3 ID : 630680993551

Option 4 ID : 630680993552

Q.1 'पृथ्वी का वह भाग जिसके तीन ओर पानी हो' - इस वाक्यांश के लिए उपयुक्त शब्द का चयन करें।

- Ans
- 1. पहाड़
 - 2. भूभाग
 - 3. प्रायद्वीप
 - 4. महाद्वीप

Question ID : 630680255906
Option 1 ID : 630680993572
Option 2 ID : 630680993573
Option 3 ID : 630680993574
Option 4 ID : 630680993571

Q.2 'व्यक्ति की _____ की तुलना में उदारता अधिक व्यावहारिक होती है।'

स्व विवेकानुसार उचित शब्द चुनकर, उपरोक्त वाक्य में रिक्त स्थान की पूर्ति करें।

- Ans
- 1. संकीर्णता
 - 2. संकुलता
 - 3. समानता
 - 4. विकीर्णता

Question ID : 630680255905
Option 1 ID : 630680993567
Option 2 ID : 630680993568
Option 3 ID : 630680993570
Option 4 ID : 630680993569

Q.3 "तो पर वारों उरबसी, सुनु राधिके सुजान।

तू मोहन के उर बसी, ह्वै उरबसी समान।।" - बिहारी की इन पंक्तियों में मुख्यतः कौन सा अलंकार है?

- Ans
- 1. यमक
 - 2. रूपक
 - 3. श्लेष
 - 4. वक्रोक्ति

Question ID : 630680255912
Option 1 ID : 630680993595
Option 2 ID : 630680993596
Option 3 ID : 630680993598
Option 4 ID : 630680993597

Q.4 'मैंने आज _____ खाया है।' निम्न में से देशज शब्द चुनकर उक्त वाक्य को पूर्ण करें।

- Ans
- 1. पपीता
 - 2. कचूमर
 - 3. संतरा
 - 4. अचार

Question ID : 630680255916
Option 1 ID : 630680993611
Option 2 ID : 630680993613
Option 3 ID : 630680993612
Option 4 ID : 630680993614

Q.5 'युधिष्ठिर' शब्द के शुद्ध सन्धि-विच्छेद का चयन कीजिये।

- Ans
- 1. युधिश् + ठिर
 - 2. युधिष् + थिर
 - 3. युधि + स्थिर
 - 4. युध + स्थिर

Question ID : 630680255910
Option 1 ID : 630680993590
Option 2 ID : 630680993589
Option 3 ID : 630680993587
Option 4 ID : 630680993588

Q.6 निम्नलिखित में से 'बापुरा' शब्द के पर्याय का चयन करें।

- Ans
- 1. बाबुल
 - 2. अकिंचन
 - 3. सदाबहार
 - 4. बहुधा

Question ID : 630680255914
Option 1 ID : 630680993606
Option 2 ID : 630680993604
Option 3 ID : 630680993605
Option 4 ID : 630680993603

Q.7 'जिस स्त्री की आँखें मछली के सामान हों' - इस वाक्यांश के लिए उपयुक्त शब्द का चयन करें।

- Ans
- 1. मीनाक्षी
 - 2. मातलि
 - 3. मीनाक्ष
 - 4. मकराक्षी

Question ID : 630680255907
Option 1 ID : 630680993577
Option 2 ID : 630680993576
Option 3 ID : 630680993575
Option 4 ID : 630680993578

Q.8 'अपने पाठकों का _____ हम चिंतन भूमि स्तम्भ और आलेखों की ओर खींचना चाहते हैं।'

उपयुक्त शब्द चुनकर, उपरोक्त वाक्य में रिक्त स्थान की पूर्ति करें।

- Ans
- 1. ध्यान
 - 2. मन
 - 3. विचार
 - 4. मनोबल

Question ID : 630680255904
Option 1 ID : 630680993564
Option 2 ID : 630680993566
Option 3 ID : 630680993563
Option 4 ID : 630680993565

Q.9 निम्नलिखित में से उस वाक्य का चयन करें जिसका पदक्रम शुद्ध हो?

- Ans 1. कुछ विलोम शब्दों की तालिका दी जा रही है नीचे।
 2. स्मरण करते ही उसकी मूर्ति आँखों के सामने आ खड़ी होती है।
 3. बिम्ब का दीर्घकाल तक मन पर प्रभाव बना रहता है।
 4. 'प्रतिशब्द' कहते हैं पर्यायवाची शब्द को भी।

Question ID : 630680255903
Option 1 ID : 630680993560
Option 2 ID : 630680993562
Option 3 ID : 630680993561
Option 4 ID : 630680993559

Q.10 दिए गए शब्दों में से 'सुषुप्ति' के विलोमार्थी शब्द की पहचान करें।

- Ans 1. दैनिक
 2. जागृत
 3. जंगम
 4. जागरण

Question ID : 630680255915
Option 1 ID : 630680993609
Option 2 ID : 630680993610
Option 3 ID : 630680993608
Option 4 ID : 630680993607

Q.11 'राजर्षभ' शब्द के उचित विग्रह की पहचान करें।

- Ans 1. राजाओं में ऋषभ
 2. राजाओं से श्रेष्ठ
 3. राजाओं में श्रेष्ठ
 4. राजाओं का ऋषभ

Question ID : 630680255911
Option 1 ID : 630680993592
Option 2 ID : 630680993593
Option 3 ID : 630680993594
Option 4 ID : 630680993591

Q.12 उपयुक्त अव्यय चुनकर निम्न वाक्य को पूर्ण करें।

'राधा आज सखियों _____ नदी किनारे तक आई।'

- Ans 1. सहित
 2. बिना
 3. साथ
 4. समान

Question ID : 630680255908
Option 1 ID : 630680993582
Option 2 ID : 630680993580
Option 3 ID : 630680993581
Option 4 ID : 630680993579

Q.13 'निराशा' शब्द के शुद्ध सन्धि-विच्छेद का चयन कीजिये।

- Ans
- 1. निरा + शा
 - 2. निर + आशा
 - 3. निश् + आशा
 - 4. नि: + आशा

Question ID : 630680255909

Option 1 ID : 630680993586

Option 2 ID : 630680993583

Option 3 ID : 630680993585

Option 4 ID : 630680993584

Q.14 निम्नलिखित में से शुद्ध वाक्य का चयन करें।

- Ans
- 1. अर्थ के अभाव में भाषा का कोई महत्व नहीं है।
 - 2. अर्थ के अभाव में कोई महत्व नहीं है भाषा का।
 - 3. कोई महत्व नहीं है अर्थ के अभाव में भाषा का।
 - 4. कोई महत्व भाषा का नहीं है अर्थ के अभाव में।

Question ID : 630680255902

Option 1 ID : 630680993557

Option 2 ID : 630680993556

Option 3 ID : 630680993558

Option 4 ID : 630680993555

Q.15 'भौर न छोड़े केतकी, सीधे करवट जान।' - उक्त लोकोक्ति का कोई एक खंड अशुद्ध है। शुद्ध भाग का चयन करें-

- Ans
- 1. साँप न छोड़े केतकी,
 - 2. भौर न छोड़े चाँदनी,
 - 3. तीखे कंटक जान
 - 4. तीखे मकसद जान

Question ID : 630680255913

Option 1 ID : 630680993602

Option 2 ID : 630680993599

Option 3 ID : 630680993601

Option 4 ID : 630680993600

Comprehension:

दिए गए गद्यांश को ध्यान से पढ़ें और प्रश्न के उत्तर दें।

प्रेमचंद की कहानियों में विषय वैविध्य दिखाई पड़ता है। किसी अन्य कथाकार ने जीवन के इतने व्यापक फलक को अपनी कहानियों में नहीं समेटा जितना प्रेमचंद ने। उनकी अधिकांश कहानियों का विषय ग्रामीण जीवन से लिया गया है, किंतु नई कहानियाँ कस्बे की जिंदगी या स्कूल-कॉलेज से जुड़ी हुई हैं। उनकी कहानियों के पात्र हर वर्ग, धर्म, जाति के हैं। कोई हिंदू है तो कोई मुसलमान, कोई किसान है तो कोई विद्यार्थी। अपनी कहानियों में उन्होंने विविध समस्याओं को उठाया है; यथा- किसानों के शोषण की समस्या, रूढ़ि एवं अंधविश्वास, संयुक्त परिवार की समस्या, भ्रष्टाचार एवं व्यक्तिगत जीवन की समस्याएँ आदि। प्रेमचंद की प्रारम्भिक कहानियाँ- पंच परमेश्वर, नमक का दरोगा, ईदगाह, प्रेरणा आदि में आदर्श का पुट दिया गया है जबकि परवर्ती कहानियाँ, यथा- पूस की रात और कफन में यथार्थ का पुट है। स्पष्ट है कि वे आदर्शवाद से यथार्थवाद की ओर अग्रसर हुए। प्रेमचंद का कथाशिल्प भी उत्तरोत्तर विकास पथ पर अग्रसर रहा है। प्रारम्भिक कहानियों में इतिवृत्तात्मकता अधिक है तथा चरित्र-चित्रण की मनोवैज्ञानिकता के स्थान पर व्यक्ति के आचरण का वर्णन अधिक किया गया है। 'पंच परमेश्वर' इसी कोटि की कहानी है, किन्तु 1930 के बाद की कहानियों में कथानक छोटे एवं संश्लिष्ट होते गए तथा कहानी की मूल संवेदना को उभारने वाली दो तीन घटनाओं पर ही बल दिया जाने लगा। कहानियों में चरित्रांकन मनोविश्लेषणात्मक पद्धति पर होने लगा और कहानी को चरम सीमा तक द्वंद्व एवं समस्या के माध्यम से पहुँचाया गया। शतरंज के खिलाड़ी इसी प्रकार की कहानी है।

SubQuestion No : 16

Q.16 गद्यांश में प्रयुक्त शब्द 'प्रारम्भिक' के विपरीतार्थक शब्द का चयन कीजिये।

- Ans
- 1. समाप्त
 - 2. अंतिम
 - 3. अप्रारम्भिक
 - 4. आरंभिक

Question ID : 630680255918

Option 1 ID : 630680993618

Option 2 ID : 630680993616

Option 3 ID : 630680993617

Option 4 ID : 630680993615

Sandeep

Comprehension:

दिए गए गद्यांश को ध्यान से पढ़ें और प्रश्न के उत्तर दें।

प्रेमचंद की कहानियों में विषय वैविध्य दिखाई पड़ता है। किसी अन्य कथाकार ने जीवन के इतने व्यापक फलक को अपनी कहानियों में नहीं समेटा जितना प्रेमचंद ने। उनकी अधिकांश कहानियों का विषय ग्रामीण जीवन से लिया गया है, किंतु नई कहानियाँ कस्बे की जिंदगी या स्कूल-कॉलेज से जुड़ी हुई हैं। उनकी कहानियों के पात्र हर वर्ग, धर्म, जाति के हैं। कोई हिंदू है तो कोई मुसलमान, कोई किसान है तो कोई विद्यार्थी। अपनी कहानियों में उन्होंने विविध समस्याओं को उठाया है; यथा- किसानों के शोषण की समस्या, रूढ़ि एवं अंधविश्वास, संयुक्त परिवार की समस्या, भ्रष्टाचार एवं व्यक्तिगत जीवन की समस्याएँ आदि। प्रेमचंद की प्रारंभिक कहानियाँ- पंच परमेश्वर, नमक का दरोगा, ईदगाह, प्रेरणा आदि में आदर्श का पुट दिया गया है जबकि परवर्ती कहानियाँ, यथा- पूस की रात और कफन में यथार्थ का पुट है। स्पष्ट है कि वे आदर्शवाद से यथार्थवाद की ओर अग्रसर हुए। प्रेमचंद का कथाशिल्प भी उत्तरोत्तर विकास पथ पर अग्रसर रहा है। प्रारंभिक कहानियों में इतिवृत्तात्मकता अधिक है तथा चरित्र-चित्रण की मनोवैज्ञानिकता के स्थान पर व्यक्ति के आचरण का वर्णन अधिक किया गया है। 'पंच परमेश्वर' इसी कोटि की कहानी है, किन्तु 1930 के बाद की कहानियों में कथानक छोटे एवं संश्लिष्ट होते गए तथा कहानी की मूल संवेदना को उभारने वाली दो तीन घटनाओं पर ही बल दिया जाने लगा। कहानियों में चरित्रांकन मनोविश्लेषणात्मक पद्धति पर होने लगा और कहानी को चरम सीमा तक द्वंद्व एवं समस्या के माध्यम से पहुँचाया गया। शतरंज के खिलाड़ी इसी प्रकार की कहानी है।

SubQuestion No : 17

Q.17 निम्नलिखित में से कौन-सा शब्द 'फलक' का पर्यायवाची नहीं है?

- Ans 1. अनल
 2. अर्श
 3. व्योम
 4. अभ्र

Question ID : 630680255919

Option 1 ID : 630680993619

Option 2 ID : 630680993620

Option 3 ID : 630680993622

Option 4 ID : 630680993621

Sandeep

Comprehension:

दिए गए गद्यांश को ध्यान से पढ़ें और प्रश्न के उत्तर दें।

प्रेमचंद की कहानियों में विषय वैविध्य दिखाई पड़ता है। किसी अन्य कथाकार ने जीवन के इतने व्यापक फलक को अपनी कहानियों में नहीं समेटा जितना प्रेमचंद ने। उनकी अधिकांश कहानियों का विषय ग्रामीण जीवन से लिया गया है, किंतु नई कहानियाँ कस्बे की जिंदगी या स्कूल-कॉलेज से जुड़ी हुई हैं। उनकी कहानियों के पात्र हर वर्ग, धर्म, जाति के हैं। कोई हिंदू है तो कोई मुसलमान, कोई किसान है तो कोई विद्यार्थी। अपनी कहानियों में उन्होंने विविध समस्याओं को उठाया है; यथा- किसानों के शोषण की समस्या, रूढ़ि एवं अंधविश्वास, संयुक्त परिवार की समस्या, भ्रष्टाचार एवं व्यक्तिगत जीवन की समस्याएँ आदि। प्रेमचंद की प्रारंभिक कहानियाँ- पंच परमेश्वर, नमक का दरोगा, ईदगाह, प्रेरणा आदि में आदर्श का पुट दिया गया है जबकि परवर्ती कहानियाँ, यथा- पूस की रात और कफन में यथार्थ का पुट है। स्पष्ट है कि वे आदर्शवाद से यथार्थवाद की ओर अग्रसर हुए। प्रेमचंद का कथाशिल्प भी उत्तरोत्तर विकास पथ पर अग्रसर रहा है। प्रारंभिक कहानियों में इतिवृत्तात्मकता अधिक है तथा चरित्र-चित्रण की मनोवैज्ञानिकता के स्थान पर व्यक्ति के आचरण का वर्णन अधिक किया गया है। 'पंच परमेश्वर' इसी कोटि की कहानी है, किन्तु 1930 के बाद की कहानियों में कथानक छोटे एवं संश्लिष्ट होते गए तथा कहानी की मूल संवेदना को उभारने वाली दो तीन घटनाओं पर ही बल दिया जाने लगा। कहानियों में चरित्रांकन मनोविश्लेषणात्मक पद्धति पर होने लगा और कहानी को चरम सीमा तक द्वंद्व एवं समस्या के माध्यम से पहुँचाया गया। शतरंज के खिलाड़ी इसी प्रकार की कहानी है।

SubQuestion No : 18

Q.18 उपर्युक्त अवतरण किस शैली में लिखा गया है?

- Ans
- 1. विवरणात्मक
 - 2. आलोचनात्मक
 - 3. विवेचनात्मक
 - 4. विश्लेषणात्मक

Question ID : 630680255921

Option 1 ID : 630680993629

Option 2 ID : 630680993627

Option 3 ID : 630680993630

Option 4 ID : 630680993628

Sandeep

Comprehension:

दिए गए गद्यांश को ध्यान से पढ़ें और प्रश्न के उत्तर दें।

प्रेमचंद की कहानियों में विषय वैविध्य दिखाई पड़ता है। किसी अन्य कथाकार ने जीवन के इतने व्यापक फलक को अपनी कहानियों में नहीं समेटा जितना प्रेमचंद ने। उनकी अधिकांश कहानियों का विषय ग्रामीण जीवन से लिया गया है, किंतु नई कहानियाँ कस्बे की जिंदगी या स्कूल-कॉलेज से जुड़ी हुई हैं। उनकी कहानियों के पात्र हर वर्ग, धर्म, जाति के हैं। कोई हिंदू है तो कोई मुसलमान, कोई किसान है तो कोई विद्यार्थी। अपनी कहानियों में उन्होंने विविध समस्याओं को उठाया है; यथा- किसानों के शोषण की समस्या, रूढ़ि एवं अंधविश्वास, संयुक्त परिवार की समस्या, भ्रष्टाचार एवं व्यक्तिगत जीवन की समस्याएँ आदि। प्रेमचंद की प्रारम्भिक कहानियाँ- पंच परमेश्वर, नमक का दरोगा, ईदगाह, प्रेरणा आदि में आदर्श का पुट दिया गया है जबकि परवर्ती कहानियाँ, यथा- पूस की रात और कफन में यथार्थ का पुट है। स्पष्ट है कि वे आदर्शवाद से यथार्थवाद की ओर अग्रसर हुए। प्रेमचंद का कथाशिल्प भी उत्तरोत्तर विकास पथ पर अग्रसर रहा है। प्रारंभिक कहानियों में इतिवृत्तात्मकता अधिक है तथा चरित्र-चित्रण की मनोवैज्ञानिकता के स्थान पर व्यक्ति के आचरण का वर्णन अधिक किया गया है। 'पंच परमेश्वर' इसी कोटि की कहानी है, किन्तु 1930 के बाद की कहानियों में कथानक छोटे एवं संश्लिष्ट होते गए तथा कहानी की मूल संवेदना को उभारने वाली दो तीन घटनाओं पर ही बल दिया जाने लगा। कहानियों में चरित्रांकन मनोविश्लेषणात्मक पद्धति पर होने लगा और कहानी को चरम सीमा तक द्वंद्व एवं समस्या के माध्यम से पहुँचाया गया। शतरंज के खिलाड़ी इसी प्रकार की कहानी है।

SubQuestion No : 19

Q.19 निम्नलिखित में से किस वाक्य में 'शोषण' शब्द का उचित प्रयोग किया गया है?

- Ans
- 1. एक शोषण-समाज, अच्छा नागरिक नहीं दे सकता।
 - 2. भ्रष्टाचार और शोषण हर समाज की समस्या है।
 - 3. इस कपड़े से सारा पानी शोषण हो गया।
 - 4. श्रमिक एक शोषण वर्ग का प्राणी है।

Question ID : 630680255920

Option 1 ID : 630680993626

Option 2 ID : 630680993625

Option 3 ID : 630680993623

Option 4 ID : 630680993624

Sandeep

Comprehension:

दिए गए गद्यांश को ध्यान से पढ़े और प्रश्न के उत्तर दें।

प्रेमचंद की कहानियों में विषय वैविध्य दिखाई पड़ता है। किसी अन्य कथाकार ने जीवन के इतने व्यापक फलक को अपनी कहानियों में नहीं समेटा जितना प्रेमचंद ने। उनकी अधिकांश कहानियों का विषय ग्रामीण जीवन से लिया गया है, किंतु नई कहानियाँ कस्बे की जिंदगी या स्कूल-कॉलेज से जुड़ी हुई हैं। उनकी कहानियों के पात्र हर वर्ग, धर्म, जाति के हैं। कोई हिंदू है तो कोई मुसलमान, कोई किसान है तो कोई विद्यार्थी। अपनी कहानियों में उन्होंने विविध समस्याओं को उठाया है; यथा- किसानों के शोषण की समस्या, रूढ़ि एवं अंधविश्वास, संयुक्त परिवार की समस्या, भ्रष्टाचार एवं व्यक्तिगत जीवन की समस्याएँ आदि। प्रेमचंद की प्रारम्भिक कहानियाँ- पंच परमेश्वर, नमक का दरोगा, ईदगाह, प्रेरणा आदि में आदर्श का पुट दिया गया है जबकि परवर्ती कहानियाँ, यथा- पूस की रात और कफन में यथार्थ का पुट है। स्पष्ट है कि वे आदर्शवाद से यथार्थवाद की ओर अग्रसर हुए। प्रेमचंद का कथाशिल्प भी उत्तरोत्तर विकास पथ पर अग्रसर रहा है। प्रारंभिक कहानियों में इतिवृत्तात्मकता अधिक है तथा चरित्र-चित्रण की मनोवैज्ञानिकता के स्थान पर व्यक्ति के आचरण का वर्णन अधिक किया गया है। 'पंच परमेश्वर' इसी कोटि की कहानी है, किन्तु 1930 के बाद की कहानियों में कथानक छोटे एवं संश्लिष्ट होते गए तथा कहानी की मूल संवेदना को उभारने वाली दो तीन घटनाओं पर ही बल दिया जाने लगा। कहानियों में चरित्रांकन मनोविश्लेषणात्मक पद्धति पर होने लगा और कहानी को चरम सीमा तक द्वंद्व एवं समस्या के माध्यम से पहुँचाया गया। शतरंज के खिलाड़ी इसी प्रकार की कहानी है।

SubQuestion No : 20

Q.20 गद्यांश के अनुसार प्रेमचंद ने पात्रों के चरित्र चित्रण में कौन-सी पद्धति अपनाई है?

- Ans
- 1. आलोचनात्मक चरित्र पद्धति
 - 2. व्यक्ति चरित्र पद्धति
 - 3. वर्ग चरित्र पद्धति
 - 4. मनोविश्लेषणात्मक चरित्र पद्धति

Question ID : 630680255922

Option 1 ID : 630680993634

Option 2 ID : 630680993633

Option 3 ID : 630680993631

Option 4 ID : 630680993632

Section : Discipline1

Q.1 Which of the following is NOT an expectation from a parent of a pre-school child?

- Ans
- 1. Create an atmosphere of learning all over the home.
 - 2. To guide the teacher in selecting appropriate teaching method.
 - 3. Provide emotional support required for proper education.
 - 4. To spend time teaching their kids at home.

Question ID : 630680256018

Option 1 ID : 630680994016

Option 2 ID : 630680994018

Option 3 ID : 630680994017

Option 4 ID : 630680994015

Q.2 The term 'proximal' means:

- Ans
- 1. possible
 - 2. nearby
 - 3. at distance
 - 4. infancy

Question ID : 630680255935
Option 1 ID : 630680993684
Option 2 ID : 630680993685
Option 3 ID : 630680993686
Option 4 ID : 630680993683

Q.3 Vygotsky believed that children talk to themselves in order to solve problems or clarify thoughts. This is known as:

- Ans
- 1. social speech
 - 2. interactive speech
 - 3. individual speech
 - 4. private speech

Question ID : 630680255963
Option 1 ID : 630680993796
Option 2 ID : 630680993798
Option 3 ID : 630680993795
Option 4 ID : 630680993797

Q.4 Who said, "Observation alone is not enough. We have to understand the significance of what we see, hear and touch"?

- Ans
- 1. Aurobindo
 - 2. Dewey
 - 3. Frobel
 - 4. Montessori

Question ID : 630680255982
Option 1 ID : 630680993873
Option 2 ID : 630680993874
Option 3 ID : 630680993872
Option 4 ID : 630680993871

Q.5 Early childhood education programmes in Anganwadis, Balvatikas, etc. deal with which age group?

- Ans
- 1. 2-5 years
 - 2. 3-6 years
 - 3. 0-5 years
 - 4. 6-8 years

Question ID : 630680255944
Option 1 ID : 630680993722
Option 2 ID : 630680993720
Option 3 ID : 630680993719
Option 4 ID : 630680993721

Q.6 Which of the following is NOT one the four reasons to provide children with environmental education, as identified by the UNESCO?

- Ans
- 1. To enhance their ability to learn about their surroundings
 - 2. To make them more aware and conscious of environmental problem
 - 3. To boost their interest in caring for and improving the environment
 - 4. To confine their ecological knowledge to subjects such as energy and wildlife

Question ID : 630680255966

Option 1 ID : 630680993809

Option 2 ID : 630680993807

Option 3 ID : 630680993808

Option 4 ID : 630680993810

Q.7 Who among the following is NOT considered as a pioneer in the movement of early childhood education?

- Ans
- 1. Dewey
 - 2. Montessori
 - 3. Froebel
 - 4. Pluto

Question ID : 630680255924

Option 1 ID : 630680993640

Option 2 ID : 630680993642

Option 3 ID : 630680993641

Option 4 ID : 630680993639

Q.8 Printed items containing numbers and mathematical or scientific symbols, is a tool to develop:

- Ans
- 1. geometry
 - 2. mathematical reasoning
 - 3. measurement
 - 4. number sense

Question ID : 630680255951

Option 1 ID : 630680993749

Option 2 ID : 630680993750

Option 3 ID : 630680993748

Option 4 ID : 630680993747

Q.9 Which of the following is NOT a characteristic of Montessori method of education?

- Ans
- 1. Hands-on learning
 - 2. Self-directed activity
 - 3. Collaborative play
 - 4. Competitive outdoor games

Question ID : 630680255977

Option 1 ID : 630680993852

Option 2 ID : 630680993851

Option 3 ID : 630680993853

Option 4 ID : 630680993854

Q.10 Which the following is a characteristic of Collaborative Assessment suggested for Students with special needs?

- Ans 1. Team members are seen as equal in human dignity
 2. Based on a medical model
 3. One-shot assessment approach
 4. Focuses on deficits within the student

Question ID : 630680256001
Option 1 ID : 630680993950
Option 2 ID : 630680993947
Option 3 ID : 630680993948
Option 4 ID : 630680993949

Q.11 The play-way method is suggested by:

- Ans 1. Froebel
 2. Piaget
 3. Dewey
 4. Gandhi

Question ID : 630680255976
Option 1 ID : 630680993847
Option 2 ID : 630680993848
Option 3 ID : 630680993849
Option 4 ID : 630680993850

Q.12 Materials to copy and create series and patterns (e.g., beads, sticks, small blocks, etc.) can be used to develop skills of:

- Ans 1. measurement
 2. mathematical reasoning
 3. classification and patterning
 4. number sense

Question ID : 630680255952
Option 1 ID : 630680993753
Option 2 ID : 630680993751
Option 3 ID : 630680993754
Option 4 ID : 630680993752

Q.13 Which document recommended for the first time in India that a single subject, 'Environmental Studies', be taught at the primary stage?

- Ans 1. National Education Policy-2020
 2. National Curriculum Framework-2005
 3. National Policy on Education-1986
 4. The Curriculum for the Ten-year School: A Framework-1975

Question ID : 630680255967
Option 1 ID : 630680993813
Option 2 ID : 630680993812
Option 3 ID : 630680993814
Option 4 ID : 630680993811

Q.14 Which of the following is NOT recommended for infrastructure at foundation stage?

- Ans
- 1. Learning spaces segregated from other spaces (e.g., cooking)
 - 2. Safe outdoor spaces, and/or small gardens for children to play
 - 3. Clean, safe, and functioning toilets, and safe drinking water.
 - 4. Appropriate high-quality Science laboratories

Question ID : 630680256004
Option 1 ID : 630680993960
Option 2 ID : 630680993962
Option 3 ID : 630680993959
Option 4 ID : 630680993961

Q.15 Which of the following is NOT a core criterion to guide the choice of teaching methods at ECCE?

- Ans
- 1. The nature of instructional objectives
 - 2. The nature of lesson content
 - 3. Availability and cost of instructional materials
 - 4. Content knowledge of the teacher

Question ID : 630680255975
Option 1 ID : 630680993843
Option 2 ID : 630680993846
Option 3 ID : 630680993845
Option 4 ID : 630680993844

Q.16 UNICEF and the World Health Organisation (WHO) recommend that infants begin breastfeeding within _____ after birth.

- Ans
- 1. 1 hour
 - 2. 6 hours
 - 3. 24 hours
 - 4. 48 hours

Question ID : 630680255937
Option 1 ID : 630680993691
Option 2 ID : 630680993692
Option 3 ID : 630680993693
Option 4 ID : 630680993694

Q.17 the National Early Childhood Care and Education Policy (2013) was formulated under which ministry?

- Ans
- 1. Ministry of Woman and Child Development
 - 2. Ministry of Human Resource Development
 - 3. Ministry of Social Justice
 - 4. Ministry of Health and Family Welfare

Question ID : 630680255948
Option 1 ID : 630680993737
Option 2 ID : 630680993736
Option 3 ID : 630680993738
Option 4 ID : 630680993735

Q.18 The physical changes over childhood and adolescence, both, those visible from the outside, and internal changes, are known as:

- Ans
- 1. learning
 - 2. maturation
 - 3. growth
 - 4. development

Question ID : 630680255931
Option 1 ID : 630680993670
Option 2 ID : 630680993669
Option 3 ID : 630680993667
Option 4 ID : 630680993668

Q.19 Which of the following is NOT a sign of Language Development from zero to three years?

- Ans
- 1. Developing vocabulary and using language to engage in conversations
 - 2. Demonstrating interest and ability in writing
 - 3. Using expressive and receptive communication skills
 - 4. Developing verbal and non-verbal communication skills

Question ID : 630680255928
Option 1 ID : 630680993658
Option 2 ID : 630680993656
Option 3 ID : 630680993655
Option 4 ID : 630680993657

Q.20 Which of the following is NOT correct about a trapezoid?

- Ans
- 1. A trapezoid has four sides.
 - 2. A trapezoid has one pair of parallel lines.
 - 3. Any one side is not straight.
 - 4. A trapezoid has four points or corners or angles.

Question ID : 630680255955
Option 1 ID : 630680993763
Option 2 ID : 630680993765
Option 3 ID : 630680993766
Option 4 ID : 630680993764

Q.1 Which of the following is NOT the preferred way to teach about environment at early childhood level?

- Ans
- 1. Concrete to abstract
 - 2. Laboratory based learning
 - 3. Known to unknown
 - 4. Child's environment be his/her learning laboratory

Question ID : 630680255971
Option 1 ID : 630680993828
Option 2 ID : 630680993827
Option 3 ID : 630680993829
Option 4 ID : 630680993830

Q.2 Sounds that make up a word or forms of signs, is known as:

- Ans
- 1. semantics
 - 2. morphology
 - 3. phonology
 - 4. syntax

Question ID : 630680255956
Option 1 ID : 630680993769
Option 2 ID : 630680993768
Option 3 ID : 630680993767
Option 4 ID : 630680993770

Q.3 What is NOT true about self-image?

- Ans
- 1. It includes all representations about one's own ideas, beliefs, abilities, attitudes.
 - 2. It is built by the influence of others.
 - 3. It plays a main role in the choice of values and goals and representing the central core of our personality.
 - 4. It constitutes an integrator and organiser of each individual's inner life.

Question ID : 630680255986
Option 1 ID : 630680993888
Option 2 ID : 630680993889
Option 3 ID : 630680993890
Option 4 ID : 630680993887

Q.4 EVS is organised around three broad principles, which one is not among the three:

- Ans
- 1. learning about the environment
 - 2. learning for the environment
 - 3. learning through the environment
 - 4. learning as the environment

Question ID : 630680255970
Option 1 ID : 630680993824
Option 2 ID : 630680993826
Option 3 ID : 630680993825
Option 4 ID : 630680993823

Q.5 _____ refers to a person's belief that he or she is able to effectively perform the tasks needed to attain a valued goal.

- Ans
- 1. Self-motivation
 - 2. Self-efficacy
 - 3. Self-engagement
 - 4. Self-esteem

Question ID : 630680255990
Option 1 ID : 630680993904
Option 2 ID : 630680993906
Option 3 ID : 630680993905
Option 4 ID : 630680993903

Q.6 Playing with blocks helps in the development of all of the following, EXCEPT:

- Ans
- 1. health
 - 2. cognitive
 - 3. physical
 - 4. emotional

Question ID : 630680255973
Option 1 ID : 630680993838
Option 2 ID : 630680993836
Option 3 ID : 630680993835
Option 4 ID : 630680993837

Q.7 Which Curriculum Framework had recommended that Environmental Studies be taught as an integrated course for the entire primary stage, instead of in two distinct parts devoted to science and social studies in Classes III-V?

- Ans
- 1. The National Curriculum Framework- 2000
 - 2. The Curriculum for the Ten-year School: A Framework- 1975
 - 3. The National Curriculum Framework- 1988
 - 4. The National Curriculum Framework- 2005

Question ID : 630680255968
Option 1 ID : 630680993817
Option 2 ID : 630680993815
Option 3 ID : 630680993816
Option 4 ID : 630680993818

Q.8 Who demonstrated that children acquire linguistic rules or grammar without an inexhaustive sample of the acquired language?

- Ans
- 1. Piaget
 - 2. Stark
 - 3. Chomsky
 - 4. Vygotsky

Question ID : 630680255961
Option 1 ID : 630680993788
Option 2 ID : 630680993790
Option 3 ID : 630680993787
Option 4 ID : 630680993789

Q.9 For addressing in the inclusive classroom having a few children with hearing impairment (HI), a teacher does all of the following, EXCEPT:

- Ans
- 1. when showing diagrams, pictures etc., using slower speech
 - 2. avoiding drawing too much attention to the learners with hi for maintaining inclusivity
 - 3. arranging the classroom so that students can see each other
 - 4. using longer sentences to provide holistic picture

Question ID : 630680256014

Option 1 ID : 630680994001

Option 2 ID : 630680994000

Option 3 ID : 630680993999

Option 4 ID : 630680994002

Q.10 The correct sequence of language development in initial phase is:

- Ans
- 1. vegetative sounds, laughter, vocal play, cooing
 - 2. cooing, vegetative sounds, laughter, vocal play
 - 3. vegetative sounds, cooing, laughter, vocal play
 - 4. laughter, vegetative sounds, vocal play, cooing

Question ID : 630680255962

Option 1 ID : 630680993791

Option 2 ID : 630680993793

Option 3 ID : 630680993792

Option 4 ID : 630680993794

Q.11 Which teacher education programme has been suggested in NEP-2020 to prepare teachers for foundation stage?

- Ans
- 1. Two Years B.Ed. programme
 - 2. Four Year ITEP with specialisation in foundation stage
 - 3. Two years Diploma in ECCE
 - 4. Two years PG diploma in ECCE

Question ID : 630680256003

Option 1 ID : 630680993955

Option 2 ID : 630680993958

Option 3 ID : 630680993956

Option 4 ID : 630680993957

Q.12 An individual's internal, personal sense of being a boy or man or a girl or woman, is known as:

- Ans
- 1. gender identity
 - 2. gender equality
 - 3. gender discrimination
 - 4. gender sensitivity

Question ID : 630680255997

Option 1 ID : 630680993932

Option 2 ID : 630680993931

Option 3 ID : 630680993934

Option 4 ID : 630680993933

Q.13 ____ based on a combination of bodily characteristics, including chromosomes, hormones, internal reproductive organs, and genitalia.

- Ans
- 1. Gender
 - 2. Inclusion
 - 3. Exclusion
 - 4. Sex

Question ID : 630680255998
Option 1 ID : 630680993935
Option 2 ID : 630680993936
Option 3 ID : 630680993938
Option 4 ID : 630680993937

Q.14 How can parents support education of the child at home?

- Ans
- 1. Talk to your kid about how your school was and different memories associated with it.
 - 2. Provide a dedicated space where he/she can work with concentration.
 - 3. From the initial stages, make your child independent to complete various school activities.
 - 4. Have an open communication channel with the kid on a daily basis to know how his day in the school was.

Question ID : 630680256017
Option 1 ID : 630680994011
Option 2 ID : 630680994014
Option 3 ID : 630680994012
Option 4 ID : 630680994013

Q.15 Research from neuroscience informs us that over ____ of an individual's brain development occurs by the age of 6.

- Ans
- 1. 45%
 - 2. 85%
 - 3. 25%
 - 4. 65%

Question ID : 630680256007
Option 1 ID : 630680993973
Option 2 ID : 630680993971
Option 3 ID : 630680993974
Option 4 ID : 630680993972

Q.16 Amino acids are simple subunits of ____.

- Ans
- 1. fats
 - 2. carbohydrates
 - 3. minerals
 - 4. proteins

Question ID : 630680255940
Option 1 ID : 630680993705
Option 2 ID : 630680993703
Option 3 ID : 630680993706
Option 4 ID : 630680993704

Q.17 Which of the following is NOT a sign of Sensory and Perceptual Development from zero to three years?

- Ans
- 1. Abstractions of directions and complex motor behaviours
 - 2. Learning to control and coordinate the reflexes
 - 3. Development of the five senses
 - 4. Display awareness of location and spatial relationship

Question ID : 630680255927
Option 1 ID : 630680993653
Option 2 ID : 630680993652
Option 3 ID : 630680993651
Option 4 ID : 630680993654

Q.18 Which of the following is NOT among the three ingredients of effective self-regulation?

- Ans
- 1. Monitoring
 - 2. Self-control
 - 3. Standards
 - 4. Capacity to change

Question ID : 630680255991
Option 1 ID : 630680993909
Option 2 ID : 630680993908
Option 3 ID : 630680993907
Option 4 ID : 630680993910

Q.19 In which stage of self-awareness do children begin to use language to refer to themselves?

- Ans
- 1. Situation
 - 2. Identification
 - 3. Permanence
 - 4. Differentiation

Question ID : 630680255989
Option 1 ID : 630680993900
Option 2 ID : 630680993901
Option 3 ID : 630680993902
Option 4 ID : 630680993899

Q.20 _____ includes the dimension of personality we expose to others, our reactions in the interactions with others.

- Ans
- 1. Competence self
 - 2. Social self
 - 3. Familial self
 - 4. Physical self

Question ID : 630680255987
Option 1 ID : 630680993893
Option 2 ID : 630680993891
Option 3 ID : 630680993892
Option 4 ID : 630680993894

Section : Discipline3

Q.1 Which of the following is NOT a stage of psychosexual development?

- Ans
- 1. Anal
 - 2. Phallic
 - 3. Active
 - 4. Oral

Question ID : 630680255933
Option 1 ID : 630680993676
Option 2 ID : 630680993677
Option 3 ID : 630680993678
Option 4 ID : 630680993675

Q.2 The _____ should take responsibility for sourcing, contextualising, and anchoring translation of materials for use in the Foundational Stage.

- Ans
- 1. BRC
 - 2. SCERT
 - 3. DIET
 - 4. CRC

Question ID : 630680256005
Option 1 ID : 630680993966
Option 2 ID : 630680993963
Option 3 ID : 630680993964
Option 4 ID : 630680993965

Q.3 Community engagement at pre-school level helps in all of the following, EXCEPT:

- Ans
- 1. social development
 - 2. moral development
 - 3. economic development
 - 4. emotional development

Question ID : 630680256022
Option 1 ID : 630680994031
Option 2 ID : 630680994032
Option 3 ID : 630680994034
Option 4 ID : 630680994033

Q.4 _____ curriculum involves information being structured so that complex ideas can be taught at a simplified level first where children learn more through concrete experiences, and then re-visited at more complex levels later on.

- Ans
- 1. Overt
 - 2. Hidden
 - 3. Spiral
 - 4. Informal

Question ID : 630680255925
Option 1 ID : 630680993644
Option 2 ID : 630680993643
Option 3 ID : 630680993645
Option 4 ID : 630680993646

Q.5 Which mineral assists insulin in glucose metabolism?

- Ans
- 1. Copper
 - 2. Selenium
 - 3. Manganese
 - 4. Chromium

Question ID : 630680255941
Option 1 ID : 630680993708
Option 2 ID : 630680993707
Option 3 ID : 630680993710
Option 4 ID : 630680993709

Q.6 The Centrally Sponsored Scheme of Integrated Education for Disabled Children (IEDC) was launched in:

- Ans
- 1. 1986
 - 2. 1995
 - 3. 1962
 - 4. 1974

Question ID : 630680256000
Option 1 ID : 630680993945
Option 2 ID : 630680993946
Option 3 ID : 630680993943
Option 4 ID : 630680993944

Q.7 _____ are rule-based versions of a language, that are different from the formal language taught in school.

- Ans
- 1. Sound
 - 2. Linguistics
 - 3. Standard language
 - 4. Dialects

Question ID : 630680255959
Option 1 ID : 630680993781
Option 2 ID : 630680993779
Option 3 ID : 630680993782
Option 4 ID : 630680993780

Q.8 Measurement bridges two critical realms of mathematics, these are:

- Ans
- 1. geometry and real number
 - 2. geometry and patterning
 - 3. patterning and real number
 - 4. mathematical reasoning and real number

Question ID : 630680255953
Option 1 ID : 630680993757
Option 2 ID : 630680993756
Option 3 ID : 630680993758
Option 4 ID : 630680993755

Q.9 The realisation that one's body, mind, and activities are distinct from those of other people is known as:

- Ans
- 1. self-awareness
 - 2. self-esteem
 - 3. self-concept
 - 4. self-image

Question ID : 630680255988
Option 1 ID : 630680993896
Option 2 ID : 630680993898
Option 3 ID : 630680993895
Option 4 ID : 630680993897

Q.10 Which dimension of language answers how signs/words are combined to create phrases and sentences?

- Ans
- 1. Syntax
 - 2. Phonology
 - 3. Morphology
 - 4. Semantics

Question ID : 630680255957
Option 1 ID : 630680993774
Option 2 ID : 630680993771
Option 3 ID : 630680993772
Option 4 ID : 630680993773

Q.11 _____ occurs when the inner ear is damaged, or there is damage to the nerves that help carry sound to the inner ear or to the nerve pathway to the brain.

- Ans
- 1. Sensori-Neural Hearing Loss
 - 2. No Hearing Loss
 - 3. Mixed Hearing Loss
 - 4. Conductive Hearing Loss

Question ID : 630680256013
Option 1 ID : 630680993996
Option 2 ID : 630680993998
Option 3 ID : 630680993997
Option 4 ID : 630680993995

Q.12 In the process of _____ objects, events and experiences are drawn into, and made a part of an existing schema.

- Ans
- 1. equilibration
 - 2. accommodation
 - 3. assimilation
 - 4. disequilibrating

Question ID : 630680255934
Option 1 ID : 630680993680
Option 2 ID : 630680993679
Option 3 ID : 630680993681
Option 4 ID : 630680993682

Q.13 A vegetarian diet that includes dairy products but NOT eggs is known as:

- Ans
- 1. lacto-vegetarian
 - 2. lacto-ovo vegetarian
 - 3. vegan
 - 4. ovo vegetarian

Question ID : 630680255943
Option 1 ID : 630680993716
Option 2 ID : 630680993715
Option 3 ID : 630680993718
Option 4 ID : 630680993717

Q.14 Which of the following is NOT among barriers traditionally hindering the parental involvement?

- Ans
- 1. Poverty and financial responsibility for schooling and activities
 - 2. Lack of awareness of the educational alternatives for their children
 - 3. Fear of stigmatisation and hostility from within their communities
 - 4. Teacher-parent communication and cooperation

Question ID : 630680256020
Option 1 ID : 630680994026
Option 2 ID : 630680994023
Option 3 ID : 630680994024
Option 4 ID : 630680994025

Q.15 Which of the following macronutrients does NOT yield calories?

- Ans
- 1. Carbohydrates
 - 2. Water
 - 3. Proteins
 - 4. Fat

Question ID : 630680255938
Option 1 ID : 630680993695
Option 2 ID : 630680993696
Option 3 ID : 630680993698
Option 4 ID : 630680993697

Q.16 Using gestures and body language when communicating in a classroom which has small children is important because:

- Ans
- 1. children don't know language
 - 2. teachers feel less fatigue
 - 3. children learn from expressions
 - 4. children enjoy different faces

Question ID : 630680255974
Option 1 ID : 630680993839
Option 2 ID : 630680993842
Option 3 ID : 630680993840
Option 4 ID : 630680993841

Q.17 A disorder that causes problems with movement and balance, is:

- Ans
- 1. dyscalculia
 - 2. dysgraphia
 - 3. cerebral palsy
 - 4. dyslexia

Question ID : 630680256015
Option 1 ID : 630680994006
Option 2 ID : 630680994005
Option 3 ID : 630680994003
Option 4 ID : 630680994004

Q.18 ____ observation involves looking at a subject's behaviour as it occurs in a natural setting, with no attempts at intervention on the part of the teacher.

- Ans
- 1. Scheduled
 - 2. Naturalistic
 - 3. Structured
 - 4. Non-participatory

Question ID : 630680255985
Option 1 ID : 630680993885
Option 2 ID : 630680993883
Option 3 ID : 630680993884
Option 4 ID : 630680993886

Q.19 ____ refers to adjusting assessments, material, curriculum, or classroom environment to accommodate a student's needs so he/she can participate in, and achieve the teaching-learning goals.

- Ans
- 1. Accommodation
 - 2. Assimilation
 - 3. Adaptation
 - 4. Adjustment

Question ID : 630680256010
Option 1 ID : 630680993984
Option 2 ID : 630680993986
Option 3 ID : 630680993983
Option 4 ID : 630680993985

Q.20 The Integrated Child Development Scheme (ICDS) was launched in the year ____.

- Ans
- 1. 1985
 - 2. 2005
 - 3. 1986
 - 4. 1975

Question ID : 630680255947
Option 1 ID : 630680993732
Option 2 ID : 630680993734
Option 3 ID : 630680993733
Option 4 ID : 630680993731

Section : Discipline4

Q.1 Which of the following is a correct way for a parent to support school/teacher?

- Ans
- 1. Ignoring any complaints or suggestions given by the school
 - 2. Permitting the child to skip school for unimportant reasons
 - 3. Throwing constant advice at the child without trying to understand the truth behind anything
 - 4. Praising the teaching methods of teachers in front of the child

Question ID : 630680256016

Option 1 ID : 630680994007

Option 2 ID : 630680994009

Option 3 ID : 630680994008

Option 4 ID : 630680994010

Q.2 Which of the following CANNOT be an objective of the Early Childhood Care and Education Programme?

- Ans
- 1. Laying a sound understanding of disciplinary subject knowledge in each child
 - 2. Developing sense of aesthetic appreciation and stimulate creative learning processes
 - 3. Promoting development and integration of the senses
 - 4. Enhancing development of pro-social skills, social competence and emotional well being

Question ID : 630680255926

Option 1 ID : 630680993650

Option 2 ID : 630680993649

Option 3 ID : 630680993647

Option 4 ID : 630680993648

Q.3 _____ is a process of social, psychological, and cultural change that stems from the balancing of two cultures while adapting to the prevailing culture of the society.

- Ans
- 1. Culturation
 - 2. Enculturation
 - 3. Acculturation
 - 4. Culture identification

Question ID : 630680255994

Option 1 ID : 630680993919

Option 2 ID : 630680993920

Option 3 ID : 630680993922

Option 4 ID : 630680993921

Q.4 Which of the following are insoluble in water?

- Ans
- 1. Sugars
 - 2. Salts
 - 3. Fats
 - 4. Carbohydrates

Question ID : 630680255939
Option 1 ID : 630680993700
Option 2 ID : 630680993702
Option 3 ID : 630680993701
Option 4 ID : 630680993699

Q.5 _____ are an observation method that detail a child's interactions and friendships within the group.

- Ans
- 1. Photo observations
 - 2. Socio-grams
 - 3. Learning stories
 - 4. Event samples

Question ID : 630680255983
Option 1 ID : 630680993878
Option 2 ID : 630680993877
Option 3 ID : 630680993876
Option 4 ID : 630680993875

Q.6 _____ involves factual accounts of events that have taken place.

- Ans
- 1. Anecdotal records
 - 2. Rubrics
 - 3. Cumulative records
 - 4. Observation schedule

Question ID : 630680255980
Option 1 ID : 630680993863
Option 2 ID : 630680993864
Option 3 ID : 630680993866
Option 4 ID : 630680993865

Q.7 'Subitising' is:

- Ans
- 1. the stage in which children begin to learn to recite the numbers in order
 - 2. initial qualitative understanding of a quantity of small groups of objects without actually counting the objects
 - 3. initial quantitative understanding of small groups of objects with actual counting the objects
 - 4. the stage in which children develop beginning algebraic concepts as they sort and classify objects

Question ID : 630680255950
Option 1 ID : 630680993745
Option 2 ID : 630680993744
Option 3 ID : 630680993743
Option 4 ID : 630680993746

Q.8 _____ involves recording observations about the child's behaviour and what the child is doing at specific times.

- Ans
- 1. Photographs
 - 2. Time samples
 - 3. Work samples
 - 4. Jottings

Question ID : 630680255981
Option 1 ID : 630680993870
Option 2 ID : 630680993868
Option 3 ID : 630680993867
Option 4 ID : 630680993869

Q.9 As per Erikson's Psychosocial Stages of Development, at what age do children take the initiative on some activities, and, may develop guilt when unsuccessful, or are boundaries overstepped?

- Ans
- 1. 7-11 years
 - 2. 1-2 years
 - 3. 5-12 years
 - 4. 3-6 years

Question ID : 630680255992
Option 1 ID : 630680993913
Option 2 ID : 630680993911
Option 3 ID : 630680993914
Option 4 ID : 630680993912

Q.10 Which of the following is NOT a Guiding Principle for the Foundational Stage based on NEP-2020?

- Ans
- 1. Children are social beings; they learn through observation, imitation, and collaboration.
 - 2. Every child is capable of learning regardless of the circumstances of birth or background
 - 3. Children are natural researchers with great observational skills.
 - 4. Each child is different but grows, learns, and develops at a universal pace.

Question ID : 630680255949
Option 1 ID : 630680993740
Option 2 ID : 630680993741
Option 3 ID : 630680993742
Option 4 ID : 630680993739

Q.11 Gender is a _____ construct.

- Ans
- 1. biological
 - 2. moral
 - 3. emotional
 - 4. social

Question ID : 630680255996
Option 1 ID : 630680993928
Option 2 ID : 630680993929
Option 3 ID : 630680993930
Option 4 ID : 630680993927

Q.12 The first indigenous preschool was set by:

- Ans 1. Tarabai Modak
 2. Gijubhai Badheka
 3. Mahatma Gandhi
 4. Jiddu Krishnamurti

Question ID : 630680255946
Option 1 ID : 630680993729
Option 2 ID : 630680993730
Option 3 ID : 630680993728
Option 4 ID : 630680993727

Q.13 Sensitivity to the feelings of other people and ability to tune into their emotions, is known as:

- Ans 1. emotional intelligence
 2. emotional maturity
 3. empathy
 4. emotional literacy

Question ID : 630680255936
Option 1 ID : 630680993687
Option 2 ID : 630680993688
Option 3 ID : 630680993690
Option 4 ID : 630680993689

Q.14 Pragmatics deals with:

- Ans 1. the rules of language for conversation and social situations
 2. the smallest units of meanings that are formed to make signs/words
 3. chatting about the weather, sharing what happened yesterday, or completing routine tasks
 4. the meaning of words and combination of words in a language

Question ID : 630680255958
Option 1 ID : 630680993777
Option 2 ID : 630680993776
Option 3 ID : 630680993778
Option 4 ID : 630680993775

Q.15 _____ is a neuro-psychological condition typically appearing in the first three years of life that significantly affects a person's ability to communicate, understand relationships and relate to others, and is frequently associated with unusual or stereotypical rituals or behaviours.

- Ans 1. Intellectual Disability
 2. Autism Spectrum Disorder
 3. Brain Impairment
 4. Specific Learning Disability

Question ID : 630680256011
Option 1 ID : 630680993989
Option 2 ID : 630680993988
Option 3 ID : 630680993990
Option 4 ID : 630680993987

Q.16 If a teacher wants to observe children on a specific day while they are engaged in an activity, which of the following is a good tool to use?

- Ans
- 1. Perception scale
 - 2. Rubrics
 - 3. Attitude scale
 - 4. Check-list

Question ID : 630680255984
Option 1 ID : 630680993881
Option 2 ID : 630680993879
Option 3 ID : 630680993882
Option 4 ID : 630680993880

Q.17 Observation, experimentation, analytical ability, abstract and divergent thinking, synthesis, logical reasoning, etc. are part of:

- Ans
- 1. spiritual development
 - 2. intellectual development
 - 3. emotional/mental development
 - 4. physical development

Question ID : 630680256008
Option 1 ID : 630680993977
Option 2 ID : 630680993976
Option 3 ID : 630680993975
Option 4 ID : 630680993978

Q.18 The vocabulary size of an average 6-year-old has been estimated at _____ words.

- Ans
- 1. 8,000
 - 2. 25,000
 - 3. 4,000
 - 4. 14,000

Question ID : 630680255960
Option 1 ID : 630680993784
Option 2 ID : 630680993786
Option 3 ID : 630680993783
Option 4 ID : 630680993785

Q.19 According to Erikson, the first crisis of the life is:

- Ans
- 1. autonomy vs. shame/doubt
 - 2. trust vs. mistrust
 - 3. identity vs. confusion
 - 4. intimacy vs. isolation

Question ID : 630680255993
Option 1 ID : 630680993917
Option 2 ID : 630680993915
Option 3 ID : 630680993916
Option 4 ID : 630680993918

Q.20 Early Childhood Care and Education (ECCE) deals with the education of children in the age group:

- Ans** 1. Below 6 years
 2. 6 to 14 years
 3. 6 to 11 years
 4. Below 3 years

Question ID : 630680255923
Option 1 ID : 630680993637
Option 2 ID : 630680993635
Option 3 ID : 630680993636
Option 4 ID : 630680993638

Section : Discipline5

Q.1 Making parents members of SMC, is an example of:

- Ans** 1. involvement in school governance and management
 2. families supporting other families
 3. schools, families and the community as partners
 4. families as activists

Question ID : 630680256019
Option 1 ID : 630680994021
Option 2 ID : 630680994022
Option 3 ID : 630680994020
Option 4 ID : 630680994019

Q.2 For developing the understanding about vegetation around the children, which one is best suitable method for a pre-primary class?

- Ans** 1. A video of various types of plants
 2. A visit of a nearby/school garden
 3. A discussion on types of plants
 4. Classroom presentation on plants

Question ID : 630680255972
Option 1 ID : 630680993832
Option 2 ID : 630680993834
Option 3 ID : 630680993833
Option 4 ID : 630680993831

Q.3 SEDGs stands for:

- Ans
- 1. Socially and Emotionally Disadvantaged Groups
 - 2. Socially and Economically Disabled Groups
 - 3. Socio-Emotional Development Guides
 - 4. Socially and Economically Disadvantaged Groups

Question ID : 630680256006
Option 1 ID : 630680993970
Option 2 ID : 630680993968
Option 3 ID : 630680993969
Option 4 ID : 630680993967

Q.4 In the Montessori method of education for children of the age three to six, which of the following is NOT a focus of teaching-learning?

- Ans
- 1. Collaborative intellectual exploration
 - 2. Task persistence
 - 3. Growth of functional independence
 - 4. Self-regulation

Question ID : 630680255978
Option 1 ID : 630680993857
Option 2 ID : 630680993856
Option 3 ID : 630680993855
Option 4 ID : 630680993858

Q.5 Which of the following is NOT a sign of Physical Health and Motor Development from three to six years?

- Ans
- 1. Demonstrating the use of body with proper sense of space and direction
 - 2. Developing coordination and control of large motor muscles
 - 3. Beginning to display personal hygiene skills
 - 4. Developing strength and coordination of small motor muscles

Question ID : 630680255929
Option 1 ID : 630680993662
Option 2 ID : 630680993659
Option 3 ID : 630680993661
Option 4 ID : 630680993660

Q.6 As per National Education Policy-2020, which of the following stages deals with Early Childhood Care and Education (ECCE)?

- Ans
- 1. Middle stage
 - 2. Secondary stage
 - 3. Foundation stage
 - 4. Preparatory stage

Question ID : 630680255930
Option 1 ID : 630680993665
Option 2 ID : 630680993666
Option 3 ID : 630680993663
Option 4 ID : 630680993664

Q.7 The ____ environment includes all the a-biotic factors around you such as air, water, soil, rocks and landforms, as well as the biotic elements consisting of plants, animals and micro-organisms.

- Ans
- 1. natural
 - 2. biological
 - 3. social
 - 4. socio-cultural

Question ID : 630680255969
Option 1 ID : 630680993821
Option 2 ID : 630680993819
Option 3 ID : 630680993820
Option 4 ID : 630680993822

Q.8 NEP 2020 aims at ensuring access to free, safe, high quality, developmentally-appropriate ECCE to all children by the year ____.

- Ans
- 1. 2022
 - 2. 2030
 - 3. 2035
 - 4. 2025

Question ID : 630680255945
Option 1 ID : 630680993723
Option 2 ID : 630680993725
Option 3 ID : 630680993726
Option 4 ID : 630680993724

Q.9 Children with ____ have an impairment in reading irregular words.

- Ans
- 1. developmental dyslexia
 - 2. deep dyslexia
 - 3. phonological dyslexia
 - 4. surface dyslexia

Question ID : 630680255964
Option 1 ID : 630680993800
Option 2 ID : 630680993799
Option 3 ID : 630680993802
Option 4 ID : 630680993801

Q.10 ____ is when groups of children are purposefully separated from the majority because of differences.

- Ans
- 1. Accommodation
 - 2. Segregation
 - 3. Impairment
 - 4. Inclusion

Question ID : 630680256021
Option 1 ID : 630680994029
Option 2 ID : 630680994028
Option 3 ID : 630680994030
Option 4 ID : 630680994027

Q.11 ____ is the term used to mean all the influences, other than genetics and biological programming.

- Ans 1. Nurture
 2. Biological programming
 3. Experience
 4. Nature

Question ID : 630680255932
Option 1 ID : 630680993673
Option 2 ID : 630680993671
Option 3 ID : 630680993674
Option 4 ID : 630680993672

Q.12 ____ is the sound we make as air from our lungs is pushed between vocal folds in our larynx, causing them to vibrate.

- Ans 1. Language
 2. Narration
 3. Speech
 4. Voice

Question ID : 630680255965
Option 1 ID : 630680993805
Option 2 ID : 630680993806
Option 3 ID : 630680993804
Option 4 ID : 630680993803

Q.13 Which of the following is NOT true about diversity?

- Ans 1. The term diversity is an antonym of uniformity.
 2. Differences in culture, language, gender, etc. are part of diversity.
 3. Diversity mainly focusses on differences based on physical development.
 4. Diversity should be treated as a resource in classroom.

Question ID : 630680255995
Option 1 ID : 630680993923
Option 2 ID : 630680993925
Option 3 ID : 630680993924
Option 4 ID : 630680993926

Q.14 According to Jerome Bruner, children should represent information and knowledge in their memory in three different but interrelated modes. Which of the following is NOT among those three?

- Ans 1. Performance based
 2. Image based
 3. Action based
 4. Language/symbol based

Question ID : 630680256009
Option 1 ID : 630680993982
Option 2 ID : 630680993980
Option 3 ID : 630680993979
Option 4 ID : 630680993981

Q.15 The ____ approach gave birth to a model of custodial care, causing extreme isolation and the marginalisation of people with disabilities.

- Ans
- 1. human rights
 - 2. functional
 - 3. charity
 - 4. bio-centric

Question ID : 630680255999
Option 1 ID : 630680993942
Option 2 ID : 630680993941
Option 3 ID : 630680993939
Option 4 ID : 630680993940

Q.16 Physical skills develop from the centre of the body, outward, toward the fingers and toes. This is called:

- Ans
- 1. expository pattern of development
 - 2. proximodistal pattern of development
 - 3. cephalocaudal pattern of development
 - 4. spiral pattern of development

Question ID : 630680255979
Option 1 ID : 630680993862
Option 2 ID : 630680993860
Option 3 ID : 630680993859
Option 4 ID : 630680993861

Q.17 At ECCE, the study of shapes should focus on the attributes and properties of:

- Ans
- 1. only three- dimensional shapes
 - 2. both two- and three- dimensional shapes
 - 3. shapes should not be introduced at ECCE level
 - 4. only two dimensional shapes

Question ID : 630680255954
Option 1 ID : 630680993760
Option 2 ID : 630680993761
Option 3 ID : 630680993762
Option 4 ID : 630680993759

Q.18 Which vitamin helps in red blood cell synthesis?

- Ans
- 1. Vitamin A
 - 2. Vitamin B12
 - 3. Vitamin D
 - 4. Vitamin C

Question ID : 630680255942
Option 1 ID : 630680993711
Option 2 ID : 630680993712
Option 3 ID : 630680993714
Option 4 ID : 630680993713

Q.19 Blindness refers to:

- Ans** ✓ 1. a visual acuity of 20/200 in the better eye after correction
- ✗ 2. when a person is 20/20 in the better eye after correction
- ✗ 3. a visual acuity of 20/60 in the better eye after correction
- ✗ 4. a visual acuity of 20/100 in the better eye after correction

Question ID : 630680256012

Option 1 ID : 630680993994

Option 2 ID : 630680993991

Option 3 ID : 630680993992

Option 4 ID : 630680993993

Q.20 In the ABC method for planning pre-school programmes, C stands for:

- Ans** ✓ 1. craft
- ✗ 2. cheerfulness
- ✗ 3. chair
- ✗ 4. child

Question ID : 630680256002

Option 1 ID : 630680993952

Option 2 ID : 630680993954

Option 3 ID : 630680993951

Option 4 ID : 630680993953

Sandeep Khatri