

**Question Booklet and Answer-Key
For Recruitment Test**

Post: NTT

Paper-I

Held on 31.01.2015 (Morning Session)

Adda247

1. हिन्दी की लिपि कौनसी है?
 - 1) चतुरनागरी
 - 2) मुंडा
 - 3) देवनागरी
 - 4) देवनागरी
2. 'पद' की लघुत्तम इकाई क्या है?
 - 1) शब्द
 - 2) पदावली
 - 3) अक्षर
 - 4) वाक्यांश
3. 'किरण' का पर्याय क्या है?
 - 1) मरीची
 - 2) मिरची
 - 3) मरीचि
 - 4) मरिची
4. निम्नलिखित में से 'हनुमान' का पर्यायवाची नहीं है-
 - 1) मारुति
 - 2) पवनसुत
 - 3) अंजनीपुत्र
 - 4) विनायक
5. 'कृतज्ञ' का विलोम क्या है?
 - 1) कठिन
 - 2) कृतधन
 - 3) कृपण
 - 4) कृतघन
6. 'जो बिना वेतन के काम करे' उसके लिए एक शब्द क्या है?
 - 1) आय
 - 2) अवधि
 - 3) अवैध
 - 4) अवैतनिक
7. 'स्पष्टीकरण के लिए दिया जाने वाला वक्तव्य' - एक शब्द क्या है?
 - 1) वक्तव्य
 - 2) विवृति
 - 3) आवृत्ति
 - 4) व्याख्यान
8. 'ठन ठन गोपाल' मुहावरे का क्या अर्थ है?
 - 1) कंगाल
 - 2) गोपाला
 - 3) ग्वाला
 - 4) धनवान
9. 'पर उपदेश कुशल बहुतेरे' का अर्थ है?
 - 1) बिना मांगे सलाह देना
 - 2) दूसरों की मानना
 - 3) दूसरों को उपदेश देना आसान समझना
 - 4) कार्य कुशल होना
10. हिन्दी भाषा में वचन कितने प्रकार के हैं?
 - 1) तीन
 - 2) चार
 - 3) पांच
 - 4) दो
11. सही वर्तनी वाले शब्द का चयन कीजिए?
 - 1) परीक्षा
 - 2) परिक्षा
 - 3) पिरक्षा
 - 4) पृरक्षा
12. शुद्ध शब्द का चयन करें?
 - 1) संन्यासी
 - 2) सन्यासी
 - 3) सनयासी
 - 4) संन्यसी
13. संस्कृत के ऐसे शब्द जिन्हें हम हिन्दी में ज्यों का त्यों प्रयोग करते हैं?
 - 1) तद्भव
 - 2) आगत
 - 3) तत्सम
 - 4) तत्सम
14. निम्नलिखित में से सर्वनाम क्या है?
 - 1) किसी व्यक्ति का नाम
 - 2) संज्ञा के स्थान पर प्रयुक्त होने वाला शब्द
 - 3) किसी काल का नाम
 - 4) कार्य करने वाला
15. 'गायक' का सन्धि-विच्छेद क्या है?
 - 1) गा+अक
 - 2) गे+यक
 - 3) गै+अक
 - 4) गे+क
16. शुद्ध वाक्य का चयन कीजिए ?
 - 1) सीता का चरित्र अच्छा है।
 - 2) सीता की चरित्र अच्छी है।
 - 3) सीता की चरित्र अच्छा है।
 - 4) सीता का अच्छा है चरित्र।
17. 'आप' का बहुवचन होगा -
 - 1) हम
 - 2) वे
 - 3) आप लोग
 - 4) आपा
18. 'हिमालय से गंगा निकलती है' - वाक्य किस कारक का है?
 - 1) अपादान कारक
 - 2) करण कारक
 - 3) कर्त्ता कारक
 - 4) सम्प्रदान कारक
19. निम्नलिखित में से कौन सा शब्द शुद्ध है?
 - 1) उषा
 - 2) ऊषा
 - 3) आधीन
 - 4) व्यावसायिक

20. पुलिंग-स्त्रीलिंग युग्म में से कौन सा विषम है?

- 1) हाथी - हथिनी 2) प्रियतम - प्रियतमा 3) लेखक - रचनाकार 4) ठाकुर - ठकुराइन

Directions (Q. No.21-24): Mark the correct prepositions to be filled in the gaps.

21. You have no claim _____ this post.

- 1) for 2) of 3) on 4) to

22. All of us rejoiced _____ his brilliant success.

- 1) at 2) on 3) from 4) of

23. Have you some acquaintance _____ the Minister?

- 1) from 2) to 3) with 4) of

24. I advised him much but _____ no purpose.

- 1) from 2) to 3) on 4) in

Directions (Q. No.25-28): Mark the correct synonym of the given word.

25. Dawdle

- 1) hurry 2) summarize 3) linger 4) rectify

26. Callow

- 1) experienced 2) immature 3) callous 4) cruel

27. Choleric

- 1) irritable 2) affable 3) cruel 4) indiscriminate

28. Insouciance

- 1) criticism 2) immediacy 3) sharp 4) nonchalance

Directions (Q.No. 29-32): Mark the correct antonym of the given word.

29. Pusillanimous

- 1) timid 2) brave 3) timorous 4) indifferent

30. Quotidian

- 1) ritualistic 2) ethical 3) unusual 4) trite

31. Incendiary

- 1) big 2) attractive 3) alluring 4) conciliatory

32. Outré

- 1) ordinary 2) weird 3) clear 4) synthesis

Directions (Q.No. 33-36): Mark the underlined part of the sentence that has an error.

33. I have sold my old furnitures.

- 1) 2) 3) 4)

34. Sushil ran a two miles race.

- 1) 2) 3) 4)

35. Thousand of men and women attended the meeting.

- 1) 2) 3) 4)

36. He is a man of words.

- 1) 2) 3) 4)

Directions (Q.No. 37-40): Mark the correct meaning of a given word.

37. Anachronous

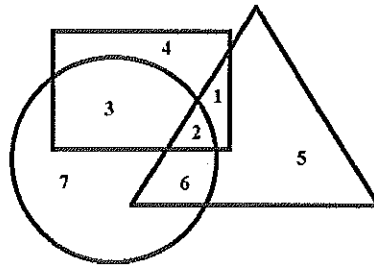
- 1) out of time 2) in consonance with time
3) a poisonous reptile 4) acute shortage

38. Exodontist

- 1) one who extracts teeth 2) one who breaks bones
3) one who is aggressive 4) one who is very kind

39. Metronome
 1) an instrument to measure musical time
 2) an instrument to measure pressure
 3) an instrument to check the weather-conditions
 4) an instrument to measure body temperature
40. Squeamish
 1) easily upset 2) militant 3) coward 4) brave
41. The national calendar of India is based on _____
 1) Greek Era 2) Vikram Era 3) Saka Era 4) Mughal Era
42. The most thickly populated state of India is _____
 1) Uttar Pardesh 2) Bihar 3) Maharashtra 4) Andhra Pradesh
43. The total length of the coastline of India including the coastline of the mainland, Lakshadweep Islands and Andaman and Nicobar Island is
 1) 7,516.6 km. 2) 7403.3 km. 3) 7253 km. 4) 6578 km.
44. The Govt. of India has decided to raise the height of the Sardar Sarovar Dam by:
 1) About 14 meters 2) About 15 meters
 3) About 17 meters 4) About 22 meters
45. Oscar Award 2014 for the Best Picture was given to:
 1) 12 years a Slave 2) Gravity 3) Blue Jasmine 4) Frozen
46. Telangana became
 1) the 28th State of India 2) the 29th State of India
 3) the 30th State of India 4) the 27th State of India
47. The Child Sex Ratio for the age group of 0-6 years as per Census 2011 in India is
 1) 944 girls per thousand boys 2) 934 girls per thousand boys
 3) 927 girls per thousand boys 4) 914 girls per thousand boys
48. Which of the following films was adjudged the Best feature film in the 61st National Film Award?
 1) Ship of Theseus 2) Bhaag Milkha Bhaag 3) Jolly LL.B. 4) Liar's Dice
49. The prestigious 45th Dada Saheb Phalke Award was given to:
 1) Manoj Kumar 2) Asha Bhosle
 3) Prem Chopra 4) Sampooran Singh Kalra "Gulzar"
50. Prime Minister Narendra Modi launched the "Swachh Bharat, or Clean India Mission" on:
 1) 15 August 2014 2) 2 October 2014 3) 14 November 2014 4) 26 July 2014
51. The only country in world with legislated Corporate Social Responsibility (CSR) is
 1) Spain 2) USA 3) India 4) Sweden
52. The currency of Thailand is
 1) Baht 2) Thai Rupaya 3) Manat 4) Dong
53. The United Nations came into existence in
 1) 1946 2) 1947 3) 1945 4) 1950
54. Kailash Satyarthi has been associated with the movement called
 1) "Jangal Bachao Andolan" 2) "Bachapan Bachao Andolan"
 3) "Nasha Tyago Andolan" 4) "Stree Shakti Andolan"
55. Which of the following countries is the fastest growing emitter of greenhouse gases in the World?
 1) North Korea 2) Japan 3) South Korea 4) China

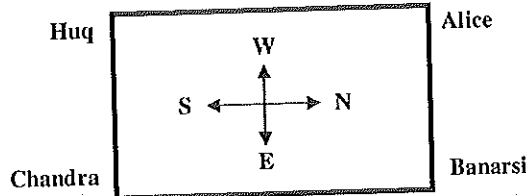
56. Which of the following leaders of Indian freedom struggle did write the famous book – “Glimpses of World History”?
- 1) Jawaharlal Nehru 2) M.K. Gandhi
3) Rajendra Prasad 4) Jayaprakash Narayan
57. “India Wins Freedom” was written by:
- 1) Rajendra Prasad 2) J.L. Nehru 3) Narendra Dev 4) Abul Kalam Azad
58. Chlorofluorocarbons are broken down in the atmosphere by
- 1) nitrogen dioxide 2) Ozone 3) Ultraviolet light 4) iron
59. Hiuen Tsang, the Chinese traveller visited India during the reign of
- 1) Ashoka 2) Chandragupta Maurya 3) Samudragupta 4) Harshavardhana
60. A solid needle placed horizontally on the surface of water floats because of
- 1) Capillary Action 2) Surface Tension 3) Cohesion 4) adhesion
61. Complete the series
7, 11, 13, 17, ?, 23, 25
- 1) 19 2) 20 3) 21 4) 18
62. From the given four alternative words, select the word which cannot be formed with letters of given word. **Given word: INTELLIGENCE**
- 1) NEGLECT 2) GENTLE 3) TINGLE 4) TILLAGE
63. Replace the question mark (?) with one out of given alternatives.
8 : 81 :: 64 : ?
- 1) 125 2) 137 3) 525 4) 625
64. The given set of words has relation in some way, select the set of words among following alternatives that has same relation
Given set - Carnivorous : Tiger : Wolf
- 1) Worker : Master : Manager 2) Mango : Banana : Fruit
3) Student : Boy : Girl 4) Cat : Cow : Milk
65. Complete the matrix
- | | | |
|-----|----|-----|
| 2Z | 2Y | 5X |
| 20X | ? | 80Y |
| 10Z | 4X | 16Y |
- 1) 6Y 2) 8Z 3) 100Z 4) 18Z
66. In the given Fig. the circle represents rural population, the square represents educated youth and the triangle represents employed people.



Which regions represent the following respectively?

- (i) some rural educated youth are employed
(ii) some rural people are neither educated nor employed
(iii) some rural educated youths are not employed
(iv) some employed people are neither educated nor belong to rural areas.
- 1) 2, 7, 3, 5 2) 1, 2, 7, 3 3) 2, 7, 6, 3 4) 2, 7, 4, 5

67. In an open ground, Maithli moves 35m toward east and turns right and walks 15m and again turns right and walks 15m and then stops. What is the minimum distance between starting point and the end point?
 1) 20m 2) 25m 3) 30m 4) 35m
68. Miss Alice, Mr. Banarsi, Miss Chandra and Mr. Huq are positioned at four corners of a square plot as shown in Fig.

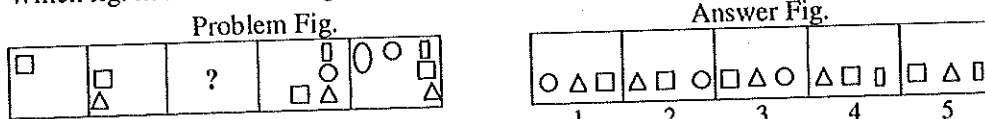


- The girls move in clockwise and boys move in anti-clockwise direction along the sides. Each cover half the side. Which of the following statements is correct?
 1) Alice and Chandra are standing at one point
 2) Alice and Huq are standing at one point
 3) Banarsi and Chandra are standing at one point
 4) Banarsi and Alice are standing at one point
69. Which one of following words comes in the middle according dictionary position?
 (i) Leprosy (ii) Language (iii) Lesson (iv) Larguid (v) Lessen
 1) (i) 2) (ii) 3) (iii) 4) (v)
70. Find out the odd one:
 1) 2:9 2) 4:65 3) 6:127 4) 1:2
71. If the positions of 1st and 5th digits of the sequence 9 3 8 1 2 6 4 7 5 are interchanged. Similarly the positions of 2nd and 6th digits are interchanged and so on. Which of the following will be the 7th from the left end?
 1) 3 2) 8 3) 4 4) 7
72. If CENPBDSUNPQS stands for DOCTOR. What is the middle letter of the word coded as MOTUQSRTDF?
 1) R 2) S 3) E 4) O

Study the following information and answer Q.Nos. 73-74

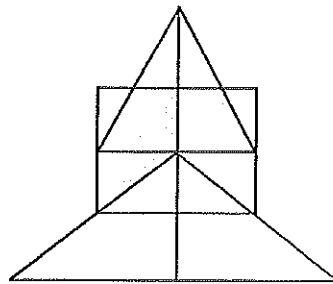
Five ladies Madhu, Arti, Kanan, Rekha and Suman are married to Mahesh, Yogesh, Ravi, Mukesh and Gyan not necessarily in same order (i) First letters of names of couple are not the same (ii) Arti and Kanan are not married to Yogesh. Suman is not married to Mukesh (iii) Yogesh and Gyan are not Suman's or Madhu's husband (iv) Kanan's and Rekha's husbands do not start with 'M'.

73. Who is Ravi's wife?
 1) Madhu 2) Arti 3) Kanan 4) Rekha
74. Which one of the following statements is wrong?
 1) Gyan is married to Kanan 2) Suman is not Mukesh's wife
 3) Arti is not Ravi's wife 4) Rekha is not Yogesh's wife
75. Which fig. in the Answer Figs. replaces the question mark (?) in problem fig.?




- 1) 1 2) 2 3) 3 4) 5

76. How many triangles are in the adjacent fig.?



- 1) 12 2) 15 3) 18 4) 21
77. If the total number of dots on opposite faces of a cubical dice is always 7, find which of following figs. is correct.



- 1) 2) 3) 4)
78. A father tells his son, "I was of your present age when you were born." If the father is 64 years old now what will be the son's age after 10 years?
1) 42 2) 44 3) 38 4) 50
79. For every correct answer, a student score 1 mark and for every wrong answer he loses $\frac{1}{3}$ marks. He attempted 108 questions and his net score was zero. How many questions he answered wrong?
1) 30 2) 81 3) 85 4) 56
80. If two eggs boil together in one minute, in how much time will 10 eggs boil if put together in same pan?
1) 5 min. 2) 10 min. 3) 2 min. 4) 1 min.
81. The "Lecture Method" is an effective way to
1) stimulate participation of learners 2) assess understanding of learners
3) introduce new information/concepts 4) introduce a new skill
82. A teacher does contribute to the development of society
1) By paying tax 2) By doing his or her job
3) By helping the needy and the poor 4) By shaping the minds of the children/students
83. Who, of the following, did advocate the "Discovery Method" of teaching?
1) Jerome Bruner 2) B.F. Skinner 3) H.E. Armstrong 4) A.P. Rowling
84. The founder of the "Heuristic Method of Teaching" is
1) B.F. Skinner 2) H.E. Armstrong 3) R.A. Ballord 4) James Scott
85. As a teacher, what will be your response if students do not attend your class?
1) Try and analyse the reasons for their absence and try to rectify the same.
2) Incorporate more interesting strategies of teaching
3) Criticize students for not attending the class
4) Counsel the students regarding their attitude positively and calmly
86. The main role of a teacher is synonymous with that of a
1) Manager 2) Leader 3) Planner 4) Facilitator

87. The most important component of effective teaching is to
- 1) create a disciplined classroom environment
 - 2) teachers' commitment and integrity
 - 3) teachers' efforts to foster learning and understand among pupils
 - 4) take attendance regularly
88. The most important objective of teaching is to
- 1) cover the prescribed syllabus
 - 2) facilitate students when it comes to the construction of knowledge and understanding
 - 3) Create a relaxed teacher-and-learning environment
 - 4) Take classes regularly
89. Ultimate goal of teaching is to
- 1) facilitate students to score high marks/grades in the examination
 - 2) create lifelong learners
 - 3) cover the syllabus thoroughly
 - 4) help the students find suitable job placements
90. Success of the teaching profession depends upon
- 1) growth of both learners and teachers through the teaching learning process
 - 2) finding opportunities for personal growth
 - 3) the adoption of the policy to keep students happy
 - 4) the strengthening of the relationship with school relationship
91. In every domain of education, the teachers are expected to be well versed with
- 1) recent research work in their respective fields of interest and knowledge
 - 2) knowledge of their respective subjects
 - 3) significant social concerns affecting education
 - 4) significant pedagogical issues
92. Learning can be defined as
- | | |
|--|---------------------------------------|
| 1) inculcation of knowledge | 2) acquisition of a set of new skills |
| 3) modification in behavior and thinking | 4) enhancement of personality |
93. Technology is essential in education primarily because
- 1) it makes teaching effective and efficient
 - 2) it is adopted by elite institutions
 - 3) it maintains high standards of education
 - 4) it makes teaching less onerous
94. Questioning, in teaching, is most useful in
- 1) cramming or rote memorization of facts by the learners
 - 2) maintaining discipline among the learners
 - 3) ensuring active participation of learners in the class
 - 4) the preparation of the learners for various examinations
95. In teaching, the most effective method of evaluation is
- 1) conducting annual examination
 - 2) maintaining cumulative records of students
 - 3) semester system evaluation
 - 4) continuous and comprehensive evaluation throughout the term
96. If a teacher possesses the knowledge of human psychology, she/he can
- 1) flatter the superiors at the work-place
 - 2) make friends in the school
 - 3) make her/his students politically conscious
 - 4) properly understand the behavior of learners

97. The ultimate objective of teaching is to:
- 1) Make students thinking learners
 - 2) Give content for knowledge
 - 3) Cover the prescribed syllabus in time
 - 4) Dictate notes to students
98. A teacher can make her/his students responsible for their learning by
- 1) giving them assignments
 - 2) electing group leaders in the classroom
 - 3) asking the students to present their points of view and choices of arguments in a constructive way
 - 4) classifying them in merit-based categories
99. In order to assess the progress of her/his students, a teacher is expected to
- 1) conduct examination regularly
 - 2) systematically maintain the record of students' responses and learning behaviours
 - 3) ask the students to write the feedback
 - 4) ask the students to examine others critically
100. Which of the following is not related to effective teaching?
- 1) Teaching with passion
 - 2) Use of the variety of teaching resources
 - 3) Maintaining high discipline in the class
 - 4) Providing encouragement to students to learn from their socio-political environment



Key for Nursery Teacher Paper-I (31.1.2015)

Q.No.	Ans.	Q.No.	Ans.	Q.No.	Ans.	Q.No.	Ans.
1	4	26	2	51	3	76	2
2	3	27	1	52	1	77	3
3	3	28	4	53	3	78	1
4	4	29	2	54	2	79	2
5	2	30	3	55	4	80	4
6	4	31	4	56	1	81	3
7	2	32	1	57	4	82	4
8	1	33	4	58	3	83	1
9	3	34	3	59	4	84	2
10	4	35	1	60	2	85	1
11	1	36	4	61	1	86	4
12	1	37	1	62	4	87	3
13	3	38	1	63	4	88	2
14	2	39	1	64	3	89	2
15	3	40	1	65	2	90	1
16	1	41	3	66	1	91	2
17	3	42	2	67	2	92	3
18	1	43	1	68	4	93	1
19	1	44	3	69	1	94	3
20	3	45	1	70	3	95	4
21	4	46	2	71	2	96	4
22	1	47	4	72	1	97	1
23	3	48	1	73	1	98	3
24	2	49	4	74	4	99	2
25	3	50	2	75	3	100	4