



GOVT. OF NCT OF DELHI  
Delhi Subordinate Services Selection Board  
FC-18, Institutional Area, Karkardooma, Delhi - 110092.  
[www.dsssb.delhigovt.nic.in](http://www.dsssb.delhigovt.nic.in)

Participant ID	
Participant Name	
Test Center Name	iON Digital Zone iDZ 1 GT Karnal Road
Test Date	30/03/2024
Test Time	4:30 PM - 6:30 PM
Subject	Librarian

Section : General intelligence and Reasoning Ability

Q.1 A is the father of B. B is the sister of C. C is the mother of D. D is the wife of E. How many male members are there?

- Ans
- 1. 3
  - 2. 2
  - 3. 1
  - 4. 4

Question ID : 630680672183  
Option 1 ID : 6306802632286  
Option 2 ID : 6306802632287  
Option 3 ID : 6306802632284  
Option 4 ID : 6306802632285

Q.2 Consider the string given below made up of letters.  
BEUYDIJMYGHNWDZJAUSFGDHHDEOU  
How many vowels are there immediately followed by consonant?

- Ans
- 1. 3
  - 2. 4
  - 3. 5
  - 4. 6

Question ID : 630680672182  
Option 1 ID : 6306802632282  
Option 2 ID : 6306802632281  
Option 3 ID : 6306802632280  
Option 4 ID : 6306802632283

**Q.3** Eight persons A, B, C, D, E, F, G and H are seated around a circular table facing towards the centre. E is second to the left of A. G is third to the left of E. H is to the immediate right of E. D is second to the right of H. B is third to the right of F. How many persons sits between A and F, when counted from left of A?

- Ans**
- 1. 5
  - 2. 4
  - 3. None
  - 4. 1

Question ID : 630680672177  
Option 1 ID : 6306802632263  
Option 2 ID : 6306802632262  
Option 3 ID : 6306802632260  
Option 4 ID : 6306802632261

**Q.4** In the following question, select the odd letter/letters from the given alternatives.

- Ans**
- 1. WYV
  - 2. XZV
  - 3. RTP
  - 4. TVR

Question ID : 630680672189  
Option 1 ID : 6306802632309  
Option 2 ID : 6306802632308  
Option 3 ID : 6306802632311  
Option 4 ID : 6306802632310

**Q.5** In the following question, four letter pairs are given. The letters on left side of (–) is related to the letters on the right side of (–) with some Logic/Rule/Relation. Three are similar on basis of same Logic/Rule/Relation. Select the odd one out from the given alternatives.

- Ans**
- 1. AST – BUW
  - 2. GUI – HWL
  - 3. KLO – LNR
  - 4. VJN – XLP

Question ID : 630680672190  
Option 1 ID : 6306802632313  
Option 2 ID : 6306802632312  
Option 3 ID : 6306802632314  
Option 4 ID : 6306802632315

**Q.6** Select the option that is related to the fifth number cluster in the same way as the second number cluster is related to the first number cluster and fourth number cluster is related to third number cluster. (NOTE: Operations should be performed on the whole numbers, without breaking down the numbers into its constituent digits. E.g.13 – Operations on 13 such as adding /subtracting /multiplying etc. to 13 can be performed. Breaking down 13 into 1 and 3 and then performing mathematical operations on 1 and 3 is not allowed)

81 : 162 :: 72 : 144 :: 65 : ?

- Ans**
- 1. 131
  - 2. 133
  - 3. 130
  - 4. 132

Question ID : 630680672196  
Option 1 ID : 6306802632338  
Option 2 ID : 6306802632336  
Option 3 ID : 6306802632339  
Option 4 ID : 6306802632337

**Q.7** In a certain code language, 'ADEQUATE' is written as '12351021262022', 'CATHOLIC' is written as '32620191515924'. What is the code for 'DISORDER' in that code language?

- Ans**
- 1. 4181912172359
  - 2. 4191812182359
  - 3. 4181912182259
  - 4. 4181912182359

Question ID : 630680672181  
Option 1 ID : 6306802632276  
Option 2 ID : 6306802632279  
Option 3 ID : 6306802632278  
Option 4 ID : 6306802632277

**Q.8** In the following question below are given some statements followed by some conclusions based on those statements. Taking the given statements to be true even if they seem to be at variance from commonly known facts. Read all the conclusions and then decide which of the given conclusion logically follows the given statements.

Statements:

- I. All A are K.
- II. Some L are K.

Conclusion:

- I. Some A are K.
- II. Some L are A.

- Ans**
- 1. Both conclusions I and II follows
  - 2. Only conclusion II follows
  - 3. Only conclusion I follows
  - 4. Neither conclusion follows

Question ID : 630680672185  
Option 1 ID : 6306802632294  
Option 2 ID : 6306802632293  
Option 3 ID : 6306802632292  
Option 4 ID : 6306802632295

**Q.9** A certain number of persons sitting in a row facing north. 17 persons are there between M and N, N sits on right extreme end. O is third to the left of M and third from the left end. P is 11<sup>th</sup> from left end. Which of the following statements is NOT correct?

I. Four people sits between M and P.

II. N is to the left of P.

**Ans**  1. Neither I nor II

2. Only I

3. Only II

4. Both I and II

Question ID : 630680672178

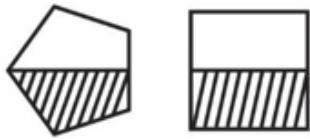
Option 1 ID : 6306802632267

Option 2 ID : 6306802632264

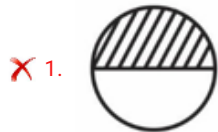
Option 3 ID : 6306802632265

Option 4 ID : 6306802632266

**Q.10** Which figure is similar to the given figures?



**Ans**



Question ID : 630680672192

Option 1 ID : 6306802632320

Option 2 ID : 6306802632323

Option 3 ID : 6306802632322

Option 4 ID : 6306802632321

**Q.11** In a certain code language, 'REMOVE' is written as 'PCKLSB'. What is the code for 'SHOULD' in that code language?

- Ans**
- 1. QFMSJD
  - 2. QFMRIA
  - 3. QFMRJB
  - 4. QFMRIB

Question ID : 630680672180  
Option 1 ID : 6306802632275  
Option 2 ID : 6306802632273  
Option 3 ID : 6306802632274  
Option 4 ID : 6306802632272

**Q.12** By interchanging the given two signs and two numbers (not digits) which of the following equation will be correct?

– and ×, 9 and 3

- Ans**
- 1.  $5 - 3 \times 8 \div 4 + 9 = 22$
  - 2.  $6 \div 3 \times 9 + 7 - 4 = 0$
  - 3.  $8 \times 4 \div 2 - 9 + 3 = 11$
  - 4.  $5 \times 9 - 3 + 8 \div 2 = -8$

Question ID : 630680672193  
Option 1 ID : 6306802632324  
Option 2 ID : 6306802632326  
Option 3 ID : 6306802632325  
Option 4 ID : 6306802632327

**Q.13** Select the option that is related to the fourth letter-number cluster in the same way as the first letter-number cluster is related to the second letter-number cluster and fifth letter-number cluster is related to sixth letter-number cluster.

(NOTE: Operations should be performed on the whole numbers, without breaking down the numbers into its constituent digits. E.g. 13 – Operations on 13 such as adding /subtracting /multiplying etc. to 13 can be performed. Breaking down 13 into 1 and 3 and then performing mathematical operations on 1 and 3 is not allowed)

FL81 : HM88 :: ? : VJ24 :: RI9 : TJ16

- Ans**
- 1. SH44
  - 2. WL17
  - 3. TI17
  - 4. UG44

Question ID : 630680672188  
Option 1 ID : 6306802632307  
Option 2 ID : 6306802632304  
Option 3 ID : 6306802632305  
Option 4 ID : 6306802632306

**Q.14** In the following question below are given some statements followed by some conclusions based on those statements. Taking the given statements to be true even if they seem to be at variance from commonly known facts. Read all the conclusions and then decide which of the given conclusion logically follows the given statements.

Statements:

- I. Some S are T.
- II. Some V are T.
- III. Some Q are S.

Conclusions:

- I. Some S are Q.
- II. Some T are not V.
- III. No V is Q.

- Ans**
- 1. Only conclusion III follows
  - 2. Only conclusion I follows
  - 3. Neither conclusion follows
  - 4. Only conclusion II follows

Question ID : 630680672186  
Option 1 ID : 6306802632298  
Option 2 ID : 6306802632296  
Option 3 ID : 6306802632299  
Option 4 ID : 6306802632297

**Q.15** 'A @ B' means 'A is the mother of B', 'A \* B' means 'A is the father of B', 'A S B' means 'A is the son of B', 'A # B' means 'A is the daughter of B'. If X S Y @ R # Z \* T, then how is R related to T?

- Ans**
- 1. Sister
  - 2. Father's sister
  - 3. Brother
  - 4. Daughter

Question ID : 630680672184  
Option 1 ID : 6306802632288  
Option 2 ID : 6306802632290  
Option 3 ID : 6306802632289  
Option 4 ID : 6306802632291

Q.16 In the following question, select the missing number from the given series.

113, 105, 97, 89, 81, ?

- Ans
- 1. 71
  - 2. 72
  - 3. 73
  - 4. 74

Question ID : 630680672195  
Option 1 ID : 6306802632332  
Option 2 ID : 6306802632333  
Option 3 ID : 6306802632334  
Option 4 ID : 6306802632335

Q.17 Select that missing pair (Fifth letter cluster : Sixth letter cluster) which is related in the same way as the first letter cluster is related to the second letter cluster and third letter cluster is related to fourth letter cluster.

QR : OP :: KL : LI :: ?

- Ans
- 1. ZX : XV
  - 2. PR : NO
  - 3. BI : DK
  - 4. TP : RR

Question ID : 630680672187  
Option 1 ID : 6306802632302  
Option 2 ID : 6306802632303  
Option 3 ID : 6306802632300  
Option 4 ID : 6306802632301

Q.18 In the following question, select the missing number from the given series.

119, 122, 125, 128, 131, ?

- Ans
- 1. 131
  - 2. 134
  - 3. 139
  - 4. 138

Question ID : 630680672194  
Option 1 ID : 6306802632329  
Option 2 ID : 6306802632330  
Option 3 ID : 6306802632331  
Option 4 ID : 6306802632328

**Q.19** From the given option figures, select the one in which the question figure is hidden/embedded.



**Ans**

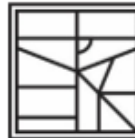
1.




2.



3.



4.



Question ID : 630680672191  
Option 1 ID : 6306802632319  
Option 2 ID : 6306802632316  
Option 3 ID : 6306802632318  
Option 4 ID : 6306802632317

**Q.20** Seven friends namely – P1, P2, P3, P4, P5, P6 and P7 are living in a building of seven floors, lowermost floor is numbered 1, floor above it is numbered 2 and so on till the top-most floor which is numbered 7. Each person lives on a single floor. P1 lives on a floor numbered four. No one lives below P7. Number of person who live between P6 and P1 are same as the number of persons who live between P1 and P5. P2 lives four floor above P4. P6 lives above P4, but not immediately above. P2 doesn't live on top floor. Who lives on floor numbered three?

**Ans**  1. P5

2. P1

3. P7

4. P6

Question ID : 630680672179  
Option 1 ID : 6306802632268  
Option 2 ID : 6306802632271  
Option 3 ID : 6306802632269  
Option 4 ID : 6306802632270



Q.1 Kiyana Parihar, who was in news in December 2023, is associated with which of the following sports?

- Ans
- 1. Cycling
  - 2. Swimming
  - 3. Squash
  - 4. Chess

Question ID : 630680672510  
Option 1 ID : 6306802633611  
Option 2 ID : 6306802633608  
Option 3 ID : 6306802633610  
Option 4 ID : 6306802633609

Q.2 Which of the following festivals is not associated with Indian state of Rajasthan?

- Ans
- 1. Desert Festival
  - 2. Losar
  - 3. Sufi Spirit Festival
  - 4. Camel Fair

Question ID : 630680672521  
Option 1 ID : 6306802633654  
Option 2 ID : 6306802633652  
Option 3 ID : 6306802633653  
Option 4 ID : 6306802633655

Q.3 Which of the following Peak of the Himalaya located in India?

- Ans
- 1. Mt. Everest
  - 2. Makalu
  - 3. Nanda Devi
  - 4. Annapurna

Question ID : 630680672522  
Option 1 ID : 6306802633656  
Option 2 ID : 6306802633657  
Option 3 ID : 6306802633659  
Option 4 ID : 6306802633658

Q.4 When is the National Technology Day celebrated every year in India?

- Ans
- 1. 29<sup>th</sup> August
  - 2. 8<sup>th</sup> March
  - 3. 11<sup>th</sup> May
  - 4. 22<sup>nd</sup> February

Question ID : 630680672513  
Option 1 ID : 6306802633623  
Option 2 ID : 6306802633621  
Option 3 ID : 6306802633622  
Option 4 ID : 6306802633620

Q.5 Which of the following parts of the Indian Constitution deals with the administration of Union Territories?

- Ans
- 1. Part II
  - 2. Part IV
  - 3. Part IX
  - 4. Part VIII

Question ID : 630680672527  
Option 1 ID : 6306802633676  
Option 2 ID : 6306802633677  
Option 3 ID : 6306802633679  
Option 4 ID : 6306802633678

Q.6 Which of the following Indian languages does not belong to the Indo-Aryan languages?

- Ans
- 1. Gujarati
  - 2. Tamil
  - 3. Punjabi
  - 4. Hindi

Question ID : 630680672520  
Option 1 ID : 6306802633648  
Option 2 ID : 6306802633651  
Option 3 ID : 6306802633649  
Option 4 ID : 6306802633650

Q.7 Which of the following ministries had launched scheme for residential education for students in high schools in targeted areas (SHRESHTA)?

- Ans
- 1. Ministry of Human Resource Development
  - 2. Ministry of Social Justice & Empowerment
  - 3. Ministry of Home Affairs
  - 4. Ministry of Women & Child Development

Question ID : 630680672512  
Option 1 ID : 6306802633619  
Option 2 ID : 6306802633617  
Option 3 ID : 6306802633616  
Option 4 ID : 6306802633618

Q.8 Vijayanagara kings claimed to rule on behalf of the god \_\_\_\_\_.

- Ans
- 1. Vishnu
  - 2. Virupaksha
  - 3. Ganesha
  - 4. Indra

Question ID : 630680672519  
Option 1 ID : 6306802633645  
Option 2 ID : 6306802633646  
Option 3 ID : 6306802633647  
Option 4 ID : 6306802633644

Q.9 Which is the only country in the world that has both tigers and lions?

- Ans
- 1. Thailand
  - 2. China
  - 3. South Africa
  - 4. India

Question ID : 630680672523  
Option 1 ID : 6306802633663  
Option 2 ID : 6306802633662  
Option 3 ID : 6306802633660  
Option 4 ID : 6306802633661

Q.10 Which of the following is NOT a source of vitamin D?

- Ans
- 1. Eggs
  - 2. Liver
  - 3. Fish
  - 4. Mango

Question ID : 630680672528  
Option 1 ID : 6306802633680  
Option 2 ID : 6306802633682  
Option 3 ID : 6306802633681  
Option 4 ID : 6306802633683

Q.11 Which of the following Mughal emperors followed the administration of Sher Shah?

- Ans
- 1. Akbar
  - 2. Shah Jahan
  - 3. Jahangir
  - 4. Humayun

Question ID : 630680672518  
Option 1 ID : 6306802633641  
Option 2 ID : 6306802633643  
Option 3 ID : 6306802633642  
Option 4 ID : 6306802633640

Q.12 Which of the following Articles of the Indian Constitution provides that "There shall be a President of India"?

- Ans
- 1. Article 48
  - 2. Article 63
  - 3. Article 76
  - 4. Article 52

Question ID : 630680672526  
Option 1 ID : 6306802633672  
Option 2 ID : 6306802633674  
Option 3 ID : 6306802633675  
Option 4 ID : 6306802633673

Q.13 Emissions Gap Report 2023 was published by which of the following organizations?

- Ans
- 1. World Wide Fund (WWF)
  - 2. Wetlands International
  - 3. International Monetary Fund (IMF)
  - 4. United Nations Environment Programme (UNEP)

Question ID : 630680672511  
Option 1 ID : 6306802633613  
Option 2 ID : 6306802633615  
Option 3 ID : 6306802633614  
Option 4 ID : 6306802633612

Q.14 In which of the following years Regional Rural Banks (RRBs) were established in India?

- Ans
- 1. 1992
  - 2. 1982
  - 3. 1975
  - 4. 1969

Question ID : 630680672515  
Option 1 ID : 6306802633631  
Option 2 ID : 6306802633630  
Option 3 ID : 6306802633629  
Option 4 ID : 6306802633628

Q.15 First Singh Sabhas were formed at which of the following place?

- Ans
- 1. Amritsar
  - 2. Delhi
  - 3. Jalandhar
  - 4. Multan

Question ID : 630680672517  
Option 1 ID : 6306802633636  
Option 2 ID : 6306802633639  
Option 3 ID : 6306802633638  
Option 4 ID : 6306802633637

Q.16 Which of the following is/are the major science objectives of Aditya-L1 mission?

I. Study of Solar upper atmospheric (chromosphere and corona) dynamics.

II. Magnetic field topology and magnetic field measurements in the solar corona.

Ans  1. Only I

2. Neither I nor II

3. Both I and II

4. Only II

Question ID : 630680672514  
Option 1 ID : 6306802633624  
Option 2 ID : 6306802633627  
Option 3 ID : 6306802633626  
Option 4 ID : 6306802633625

Q.17 Which of the following fundamental duties was added to the Indian Constitution by the 86th Constitutional Amendment Act?

Ans  1.

Who is a parent or guardian to provide opportunities for education to his child or, as the case may be, ward between the age of six and fourteen years.

2.

To uphold and protect the sovereignty, unity and integrity of India.

3.

To value and preserve the rich heritage of our composite culture.

4. To safeguard public property and to abjure violence.

Question ID : 630680672525  
Option 1 ID : 6306802633668  
Option 2 ID : 6306802633671  
Option 3 ID : 6306802633669  
Option 4 ID : 6306802633670

Q.18 Which country is called the country of 'winds'?

Ans  1. China

2. South Africa

3. India

4. Denmark

Question ID : 630680672529  
Option 1 ID : 6306802633686  
Option 2 ID : 6306802633685  
Option 3 ID : 6306802633687  
Option 4 ID : 6306802633684

**Q.19** Which among the following is the most urbanized state/union territory in India as per 2011 census?

- Ans**
- 1. Dadra and Nagar Haveli
  - 2. Tamil Nadu
  - 3. Mizoram
  - 4. Puducherry

Question ID : 630680672524  
Option 1 ID : 6306802633667  
Option 2 ID : 6306802633664  
Option 3 ID : 6306802633665  
Option 4 ID : 6306802633666

**Q.20** \_\_\_\_\_ is the provision of financial services to low-income clients, including consumers and the self-employed, who traditionally lack access to banking and related services.

- Ans**
- 1. Microsaving
  - 2. Microfinance
  - 3. Microinsurance
  - 4. Microcredit

Question ID : 630680672516  
Option 1 ID : 6306802633633  
Option 2 ID : 6306802633635  
Option 3 ID : 6306802633634  
Option 4 ID : 6306802633632

Section : Arithmetical and Numerical Ability

**Q.1** L's income is 110 percent of N's income and L's expenditure is 90 percent of N's expenditure. If N saves 20 percent of his income, then how much percentage does L save of his own income?

- Ans**
- 1. 30.5 percent
  - 2. 32.5 percent
  - 3. 34.5 percent
  - 4. 36.5 percent

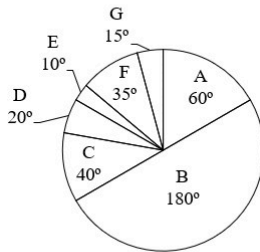
Question ID : 630680672603  
Option 1 ID : 6306802633977  
Option 2 ID : 6306802633979  
Option 3 ID : 6306802633976  
Option 4 ID : 6306802633978

**Q.2** If both length and breadth of a cuboid is increased by 16 percent, then by how much percent its height should be reduced (approximately) so that its volume remains same?

- Ans**
- 1. 32.72 percent
  - 2. 21.24 percent
  - 3. 25.68 percent
  - 4. 17.46 percent

Question ID : 630680672613  
Option 1 ID : 6306802634019  
Option 2 ID : 6306802634017  
Option 3 ID : 6306802634018  
Option 4 ID : 6306802634016

**Q.3** The pie chart given below shows the expenditure incurred by a person on 7 articles. The total expenditure of all these 7 articles are 7200. Expenditure incurred on a particular article is shown in terms of degree with respect to the total expenditure incurred in all these 7 articles.



The expenditure incurred on article C is what percent of the expenditure incurred on article D?

- Ans**
- 1. 200 percent
  - 2. 50 percent
  - 3. 100 percent
  - 4. 150 percent

Question ID : 630680672598  
Option 1 ID : 6306802633956  
Option 2 ID : 6306802633957  
Option 3 ID : 6306802633958  
Option 4 ID : 6306802633959



Q.4 What is the value of  $0.5\overline{62}$ ?

- Ans
- 1.  $\frac{562}{990}$
  - 2.  $\frac{562}{900}$
  - 3.  $\frac{506}{999}$
  - 4.  $\frac{506}{900}$

Question ID : 630680672600  
Option 1 ID : 6306802633966  
Option 2 ID : 6306802633967  
Option 3 ID : 6306802633965  
Option 4 ID : 6306802633964

Q.5 A square park has sides of length 8 cm. A 3 metre wide path is inside it along the sides. What is the area of the path?

- Ans
- 1.  $54 \text{ cm}^2$
  - 2.  $36 \text{ cm}^2$
  - 3.  $60 \text{ cm}^2$
  - 4.  $48 \text{ cm}^2$

Question ID : 630680672614  
Option 1 ID : 6306802634022  
Option 2 ID : 6306802634021  
Option 3 ID : 6306802634023  
Option 4 ID : 6306802634020

Adda247

Q.6 The table given below shows the value of foreign trade by two countries in 5 different years.

Years	Country	
	P	Q
Y1	220	95
Y2	200	155
Y3	125	245
Y4	115	225
Y5	85	140

$K_1$  = The value of average foreign trade by country P in all the 5 years.

$K_2$  = The difference between the total foreign trade by country P and Q in all the 5 years.

What is the value of  $(K_1 - K_2)$ ?

- Ans
- 1. 28
  - 2. 44
  - 3. 16
  - 4. 34

Question ID : 630680672599  
Option 1 ID : 6306802633962  
Option 2 ID : 6306802633961  
Option 3 ID : 6306802633960  
Option 4 ID : 6306802633963

Q.7 If  $M : N = 2 : 1$  and  $N : S = 3 : 7$ , then what is the value of  $N : (M + S)$ ?

- Ans
- 1. 3 : 13
  - 2. 4 : 13
  - 3. 3 : 10
  - 4. 3 : 11

Question ID : 630680672606  
Option 1 ID : 6306802633989  
Option 2 ID : 6306802633991  
Option 3 ID : 6306802633988  
Option 4 ID : 6306802633990

Q.8 The average weight of a group of 15 members is 60 kg. The weight of youngest member is 4 kg. If we exclude that youngest member from the group, then what will be the average weight of the remaining members?

- Ans
- 1. 71 kg
  - 2. 68 kg
  - 3. 65 kg
  - 4. 64 kg

Question ID : 630680672595  
Option 1 ID : 6306802633944  
Option 2 ID : 6306802633945  
Option 3 ID : 6306802633947  
Option 4 ID : 6306802633946

**Q.9** Population of a town increases at the rate of 20 percent per annum. If the population of town will be 21600 after 2 years, then what is the present population of the town?

- Ans**
- 1. 16500
  - 2. 15000
  - 3. 18700
  - 4. 17500

Question ID : 630680672597  
Option 1 ID : 6306802633952  
Option 2 ID : 6306802633954  
Option 3 ID : 6306802633953  
Option 4 ID : 6306802633955

**Q.10** A man starts running from a point at the speed of 20 km/hr at 7:00 am. Two hours later another man starts running in the same direction from the same point at the speed of 35 km/hr. At what time will the second man be 50 km ahead of the first man?

- Ans**
- 1. 4:00 pm
  - 2. 3:00 pm
  - 3. 3:30 pm
  - 4. 2:30 pm

Question ID : 630680672611  
Option 1 ID : 6306802634008  
Option 2 ID : 6306802634009  
Option 3 ID : 6306802634010  
Option 4 ID : 6306802634011

**Q.11** What is the length of the longest rod that can be placed in a room which is 8 metres long, 12 metres broad and 16 metres high?

- Ans**
- 1.  $3\sqrt{34}$  metres
  - 2.  $6\sqrt{33}$  metres
  - 3.  $4\sqrt{29}$  metres
  - 4.  $5\sqrt{41}$  metres

Question ID : 630680672612  
Option 1 ID : 6306802634013  
Option 2 ID : 6306802634014  
Option 3 ID : 6306802634012  
Option 4 ID : 6306802634015

**Q.12** Suresh alone can do a work in 10 days working 1 hour a day. Shalu alone can do the same work in 2 days working 5 hours a day. How many hours do they need to work together in a day to complete the same work in 10 days?

- Ans**
- 1. 1.5 hours
  - 2. 1 hour
  - 3. 0.5 hours
  - 4. 2 hours

Question ID : 630680672608  
Option 1 ID : 6306802633996  
Option 2 ID : 6306802633999  
Option 3 ID : 6306802633998  
Option 4 ID : 6306802633997

**Q.13** The sum of 24 percent of first number and 12 percent of second number is 6 times of the sum of 3 percent of first number and 4 percent of second number. What is the ratio of first number to the second number?

- Ans**
- 1. 5 : 6
  - 2. 2 : 3
  - 3. 1 : 2
  - 4. 2 : 1

Question ID : 630680672607  
Option 1 ID : 6306802633994  
Option 2 ID : 6306802633992  
Option 3 ID : 6306802633993  
Option 4 ID : 6306802633995

**Q.14** Umesh sells two chairs at the rate of Rs. 1404 per chair. He earns a profit of 35 percent on one chair and loses 35 percent on the other chair. What will be the total profit or loss in whole transaction?

- Ans**
- 1. Rs. 402 profit
  - 2. Rs. 412 profit
  - 3. Rs. 302 loss
  - 4. Rs. 392 loss

Question ID : 630680672604  
Option 1 ID : 6306802633983  
Option 2 ID : 6306802633981  
Option 3 ID : 6306802633980  
Option 4 ID : 6306802633982

**Q.15** A person borrows Rs. 75000 at the rate of 12 percent per annum on simple interest for 4 years. He immediately lends it to another person at the rate of 15.5 percent per annum on simple interest for 4 years. What is the value of gain per year?

- Ans**
- 1. Rs. 2720
  - 2. Rs. 2625
  - 3. Rs. 2825
  - 4. Rs. 2725

Question ID : 630680672596  
Option 1 ID : 6306802633948  
Option 2 ID : 6306802633949  
Option 3 ID : 6306802633951  
Option 4 ID : 6306802633950

**Q.16** X and Z are at a distance of 180 km from each other at 7:00 a.m. After 1 hour, X starts moving towards Z at the speed of 18 km/hr. At 11 a.m., Z starts moving towards X at the speed of 12 km/hr. At what time will they meet?

- Ans**
- 1. 4:24 pm
  - 2. 3:48 pm
  - 3. 2:54 pm
  - 4. 3:12 pm

Question ID : 630680672610  
Option 1 ID : 6306802634007  
Option 2 ID : 6306802634006  
Option 3 ID : 6306802634004  
Option 4 ID : 6306802634005

**Q.17** The speed of a train is 72 km/hr. If the length of the train is 450 metres, then in how much time it will cross a platform of length 470 metres?

- Ans**
- 1. 34 seconds
  - 2. 46 seconds
  - 3. 38 seconds
  - 4. 52 seconds

Question ID : 630680672609  
Option 1 ID : 6306802634000  
Option 2 ID : 6306802634001  
Option 3 ID : 6306802634003  
Option 4 ID : 6306802634002

Q.18 What will be the net discount percentage for three successive discounts of 2 percent, 5 percent and 20 percent?

- Ans
- 1. 24.48 percent
  - 2. 25.52 percent
  - 3. 24.72 percent
  - 4. 26.48 percent

Question ID : 630680672605  
Option 1 ID : 6306802633984  
Option 2 ID : 6306802633986  
Option 3 ID : 6306802633987  
Option 4 ID : 6306802633985

Q.19 What is the value of 20 percent of 80 percent of  $\frac{5}{4}$  of 1250?

- Ans
- 1. 2.5
  - 2. 250
  - 3. 25
  - 4. 2500

Question ID : 630680672602  
Option 1 ID : 6306802633975  
Option 2 ID : 6306802633973  
Option 3 ID : 6306802633972  
Option 4 ID : 6306802633974

Q.20 Which of the following number is divisible by 9?

- Ans
- 1. 1540
  - 2. 8241
  - 3. 9815
  - 4. 5292

Question ID : 630680672601  
Option 1 ID : 6306802633968  
Option 2 ID : 6306802633971  
Option 3 ID : 6306802633970  
Option 4 ID : 6306802633969

Q.1 Fill in the blanks with correct articles:

She is \_\_\_\_\_ European who lives in \_\_\_\_\_ Asia.

- Ans
- ✓ 1. a, no article
  - ✗ 2. a, a
  - ✗ 3. the, the
  - ✗ 4. the, a

Question ID : 630680672466  
Option 1 ID : 6306802633429  
Option 2 ID : 6306802633428  
Option 3 ID : 6306802633431  
Option 4 ID : 6306802633430

Q.2 Fill in the blank with the correct preposition.

She is suffering from a rare disease which is \_\_\_\_\_ any cure.

- Ans
- ✗ 1. with
  - ✗ 2. over
  - ✓ 3. beyond
  - ✗ 4. in spite of

Question ID : 630680672469  
Option 1 ID : 6306802633440  
Option 2 ID : 6306802633442  
Option 3 ID : 6306802633441  
Option 4 ID : 6306802633443

Q.3 From the options given below, choose the correct one word substitution for the phrase given below:  
Government by new or inexperienced hands

- Ans
- ✓ 1. Neocracy
  - ✗ 2. Democracy
  - ✗ 3. Plutocracy
  - ✗ 4. Secular

Question ID : 630680672472  
Option 1 ID : 6306802633452  
Option 2 ID : 6306802633455  
Option 3 ID : 6306802633453  
Option 4 ID : 6306802633454

Q.4 Fill in the blank with the correct interrogative adjective.

\_\_\_\_\_ book did you borrow from the library?

- Ans
- 1. Where
  - 2. Whose
  - 3. What
  - 4. Which

Question ID : 630680672467  
Option 1 ID : 6306802633435  
Option 2 ID : 6306802633433  
Option 3 ID : 6306802633434  
Option 4 ID : 6306802633432

Q.5 Rearrange the following sentences to form a coherent paragraph and choose the correct sequence from the options given below:

- A. However, not everyone agrees on the best way to achieve this goal.
- B. Some argue that organic farming is more sustainable and ethical, while others claim that conventional farming is more efficient and productive.
- C. Therefore, consumers face a dilemma when choosing what kind of food to buy.
- D. Food security is a major concern for the global population, especially in the face of climate change and population growth.

- Ans
- 1. C, D, B, A
  - 2. D, C, A, B
  - 3. D, A, B, C
  - 4. A, D, B, C

Question ID : 630680672470  
Option 1 ID : 6306802633446  
Option 2 ID : 6306802633445  
Option 3 ID : 6306802633444  
Option 4 ID : 6306802633447

Q.6 From the below given options, choose the one with the correct spelling.

- Ans
- 1. liasion
  - 2. liazon
  - 3. liaison
  - 4. liason

Question ID : 630680672485  
Option 1 ID : 6306802633502  
Option 2 ID : 6306802633503  
Option 3 ID : 6306802633500  
Option 4 ID : 6306802633501



**Q.7** The sentence below has a spelling error. Identify the word that is spelled incorrectly and select the correct spelling from the options. Choose No error if there is no spelling error.  
The committee unanimously/ agreed to implament the new/ policy without further delay.

- Ans**
- 1. No error.
  - 2. T he committee unanimously
  - 3. agreed to implament the new
  - 4. policy without further delay.

Question ID : 630680672484  
Option 1 ID : 6306802633499  
Option 2 ID : 6306802633496  
Option 3 ID : 6306802633497  
Option 4 ID : 6306802633498

**Q.8** Choose the option which is synonym of the word “erudite” in the sentence given below:

He was an erudite scholar who had a vast knowledge of various subjects.

- Ans**
- 1. ignorant
  - 2. learned
  - 3. simple
  - 4. noble

Question ID : 630680672483  
Option 1 ID : 6306802633492  
Option 2 ID : 6306802633493  
Option 3 ID : 6306802633494  
Option 4 ID : 6306802633495

**Q.9** From the options given below, choose the correct one word substitution for the phrase given below:  
A large cage, building, or enclosure for keeping birds in

- Ans**
- 1. Aviary
  - 2. Apiary
  - 3. Archives
  - 4. Abattoir

Question ID : 630680672473  
Option 1 ID : 6306802633456  
Option 2 ID : 6306802633458  
Option 3 ID : 6306802633459  
Option 4 ID : 6306802633457

Q.10 Fill in the blank with the correct adverb of manner.

She answered the questions \_\_\_\_\_, without any hesitation.

- Ans
- 1. politely
  - 2. confidently
  - 3. nervously
  - 4. angrily

Question ID : 630680672468  
Option 1 ID : 6306802633438  
Option 2 ID : 6306802633436  
Option 3 ID : 6306802633437  
Option 4 ID : 6306802633439

Q.11 Select the word segment that substitutes (replaces) the bracketed idiom correctly and completes the sentence meaningfully.

The employee decided to (burn the midnight oil) to finish the report.

- Ans
- 1. To set fire to oil
  - 2. To waste time
  - 3. To work late into the night
  - 4. To use a lot of energy

Question ID : 630680672480  
Option 1 ID : 6306802633480  
Option 2 ID : 6306802633483  
Option 3 ID : 6306802633481  
Option 4 ID : 6306802633482

Q.12 Choose the option which is antonym of the word "generous" in the sentence given below:

He was a generous man who always helped the poor.

- Ans
- 1. wealthy
  - 2. kind
  - 3. noble
  - 4. stingy

Question ID : 630680672482  
Option 1 ID : 6306802633491  
Option 2 ID : 6306802633489  
Option 3 ID : 6306802633490  
Option 4 ID : 6306802633488

**Q.13** Select the word segment that substitutes (replaces) the bracketed proverb correctly and completes the sentence meaningfully.

The employee was (in hot water) after missing the deadline.

- Ans**
- 1. To be in a heated or angry situation
  - 2. To be in a liquid or fluid situation
  - 3. To be in a warm or comfortable situation
  - 4. To be in a difficult or troublesome situation

Question ID : 630680672481  
Option 1 ID : 6306802633487  
Option 2 ID : 6306802633486  
Option 3 ID : 6306802633485  
Option 4 ID : 6306802633484

**Q.14** Rearrange the following sentences to form a coherent paragraph and choose the correct sequence from the options given below:

- A. In contrast, some people prefer to live in the countryside, where they can enjoy nature and tranquility.
- B. Living in a big city has many advantages, such as access to public services, entertainment, and job opportunities.
- C. For example, some people may find the city too noisy, crowded, or polluted.
- D. However, living in a big city also has some drawbacks, which may affect one's quality of life.

- Ans**
- 1. A, D, B, C
  - 2. D, C, A, B
  - 3. B, D, C, A
  - 4. C, D, B, A

Question ID : 630680672471  
Option 1 ID : 6306802633451  
Option 2 ID : 6306802633449  
Option 3 ID : 6306802633448  
Option 4 ID : 6306802633450

**Q.15** Fill in the blanks with correct articles:

He is \_\_\_\_\_ president of \_\_\_\_\_ United States of America.

- Ans**
- 1. a, the
  - 2. a, a
  - 3. the, a
  - 4. the, the

Question ID : 630680672465  
Option 1 ID : 6306802633425  
Option 2 ID : 6306802633424  
Option 3 ID : 6306802633426  
Option 4 ID : 6306802633427

**Comprehension:**

Read the passage carefully and choose the best answer to each question out of the four alternatives:

The pantheon of Roman gods, steeped in mythology and revered in ancient Rome, reflected the complex tapestry of their beliefs and societal values. At the helm of this divine hierarchy stood Jupiter, the king of gods and the god of the sky and thunder, wielding immense power and influence.

Mars, the god of war, held a prominent position, embodying the martial spirit and guiding the destiny of Rome in times of conflict. Venus, goddess of love and beauty, added a touch of grace to the pantheon, while Neptune, god of the sea, symbolized the importance of maritime pursuits in Roman life.

The pantheon also featured household gods like Vesta, guardian of the hearth, and Janus, the god of beginnings and transitions. Each deity played a unique role in Roman culture, with temples and rituals dedicated to their worship throughout the vast empire.

As Rome evolved, so did its pantheon, absorbing influences from conquered territories and adapting to the changing needs of its people. The legacy of these gods endures, shaping not only the religious practices of ancient Rome but also influencing the broader cultural and historical landscape of Western civilization

**SubQuestion No : 16**

**Q.16** What is the most appropriate title for the passage?

**Ans** ✗ 1.

The Roman Gods: A Source of Inspiration for Art and Literature

✗ 2. The Roman Gods: A Comparison with Other Religions

✓ 3. The Roman Gods: A Cultural and Historical Perspective

✗ 4. The Roman Gods: A Mythological Overview

Question ID : 630680672475

Option 1 ID : 6306802633463

Option 2 ID : 6306802633462

Option 3 ID : 6306802633461

Option 4 ID : 6306802633460

Adda247

**Comprehension:**

Read the passage carefully and choose the best answer to each question out of the four alternatives:

The pantheon of Roman gods, steeped in mythology and revered in ancient Rome, reflected the complex tapestry of their beliefs and societal values. At the helm of this divine hierarchy stood Jupiter, the king of gods and the god of the sky and thunder, wielding immense power and influence.

Mars, the god of war, held a prominent position, embodying the martial spirit and guiding the destiny of Rome in times of conflict. Venus, goddess of love and beauty, added a touch of grace to the pantheon, while Neptune, god of the sea, symbolized the importance of maritime pursuits in Roman life.

The pantheon also featured household gods like Vesta, guardian of the hearth, and Janus, the god of beginnings and transitions. Each deity played a unique role in Roman culture, with temples and rituals dedicated to their worship throughout the vast empire.

As Rome evolved, so did its pantheon, absorbing influences from conquered territories and adapting to the changing needs of its people. The legacy of these gods endures, shaping not only the religious practices of ancient Rome but also influencing the broader cultural and historical landscape of Western civilization

**SubQuestion No : 17**

Q.17 **What is the tone of the passage?**

- Ans
- 1. Humorous and ironic
  - 2. Informative and respectful
  - 3. Persuasive and emotional
  - 4. Critical and sceptical

Question ID : 630680672476  
Option 1 ID : 6306802633466  
Option 2 ID : 6306802633464  
Option 3 ID : 6306802633467  
Option 4 ID : 6306802633465

Adda247

### Comprehension:

Read the passage carefully and choose the best answer to each question out of the four alternatives:

The pantheon of Roman gods, steeped in mythology and revered in ancient Rome, reflected the complex tapestry of their beliefs and societal values. At the helm of this divine hierarchy stood Jupiter, the king of gods and the god of the sky and thunder, wielding immense power and influence.

Mars, the god of war, held a prominent position, embodying the martial spirit and guiding the destiny of Rome in times of conflict. Venus, goddess of love and beauty, added a touch of grace to the pantheon, while Neptune, god of the sea, symbolized the importance of maritime pursuits in Roman life.

The pantheon also featured household gods like Vesta, guardian of the hearth, and Janus, the god of beginnings and transitions. Each deity played a unique role in Roman culture, with temples and rituals dedicated to their worship throughout the vast empire.

As Rome evolved, so did its pantheon, absorbing influences from conquered territories and adapting to the changing needs of its people. The legacy of these gods endures, shaping not only the religious practices of ancient Rome but also influencing the broader cultural and historical landscape of Western civilization

#### SubQuestion No : 18

Q.18 What is the best summary of the passage?

Ans  1.

The passage introduces and describes the Roman gods, emphasizing their roles and significance in Roman culture and history.

2.

The passage narrates and illustrates the stories of the Roman gods, using examples and anecdotes from mythology and literature.

3.

The passage argues and persuades the readers to appreciate and respect the Roman gods, citing their benefits and challenges.

4.

The passage compares and contrasts the Roman gods with other gods, highlighting their similarities and differences.

Question ID : 630680672478

Option 1 ID : 6306802633473

Option 2 ID : 6306802633475

Option 3 ID : 6306802633474

Option 4 ID : 6306802633472

**Comprehension:**

Read the passage carefully and choose the best answer to each question out of the four alternatives:

The pantheon of Roman gods, steeped in mythology and revered in ancient Rome, reflected the complex tapestry of their beliefs and societal values. At the helm of this divine hierarchy stood Jupiter, the king of gods and the god of the sky and thunder, wielding immense power and influence.

Mars, the god of war, held a prominent position, embodying the martial spirit and guiding the destiny of Rome in times of conflict. Venus, goddess of love and beauty, added a touch of grace to the pantheon, while Neptune, god of the sea, symbolized the importance of maritime pursuits in Roman life.

The pantheon also featured household gods like Vesta, guardian of the hearth, and Janus, the god of beginnings and transitions. Each deity played a unique role in Roman culture, with temples and rituals dedicated to their worship throughout the vast empire.

As Rome evolved, so did its pantheon, absorbing influences from conquered territories and adapting to the changing needs of its people. The legacy of these gods endures, shaping not only the religious practices of ancient Rome but also influencing the broader cultural and historical landscape of Western civilization

**SubQuestion No : 19**

Q.19 Which of the following words is a synonym for “steeped” as used in the passage?

- Ans
- 1. Brewed
  - 2. Diluted
  - 3. Boiled
  - 4. Saturated

Question ID : 630680672479  
Option 1 ID : 6306802633479  
Option 2 ID : 6306802633478  
Option 3 ID : 6306802633477  
Option 4 ID : 6306802633476

Adda247

**Comprehension:**

Read the passage carefully and choose the best answer to each question out of the four alternatives:

The pantheon of Roman gods, steeped in mythology and revered in ancient Rome, reflected the complex tapestry of their beliefs and societal values. At the helm of this divine hierarchy stood Jupiter, the king of gods and the god of the sky and thunder, wielding immense power and influence.

Mars, the god of war, held a prominent position, embodying the martial spirit and guiding the destiny of Rome in times of conflict. Venus, goddess of love and beauty, added a touch of grace to the pantheon, while Neptune, god of the sea, symbolized the importance of maritime pursuits in Roman life.

The pantheon also featured household gods like Vesta, guardian of the hearth, and Janus, the god of beginnings and transitions. Each deity played a unique role in Roman culture, with temples and rituals dedicated to their worship throughout the vast empire.

As Rome evolved, so did its pantheon, absorbing influences from conquered territories and adapting to the changing needs of its people. The legacy of these gods endures, shaping not only the religious practices of ancient Rome but also influencing the broader cultural and historical landscape of Western civilization

**SubQuestion No : 20**

**Q.20** Which of the following can be inferred from the passage?

- Ans**
- 1. The Roman gods were dynamic and adaptable
  - 2. The Roman gods were superior to other gods
  - 3. The Roman gods were worshipped by all Romans
  - 4. The Roman gods were based on the Greek gods

Question ID : 630680672477

Option 1 ID : 6306802633470

Option 2 ID : 6306802633471

Option 3 ID : 6306802633469

Option 4 ID : 6306802633468



**Comprehension:**

नीचे दिए गये गद्यांश के बाद 5 प्रश्न दिए गये हैं। इस गद्यांश को ध्यानपूर्वक पढ़ें और चार विकल्पों में से प्रत्येक प्रश्न का सर्वोत्तम उत्तर चुनें।

मनुष्य उत्सवप्रिय होते हैं। उत्सव का एकमात्र उद्देश्य आनंद-प्राप्ति है। यह तो सभी जानते हैं कि मनुष्य अपनी आवश्यकताओं की पूर्ति के लिए प्रयोगशाला का प्रयास करता रहता है। सभी को सुख की आवश्यकता होती है। पर, वह सुख और उत्सव के आनंद में बड़ा फर्क है। आवश्यकता अभाव सूचित करता है। ऐसा प्रतीत होता है कि हमें किस बात की कमी है।

मनुष्य का जीवन ही ऐसा है कि वह किसी भी स्तर पर यह अनुभव नहीं कर सकता कि अब उसके लिए कोई आवश्यकता नहीं रह गयी है। एक के बाद एक वस्तु की चिंता उसे सताती ही रहती है। इसलिए किसी एक आवश्यकता की नियुक्ति से जो सुख होता है, वह अत्यंत क्षणिक होता है, क्योंकि तुरंत ही दूसरी आवश्यकता की नियुक्ति हो जाती है। उत्सव में हम किसी बात की आवश्यकता का अनुभव नहीं करते। यही नहीं, उस दिन हम अपना काम काज पूरा करके आनंद की प्राप्ति करते हैं। यह आनंद जीवन का आनंद है, काम का नहीं।

**SubQuestion No : 1**

Q.1 **अनुच्छेद के अनुसार आवश्यकता क्या दर्शाती है?**

- Ans
- 1. शोध
  - 2. माँग
  - 3. अपर्याप्तता
  - 4. प्रयोगशाला

Question ID : 630680672554

Option 1 ID : 6306802633780

Option 2 ID : 6306802633781

Option 3 ID : 6306802633782

Option 4 ID : 6306802633783

Adda247

**Comprehension:**

नीचे दिए गये गद्यांश के बाद 5 प्रश्न दिए गये हैं। इस गद्यांश को ध्यानपूर्वक पढ़ें और चार विकल्पों में से प्रत्येक प्रश्न का सर्वोत्तम उत्तर चुनें।

मनुष्य उत्सवप्रिय होते हैं। उत्सव का एकमात्र उद्देश्य आनंद-प्राप्ति है। यह तो सभी जानते हैं कि मनुष्य अपनी आवश्यकताओं की पूर्ति के लिए प्रयोगशाला का प्रयास करता रहता है। सभी को सुख की आवश्यकता होती है। पर, वह सुख और उत्सव के आनंद में बड़ा फर्क है। आवश्यकता अभाव सूचित करता है। ऐसा प्रतीत होता है कि हमें किस बात की कमी है।

मनुष्य का जीवन ही ऐसा है कि वह किसी भी स्तर पर यह अनुभव नहीं कर सकता कि अब उसके लिए कोई आवश्यकता नहीं रह गयी है। एक के बाद एक वस्तु की चिंता उसे सताती ही रहती है। इसलिए किसी एक आवश्यकता की नियुक्ति से जो सुख होता है, वह अत्यंत क्षणिक होता है, क्योंकि तुरत ही दूसरी आवश्यकता की नियुक्ति हो जाती है। उत्सव में हम किसी बात की आवश्यकता का अनुभव नहीं करते। यही नहीं, उस दिन हम अपना काम काज पूरा करके आनंद की प्राप्ति करते हैं। यह आनंद जीवन का आनंद है, काम का नहीं।

**SubQuestion No : 2**

Q.2 अनुच्छेद के अनुसार आवश्यकता पूरी होने पर मिलने वाला सुख क्षणिक क्यों होता है?

- Ans
- 1. क्योंकि तब वह आवश्यकता ज़रूरी नहीं होती
  - 2. क्योंकि आवश्यकता देरी से पूरी होती है
  - 3. क्योंकि उसके साथ दुख भी होता है
  - 4. क्योंकि दूसरी आवश्यकता आ जाती है

Question ID : 630680672555  
Option 1 ID : 6306802633784  
Option 2 ID : 6306802633785  
Option 3 ID : 6306802633786  
Option 4 ID : 6306802633787

Adda247

**Comprehension:**

नीचे दिए गये गद्यांश के बाद 5 प्रश्न दिए गये हैं। इस गद्यांश को ध्यानपूर्वक पढ़ें और चार विकल्पों में से प्रत्येक प्रश्न का सर्वोत्तम उत्तर चुनें।

मनुष्य उत्सवप्रिय होते हैं। उत्सव का एकमात्र उद्देश्य आनंद-प्राप्ति है। यह तो सभी जानते हैं कि मनुष्य अपनी आवश्यकताओं की पूर्ति के लिए प्रयोगशाला का प्रयास करता रहता है। सभी को सुख की आवश्यकता होती है। पर, वह सुख और उत्सव के आनंद में बड़ा फर्क है। आवश्यकता अभाव सूचित करता है। ऐसा प्रतीत होता है कि हमें किस बात की कमी है।

मनुष्य का जीवन ही ऐसा है कि वह किसी भी स्तर पर यह अनुभव नहीं कर सकता कि अब उसके लिए कोई आवश्यकता नहीं रह गयी है। एक के बाद एक वस्तु की चिंता उसे सताती ही रहती है। इसलिए किसी एक आवश्यकता की नियुक्ति से जो सुख होता है, वह अत्यंत क्षणिक होता है, क्योंकि तुरंत ही दूसरी आवश्यकता की नियुक्ति हो जाती है। उत्सव में हम किसी बात की आवश्यकता का अनुभव नहीं करते। यही नहीं, उस दिन हम अपना काम काज पूरा करके आनंद की प्राप्ति करते हैं। यह आनंद जीवन का आनंद है, काम का नहीं।

**SubQuestion No : 3**

Q.3 अनुच्छेद के अनुसार किस स्थिति में हम सभी आवश्यकताओं को भूल जाते हैं?

- Ans
- 1. कार्य करते समय
  - 2. दर्द के समय
  - 3. सोते समय
  - 4. उत्सव के समय

Question ID : 630680672556

Option 1 ID : 6306802633791

Option 2 ID : 6306802633789

Option 3 ID : 6306802633790

Option 4 ID : 6306802633788

Adda247

**Comprehension:**

नीचे दिए गये गद्यांश के बाद 5 प्रश्न दिए गये हैं। इस गद्यांश को ध्यानपूर्वक पढ़ें और चार विकल्पों में से प्रत्येक प्रश्न का सर्वोत्तम उत्तर चुनें।

मनुष्य उत्सवप्रिय होते हैं। उत्सव का एकमात्र उद्देश्य आनंद-प्राप्ति है। यह तो सभी जानते हैं कि मनुष्य अपनी आवश्यकताओं की पूर्ति के लिए प्रयोगशाला का प्रयास करता रहता है। सभी को सुख की आवश्यकता होती है। पर, वह सुख और उत्सव के आनंद में बड़ा फर्क है। आवश्यकता अभाव सूचित करता है। ऐसा प्रतीत होता है कि हमें किस बात की कमी है।

मनुष्य का जीवन ही ऐसा है कि वह किसी भी स्तर पर यह अनुभव नहीं कर सकता कि अब उसके लिए कोई आवश्यकता नहीं रह गयी है। एक के बाद एक वस्तु की चिंता उसे सताती ही रहती है। इसलिए किसी एक आवश्यकता की नियुक्ति से जो सुख होता है, वह अत्यंत क्षणिक होता है, क्योंकि तुरंत ही दूसरी आवश्यकता की नियुक्ति हो जाती है। उत्सव में हम किसी बात की आवश्यकता का अनुभव नहीं करते। यही नहीं, उस दिन हम अपना काम काज पूरा करके आनंद की प्राप्ति करते हैं। यह आनंद जीवन का आनंद है, काम का नहीं।

**SubQuestion No : 4**

Q.4 निम्नलिखित प्रश्न में, चार विकल्पों में से, उस विकल्प का चयन करें जो दिए गए शब्द के पर्यायवाची शब्द का विकल्प नहीं है।

क्षणिक

- Ans
- 1. नाशवान
  - 2. लगातार
  - 3. क्षणभंगुर
  - 4. अनित्य

Question ID : 630680672557

Option 1 ID : 6306802633793

Option 2 ID : 6306802633792

Option 3 ID : 6306802633795

Option 4 ID : 6306802633794

Adda247

**Comprehension:**

नीचे दिए गये गद्यांश के बाद 5 प्रश्न दिए गये हैं। इस गद्यांश को ध्यानपूर्वक पढ़ें और चार विकल्पों में से प्रत्येक प्रश्न का सर्वोत्तम उत्तर चुनें।

मनुष्य उत्सवप्रिय होते हैं। उत्सव का एकमात्र उद्देश्य आनंद-प्राप्ति है। यह तो सभी जानते हैं कि मनुष्य अपनी आवश्यकताओं की पूर्ति के लिए प्रयोगशाला का प्रयास करता रहता है। सभी को सुख की आवश्यकता होती है। पर, वह सुख और उत्सव के आनंद में बड़ा फर्क है। आवश्यकता अभाव सूचित करता है। ऐसा प्रतीत होता है कि हमें किस बात की कमी है।

मनुष्य का जीवन ही ऐसा है कि वह किसी भी स्तर पर यह अनुभव नहीं कर सकता कि अब उसके लिए कोई आवश्यकता नहीं रह गयी है। एक के बाद एक वस्तु की चिंता उसे सताती ही रहती है। इसलिए किसी एक आवश्यकता की नियुक्ति से जो सुख होता है, वह अत्यंत क्षणिक होता है, क्योंकि तुरत ही दूसरी आवश्यकता की नियुक्ति हो जाती है। उत्सव में हम किसी बात की आवश्यकता का अनुभव नहीं करते। यही नहीं, उस दिन हम अपना काम काज पूरा करके आनंद की प्राप्ति करते हैं। यह आनंद जीवन का आनंद है, काम का नहीं।

**SubQuestion No : 5**

Q.5 इस अनुच्छेद का कोई उपयुक्त शीर्षक-

- Ans
- 1. मनुष्य की आवश्यकता
  - 2. उत्सवों की आवश्यकता
  - 3. आवश्यकता की नियुक्ति
  - 4. आनंद ही आनंद

Question ID : 630680672553  
Option 1 ID : 6306802633776  
Option 2 ID : 6306802633777  
Option 3 ID : 6306802633778  
Option 4 ID : 6306802633779

Q.6 निम्नलिखित प्रश्न में, चार विकल्पों में से, उस सही विकल्प का चयन करें जो दिए गए अनुच्छेद के लिए अंतिम वाक्य का सही विकल्प हो।  
मैं एक समझदार प्रवृत्ति का व्यक्ति हूँ। मैं जीवन के हर पल का आनंद लेता हूँ। मैं किसी के भी जीवन में हस्तक्षेप करना पसंद नहीं करता। \_\_\_\_\_

- Ans
- 1. मैं अपने से भी यही उम्मीद करता हूँ।
  - 2. मैं लोगों से भी यही उम्मीद करता हूँ।
  - 3. मैं किसी से भी यही उम्मीद करता हूँ।
  - 4. मैं लोगों से भी यही कही सब उम्मीद करता हूँ।

Question ID : 630680672559  
Option 1 ID : 6306802633800  
Option 2 ID : 6306802633801  
Option 3 ID : 6306802633802  
Option 4 ID : 6306802633803

Q.7 निम्नलिखित प्रश्न में, चार विकल्पों में से, उस विकल्प का चयन करें जो दिए गए मुहावरे का सही अर्थ वाला विकल्प है।  
अन्तर के पट खोलना

- Ans
- ✓ 1. विवेक से काम लेना
  - ✗ 2. बहुत बुद्धिमान
  - ✗ 3. एकमात्र सहारा
  - ✗ 4. कल्पनाएँ करना

Question ID : 630680672567  
Option 1 ID : 6306802633832  
Option 2 ID : 6306802633835  
Option 3 ID : 6306802633834  
Option 4 ID : 6306802633833

Q.8 निम्नलिखित वाक्य में, उस वाक्यांश को पहचानिए जिसमें मात्राओं से संबंधित अशुद्धियाँ हैं। यदि कोई गलती नहीं है तो 'कोई त्रुटि नहीं है' का चुनाव कीजिए।  
अपने देश को विश्व का एक बेहतरीन देश/ बनाने के लिये समाज में ऐसे समस्याओं को/ सुलझाने के लिये हमें कल प्रतिज्ञा लाने पर जरूरत है।

- Ans
- ✓ 1. सुलझाने के लिये हमें कल प्रतिज्ञा लाने पर जरूरत है।
  - ✗ 2. कोई त्रुटि नहीं है।
  - ✗ 3. अपने देश को विश्व का एक बेहतरीन देश
  - ✗ 4. बनाने के लिये समाज में ऐसे समस्याओं को

Question ID : 630680672569  
Option 1 ID : 6306802633842  
Option 2 ID : 6306802633843  
Option 3 ID : 6306802633840  
Option 4 ID : 6306802633841

Q.9 निम्नलिखित प्रश्न में, चार विकल्पों में से, उस सही विकल्प का चयन करें जो वाक्यांशों के लिए एक शब्द का विकल्प हो।  
जिसने मृत्यु को जीत लिया हो

- Ans
- ✓ 1. मृत्युंजय
  - ✗ 2. सर्वज्ञ
  - ✗ 3. शाश्वत
  - ✗ 4. शत्रुघ्न

Question ID : 630680672561  
Option 1 ID : 6306802633809  
Option 2 ID : 6306802633811  
Option 3 ID : 6306802633810  
Option 4 ID : 6306802633808

Q.10 निम्नलिखित प्रश्न में, चार विकल्पों में से, उस सही विकल्प का चयन करें जो दिए गए अनुच्छेद के लिए अंतिम वाक्य का सही विकल्प हो।  
लॉकडाउन के प्रभाव बहुत गहरे हुए थे। क्योंकि इससे पूरे विश्व की अर्थव्यवस्था डगमगा गयी। जब हम काम पर जाते हैं, तभी देश आगे बढ़ता है। \_\_\_\_\_

- Ans
- 1. लेकिन जब देश के सारे लोग घर काम पर जायेंगे तो देश का विकास भी रुक जाता है।
  - 2. लेकिन जब देश के सारे लोग घर पर बैठ कर काम करेंगे तो देश का विकास भी रुक जाता है।
  - 3. लेकिन जब देश के सारे लोग घर पर बैठ जायेंगे तो देश का विकास भी ज्यादा हो जाता है।
  - 4. लेकिन जब देश के सारे लोग घर पर बैठ जायेंगे तो देश का विकास भी रुक जाता है।

Question ID : 630680672558  
Option 1 ID : 6306802633797  
Option 2 ID : 6306802633798  
Option 3 ID : 6306802633796  
Option 4 ID : 6306802633799

Q.11 निम्नलिखित प्रश्न में, चार विकल्पों में से, उस विकल्प का चयन करें जो दिए गए वाक्य के लिए सही क्रिया के रूप वाला विकल्प है।  
माताजी खाना बनाते-बनाते थक गईं।

- Ans
- 1. पूर्वकालिक क्रिया
  - 2. सामान्य क्रिया
  - 3. नामधातु क्रिया
  - 4. कृदंत क्रिया

Question ID : 630680672563  
Option 1 ID : 6306802633819  
Option 2 ID : 6306802633818  
Option 3 ID : 6306802633817  
Option 4 ID : 6306802633816

Q.12 निम्नलिखित प्रश्न में, चार विकल्पों में से, उस विकल्प का चयन करें जो दी गई लोकोक्ति का सही अर्थ वाला विकल्प है।  
एक तवे की रोटी क्या छोटी, क्या मोटी

- Ans
- 1. पूर्णतः प्रतिकूल काम को करना
  - 2. बहुत अनुभवी होना
  - 3. किसी प्रकार का भेदभाव नहीं है
  - 4. ऊपरी दिखावे से दोष नहीं छुपते

Question ID : 630680672568  
Option 1 ID : 6306802633839  
Option 2 ID : 6306802633838  
Option 3 ID : 6306802633837  
Option 4 ID : 6306802633836

Q.13 निम्नलिखित प्रश्न में, चार विकल्पों में से, उस विकल्प का चयन करें जो दिए गए वाक्य के लिए सही क्रिया के रूप वाला विकल्प है।  
सभी का आपस में एक-दूसरे से बतियाना ज़रूरी होता है।

- Ans
- 1. सामान्य क्रिया
  - 2. अकर्मक क्रिया
  - 3. पूर्वकालिक क्रिया
  - 4. नामधातु क्रिया

Question ID : 630680672566  
Option 1 ID : 6306802633829  
Option 2 ID : 6306802633830  
Option 3 ID : 6306802633831  
Option 4 ID : 6306802633828

Q.14 निम्नलिखित प्रश्न में, चार विकल्पों में से, उस विकल्प का चयन करें जो दिए गए वाक्य के लिए सही क्रिया विशेषण के रूप वाला विकल्प है।  
हम अक्सर शाम को खेलने जाते हैं।

- Ans
- 1. रीतिवाचक क्रिया विशेषण
  - 2. कालवाचक क्रियाविशेषण
  - 3. स्थानवाचक क्रियाविशेषण
  - 4. परिमाणवाचक क्रियाविशेषण

Question ID : 630680672564  
Option 1 ID : 6306802633820  
Option 2 ID : 6306802633822  
Option 3 ID : 6306802633821  
Option 4 ID : 6306802633823

Q.15 निम्नलिखित प्रश्न में, चार विकल्पों में से, उस विकल्प का चयन करें जो दिए गए रिक्त स्थान के लिए सही कारक वाला विकल्प है।  
दीपा \_\_\_\_\_ सीमा को देखकर मुस्करा दिया।

- Ans
- 1. से
  - 2. पर
  - 3. को
  - 4. ने

Question ID : 630680672562  
Option 1 ID : 6306802633815  
Option 2 ID : 6306802633812  
Option 3 ID : 6306802633814  
Option 4 ID : 6306802633813



Q.16 निम्नलिखित प्रश्न में, चार विकल्पों में से, उस विकल्प का चयन करें जो दिए गए शब्द के विलोम शब्द का विकल्प है।  
आकर्ष

- Ans
- 1. अपकर्ष
  - 2. सुकर्ष
  - 3. हर्ष
  - 4. विकर्ष

Question ID : 630680672572  
Option 1 ID : 6306802633854  
Option 2 ID : 6306802633855  
Option 3 ID : 6306802633853  
Option 4 ID : 6306802633852

Q.17 निम्नलिखित प्रश्न में, चार विकल्पों में से, उस विकल्प का चयन करें जो दिए गए वाक्य के लिए सही विशेषण के रूप वाला विकल्प है।  
स्वास्थ्य के लिए हरी-हरी सब्जियां लाभदायक होती हैं।

- Ans
- 1. परिमाणवाचक विशेषण
  - 2. गुणवाचक विशेषण
  - 3. सार्वनामिक विशेषण
  - 4. व्यक्तिवाचक विशेषण

Question ID : 630680672565  
Option 1 ID : 6306802633824  
Option 2 ID : 6306802633825  
Option 3 ID : 6306802633826  
Option 4 ID : 6306802633827

Q.18 निम्नलिखित प्रश्न में, चार विकल्पों में से, उस विकल्प का चयन करें जो दिए गए शब्द के पर्यायवाची शब्द का सही विकल्प नहीं है।  
नदी

- Ans
- 1. तरंगिणी
  - 2. तरिणी
  - 3. स्रोतस्विनी
  - 4. तटिनी

Question ID : 630680672571  
Option 1 ID : 6306802633848  
Option 2 ID : 6306802633851  
Option 3 ID : 6306802633849  
Option 4 ID : 6306802633850

Q.19 निम्नलिखित प्रश्न में, चार विकल्पों में से, उस सही विकल्प का चयन करें जो वाक्यांशों के लिए एक शब्द का विकल्प हो।  
मोक्ष प्राप्त करने की इच्छा

- Ans
- 1. प्रमेय
  - 2. मुमुक्षा
  - 3. युयुत्सा
  - 4. मुमूर्षा

Question ID : 630680672560  
Option 1 ID : 6306802633807  
Option 2 ID : 6306802633806  
Option 3 ID : 6306802633805  
Option 4 ID : 6306802633804

Q.20 निम्नलिखित वाक्य में, उस वाक्यांश को पहचानिए जिसमें मात्राओं से संबंधित अशुद्धियाँ हैं। यदि कोई गलती नहीं है तो 'कोई त्रुटि नहीं है' का चुनाव कीजिए।  
गर्मी की छुट्टियाँ हर साल मेरे लिए काफी खुशी/ की समय होता है पर यह मुझे मनोरंजक छुट्टियाँ कराने/ तथा प्रियजनों से मिलने के लिए पर्याप्त समय देता है।

- Ans
- 1. गर्मी की छुट्टियाँ हर साल मेरे लिए काफी खुशी
  - 2. की समय होता है पर यह मुझे मनोरंजक छुट्टियाँ कराने
  - 3. कोई त्रुटि नहीं है।
  - 4. तथा प्रियजनों से मिलने के लिए पर्याप्त समय देता है।

Question ID : 630680672570  
Option 1 ID : 6306802633844  
Option 2 ID : 6306802633845  
Option 3 ID : 6306802633847  
Option 4 ID : 6306802633846

Section : Discipline 1

Q.1 For displaying periodicals, usually periodical display racks are used. Which of the following is NOT a type of display racks in a library?

- Ans
- 1. Rotary type
  - 2. Pigeon hole type
  - 3. Step type
  - 4. Inclined type

Question ID : 630680672366  
Option 1 ID : 6306802633028  
Option 2 ID : 6306802633030  
Option 3 ID : 6306802633029  
Option 4 ID : 6306802633031

**Q.2** In the context of the basic features of WINISIS, which of the following refers to the combining of two or more data sequences to form a single data sequence (chain).

- Ans**
- 1. Default Format
  - 2. Concatenation
  - 3. Hypertext
  - 4. Protocol

Question ID : 630680672355  
Option 1 ID : 6306802632987  
Option 2 ID : 6306802632985  
Option 3 ID : 6306802632986  
Option 4 ID : 6306802632984

**Q.3** In the context of design of physical files, which of the following statements is correct regarding the types of files?  
I. A Transaction file is a temporary file of all the transactions that have taken place in a given period.  
II. An Archive file is a file temporarily created to hold intermediate result of the data processing.

- Ans**
- 1. Only I
  - 2. Both I and II
  - 3. Neither I nor II
  - 4. Only II

Question ID : 630680672344  
Option 1 ID : 6306802632940  
Option 2 ID : 6306802632942  
Option 3 ID : 6306802632943  
Option 4 ID : 6306802632941

**Q.4** Collection development policy is the course of action adopted for developing the collection or stock in a library. Which of the following is correct regarding the guiding principles for evolving the Collection Development Policy?

- I. Goals and Objectives of the Institution.
- II. Needs of the Users.
- III. Availability of Resources.

- Ans**
- 1. Only I and III
  - 2. I, II and III
  - 3. Only I and II
  - 4. Only II and III

Question ID : 630680672367  
Option 1 ID : 6306802633033  
Option 2 ID : 6306802633035  
Option 3 ID : 6306802633032  
Option 4 ID : 6306802633034

**Q.5** In cataloguing, a \_\_\_\_\_ is a name (in an author catalogue) or a term (in a subject catalogue) appearing at the head of an entry and may consist of one or more words or phrases.

- Ans**
- 1. heading
  - 2. entry
  - 3. server
  - 4. title

Question ID : 630680672394  
Option 1 ID : 6306802633141  
Option 2 ID : 6306802633142  
Option 3 ID : 6306802633143  
Option 4 ID : 6306802633140

**Q.6** Which of the following is an example of database application?

- I. Computerised Library Systems
- II. Automated Teller Machines

- Ans**
- 1. Both I and II
  - 2. Only I
  - 3. Only II
  - 4. Neither I nor II

Question ID : 630680672343  
Option 1 ID : 6306802632938  
Option 2 ID : 6306802632936  
Option 3 ID : 6306802632937  
Option 4 ID : 6306802632939

**Q.7** \_\_\_\_\_ analysis means an analysis of a subject into its aspects obtained on the basis of a systematic application of a set of characteristics.

- Ans**
- 1. Postulational
  - 2. Phase
  - 3. Facet
  - 4. System

Question ID : 630680672324  
Option 1 ID : 6306802632863  
Option 2 ID : 6306802632861  
Option 3 ID : 6306802632862  
Option 4 ID : 6306802632860

**Q.8** In the context of library finance and sources of finance, which of the following is the regular budgeted grants given every year?

I. Plan Grants

II. Non-plan Grants

- Ans**
- 1. Both I and II
  - 2. Neither I nor II
  - 3. Only I
  - 4. Only II

Question ID : 630680672365  
Option 1 ID : 6306802633026  
Option 2 ID : 6306802633027  
Option 3 ID : 6306802633024  
Option 4 ID : 6306802633025

**Q.9** The valuable feature of the \_\_\_\_\_ approach is that it helps to clear fallacies likely to occur.

- Ans**
- 1. System
  - 2. Postulational
  - 3. Normative
  - 4. Fundamental

Question ID : 630680672320  
Option 1 ID : 6306802632845  
Option 2 ID : 6306802632844  
Option 3 ID : 6306802632847  
Option 4 ID : 6306802632846

**Q.10** Who of the following is an example of pseudonyms?

I. George Orwell

II. Mark Twain

- Ans**
- 1. Only II
  - 2. Only I
  - 3. Neither I nor II
  - 4. Both I and II

Question ID : 630680672395  
Option 1 ID : 6306802633145  
Option 2 ID : 6306802633144  
Option 3 ID : 6306802633147  
Option 4 ID : 6306802633146

Q.11 Which of the following is a title displaying Matter Isolates?

- Ans
- 1. Density of solid
  - 2. Air conditioning in the tropics
  - 3. Mountain ranges of India
  - 4. Textile industry in Canada

Question ID : 630680672323  
Option 1 ID : 6306802632856  
Option 2 ID : 6306802632859  
Option 3 ID : 6306802632857  
Option 4 ID : 6306802632858

Q.12 In the context of library automation packages, Alice for Windows has which of the following modules?

- I. Journal Indexing
- II. Subject Authority
- III. Web enquiry

- Ans
- 1. Only II and III
  - 2. Only I and II
  - 3. I, II and III
  - 4. Only I and III

Question ID : 630680672354  
Option 1 ID : 6306802632982  
Option 2 ID : 6306802632980  
Option 3 ID : 6306802632983  
Option 4 ID : 6306802632981

Q.13 Who of the following, based on his research, believes that there is plenty of evidence to show that we cover the whole knowledge by relating subject analysis, or classification, to a general theory of systems?

- Ans
- 1. Foskett
  - 2. Iyer
  - 3. Dhalberg
  - 4. Ranganathan

Question ID : 630680672321  
Option 1 ID : 6306802632850  
Option 2 ID : 6306802632849  
Option 3 ID : 6306802632851  
Option 4 ID : 6306802632848

Q.14 Which of the following belongs to species of classification schemes?

- I. Enumerative
- II. Almost - Enumerative
- III. Almost - Faceted
- IV. Fully - Faceted

- Ans
- 1. Only III and IV
  - 2. Only I
  - 3. Only II
  - 4. I, II, III, IV

Question ID : 630680672317  
Option 1 ID : 6306802632834  
Option 2 ID : 6306802632832  
Option 3 ID : 6306802632833  
Option 4 ID : 6306802632835

Q.15 In the context of library finance, which of the following refers to the official examination of accounts and scrutiny of financial transactions?

- Ans
- 1. Prospective pricing
  - 2. Budgeting
  - 3. Auditing
  - 4. Accounting

Question ID : 630680672364  
Option 1 ID : 6306802633023  
Option 2 ID : 6306802633022  
Option 3 ID : 6306802633021  
Option 4 ID : 6306802633020

Q.16 Which of the following belongs to fundamental categories in approaches to library classification?

- I. Personality [P]
- II. Matter [M]

- Ans
- 1. Only II
  - 2. Neither I nor II
  - 3. Both I and II
  - 4. Only I

Question ID : 630680672322  
Option 1 ID : 6306802632853  
Option 2 ID : 6306802632855  
Option 3 ID : 6306802632854  
Option 4 ID : 6306802632852

**Q.17** In the context of library automation packages, which of the following is correct regarding the features of SOUL (Software for University Libraries)?

- I. Multi-user software with no limitation for simultaneous access.
- II. Supports LAN and WAN environment.

- Ans**
- 1. Neither I nor II
  - 2. Only II
  - 3. Only I
  - 4. Both I and II

Question ID : 630680672353  
Option 1 ID : 6306802632979  
Option 2 ID : 6306802632977  
Option 3 ID : 6306802632976  
Option 4 ID : 6306802632978

**Q.18** In the context of library automation packages, Alice for Windows is the product of which of the following company?

- Ans**
- 1. Microsoft
  - 2. Softlink
  - 3. Google
  - 4. Apple

Question ID : 630680672352  
Option 1 ID : 6306802632974  
Option 2 ID : 6306802632975  
Option 3 ID : 6306802632973  
Option 4 ID : 6306802632972

**Q.19** In the context of database structure, which of the following terms refers to the set of fields containing all the data elements of one information unit stored in a database?

- Ans**
- 1. Format
  - 2. Hypertext
  - 3. Record
  - 4. Pattern

Question ID : 630680672351  
Option 1 ID : 6306802632970  
Option 2 ID : 6306802632971  
Option 3 ID : 6306802632968  
Option 4 ID : 6306802632969



**Q.20** An \_\_\_\_\_ scheme for classification consists of a large schedule enumerating most of the subjects of the past, the present and the foreseeable future.

- Ans**
- 1. evolutionary trends
  - 2. enumerative
  - 3. almost faceted
  - 4. almost enumerative

Question ID : 630680672316  
Option 1 ID : 6306802632831  
Option 2 ID : 6306802632829  
Option 3 ID : 6306802632830  
Option 4 ID : 6306802632828

Section : Discipline 2

**Q.1** \_\_\_\_\_ is undertaken in order to accommodate new subjects as well as to provide more minute and specific sub-divisions under the existing subjects in revision process of Dewey Decimal classification [DDC].

- Ans**
- 1. Compression
  - 2. Reduction
  - 3. Expansion
  - 4. Relocation

Question ID : 630680672330  
Option 1 ID : 6306802632884  
Option 2 ID : 6306802632886  
Option 3 ID : 6306802632885  
Option 4 ID : 6306802632887

**Q.2** The National Forum for Information Literacy (NFIL) was formed in \_\_\_\_\_.

- Ans**
- 1. 1992
  - 2. 1986
  - 3. 1989
  - 4. 1995

Question ID : 630680672386  
Option 1 ID : 6306802633110  
Option 2 ID : 6306802633108  
Option 3 ID : 6306802633109  
Option 4 ID : 6306802633111

**Q.3** In the context of physical forms of library catalogues, which of the following is a disadvantage of sheaf form?

I. Duplicate entries can be made easily.

II. The filing and fixing of sheaves into loose leaf binder is a time consuming and tedious process.

- Ans**
- 1. Neither I nor II
  - 2. Only I
  - 3. Both I and II
  - 4. Only II

Question ID : 630680672389

Option 1 ID : 6306802633123

Option 2 ID : 6306802633120

Option 3 ID : 6306802633122

Option 4 ID : 6306802633121

**Q.4** The binding element between the sender and the receiver in the communication process is the \_\_\_\_\_.

- Ans**
- 1. sender
  - 2. channel
  - 3. receiver
  - 4. message

Question ID : 630680672311

Option 1 ID : 6306802632808

Option 2 ID : 6306802632810

Option 3 ID : 6306802632811

Option 4 ID : 6306802632809

**Q.5** In the context of physical forms of library catalogues, a catalogue should have which of the following features?

I. It must occupy as little space as possible.

II. It should enable browsing on scanning over a number of entries at a time.

- Ans**
- 1. Neither I nor II
  - 2. Only II
  - 3. Both I and II
  - 4. Only I

Question ID : 630680672388

Option 1 ID : 6306802633119

Option 2 ID : 6306802633117

Option 3 ID : 6306802633118

Option 4 ID : 6306802633116

Q.6 Which of the following is the element in selection of the channel?

- Ans
- 1. Message
  - 2. Sender
  - 3. Receiver
  - 4. Load capacity

Question ID : 630680672312  
Option 1 ID : 6306802632813  
Option 2 ID : 6306802632814  
Option 3 ID : 6306802632815  
Option 4 ID : 6306802632812

Q.7 In communication channel \_\_\_\_\_ of the channel is determined by the quality of the message received as intended, without distortion and noise.

- Ans
- 1. effectiveness
  - 2. efficiency
  - 3. time taken
  - 4. load capacity

Question ID : 630680672309  
Option 1 ID : 6306802632803  
Option 2 ID : 6306802632800  
Option 3 ID : 6306802632801  
Option 4 ID : 6306802632802

Q.8 In the context of physical forms of library catalogues, which of the following is an advantage of Bound register / Ledger form?  
I. It is simple and easy to handle or consult.  
II. Entries for new books added cannot always be inserted at their proper places as the left out space is filled shortly.

- Ans
- 1. Both I and II
  - 2. Only I
  - 3. Neither I nor II
  - 4. Only II

Question ID : 630680672390  
Option 1 ID : 6306802633126  
Option 2 ID : 6306802633124  
Option 3 ID : 6306802633127  
Option 4 ID : 6306802633125

**Q.9** Which of the following was the topic chosen for the first international [ISKO] i.e. International Society for Knowledge Organisation, held in Germany on August, 15-17, 1990.

- Ans**
- 1. Knowledge seeking in problem solving
  - 2. Taxonomic approach to knowledge organisation
  - 3. Knowledge seeking in libraries
  - 4. Tools for knowledge Organisation and Human Interference

Question ID : 630680672333  
Option 1 ID : 6306802632898  
Option 2 ID : 6306802632899  
Option 3 ID : 6306802632897  
Option 4 ID : 6306802632896

**Q.10** Basic Information Literacy Skills Include which of the following?

- I. Be able to identify the parts of a bibliographic record.
- II. Understand the difference between subject searching and word searching.
- III. Have an understanding of plagiarism and intellectual property issues.

- Ans**
- 1. Only I and III
  - 2. I, II and III
  - 3. Only II and III
  - 4. Only I and II

Question ID : 630680672387  
Option 1 ID : 6306802633113  
Option 2 ID : 6306802633115  
Option 3 ID : 6306802633114  
Option 4 ID : 6306802633112

**Q.11** Universal Decimal classification has developed an extensive class of \_\_\_\_\_ from 001 to 09.

- Ans**
- 1. theoretical
  - 2. common auxiliaries
  - 3. generalities
  - 4. auxiliary

Question ID : 630680672331  
Option 1 ID : 6306802632889  
Option 2 ID : 6306802632891  
Option 3 ID : 6306802632888  
Option 4 ID : 6306802632890

Q.12 Which operating system was introduced in 2001 by Microsoft and is a part of windows family of operating system?

- Ans
- ✓ 1. Win XP
  - ✗ 2. Win 8/8.1
  - ✗ 3. Win Vista
  - ✗ 4. Win 7

Question ID : 630680672335  
Option 1 ID : 6306802632904  
Option 2 ID : 6306802632907  
Option 3 ID : 6306802632905  
Option 4 ID : 6306802632906

Q.13 Match the binary numbers with their correct octal numbers.

	Binary Number		Octal Number
I	0101	1	011 ( $1 \times 8^1 + 1 \times 8^0$ )
II	0111	2	005 ( $5 \times 8^0$ )
III	1001	3	007 ( $7 \times 8^0$ )

- Ans
- ✗ 1. I-3, II-1, III-2
  - ✓ 2. I-2, II-3, III-1
  - ✗ 3. I-1, II-2, III-3
  - ✗ 4. I-3, II-2, III-1

Question ID : 630680672336  
Option 1 ID : 6306802632911  
Option 2 ID : 6306802632910  
Option 3 ID : 6306802632908  
Option 4 ID : 6306802632909

Q.14 In the context of criteria for evaluation of reference sources, Ranganathan has categorised the documents from which of the following angles?

- I. By the volume of thought content.
- II. By recording media.

- Ans
- ✗ 1. Neither I nor II
  - ✗ 2. Only I
  - ✓ 3. Both I and II
  - ✗ 4. Only II

Question ID : 630680672372  
Option 1 ID : 6306802633055  
Option 2 ID : 6306802633052  
Option 3 ID : 6306802633054  
Option 4 ID : 6306802633053

Q.15 Match the keywords with their correct description.

	Keywords		Description
I	Data	1	Is an organised set of fact or ideas, presenting a reasoned judgment or an experimental result.
II	Knowledge	2	Is flow of message
III	Information	3	Is usually an observed fact, obtained on basis of a systematic survey or study, relating to a certain activity.

- Ans
- 1. I-1, II-3, III-2
  - 2. I-3, II-1, III-2
  - 3. I-2, II-3, III-1
  - 4. I-1, II-2, III-3

Question ID : 630680672310  
Option 1 ID : 6306802632807  
Option 2 ID : 6306802632805  
Option 3 ID : 6306802632806  
Option 4 ID : 6306802632804

Q.16 In the context of types of information sources and services, a/an \_\_\_\_\_ is a book that gives instructions about how to use a machine.

- Ans
- 1. almanac
  - 2. directory
  - 3. index
  - 4. manual

Question ID : 630680672371  
Option 1 ID : 6306802633051  
Option 2 ID : 6306802633050  
Option 3 ID : 6306802633048  
Option 4 ID : 6306802633049

Q.17 Which generation computer were vacuum tubes valve-based machines?

- Ans
- 1. Second generation
  - 2. Fourth generation
  - 3. First generation
  - 4. Third generation

Question ID : 630680672334  
Option 1 ID : 6306802632900  
Option 2 ID : 6306802632903  
Option 3 ID : 6306802632901  
Option 4 ID : 6306802632902

Q.18 Dewey Decimal Classification is basically a \_\_\_\_\_ scheme, based on general principles of \_\_\_\_\_.

- Ans
- 1. abridged DDC, division
  - 2. hierarchial, division
  - 3. philosophical, multiplication
  - 4. practical, addition

Question ID : 630680672329  
Option 1 ID : 6306802632882  
Option 2 ID : 6306802632883  
Option 3 ID : 6306802632881  
Option 4 ID : 6306802632880

Q.19 \_\_\_\_\_ is a scheme of classification based on the analysis of subject into different facets.

- Ans
- 1. Analytico-synthetic
  - 2. Anteriorizing value
  - 3. Basic facet
  - 4. Adjunct

Question ID : 630680672332  
Option 1 ID : 6306802632893  
Option 2 ID : 6306802632894  
Option 3 ID : 6306802632895  
Option 4 ID : 6306802632892

Q.20 Which of the following statements is correct regarding the limitations of reference books?

- I. A dictionary cannot cover all the words that have come into use very recently.
- II. The accumulation of new knowledge demands the coverage of new subjects in encyclopedia.

- Ans
- 1. Only II
  - 2. Both I and II
  - 3. Only I
  - 4. Neither I nor II

Question ID : 630680672373  
Option 1 ID : 6306802633057  
Option 2 ID : 6306802633058  
Option 3 ID : 6306802633056  
Option 4 ID : 6306802633059

Q.1 In the context of categories of library professional, one who designs and builds up a scheme of classification on sound principles is a

- Ans
- 1. library administrator
  - 2. cataloguer
  - 3. classificationist
  - 4. reference librarian

Question ID : 630680672314  
Option 1 ID : 6306802632822  
Option 2 ID : 6306802632820  
Option 3 ID : 6306802632823  
Option 4 ID : 6306802632821

Q.2 A Common Communication Format (CCF) may contain description of more than \_\_\_\_\_ in library automation.

- Ans
- 1. two item
  - 2. ten item
  - 3. one item
  - 4. six item

Question ID : 630680672341  
Option 1 ID : 6306802632929  
Option 2 ID : 6306802632930  
Option 3 ID : 6306802632928  
Option 4 ID : 6306802632931

Q.3 Under which of the following reasons for legislation cannot be summed up in library legislation?

- Ans
- 1. It will maintain standards in library services
  - 2. It will constitute a proper administrative and supervisory body with executive powers.
  - 3. It will be obliged to meet the objectives and remain accountable
  - 4. It will not provide a steady and permanent source of finance

Question ID : 630680672306  
Option 1 ID : 6306802632788  
Option 2 ID : 6306802632791  
Option 3 ID : 6306802632790  
Option 4 ID : 6306802632789



Q.4 In MARC21, formats are defined into which of the following types of data?

I. Classification

II. No authority

Ans  1. Both I and II

2. Only II

3. Neither I nor II

4. Only I

Question ID : 630680672340

Option 1 ID : 6306802632926

Option 2 ID : 6306802632925

Option 3 ID : 6306802632927

Option 4 ID : 6306802632924

Q.5 \_\_\_\_\_ means the symbols used in the scheme to represent classes in a scheme of classification.

Ans  1. Notations

2. Structure

3. Layout

4. Index

Question ID : 630680672327

Option 1 ID : 6306802632872

Option 2 ID : 6306802632873

Option 3 ID : 6306802632874

Option 4 ID : 6306802632875

Q.6 \_\_\_\_\_ should reflect or be based upon all the basic values associated with the occupation.

Ans  1. Profession

2. Professionalism

3. Professional ethics

4. General ethics

Question ID : 630680672313

Option 1 ID : 6306802632819

Option 2 ID : 6306802632818

Option 3 ID : 6306802632817

Option 4 ID : 6306802632816

Q.7 Manipur has one State Central Library at \_\_\_\_\_.

- Ans
- 1. Ukhrul
  - 2. Chandel
  - 3. Senapati
  - 4. Imphal

Question ID : 630680672308  
Option 1 ID : 6306802632796  
Option 2 ID : 6306802632798  
Option 3 ID : 6306802632797  
Option 4 ID : 6306802632799

Q.8 In the context of an electronic mail, what does the 'A' stand for in 'IMAP'?

- Ans
- 1. Address
  - 2. Asset
  - 3. Acquisition
  - 4. Access

Question ID : 630680672356  
Option 1 ID : 6306802632989  
Option 2 ID : 6306802632988  
Option 3 ID : 6306802632990  
Option 4 ID : 6306802632991

Q.9 Match the types of digits used, with number of digits used in notation and construction of classification number.

	Types of digits used	Number of digits used	
I	Roman alphabets (capital letter A-Z)	1	2
II	Parenthesis ( )	2	26
III	Romain alphabet (small letters a-z, excluding i, e, o)	3	23

- Ans
- 1. I-3, II-1, III-2
  - 2. I-2, II-1, III-3
  - 3. I-1, II-2, III-3
  - 4. I-3, II-2, III-1

Question ID : 630680672328  
Option 1 ID : 6306802632879  
Option 2 ID : 6306802632876  
Option 3 ID : 6306802632877  
Option 4 ID : 6306802632878

**Q.10** In the context of records and statistics, authority file for cataloguing is maintained by which of the following sections of the library?

- Ans**
- 1. Circulation Section
  - 2. Acquisition Section
  - 3. Technical Section
  - 4. Maintenance Section

Question ID : 630680672370  
Option 1 ID : 6306802633046  
Option 2 ID : 6306802633044  
Option 3 ID : 6306802633045  
Option 4 ID : 6306802633047

**Q.11** Which of the following statements is correct regarding meta search engines?

- I. Meta search engines have their own databases.
- II. Before conducting a search on a meta search engine, it is important to find out which search engines are included by the meta search engine.

- Ans**
- 1. Neither I nor II
  - 2. Only I
  - 3. Only II
  - 4. Both I and II

Question ID : 630680672348  
Option 1 ID : 6306802632959  
Option 2 ID : 6306802632956  
Option 3 ID : 6306802632957  
Option 4 ID : 6306802632958

**Q.12** Which of the following element does the call number consists for a document?

- I. Class number
- II. Book number

- Ans**
- 1. Only II
  - 2. Both I and II
  - 3. Neither I nor II
  - 4. Only I

Question ID : 630680672325  
Option 1 ID : 6306802632865  
Option 2 ID : 6306802632866  
Option 3 ID : 6306802632867  
Option 4 ID : 6306802632864

Q.13 With the help of a book number and \_\_\_\_\_ a document is fully individualised.

- Ans
- 1. Class number
  - 2. Binary number
  - 3. Collection number
  - 4. Decimal number

Question ID : 630680672326  
Option 1 ID : 6306802632868  
Option 2 ID : 6306802632870  
Option 3 ID : 6306802632869  
Option 4 ID : 6306802632871

Q.14 \_\_\_\_\_ of documents is one of the basic function associated with any library.

- Ans
- 1. Selection
  - 2. Acquisition
  - 3. Accessioning
  - 4. Ordering

Question ID : 630680672342  
Option 1 ID : 6306802632935  
Option 2 ID : 6306802632934  
Option 3 ID : 6306802632932  
Option 4 ID : 6306802632933

Q.15 Which of the following is the type of metadata?

- I. Descriptive
- II. Structural

- Ans
- 1. Only II
  - 2. Neither I nor II
  - 3. Only I
  - 4. Both I and II

Question ID : 630680672338  
Option 1 ID : 6306802632917  
Option 2 ID : 6306802632919  
Option 3 ID : 6306802632916  
Option 4 ID : 6306802632918

**Q.16** In the context of electronic resources, which of the following is a primary source of information?

- I. Electronic journals
- II. Electronic conferences

**Ans**  1. Neither I nor II

2. Only I

3. Both I and II

4. Only II

Question ID : 630680672347

Option 1 ID : 6306802632955

Option 2 ID : 6306802632952

Option 3 ID : 6306802632954

Option 4 ID : 6306802632953

**Q.17** In Library Automation the Dublin Core Metadata initiative began in \_\_\_\_\_.

**Ans**  1. March 1993

2. March 1996

3. March 1994

4. March 1995

Question ID : 630680672339

Option 1 ID : 6306802632923

Option 2 ID : 6306802632921

Option 3 ID : 6306802632922

Option 4 ID : 6306802632920

**Q.18** Which of the following is a discipline that measures library activities, library collection, personnel, building, furniture, etc?

**Ans**  1. Librametrics

2. Epistemology

3. Bibliometrics

4. Thesaurus

Question ID : 630680672315

Option 1 ID : 6306802632825

Option 2 ID : 6306802632824

Option 3 ID : 6306802632826

Option 4 ID : 6306802632827

Q.19 A \_\_\_\_\_ is a device that moves in all directions and controls the movement of the cursor.

- Ans
- 1. joystick
  - 2. mouse
  - 3. pointing device
  - 4. trackball

Question ID : 630680672337  
Option 1 ID : 6306802632915  
Option 2 ID : 6306802632914  
Option 3 ID : 6306802632912  
Option 4 ID : 6306802632913

Q.20 Maharashtra is the \_\_\_\_\_ state to have a library Act; it has around \_\_\_\_\_ public library nodes.

- Ans
- 1. fifth, 5900
  - 2. fourth, 2900
  - 3. third, 3900
  - 4. first, 4900

Question ID : 630680672307  
Option 1 ID : 6306802632793  
Option 2 ID : 6306802632795  
Option 3 ID : 6306802632794  
Option 4 ID : 6306802632792

Section : Discipline 4

Q.1 In the context of web searching, which of the following statements is correct regarding indexing?

I. It is the process of prioritizing the web pages in the order of their preference.

II. It gives the facility to the user to check the most appropriate page first, out of the countless pages found during the search.

- Ans
- 1. Only I
  - 2. Neither I nor II
  - 3. Only II
  - 4. Both I and II

Question ID : 630680672357  
Option 1 ID : 6306802632992  
Option 2 ID : 6306802632995  
Option 3 ID : 6306802632993  
Option 4 ID : 6306802632994

Q.2 Which of the following is an advantage of stock verification?

- I. It provides opportunity to survey the stock and be aware of the library collection.
- II. It identifies old editions and books not in demand or use to be weeded out.
- III. It impresses the authorities on the inevitability of loss of books.

Ans  1. Only I and III

2. I, II and III

3. Only II and III

4. Only I and II

Question ID : 630680672369

Option 1 ID : 6306802633041

Option 2 ID : 6306802633043

Option 3 ID : 6306802633042

Option 4 ID : 6306802633040

Q.3 In the context of operating systems, which of the following statements is correct regarding Linux?

- I. Linux is multitasking.
- II. Linux is multi user.
- III. Linux is Backwards-Compatible.

Ans  1. Only I and III

2. I, II and III

3. Only I and II

4. Only II and III

Question ID : 630680672350

Option 1 ID : 6306802632965

Option 2 ID : 6306802632967

Option 3 ID : 6306802632964

Option 4 ID : 6306802632966

Q.4 Which of the following is implication of the first law of library science?

- I. Location
- II. Library hours
- III. Library building and furniture

Ans  1. Only I and III

2. Only I and II

3. Only II and III

4. I, II and III

Question ID : 630680672300

Option 1 ID : 6306802632765

Option 2 ID : 6306802632764

Option 3 ID : 6306802632766

Option 4 ID : 6306802632767

Q.5 In the context of reference and information services, which of the following is NOT an example of tertiary sources?

- Ans
- 1. Dictionary
  - 2. Bibliography of bibliographies
  - 3. Almanac
  - 4. Monograph

Question ID : 630680672381  
Option 1 ID : 6306802633090  
Option 2 ID : 6306802633091  
Option 3 ID : 6306802633089  
Option 4 ID : 6306802633088

Q.6 Maintenance Section of a library is responsible for which of the following jobs?

- Ans
- 1. Making record entries in the stock register
  - 2. Receiving supplies
  - 3. Processing the bills for payment
  - 4. Shelving and re-shelving

Question ID : 630680672360  
Option 1 ID : 6306802633005  
Option 2 ID : 6306802633004  
Option 3 ID : 6306802633006  
Option 4 ID : 6306802633007

Q.7 In the context of reference queries, which of the following is an example of the research queries?

- I. What literature is available on the use of multimedia for teaching English to primary class students?
- II. How many districts are there in the state of Madhya Pradesh?
- III. Which are the major universities across the world that offer programmes on sustainability?

- Ans
- 1. I, II and III
  - 2. Only I and III
  - 3. Only II and III
  - 4. Only I and II

Question ID : 630680672382  
Option 1 ID : 6306802633095  
Option 2 ID : 6306802633093  
Option 3 ID : 6306802633094  
Option 4 ID : 6306802633092



**Q.8** In the context of the general principles of management, which of the following is correct regarding Taylor's Principles?

I. Achieving cooperation of human beings, rather than chaotic individualism.

II. Obtaining harmony in group action, rather than discord.

III. Working for maximum output, rather than restricted output.

**Ans** ✓ 1. I, II and III

✗ 2. Only I and II

✗ 3. Only II and III

✗ 4. Only I and III

Question ID : 630680672363

Option 1 ID : 6306802633019

Option 2 ID : 6306802633016

Option 3 ID : 6306802633018

Option 4 ID : 6306802633017

**Q.9** Which of the following sections of a library deals with membership work, issue and return work and work related to users' requirements.

**Ans** ✗ 1. Technical Section

✓ 2. Circulation Section

✗ 3. Reference Section

✗ 4. Acquisition Section

Question ID : 630680672358

Option 1 ID : 6306802632999

Option 2 ID : 6306802632997

Option 3 ID : 6306802632998

Option 4 ID : 6306802632996

**Q.10** In the context of information sources, a \_\_\_\_\_ is a collection of writings published in honour of a learned person.

**Ans** ✗ 1. dissertation

✗ 2. souvenir

✗ 3. monograph

✓ 4. festschrift

Question ID : 630680672375

Option 1 ID : 6306802633066

Option 2 ID : 6306802633065

Option 3 ID : 6306802633064

Option 4 ID : 6306802633067

**Q.11** Which of the following is correct regarding the need and purpose of the reference service?

- I. To satisfy the information needs of the users and demand for intensive services.
- II. To know the availability of volume and type of documents in print and nonprint.
- III. To be in pace with modern tools and techniques developed for library and information services.

**Ans** ✓ 1. I, II and III

✗ 2. Only II and III

✗ 3. Only I and III

✗ 4. Only I and II

Question ID : 630680672383

Option 1 ID : 6306802633099

Option 2 ID : 6306802633098

Option 3 ID : 6306802633097

Option 4 ID : 6306802633096

**Q.12** It is an \_\_\_\_\_ to develop and maintain a library system that is capable of providing adequate library service to all the people.

**Ans** ✗ 1. obligations of the staff

✗ 2. obligation of the library authority

✗ 3. obligations of the reader

✓ 4. obligation of the state

Question ID : 630680672301

Option 1 ID : 6306802632770

Option 2 ID : 6306802632769

Option 3 ID : 6306802632771

Option 4 ID : 6306802632768

**Q.13** In the context of editing and formatting word documents, which of the following shortcuts is used to cut the selected text?

**Ans** ✗ 1. Ctrl+V

✗ 2. Ctrl+D

✗ 3. Ctrl+C

✓ 4. Ctrl+X

Question ID : 630680672349

Option 1 ID : 6306802632960

Option 2 ID : 6306802632962

Option 3 ID : 6306802632961

Option 4 ID : 6306802632963

**Q.14** In the context of reference services, which of the following refers to a set of abilities required to identify what information is needed; and how to locate, evaluate and use information in relation to the need?

- Ans**
- 1. Information Technology
  - 2. Information Abundance
  - 3. Information Literacy
  - 4. Information Deluge

Question ID : 630680672380  
Option 1 ID : 6306802633084  
Option 2 ID : 6306802633086  
Option 3 ID : 6306802633085  
Option 4 ID : 6306802633087

**Q.15** \_\_\_\_\_ is concerned with maintaining or restoring access to artifacts, documents and records through the study, diagnosis, treatment and prevention of decay and damage.

- Ans**
- 1. Presentation
  - 2. Delimitation
  - 3. Preservation
  - 4. Deterioration

Question ID : 630680672368  
Option 1 ID : 6306802633037  
Option 2 ID : 6306802633039  
Option 3 ID : 6306802633036  
Option 4 ID : 6306802633038

**Q.16** In the context of information sources, a/an \_\_\_\_\_ is something set up and established by authority as a rule for the measure of quantity, weight, extent, value or quality.

- Ans**
- 1. encyclopaedia
  - 2. standard
  - 3. patent
  - 4. anthology

Question ID : 630680672376  
Option 1 ID : 6306802633071  
Option 2 ID : 6306802633069  
Option 3 ID : 6306802633068  
Option 4 ID : 6306802633070

**Q.17** In the context of information sources, which of the following is a reference book usually published once a year and contains many kinds of information?

- Ans**
- 1. Almanac
  - 2. Obituary
  - 3. Thesis
  - 4. Synopsis

Question ID : 630680672374  
Option 1 ID : 6306802633060  
Option 2 ID : 6306802633062  
Option 3 ID : 6306802633061  
Option 4 ID : 6306802633063

**Q.18** In the context of the physical planning of library, which of the following documents can be categorised as ephemeral materials?  
I. Old catalogues  
II. Old text books  
III. News bulletins

- Ans**
- 1. Only I and III
  - 2. Only II and III
  - 3. I, II and III
  - 4. Only I and II

Question ID : 630680672362  
Option 1 ID : 6306802633013  
Option 2 ID : 6306802633014  
Option 3 ID : 6306802633015  
Option 4 ID : 6306802633012

**Q.19** Library Committee is a body or organisation consisting of persons who are assigned the job of governance of a library. Which of the following is NOT a function of the library committee?

- Ans**
- 1. Accept gifts and donations for the library.
  - 2. Appointment, suspension and dismissal of senior library staff.
  - 3. Formulate library policies and objectives.
  - 4. Plan overall library development programmes and activities.

Question ID : 630680672361  
Option 1 ID : 6306802633009  
Option 2 ID : 6306802633008  
Option 3 ID : 6306802633011  
Option 4 ID : 6306802633010

**Q.20** In the context of library organization structure, which of the following refers to the process, of linking several activities to achieve a functioning whole?

- Ans**
- 1. Authorisation
  - 2. Coordination
  - 3. Departmentation
  - 4. Delegation

Question ID : 630680672359  
Option 1 ID : 6306802633002  
Option 2 ID : 6306802633000  
Option 3 ID : 6306802633003  
Option 4 ID : 6306802633001

Section : Discipline 5

**Q.1** The consequent increase in business and commercial activities emerged the need for \_\_\_\_\_ libraries.

- Ans**
- 1. national
  - 2. special
  - 3. public
  - 4. government

Question ID : 630680672303  
Option 1 ID : 6306802632779  
Option 2 ID : 6306802632776  
Option 3 ID : 6306802632778  
Option 4 ID : 6306802632777

**Q.2** American Library Association was founded in \_\_\_\_\_ with its headquarters at \_\_\_\_\_.

- Ans**
- 1. 1876, Chicago
  - 2. 1856, Washington DC
  - 3. 1886, Utah
  - 4. 1896, California

Question ID : 630680672305  
Option 1 ID : 6306802632786  
Option 2 ID : 6306802632787  
Option 3 ID : 6306802632785  
Option 4 ID : 6306802632784

**Q.3** In the context of information sources, which of the following statements is correct regarding magazines?

I. They are published by newspaper and commercial publishers.

II. The authors are journalists, and freelance writers.

III. They include a lot of advertisements.

**Ans**  1. Only I and III

2. Only I and II

3. I, II and III

4. Only II and III

Question ID : 630680672378  
Option 1 ID : 6306802633077  
Option 2 ID : 6306802633076  
Option 3 ID : 6306802633079  
Option 4 ID : 6306802633078

**Q.4** Which of the following invention helped in quicker dissemination of information in late 1800's?

I. Telephone

II. Telegraph

**Ans**  1. Only I

2. Both I and II

3. Only II

4. Neither I nor II

Question ID : 630680672319  
Option 1 ID : 6306802632840  
Option 2 ID : 6306802632842  
Option 3 ID : 6306802632841  
Option 4 ID : 6306802632843

**Q.5** A CGI script is a program that runs on a web server. It serves as a link between the web server and some other program (a database) running on the server. What does the 'G' stand for in 'CGI'?

**Ans**  1. Gradation

2. Generation

3. Gateway

4. Graphics

Question ID : 630680672345  
Option 1 ID : 6306802632946  
Option 2 ID : 6306802632947  
Option 3 ID : 6306802632945  
Option 4 ID : 6306802632944

Q.6 Which of the following invented paper in 105 A.D?

- Ans
- 1. Indian
  - 2. Chinese
  - 3. American
  - 4. African

Question ID : 630680672318  
Option 1 ID : 6306802632838  
Option 2 ID : 6306802632836  
Option 3 ID : 6306802632837  
Option 4 ID : 6306802632839

Q.7 In a Dictionary Catalogue, we normally provide which of the following entries?

- I. Collaborator Added Entries
- II. Subject Added Entries
- III. Title Added Entries

- Ans
- 1. Only II and III
  - 2. I, II and III
  - 3. Only I and II
  - 4. Only I and III

Question ID : 630680672393  
Option 1 ID : 6306802633138  
Option 2 ID : 6306802633139  
Option 3 ID : 6306802633136  
Option 4 ID : 6306802633137

Q.8 Which of the following statements is correct regarding the characteristics of a web server?

- I. The primary function of a web server is to store, process and deliver web pages to clients.
- II. A web server can contain one or more websites.
- III. A web server processes incoming network requests over HTTP and several other related protocols.

- Ans
- 1. Only I and III
  - 2. Only II and III
  - 3. I, II and III
  - 4. Only I and II

Question ID : 630680672346  
Option 1 ID : 6306802632949  
Option 2 ID : 6306802632950  
Option 3 ID : 6306802632951  
Option 4 ID : 6306802632948

Q.9 In a classified catalogue, the main entry of a book starts with the \_\_\_\_\_ of the book.

- Ans
- 1. call number
  - 2. accession number
  - 3. reference number
  - 4. serial number

Question ID : 630680672391  
Option 1 ID : 6306802633129  
Option 2 ID : 6306802633130  
Option 3 ID : 6306802633131  
Option 4 ID : 6306802633128

Q.10 In the context of information sources, which of the following is a type of secondary periodicals?

- I. Indexing Periodical
- II. Abstracting Periodical

- Ans
- 1. Neither I nor II
  - 2. Only II
  - 3. Both I and II
  - 4. Only I

Question ID : 630680672377  
Option 1 ID : 6306802633075  
Option 2 ID : 6306802633073  
Option 3 ID : 6306802633074  
Option 4 ID : 6306802633072

Q.11 In the context of types of information services, which of the following statements is correct regarding Current awareness service (CAS)?

- I. It is in response to a specific query.
- II. It is a continuous service provided to the information seekers irrespective of the stage and progress of their research.

- Ans
- 1. Only I
  - 2. Both I and II
  - 3. Only II
  - 4. Neither I nor II

Question ID : 630680672385  
Option 1 ID : 6306802633104  
Option 2 ID : 6306802633106  
Option 3 ID : 6306802633105  
Option 4 ID : 6306802633107



**Q.12** Which of the following is an advantage of centralized cataloguing?

- I. Uniform and standard cataloguing practices can be adopted.
- II. Pooling up the necessary funds to opt for centralized cataloguing may be difficult for some libraries.
- III. Some of the professional staff who are relieved of cataloguing work can be utilised for other useful professional service.

**Ans**  1. Only II and III

2. Only I and II

3. Only I and III

4. I, II and III

Question ID : 630680672399  
Option 1 ID : 6306802633162  
Option 2 ID : 6306802633160  
Option 3 ID : 6306802633161  
Option 4 ID : 6306802633163

**Q.13** In the context of information sources, which of the following statements is correct regarding periodicals?

- I. A periodical is any publication that appears at regular intervals and intended to continue indefinitely.
- II. A periodical is also referred to as a journal.
- III. Scholarly periodicals are primary periodicals.

**Ans**  1. Only I and II

2. Only I and III

3. I, II and III

4. Only II and III

Question ID : 630680672379  
Option 1 ID : 6306802633080  
Option 2 ID : 6306802633081  
Option 3 ID : 6306802633083  
Option 4 ID : 6306802633082

**Q.14** In the context of subject cataloguing, which of the following principles is involved in subject heading?

- I. Uniformity in headings
- II. Direct and specific entry

**Ans**  1. Only II

2. Both I and II

3. Only I

4. Neither I nor II

Question ID : 630680672396  
Option 1 ID : 6306802633149  
Option 2 ID : 6306802633150  
Option 3 ID : 6306802633148  
Option 4 ID : 6306802633151

**Q.15** In the context of information services, \_\_\_\_\_ are list of references which an author mentions in his/her writing indicating that the references have been used by him/her for some purpose such as, support for a particular viewpoint, or as an authority for a statement of fact, or an acknowledgement of an earlier work on which the present work is based, or an indication of a related work and so on.

- Ans**
- 1. archives
  - 2. periodicals
  - 3. journals
  - 4. citations

Question ID : 630680672384  
Option 1 ID : 6306802633101  
Option 2 ID : 6306802633102  
Option 3 ID : 6306802633103  
Option 4 ID : 6306802633100

**Q.16** In the context of entries in catalogues, which of the following statements is correct?

- I. In dictionary catalogue the entries are arranged according to alphabetical order.
- II. In classified catalogue the entries are arranged according to class numbers.

- Ans**
- 1. Only I
  - 2. Only II
  - 3. Neither I nor II
  - 4. Both I and II

Question ID : 630680672392  
Option 1 ID : 6306802633132  
Option 2 ID : 6306802633133  
Option 3 ID : 6306802633135  
Option 4 ID : 6306802633134

**Q.17** In which of the following type of centralised service, a central organisation produces a bibliography from which libraries can prepare their own catalogues?

- Ans**
- 1. MARC Service
  - 2. Cataloguing-in-Source
  - 3. Information Service
  - 4. Cataloguing-in-publication

Question ID : 630680672398  
Option 1 ID : 6306802633157  
Option 2 ID : 6306802633158  
Option 3 ID : 6306802633156  
Option 4 ID : 6306802633159

**Q.18** Which of the following is NOT an objective of Indian Association of Special and Information Centres [IASLIC]?

**Ans** ✓ 1.

To discourage the systematic acquisition, organization and dissemination of knowledge

✗ 2.

To act as a centre for information in scientific, technical and other fields

✗ 3.

To act as a centre for research special library and documentation techniques

✗ 4.

To improve the technical efficiency of workers in special libraries

Question ID : 630680672302

Option 1 ID : 6306802632773

Option 2 ID : 6306802632772

Option 3 ID : 6306802632774

Option 4 ID : 6306802632775

**Q.19** The Indian Library Association was founded in \_\_\_\_\_ at \_\_\_\_\_.

**Ans** ✗ 1. 1992, Calcutta

✗ 2. 1983, Calcutta

✓ 3. 1933, Calcutta

✗ 4. 1947, Calcutta

Question ID : 630680672304

Option 1 ID : 6306802632783

Option 2 ID : 6306802632782

Option 3 ID : 6306802632780

Option 4 ID : 6306802632781

**Q.20** Which of the following statements is correct regarding the objectives of subject cataloguing?

I. To provide access by subject to all relevant material.

II. To provide entry through any vocabulary common to a considerable group of users, specialists or laymen.

III. To provide subject access to materials through all suitable principles of subject organisation such as matter and applications.

**Ans** ✓ 1. I, II and III

✗ 2. Only I and III

✗ 3. Only I and II

✗ 4. Only II and III

Question ID : 630680672397

Option 1 ID : 6306802633155

Option 2 ID : 6306802633153

Option 3 ID : 6306802633152

Option 4 ID : 6306802633154