

**DSSSB
PGT**

Previous Year Paper
(Home/Domestic Science)
15 Jul, 2024 Shift 2



Test Prime

**ALL EXAMS,
ONE SUBSCRIPTION**



70,000+
Mock Tests



Personalised
Report Card



Unlimited
Re-Attempt



600+
Exam Covered



Previous Year
Papers



500%
Refund



ATTEMPT FREE MOCK NOW



GOVT. OF NCT OF DELHI
Delhi Subordinate Services Selection Board
FC-18, Institutional Area, Karkardooma, Delhi – 110092.
www.dsssb.delhigovt.nic.in

ne	
ame	
	15/07/2024
	2:00 PM - 5:00 PM
	PGT (Home Science Domestic Science)

Ability and Reasoning Ability

are sitting in two parallel rows containing 4 people each in such a way that
al distance between adjacent persons.
J, K and L are seated and all of them are facing south.
Q, R and S are seated and all of them are facing north.
erson faces another person from the other row.
to the right of R. Only two people sit between P and R. The one facing Q
to the right of the one facing R. K sits to the immediate right of L. J sits to
ite right of K and does not face Q.
following represents both people facing each other?

Adda247

Question ID : 630680757552
Option 1 ID : 6306802969196
Option 2 ID : 6306802969194
Option 3 ID : 6306802969193
Option 4 ID : 6306802969195

भाषा में,
हे 'A, B की माता है'
हे 'A, B का भाई है'
हे 'A, B की पत्नी है'
हे 'A, B का पिता है'
ार पर, यदि 'P × M ÷ L - K × N ÷ J × Q' है, तो K, Q से किस प्रकार संबंधित है?

- पुत्र (नाती)
- पिता (ससुर)
- की माता (सास)
- ज भाई (मामा)

Following letter-number clusters will replace the question mark (?) in the series to make it logically complete?

22, CFJ 33, DHM 44, ?

33

33

55

44

Question ID : 630680569873

Option 1 ID : 6306802228372

Option 2 ID : 6306802228374

Option 3 ID : 6306802228371

Option 4 ID : 6306802228373

Arjun correctly remembers that they have watched a movie on some day after Thursday, but his friend Joshith remembers that they have watched the movie on some day before Friday but after Tuesday. On which day did both watch the movie?

Wednesday

Friday

Monday

Tuesday

Question ID : 630680350125

Option 1 ID : 6306801362790

Option 2 ID : 6306801362792

Option 3 ID : 6306801362789

Option 4 ID : 6306801362791

A person starts from Point A and walks 250 m towards the south. He then takes a right turn and walks 100 m to reach Point B. Gaurav starts from Point X, which is 100 m to the west of Point A, and walks 50 m towards the east. He then takes a right turn and walks 50 m to reach Point Y. What is the shortest distance between Point Y and Point B?

(Assume all turns are 90° turns only.)

100 m

150 m

200 m

250 m

Question ID : 630680344135

Option 1 ID : 6306801338855

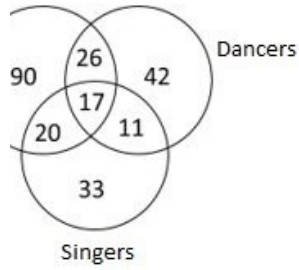
Option 2 ID : 6306801338854

Option 3 ID : 6306801338853

Option 4 ID : 6306801338856

Study the given diagram carefully and answer the question that follows.

The numbers in different sections indicate the number of people.



How many such actors are there who are also dancers and singers?

Question ID : 630680316310

Option 1 ID : 6306801230873

Option 2 ID : 6306801230875

Option 3 ID : 6306801230876

Option 4 ID : 6306801230874

Code,
 'ion where' is coded as 'ol pj fd mn',
 'rs not' is coded as 'vc ui bb pj',
 'i want' is coded as 'as fd vc bn' and
 'od' is coded as 'vc bn jh ui'.
 (Each letter is coded only.)
 Which of the following is a possible code for 'where'?

(a) 'fd' or 'pj'

(b) 'pj' or 'mn'

(c) 'mn' or 'fd'

(d) 'mn' or 'ol'

Question ID : 630680797584

Option 1 ID : 6306803125293

Option 2 ID : 6306803125294

Option 3 ID : 6306803125295

Option 4 ID : 6306803125292

tion, three statements are given, followed by two conclusions numbered I and II. Assuming the statements to be true, even if they seem to be at variance with commonly known facts, decide which of the conclusions logically follow(s) from the

Statements:
I. All nails are screws.
II. Some screws are pins.
III. All pins are bolts.
IV. Some bolts are screws.
V. Some screws are bolts.

Conclusion I follows.

Neither conclusion I nor conclusion II follows.

Conclusion I follows.

Conclusions I and II follow.

Question ID : 630680158213
Option 1 ID : 630680612381
Option 2 ID : 630680612383
Option 3 ID : 630680612380
Option 4 ID : 630680612382

Code, 'give' is coded as 'qw cd hj hg', 'very' is coded as 'qa pn cd ez', 'your' is coded as 'hj hg qa io' and 'luable is' is coded as 'hj io gg pn'. (Each letter is coded as two letter coded only.) What is the possible code for 'very'?

'cd' or 'pn'

'ez' or 'cd'

'ez' or 'qa'

'pn' or 'ez'

Question ID : 630680797565
Option 1 ID : 6306803125216
Option 2 ID : 6306803125219
Option 3 ID : 6306803125217
Option 4 ID : 6306803125218

in is based on the five, three-digit numbers given below.

3 777 731 806 (Right)

97 – First digit = 6, second digit = 9 and third digit = 7)

operations to be done from left to right.

Numbers are arranged in ascending order, the position(s) of how many remain unchanged?

More than two

Question ID : 630680798817

Option 1 ID : 6306803130089

Option 2 ID : 6306803130087

Option 3 ID : 6306803130086

Option 4 ID : 6306803130088

In a series, only one letter-cluster is incorrect. Select the incorrect letter-cluster.

NOP RUS

Question ID : 630680631697

Option 1 ID : 6306802472720

Option 2 ID : 6306802472719

Option 3 ID : 6306802472718

Option 4 ID : 6306802472721

A and F live on six different floors of the same building. The lowermost floor of the building is numbered 1, the floor above it, number 2 and so on till the top floor, which is numbered 6.

The floor numbers in which C and D live add up to 10. Only 3 people live on the floor in which F and E live. E lives on an even numbered floor. B lives on a floor below A. D lives on a floor below F. Which floor is the highest floor?

starts from Point A and walks 1 km towards the north. He then takes a left turn 1 km. He again takes a left turn and walks 5 km to reach Point B. Nidhi starts from Point X, which is 1 km to the south of Point A, and walks 3 km towards the south. She then takes a left turn and walks 1 km to reach Point Y. What is the shortest distance between Point Y and Point B? (Assume all turns are 90° turns only.)

Question ID : 630680344136
 Option 1 ID : 6306801338859
 Option 2 ID : 6306801338860
 Option 3 ID : 6306801338857
 Option 4 ID : 6306801338858

Which of the following four letter-cluster pairs are alike in a certain way and thus form a group? Which is the letter-cluster pair that does NOT belong to that group? (The odd one out is not based on the number of consonants/vowels or their positions in the letter-cluster.)

- G
- K
- LN
- BE

Question ID : 630680694979
 Option 1 ID : 6306802722156
 Option 2 ID : 6306802722157
 Option 3 ID : 6306802722158
 Option 4 ID : 6306802722155

Five people are sitting in a row, facing north. Only two people sit to the right of F. C sits second to the right of F. Only one person sits between C and A. Only four people sit between F and B. D sits fourth to the right of A. If no other person is sitting in the row, what is the total number of people sitting in the row?

Question ID : 630680149701
 Option 1 ID : 630680578973
 Option 2 ID : 630680578975
 Option 3 ID : 630680578974
 Option 4 ID : 630680578972

Question is based on the following words.

MAN SEA

How many letters are there between the second letter of the second word from the left and the third letter of the second word from the left in the English alphabetical order?

Question ID : 630680753918
Option 1 ID : 6306802954895
Option 2 ID : 6306802954893
Option 3 ID : 6306802954896
Option 4 ID : 6306802954894

Which of the following letter-clusters are alike in some manner and hence form a group? Which letter-cluster does not belong to that group? (Note: the odd one out is identified on the basis of the number of consonants/vowels or their position in the letter-cluster.)

Question ID : 630680341858
Option 1 ID : 6306801329866
Option 2 ID : 6306801329865
Option 3 ID : 6306801329867
Option 4 ID : 6306801329868

Question is based on the five, three-digit numbers given below.

57 828 669 593 (Right)

97 – First digit = 6, second digit = 9 and third digit = 7)

Operations to be done from left to right.

If the numbers are arranged in ascending order, the position(s) of how many numbers remain unchanged?

More than Two

Question ID : 630680798804
Option 1 ID : 6306803130060
Option 2 ID : 6306803130058
Option 3 ID : 6306803130061
Option 4 ID : 6306803130059

भाषा में,
 है 'A, B की माता है'
 है 'A, B का भाई है'
 है 'A, B की पत्नी है'
 है 'A, B का पिता है'
 पर, यदि 'H × J ÷ G - F + E' है, तो H, E से किस प्रकार संबंधित है?

की माता (नानी)

की माता (दादी)

का भाई (मामा)

Question ID : 630680149672

Option 1 ID : 630680578859

Option 2 ID : 630680578858

Option 3 ID : 630680578857

Option 4 ID : 630680578856

I, J, C, D, E, F, G and H are sitting around a square table, facing the centre. Some of them are sitting at the corners, while some are sitting at the middle of the sides. C is sitting second to the right of E. Only three people are sitting between H and D. H is an immediate neighbour of E. Only three people are sitting between E and I when counted from the left of E. E is sitting at one of the corners sitting to the immediate right of C. J is not an immediate neighbour of D. Who is sitting to the immediate left of J?

Question ID : 630680352112

Option 1 ID : 6306801370546

Option 2 ID : 6306801370545

Option 3 ID : 6306801370547

Option 4 ID : 6306801370548

Awareness

Which festival is celebrated every year to pay musical tribute to the states in which of the following states of India?

Uttar Pradesh

Madhya Pradesh

Uttarakhand

Question ID : 630680635380

Option 1 ID : 6306802487401

Option 2 ID : 6306802487404

Which of the following was NOT a member of the Drafting Committee of the Indian Constitution in 1947?

- Ambedkar
- Bal Gangadhar Tilak
- B.R. Ambedkar
- K.M. Munshi

Question ID : 630680302816
Option 1 ID : 6306801177929
Option 2 ID : 6306801177928
Option 3 ID : 6306801177926
Option 4 ID : 6306801177927

Which state had the highest population density in the Census 2011, identify the most populated district of India?

- West Bengal
- Uttar Pradesh
- Madhya Pradesh
- Rajasthan

Question ID : 630680627537
Option 1 ID : 6306802456255
Option 2 ID : 6306802456254
Option 3 ID : 6306802456256
Option 4 ID : 6306802456257

Which Union Territory was at second position in literacy rate, as per Census 2011?

- Chandigarh
- Andhra Pradesh
- Goa
- Madhya Pradesh

Question ID : 630680884455
Option 1 ID : 6306803463727
Option 2 ID : 6306803463726
Option 3 ID : 6306803463728
Option 4 ID : 6306803463725

Which team won the Santosh Trophy in 2022-23?

- Odisha
- Andhra Pradesh
- West Bengal
- Uttar Pradesh

Question ID : 630680884929
Option 1 ID : 6306803465587
Option 2 ID : 6306803465586

is a special organ that produces clonal offspring in which plant?

- steris marginalis
- hantia polymorpha
- etum arvense
- richum commune

Question ID : 630680746051
 Option 1 ID : 6306802924362
 Option 2 ID : 6306802924363
 Option 3 ID : 6306802924361
 Option 4 ID : 6306802924360

out of the following was written by Harshavardhana?

- aduta
- mbari
- uvamsa
- darshika

Question ID : 63068052297
 Option 1 ID : 630680201292
 Option 2 ID : 630680201291
 Option 3 ID : 630680201293
 Option 4 ID : 630680201290

utes to income inequalities between formal and informal workers?

- l distribution of wealth
- mination based on age, gender, and experience
- ecurity
- anted benefits for all workers

Question ID : 630680878128
 Option 1 ID : 6306803439188
 Option 2 ID : 6306803439190
 Option 3 ID : 6306803439189
 Option 4 ID : 6306803439191

he urban poor _____.

- ate in search of alternative employment
- ell educated
- ite from the different urban areas
- nancially sound

Question ID : 630680324372
 Option 1 ID : 6306801261971
 Option 2 ID : 6306801261969

Which of the following statements is/are correct?

Statement 1: A producer can increase their profit by maximising the production of a given level of cost of production.

Statement 2: A producer can increase their profit by minimising the cost of production at a given level of output.

Statement 1

Statement 2

Neither Statement 1 nor 2

Statements 1 and 2

Question ID : 630680884656
Option 1 ID : 6306803464509
Option 2 ID : 6306803464510
Option 3 ID : 6306803464512
Option 4 ID : 6306803464511

The All India Association was founded by Dadabhai Naoroji in _____.

1885

1886

1887

Question ID : 630680326439
Option 1 ID : 6306801269845
Option 2 ID : 6306801269847
Option 3 ID : 6306801269846
Option 4 ID : 6306801269848

Which festival commemorates the victory of good over evil and is celebrated with the effigies of the demon king Ravana?

Vishu

Vishu

Vishu

Question ID : 630680696241
Option 1 ID : 6306802727143
Option 2 ID : 6306802727142
Option 3 ID : 6306802727144
Option 4 ID : 6306802727141

Which of the following statements is correct about the structure of animal and plant cells?

Plant cells have large central vacuoles.

Plant cells have plastids such as chloroplasts.

Animal cells have centrioles.

Plant cells have Golgi apparatus.

Question ID : 630680732197

Option 1 ID : 6306802869584

Option 2 ID : 6306802869583

Option 3 ID : 6306802869582

Option 4 ID : 6306802869585

Which of the following is the local festival of Nagaland?

Chakma

Wairai

Bihu

Diwali

Question ID : 630680393984

Option 1 ID : 6306801536240

Option 2 ID : 6306801536241

Option 3 ID : 6306801536238

Option 4 ID : 6306801536239

When a small quantity of a food item is taken, it is wrapped in a piece of paper and crushed. If the paper is not torn, the paper is then straightened, and an oily patch is seen on it. This indicates the presence of _____ in the food.

Hydrogen

Carbon

Protein

Question ID : 630680884620

Option 1 ID : 6306803464369

Option 2 ID : 6306803464370

Option 3 ID : 6306803464371

Option 4 ID : 6306803464372

Which of the following Union Territories is the cultural festival 'Attolu Eidu'?

Aman and Nicobar

Andaman and Diu

Chandigarh

Daman and Diu

Question ID : 630680393987

Option 1 ID : 6306801536250

Option 2 ID : 6306801536252

Option 3 ID : 6306801536253

Option 4 ID : 6306801536251

Which Greek ruler Demetrius I, who moved into the Indian plains, was the son of?

Antiochus III

Seleucus I

Ptolemy

Antiochus

Question ID : 63068084306

Option 1 ID : 630680326779

Option 2 ID : 630680326777

Option 3 ID : 630680326778

Option 4 ID : 630680326776

Which state held the National Games 2023?

Arunachal Pradesh

Uttar Pradesh

Tamil Nadu

Question ID : 630680746110

Option 1 ID : 6306802924598

Option 2 ID : 6306802924597

Option 3 ID : 6306802924599

Option 4 ID : 6306802924596

Read the following statements regarding heterotrophs and select the correct

statements.

A: Heterotrophs produce their own food using light energy.
B: Mutualism involves a mutually beneficial relationship between two organisms.

A is correct

A and B are correct

B is correct

Neither A nor B is correct

Question ID : 630680884604
Option 1 ID : 6306803464310
Option 2 ID : 6306803464311
Option 3 ID : 6306803464309
Option 4 ID : 6306803464312

Read the following statements regarding nutrition in unicellular organisms and select the correct option.

A: Amoeba engulfs food by extending temporary finger-like projections from its cell membrane. The projections surround and enclose the food particle, forming a food vacuole.
B: In a plant cell, the cell maintains a definite shape and food is taken in at a specific site through the help of cilia that cover its entire surface.

A is correct

Neither A nor B is correct

B is correct

A and B are correct

Question ID : 630680884615
Option 1 ID : 6306803464350
Option 2 ID : 6306803464352
Option 3 ID : 6306803464349
Option 4 ID : 6306803464351

Read the following question and select the correct option.

A pipe can fill an empty cistern alone in 30 hours and pipe B can fill the same cistern in 45 hours. The time taken (in hours) by them to fill half of the cistern by working together will be

Question ID : 630680658380
Option 1 ID : 6306802577462
Option 2 ID : 6306802577463
Option 3 ID : 6306802577464
Option 4 ID : 6306802577465

It takes 40 minutes to type 2 pages. How long (in minutes) will he take to type

Question ID : 630680690142
Option 1 ID : 6306802703225
Option 2 ID : 6306802703224
Option 3 ID : 6306802703227
Option 4 ID : 6306802703226

Two students appeared in an examination. One of them secured 9 marks more than the other and his marks were 52% of the sum of their marks. The sum of the marks they secured was:

Question ID : 630680573497
Option 1 ID : 6306802242859
Option 2 ID : 6306802242856
Option 3 ID : 6306802242858
Option 4 ID : 6306802242857

If $\sqrt{y} = 121$, find the positive value of y .

Question ID : 630680850408
Option 1 ID : 6306803330791
Option 2 ID : 6306803330789
Option 3 ID : 6306803330792
Option 4 ID : 6306803330790

The radius of a sphere is 42 cm more than the diameter of a smaller sphere. The surface area of the larger sphere is 8448 cm^2 more than the surface area of the smaller sphere. What is the diameter (in cm) of the larger sphere? [Use $\pi = 22/7$]

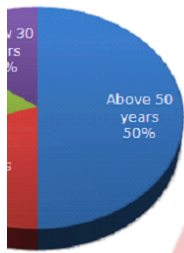
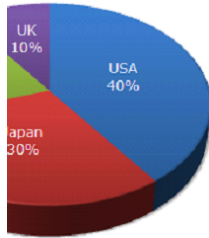
selling price of a bed is 9 times of its initial selling price, then the new profit is 11 times of the initial nominal profit. Find the initial profit (in %).

- 1
- 2
- 3

Question ID : 630680632684
 Option 1 ID : 6306802476637
 Option 2 ID : 6306802476636
 Option 3 ID : 6306802476634
 Option 4 ID : 6306802476635

charts exhibit the distribution of the overseas tourist traffic from India. The two charts show the distribution by country and the age profiles of the tourists respectively.

Distribution of Overseas Tourist Traffic from India.



countries, Switzerland accounted for 25% of the Indian tourist traffic, and it is also recorded that a total of 25 lakh Indian tourists had gone to Switzerland. Hence find the number of 30–39-year-old Indian tourists who went abroad in that

- 1) 10 lakhs
- 2) 15 lakhs
- 3) 20 lakhs
- 4) 25 lakhs

Question ID : 630680850619
 Option 1 ID : 6306803331625
 Option 2 ID : 6306803331628
 Option 3 ID : 6306803331627
 Option 4 ID : 6306803331626

uphill with an average speed of 24 kmph and comes down with an average kmph. The distance travelled in both the cases being the same, the speed for the entire journey is:

kmph

kmph

kmph

kmph

Question ID : 630680850451
Option 1 ID : 6306803330961
Option 2 ID : 6306803330963
Option 3 ID : 6306803330962
Option 4 ID : 6306803330964

Sum of 13 numbers is 11. If each number is multiplied by 6, then what will the sum be:

Question ID : 630680552058
Option 1 ID : 6306802158460
Option 2 ID : 6306802158457
Option 3 ID : 6306802158459
Option 4 ID : 6306802158458

Sum of 13 numbers is 9. If each number is multiplied by 8, then what will the sum be ?

Question ID : 630680568903
Option 1 ID : 6306802224424
Option 2 ID : 6306802224423
Option 3 ID : 6306802224422
Option 4 ID : 6306802224421

Time (in years) will ₹3600 fetch a simple interest of ₹1080 at 6% per annum rate?

value of X if

$$-\sqrt{31 + \sqrt{308 + \sqrt{237 + \sqrt{361}}}}$$

Question ID : 630680378636
Option 1 ID : 6306801475592
Option 2 ID : 6306801475591
Option 3 ID : 6306801475594
Option 4 ID : 6306801475593

f a number is what percentage of that number?

Question ID : 630680591367
Option 1 ID : 6306802313938
Option 2 ID : 6306802313936
Option 3 ID : 6306802313935
Option 4 ID : 6306802313937

585115051 is divisible by which of the following?

Question ID : 630680740085
Option 1 ID : 6306802900929
Option 2 ID : 6306802900930
Option 3 ID : 6306802900928
Option 4 ID : 6306802900931

An article for ₹119, a man loses 15%. At what price (in ₹) should he sell it to

Question ID : 630680633003
 Option 1 ID : 6306802477910
 Option 2 ID : 6306802477913
 Option 3 ID : 6306802477912
 Option 4 ID : 6306802477911

Naresh deposited a sum of ₹85850 at 20% rate of interest per annum, compounded annually. The total amount (in ₹) received by Naresh after 2 years is:

- 24
- 13
- 81
- 34

Question ID : 630680809088
 Option 1 ID : 6306803169931
 Option 2 ID : 6306803169934
 Option 3 ID : 6306803169933
 Option 4 ID : 6306803169932

40 men can complete a work in 500 days. If 30 men quit the work after 5 days, then in how many days will the remaining work be completed?

- 100 days
- 100 days
- 100 days
- 100 days

Question ID : 630680584072
 Option 1 ID : 6306802285131
 Option 2 ID : 6306802285130
 Option 3 ID : 6306802285133
 Option 4 ID : 6306802285132

The surface area of a solid hemisphere is 1039.5 cm^2 , the diameter of the hemisphere is:

- 7 cm
- 14 cm
- 14 cm
- 28 cm

product is available at a discount of 75%. If the shopkeeper charges
is its marked price?

- 4
- 6
- 14
- 6

Question ID : 630680850404
 Option 1 ID : 6306803330775
 Option 2 ID : 6306803330776
 Option 3 ID : 6306803330773
 Option 4 ID : 6306803330774

s 3 km each at speeds of 10 kmph, 20 kmph, 30 kmph and 60 kmph
 . Its average speed over the entire distance is:

- 10ph
- 15ph
- 18ph
- 12ph

Question ID : 630680850453
 Option 1 ID : 6306803330969
 Option 2 ID : 6306803330970
 Option 3 ID : 6306803330972
 Option 4 ID : 6306803330971

Language and Comprehension

Most appropriate ANTONYM of the word mentioned in the brackets to fill in

to the Himalayas was _____ (arduous).

- smooth
- amazing
- intending

Question ID : 630680844982
 Option 1 ID : 6306803309851
 Option 2 ID : 6306803309852
 Option 3 ID : 6306803309853
 Option 4 ID : 6306803309850

Most appropriate tag to fill in the blank.
"I'm sorry, _____?"

you

ou

an't you

u

Question ID : 630680145389

Option 1 ID : 630680562531

Option 2 ID : 630680562530

Option 3 ID : 630680562532

Option 4 ID : 630680562533

Most appropriate synonym of the highlighted word.

"I rummaged through the overflowing jewellery box, searching for the perfect ring. 'I have so many options here! It's difficult to decide. Maybe if this box was reorganised, I could find what I'm looking for faster.'"

active

reled

reared

Question ID : 630680748095

Option 1 ID : 6306802932007

Option 2 ID : 6306802932005

Option 3 ID : 6306802932006

Option 4 ID : 6306802932004

Which word is NOT CORRECTLY spelt in the given sentence.

"Due to the inclement weather had a significant consequence on the outdoor event's plans, in an emergency, the organisers decided to have an indoor backup with a theme that included camouflage elements to seamlessly integrate with the event."

consequence

emergency

sequence

camouflage

Question ID : 630680845021

Option 1 ID : 6306803310006

Option 2 ID : 6306803310008

Option 3 ID : 6306803310007

Option 4 ID : 6306803310009

Most appropriate idiom that can substitute the highlighted segment in the sentence.

Government would provide the bump in the road that this industry so badly

is in the dark

is leader to cry on

is of life

is in the arm

Question ID : 630680729661

Option 1 ID : 6306802859284

Option 2 ID : 6306802859283

Option 3 ID : 6306802859285

Option 4 ID : 6306802859286

Most appropriate proverb for the underlined segment in the given sentence.
People who are dependent on others must be satisfied with what is offered to them and should not make a scene out of it.

Many vessels make most noise

Rich men can't be choosers

People are at heart

People in glass houses don't throw stones at others

Question ID : 630680158877

Option 1 ID : 630680614978

Option 2 ID : 630680614977

Option 3 ID : 630680614979

Option 4 ID : 630680614976

Most appropriate idiom to substitute the underlined segment in the given sentence.

As the deadline of the task was approaching, so we decided to accelerate our efforts.

is like pedal to the floor

is on the grass

is to up the pace

is like ground running

Question ID : 630680845545

Option 1 ID : 6306803312064

Option 2 ID : 6306803312063

Option 3 ID : 6306803312065

Option 4 ID : 6306803312066

Most appropriate tag to fill in the blank.
Her sister, "You didn't complete your assignment, _____?"

- you
- ou
- 't you
- you

Question ID : 630680145390
 Option 1 ID : 630680562534
 Option 2 ID : 630680562535
 Option 3 ID : 630680562537
 Option 4 ID : 630680562536

Most appropriate idiom that fits the underlined scenario in the given

nts to be happy one must adapt to one's circumstances and

- erosity is better than miserliness
- an't always get what you want
- your heart on your sleeve
- our coat according to your cloth

Question ID : 630680725569
 Option 1 ID : 6306802843376
 Option 2 ID : 6306802843378
 Option 3 ID : 6306802843379
 Option 4 ID : 6306802843377

Most appropriate ANTONYM of the highlighted word in the given sentence.

enthusiasm was evident in their performance.

- ement
- iciency
- hy

Question ID : 630680845015
 Option 1 ID : 6306803309982
 Option 2 ID : 6306803309985
 Option 3 ID : 6306803309984
 Option 4 ID : 6306803309983

Most appropriate meaning of the idiom given below.

Thick and thin

in good times

in perfect condition

in adverse situations

in all circumstances

Question ID : 630680845208

Option 1 ID : 6306803310744

Option 2 ID : 6306803310746

Option 3 ID : 6306803310745

Option 4 ID : 6306803310743

Most appropriate idiom that can substitute the highlighted segment in the sentence.

He takes a resolute stand where honesty is concerned.

to account

to kick his foot down

to stand on ground

to hold the hand and glove

Question ID : 630680615156

Option 1 ID : 6306802407299

Option 2 ID : 6306802407301

Option 3 ID : 6306802407300

Option 4 ID : 6306802407302

Most appropriate option to fill in the blank.

The scientist's results _____ meticulously analysed by the research team, significant correlations between variables.

being

Question ID : 630680906243

Option 1 ID : 6306803550087

Option 2 ID : 6306803550088

Option 3 ID : 6306803550086

Option 4 ID : 6306803550089

Most appropriate option to fill in the blank.

Completed once the full temple is constructed by placing the mirrors and
is a permanent fixture.

It will be

the

same

Question ID : 630680906242

Option 1 ID : 6306803550082

Option 2 ID : 6306803550083

Option 3 ID : 6306803550085

Option 4 ID : 6306803550084

Most appropriate verb to fill in the blank.

Attended by dignitaries from around the world, _____ meticulously
the organising committee.


Question ID : 630680742430

Option 1 ID : 6306802909995

Option 2 ID : 6306802909994

Option 3 ID : 6306802909997

Option 4 ID : 6306802909996



sion:

en passage and answer the questions that follow.

ome, married, had children of our own, found the seeds
less blooming also within us. Dad began dressing the
more complexity and less discernible logic. He draped
d of fur over it on Groundhog Day and lugged out a
t to ensure a shadow. When an earthquake struck Chile,
e pole on its side and spray painted a rift in the earth.
d and he dressed the pole as Death and hung from the
photos of Mom as a baby. We'd stop by and find odd
s from his youth arranged around the base: army
heatre tickets, old sweatshirts and tubes of Mom's
One autumn he painted the pole bright yellow. He
t with cotton swabs that winter for warmth and
offspring by hammering in six crossed sticks around
He ran lengths of string between the pole and the
d taped to the string letters of apology, admissions of
eas for understanding, all written in a frantic hand on
ds. He painted a sign saying LOVE and hung it from the
another that said FORGIVE, and then he died in the hall
radio on and we sold the house to a young couple who
ut the pole and the sticks and left them by the road on
day.

n No : 16

fact given in the passage.

the mom's death, the father dressed the pole as Death and hung from the
tos of mom as a baby.

tems which the father arranged around the base of the pole represented
s wife's personality and interests.

oung couple was sympathetic to the father's eccentricities and kept the pole

amily grew closer as they aged.

Question ID : 630680641328
Option 1 ID : 6306802510747
Option 2 ID : 6306802510749
Option 3 ID : 6306802510748
Option 4 ID : 6306802510746

sion:

en passage and answer the questions that follow.

ome, married, had children of our own, found the seeds
less blooming also within us. Dad began dressing the
more complexity and less discernible logic. He draped
d of fur over it on Groundhog Day and lugged out a
t to ensure a shadow. When an earthquake struck Chile,
e pole on its side and spray painted a rift in the earth.
d and he dressed the pole as Death and hung from the
photos of Mom as a baby. We'd stop by and find odd
s from his youth arranged around the base: army
heatre tickets, old sweatshirts and tubes of Mom's
One autumn he painted the pole bright yellow. He
t with cotton swabs that winter for warmth and
offspring by hammering in six crossed sticks around
He ran lengths of string between the pole and the
d taped to the string letters of apology, admissions of
eas for understanding, all written in a frantic hand on
ds. He painted a sign saying LOVE and hung it from the
another that said FORGIVE, and then he died in the hall
radio on and we sold the house to a young couple who
ut the pole and the sticks and left them by the road on
day.

n No : 17

most appropriate ANTONYM of the given words within the passage from
ptions.

d

ed

ed out

ed out



Question ID : 630680641327
Option 1 ID : 6306802510742
Option 2 ID : 6306802510743
Option 3 ID : 6306802510745
Option 4 ID : 6306802510744

sion:

en passage and answer the questions that follow.

ome, married, had children of our own, found the seeds
less blooming also within us. Dad began dressing the
more complexity and less discernible logic. He draped
d of fur over it on Groundhog Day and lugged out a
t to ensure a shadow. When an earthquake struck Chile,
e pole on its side and spray painted a rift in the earth.
d and he dressed the pole as Death and hung from the
photos of Mom as a baby. We'd stop by and find odd
s from his youth arranged around the base: army
heatre tickets, old sweatshirts and tubes of Mom's
One autumn he painted the pole bright yellow. He
t with cotton swabs that winter for warmth and
offspring by hammering in six crossed sticks around
He ran lengths of string between the pole and the
d taped to the string letters of apology, admissions of
eas for understanding, all written in a frantic hand on
ds. He painted a sign saying LOVE and hung it from the
another that said FORGIVE, and then he died in the hall
radio on and we sold the house to a young couple who
ut the pole and the sticks and left them by the road on
day.

n No : 18

tone of the passage.

getic

tional

atic

orous

Question ID : 630680641329

Option 1 ID : 6306802510750

Option 2 ID : 6306802510752

Option 3 ID : 6306802510751

Option 4 ID : 6306802510753

sion:

en passage and answer the questions that follow.

ome, married, had children of our own, found the seeds
less blooming also within us. Dad began dressing the
more complexity and less discernible logic. He draped
d of fur over it on Groundhog Day and lugged out a
t to ensure a shadow. When an earthquake struck Chile,
e pole on its side and spray painted a rift in the earth.
d and he dressed the pole as Death and hung from the
photos of Mom as a baby. We'd stop by and find odd
s from his youth arranged around the base: army
heatre tickets, old sweatshirts and tubes of Mom's
One autumn he painted the pole bright yellow. He
t with cotton swabs that winter for warmth and
offspring by hammering in six crossed sticks around
He ran lengths of string between the pole and the
d taped to the string letters of apology, admissions of
eas for understanding, all written in a frantic hand on
ds. He painted a sign saying LOVE and hung it from the
another that said FORGIVE, and then he died in the hall
radio on and we sold the house to a young couple who
ut the pole and the sticks and left them by the road on
day.

n No : 19

structure of the passage?

em/Solution

pare/Contrast

se/Effect

ription

Question ID : 630680641388

Option 1 ID : 6306802510977

Option 2 ID : 6306802510975

Option 3 ID : 6306802510976

Option 4 ID : 6306802510974

sion:

en passage and answer the questions that follow.

ome, married, had children of our own, found the seeds
less blooming also within us. Dad began dressing the
more complexity and less discernible logic. He draped
d of fur over it on Groundhog Day and lugged out a
t to ensure a shadow. When an earthquake struck Chile,
e pole on its side and spray painted a rift in the earth.
d and he dressed the pole as Death and hung from the
photos of Mom as a baby. We'd stop by and find odd
s from his youth arranged around the base: army
heatre tickets, old sweatshirts and tubes of Mom's
One autumn he painted the pole bright yellow. He
t with cotton swabs that winter for warmth and
offspring by hammering in six crossed sticks around
He ran lengths of string between the pole and the
d taped to the string letters of apology, admissions of
eas for understanding, all written in a frantic hand on
ds. He painted a sign saying LOVE and hung it from the
another that said FORGIVE, and then he died in the hall
radio on and we sold the house to a young couple who
ut the pole and the sticks and left them by the road on
day.

n No : 20

ie passage, what can be inferred about the father's ultimate
love and forgiveness?

- und solace and closure through his actions with the pole.
- ained hopeful for reconciliation even after his death.
- rugged to express his love and seek forgiveness.
- rbored resentment and bitterness towards his family.

Question ID : 630680641921
Option 1 ID : 6306802513100
Option 2 ID : 6306802513102
Option 3 ID : 6306802513099
Option 4 ID : 6306802513101

व्य क्रम सही नहीं हैं। उनके सही क्रम के चार विकल्प दिए गए हैं। उनमें
ल्प चुनिए।

र्य से

का फल है

के लिए होने वाले

ो जो संतोष होता है

1, 2

4, 2

3, 2

4, 3

Question ID : 630680736084

Option 1 ID : 6306802885024

Option 2 ID : 6306802885023

Option 3 ID : 6306802885021

Option 4 ID : 6306802885022

को पूर्ण करने के लिए सबसे उपयुक्त विकल्प का चयन करें।
से बहरा ____ है और गूंगा बोलता है।'

Question ID : 630680776633

Option 1 ID : 6306803044295

Option 2 ID : 6306803044294

Option 3 ID : 6306803044296

Option 4 ID : 6306803044293

नेखें और उत्तर के रूप में सही विकल्प चुनें।
गर करने के कारण भारत सारे विश्व में ख्याति हो गई।

न को तैयार करने के लिए भारत की सारे विश्व में ख्याति फैल गई।

न को तैयार करने के कारण भारत की ख्याति सारे विश्व में हो गई।

न को तैयार करने के कारण ही सारे विश्व में भारत की ख्याति हो गई।

श्व में भारत की ख्याति फैल गई इस ।

Question ID : 630680712771

Option 1 ID : 6306802792736

Option 2 ID : 6306802792739

Option 3 ID : 6306802792737

Option 4 ID : 6306802792738

र्षि का सबसे बड़ा शत्रु है" उपर्युक्त वाक्य में रेखांकित शब्द की शुद्ध वर्तनी है -

र

ष

र्ष

Question ID : 630680165015

Option 1 ID : 630680639107

Option 2 ID : 630680639106

Option 3 ID : 630680639105

Option 4 ID : 630680639104

य पाने की इच्छा रखने वाला' वाक्यांश के लिए उपयुक्त एक शब्द का चयन कीजिए-

इ

य

त

Question ID : 630680682777

Option 1 ID : 6306802673848

Option 2 ID : 6306802673850

Option 3 ID : 6306802673847

Option 4 ID : 6306802673849

व्य के रेखांकित वाक्यांश के लिए उपयुक्त शब्द का चयन कीजिए-

मिली जायदाद के कारण आज उसकी गिनती शहर के प्रतिष्ठित व्यक्तियों में होने लगी है

Adda247

Question ID : 630680682780

Option 1 ID : 6306802673860

Option 2 ID : 6306802673862

Option 3 ID : 6306802673859

Option 4 ID : 6306802673861

----- है।"

या विशेषण का प्रयोग कर इस वाक्य को पूर्ण कीजिए।

ीचे में पीछे की ओर है।

ेचे में कदाचित है।

ेचे में निःसंदेह है।

ेचे में संभवतः है।

व्य क्रम सही नहीं हैं। उनके सही क्रम के चार विकल्प दिए गए हैं। उनमें
ल्प चुनिए।

1 आवश्यक है।

विशेषण अपने ठीक स्थान पर

शेषण रखना आवश्यक है उसी प्रकार

गर संज्ञा के साथ

1, 2

2, 1

1, 2

1, 3

Question ID : 630680736085

Option 1 ID : 6306802885026

Option 2 ID : 6306802885025

Option 3 ID : 6306802885028

Option 4 ID : 6306802885027

खो मेरी बेटी कितनी सुंदर लग रही है ।

ें रिक्त स्थान की पूर्ति के लिए उचित कारक चिन्ह का चयन करें -

Question ID : 630680734509

Option 1 ID : 6306802878818

Option 2 ID : 6306802878819

Option 3 ID : 6306802878820

Option 4 ID : 6306802878821

रेक्त स्थान के लिए सही क्रिया - विशेषण विकल्प का चयन करें -
न जाता है तब वह कर जाता है ।

इ

रि

:

Question ID : 630680747127

Option 1 ID : 6306802928628

Option 2 ID : 6306802928631

Option 3 ID : 6306802928629

Option 4 ID : 6306802928630

कोक्ति का उचित अर्थ बताएं।
की रखवाली

मेशा रखवाली नहीं करता

रक्षक नहीं हो सकता

को दूध पसंद होता है

ेर नहीं होते

Question ID : 630680774971
Option 1 ID : 6306803037757
Option 2 ID : 6306803037756
Option 3 ID : 6306803037759
Option 4 ID : 6306803037758

ए सार्थक शब्द दें और उत्तर के रूप में सही विकल्प चुनें।
न की गई हो।

।

वेत

शित

स

Question ID : 630680685566
Option 1 ID : 6306802684810
Option 2 ID : 6306802684809
Option 3 ID : 6306802684812
Option 4 ID : 6306802684811

खेतरहा है उपयुक्त क्रिया का चयन कर वाक्य पूर्ण करें -

Adda247

Question ID : 630680791663
Option 1 ID : 6306803102320
Option 2 ID : 6306803102323
Option 3 ID : 6306803102322
Option 4 ID : 6306803102321

से किस मुहावरे का अर्थ 'कर्म रेखा' है?

ारा-होना

ली जाना

पड़ना

के अक्षर

के किस भाग में झुट्टि है-
भी पंद्रह मिनट है।

को
द्रह
ई।

Question ID : 630680793739
Option 1 ID : 6306803110127
Option 2 ID : 6306803110128
Option 3 ID : 6306803110129
Option 4 ID : 6306803110130

sion:

पर प्रश्न का उत्तर दें।

त। आसमान पर तारे भी ठिठुरते हुए मालूम होते थे। हल्कू अपने खेत के किनारे ओख के पत्तों की एक स के खटोले पर अपनी पुरानी गाढ़े की चादर ओढ़े हुए काँप रहा था। खटोले के नीचे उसका साथी कुत्ता, डाले सर्दी से कूँ कूँ कर रहा था। दो में से एक को भी नींद न आती थी।
। गर्दन में चिमटाते हुए कहा, “क्यों जबरा जाड़ा लगता है, कहा तो था घर में पियाल पर लेटा रह। तू यहाँ ! अब खा सर्दी, मैं क्या करूँ। जानता था। मैं हलवा पूरी खाने आ रहा हूँ। दौड़ते हुए आगे चले आए। अब ! के नाम को।” जबरा ने लेटे हुए दुम हिलाई और एक अंगड़ाई लेकर चुप हो गया। शायद वो ये समझ गया कूँ की आवाज़ से उसके मालिक को नींद नहीं आ रही है।
गल कर जबरा की ठंडी पीठ सहलाते हुए कहा, “कल से मेरे साथ न आना, नहीं तो ठंडे हो जाओगे। ये ने कहाँ से बर्फ़ लिए आ रही है।”

n No : 16

। बह रही थी?

हवा
श
इवा
। हवा

Question ID : 630680395883
Option 1 ID : 6306801543691
Option 2 ID : 6306801543688
Option 3 ID : 6306801543690
Option 4 ID : 6306801543689

sion:

पर प्रश्न का उत्तर दें।

त। आसमान पर तारे भी ठिठुरते हुए मालूम होते थे। हल्कू अपने खेत के किनारे ओख के पत्तों की एक स के खटोले पर अपनी पुरानी गाढ़े की चादर ओढ़े हुए काँप रहा था। खटोले के नीचे उसका साथी कुत्ता, डाले सर्दी से कूँ कूँ कर रहा था। दो में से एक को भी नींद न आती थी।

। गर्दन में चिमटाते हुए कहा, "क्यों जबरा जाड़ा लगता है, कहा तो था घर में पियाल पर लेटा रह। तू यहाँ

। अब खा सर्दी, मैं क्या करूँ। जानता था। मैं हलवा पूरी खाने आ रहा हूँ। दौड़ते हुए आगे चले आए। अब

। के नाम को।" जबरा ने लेटे हुए दुम हिलाई और एक अंगड़ाई लेकर चुप हो गया। शायद वो ये समझ गया कूँ की आवाज़ से उसके मालिक को नींद नहीं आ रही है।

गल कर जबरा की ठंडी पीठ सहलाते हुए कहा, "कल से मेरे साथ न आना, नहीं तो ठंडे हो जाओगे। ये ने कहाँ से बर्फ़ लिए आ रही है।"

n No : 17**कौन बैठा था?**

;

Question ID : 630680395881

Option 1 ID : 6306801543681

Option 2 ID : 6306801543682

Option 3 ID : 6306801543680

Option 4 ID : 6306801543683

sion:

पर प्रश्न का उत्तर दें।

त। आसमान पर तारे भी ठिठुरते हुए मालूम होते थे। हल्कू अपने खेत के किनारे ओख के पत्तों की एक स के खटोले पर अपनी पुरानी गाढ़े की चादर ओढ़े हुए काँप रहा था। खटोले के नीचे उसका साथी कुत्ता, डाले सर्दी से कूँ कूँ कर रहा था। दो में से एक को भी नींद न आती थी।

। गर्दन में चिमटाते हुए कहा, "क्यों जबरा जाड़ा लगता है, कहा तो था घर में पियाल पर लेटा रह। तू यहाँ

। अब खा सर्दी, मैं क्या करूँ। जानता था। मैं हलवा पूरी खाने आ रहा हूँ। दौड़ते हुए आगे चले आए। अब

। के नाम को।" जबरा ने लेटे हुए दुम हिलाई और एक अंगड़ाई लेकर चुप हो गया। शायद वो ये समझ गया कूँ की आवाज़ से उसके मालिक को नींद नहीं आ रही है।

गल कर जबरा की ठंडी पीठ सहलाते हुए कहा, "कल से मेरे साथ न आना, नहीं तो ठंडे हो जाओगे। ये ने कहाँ से बर्फ़ लिए आ रही है।"

n No : 18**का क्या अर्थ है?**

छिपना

बचना

।ज खाना

गना

Question ID : 630680395882

Option 1 ID : 6306801543684

Option 2 ID : 6306801543685

Option 3 ID : 6306801543687

Option 4 ID : 6306801543686

sion:

पर प्रश्न का उत्तर दें।

त। आसमान पर तारे भी ठिठुरते हुए मालूम होते थे। हल्कू अपने खेत के किनारे ओख के पत्तों की एक स के खटोले पर अपनी पुरानी गाढ़े की चादर ओढ़े हुए काँप रहा था। खटोले के नीचे उसका साथी कुत्ता, डाले सर्दी से कूँ कूँ कर रहा था। दो में से एक को भी नींद न आती थी।

। गर्दन में चिमटाते हुए कहा, "क्यों जबरा जाड़ा लगता है, कहा तो था घर में पियाल पर लेटा रह। तू यहाँ

त! अब खा सर्दी, मैं क्या करूँ। जानता था। मैं हलवा पूरी खाने आ रहा हूँ। दौड़ते हुए आगे चले आए। अब

। के नाम को।" जबरा ने लेटे हुए दुम हिलाई और एक अंगड़ाई लेकर चुप हो गया। शायद वो ये समझ गया कूँ की आवाज़ से उसके मालिक को नींद नहीं आ रही है।

गल कर जबरा की ठंडी पीठ सहलाते हुए कहा, "कल से मेरे साथ न आना, नहीं तो ठंडे हो जाओगे। ये ने कहाँ से बर्फ लिए आ रही है।"

n No : 19**का अर्थ बताइए।**

तो ऊपर उठाना

5 अंग में चोट लगाना

तो तोड़ना

लेते हुए शरीर को तानना

Question ID : 630680395884
Option 1 ID : 6306801543695
Option 2 ID : 6306801543694
Option 3 ID : 6306801543693
Option 4 ID : 6306801543692

sion:

पर प्रश्न का उत्तर दें।

त। आसमान पर तारे भी ठिठुरते हुए मालूम होते थे। हल्कू अपने खेत के किनारे ओख के पत्तों की एक स के खटोले पर अपनी पुरानी गाढ़े की चादर ओढ़े हुए काँप रहा था। खटोले के नीचे उसका साथी कुत्ता, डाले सर्दी से कूँ कूँ कर रहा था। दो में से एक को भी नींद न आती थी।

। गर्दन में चिमटाते हुए कहा, "क्यों जबरा जाड़ा लगता है, कहा तो था घर में पियाल पर लेटा रह। तू यहाँ

त! अब खा सर्दी, मैं क्या करूँ। जानता था। मैं हलवा पूरी खाने आ रहा हूँ। दौड़ते हुए आगे चले आए। अब

। के नाम को।" जबरा ने लेटे हुए दुम हिलाई और एक अंगड़ाई लेकर चुप हो गया। शायद वो ये समझ गया कूँ की आवाज़ से उसके मालिक को नींद नहीं आ रही है।

गल कर जबरा की ठंडी पीठ सहलाते हुए कहा, "कल से मेरे साथ न आना, नहीं तो ठंडे हो जाओगे। ये ने कहाँ से बर्फ लिए आ रही है।"

n No : 20**रे कैसे मालूम होते थे?**

।

। हुए

। हुए

Question ID : 630680395880
Option 1 ID : 6306801543678
Option 2 ID : 6306801543677
Option 3 ID : 6306801543679
Option 4 ID : 6306801543676

Which of the following is NOT a type of structural chromosomal abnormality?

- Inversion
- Deletion
- Translocation
- Duplication

Question ID : 630680918199
Option 1 ID : 6306803598104
Option 2 ID : 6306803598105
Option 3 ID : 6306803598103
Option 4 ID : 6306803598102

Which of the following statements is/are NOT correct regarding the types of motor skills in the early childhood stage?

- Gross motor skills involve the control and co-ordination of large muscles (e.g., running, jumping, crawling and skipping).
- Fine motor skills involve the finer muscles, particularly eye and hand/finger coordination (e.g., writing, painting and cutting).

- I and II
- II
- I
- Neither I nor II

Question ID : 630680919050
Option 1 ID : 6306803601408
Option 2 ID : 6306803601407
Option 3 ID : 6306803601406
Option 4 ID : 6306803601409

Which of the following is/are an example of public communication?

- Political campaigns
- Speeches by dignitaries

- II
- Neither I nor II
- I
- I and II

Question ID : 630680919652
Option 1 ID : 6306803603807
Option 2 ID : 6306803603809
Option 3 ID : 6306803603806
Option 4 ID : 6306803603808

to the animal kingdom, which of the following statements is/are correct?

I do not include multicellular animals.
 II are metamerically segmented animals with a true coelom.

II

I and II

Neither I nor II

I

Question ID : 630680918207
 Option 1 ID : 6306803598135
 Option 2 ID : 6306803598136
 Option 3 ID : 6306803598137
 Option 4 ID : 6306803598134

Which of the following statements is/are correct?

I. Gene therapy is the insertion of genes into an individual's cells and tissues to treat especially hereditary diseases.
 II. Bacteriophages that attack their hosts and introduce their genetic material into the host cell during their replication cycle are used as vectors to transfer healthy genes or small portions of genes.

I and II

II

I

Neither I nor II

Question ID : 630680918226
 Option 1 ID : 6306803598208
 Option 2 ID : 6306803598207
 Option 3 ID : 6306803598206
 Option 4 ID : 6306803598209

Which of the following statements is/are NOT correct regarding interpersonal communication?

I. Interpersonal communication takes place between two individuals and is thus a one-
 way conversation.
 II. Interpersonal communication includes when a manager discusses performance with an employee.

I

Neither I nor II

II

I and II

Question ID : 630680919648
 Option 1 ID : 6306803603790
 Option 2 ID : 6306803603793
 Option 3 ID : 6306803603791
 Option 4 ID : 6306803603792

Which of the following statements is/are correct about the purpose of nutrition?

I. To obtain adequate information for identifying nutrition-related problems.
II. To determine the level of nutritional support that individuals need.

Which of the following is/are correct?

I and II

II

I

Question ID : 630680914965
Option 1 ID : 6306803584907
Option 2 ID : 6306803584906
Option 3 ID : 6306803584905
Option 4 ID : 6306803584904

Which of the following needs is the first need according to Maslow's Hierarchy of Needs?

Actualisation Needs

Biological Needs

Form Needs

Quality Needs

Question ID : 630680914899
Option 1 ID : 6306803584639
Option 2 ID : 6306803584637
Option 3 ID : 6306803584638
Option 4 ID : 6306803584636

Which of the following statements is/are correct?

I. Amphibians and reptiles are poikilothermous are cold-blooded animals.
II. Birds are warm-blooded animals with feathers on their bodies and forelimbs modified into wings for flying.

II

Neither I nor II

I

I and II

Question ID : 630680918222
Option 1 ID : 6306803598191
Option 2 ID : 6306803598193
Option 3 ID : 6306803598190
Option 4 ID : 6306803598192

Important to develop an effective preschool curriculum?

Research from neuroscience proves that early learning matters for later outcomes. Sensory stimulation and stimulation have a cumulative impact on childrens' development.

- I
- Either I nor II
- II
- I and II

Question ID : 630680919103
Option 1 ID : 6306803601614
Option 2 ID : 6306803601617
Option 3 ID : 6306803601615
Option 4 ID : 6306803601616

Which of the following is NOT one of the '3Rs' of sustainable development?

- Recycle
- Reduce
- Reuse
- Replenish

Question ID : 630680914916
Option 1 ID : 6306803584715
Option 2 ID : 6306803584714
Option 3 ID : 6306803584712
Option 4 ID : 6306803584713

Which of the following are the physical changes generally seen in adolescent girls?

I. Menstruation becomes oily
II. Ovaries enlarge
III. Vagina comes very deep

- I and III
- I and II
- II and III
- I and II

Question ID : 630680920157
Option 1 ID : 6306803605613
Option 2 ID : 6306803605610
Option 3 ID : 6306803605612
Option 4 ID : 6306803605611

t to the animal kingdom, how many super classes does Gnathostomata

>

Question ID : 630680918212
Option 1 ID : 6306803598152
Option 2 ID : 6306803598150
Option 3 ID : 6306803598153
Option 4 ID : 6306803598151

Following characteristics is/are applicable to young adulthood?

Close relationships with peers
a career

er I nor II

II

I and II

I

Question ID : 630680914867
Option 1 ID : 6306803584539
Option 2 ID : 6306803584537
Option 3 ID : 6306803584538
Option 4 ID : 6306803584536

Following statements is/are correct?

dy, the entire set of chromosomes is multiplied.
s with Down syndrome have three extra chromosomes at 21.

I and II

I

II

er I nor II

Question ID : 630680918194
Option 1 ID : 6306803598084
Option 2 ID : 6306803598082
Option 3 ID : 6306803598083
Option 4 ID : 6306803598085

Which of the following statements regarding amphibians and reptiles is/are correct?

I. They have adapted to live only on land.
II. They are characterised by the presence of dry and cornified skin.

I

II

Both I and II

None

Question ID : 630680918216

Option 1 ID : 6306803598167

Option 2 ID : 6306803598169

Option 3 ID : 6306803598168

Option 4 ID : 6306803598166

Which of the following is/are type of bryophytes?

Moss

Liverwort

Both I and II

None

Question ID : 630680918231

Option 1 ID : 6306803598227

Option 2 ID : 6306803598229

Option 3 ID : 6306803598228

Option 4 ID : 6306803598226

Which of the following statements about the role of the family in socialisation of the child, which of the statements is NOT correct?

I. Parental influence, predominantly the paternal influence on the child, is very important in the socialisation process.

II. The process of socialisation begins for everyone in the family.

III. The school is the most important agent in the socialisation of children, as it maintains contact with the children for longer period of time as compared to the other groups or agencies in society.

IV. The family is the first agency that acts in the socialisation process of children.

Question ID : 630680920142

Option 1 ID : 6306803605553

Option 2 ID : 6306803605552

Option 3 ID : 6306803605551

Option 4 ID : 6306803605550

Which of the following statements is/are correct?

I. Composting of plant and animal waste, including kitchen waste, into manure is called vermicomposting.

II. The method of making compost from kitchen garbage using red worms is called vermiculture.

I and II

I

II

Neither I nor II

Question ID : 630680918205
 Option 1 ID : 6306803598128
 Option 2 ID : 6306803598127
 Option 3 ID : 6306803598126
 Option 4 ID : 6306803598129

Which of the following are types of ECCE programmes?

I. Day care centres

II. Pre-nursery centres

III. Integrated day care centres

I and III

I and II

I and III

II and III

Question ID : 630680919068
 Option 1 ID : 6306803601477
 Option 2 ID : 6306803601474
 Option 3 ID : 6306803601475
 Option 4 ID : 6306803601476

2

Which of the following is/are cause(s) of anemia?

I. Low iron intake in food.

II. Low iron absorption due to interfering substances such as phytates of

I and II

I

II

Neither I nor II

Question ID : 630680914588
 Option 1 ID : 6306803583386
 Option 2 ID : 6306803583385

Which of the following is a quality standard in India?

I and II

I

Neither I nor II

I and II

II

Question ID : 630680920185

Option 1 ID : 6306803605722

Option 2 ID : 6306803605725

Option 3 ID : 6306803605724

Option 4 ID : 6306803605723

Which of the following statements is/are correct regarding referential language style in early childhood period?

In referential language styles, children have fewer object names in their vocabulary. They use more words to regulate social interactions with adults. Example: saying good-

Neither I nor II

I

I and II

II

Question ID : 630680919056

Option 1 ID : 6306803601433

Option 2 ID : 6306803601430

Option 3 ID : 6306803601432

Option 4 ID : 6306803601431

There are three distinct types of carbohydrates. Which of the following is NOT a carbohydrate?

Starch

Cellulose

Question ID : 630680914547

Option 1 ID : 6306803583213

Option 2 ID : 6306803583215

Option 3 ID : 6306803583212

Option 4 ID : 6306803583214

Which of the following statements is/are NOT correct regarding the observation of motor and cognitive development of infants (7–12 months)?

I. Fine motor skills, locomotion has increased in the child.
II. Gross motor skills can sit with good co-ordination, crawl and creep in different directions, try to stand with support and manipulate objects and its sociability increases.

I

II

Neither I nor II

I and II

Question ID : 630680919083
Option 1 ID : 6306803601539
Option 2 ID : 6306803601538
Option 3 ID : 6306803601541
Option 4 ID : 6306803601540

Which of the following is/are associated with management theory?

I. Laissez-faire Taylor

II. Scientific management

I

I and II

Neither I nor II

II

Question ID : 630680914858
Option 1 ID : 6306803584500
Option 2 ID : 6306803584502
Option 3 ID : 6306803584503
Option 4 ID : 6306803584501

Which is NOT a function of food from the example given below.

I. Provides energy for good performance may be given sweets, ice-cream, etc.

II. Provides pleasure by function of food

III. Provides protection against disease by biological function of food

IV. Provides protection against disease by psychological function of food

V. Provides protection against disease by social function of food

Question ID : 630680914610
Option 1 ID : 6306803583475
Option 2 ID : 6306803583472
Option 3 ID : 6306803583473
Option 4 ID : 6306803583474

Who is credited with coining the term 'Scientific Management' in his article 'The Principles of Scientific Management' published in 1911?

L. Frank Winslow Taylor

Karl Marx

Henri Fayol

John Maynard Keynes

Question ID : 630680914863

Option 1 ID : 6306803584520

Option 2 ID : 6306803584522

Option 3 ID : 6306803584521

Option 4 ID : 6306803584523

Which of the following statements is/are correct regarding water?

I helps in digestion, absorption and acts as a carrier to transport important

II helps to regulate our body temperature and it also lubricates the joints and internal

III organs and tissues from shocks.

I

I and II

Neither I nor II

II

Question ID : 630680914543

Option 1 ID : 6306803583196

Option 2 ID : 6306803583198

Option 3 ID : 6306803583199

Option 4 ID : 6306803583197

Which of the following is/are NOT the guiding principles for preschool curriculum?

I Learning is continuous and cumulative.

II Play activities are the primary context of learning and development.

III

I and II

I

Neither I nor II

Question ID : 630680919099

Option 1 ID : 6306803601599

Option 2 ID : 6306803601600

Option 3 ID : 6306803601598

Option 4 ID : 6306803601601

Activities in preschool can be done by using which of the following tools and

I and II
II and III
I and III
II and III

Question ID : 630680919111
Option 1 ID : 6306803601646
Option 2 ID : 6306803601649
Option 3 ID : 6306803601647
Option 4 ID : 6306803601648

Which of the following is a physiological function of food?

I and II
II and III
I and III
II and III

Question ID : 630680914532
Option 1 ID : 6306803583145
Option 2 ID : 6306803583147
Option 3 ID : 6306803583146
Option 4 ID : 6306803583144

Which of the following is a source of Vitamin C? (a, ripe tomato, papaya, orange, sweet lime and watermelon are the

I and II
II and III
I and III
II and III

Question ID : 630680914597
Option 1 ID : 6306803583420
Option 2 ID : 6306803583423
Option 3 ID : 6306803583421
Option 4 ID : 6306803583422

Most closely related concept from the definition given below:
 'Development that meets the needs of the present generation without compromising
 future generation's ability to meet their own needs'.

Economic development

Sustainable development

Human development

Information development

Question ID : 630680914922
 Option 1 ID : 6306803584737
 Option 2 ID : 6306803584736
 Option 3 ID : 6306803584739
 Option 4 ID : 6306803584738

Which of the following statements is/are correct about the characteristics of
 Sustainable Development?

I. Sustainable Development is universal.
 II. Sustainable Development is goal directed.

I and II

II

I

Neither I nor II

Question ID : 630680914854
 Option 1 ID : 6306803584486
 Option 2 ID : 6306803584485
 Option 3 ID : 6306803584484
 Option 4 ID : 6306803584487

Which of the following statements is/are correct about the important reasons for
 monitoring and evaluation activities in management?

I. Monitoring and evaluation help provide feedback to the project manager.
 II. Monitoring and evaluation are conducted in order to find out gaps in the
 implementation of various projects and programmes.

I

I and II

II

Neither I nor II

Question ID : 630680914929
 Option 1 ID : 6306803584760
 Option 2 ID : 6306803584762
 Option 3 ID : 6306803584761
 Option 4 ID : 6306803584763

See in dim light is an early symptom of _____ deficiency.

in D

in A

in C

Question ID : 630680914556
Option 1 ID : 6306803583251
Option 2 ID : 6306803583248
Option 3 ID : 6306803583250
Option 4 ID : 6306803583249

Which of the following statements is INCORRECT about accountability?

It refers to the answerability for the outcome of an assigned task.

It comes from delegated authority.

It flows upwards from the subordinate to the superior.

It can not be delegated at all.

Question ID : 630680914906
Option 1 ID : 6306803584672
Option 2 ID : 6306803584673
Option 3 ID : 6306803584674
Option 4 ID : 6306803584675

Which of the following statements is/are correct regarding the social function of festivals?

I. It creates an atmosphere where good relations can be developed, and it helps bring people from different classes, communities and religions closer together.
II. The exchange of sweets at festivals like Deepawali, Eid and Christmas is related to the tradition of food.

I and II

II

I

Neither I nor II

Question ID : 630680914605
Option 1 ID : 6306803583454
Option 2 ID : 6306803583453
Option 3 ID : 6306803583452
Option 4 ID : 6306803583455

Hierarchy of Needs has classified human needs into how many categories?

3

Question ID : 630680914888
 Option 1 ID : 6306803584596
 Option 2 ID : 6306803584597
 Option 3 ID : 6306803584599
 Option 4 ID : 6306803584598

3

How do food cleaning agents work?
 I. They lower the energy of the bond between the food debris and the surface so that the debris can be dislodged and loosened.
 II. They suspend the debris in the solution so that they can be flushed away.

I and II

Neither I nor II

II

I

Question ID : 630680918598
 Option 1 ID : 6306803599692
 Option 2 ID : 6306803599693
 Option 3 ID : 6306803599691
 Option 4 ID : 6306803599690

According to the domains of human development, which of the following is/are correct?

I. Cognitive domain focuses on learning, attention, perception, memory, etc.
 II. Interpersonal domain deals with the adjustment of people to being with others and the right ways of interacting.

I

I and II

Neither I nor II

II

Question ID : 630680914652
 Option 1 ID : 6306803583640
 Option 2 ID : 6306803583642
 Option 3 ID : 6306803583643
 Option 4 ID : 6306803583641

According to Freud's Psychodynamic Theory, what is the period of the phallic stage?

I years

months

ears

years

Question ID : 630680914709

Option 1 ID : 6306803583867

Option 2 ID : 6306803583864

Option 3 ID : 6306803583865

Option 4 ID : 6306803583866

The phallic period lasts for about how many weeks?

weeks

weeks

weeks

weeks

Question ID : 630680914693

Option 1 ID : 6306803583802

Option 2 ID : 6306803583800

Option 3 ID : 6306803583803

Option 4 ID : 6306803583801

During the early childhood period, which of the following is/are correct about the importance of socio-emotional development for a child's overall adjustment?

I. Socio-emotional development influences the child's social adjustment and self-esteem.

II. A child who is under emotional stress due to the reactions of others or situations will be able to perform to his full potential.

Neither I nor II

II

I and II

I

Question ID : 630680914687

Option 1 ID : 6306803583779

Option 2 ID : 6306803583777

Option 3 ID : 6306803583778

Option 4 ID : 6306803583776

Which of the following statements is/are correct regarding Piaget's Theory of Development: Concrete Operation?

Concrete operation is the second stage in Piaget's cognitive theory.
 I. Ability to think logically about concrete or real-world events and experiences is characteristic of this stage.

I and II

Neither I nor II

II

I

Question ID : 630680914674
 Option 1 ID : 6306803583726
 Option 2 ID : 6306803583727
 Option 3 ID : 6306803583725
 Option 4 ID : 6306803583724

Which of the following statements is/are NOT correct regarding the Codex Alimentarius Commission?
 I. It sets harmonised international food standards, guidelines and codes of practice to protect the health of consumers and ensure fair trade practices in the food industry.

II. It promotes coordination of all food standards work undertaken by both governmental and nongovernmental organisations.

I

II

I and II

Neither I nor II

Question ID : 630680918566
 Option 1 ID : 6306803599570
 Option 2 ID : 6306803599571
 Option 3 ID : 6306803599572
 Option 4 ID : 6306803599573

Which of the following is/are type of stress?

I. Acute stress
 II. Chronic stress

I

Neither I nor II

II

I and II

Question ID : 630680919909
 Option 1 ID : 6306803604770
 Option 2 ID : 6306803604773
 Option 3 ID : 6306803604771
 Option 4 ID : 6306803604772

Which of the following can be an application(s) of biotechnology in the quantitative analysis of foods?
I. Genetically modified crops
II. Nutrient-enriched foods
III. Foods with enhanced shelf life
IV. Foods with enhanced flavor

I and II

II

I

None of I nor II

Question ID : 630680918515
Option 1 ID : 6306803599368
Option 2 ID : 6306803599367
Option 3 ID : 6306803599366
Option 4 ID : 6306803599369

Which of the following is/are true regarding the emotional development of a child of late childhood becomes adjusted to the social units outside the family?
I. The child's emotional intensity tends to subside because of the child's ability to regulate his emotions.
II. The child's emotional intensity tends to subside because of the child's ability to regulate his emotions through games and sports.

I. The child's emotional intensity tends to subside because of the child's ability to regulate his emotions.
II. The child's emotional intensity tends to subside because of the child's ability to regulate his emotions through games and sports.

I and II

None of I nor II

II

I

Question ID : 630680914679
Option 1 ID : 6306803583746
Option 2 ID : 6306803583747
Option 3 ID : 6306803583745
Option 4 ID : 6306803583744

Which of the following statements is/are correct regarding reproductive health of a woman?
I. The World Health Organization (WHO) defines reproductive health as a state of complete physical, mental and social well-being, and not merely the absence of disease or infirmity.
II. The WHO defines reproductive health as a state of complete physical, mental and social well-being, and not merely the absence of disease or infirmity.

I. The World Health Organization (WHO) defines reproductive health as a state of complete physical, mental and social well-being, and not merely the absence of disease or infirmity.
II. The WHO defines reproductive health as a state of complete physical, mental and social well-being, and not merely the absence of disease or infirmity.

None of I nor II

II

I and II

I

Question ID : 630680914721
Option 1 ID : 6306803583923
Option 2 ID : 6306803583921
Option 3 ID : 6306803583922
Option 4 ID : 6306803583920

Which of the following statements is/are correct regarding sodium intake as a food? Excessive intake of salt (sodium chloride) is associated with high blood pressure and kidney disease. Sodium intake does not need to be balanced by potassium intake.

Neither I nor II

I

I and II

II

Question ID : 630680918305

Option 1 ID : 6306803598521

Option 2 ID : 6306803598518

Option 3 ID : 6306803598520

Option 4 ID : 6306803598519

Which of the following is/are the objective(s) of studying food science and technology? To make food digestible and to improve the nutritive value of food.

II

I and II

Neither I nor II

I

Question ID : 630680918521

Option 1 ID : 6306803599391

Option 2 ID : 6306803599392

Option 3 ID : 6306803599393

Option 4 ID : 6306803599390

Which of the following statements are correct regarding Hazard Analysis and Critical Control Point (HACCP) system? It is an internationally recognised system for reducing the risk of safety hazards in food.

Only large food processing companies involved in the manufacturing, processing or handling of food can use HACCP to minimise or eliminate food safety hazards in their products.

Decision trees are tools that can be used to help decide whether a hazard is a critical control point (CCP).

I and III

I and II

II and III

II and III

Question ID : 630680918534

Option 1 ID : 6306803599451

Option 2 ID : 6306803599450

Option 3 ID : 6306803599453

Option 4 ID : 6306803599452

to the evolution of psychology, which of the following statements is/are

Psychology as a modern discipline, which is influenced to a large extent by western sciences, has a short history. Psychology grew out of ancient philosophy concerned with questions of philosophical significance.

Neither I nor II

I

I and II

II

Question ID : 630680919823
Option 1 ID : 6306803604461
Option 2 ID : 6306803604458
Option 3 ID : 6306803604460
Option 4 ID : 6306803604459

is an alternative name of which of the following vitamins?

None of these

Vitamin B1

Vitamin B3

Vitamin B2

Question ID : 630680914911
Option 1 ID : 6306803584692
Option 2 ID : 6306803584693
Option 3 ID : 6306803584695
Option 4 ID : 6306803584694

Which of the following statements is/are correct regarding National Food Security Act 2013?

I. The Act legally entitles upto 15% of the rural population and 5% of the urban population to receive subsidised foodgrains under Targeted Public Distribution System.

II. Under NFSA, 35 million tonnes of foodgrains were to be made available at subsidised prices of ₹3, ₹2 and ₹1 per kg for rice, wheat and coarse grains, respectively.

II

I and II

I

Neither I nor II

Question ID : 630680918553
Option 1 ID : 6306803599523
Option 2 ID : 6306803599524
Option 3 ID : 6306803599522
Option 4 ID : 6306803599525

Which of the following statements is/are correct regarding the developmental period being?

I. Infancy or toddlerhood stage starts at birth and continues until 4 years.
 II. Adolescence begins with the onset of puberty until 18 years.

Neither I nor II

II

I

I and II

Question ID : 630680914655
 Option 1 ID : 6306803583655
 Option 2 ID : 6306803583653
 Option 3 ID : 6306803583652
 Option 4 ID : 6306803583654

Which of the following is/are factor(s) that affects development during the prenatal stage?

I. Poor nutrition
 II. Maternal age

I and II

II

I

Neither I nor II

Question ID : 630680914664
 Option 1 ID : 6306803583686
 Option 2 ID : 6306803583685
 Option 3 ID : 6306803583684
 Option 4 ID : 6306803583687

Which of the following menu at the beginning of the week will help to minimize repetition of foods and food combinations and prevent leftover food from previous meals?

I and II

Neither I nor II

II

I

Question ID : 630680918287
 Option 1 ID : 6306803598448
 Option 2 ID : 6306803598449
 Option 3 ID : 6306803598447
 Option 4 ID : 6306803598446

es are classified on the basis of their behaviour on hydrolysis, and they
roadly divided into how many groups?

e

Question ID : 630680914139
Option 1 ID : 6306803581556
Option 2 ID : 6306803581559
Option 3 ID : 6306803581557
Option 4 ID : 6306803581558

following statements is/are correct regarding Psychic Income?
come consists of satisfaction derived by persons from the use of their

of income is purely subjective and intangible.

II

I

er I nor II

I and II

Question ID : 630680918649
Option 1 ID : 6306803599887
Option 2 ID : 6306803599886
Option 3 ID : 6306803599889
Option 4 ID : 6306803599888

he following is/are a major type(s) of family income?
ry income
ome

er I nor II

I and II

II

I

Question ID : 630680918675
Option 1 ID : 6306803599997
Option 2 ID : 6306803599996
Option 3 ID : 6306803599995
Option 4 ID : 6306803599994

Which of the following statements is/are NOT correct regarding natural rubber?
I. It is a natural polymer and possesses elastic properties.
II. It is termed as elastomeric polymer.

Choose the correct answer from I nor II

I and II

II

I

Question ID : 630680914172
Option 1 ID : 6306803581691
Option 2 ID : 6306803581690
Option 3 ID : 6306803581689
Option 4 ID : 6306803581688

Which of the following statements is/are correct regarding lipids?
I. They are a group of inorganic compounds found in living organisms.
II. They vary in their structures and functions.

Choose the correct answer from I nor II

I and II

I

II

Question ID : 630680914155
Option 1 ID : 6306803581623
Option 2 ID : 6306803581622
Option 3 ID : 6306803581620
Option 4 ID : 6306803581621

Which of the following statements is/are correct regarding child health and morbidity?

I. Malnutrition contributes to increased morbidity (infections) and mortality.
II. Children should be encouraged to eat adequately during and soon after episodes of infections to improve their nutritional status.

II

I

I and II

Choose the correct answer from I nor II

Question ID : 630680919967
Option 1 ID : 6306803604931
Option 2 ID : 6306803604930
Option 3 ID : 6306803604932
Option 4 ID : 6306803604933

Which of the following foods is/are recommended for pregnant women and lactating

I. More foods containing iron, like green leafy vegetables.
II. More foods like milk and its products.

Choose I or II

I and II

I

II

Question ID : 630680919962
Option 1 ID : 6306803604921
Option 2 ID : 6306803604920
Option 3 ID : 6306803604918
Option 4 ID : 6306803604919

Which of the following steps of financial planning will include which of the following two steps?
I. Set your goals.
II. Develop your spending, financing and investing plans to achieve those goals.

Choose I or II

I

I and II

II

Question ID : 630680918672
Option 1 ID : 6306803599985
Option 2 ID : 6306803599982
Option 3 ID : 6306803599984
Option 4 ID : 6306803599983

Which of the following is NOT a guideline for family financial management?

I. Prioritize saving over spending, as a rupee saved is a rupee earned.

II. Always pay the instalments on time to avoid interest.

III. Define and set family financial goals clearly to facilitate financial management.

IV. Do not set budget for travel holidays.

Question ID : 630680918868
Option 1 ID : 6306803600716
Option 2 ID : 6306803600715
Option 3 ID : 6306803600714
Option 4 ID : 6306803600717

glycerols, wax, phospholipids and steroids are examples of which of the

- s
- in
- als
- hydrate

Question ID : 630680914157
Option 1 ID : 6306803581628
Option 2 ID : 6306803581630
Option 3 ID : 6306803581631
Option 4 ID : 6306803581629

following statements is/are NOT correct regarding polymers?
are defined as high molecular mass macromolecules, which consist of
structural units derived from the corresponding monomers.
may be of natural or synthetic origin.

- I and II
- er I nor II
- II
- I

Question ID : 630680914168
Option 1 ID : 6306803581674
Option 2 ID : 6306803581675
Option 3 ID : 6306803581673
Option 4 ID : 6306803581672

following statements is/are NOT correct regarding fatty acids?
are obtained as a result of hydrolysis of fats.
occurring fatty acids are generally synthesised from one carbon units and
ain an odd number of carbon atoms.

- I
- I and II
- II
- er I nor II

Question ID : 630680914163
Option 1 ID : 6306803581652
Option 2 ID : 6306803581654
Option 3 ID : 6306803581653
Option 4 ID : 6306803581655

The most important source of energy for mammals, is obtained by the

-----.

h

gen

ose

Question ID : 630680914153

Option 1 ID : 6306803581612

Option 2 ID : 6306803581614

Option 3 ID : 6306803581615

Option 4 ID : 6306803581613

Could one give guidelines for buying a product in advance?

Prices are likely to rise in the future
Quality of goods is higher presently

Neither I nor II

I

I and II

II

Question ID : 630680918895

Option 1 ID : 6306803600813

Option 2 ID : 6306803600810

Option 3 ID : 6306803600812

Option 4 ID : 6306803600811

Which of the following statements is/are correct regarding cellulose?
Cellulose is the most abundant extracellular structural polysaccharide found in

plants. It is the most abundant of all biomolecules in the biosphere.

I

I and II

Neither I nor II

II

Question ID : 630680914191

Option 1 ID : 6306803581764

Option 2 ID : 6306803581766

Option 3 ID : 6306803581767

Option 4 ID : 6306803581765

guidelines for buying during season and off-season?

Goods are cheaper during some seasons, like the price of refrigerator during winter. Hence such goods should be bought during season. In other cases, newly introduced goods are costly. Hence, it is better to wait for a while and buy when the prices come down.

I

I and II

Neither I nor II

II

Question ID : 630680918884
Option 1 ID : 6306803600771
Option 2 ID : 6306803600772
Option 3 ID : 6306803600773
Option 4 ID : 6306803600770

Amino acids function as building blocks of proteins in the human body?

Question ID : 630680914131
Option 1 ID : 6306803581525
Option 2 ID : 6306803581526
Option 3 ID : 6306803581527
Option 4 ID : 6306803581524

Which of the following is/are NOT an example of condensation polymers?

I

I and II

Neither I nor II

II

Question ID : 630680914185
Option 1 ID : 6306803581740
Option 2 ID : 6306803581742
Option 3 ID : 6306803581743
Option 4 ID : 6306803581741

Which of the following years was the Indian Standards Act enacted in?

Question ID : 630680918775
Option 1 ID : 6306803600380
Option 2 ID : 6306803600378
Option 3 ID : 6306803600381
Option 4 ID : 6306803600379

Which of the following is/are problem(s) faced by consumers?

I. Information asymmetry in
land goods market

II. Adverse selection

III. Moral hazard

Only I and II

I and III

Question ID : 630680918684
Option 1 ID : 6306803600030
Option 2 ID : 6306803600031
Option 3 ID : 6306803600033
Option 4 ID : 6306803600032

5

Which of the following statements are factors in language development during the toddler period?

I. Social interactions

II. Rich and stimulating play material

III. Exposure to audiovisual aids

I and II

I and III

II and III

I and III

Question ID : 630680919256
Option 1 ID : 6306803602218
Option 2 ID : 6306803602219
Option 3 ID : 6306803602221
Option 4 ID : 6306803602220

Which of the following statements is/are NOT correct regarding food and nutrition

I. Food and nutrition security are intimately interconnected, since only a food-based approach can help in overcoming malnutrition in an economically and socially sustainable manner.
II. Food production provides the base for food security as it is a key determinant of food availability.

I and II

I

II

Neither I nor II

Question ID : 630680919990
Option 1 ID : 6306803605016
Option 2 ID : 6306803605014
Option 3 ID : 6306803605015
Option 4 ID : 6306803605017

Which of the following is NOT a type of Protein Energy Malnutrition (PEM)?

Marasmus

Edematous kwashiorkor

Marasmus

Unilateral Xerosis

Question ID : 630680919988
Option 1 ID : 6306803605006
Option 2 ID : 6306803605008
Option 3 ID : 6306803605007
Option 4 ID : 6306803605009

Which of the following are elements of Green Buildings?

I. Design (structure efficiency)

II. Energy efficiency

III. Materials

I and III

II and III

I and II

II and III

Question ID : 630680920131
Option 1 ID : 6306803605507
Option 2 ID : 6306803605508
Option 3 ID : 6306803605506
Option 4 ID : 6306803605509

With respect to the nutrition care process, which of the following statements is regarding nutrition diagnosis?
 I. Nutrition diagnosis is the identification and labeling that describes an actual problem, risk of, or potential for developing a nutrition problem that dietitians are responsible for treating independently.
 II. It is important to remember that nutrition diagnosis does not change as the needs of patients/clients/groups response changes.

I

Neither I nor II

II

I and II

Question ID : 630680920178
 Option 1 ID : 6306803605694
 Option 2 ID : 6306803605697
 Option 3 ID : 6306803605695
 Option 4 ID : 6306803605696

Which of the following statements is/are NOT correct?
 I. Consumption expenditure of non-profit institutions serving households is the value of goods and services produced for own use on current account, net of gross output reduced by the sum of the value of their commodity and service sales.
 II. Consumption expenditure of households and non-profit institutions serving households are estimated together and are not available separately.

II

I and II

I

Neither I nor II

Question ID : 630680918668
 Option 1 ID : 6306803599967
 Option 2 ID : 6306803599968
 Option 3 ID : 6306803599966
 Option 4 ID : 6306803599969

With respect to the nutrition care process, which of the following statements is/are regarding nutrition diagnosis?

I. Nutrition diagnosis is the identification and labelling that describes an actual problem or the risk or potential of developing a nutrition problem that dietitians are responsible for treating independently.
 II. It is important to remember that nutrition diagnosis does not change as the needs of patients/clients/groups changes.

Neither I nor II

II

I

I and II

Question ID : 630680914975
 Option 1 ID : 6306803584947

Which of the following is a description of the characteristics of a fully functioning person according to Carl Rogers' approach?

I. The person is open to only positive experiences and emotions.
II. The person pays attention to and trusts her/his/their gut, feelings and instincts.

I and II

II

Neither I nor II

I

Question ID : 630680919598
Option 1 ID : 6306803603584
Option 2 ID : 6306803603583
Option 3 ID : 6306803603585
Option 4 ID : 6306803603582

Which of the following statements is/are correct regarding technical writing, which of the following statements is/are correct regarding the spatial pattern of development?

I. In technical writing, items are organised according to their physical relationship to one another.

II. A spatial pattern is not useful in structuring a description of a physical object.

I

II

I and II

Neither I nor II

Question ID : 630680914816
Option 1 ID : 6306803584300
Option 2 ID : 6306803584301
Option 3 ID : 6306803584302
Option 4 ID : 6306803584303

Which of the following is/are NOT basic characteristic(s) of technical writing?

I. A technical document must convey a single meaning that the reader can understand.

II. Information must be recorded carefully, objectively and without bias.

I

I and II

Neither I nor II

II

Question ID : 630680914812
Option 1 ID : 6306803584284
Option 2 ID : 6306803584286
Option 3 ID : 6306803584287
Option 4 ID : 6306803584285

Maslow's Need Hierarchy Theory, a theoretical position is based on which of the following propositions?

1. Behaviour is always explained as reactions to external events and

2. All needs motivate behaviour. Once they are satisfied, they cease to motivate the individual.

3. I and II

4. II

5. I

6. Neither I nor II

Question ID : 630680919605
Option 1 ID : 6306803603612
Option 2 ID : 6306803603611
Option 3 ID : 6306803603610
Option 4 ID : 6306803603613

7. According to Erik Erikson's Psychosocial Theory of Human Development, there are eight stages of development through which a healthy, developing person would

8. pass

Question ID : 630680919616
Option 1 ID : 6306803603665
Option 2 ID : 6306803603663
Option 3 ID : 6306803603662
Option 4 ID : 6306803603664

9. Lack of will to communicate and personal differences are examples of which of the following communication barriers?

10. Physical barriers

11. Psychological barriers

12. Personal barriers

13. Organisational barriers

Question ID : 630680919660
Option 1 ID : 6306803603840
Option 2 ID : 6306803603841
Option 3 ID : 6306803603838
Option 4 ID : 6306803603839

Which of the following statements is/are INCORRECT about Enteral Nutrition (EN)?

I provide nutrition when oral intake is not possible or adequate.
 II provides more complete nutrients, trace elements and short chain fatty acids as

either I nor II

I

II

I and II

Question ID : 630680914931
 Option 1 ID : 6306803584771
 Option 2 ID : 6306803584768
 Option 3 ID : 6306803584769
 Option 4 ID : 6306803584770

Which of the following are factors that determine socialisation in children?

I 'use' of rewards and punishments in the home
 II 'interaction' with peers or children of the same age group
 III 'exposure' to the environment and mass media for the standards and behaviour in role models'

I and II

I and III

II and III

II and III

Question ID : 630680919283
 Option 1 ID : 6306803602322
 Option 2 ID : 6306803602323
 Option 3 ID : 6306803602325
 Option 4 ID : 6306803602324

Which of the following statements is/are correct regarding the observation of the development of infants (13–18 months)?

I 'they' understand object constancy and know that objects not seen around are hidden somewhere.
 II 'they' express positive emotions but fail to express negative emotions.

II

I

either I nor II

I and II

Question ID : 630680919270
 Option 1 ID : 6306803602275
 Option 2 ID : 6306803602274
 Option 3 ID : 6306803602277
 Option 4 ID : 6306803602276

Which of the following statements is/are NOT correct regarding the theory of multiple intelligences?

I Gardner proposed the theory of multiple intelligences.
II According to Howard Gardner, intelligence is not a single entity; rather, distinct intelligences exist.

I

II

Neither I nor II

Both I and II

Question ID : 630680919611
Option 1 ID : 6306803603634
Option 2 ID : 6306803603635
Option 3 ID : 6306803603637
Option 4 ID : 6306803603636

Which of the following statements is/are correct regarding technical writing?

I Technical documents serve a specific purpose and have a well-defined structure.

II Technical writing is used to define, illustrate, explain, and describe objects, mechanisms and processes; to verify, summarise or support a text.

I

Both I and II

Neither I nor II

II

Question ID : 630680914804
Option 1 ID : 6306803584253
Option 2 ID : 6306803584254
Option 3 ID : 6306803584255
Option 4 ID : 6306803584252

Which of the following statements is/are correct about the purpose of therapeutic nutrition?

I Nutrition is used to maintain or restore optimum nutritional status.
II Tube feeding is done to adjust to the tolerance of food intake by mouth (e.g. tube feeding with cancer of the oesophagus).

Neither I nor II

Both I and II

I

II

Question ID : 630680914937
Option 1 ID : 6306803584795
Option 2 ID : 6306803584794
Option 3 ID : 6306803584793
Option 4 ID : 6306803584792

With reference to the technical writing, which of the following statements is/are correct?

I. Technical writing means being aware of certain dos and don'ts in the use of phrases for the purpose of clarity.
II. The use of technical words/terms is an essential feature of technical/scientific writing.

Options:
A. I and II
B. I
C. II
D. None of these

II

I and II

I

Question ID : 630680914821
Option 1 ID : 6306803584323
Option 2 ID : 6306803584321
Option 3 ID : 6306803584322
Option 4 ID : 6306803584320

6

Which of the following is/are benefit(s) of breastfeeding?

I. It is naturally tailor-made for meeting the infant's nutritional needs.
II. It is rich in all the nutrients in the required proportion and form (e.g., the fat is emulsified).

II

I and II

I

Options:
A. I and II
B. I
C. II
D. None of these

Question ID : 630680914731
Option 1 ID : 6306803583961
Option 2 ID : 6306803583962
Option 3 ID : 6306803583960
Option 4 ID : 6306803583963

With reference to the Principles and Methods of Food Preservation, which of the following statements is/are correct regarding cellular storage temperature?

I. It is used for the storage of surplus foods like root crops, potatoes, onions.

II. The storage temperature is -18°C to -40°C .

I and II

II

I

Options:
A. I and II
B. I
C. II
D. None of these

Question ID : 630680918631
Option 1 ID : 6306803599820
Option 2 ID : 6306803599810

Which of the following statements is correct regarding sex and gender?

Sex is biological and it refers to visible differences in genitalia and related reproductive functions.

Gender is a socio-cultural construct.

Sex refers to the masculine and feminine qualities, behaviour, roles and expectations that society upholds.

Gender roles can be changed/ re-oriented.

Question ID : 630680919684
Option 1 ID : 6306803603934
Option 2 ID : 6306803603935
Option 3 ID : 6306803603937
Option 4 ID : 6306803603936

In which of the following situations do we see gender differences?

I. Men are seen as the head of the household and chief breadwinner; the woman is nurturer and care-giver.

II. Men are more involved in national and higher level politics; women are more active at the local level in activities linked to their domestic roles.

I

II

III

I and II

Question ID : 630680919688
Option 1 ID : 6306803603950
Option 2 ID : 6306803603953
Option 3 ID : 6306803603951
Option 4 ID : 6306803603952

Which of the following statements is correct regarding minerals?

Major elements of trace minerals are calcium, potassium, sodium, etc.

Trace minerals are required for lots of vigorous processes in the body as well as for growth and development of the body.

Major elements comprise a large quantity of the total body tissue.

Major elements of major minerals are iodine, copper, fluoride, zinc, iron, etc.

Question ID : 630680914624
Option 1 ID : 6306803583531
Option 2 ID : 6306803583529
Option 3 ID : 6306803583528
Option 4 ID : 6306803583530

Which of the following statements is/are correct about the Project Evaluation and Review Technique (PERT) of management?

I. It is a network-based aid for planning and scheduling the many interrelated tasks of a complex project.

II. PERT is routinely used in any large project, such as software development, building construction, etc.

Choose either I nor II

II

I

I and II

Question ID : 630680914939
Option 1 ID : 6306803584803
Option 2 ID : 6306803584801
Option 3 ID : 6306803584800
Option 4 ID : 6306803584802

Which of the following is NOT a limitation of the controlling function of management?

I. Difficulty in setting quantitative standards

II. Distance from employees

III. Lack of control over external factors

IV. It is a purely affair

Question ID : 630680914962
Option 1 ID : 6306803584892
Option 2 ID : 6306803584894
Option 3 ID : 6306803584893
Option 4 ID : 6306803584895

Which of the following statements is/are correct regarding a balanced diet for pregnant women and lactating mothers?

I. Pregnant women, receiving a balanced diet, and who gain appropriate weight during pregnancy (10 to 12 kg) have a higher chance to give birth to healthy babies.

II. Adequate fetal weight and good health and nourishment during pregnancy, nutrition of the mother should be in a good condition before pregnancy and this is called pre-pregnancy nutrition.

Choose either I nor II

II

I and II

I

Question ID : 630680919981
Option 1 ID : 6306803604981
Option 2 ID : 6306803604979
Option 3 ID : 6306803604980
Option 4 ID : 6306803604978

Which of the following is NOT a macronutrient?

- Proteins
- Carbohydrates
- Vitamins
- Minerals

Question ID : 630680914614
Option 1 ID : 6306803583491
Option 2 ID : 6306803583488
Option 3 ID : 6306803583490
Option 4 ID : 6306803583489

According to Piaget's Stages of Cognitive Development, what is the approximate age range for the concrete operational stage?

- 2-7 years
- 7-11 years
- 11-15 years
- 15-18 years

Question ID : 630680914739
Option 1 ID : 6306803584001
Option 2 ID : 6306803584002
Option 3 ID : 6306803584003
Option 4 ID : 6306803584000

Which of the following is NOT a part of the Five-Factor Model of Personality?

- Conscientiousness
- Agreeableness
- Intelligence
- Openness to experience

Question ID : 630680919933
Option 1 ID : 6306803604839
Option 2 ID : 6306803604840
Option 3 ID : 6306803604841
Option 4 ID : 6306803604838

Development covers the period from fertilisation to birth. It comprises how many weeks?

- 40

Question ID : 630680914727
Option 1 ID : 63068035834947

Which of the following statements is NOT correct regarding Fats?

- Fats help us to protect our internal organs by acting as a cushion to the organs.
- Fats are composed of fatty acids and its nature depends on the type of fatty acids.
- Saturated and unsaturated are the types of fatty acids.
- Saturated fatty acids are not found in oil like products.

Question ID : 630680914620
Option 1 ID : 6306803583512
Option 2 ID : 6306803583513
Option 3 ID : 6306803583514
Option 4 ID : 6306803583515

Which of the following statements is NOT correct regarding carbohydrates?

- Carbohydrate-rich foods are easily available.
- Carbohydrates are treated as the body's major source of energy.
- The human body needs to have about 10% to 15% of total calories from carbohydrates.
- Carbohydrates are found in a wide variety of foods.

Question ID : 630680914618
Option 1 ID : 6306803583504
Option 2 ID : 6306803583506
Option 3 ID : 6306803583507
Option 4 ID : 6306803583505

As per Food Safety and Standards (Labelling and Display) Regulations 2020, which of the following information, either on the container or pasted on the label thereto, is not required to be provided for pre-packaged food meant for non-retail sale?

I. Date of manufacture
II. FSSAI logo and license number
III. List of ingredients

- I and III
- I and II
- I and III
- II and III

Question ID : 630680918611
Option 1 ID : 6306803599745
Option 2 ID : 6306803599742
Option 3 ID : 6306803599743
Option 4 ID : 6306803599744

With respect to the development of personality, which of the following is/are correct according to Freud's theory?

Freud proposed that personality could be reduced into two broad dimensions. These dimensions are biologically and genetically based.

I

II

Neither I nor II

I and II

Question ID : 630680919925
Option 1 ID : 6306803604819
Option 2 ID : 6306803604818
Option 3 ID : 6306803604821
Option 4 ID : 6306803604820

Which of the following statements is/are correct regarding the function of food?

I. Food is essential in the repair of worn out tissues and in the formation of new tissues, and for body growth.

II. Food is less important in building our body.

I

II

Neither I nor II

I and II

Question ID : 630680914631
Option 1 ID : 6306803583556
Option 2 ID : 6306803583557
Option 3 ID : 6306803583559
Option 4 ID : 6306803583558

Which of the following is NOT a principle of Hazard Analysis and Critical Control Point (HACCP)?

I. Conduct a feedback analysis.

II. Identify and determine Critical Control Points (CCPs).

III. Establish critical limits.

IV. Conduct a hazard analysis.

Question ID : 630680918621
Option 1 ID : 6306803599781
Option 2 ID : 6306803599778
Option 3 ID : 6306803599779
Option 4 ID : 6306803599780

Which of the following statements is/are correct regarding nutritional needs during pregnancy?

I. Vitamin D and calcium are essential (during pregnancy and lactation) for proper development of bones and teeth of the offspring, for secretion of breast milk that is rich in calcium, and to prevent osteoporosis in the mother.
 II. Iron, taken in the pre-pregnancy and the first 28 days of pregnancy, increases hemoglobin levels.

I

II

Neither I nor II

I and II

Question ID : 630680919977
 Option 1 ID : 6306803604963
 Option 2 ID : 6306803604962
 Option 3 ID : 6306803604965
 Option 4 ID : 6306803604964

Which of the following is significant about human resource management?

I. Proper planning and utilising human resources effectively is needed for the achievement of organisational goals.
 II. Human Resource Management helps in maintaining high morale and better human resources, which helps in retaining talent in an organisation.

I

I and II

II

Neither I nor II

Question ID : 630680920116
 Option 1 ID : 6306803605447
 Option 2 ID : 6306803605448
 Option 3 ID : 6306803605446
 Option 4 ID : 6306803605449

7

Which of the following is NOT a disadvantage of buying based on needs?

I. Consumer may not find what he exactly wants.

II. Seller may charge more for his storage of goods.

III. Consumer (buyer) may pay more when he buys at the time of need.

IV. Consumer may not have money to buy.

Question ID : 630680918906
 Option 1 ID : 6306803600851
 Option 2 ID : 6306803600852
 Option 3 ID : 6306803600850

Which of the following statements is/are correct regarding polymers?
I. They are defined as high molecular mass macromolecules.
II. Polymers like teflon, orlon, etc. are not formed by the addition polymerisation of an alkene or its derivative.

I

Neither I nor II

I and II

II

Question ID : 630680914314

Option 1 ID : 6306803582256

Option 2 ID : 6306803582259

Option 3 ID : 6306803582258

Option 4 ID : 6306803582257

Which of the following statements is/are correct about the importance of the glycolysis pathway?

I. Glycolysis is a metabolic pathway that takes place in all the cells of the body.
II. Glycolysis is the only source of energy in erythrocytes.

Neither I nor II

II

I

I and II

Question ID : 630680914924

Option 1 ID : 6306803584747

Option 2 ID : 6306803584745

Option 3 ID : 6306803584744

Option 4 ID : 6306803584746

Which of the following is a biodegradable polymer?

Nylon-6

I

II

I and II

Neither I nor II

Question ID : 630680914308

Option 1 ID : 6306803582232

Option 2 ID : 6306803582233

Option 3 ID : 6306803582234

Option 4 ID : 6306803582235

Released from chylomicrons and VLDL are transferred across cell by passive diffusion, which depends on the concentration gradient. Which of the following statements correctly mention(s) what happens in their oxidation?

I: P-oxidation
II: into the mitochondrial matrix

Options: I or II

Options: I and II

Options: II

Options: I

Question ID : 630680914919
Option 1 ID : 6306803584727
Option 2 ID : 6306803584726
Option 3 ID : 6306803584725
Option 4 ID : 6306803584724

Which of the following statements is/are correct regarding B.F. Skinner's conditioning theory?

I: The theory of B.F. Skinner is based upon the idea that learning is a function of change in behaviour.
II: Changes in behaviour are the result of an individual's response to stimuli that occur in the environment.

Options: II

Options: I or II

Options: I and II

Options: I

Question ID : 630680919623
Option 1 ID : 6306803603687
Option 2 ID : 6306803603689
Option 3 ID : 6306803603688
Option 4 ID : 6306803603686

Which of the following is recommended to minimise the use of processed foods rich in salt, sugar and fat?

Options: Processed foods are very expensive.

Options: Processed foods are based on western philosophy.

Options: The processed food industry creates problems for farmers.

Options: Processed foods may pose a health risk if they are consumed regularly.

Question ID : 630680918358
Option 1 ID : 6306803598734
Option 2 ID : 6306803598735
Option 3 ID : 6306803598737
Option 4 ID : 6306803598736

From the stage process of technical writing, which of the following is/are correct about the prewriting stage?

I involves analysis of the audience and purpose identification. II is not a step in prewriting.

Neither I nor II

II

I and II

I

Question ID : 630680914824
Option 1 ID : 6306803584343
Option 2 ID : 6306803584341
Option 3 ID : 6306803584342
Option 4 ID : 6306803584340

Which of the following statements is/are correct regarding 'energy balance and food choices for elderly'?
I. Encourage micronutrient-rich foods in the diets of elderly people to enable them to be physically active.
II. Elderly persons need more of vitamins and minerals to remain healthy and active.

Neither Statement-I and Statement-II are correct, and Statement-II is not the correct or Statement-I.

Statement-I is correct, but Statement-II is incorrect.

Both Statement-I and Statement-II are correct, and Statement-II is the correct or Statement-I.

Statement-I is incorrect, but Statement-II is correct.

Question ID : 630680918371
Option 1 ID : 6306803598787
Option 2 ID : 6306803598788
Option 3 ID : 6306803598786
Option 4 ID : 6306803598789

Which of the following statements is/are correct regarding food fortification?

I. Food fortification is the practice of deliberately increasing the micronutrient content of a food, such as iron, vitamins and minerals, in a food so as to improve the nutritional quality of the food.
II. Food fortification is a 'scientifically proven', 'cost-effective', 'scalable' and 'globally applicable' intervention that addresses the issue of micronutrient deficiency.

Neither Statement-I and Statement-II are correct, and Statement-II is not the correct or Statement-I.

I and II

Neither I nor II

I

II

Question ID : 630680920082
Option 1 ID : 6306803605340
Option 2 ID : 6306803605341
Option 3 ID : 6306803605338

plan, there are personal finance decisions related to six major areas.
Which of the following is NOT one of them?

Financial planning

Managing your retirement

Managing money

Managing your holidays

Question ID : 630680918918
Option 1 ID : 6306803600894
Option 2 ID : 6306803600896
Option 3 ID : 6306803600895
Option 4 ID : 6306803600897

Which of the following statements is/are correct regarding managing your money?

I. Financial management involves decisions regarding how much money to carry in hand and how much to allocate to short-term investment.
II. Risk management and credit management are two techniques to enhance your investment.

I and II

I

Neither I nor II

II

Question ID : 630680918923
Option 1 ID : 6306803600916
Option 2 ID : 6306803600914
Option 3 ID : 6306803600917
Option 4 ID : 6306803600915

Which of the following is/are correct regarding healthy food choices for pregnant and lactating mothers?

I. Pregnant women and lactating mothers should take iron, folate and calcium supplements regularly after 14–16 weeks of pregnancy and continue the same during lactation.

II. Pregnant women and lactating mothers should not use alcohol or tobacco and take medicines only when prescribed.

I and II

I

II

Neither I nor II

Question ID : 630680918380
Option 1 ID : 6306803598824
Option 2 ID : 6306803598822
Option 3 ID : 6306803598823
Option 4 ID : 6306803598825

Which of the following statements is/are correct regarding carbohydrates?
I. Carbohydrates are optically active polyhydroxy aldehydes or ketones or molecules made up of such units on hydrolysis.
II. Carbohydrates are also called saccharides.

II

I

Neither I nor II

I and II

Question ID : 630680914237
Option 1 ID : 6306803581949
Option 2 ID : 6306803581948
Option 3 ID : 6306803581951
Option 4 ID : 6306803581950

Which of the following statements is/are correct regarding the function of protein?
I. Protein helps fight infectious agents.
II. Protein enables glucose transport into cells.

II

I

I and II

Neither I nor II

Question ID : 630680914233
Option 1 ID : 6306803581933
Option 2 ID : 6306803581932
Option 3 ID : 6306803581934
Option 4 ID : 6306803581935

Which of the following statements is/are correct regarding POSHAN Abhiyaan?

I. POSHAN Abhiyaan aims to achieve improvement in the nutritional status of children, adolescents, pregnant women and lactating mothers in a time bound manner.

II. One of the major activities undertaken under POSHAN Abhiyaan is community mobilization and awareness advocacy leading to Jan Andolan to educate the people about various nutritional aspects.

II

I

I and II

Neither I nor II

Question ID : 630680920077
Option 1 ID : 6306803605331
Option 2 ID : 6306803605330
Option 3 ID : 6306803605332
Option 4 ID : 6306803605333

Which of the following options is correct about the following statements regarding carbohydrates in sports and exercise?

Statement I: Carbohydrate meals with carbohydrates should be consumed about four to six hours before exercise.
Statement II: It takes about four hours for carbohydrates to get digested and begin to get stored in the muscle and liver glycogen.

Option A: Statement I and Statement II are correct, and Statement II is the correct reason for Statement I.

Option B: Statement I and Statement II are correct, but Statement II is not the correct reason for Statement I.

Option C: Statement I is incorrect, but Statement II is correct.

Option D: Statement I is correct, but Statement II is incorrect.

Question ID : 630680914951
Option 1 ID : 6306803584848
Option 2 ID : 6306803584849
Option 3 ID : 6306803584851
Option 4 ID : 6306803584850

Which of the following are ways in which people belonging to the lower income group can prepare nutritious meals without increasing the cost?

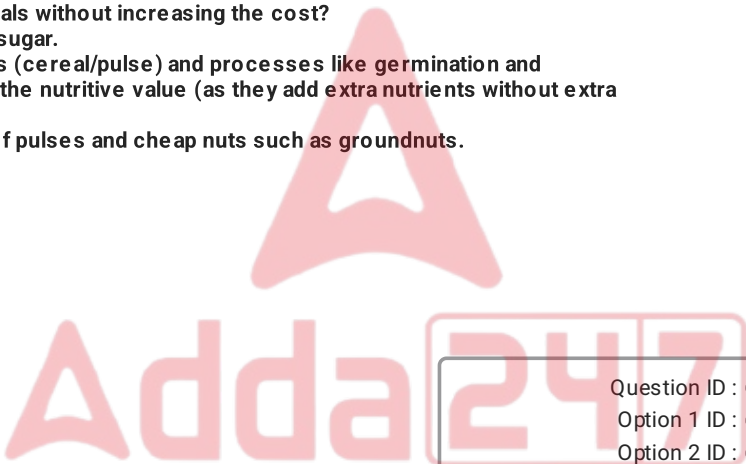
Statement I: Using whole grains instead of refined grains.
Statement II: Using pulses and pulses combinations (cereal/pulse) and processes like germination and sprouting to improve the nutritive value (as they add extra nutrients without extra cost).
Statement III: Using a wider variety of pulses and cheap nuts such as groundnuts.

Option A: I and II

Option B: I and III

Option C: II and III

Option D: II and III



Question ID : 630680918345
Option 1 ID : 6306803598682
Option 2 ID : 6306803598683
Option 3 ID : 6306803598684
Option 4 ID : 6306803598685

Which of the following development patterns CANNOT be used effectively in planning?

Option I: Typical Patterns
Option II: Age-Specific Patterns

Option A: I and II

Option B: Neither I nor II

Option C: I

Option D: II

Question ID : 630680914831
Option 1 ID : 6306803584370
Option 2 ID : 6306803584371
Option 3 ID : 6306803584372

Which of the following statements are correct regarding mass communication?

Mass communication can be defined as the process of multiplying messages with any mechanical device and disseminating the same to the masses. The channels and media of mass communication are radio, TV, satellite communication, newspapers and magazines. The audiences of mass communication are very large in size.

I and II

II and III

II and III

I and III

Question ID : 630680919670
Option 1 ID : 6306803603878
Option 2 ID : 6306803603881
Option 3 ID : 6306803603880
Option 4 ID : 6306803603879

8

Which of the following diet takes care of many aspects. Which of the following is NOT one of them?

It maintains an acceptable body weight for height

It provides the recommended dietary allowances for macronutrients only

It provides essential nutrients in the correct proportions

It provides a variety of food items

Question ID : 630680914636
Option 1 ID : 6306803583579
Option 2 ID : 6306803583577
Option 3 ID : 6306803583578
Option 4 ID : 6306803583576

Which of the following options is INCORRECT about the selection process in an organization?

Selection is a complicated process as it involves a number of steps.

Selection is a positive function.

Selection is the process of choosing the most suitable person from the list of candidates.

The primary objective of selection is to reject unsuitable candidates.

Question ID : 630680914971
Option 1 ID : 6306803584931
Option 2 ID : 6306803584930
Option 3 ID : 6306803584928
Option 4 ID : 6306803584929

ifferent approaches for curriculum transaction. In this context, which of the following statements are correct regarding the play-based approach?

I. In a play-based approach, stimulating materials and activities are made available by the teacher and children self-select activities according to their interests at each stage and learn at their own pace.
II. The teacher's role is that of a facilitator, but she carries out all the structured activities.

III. To enable children to benefit from this approach, teachers need to identify learning opportunities and make play materials available.

I and III

I and II

II and III

I and III

Question ID : 630680919578
Option 1 ID : 6306803603505
Option 2 ID : 6306803603502
Option 3 ID : 6306803603504
Option 4 ID : 6306803603503

Which of the following statements is/are correct regarding vitamin C?

I. Vitamin C helps in the absorption of iron.
II. Functions of Vitamin C include its role in collagen formation.
III. Collagen is a protein, and it forms part of connective tissues.

II and III

I

II and III

I and II

Question ID : 630680914647
Option 1 ID : 6306803583623
Option 2 ID : 6306803583620
Option 3 ID : 6306803583622
Option 4 ID : 6306803583621

According to the codex general standard for the labelling of prepackaged foods, which of the following ingredients are known to cause hypersensitivity and shall be declared?

I. Egg products
II. Wheat containing gluten
III. Green leafy vegetables

I and III

I and III

I and II

II and III

Question ID : 630680918644
Option 1 ID : 6306803599869

With reference to the history of early childhood education in India, which of the following is correct?

I, Madam Montessori created Kalakshetra in Madras for training teachers in early education.

II, in 1947, the pre-school education programme was mostly conducted by voluntary organisations for the urban upper income group.

I

II

Either I or II

Both I and II

Question ID : 630680920148
Option 1 ID : 6306803605575
Option 2 ID : 6306803605574
Option 3 ID : 6306803605577
Option 4 ID : 6306803605576

Identify the child welfare/development scheme from the given description.

The scheme was started in 1970-71 and is being implemented through five major voluntary organisations, including the Central Social Welfare Board and the Indian Council for Child Welfare. Nutritional diet is provided to children between 3 to 5 years of age to the extent of 300 calories and 10-12 gm protein per child per day.

Integrated Child Development Scheme

Mid-Day Nutrition Programme

Integrated Pre-School Projects

Mid-Day Meal Based Supplementary Nutrition Programme

Question ID : 630680919573
Option 1 ID : 6306803603483
Option 2 ID : 6306803603484
Option 3 ID : 6306803603482
Option 4 ID : 6306803603485

Which of the following is NOT a fat soluble vitamin?

Vitamin E

Vitamin D

Vitamin A

Vitamin C

Question ID : 630680914642
Option 1 ID : 6306803583602
Option 2 ID : 6306803583601
Option 3 ID : 6306803583600
Option 4 ID : 6306803583603

Which of the following points INCORRECTLY mention(s) cognitive stages of early

I and Pragmatic Thinking
II and Relativistic Thinking

I

I and II

Neither I nor II

II

Question ID : 630680914902
Option 1 ID : 6306803584648
Option 2 ID : 6306803584650
Option 3 ID : 6306803584651
Option 4 ID : 6306803584649

According to the fundamentals of psychology, which of the following statements is correct regarding the motivational cycle?

I. Psychologists use the concept of need to describe the motivational properties of

II. A condition of need leads to achievement.

III. A need is lack or deficit of some necessity.

IV. A need is a state of tension or arousal produced by a need.

Question ID : 630680919951
Option 1 ID : 6306803604886
Option 2 ID : 6306803604888
Option 3 ID : 6306803604887
Option 4 ID : 6306803604889

Which of the following statements is/are correct regarding the Later Vedic Age?

I. In the later Vedic phase lasting from 1000 BC to 600 BC, the system of kinship became stronger, resulting in the degradation in the role and status of women.

II. In the later Vedic phase, the birth of sons was preferred over the birth of daughters.

III. In the later Vedic phase, both sons and daughters were equally heirs to family property.

I and III

I and III

I and II

I and III

Question ID : 630680919695
Option 1 ID : 6306803603980
Option 2 ID : 6306803603981
Option 3 ID : 6306803603978
Option 4 ID : 6306803603979

With respect to child developmental needs, which of the following is NOT an objective of the Integrated Child Development Services Scheme in India?

To reduce the incidence of mortality, morbidity, malnutrition and school dropout

To improve the nutritional and health status of children in the age group 0-10 years

To lay the foundation for proper psychological, physical and social development of children

To enhance the capability of the mother to look after the normal health and needs of the child through proper nutrition and health education

Question ID : 630680919568

Option 1 ID : 6306803603464

Option 2 ID : 6306803603462

Option 3 ID : 6306803603463

Option 4 ID : 6306803603465

Which of the following is NOT an external source of recruitment in an organisation?

Referrals

Job advertisements

Walk-ins

Employment exchanges

Question ID : 630680914967

Option 1 ID : 6306803584912

Option 2 ID : 6306803584914

Option 3 ID : 6306803584913

Option 4 ID : 6306803584915

Which statement is NOT correct regarding pre-operational stage of cognitive development?

At pre-school age, the child is at the pre-operational stage of development.

In the pre-operational stage, the child is not capable of abstract and logical thinking because of his limited concepts. Only his perceptions guide him.

In the pre-operational stage, the child has completely formed basic concepts related to the world.

In the pre-operational stage, the child learns language and becomes capable of symbolic thought.

Question ID : 630680919587

Option 1 ID : 6306803603538

Option 2 ID : 6306803603541

Option 3 ID : 6306803603540

Option 4 ID : 6306803603539

Which of the following statements is INCORRECT about the divisional structure of an organisation?

I. In a divisional structure, an organisation comprises separate business units or

II. Divisional structures provide managers with the authority to supervise all activities within their particular division.

III. Divisional structures of an organisation demotivate flexibility.

IV. A divisional structure may lead to increased costs since there may be duplication of resources for different products.

Question ID : 630680914974
 Option 1 ID : 6306803584940
 Option 2 ID : 6306803584943
 Option 3 ID : 6306803584941
 Option 4 ID : 6306803584942

Which of the following is a function of protein?

I. Proteins help to build, maintain and repair the muscles and other body tissues.

II. Proteins are composed of amino acids, which are the smaller units.

III. It is recommended that you get 50% to 75% of your daily calories from protein.

IV. I and II

V. II and III

VI. I and III

VII. I

Question ID : 630680914641
 Option 1 ID : 6306803583597
 Option 2 ID : 6306803583598
 Option 3 ID : 6306803583599
 Option 4 ID : 6306803583596

Which of the following statements is/are correct about the possible challenges of adolescence in terms of the cognitive development of adolescents?

I. The ability to think creatively on one hand helps adolescents make innovations, overcome problems, and get out from difficult situations, and on the other hand invites troubles due to their impulsive and often potentially risky experiments like rash driving, unsafe sex, alcohol and drug use, etc.

II. Adolescents feel unique and think that no one is capable of understanding them and their feelings.

III. I

IV. I and II

V. Neither I nor II

VI. I

Question ID : 630680914890
 Option 1 ID : 6306803584605
 Option 2 ID : 6306803584606
 Option 3 ID : 6306803584607
 Option 4 ID : 6306803584604

Which of the following is NOT a point that must be kept in mind while transacting the curriculum?

- I. To interact and co-coordinate with parents and family members.
- II. To involve children while they are engaged in activities.
- III. To encourage positive interactions (child-child, child-teacher and child-material).
- IV. To not start with what the children know and are familiar with, as it will create a learning environment.

Question ID : 630680919582
 Option 1 ID : 6306803603521
 Option 2 ID : 6306803603518
 Option 3 ID : 6306803603520
 Option 4 ID : 6306803603519

Which of the following statements is true about the historical concept of childhood, which of the following statements

1. Mahatma Gandhi proposed the first indigenous scheme for education of very young children which was termed as pre-basic education.
 2. Mahatma Gandhi, took the preschool movement to village, started Balwadi for the education of rural children and he named it as 'Balwadi', children's garden.

I and II

I

II

Neither I nor II

Question ID : 630680920144
 Option 1 ID : 6306803605560
 Option 2 ID : 6306803605558
 Option 3 ID : 6306803605559
 Option 4 ID : 6306803605561

Which of the following given options is correct regarding the following statements about management?

Statement I: Management is multi-disciplinary.
 Statement II: Management of an organisation requires wide knowledge about various aspects as it involves handling of human beings, machines and materials and coordination of production, distribution, accounting and many other functions.

Statement I is incorrect, but Statement II is correct.

Statement I is correct, but Statement II is incorrect.

Statement I and Statement II are correct, but Statement II is not the correct answer for Statement I.

Statement I and Statement II are correct, and Statement II is the correct answer for Statement I.

Question ID : 630680918183
 Option 1 ID : 6306803598041
 Option 2 ID : 6306803598040
 Option 3 ID : 6306803598039

Which of the following options is/are correct about the following statements regarding passive voice in technical writing?

Statement I: The general view is that wherever possible, passive voice should be replaced by active voice.

Statement II: The use of active voice makes sentences direct, shorter and easier to read and of more meaning.

Option 1: Statement I and Statement II are correct, but Statement II is not the correct reason for Statement I.

Option 2: Statement I and Statement II are correct, and Statement II is the correct reason for Statement I.

Option 3: Statement I is correct, but Statement II is incorrect.

Option 4: Statement I is incorrect, but Statement II is correct.

Question ID : 630680914849

Option 1 ID : 6306803584449

Option 2 ID : 6306803584448

Option 3 ID : 6306803584450

Option 4 ID : 6306803584451

Which of the following statements is/are correct regarding monosaccharides?

Statement I: Monosaccharides are simple sugars which can be further hydrolysed into simpler sugars.

Statement II: Monosaccharides are the simplest carbohydrates, which contain free hydroxyl (>OH) and ketone (>C=O) groups.

Option 1: Both I and II are correct.

Option 2: Only II is correct.

Option 3: Only I is correct.

Option 4: Neither I nor II is correct.

Question ID : 630680914333

Option 1 ID : 6306803582350

Option 2 ID : 6306803582349

Option 3 ID : 6306803582348

Option 4 ID : 6306803582351

According to the dietary guidelines for Indians, which of the following is NOT a recommendation for introducing home-based semi-solid foods to infants after six months of age?

Option 1: Breast-milk alone is not adequate for the infant beyond 6 months of age.

Option 2: Breast-milk cannot be used by infants after 6 months.

Option 3: Introduction of adequate and appropriate supplements to young children prevents malnutrition.

Option 4: Introduction of food supplements (semi-solid complementary foods) along with breast-milk is necessary for infants after 6 months of age.

Question ID : 630680918463

Option 1 ID : 6306803599134

Option 2 ID : 6306803599137

Option 3 ID : 6306803599136

Option 4 ID : 6306803599135

Which of the following statements is/are correct regarding deficiency diseases that occur in childhood?

- I. Energy Malnutrition (PEM) leads to growth retardation and infections leading to dehydration.
- II. Night blindness is a result of vitamin C deficiency.
- III. Rickets and osteopenia are bone-related diseases due to deficiency of vitamin A.

- I
- I and III
- II and III
- I and II

Question ID : 630680914796
 Option 1 ID : 6306803584220
 Option 2 ID : 6306803584223
 Option 3 ID : 6306803584222
 Option 4 ID : 6306803584221

Which of the following explains the term 'Babinski'?

- I. When a finger or some other object is pressed against the baby's palm, the baby's hand turns around it.
- II. When there is a loud noise, the baby will throw her/his arms outward then bring them together as if grasping something.
- III. When the bottom of the baby's foot is stroked, the toes fan out and then curl.
- IV. When the head and opening the mouth when touched on the cheek.

Question ID : 630680914771
 Option 1 ID : 6306803584142
 Option 2 ID : 6306803584143
 Option 3 ID : 6306803584141
 Option 4 ID : 6306803584140

Which of the following statements is/are correct regarding the Legal Metrology Act, 2009?

- I. The Act provides that every unit of weight or measure shall be by the metric system or the international system of units.
- II. The Act does not prescribe the qualifications of legal metrology officers appointed by the central government or state government.

- I
- I and II
- II
- Neither I nor II

Question ID : 630680919035
 Option 1 ID : 6306803601330
 Option 2 ID : 6306803601332
 Option 3 ID : 6306803601331
 Option 4 ID : 6306803601333

Weight of a pregnant woman of normal weight for height should contain an _____ of energy from second to third trimester.

1000 calories

1500 calories

2000 calories

2500 calories

Question ID : 630680919984

Option 1 ID : 6306803604991

Option 2 ID : 6306803604990

Option 3 ID : 6306803604992

Option 4 ID : 6306803604993

Which of the following statements is/are correct regarding proteins?

I. All proteins are polypeptides.
II. Collagen is a homopolymer.

A. I

B. II

C. I and II

D. Neither I nor II

Question ID : 630680914345

Option 1 ID : 6306803582397

Option 2 ID : 6306803582396

Option 3 ID : 6306803582398

Option 4 ID : 6306803582399

Which of the given options is correct considering the following statements about 'National Guidelines for Indians'?

Statement-I: Diet, to be wholesome and tasty, should include fresh vegetables and fruits, and a variety of sources of micronutrients.

Statement-II: Leafy vegetables, other vegetables and fresh fruits are treasure trove of minerals and vitamins and hence, protect from diseases.

A. Statement-I and Statement-II are correct, and Statement-II is the correct reason for Statement-I.

B. Statement-I is correct, but Statement-II is incorrect.

C. Statement-I and Statement-II are correct, and Statement-II is not the correct reason for Statement-I.

D. Statement-I is incorrect, but Statement-II is correct.

Question ID : 630680918472

Option 1 ID : 6306803599178

Option 2 ID : 6306803599180

Option 3 ID : 6306803599179

Option 4 ID : 6306803599181

Three important decisions involved in family financial management. Which one is NOT one of them?

Development of individuals in family

Allocation of funds

Deciding on where families get money from

Prudence and saving/investment, i.e. how much to spend and what to retain

Question ID : 630680919021
 Option 1 ID : 6306803601281
 Option 2 ID : 6306803601279
 Option 3 ID : 6306803601278
 Option 4 ID : 6306803601280

With respect to technical writing in English, which of the following statements is/are correct about subjects and predicates?

I. The subject of a sentence is a noun or pronoun (including its modifiers) about which the predicate of the sentence makes a statement.

II. The predicate of a sentence makes an assertion about the subject and completes the meaning of the sentence.

I and II

II

I

Neither I nor II

Question ID : 630680914845
 Option 1 ID : 6306803584434
 Option 2 ID : 6306803584433
 Option 3 ID : 6306803584432
 Option 4 ID : 6306803584435

Which of the following statements is NOT correct regarding Human Resource Management?

I. 'Human Resource Management differs from personnel management, in treating human resource, whose effective utilisation leads to tangible value addition to organisational productivity.

II. Unlike human resource development, human resource management is an administrative activity while the latter involves more planning, built on nation-wide, socio-economic planning.

I and II

II

Neither I nor II

I

Question ID : 630680920126
 Option 1 ID : 6306803605488
 Option 2 ID : 6306803605487
 Option 3 ID : 6306803605489
 Option 4 ID : 6306803605486

Which of the following are guidelines for wise buying practices?

I. Buy the product suggested by the seller by looking for brand name, price, trade

II. Buy valuable goods in high quantity.

III. Buy products with quality certification marks.

I and III

I and III

II and III

I and II

Question ID : 630680919015
Option 1 ID : 6306803601257
Option 2 ID : 6306803601255
Option 3 ID : 6306803601256
Option 4 ID : 6306803601254

Which of the following statements is/are NOT correct regarding the Food Safety and Standards Act, 2006?

I. The act aimed to consolidate the laws relating to food.

II. The act to establish the Food Safety and Standards Authority of India for laying down science-based standards for articles of food and to regulate their manufacture, distribution, sale and import, to ensure availability of safe and wholesome food for human consumption.

I

II

Neither I nor II

I and II

Question ID : 630680919043
Option 1 ID : 6306803601362
Option 2 ID : 6306803601363
Option 3 ID : 6306803601365
Option 4 ID : 6306803601364

Which of the following development according to the Life-Span Perspective (LSP) includes the following assumptions?

I. All the processes of human development, i.e., biological, cognitive and socio-emotional are interwoven in the development of a person throughout the life-span.
II. Development is uni-directional.

II

I

I and II

Neither I nor II

Question ID : 630680919632
Option 1 ID : 6306803603731
Option 2 ID : 6306803603730
Option 3 ID : 6306803603732

Which of the following statements is NOT correct regarding the food exchange

Food exchange lists are not useful in planning diets for metabolic diseases and in prevention of obesity.

The food exchange system allows one to choose a variety of foods from within a category to obtain adequate nutrients.

The food exchange list has brought about simplicity, flexibility and standardisation into the calculation of values of foods used in quantitative diets.

The food exchange system allows variety to be introduced into the diets without affecting the energy or macronutrient contents.

Question ID : 630680918450
Option 1 ID : 6306803599089
Option 2 ID : 6306803599086
Option 3 ID : 6306803599087
Option 4 ID : 6306803599088

Which of the following is/are principle(s) of motor development?

Motor development depends upon neural maturity and muscular readiness.

Children should be mature enough to learn any skill.

The rate of motor development is exactly the same in all children.

I

I and II

I and III

II and III

Question ID : 630680914763
Option 1 ID : 6306803584108
Option 2 ID : 6306803584109
Option 3 ID : 6306803584111
Option 4 ID : 6306803584110

Which of the following best describes the development of children's ability to understand and appreciate other person's point of view in five stages. Which of the following is NOT correct?

Concrete (3-7 years)

Effective (6-12)

Traditional and conventional (10-12)

Self-information (4-9)

Question ID : 630680914744
Option 1 ID : 6306803584028
Option 2 ID : 6306803584030
Option 3 ID : 6306803584031
Option 4 ID : 6306803584029

Which of the following statements is/are correct about polysaccharides?

I. Polysaccharides are long chains of sugars.
II. Cellulose is a polymeric polysaccharide consisting of three types of monosaccharides.

I

II

Neither I nor II

I and II

Question ID : 630680914440
Option 1 ID : 6306803582777
Option 2 ID : 6306803582776
Option 3 ID : 6306803582779
Option 4 ID : 6306803582778

Which of the following statements is/are correct regarding 'Rashtriya Poshan Maah' and 'Pakhwada'?

I. Rashtriya Poshan Maah is celebrated in the month of March.
II. Pakhwada is celebrated in the month of September.

I

Neither I nor II

II

I and II

Question ID : 630680920107
Option 1 ID : 6306803605411
Option 2 ID : 6306803605413
Option 3 ID : 6306803605410
Option 4 ID : 6306803605412

Methodology

Which of the following are the functions of the teacher-made test?
I. To assess the day-to-day teaching-learning activities of the school.
II. To develop more efficient learning-teaching strategies.
III. To assess the ability of individual students. By knowing the abilities of the students, the teacher may be in an advantageous position to form different ability groups.

I and III

II and III

I and II

I and III

Question ID : 630680920424
Option 1 ID : 6306803606680
Option 2 ID : 6306803606681
Option 3 ID : 6306803606677

Which of the following is NOT an observable behaviour for the identification of abilities among students?

A. Student does not read well, although his oral answers are intelligent.

B. Student writes numbers wrong, e.g., '12' as '21' or write '69' when asked to write

C. Student turns his head to one side to hear better.

D. Student omits words or lines in reading.

Question ID : 630680920442

Option 1 ID : 6306803606750

Option 2 ID : 6306803606752

Option 3 ID : 6306803606751

Option 4 ID : 6306803606753

Which of the following reasons is related to aesthetics because of which of the following reasons? Which of the following reasons is related to aesthetics because of which of the following reasons?

A. Art appreciation is considered the first step to aesthetic sensitivity.

B. Regular art appreciation may improve the aesthetic sensibility of

C. I and II

D. Neither I nor II

E. II

F. I

Question ID : 630680920462

Option 1 ID : 6306803606832

Option 2 ID : 6306803606833

Option 3 ID : 6306803606831

Option 4 ID : 6306803606830

Which of the following is NOT a principle of curriculum planning? Which of the following is NOT a principle of curriculum planning?
A. Learner-Centeredness
B. Flexibility

C. I and II

D. I and II

E. II

F. I

Question ID : 630680920412

Option 1 ID : 6306803606637

Option 2 ID : 6306803606636

Option 3 ID : 6306803606635

Option 4 ID : 6306803606634

Following is a characteristic of an effective method of teaching and

a scope for peer learning.
a scope for learning something by doing.

er I nor II

II

I

I and II

Question ID : 630680920192

Option 1 ID : 6306803605753

Option 2 ID : 6306803605751

Option 3 ID : 6306803605750

Option 4 ID : 6306803605752

t to the assessment of learning, which of the following statements is

ment of learning helps a teacher to design his/her teaching in a better way
the attainment level of learners in the subject content.
ent also benefits school management (including the principal), parents,
designers, subject experts, planners, guidance workers, counselors, and
ers.

I

I and II

er I nor II

II

Question ID : 630680920431

Option 1 ID : 6306803606706

Option 2 ID : 6306803606708

Option 3 ID : 6306803606709

Option 4 ID : 6306803606707

Following are the benefits of collaborative learning?

on of diversity
dgment of individual differences

I

I and II

er I nor II

II

Question ID : 630680920196

Option 1 ID : 6306803605766

Option 2 ID : 6306803605768

Option 3 ID : 6306803605769

Option 4 ID : 6306803605767

Which of the following is NOT an assumption of equitable and inclusive education?
The classroom will reflect in all children's learning.
All children can learn to the best of their potential, provided schools meet the needs of different learners.

I

II

I and II

Neither I nor II

Question ID : 630680920438

Option 1 ID : 6306803606734

Option 2 ID : 6306803606735

Option 3 ID : 6306803606736

Option 4 ID : 6306803606737

Which of the following is NOT a characteristic of effective learning and teaching?
The learning plan should be objective-based.
The learning plan must be theoretical only.

I

II

Neither I nor II

I and II

Question ID : 630680920343

Option 1 ID : 6306803606362

Option 2 ID : 6306803606363

Option 3 ID : 6306803606365

Option 4 ID : 6306803606364

Which of the following is a reason why it is important for a teacher to study cognitive development?
Understanding every child in the learning process is important.
Since every child may learn differently and a variety of teaching styles need to be used, one teaching approach will not match the learning needs of all children.

I

I and II

Neither I nor II

II

Question ID : 630680920458

Option 1 ID : 6306803606815

Option 2 ID : 6306803606816

Option 3 ID : 6306803606817

Option 4 ID : 6306803606814

Which of the following is NOT an example of learning-centred educational practices?

- a) team-based inquiry learning
- b) dual student inquiry and discovery
- c) collaborative group learning, only inside the classroom
- d) synchronous interactive distance learning

Question ID : 630680920200
 Option 1 ID : 6306803605783
 Option 2 ID : 6306803605782
 Option 3 ID : 6306803605785
 Option 4 ID : 6306803605784

Which of the following are NOT characteristics of a discipline?
 I. It has a particular object of research, though the object of research may be another discipline.
 II. It does not have theories and concepts that organise the accumulated knowledge effectively.
 III. It has developed specific research methods according to its specific requirements.

- a) I and III
- b) II
- c) II and III
- d) I and III

Question ID : 630680920375
 Option 1 ID : 6306803606485
 Option 2 ID : 6306803606482
 Option 3 ID : 6306803606484
 Option 4 ID : 6306803606483

Which of the following statements is correct regarding growth and development?

I. Growth is confined to the physical changes that are quantifiable.
 II. Pubertal changes bring functional maturity in the individual, which is reflected in the improvement in working or functioning of the person.

- a) I and II
- b) I
- c) Neither I nor II
- d) II

Question ID : 630680920450
 Option 1 ID : 6306803606784
 Option 2 ID : 6306803606782
 Option 3 ID : 6306803606785
 Option 4 ID : 6306803606783

Which of the following statements is correct regarding measurement of individual differences?

I. All methods used in educational psychology to measure individual differences are psychological tests.

II. A test is an objective and standardised measure of a sample of behaviour of two or more persons.

I and II

I

Neither I nor II

II

Question ID : 630680920454
 Option 1 ID : 6306803606800
 Option 2 ID : 6306803606798
 Option 3 ID : 6306803606801
 Option 4 ID : 6306803606799

Which of the following are dimensions of the curriculum that need to be deliberated upon for the design of an effective curriculum?

I. Learning goals and objectives

II. Content

III. Methods for each of the learning areas

II and III

I and III

I and II

II and III

Question ID : 630680920398
 Option 1 ID : 6306803606580
 Option 2 ID : 6306803606579
 Option 3 ID : 6306803606578
 Option 4 ID : 6306803606581

Which of the following statements is correct regarding the principle of curriculum?

I. According to the Principle of Coherence, a curriculum can be stated as coherent when learning is built on the previous knowledge of learners.

II. According to the Principle of Relevance, while planning a curriculum, it is essential to consider the relevance of it in terms of societal needs and vocational needs of learners.

II

I and II

I

Neither I nor II

Question ID : 630680920420
 Option 1 ID : 6306803606667
 Option 2 ID : 6306803606668
 Option 3 ID : 6306803606666
 Option 4 ID : 6306803606669

With reference to the approaches to curriculum planning, which of the following is correct regarding the humanistic approach?
I. Each is influenced by progressive philosophy and child-centred pedagogic practices.
II. The primary focus is on the nature of childhood, i.e. child's interests, needs, abilities, and characteristics.

II

Neither I nor II

I

I and II

Question ID : 630680920407
Option 1 ID : 6306803606615
Option 2 ID : 6306803606617
Option 3 ID : 6306803606614
Option 4 ID : 6306803606616

With reference to gender issues in curriculum, presently, textbooks are likely to have the following flaws?
I. Lack of female characters and female authors
II. Male roles and a few women shown in service roles that consists of either teaching or assisting roles

I and II

II

Neither I nor II

I

Question ID : 630680920389
Option 1 ID : 6306803606544
Option 2 ID : 6306803606543
Option 3 ID : 6306803606545
Option 4 ID : 6306803606542

According to Weimer (2002), there are five practices that need to change to achieve effective teaching. Which of the following is NOT one of them?

Organization of content

Role of parents

Responsibility for learning

Processes and purposes of evaluation

Question ID : 630680920345
Option 1 ID : 6306803606370
Option 2 ID : 6306803606373
Option 3 ID : 6306803606371
Option 4 ID : 6306803606372

Which of the following statements is NOT correct regarding the Samagra Shiksha scheme of the government of India?

Option 1: The scheme aims to universalise access to school education.

Option 2: Promoting equity at all levels of school education is one of the major objectives of the scheme.

Option 3: It is an integrated scheme of the Ministry of Education for school education, covering pre-primary to senior secondary classes.

Option 4: Under the scheme, there is no mention of inclusive education for children with special needs.

Question ID : 630680920446

Option 1 ID : 6306803606766

Option 2 ID : 6306803606767

Option 3 ID : 6306803606768

Option 4 ID : 6306803606769

