

DSSSB Librarian

**Previous Year Paper
30 Mar, 2024 Shift 3**

Adda247

Test Prime

**ALL EXAMS,
ONE SUBSCRIPTION**



70,000+
Mock Tests



**Personalised
Report Card**



**Unlimited
Re-Attempt**



600+
Exam Covered



**Previous Year
Papers**



500%
Refund



ATTEMPT FREE MOCK NOW



GOVT. OF NCT OF DELHI
Delhi Subordinate Services Selection Board
FC-18, Institutional Area, Karkardooma, Delhi – 110092.
www.dsssb.delhigovt.nic.in

Participant ID	
Participant Name	
Test Center Name	
Test Date	30/03/2024
Test Time	4:30 PM - 6:30 PM
Subject	Librarian

Section :

A is the father of B. B is the sister of C. C is the mother of D. D is the wife of E. How many male members are there?

- 1. 3
- 2. 2
- 3. 1
- 4. 4

Question ID :

Option 1 ID :

Option 2 ID :

Option 3 ID :

Option 4 ID :

- 1. 3
- 2. 4
- 3. 5
- 4. 6

Question ID :

Option 1 ID :

Option 2 ID :

Option 3 ID :

Option 4 ID :

Eight persons A, B, C, D, E, F, G and H are seated around a circular table facing towards the centre. E is second to the left of A. G is third to the left of E. H is to the immediate right of E. D is second to the right of H. B is third to the right of F. How many persons sits between A and F, when counted from left of A?

- ✓ 1. 5
- ✗ 2. 4
- ✗ 3. None
- ✗ 4. 1

Question ID :

Option 1 ID :

Option 2 ID :

Option 3 ID :

Option 4 ID :

In the following question, select the odd letter/letters from the given alternatives.

- ✓ 1. WYV
- ✗ 2. XZV
- ✗ 3. RTP
- ✗ 4. TVR

Question ID :

Option 1 ID :

Option 2 ID :

Option 3 ID :

Option 4 ID :

In the following question, four letter pairs are given. The letters on left side of (-) is related to the letters on the right side of (-) with some Logic/Rule/Relation. Three are similar on basis of same Logic/Rule/Relation. Select the odd one out from the given alternatives.

- ✗ 1. AST – BUW
- ✗ 2. GUI – HWL
- ✗ 3. KLO – LNR
- ✓ 4. VJN – XLP

Question ID :

Option 1 ID :

Option 2 ID :

Option 3 ID :

Option 4 ID :

Select the option that is related to the fifth number cluster in the same way as the second number cluster is related to the first number cluster and fourth number cluster is related to third number cluster. (NOTE: Operations should be performed on the whole numbers, without breaking down the numbers into its constituent digits. E.g.13 – Operations on 13 such as adding /subtracting /multiplying etc. to 13 can be performed. Breaking down 13 into 1 and 3 and then performing mathematical operations on 1 and 3 is not allowed)

81 : 162 :: 72 : 144 :: 65 : ?

- 1. 131
- 2. 133
- 3. 130
- 4. 132

Question ID :

Option 1 ID :

Option 2 ID :

Option 3 ID :

Option 4 ID :

In a certain code language, 'ADEQUATE' is written as '12351021262022', 'CATHOLIC' is written as '32620191515924'. What is the code for 'DISORDER' in that code language?

- 1. 4181912172359
- 2. 4191812182359
- 3. 4181912182259
- 4. 4181912182359

Question ID :

Option 1 ID :

Option 2 ID :

Option 3 ID :

Option 4 ID :

In the following question below are given some statements followed by some conclusions based on those statements. Taking the given statements to be true even if they seem to be at variance from commonly known facts. Read all the conclusions and then decide which of the given conclusion logically follows the given statements.

Statements:

- I. All A are K.
- II. Some L are K.

Conclusion:

- I. Some A are K.
- II. Some L are A.

- 1. Both conclusions I and II follows
- 2. Only conclusion II follows
- 3. Only conclusion I follows
- 4. Neither conclusion follows

Question ID :

Option 1 ID :

Option 2 ID :

Option 3 ID :

Option 4 ID :

A certain number of persons sitting in a row facing north. 17 persons are there between M and N, N sits on right extreme end. O is third to the left of M and third from the left end. P is 11th from left end. Which of the following statements is NOT correct?

I. Four people sits between M and P.

II. N is to the left of P.

1. Neither I nor II

2. Only I

3. Only II

4. Both I and II

Option 4 ID : _____

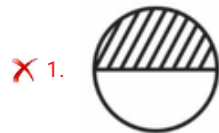
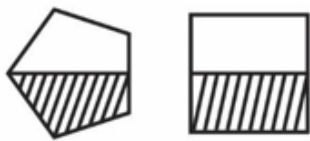
Option 3 ID : _____

Option 2 ID : _____

Option 1 ID : _____

Question ID : _____

Which figure is similar to the given figures?



Option 4 ID : _____

Option 3 ID : _____

Option 2 ID : _____

Option 1 ID : _____

Question ID : _____

In a certain code language, 'REMOVE' is written as 'PCKLSB'. What is the code for 'SHOULD' in that code language?

- 1. QFMSJD
- 2. QFMRIA
- 3. QFMRJB
- 4. QFMRIB

Option 4 ID : _____

Option 3 ID : _____

Option 2 ID : _____

Option 1 ID : _____

Question ID : _____

By interchanging the given two signs and two numbers (not digits) which of the following equation will be correct?

– and ×, 9 and 3

- 1. $5 - 3 \times 8 \div 4 + 9 = 22$
- 2. $6 \div 3 \times 9 + 7 - 4 = 0$
- 3. $8 \times 4 \div 2 - 9 + 3 = 11$
- 4. $5 \times 9 - 3 + 8 \div 2 = -8$

Option 4 ID : _____

Option 3 ID : _____

Option 2 ID : _____

Option 1 ID : _____

Question ID : _____

Select the option that is related to the fourth letter-number cluster in the same way as the first letter-number cluster is related to the second letter-number cluster and fifth letter-number cluster is related to sixth letter-number cluster.

(NOTE: Operations should be performed on the whole numbers, without breaking down the numbers into its constituent digits. E.g. 13 – Operations on 13 such as adding /subtracting /multiplying etc. to 13 can be performed. Breaking down 13 into 1 and 3 and then performing mathematical operations on 1 and 3 is not allowed)

FL81 : HM88 :: ? : VJ24 :: RI9 : TJ16

- 1. SH44
- 2. WL17
- 3. TI17
- 4. UG44

Option 4 ID : _____

Option 3 ID : _____

Option 2 ID : _____

Option 1 ID : _____

Question ID : _____

In the following question below are given some statements followed by some conclusions based on those statements. Taking the given statements to be true even if they seem to be at variance from commonly known facts. Read all the conclusions and then decide which of the given conclusion logically follows the given statements.

Statements:

- I. Some S are T.
- II. Some V are T.
- III. Some Q are S.

Conclusions:

- I. Some S are Q.
- II. Some T are not V.
- III. No V is Q.

- 1. Only conclusion III follows
- 2. Only conclusion I follows
- 3. Neither conclusion follows
- 4. Only conclusion II follows

Question ID :

Option 1 ID :

Option 2 ID :

Option 3 ID :

Option 4 ID :

'A @ B' means 'A is the mother of B', 'A * B' means 'A is the father of B', 'A S B' means 'A is the son of B', 'A # B' means 'A is the daughter of B'. If X S Y @ R # Z * T, then how is R related to T?

- 1. Sister
- 2. Father's sister
- 3. Brother
- 4. Daughter

Question ID :

Option 1 ID :

Option 2 ID :

Option 3 ID :

Option 4 ID :

In the following question, select the missing number from the given series.

113, 105, 97, 89, 81, ?

- 1. 71
- 2. 72
- 3. 73
- 4. 74

Question ID :

Option 1 ID :

Option 2 ID :

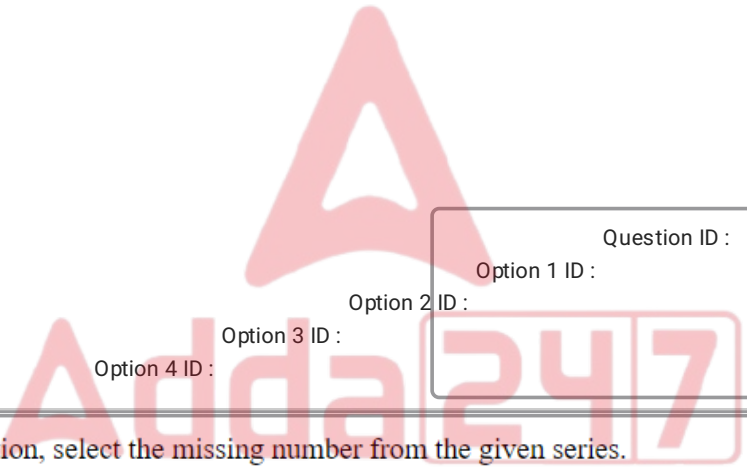
Option 3 ID :

Option 4 ID :

Select that missing pair (Fifth letter cluster : Sixth letter cluster) which is related in the same way as the first letter cluster is related to the second letter cluster and third letter cluster is related to fourth letter cluster.

QR : OP :: KL : II :: ?

- 1. ZX : XV
- 2. PR : NO
- 3. BI : DK
- 4. TP : RR



Question ID :

Option 1 ID :

Option 2 ID :

Option 3 ID :

Option 4 ID :

In the following question, select the missing number from the given series.

119, 122, 125, 128, 131, ?

- 1. 131
- 2. 134
- 3. 139
- 4. 138

Question ID :

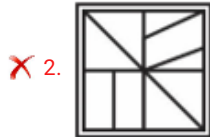
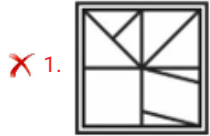
Option 1 ID :

Option 2 ID :

Option 3 ID :

Option 4 ID :

From the given option figures, select the one in which the question figure is hidden/embedded.



Question ID :
 Option 1 ID :
 Option 2 ID :
 Option 3 ID :
 Option 4 ID :

Seven friends namely – P1, P2, P3, P4, P5, P6 and P7 are living in a building of seven floors, lowermost floor is numbered 1, floor above it is numbered 2 and so on till the top-most floor which is numbered 7. Each person lives on a single floor. P1 lives on a floor numbered four. No one lives below P7. Number of person who live between P6 and P1 are same as the number of persons who live between P1 and P5. P2 lives four floor above P4. P6 lives above P4, but not immediately above. P2 doesn't live on top floor. Who lives on floor numbered three?

- ✓ 1. P5
- ✗ 2. P1
- ✗ 3. P7
- ✗ 4. P6

Question ID :
 Option 1 ID :
 Option 2 ID :
 Option 3 ID :
 Option 4 ID :

Kiyana Parihar, who was in news in December 2023, is associated with which of the following sports?

- 1. Cycling
- 2. Swimming
- 3. Squash
- 4. Chess

Option 4 ID :

Option 3 ID :

Option 2 ID :

Option 1 ID :

Question ID :

Which of the following festivals is not associated with Indian state of Rajasthan?

- 1. Desert Festival
- 2. Losar
- 3. Sufi Spirit Festival
- 4. Camel Fair

Option 4 ID :

Option 3 ID :

Option 2 ID :

Option 1 ID :

Question ID :

Which of the following Peak of the Himalaya located in India?

- 1. Mt. Everest
- 2. Makalu
- 3. Nanda Devi
- 4. Annapurna

Option 4 ID :

Option 3 ID :

Option 2 ID :

Option 1 ID :

Question ID :

When is the National Technology Day celebrated every year in India?

- 1. 29th August
- 2. 8th March
- 3. 11th May
- 4. 22nd February

Option 4 ID :
Option 3 ID :
Option 2 ID :
Option 1 ID :
Question ID :

Which of the following parts of the Indian Constitution deals with the administration of Union Territories?

- 1. Part II
- 2. Part IV
- 3. Part IX
- 4. Part VIII

Option 4 ID :
Option 3 ID :
Option 2 ID :
Option 1 ID :
Question ID :

Which of the following Indian languages does not belong to the Indo-Aryan languages?

- 1. Gujarati
- 2. Tamil
- 3. Punjabi
- 4. Hindi

Option 4 ID :
Option 3 ID :
Option 2 ID :
Option 1 ID :
Question ID :

Which of the following ministries had launched scheme for residential education for students in high schools in targeted areas (SHRESHTA)?

- 1. Ministry of Human Resource Development
- 2. Ministry of Social Justice & Empowerment
- 3. Ministry of Home Affairs
- 4. Ministry of Women & Child Development

Option 4 ID :
Option 3 ID :
Option 2 ID :
Option 1 ID :
Question ID :

Vijayanagara kings claimed to rule on behalf of the god _____.

- 1. Vishnu
- 2. Virupaksha
- 3. Ganesha
- 4. Indra

Option 4 ID :
Option 3 ID :
Option 2 ID :
Option 1 ID :
Question ID :

Which is the only country in the world that has both tigers and lions?

- 1. Thailand
- 2. China
- 3. South Africa
- 4. India

Option 4 ID :
Option 3 ID :
Option 2 ID :
Option 1 ID :
Question ID :

Which of the following is NOT a source of vitamin D?

- 1. Eggs
- 2. Liver
- 3. Fish
- 4. Mango

Option 4 ID :
Option 3 ID :
Option 2 ID :
Option 1 ID :
Question ID :

Which of the following Mughal emperors followed the administration of Sher Shah?

- 1. Akbar
- 2. Shah Jahan
- 3. Jahangir
- 4. Humayun

Option 4 ID :
Option 3 ID :
Option 2 ID :
Option 1 ID :
Question ID :

Which of the following Articles of the Indian Constitution provides that "There shall be a President of India"?

- 1. Article 48
- 2. Article 63
- 3. Article 76
- 4. Article 52

Option 4 ID :
Option 3 ID :
Option 2 ID :
Option 1 ID :
Question ID :

Emissions Gap Report 2023 was published by which of the following organizations?

- 1. World Wide Fund (WWF)
- 2. Wetlands International
- 3. International Monetary Fund (IMF)
- 4. United Nations Environment Programme (UNEP)

Option 4 ID :
Option 3 ID :
Option 2 ID :
Option 1 ID :
Question ID :

In which of the following years Regional Rural Banks (RRBs) were established in India?

- 1. 1992
- 2. 1982
- 3. 1975
- 4. 1969

Option 4 ID :
Option 3 ID :
Option 2 ID :
Option 1 ID :
Question ID :

First Singh Sabhas were formed at which of the following place?

- 1. Amritsar
- 2. Delhi
- 3. Jalandhar
- 4. Multan

Option 4 ID :
Option 3 ID :
Option 2 ID :
Option 1 ID :
Question ID :

Which of the following is/are the major science objectives of Aditya-L1 mission?

- I. Study of Solar upper atmospheric (chromosphere and corona) dynamics.
- II. Magnetic field topology and magnetic field measurements in the solar corona.

- 1. Only I
- 2. Neither I nor II
- 3. Both I and II
- 4. Only II

Option 4 ID :
Option 3 ID :
Option 2 ID :
Option 1 ID :
Question ID :

Which of the following fundamental duties was added to the Indian Constitution by the 86th Constitutional Amendment Act?

1.
Who is a parent or guardian to provide opportunities for education to his child or, as the case may be, ward between the age of six and fourteen years.

- 2.
To uphold and protect the sovereignty, unity and integrity of India.
- 3.
To value and preserve the rich heritage of our composite culture.
- 4. To safeguard public property and to abjure violence.

Option 4 ID :
Option 3 ID :
Option 2 ID :
Option 1 ID :
Question ID :

Which country is called the country of 'winds'?

- 1. China
- 2. South Africa
- 3. India
- 4. Denmark

Option 4 ID :
Option 3 ID :
Option 2 ID :
Option 1 ID :
Question ID :

Which among the following is the most urbanized state/union territory in India as per 2011 census?

- 1. Dadra and Nagar Haveli
- 2. Tamil Nadu
- 3. Mizoram
- 4. Puducherry

Option 4 ID : _____

Option 3 ID : _____

Option 2 ID : _____

Option 1 ID : _____

Question ID : _____

_____ is the provision of financial services to low-income clients, including consumers and the self-employed, who traditionally lack access to banking and related services.

- 1. Microsaving
- 2. Microfinance
- 3. Microinsurance
- 4. Microcredit

Option 4 ID : _____

Option 3 ID : _____

Option 2 ID : _____

Option 1 ID : _____

Question ID : _____

L's income is 110 percent of N's income and L's expenditure is 90 percent of N's expenditure. If N saves 20 percent of his income, then how much percentage does L save of his own income?

- 1. 30.5 percent
- 2. 32.5 percent
- 3. 34.5 percent
- 4. 36.5 percent

Option 4 ID : _____

Option 3 ID : _____

Option 2 ID : _____

Option 1 ID : _____

Question ID : _____

If both length and breadth of a cuboid is increased by 16 percent, then by how much percent its height should be reduced (approximately) so that its volume remains same?

- 1. 32.72 percent
- 2. 21.24 percent
- 3. 25.68 percent
- 4. 17.46 percent

Question ID :

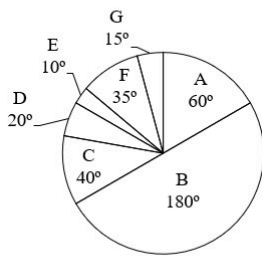
Option 1 ID :

Option 2 ID :

Option 3 ID :

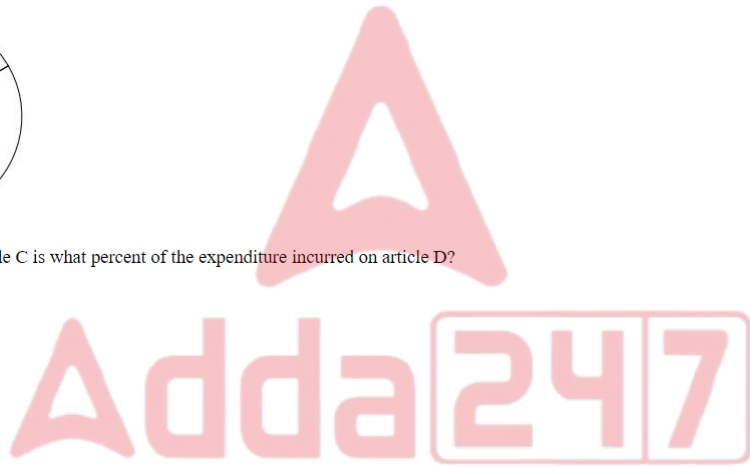
Option 4 ID :

The pie chart given below shows the expenditure incurred by a person on 7 articles. The total expenditure of all these 7 articles are 7200. Expenditure incurred on a particular article is shown in terms of degree with respect to the total expenditure incurred in all these 7 articles.



The expenditure incurred on article C is what percent of the expenditure incurred on article D?

- 1. 200 percent
- 2. 50 percent
- 3. 100 percent
- 4. 150 percent



Question ID :

Option 1 ID :

Option 2 ID :

Option 3 ID :

Option 4 ID :

What is the value of $0.5\overline{62}$?

1. $\frac{562}{990}$
2. $\frac{562}{900}$
3. $\frac{506}{999}$
4. $\frac{506}{900}$

Option 4 ID :
Option 3 ID :
Option 2 ID :
Option 1 ID :
Question ID :

A square park has sides of length 8 cm. A 3 metre wide path is inside it along the sides. What is the area of the path?

1. 54 cm^2
2. 36 cm^2
3. 60 cm^2
4. 48 cm^2

Option 4 ID :
Option 3 ID :
Option 2 ID :
Option 1 ID :
Question ID :

The table given below shows the value of foreign trade by two countries in 5 different years.

Years	Country	
	P	Q
Y1	220	95
Y2	200	155
Y3	125	245
Y4	115	225
Y5	85	140

K_1 = The value of average foreign trade by country P in all the 5 years.

K_2 = The difference between the total foreign trade by country P and Q in all the 5 years.

What is the value of $(K_1 - K_2)$?

- 1. 28
- 2. 44
- 3. 16
- 4. 34

Question ID :

Option 1 ID :

Option 2 ID :

Option 3 ID :

Option 4 ID :

If $M : N = 2 : 1$ and $N : S = 3 : 7$, then what is the value of $N : (M + S)$?

- 1. 3 : 13
- 2. 4 : 13
- 3. 3 : 10
- 4. 3 : 11



Question ID :

Option 1 ID :

Option 2 ID :

Option 3 ID :

Option 4 ID :

The average weight of a group of 15 members is 60 kg. The weight of youngest member is 4 kg. If we exclude that youngest member from the group, then what will be the average weight of the remaining members?

- 1. 71 kg
- 2. 68 kg
- 3. 65 kg
- 4. 64 kg

Question ID :

Option 1 ID :

Option 2 ID :

Option 3 ID :

Option 4 ID :

Population of a town increases at the rate of 20 percent per annum. If the population of town will be 21600 after 2 years, then what is the present population of the town?

- 1. 16500
- 2. 15000
- 3. 18700
- 4. 17500

Question ID :

Option 1 ID :

Option 2 ID :

Option 3 ID :

Option 4 ID :

A man starts running from a point at the speed of 20 km/hr at 7:00 am. Two hours later another man starts running in the same direction from the same point at the speed of 35 km/hr. At what time will the second man be 50 km ahead of the first man?

- 1. 4:00 pm
- 2. 3:00 pm
- 3. 3:30 pm
- 4. 2:30 pm

Question ID :

Option 1 ID :

Option 2 ID :

Option 3 ID :

Option 4 ID :

What is the length of the longest rod that can be placed in a room which is 8 metres long, 12 metres broad and 16 metres high?

- 1. $3\sqrt{34}$ metres
- 2. $6\sqrt{33}$ metres
- 3. $4\sqrt{29}$ metres
- 4. $5\sqrt{41}$ metres

Question ID :

Option 1 ID :

Option 2 ID :

Option 3 ID :

Option 4 ID :

Suresh alone can do a work in 10 days working 1 hour a day. Shalu alone can do the same work in 2 days working 5 hours a day. How many hours do they need to work together in a day to complete the same work in 10 days?

- 1. 1.5 hours
- 2. 1 hour
- 3. 0.5 hours
- 4. 2 hours

Option 1 ID :
Option 2 ID :
Option 3 ID :
Option 4 ID :

Question ID :

The sum of 24 percent of first number and 12 percent of second number is 6 times of the sum of 3 percent of first number and 4 percent of second number. What is the ratio of first number to the second number?

- 1. 5 : 6
- 2. 2 : 3
- 3. 1 : 2
- 4. 2 : 1

Option 1 ID :
Option 2 ID :
Option 3 ID :
Option 4 ID :

Question ID :

Umesh sells two chairs at the rate of Rs. 1404 per chair. He earns a profit of 35 percent on one chair and loses 35 percent on the other chair. What will be the total profit or loss in whole transaction?

- 1. Rs. 402 profit
- 2. Rs. 412 profit
- 3. Rs. 302 loss
- 4. Rs. 392 loss

Option 1 ID :
Option 2 ID :
Option 3 ID :
Option 4 ID :

Question ID :

A person borrows Rs. 75000 at the rate of 12 percent per annum on simple interest for 4 years. He immediately lends it to another person at the rate of 15.5 percent per annum on simple interest for 4 years. What is the value of gain per year?

- 1. Rs. 2720
- 2. Rs. 2625
- 3. Rs. 2825
- 4. Rs. 2725

Question ID :

Option 1 ID :

Option 2 ID :

Option 3 ID :

Option 4 ID :

X and Z are at a distance of 180 km from each other at 7:00 a.m. After 1 hour, X starts moving towards Z at the speed of 18 km/hr. At 11 a.m., Z starts moving towards X at the speed of 12 km/hr. At what time will they meet?

- 1. 4:24 pm
- 2. 3:48 pm
- 3. 2:54 pm
- 4. 3:12 pm

Question ID :

Option 1 ID :

Option 2 ID :

Option 3 ID :

Option 4 ID :

The speed of a train is 72 km/hr. If the length of the train is 450 metres, then in how much time it will cross a platform of length 470 metres?

- 1. 34 seconds
- 2. 46 seconds
- 3. 38 seconds
- 4. 52 seconds

Question ID :

Option 1 ID :

Option 2 ID :

Option 3 ID :

Option 4 ID :

What will be the net discount percentage for three successive discounts of 2 percent, 5 percent and 20 percent?

- 1. 24.48 percent
- 2. 25.52 percent
- 3. 24.72 percent
- 4. 26.48 percent

Option 4 ID :
Option 3 ID :
Option 2 ID :
Option 1 ID :
Question ID :

What is the value of 20 percent of 80 percent of $\frac{5}{4}$ of 1250?

- 1. 2.5
- 2. 250
- 3. 25
- 4. 2500

Option 4 ID :
Option 3 ID :
Option 2 ID :
Option 1 ID :
Question ID :

Which of the following number is divisible by 9?

- 1. 1540
- 2. 8241
- 3. 9815
- 4. 5292

Option 4 ID :
Option 3 ID :
Option 2 ID :
Option 1 ID :
Question ID :

Fill in the blanks with correct articles:

She is _____ European who lives in _____ Asia.

- ✓ 1. a, no article
- ✗ 2. a, a
- ✗ 3. the, the
- ✗ 4. the, a

Question ID :

Option 1 ID :

Option 2 ID :

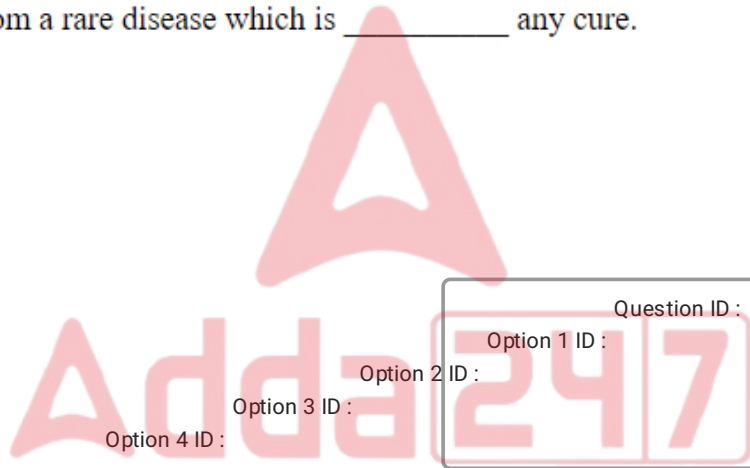
Option 3 ID :

Option 4 ID :

Fill in the blank with the correct preposition.

She is suffering from a rare disease which is _____ any cure.

- ✗ 1. with
- ✗ 2. over
- ✓ 3. beyond
- ✗ 4. in spite of



Question ID :

Option 1 ID :

Option 2 ID :

Option 3 ID :

Option 4 ID :

From the options given below, choose the correct one word substitution for the phrase given below:

Government by new or inexperienced hands

- ✓ 1. Neocracy
- ✗ 2. Democracy
- ✗ 3. Plutocracy
- ✗ 4. Secular

Question ID :

Option 1 ID :

Option 2 ID :

Option 3 ID :

Option 4 ID :

Fill in the blank with the correct interrogative adjective.

_____ book did you borrow from the library?

- 1. Where
- 2. Whose
- 3. What
- 4. Which

Question ID :

Option 1 ID :

Option 2 ID :

Option 3 ID :

Option 4 ID :

Rearrange the following sentences to form a coherent paragraph and choose the correct sequence from the options given below:

- A. However, not everyone agrees on the best way to achieve this goal.
- B. Some argue that organic farming is more sustainable and ethical, while others claim that conventional farming is more efficient and productive.
- C. Therefore, consumers face a dilemma when choosing what kind of food to buy.
- D. Food security is a major concern for the global population, especially in the face of climate change and population growth.

- 1. C, D, B, A
- 2. D, C, A, B
- 3. D, A, B, C
- 4. A, D, B, C

Question ID :

Option 1 ID :

Option 2 ID :

Option 3 ID :

Option 4 ID :

From the below given options, choose the one with the correct spelling.

- 1. liasion
- 2. liazon
- 3. liaison
- 4. liason

Question ID :

Option 1 ID :

Option 2 ID :

Option 3 ID :

Option 4 ID :

The sentence below has a spelling error. Identify the word that is spelled incorrectly and select the correct spelling from the options. Choose No error if there is no spelling error.

The committee unanimously/ agreed to implament the new/ policy without further delay.

- 1. No error.
- 2. T he committee unanimously
- 3. agreed to implament the new
- 4. policy without further delay.

Question ID :

Option 1 ID :

Option 2 ID :

Option 3 ID :

Option 4 ID :

Choose the option which is synonym of the word "erudite" in the sentence given below:

He was an erudite scholar who had a vast knowledge of various subjects.

- 1. ignorant
- 2. learned
- 3. simple
- 4. noble

Question ID :

Option 1 ID :

Option 2 ID :

Option 3 ID :

Option 4 ID :

From the options given below, choose the correct one word substitution for the phrase given below:
A large cage, building, or enclosure for keeping birds in

- 1. Aviary
- 2. Apiary
- 3. Archives
- 4. Abattoir

Question ID :

Option 1 ID :

Option 2 ID :

Option 3 ID :

Option 4 ID :

Fill in the blank with the correct adverb of manner.

She answered the questions _____, without any hesitation.

- 1. politely
- 2. confidently
- 3. nervously
- 4. angrily

Question ID :

Option 1 ID :

Option 2 ID :

Option 3 ID :

Option 4 ID :

Select the word segment that substitutes (replaces) the bracketed idiom correctly and completes the sentence meaningfully.

The employee decided to (burn the midnight oil) to finish the report.

- 1. To set fire to oil
- 2. To waste time
- 3. To work late into the night
- 4. To use a lot of energy

Question ID :

Option 1 ID :

Option 2 ID :

Option 3 ID :

Option 4 ID :

Choose the option which is antonym of the word “generous” in the sentence given below:

He was a generous man who always helped the poor.

- 1. wealthy
- 2. kind
- 3. noble
- 4. stingy

Question ID :

Option 1 ID :

Option 2 ID :

Option 3 ID :

Option 4 ID :

Select the word segment that substitutes (replaces) the bracketed proverb correctly and completes the sentence meaningfully.

The employee was (in hot water) after missing the deadline.

- 1. To be in a heated or angry situation
- 2. To be in a liquid or fluid situation
- 3. To be in a warm or comfortable situation
- 4. To be in a difficult or troublesome situation

Question ID :

Option 1 ID :

Option 2 ID :

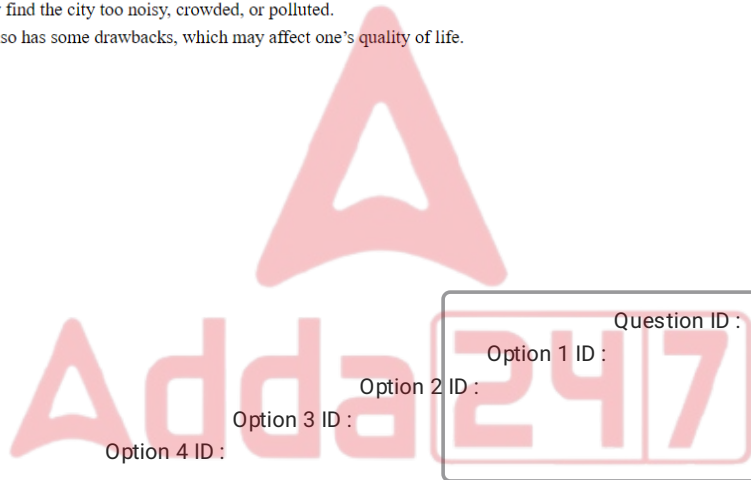
Option 3 ID :

Option 4 ID :

Rearrange the following sentences to form a coherent paragraph and choose the correct sequence from the options given below:

- A. In contrast, some people prefer to live in the countryside, where they can enjoy nature and tranquility.
- B. Living in a big city has many advantages, such as access to public services, entertainment, and job opportunities.
- C. For example, some people may find the city too noisy, crowded, or polluted.
- D. However, living in a big city also has some drawbacks, which may affect one's quality of life.

- 1. A, D, B, C
- 2. D, C, A, B
- 3. B, D, C, A
- 4. C, D, B, A



Question ID :

Option 1 ID :

Option 2 ID :

Option 3 ID :

Option 4 ID :

Fill in the blanks with correct articles:

He is _____ president of _____ United States of America.

- 1. a, the
- 2. a, a
- 3. the, a
- 4. the, the

Question ID :

Option 1 ID :

Option 2 ID :

Option 3 ID :

Option 4 ID :

flected the complex tapestry of their beliefs and societal values. At the helm of this divine hierarchy stood Jupiter, the king of gods and the god of the sky and thunder, wielding immense power and influence.

Mars, the god of war, held a prominent position, embodying the martial spirit and guiding the destiny of Rome in times of conflict. Venus, goddess of love and beauty, added a touch of grace to the pantheon, while Neptune, god of the sea, symbolized the importance of maritime pursuits in Roman life.

The pantheon also featured household gods like Vesta, guardian of the hearth, and Janus, the god of beginnings and transitions. Each deity played a unique role in Roman culture, with temples and rituals dedicated to their worship throughout the vast empire.

As Rome evolved, so did its pantheon, absorbing influences from conquered territories and adapting to the changing needs of its people. The legacy of these gods endures, shaping not only the religious practices of ancient Rome but also influencing the broader cultural and historical landscape of Western civilization.

What is the most appropriate title for the passage?

- 1. The Roman Gods: A Source of Inspiration for Art and Literature
- 2. The Roman Gods: A Comparison with Other Religions
- 3. The Roman Gods: A Cultural and Historical Perspective
- 4. The Roman Gods: A Mythological Overview

Question ID :

Option 1 ID :

Option 2 ID :

Option 3 ID :

Option 4 ID :

flected the complex tapestry of their beliefs and societal values. At the helm of this divine hierarchy stood Jupiter, the king of gods and the god of the sky and thunder, wielding immense power and influence.

Mars, the god of war, held a prominent position, embodying the martial spirit and guiding the destiny of Rome in times of conflict. Venus, goddess of love and beauty, added a touch of grace to the pantheon, while Neptune, god of the sea, symbolized the importance of maritime pursuits in Roman life.

The pantheon also featured household gods like Vesta, guardian of the hearth, and Janus, the god of beginnings and transitions. Each deity played a unique role in Roman culture, with temples and rituals dedicated to their worship throughout the vast empire.

As Rome evolved, so did its pantheon, absorbing influences from conquered territories and adapting to the changing needs of its people. The legacy of these gods endures, shaping not only the religious practices of ancient Rome but also influencing the broader cultural and historical landscape of Western civilization.

What is the tone of the passage?

- 1. Humorous and ironic
- 2. Informative and respectful
- 3. Persuasive and emotional
- 4. Critical and sceptical

Question ID :

Option 1 ID :

Option 2 ID :

Option 3 ID :

Option 4 ID :

flected the complex tapestry of their beliefs and societal values. At the helm of this divine hierarchy stood Jupiter, the king of gods and the god of the sky and thunder, wielding immense power and influence.

Mars, the god of war, held a prominent position, embodying the martial spirit and guiding the destiny of Rome in times of conflict. Venus, goddess of love and beauty, added a touch of grace to the pantheon, while Neptune, god of the sea, symbolized the importance of maritime pursuits in Roman life.

The pantheon also featured household gods like Vesta, guardian of the hearth, and Janus, the god of beginnings and transitions. Each deity played a unique role in Roman culture, with temples and rituals dedicated to their worship throughout the vast empire.

As Rome evolved, so did its pantheon, absorbing influences from conquered territories and adapting to the changing needs of its people. The legacy of these gods endures, shaping not only the religious practices of ancient Rome but also influencing the broader cultural and historical landscape of Western civilization.

What is the best summary of the passage?

✓ 1.

The passage introduces and describes the Roman gods, emphasizing their roles and significance in Roman culture and history.

✗ 2.

The passage narrates and illustrates the stories of the Roman gods, using examples and anecdotes from mythology and literature.

✗ 3.

The passage argues and persuades the readers to appreciate and respect the Roman gods, citing their benefits and challenges.

✗ 4.

The passage compares and contrasts the Roman gods with other gods, highlighting their similarities and differences.

Question ID :

Option 1 ID :

Option 2 ID :

Option 3 ID :

Option 4 ID :

flected the complex tapestry of their beliefs and societal values. At the helm of this divine hierarchy stood Jupiter, the king of gods and the god of the sky and thunder, wielding immense power and influence.

Mars, the god of war, held a prominent position, embodying the martial spirit and guiding the destiny of Rome in times of conflict. Venus, goddess of love and beauty, added a touch of grace to the pantheon, while Neptune, god of the sea, symbolized the importance of maritime pursuits in Roman life.

The pantheon also featured household gods like Vesta, guardian of the hearth, and Janus, the god of beginnings and transitions. Each deity played a unique role in Roman culture, with temples and rituals dedicated to their worship throughout the vast empire.

As Rome evolved, so did its pantheon, absorbing influences from conquered territories and adapting to the changing needs of its people. The legacy of these gods endures, shaping not only the religious practices of ancient Rome but also influencing the broader cultural and historical landscape of Western civilization.

Which of the following words is a synonym for “steeped” as used in the passage?

- 1. Brewed
- 2. Diluted
- 3. Boiled
- 4. Saturated

Question ID :

Option 1 ID :

Option 2 ID :

Option 3 ID :

Option 4 ID :

the complex tapestry of their beliefs and societal values. At the helm of this divine hierarchy stood Jupiter, the king of gods and the god of the sky and thunder, wielding immense power and influence.

Mars, the god of war, held a prominent position, embodying the martial spirit and guiding the destiny of Rome in times of conflict. Venus, goddess of love and beauty, added a touch of grace to the pantheon, while Neptune, god of the sea, symbolized the importance of maritime pursuits in Roman life.

The pantheon also featured household gods like Vesta, guardian of the hearth, and Janus, the god of beginnings and transitions. Each deity played a unique role in Roman culture, with temples and rituals dedicated to their worship throughout the vast empire.

As Rome evolved, so did its pantheon, absorbing influences from conquered territories and adapting to the changing needs of its people. The legacy of these gods endures, shaping not only the religious practices of ancient Rome but also influencing the broader cultural and historical landscape of Western civilization.

Which of the following can be inferred from the passage?

- 1. The Roman gods were dynamic and adaptable
- 2. The Roman gods were superior to other gods
- 3. The Roman gods were worshipped by all Romans
- 4. The Roman gods were based on the Greek gods

Question ID :

Option 1 ID :

Option 2 ID :

Option 3 ID :

Option 4 ID :

नीचे दिए गये गद्यांश के बाद 5 प्रश्न दिए गये हैं। इस गद्यांश को ध्यानपूर्वक पढ़ें और चार विकल्पों में से प्रत्येक प्रश्न का सर्वोत्तम उत्तर चुनें।

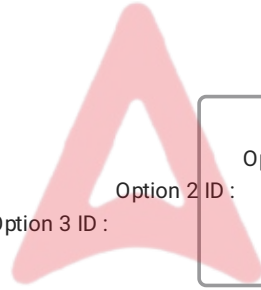
मनुष्य उत्सवप्रिय होते हैं। उत्सव का एकमात्र उद्देश्य आनंद-प्राप्ति है। यह तो सभी जानते हैं कि मनुष्य अपनी आवश्यकताओं की पूर्ति के लिए प्रयोगशाला का प्रयास करता रहता है। सभी को सुख की आवश्यकता होती है। पर, वह सुख और उत्सव के आनंद में बड़ा फर्क है। आवश्यकता अभाव सूचित करता है। ऐसा प्रतीत होता है कि हमें किस बात की कमी है।

मनुष्य का जीवन ही ऐसा है कि वह किसी भी स्तर पर यह अनुभव नहीं कर सकता कि अब उसके लिए कोई आवश्यकता नहीं रह गयी है। एक के बाद एक वस्तु की चिंता उसे सताती ही रहती है। इसलिए किसी एक आवश्यकता की नियुक्ति से जो सुख होता है, वह अत्यंत क्षणिक होता है, क्योंकि तुरंत ही दूसरी आवश्यकता की नियुक्ति हो जाती है। उत्सव में हम किसी बात की आवश्यकता का अनुभव नहीं करते। यही नहीं, उस दिन हम अपना काम काज पूरा करके आनंद की प्राप्ति करते हैं। यह आनंद जीवन का आनंद है, काम का नहीं।

लए

अनुच्छेद के अनुसार आवश्यकता क्या दर्शाती है?

- ☐☐☐
- 1. शोध
 - 2. माँग
 - 3. अपर्याप्तता
 - 4. प्रयोगशाला



Question ID :

Option 1 ID :

Option 2 ID :

Option 3 ID :

Option 4 ID :

नीचे दिए गये गद्यांश के बाद 5 प्रश्न दिए गये हैं। इस गद्यांश को ध्यानपूर्वक पढ़ें और चार विकल्पों में से प्रत्येक प्रश्न का सर्वोत्तम उत्तर चुनें।

मनुष्य उत्सवप्रिय होते हैं। उत्सव का एकमात्र उद्देश्य आनंद-प्राप्ति है। यह तो सभी जानते हैं कि मनुष्य अपनी आवश्यकताओं की पूर्ति के लिए प्रयोगशाला का प्रयास करता रहता है। सभी को सुख की आवश्यकता होती है। पर, वह सुख और उत्सव के आनंद में बड़ा फर्क है। आवश्यकता अभाव सूचित करता है। ऐसा प्रतीत होता है कि हमें किस बात की कमी है।

मनुष्य का जीवन ही ऐसा है कि वह किसी भी स्तर पर यह अनुभव नहीं कर सकता कि अब उसके लिए कोई आवश्यकता नहीं रह गयी है। एक के बाद एक वस्तु की चिंता उसे सताती ही रहती है। इसलिए किसी एक आवश्यकता की नियुक्ति से जो सुख होता है, वह अत्यंत क्षणिक होता है, क्योंकि तुरंत ही दूसरी आवश्यकता की नियुक्ति हो जाती है। उत्सव में हम किसी बात की आवश्यकता का अनुभव नहीं करते। यही नहीं, उस दिन हम अपना काम काज पूरा करके आनंद की प्राप्ति करते हैं। यह आनंद जीवन का आनंद है, काम का नहीं।

लए

अनुच्छेद के अनुसार आवश्यकता पूरी होने पर मिलने वाला सुख क्षणिक क्यों होता है?

- ☐☐☐
- ✗ 1. क्योंकि तब वह आवश्यकता ज़रूरी नहीं होती
 - ✗ 2. क्योंकि आवश्यकता देरी से पूरी होती है
 - ✗ 3. क्योंकि उसके साथ दुख भी होता है
 - ✓ 4. क्योंकि दूसरी आवश्यकता आ जाती है

Question ID :

Option 1 ID :

Option 2 ID :

Option 3 ID :

Option 4 ID :

नीचे दिए गये गद्यांश के बाद 5 प्रश्न दिए गये हैं। इस गद्यांश को ध्यानपूर्वक पढ़ें और चार विकल्पों में से प्रत्येक प्रश्न का सर्वोत्तम उत्तर चुनें।

मनुष्य उत्सवप्रिय होते हैं। उत्सव का एकमात्र उद्देश्य आनंद-प्राप्ति है। यह तो सभी जानते हैं कि मनुष्य अपनी आवश्यकताओं की पूर्ति के लिए प्रयोगशाला का प्रयास करता रहता है। सभी को सुख की आवश्यकता होती है। पर, वह सुख और उत्सव के आनंद में बड़ा फर्क है। आवश्यकता अभाव सूचित करता है। ऐसा प्रतीत होता है कि हमें किस बात की कमी है।

मनुष्य का जीवन ही ऐसा है कि वह किसी भी स्तर पर यह अनुभव नहीं कर सकता कि अब उसके लिए कोई आवश्यकता नहीं रह गयी है। एक के बाद एक वस्तु की चिंता उसे सताती ही रहती है। इसलिए किसी एक आवश्यकता की नियुक्ति से जो सुख होता है, वह अत्यंत क्षणिक होता है, क्योंकि तुरंत ही दूसरी आवश्यकता की नियुक्ति हो जाती है। उत्सव में हम किसी बात की आवश्यकता का अनुभव नहीं करते। यही नहीं, उस दिन हम अपना काम काज पूरा करके आनंद की प्राप्ति करते हैं। यह आनंद जीवन का आनंद है, काम का नहीं।

लएऔ

अनुच्छेद के अनुसार किस स्थिति में हम सभी आवश्यकताओं को भूल जाते हैं?

- ✗ 1. कार्य करते समय
- ✗ 2. दर्द के समय
- ✗ 3. सोते समय
- ✓ 4. उत्सव के समय

Question ID :

Option 1 ID :

Option 2 ID :

Option 3 ID :

Option 4 ID :

नीचे दिए गये गद्यांश के बाद 5 प्रश्न दिए गये हैं। इस गद्यांश को ध्यानपूर्वक पढ़ें और चार विकल्पों में से प्रत्येक प्रश्न का सर्वोत्तम उत्तर चुनें।

मनुष्य उत्सवप्रिय होते हैं। उत्सव का एकमात्र उद्देश्य आनंद-प्राप्ति है। यह तो सभी जानते हैं कि मनुष्य अपनी आवश्यकताओं की पूर्ति के लिए प्रयोगशाला का प्रयास करता रहता है। सभी को सुख की आवश्यकता होती है। पर, वह सुख और उत्सव के आनंद में बड़ा फर्क है। आवश्यकता अभाव सूचित करता है। ऐसा प्रतीत होता है कि हमें किस बात की कमी है।

मनुष्य का जीवन ही ऐसा है कि वह किसी भी स्तर पर यह अनुभव नहीं कर सकता कि अब उसके लिए कोई आवश्यकता नहीं रह गयी है। एक के बाद एक वस्तु की चिंता उसे सताती ही रहती है। इसलिए किसी एक आवश्यकता की नियुक्ति से जो सुख होता है, वह अत्यंत क्षणिक होता है, क्योंकि तुरंत ही दूसरी आवश्यकता की नियुक्ति हो जाती है। उत्सव में हम किसी बात की आवश्यकता का अनुभव नहीं करते। यही नहीं, उस दिन हम अपना काम काज पूरा करके आनंद की प्राप्ति करते हैं। यह आनंद जीवन का आनंद है, काम का नहीं।

लएक

निम्नलिखित प्रश्न में, चार विकल्पों में से, उस विकल्प का चयन करें जो दिए गए शब्द के पर्यायवाची शब्द का विकल्प नहीं है।

क्षणिक

-
- ✗ 1. नाशवान
 - ✓ 2. लगातार
 - ✗ 3. क्षणभंगुर
 - ✗ 4. अनित्य

Question ID :

Option 1 ID :

Option 2 ID :

Option 3 ID :

Option 4 ID :

नीचे दिए गये गद्यांश के बाद 5 प्रश्न दिए गये हैं। इस गद्यांश को ध्यानपूर्वक पढ़ें और चार विकल्पों में से प्रत्येक प्रश्न का सर्वोत्तम उत्तर चुनें।

मनुष्य उत्सवप्रिय होते हैं। उत्सव का एकमात्र उद्देश्य आनंद-प्राप्ति है। यह तो सभी जानते हैं कि मनुष्य अपनी आवश्यकताओं की पूर्ति के लिए प्रयोगशाला का प्रयास करता रहता है। सभी को सुख की आवश्यकता होती है। पर, वह सुख और उत्सव के आनंद में बड़ा फर्क है। आवश्यकता अभाव सूचित करता है। ऐसा प्रतीत होता है कि हमें किस बात की कमी है।

मनुष्य का जीवन ही ऐसा है कि वह किसी भी स्तर पर यह अनुभव नहीं कर सकता कि अब उसके लिए कोई आवश्यकता नहीं रह गयी है। एक के बाद एक वस्तु की चिंता उसे सताती ही रहती है। इसलिए किसी एक आवश्यकता की नियुक्ति से जो सुख होता है, वह अत्यंत क्षणिक होता है, क्योंकि तुरंत ही दूसरी आवश्यकता की नियुक्ति हो जाती है। उत्सव में हम किसी बात की आवश्यकता का अनुभव नहीं करते। यही नहीं, उस दिन हम अपना काम काज पूरा करके आनंद की प्राप्ति करते हैं। यह आनंद जीवन का आनंद है, काम का नहीं।

लएख

इस अनुच्छेद का कोई उपयुक्त शीर्षक-

- 1. मनुष्य की आवश्यकता
- 2. उत्सवों की आवश्यकता
- 3. आवश्यकता की नियुक्ति
- 4. आनंद ही आनंद

Question ID :

Option 1 ID :

Option 2 ID :

Option 3 ID :

Option 4 ID :

निम्नलिखित प्रश्न में, चार विकल्पों में से, उस सही विकल्प का चयन करें जो दिए गए अनुच्छेद के लिए अंतिम वाक्य का सही विकल्प हो।

मैं एक समझदार प्रवृत्ति का व्यक्ति हूँ। मैं जीवन के हर पल का आनंद लेता हूँ। मैं किसी के भी जीवन में हस्तक्षेप करना पसंद नहीं करता। _____

- 1. मैं अपने से भी यही उम्मीद करता हूँ।
- 2. मैं लोगों से भी यही उम्मीद करता हूँ।
- 3. मैं किसी से भी यही उम्मीद करता हूँ।
- 4. मैं लोगों से भी यही कही सब उम्मीद करता हूँ।

Question ID :

Option 1 ID :

Option 2 ID :

Option 3 ID :

Option 4 ID :

निम्नलिखित प्रश्न में, चार विकल्पों में से, उस विकल्प का चयन करें जो दिए गए मुहावरे का सही अर्थ वाला विकल्प है।

अन्तर के पट खोलना

- ✓ 1. विवेक से काम लेना
- ✗ 2. बहुत बुद्धिमान
- ✗ 3. एकमात्र सहारा
- ✗ 4. कल्पनाएँ करना

Option 1 ID :
Option 2 ID :
Option 3 ID :
Option 4 ID :
Question ID :

निम्नलिखित वाक्य में, उस वाक्यांश को पहचानिए जिसमें मात्राओं से संबंधित अशुद्धियाँ हैं। यदि कोई गलती नहीं है तो 'कोई त्रुटि नहीं है' का चुनाव कीजिए।
अपने देश को विश्व का एक बेहतरीन देश/ बनाने के लिये समाज में ऐसे समस्याओं को/ सुलझाने के लिये हमें कल प्रतिज्ञा लाने पर जरूरत है।

- ✓ 1. सुलझाने के लिये हमें कल प्रतिज्ञा लाने पर जरूरत है।
- ✗ 2. कोई त्रुटि नहीं है।
- ✗ 3. अपने देश को विश्व का एक बेहतरीन देश
- ✗ 4. बनाने के लिये समाज में ऐसे समस्याओं को

Option 1 ID :
Option 2 ID :
Option 3 ID :
Option 4 ID :
Question ID :

निम्नलिखित प्रश्न में, चार विकल्पों में से, उस सही विकल्प का चयन करें जो वाक्यांशों के लिए एक शब्द का विकल्प हो।
जिसने मृत्यु को जीत लिया हो

- ✓ 1. मृत्युंजय
- ✗ 2. सर्वज्ञ
- ✗ 3. शाश्वत
- ✗ 4. शत्रुघ्न

Option 1 ID :
Option 2 ID :
Option 3 ID :
Option 4 ID :
Question ID :

निम्नलिखित प्रश्न में, चार विकल्पों में से, उस सही विकल्प का चयन करें जो दिए गए अनुच्छेद के लिए अंतिम वाक्य का सही विकल्प हो।

लॉकडाउन के प्रभाव बहुत गहरे हुए थे। क्योंकि इससे पूरे विश्व की अर्थव्यवस्था डगमगा गयी। जब हम काम पर जाते हैं, तभी देश आगे बढ़ता है। _____

✗ 1.

लेकिन जब देश के सारे लोग घर काम पर जायेंगे तो देश का विकास भी रुक जाता है।

✗ 2.

लेकिन जब देश के सारे लोग घर पर बैठ कर काम करेंगे तो देश का विकास भी रुक जाता है।

✗ 3.

लेकिन जब देश के सारे लोग घर पर बैठ जायेंगे तो देश का विकास भी ज्यादा हो जाता है।

✓ 4.

लेकिन जब देश के सारे लोग घर पर बैठ जायेंगे तो देश का विकास भी रुक जाता है।

Question ID :

Option 1 ID :

Option 2 ID :

Option 3 ID :

Option 4 ID :

निम्नलिखित प्रश्न में, चार विकल्पों में से, उस विकल्प का चयन करें जो दिए गए वाक्य के लिए सही क्रिया के रूप वाला विकल्प है।

माताजी खाना बनाते-बनाते थक गईं।

✓ 1. पूर्वकालिक क्रिया

✗ 2. सामान्य क्रिया

✗ 3. नामधातु क्रिया

✗ 4. कृदंत क्रिया

Question ID :

Option 1 ID :

Option 2 ID :

Option 3 ID :

Option 4 ID :

निम्नलिखित प्रश्न में, चार विकल्पों में से, उस विकल्प का चयन करें जो दी गई लोकोक्ति का सही अर्थ वाला विकल्प है।

एक तवे की रोटी क्या छोटी, क्या मोटी

✗ 1. पूर्णतः प्रतिकूल काम को करना

✗ 2. बहुत अनुभवी होना

✓ 3. किसी प्रकार का भेदभाव नहीं है

✗ 4. ऊपरी दिखावे से दोष नहीं छुपते

Question ID :

Option 1 ID :

Option 2 ID :

Option 3 ID :

Option 4 ID :

निम्नलिखित प्रश्न में, चार विकल्पों में से, उस विकल्प का चयन करें जो दिए गए वाक्य के लिए सही क्रिया के रूप वाला विकल्प है।
सभी का आपस में एक-दूसरे से बतियाना ज़रूरी होता है।

- 1. सामान्य क्रिया
- 2. अकर्मक क्रिया
- 3. पूर्वकालिक क्रिया
- 4. नामधातु क्रिया

Question ID :
Option 1 ID :
Option 2 ID :
Option 3 ID :
Option 4 ID :

निम्नलिखित प्रश्न में, चार विकल्पों में से, उस विकल्प का चयन करें जो दिए गए वाक्य के लिए सही क्रिया विशेषण के रूप वाला विकल्प है।
हम अक्सर शाम को खेलने जाते हैं।

- 1. रीतिवाचक क्रिया विशेषण
- 2. कालवाचक क्रियाविशेषण
- 3. स्थानवाचक क्रियाविशेषण
- 4. परिमाणवाचक क्रियाविशेषण

Question ID :
Option 1 ID :
Option 2 ID :
Option 3 ID :
Option 4 ID :

निम्नलिखित प्रश्न में, चार विकल्पों में से, उस विकल्प का चयन करें जो दिए गए रिक्त स्थान के लिए सही कारक वाला विकल्प है।
दीपा _____ सीमा को देखकर मुस्कुरा दिया।

- 1. से
- 2. पर
- 3. को
- 4. ने

Question ID :
Option 1 ID :
Option 2 ID :
Option 3 ID :
Option 4 ID :

निम्नलिखित प्रश्न में, चार विकल्पों में से, उस विकल्प का चयन करें जो दिए गए शब्द के विलोम शब्द का विकल्प है।

आकर्ष

- ✗ 1. अपकर्ष
- ✗ 2. सुकर्ष
- ✗ 3. हर्ष
- ✓ 4. विकर्ष

Option 1 ID :
Option 2 ID :
Option 3 ID :
Option 4 ID :

Question ID :

Option 1 ID :

Option 2 ID :

Option 3 ID :

Option 4 ID :

निम्नलिखित प्रश्न में, चार विकल्पों में से, उस विकल्प का चयन करें जो दिए गए वाक्य के लिए सही विशेषण के रूप वाला विकल्प है।

स्वास्थ्य के लिए हरी-हरी सब्जियां लाभदायक होती हैं।

- ✗ 1. परिमाणवाचक विशेषण
- ✓ 2. गुणवाचक विशेषण
- ✗ 3. सार्वनामिक विशेषण
- ✗ 4. व्यक्तिवाचक विशेषण

Option 1 ID :
Option 2 ID :
Option 3 ID :
Option 4 ID :

Question ID :

Option 1 ID :

Option 2 ID :

Option 3 ID :

Option 4 ID :

निम्नलिखित प्रश्न में, चार विकल्पों में से, उस विकल्प का चयन करें जो दिए गए शब्द के पर्यायवाची शब्द का सही विकल्प नहीं है।

नदी

- ✗ 1. तरंगिणी
- ✓ 2. तरिणी
- ✗ 3. स्रोतस्विनी
- ✗ 4. तटिनी

Option 1 ID :
Option 2 ID :
Option 3 ID :
Option 4 ID :

Question ID :

Option 1 ID :

Option 2 ID :

Option 3 ID :

Option 4 ID :

निम्नलिखित प्रश्न में, चार विकल्पों में से, उस सही विकल्प का चयन करें जो वाक्यांशों के लिए एक शब्द का विकल्प हो।

मोक्ष प्राप्त करने की इच्छा

- 1. प्रमेय
- 2. मुमुक्षा
- 3. युयुत्सा
- 4. मुमूर्षा

Option 1 ID :
Option 2 ID :
Option 3 ID :
Option 4 ID :

Question ID :

निम्नलिखित वाक्य में, उस वाक्यांश को पहचानिए जिसमें मात्राओं से संबंधित अशुद्धियाँ हैं। यदि कोई गलती नहीं है तो 'कोई त्रुटि नहीं है' का चुनाव कीजिए।
गर्मी की छुट्टियाँ हर साल मेरे लिए काफी खुशी/ की समय होता है पर यह मुझे मनोरंजक छुट्टियाँ कराने/ तथा प्रियजनों से मिलने के लिए पर्याप्त समय देता है।

- 1. गर्मी की छुट्टियाँ हर साल मेरे लिए काफी खुशी
- 2. की समय होता है पर यह मुझे मनोरंजक छुट्टियाँ कराने
- 3. कोई त्रुटि नहीं है।
- 4. तथा प्रियजनों से मिलने के लिए पर्याप्त समय देता है।

Option 1 ID :
Option 2 ID :
Option 3 ID :
Option 4 ID :

Question ID :

For displaying periodicals, usually periodical display racks are used. Which of the following is NOT a type of display racks in a library?

- 1. Rotary type
- 2. Pigeon hole type
- 3. Step type
- 4. Inclined type

Option 1 ID :
Option 2 ID :
Option 3 ID :
Option 4 ID :

Question ID :

In the context of the basic features of WINISIS, which of the following refers to the combining of two or more data sequences to form a single data sequence (chain).

- 1. Default Format
- 2. Concatenation
- 3. Hypertext
- 4. Protocol

Question ID :

Option 1 ID :

Option 2 ID :

Option 3 ID :

Option 4 ID :

In the context of design of physical files, which of the following statements is correct regarding the types of files?
 I. A Transaction file is a temporary file of all the transactions that have taken place in a given period.
 II. An Archive file is a file temporarily created to hold intermediate result of the data processing.

- 1. Only I
- 2. Both I and II
- 3. Neither I nor II
- 4. Only II

Question ID :

Option 1 ID :

Option 2 ID :

Option 3 ID :

Option 4 ID :

Collection development policy is the course of action adopted for developing the collection or stock in a library. Which of the following is correct regarding the guiding principles for evolving the Collection Development Policy?
 I. Goals and Objectives of the Institution.
 II. Needs of the Users.
 III. Availability of Resources.

- 1. Only I and III
- 2. I, II and III
- 3. Only I and II
- 4. Only II and III

Question ID :

Option 1 ID :

Option 2 ID :

Option 3 ID :

Option 4 ID :

In cataloguing, a _____ is a name (in an author catalogue) or a term (in a subject catalogue) appearing at the head of an entry and may consist of one or more words or phrases.

- 1. heading
- 2. entry
- 3. server
- 4. title

Question ID :

Option 1 ID :

Option 2 ID :

Option 3 ID :

Option 4 ID :

Which of the following is an example of database application?

I. Computerised Library Systems

II. Automated Teller Machines

- 1. Both I and II
- 2. Only I
- 3. Only II
- 4. Neither I nor II

Question ID :

Option 1 ID :

Option 2 ID :

Option 3 ID :

Option 4 ID :

_____ analysis means an analysis of a subject into its aspects obtained on the basis of a systematic application of a set of characteristics.

- 1. Postulational
- 2. Phase
- 3. Facet
- 4. System

Question ID :

Option 1 ID :

Option 2 ID :

Option 3 ID :

Option 4 ID :

In the context of library finance and sources of finance, which of the following is the regular budgeted grants given every year?

I. Plan Grants

II. Non-plan Grants

- 1. Both I and II
- 2. Neither I nor II
- 3. Only I
- 4. Only II

Question ID :

Option 1 ID :

Option 2 ID :

Option 3 ID :

Option 4 ID :

The valuable feature of the _____ approach is that it helps to clear fallacies likely to occur.

- 1. System
- 2. Postulational
- 3. Normative
- 4. Fundamental

Question ID :

Option 1 ID :

Option 2 ID :

Option 3 ID :

Option 4 ID :

Who of the following is an example of pseudonyms?

I. George Orwell

II. Mark Twain

- 1. Only II
- 2. Only I
- 3. Neither I nor II
- 4. Both I and II

Question ID :

Option 1 ID :

Option 2 ID :

Option 3 ID :

Option 4 ID :

Which of the following is a title displaying Matter Isolates?

- 1. Density of solid
- 2. Air conditioning in the tropics
- 3. Mountain ranges of India
- 4. Textile industry in Canada

Option 4 ID :
Option 3 ID :
Option 2 ID :
Option 1 ID :
Question ID :

In the context of library automation packages, Alice for Windows has which of the following modules?

- I. Journal Indexing
 - II. Subject Authority
 - III. Web enquiry
- 1. Only II and III
 - 2. Only I and II
 - 3. I, II and III
 - 4. Only I and III

Option 4 ID :
Option 3 ID :
Option 2 ID :
Option 1 ID :
Question ID :

Who of the following, based on his research, believes that there is plenty of evidence to show that we cover the whole knowledge by relating subject analysis, or classification, to a general theory of systems?

- 1. Foskett
- 2. Iyer
- 3. Dhalberg
- 4. Ranganathan

Option 4 ID :
Option 3 ID :
Option 2 ID :
Option 1 ID :
Question ID :

Which of the following belongs to species of classification schemes?

- I. Enumerative
- II. Almost - Enumerative
- III. Almost - Faceted
- IV. Fully - Faceted

- 1. Only III and IV
- 2. Only I
- 3. Only II
- 4. I, II, III, IV

Question ID :

Option 1 ID :

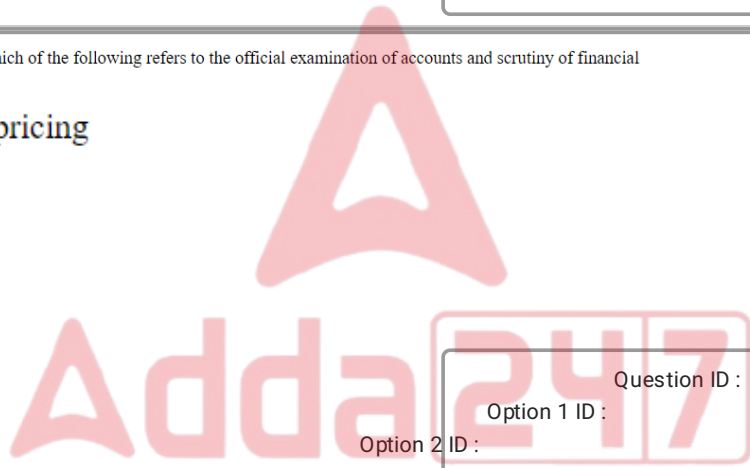
Option 2 ID :

Option 3 ID :

Option 4 ID :

In the context of library finance, which of the following refers to the official examination of accounts and scrutiny of financial transactions?

- 1. Prospective pricing
- 2. Budgeting
- 3. Auditing
- 4. Accounting



Question ID :

Option 1 ID :

Option 2 ID :

Option 3 ID :

Option 4 ID :

Which of the following belongs to fundamental categories in approaches to library classification?

- I. Personality [P]
 - II. Matter [M]
- 1. Only II
 - 2. Neither I nor II
 - 3. Both I and II
 - 4. Only I

Question ID :

Option 1 ID :

Option 2 ID :

Option 3 ID :

Option 4 ID :

In the context of library automation packages, which of the following is correct regarding the features of SOUL (Software for University Libraries)?

- I. Multi-user software with no limitation for simultaneous access.
- II. Supports LAN and WAN environment.

- 1. Neither I nor II
- 2. Only II
- 3. Only I
- 4. Both I and II

Option 4 ID :
Option 3 ID :
Option 2 ID :
Option 1 ID :
Question ID :

In the context of library automation packages, Alice for Windows is the product of which of the following company?

- 1. Microsoft
- 2. Softlink
- 3. Google
- 4. Apple

Option 4 ID :
Option 3 ID :
Option 2 ID :
Option 1 ID :
Question ID :

In the context of database structure, which of the following terms refers to the set of fields containing all the data elements of one information unit stored in a database?

- 1. Format
- 2. Hypertext
- 3. Record
- 4. Pattern

Option 4 ID :
Option 3 ID :
Option 2 ID :
Option 1 ID :
Question ID :

An _____ scheme for classification consists of a large schedule enumerating most of the subjects of the past, the present and the foreseeable future.

- 1. evolutionary trends
- 2. enumerative
- 3. almost faceted
- 4. almost enumerative

Question ID :

Option 1 ID :

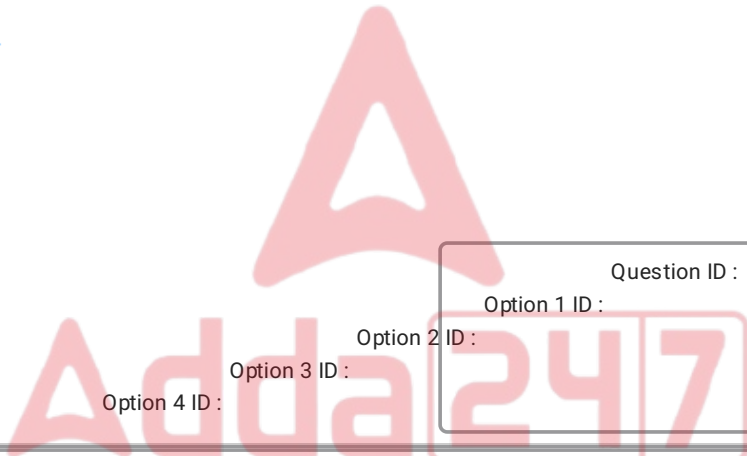
Option 2 ID :

Option 3 ID :

Option 4 ID :

_____ is undertaken in order to accommodate new subjects as well as to provide more minute and specific sub-divisions under the existing subjects in revision process of Dewey Decimal classification [DDC].

- 1. Compression
- 2. Reduction
- 3. Expansion
- 4. Relocation



Question ID :

Option 1 ID :

Option 2 ID :

Option 3 ID :

Option 4 ID :

The National Forum for Information Literacy (NFIL) was formed in _____.

- 1. 1992
- 2. 1986
- 3. 1989
- 4. 1995

Question ID :

Option 1 ID :

Option 2 ID :

Option 3 ID :

Option 4 ID :

In the context of physical forms of library catalogues, which of the following is a disadvantage of sheaf form?

I. Duplicate entries can be made easily.

II. The filing and fixing of sheaves into loose leaf binder is a time consuming and tedious process.

- 1. Neither I nor II
- 2. Only I
- 3. Both I and II
- 4. Only II

Question ID :

Option 1 ID :

Option 2 ID :

Option 3 ID :

Option 4 ID :

The binding element between the sender and the receiver in the communication process is the _____.

- 1. sender
- 2. channel
- 3. receiver
- 4. message

Question ID :

Option 1 ID :

Option 2 ID :

Option 3 ID :

Option 4 ID :

In the context of physical forms of library catalogues, a catalogue should have which of the following features?

I. It must occupy as little space as possible.

II. It should enable browsing on scanning over a number of entries at a time.

- 1. Neither I nor II
- 2. Only II
- 3. Both I and II
- 4. Only I

Question ID :

Option 1 ID :

Option 2 ID :

Option 3 ID :

Option 4 ID :

Which of the following is the element in selection of the channel?

- 1. Message
- 2. Sender
- 3. Receiver
- 4. Load capacity

Question ID :

Option 1 ID :

Option 2 ID :

Option 3 ID :

Option 4 ID :

In communication channel _____ of the channel is determined by the quality of the message received as intended, without distortion and noise.

- 1. effectiveness
- 2. efficiency
- 3. time taken
- 4. load capacity

Question ID :

Option 1 ID :

Option 2 ID :

Option 3 ID :

Option 4 ID :

In the context of physical forms of library catalogues, which of the following is an advantage of Bound register / Ledger form?
I. It is simple and easy to handle or consult.
II. Entries for new books added cannot always be inserted at their proper places as the left out space is filled shortly.

- 1. Both I and II
- 2. Only I
- 3. Neither I nor II
- 4. Only II

Question ID :

Option 1 ID :

Option 2 ID :

Option 3 ID :

Option 4 ID :

Which of the following was the topic chosen for the first international [ISKO] i.e. International Society for Knowledge Organisation, held in Germany on August, 15-17, 1990.

- 1. Knowledge seeking in problem solving
- 2. Taxonomic approach to knowledge organisation
- 3. Knowledge seeking in libraries
- 4. Tools for knowledge Organisation and Human Interference

Question ID :

Option 1 ID :

Option 2 ID :

Option 3 ID :

Option 4 ID :

Basic Information Literacy Skills Include which of the following?

- I. Be able to identify the parts of a bibliographic record.
- II. Understand the difference between subject searching and word searching.
- III. Have an understanding of plagiarism and intellectual property issues.

- 1. Only I and III
- 2. I, II and III
- 3. Only II and III
- 4. Only I and II

Question ID :

Option 1 ID :

Option 2 ID :

Option 3 ID :

Option 4 ID :

Universal Decimal classification has developed an extensive class of _____ from 001 to 09.

- 1. theoretical
- 2. common auxiliaries
- 3. generalities
- 4. auxiliary

Question ID :

Option 1 ID :

Option 2 ID :

Option 3 ID :

Option 4 ID :

Which operating system was introduced in 2001 by Microsoft and is a part of windows family of operating system?

- ✓ 1. Win XP
- ✗ 2. Win 8/8.1
- ✗ 3. Win Vista
- ✗ 4. Win 7

Question ID :
Option 1 ID :
Option 2 ID :
Option 3 ID :
Option 4 ID :

Match the binary numbers with their correct octal numbers.

	Binary Number		Octal Number
I	0101	1	$011 (1 \times 8^1 + 1 \times 8^0)$
II	0111	2	$005 (5 \times 8^0)$
III	1001	3	$007 (7 \times 8^0)$

- ✗ 1. I-3, II-1, III-2
- ✓ 2. I-2, II-3, III-1
- ✗ 3. I-1, II-2, III-3
- ✗ 4. I-3, II-2, III-1

Question ID :
Option 1 ID :
Option 2 ID :
Option 3 ID :
Option 4 ID :

In the context of criteria for evaluation of reference sources, Ranganathan has categorised the documents from which of the following angles?

- I. By the volume of thought content.
- II. By recording media.
- ✗ 1. Neither I nor II
- ✗ 2. Only I
- ✓ 3. Both I and II
- ✗ 4. Only II

Question ID :
Option 1 ID :
Option 2 ID :
Option 3 ID :
Option 4 ID :

Match the keywords with their correct description.

	Keywords		Description
I	Data	1	Is an organised set of fact or ideas, presenting a reasoned judgment or an experimental result.
II	Knowledge	2	Is flow of message
III	Information	3	Is usually an observed fact, obtained on basis of a systematic survey or study, relating to a certain activity.

- 1. I-1, II-3, III-2
- 2. I-3, II-1, III-2
- 3. I-2, II-3, III-1
- 4. I-1, II-2, III-3

Question ID :
 Option 1 ID :
 Option 2 ID :
 Option 3 ID :
 Option 4 ID :

In the context of types of information sources and services, a/an _____ is a book that gives instructions about how to use a machine.

- 1. almanac
- 2. directory
- 3. index
- 4. manual

Question ID :
 Option 1 ID :
 Option 2 ID :
 Option 3 ID :
 Option 4 ID :

Which generation computer were vacuum tubes valve-based machines?

- 1. Second generation
- 2. Fourth generation
- 3. First generation
- 4. Third generation

Question ID :
 Option 1 ID :
 Option 2 ID :
 Option 3 ID :
 Option 4 ID :

Dewey Decimal Classification is basically a _____ scheme, based on general principles of _____.

- 1. abridged DDC, division
- 2. hierarchial, division
- 3. philosophical, multiplication
- 4. practical, addition

Question ID :

Option 1 ID :

Option 2 ID :

Option 3 ID :

Option 4 ID :

_____ is a scheme of classification based on the analysis of subject into different facets.

- 1. Analytico-synthetic
- 2. Anteriorizing value
- 3. Basic facet
- 4. Adjunct

Question ID :

Option 1 ID :

Option 2 ID :

Option 3 ID :

Option 4 ID :

Which of the following statements is correct regarding the limitations of reference books?

- I. A dictionary cannot cover all the words that have come into use very recently.
- II. The accumulation of new knowledge demands the coverage of new subjects in encyclopedia.

- 1. Only II
- 2. Both I and II
- 3. Only I
- 4. Neither I nor II

Question ID :

Option 1 ID :

Option 2 ID :

Option 3 ID :

Option 4 ID :

In the context of categories of library professional, one who designs and builds up a scheme of classification on sound principles is a

- 1. library administrator
- 2. cataloguer
- 3. classificationist
- 4. reference librarian

Option 4 ID : _____

Option 3 ID : _____

Option 2 ID : _____

Option 1 ID : _____

Question ID : _____

A Common Communication Format (CCF) may contain description of more than _____ in library automation.

- 1. two item
- 2. ten item
- 3. one item
- 4. six item

Option 4 ID : _____

Option 3 ID : _____

Option 2 ID : _____

Option 1 ID : _____

Question ID : _____

Under which of the following reasons for legislation cannot be summed up in library legislation?

- 1. It will maintain standards in library services
- 2. It will constitute a proper administrative and supervisory body with executive powers.
- 3. It will be obliged to meet the objectives and remain accountable
- 4. It will not provide a steady and permanent source of finance

Option 4 ID : _____

Option 3 ID : _____

Option 2 ID : _____

Option 1 ID : _____

Question ID : _____

In MARC21, formats are defined into which of the following types of data?

I. Classification

II. No authority

- 1. Both I and II
- 2. Only II
- 3. Neither I nor II
- 4. Only I

Question ID :

Option 1 ID :

Option 2 ID :

Option 3 ID :

Option 4 ID :

_____ means the symbols used in the scheme to represent classes in a scheme of classification.

- 1. Notations
- 2. Structure
- 3. Layout
- 4. Index

Question ID :

Option 1 ID :

Option 2 ID :

Option 3 ID :

Option 4 ID :

_____ should reflect or be based upon all the basic values associated with the occupation.

- 1. Profession
- 2. Professionalism
- 3. Professional ethics
- 4. General ethics

Question ID :

Option 1 ID :

Option 2 ID :

Option 3 ID :

Option 4 ID :

Manipur has one State Central Library at _____.

- 1. Ukhrul
- 2. Chandel
- 3. Senapati
- 4. Imphal

Question ID :
Option 1 ID :
Option 2 ID :
Option 3 ID :
Option 4 ID :

In the context of an electronic mail, what does the 'A' stand for in 'IMAP'?

- 1. Address
- 2. Asset
- 3. Acquisition
- 4. Access

Question ID :
Option 1 ID :
Option 2 ID :
Option 3 ID :
Option 4 ID :

Match the types of digits used, with number of digits used in notation and construction of classification number.

	Types of digits used	Number of digits used	
I	Roman alphabets (capital letter A-Z)	1	2
II	Parenthesis ()	2	26
III	Romain alphabet (small letters a-z, excluding i, e, o)	3	23

- 1. I-3, II-1, III-2
- 2. I-2, II-1, III-3
- 3. I-1, II-2, III-3
- 4. I-3, II-2, III-1

Question ID :
Option 1 ID :
Option 2 ID :
Option 3 ID :
Option 4 ID :

In the context of records and statistics, authority file for cataloguing is maintained by which of the following sections of the library?

- 1. Circulation Section
- 2. Acquisition Section
- 3. Technical Section
- 4. Maintenance Section

Option 4 ID :
Option 3 ID :
Option 2 ID :
Option 1 ID :
Question ID :

Which of the following statements is correct regarding meta search engines?

I. Meta search engines have their own databases.

II. Before conducting a search on a meta search engine, it is important to find out which search engines are included by the meta search engine.

- 1. Neither I nor II
- 2. Only I
- 3. Only II
- 4. Both I and II

Option 4 ID :
Option 3 ID :
Option 2 ID :
Option 1 ID :
Question ID :

Which of the following element does the call number consists for a document?

I. Class number

II. Book number

- 1. Only II
- 2. Both I and II
- 3. Neither I nor II
- 4. Only I

Option 4 ID :
Option 3 ID :
Option 2 ID :
Option 1 ID :
Question ID :

With the help of a book number and _____ a document is fully individualised.

- 1. Class number
- 2. Binary number
- 3. Collection number
- 4. Decimal number

Question ID :

Option 1 ID :

Option 2 ID :

Option 3 ID :

Option 4 ID :

_____ of documents is one of the basic function associated with any library.

- 1. Selection
- 2. Acquisition
- 3. Accessioning
- 4. Ordering

Question ID :

Option 1 ID :

Option 2 ID :

Option 3 ID :

Option 4 ID :

Which of the following is the type of metadata?

- I. Descriptive
- II. Structural
- 1. Only II
- 2. Neither I nor II
- 3. Only I
- 4. Both I and II

Question ID :

Option 1 ID :

Option 2 ID :

Option 3 ID :

Option 4 ID :

In the context of electronic resources, which of the following is a primary source of information?

- I. Electronic journals
- II. Electronic conferences
- 1. Neither I nor II
- 2. Only I
- 3. Both I and II
- 4. Only II

Option 4 ID :

Option 3 ID :

Option 2 ID :

Option 1 ID :

Question ID :

In Library Automation the Dublin Core Metadata initiative began in _____.

- 1. March 1993
- 2. March 1996
- 3. March 1994
- 4. March 1995

Option 4 ID :

Option 3 ID :

Option 2 ID :

Option 1 ID :

Question ID :

Which of the following is a discipline that measures library activities, library collection, personnel, building, furniture, etc?

- 1. Librametrics
- 2. Epistemology
- 3. Bibliometrics
- 4. Thesaurus

Option 4 ID :

Option 3 ID :

Option 2 ID :

Option 1 ID :

Question ID :

A _____ is a device that moves in all directions and controls the movement of the cursor.

- 1. joystick
- 2. mouse
- 3. pointing device
- 4. trackball

Question ID :

Option 1 ID :

Option 2 ID :

Option 3 ID :

Option 4 ID :

Maharashtra is the _____ state to have a library Act; it has around _____ public library nodes.

- 1. fifth, 5900
- 2. fourth, 2900
- 3. third, 3900
- 4. first, 4900

Question ID :

Option 1 ID :

Option 2 ID :

Option 3 ID :

Option 4 ID :

In the context of web searching, which of the following statements is correct regarding indexing?
 I. It is the process of prioritizing the web pages in the order of their preference.
 II. It gives the facility to the user to check the most appropriate page first, out of the countless pages found during the search.

- 1. Only I
- 2. Neither I nor II
- 3. Only II
- 4. Both I and II

Question ID :

Option 1 ID :

Option 2 ID :

Option 3 ID :

Option 4 ID :

Which of the following is an advantage of stock verification?

- I. It provides opportunity to survey the stock and be aware of the library collection.
- II. It identifies old editions and books not in demand or use to be weeded out.
- III. It impresses the authorities on the inevitability of loss of books.

- 1. Only I and III
- 2. I, II and III
- 3. Only II and III
- 4. Only I and II

Question ID :

Option 1 ID :

Option 2 ID :

Option 3 ID :

Option 4 ID :

In the context of operating systems, which of the following statements is correct regarding Linux?

- I. Linux is multitasking.
- II. Linux is multi user.
- III. Linux is Backwards-Compatible.

- 1. Only I and III
- 2. I, II and III
- 3. Only I and II
- 4. Only II and III



Question ID :

Option 1 ID :

Option 2 ID :

Option 3 ID :

Option 4 ID :

Which of the following is implication of the first law of library science?

- I. Location
- II. Library hours
- III. Library building and furniture

- 1. Only I and III
- 2. Only I and II
- 3. Only II and III
- 4. I, II and III

Question ID :

Option 1 ID :

Option 2 ID :

Option 3 ID :

Option 4 ID :

In the context of reference and information services, which of the following is NOT an example of tertiary sources?

- 1. Dictionary
- 2. Bibliography of bibliographies
- 3. Almanac
- 4. Monograph

Question ID :

Option 1 ID :

Option 2 ID :

Option 3 ID :

Option 4 ID :

Maintenance Section of a library is responsible for which of the following jobs?

- 1. Making record entries in the stock register
- 2. Receiving supplies
- 3. Processing the bills for payment
- 4. Shelving and re-shelving

Question ID :

Option 1 ID :

Option 2 ID :

Option 3 ID :

Option 4 ID :

In the context of reference queries, which of the following is an example of the research queries?

- I. What literature is available on the use of multimedia for teaching English to primary class students?
- II. How many districts are there in the state of Madhya Pradesh?
- III. Which are the major universities across the world that offer programmes on sustainability?

- 1. I, II and III
- 2. Only I and III
- 3. Only II and III
- 4. Only I and II

Question ID :

Option 1 ID :

Option 2 ID :

Option 3 ID :

Option 4 ID :

In the context of the general principles of management, which of the following is correct regarding Taylor's Principles?

- I. Achieving cooperation of human beings, rather than chaotic individualism.
- II. Obtaining harmony in group action, rather than discord.
- III. Working for maximum output, rather than restricted output.

- 1. I, II and III
- 2. Only I and II
- 3. Only II and III
- 4. Only I and III

Option 4 ID :
Option 3 ID :
Option 2 ID :
Option 1 ID :
Question ID :

Which of the following sections of a library deals with membership work, issue and return work and work related to users' requirements.

- 1. Technical Section
- 2. Circulation Section
- 3. Reference Section
- 4. Acquisition Section

Option 4 ID :
Option 3 ID :
Option 2 ID :
Option 1 ID :
Question ID :

In the context of information sources, a _____ is a collection of writings published in honour of a learned person.

- 1. dissertation
- 2. souvenir
- 3. monograph
- 4. festschrift

Option 4 ID :
Option 3 ID :
Option 2 ID :
Option 1 ID :
Question ID :

Which of the following is correct regarding the need and purpose of the reference service?

- I. To satisfy the information needs of the users and demand for intensive services.
- II. To know the availability of volume and type of documents in print and nonprint.
- III. To be in pace with modern tools and techniques developed for library and information services.

- 1. I, II and III
- 2. Only II and III
- 3. Only I and III
- 4. Only I and II

Option 4 ID :
Option 3 ID :
Option 2 ID :
Option 1 ID :
Question ID :

It is an _____ to develop and maintain a library system that is capable of providing adequate library service to all the people.

- 1. obligations of the staff
- 2. obligation of the library authority
- 3. obligations of the reader
- 4. obligation of the state

Option 4 ID :
Option 3 ID :
Option 2 ID :
Option 1 ID :
Question ID :

In the context of editing and formatting word documents, which of the following shortcuts is used to cut the selected text?

- 1. Ctrl+V
- 2. Ctrl+D
- 3. Ctrl+C
- 4. Ctrl+X

Option 4 ID :
Option 3 ID :
Option 2 ID :
Option 1 ID :
Question ID :

In the context of reference services, which of the following refers to a set of abilities required to identify what information is needed; and how to locate, evaluate and use information in relation to the need?

- 1. Information Technology
- 2. Information Abundance
- 3. Information Literacy
- 4. Information Deluge

Question ID :

Option 1 ID :

Option 2 ID :

Option 3 ID :

Option 4 ID :

_____ is concerned with maintaining or restoring access to artifacts, documents and records through the study, diagnosis, treatment and prevention of decay and damage.

- 1. Presentation
- 2. Delimitation
- 3. Preservation
- 4. Deterioration

Question ID :

Option 1 ID :

Option 2 ID :

Option 3 ID :

Option 4 ID :

In the context of information sources, a/an _____ is something set up and established by authority as a rule for the measure of quantity, weight, extent, value or quality.

- 1. encyclopaedia
- 2. standard
- 3. patent
- 4. anthology

Question ID :

Option 1 ID :

Option 2 ID :

Option 3 ID :

Option 4 ID :

In the context of information sources, which of the following is a reference book usually published once a year and contains many kinds of information?

- 1. Almanac
- 2. Obituary
- 3. Thesis
- 4. Synopsis

Question ID :

Option 1 ID :

Option 2 ID :

Option 3 ID :

Option 4 ID :

In the context of the physical planning of library, which of the following documents can be categorised as ephemeral materials?

- I. Old catalogues
- II. Old text books
- III. News bulletins
- 1. Only I and III
- 2. Only II and III
- 3. I, II and III
- 4. Only I and II

Question ID :

Option 1 ID :

Option 2 ID :

Option 3 ID :

Option 4 ID :

Library Committee is a body or organisation consisting of persons who are assigned the job of governance of a library. Which of the following is NOT a function of the library committee?

- 1. Accept gifts and donations for the library.
- 2. Appointment, suspension and dismissal of senior library staff.
- 3. Formulate library policies and objectives.
- 4. Plan overall library development programmes and activities.

Question ID :

Option 1 ID :

Option 2 ID :

Option 3 ID :

Option 4 ID :

In the context of library organization structure, which of the following refers to the process, of linking several activities to achieve a functioning whole?

- 1. Authorisation
- 2. Coordination
- 3. Departmentation
- 4. Delegation

Question ID :

Option 1 ID :

Option 2 ID :

Option 3 ID :

Option 4 ID :

The consequent increase in business and commercial activities emerged the need for _____ libraries.

- 1. national
- 2. special
- 3. public
- 4. government

Question ID :

Option 1 ID :

Option 2 ID :

Option 3 ID :

Option 4 ID :

American Library Association was founded in _____ with its headquarters at _____.

- 1. 1876, Chicago
- 2. 1856, Washington DC
- 3. 1886, Utah
- 4. 1896, California

Question ID :

Option 1 ID :

Option 2 ID :

Option 3 ID :

Option 4 ID :

In the context of information sources, which of the following statements is correct regarding magazines?

- I. They are published by newspaper and commercial publishers.
- II. The authors are journalists, and freelance writers.
- III. They include a lot of advertisements.

- 1. Only I and III
- 2. Only I and II
- 3. I, II and III
- 4. Only II and III

Question ID :

Option 1 ID :

Option 2 ID :

Option 3 ID :

Option 4 ID :

Which of the following invention helped in quicker dissemination of information in late 1800's?

- I. Telephone
- II. Telegraph

- 1. Only I
- 2. Both I and II
- 3. Only II
- 4. Neither I nor II

Question ID :

Option 1 ID :

Option 2 ID :

Option 3 ID :

Option 4 ID :

A CGI script is a program that runs on a web server. It serves as a link between the web server and some other program (a database) running on the server. What does the 'G' stand for in 'CGI'?

- 1. Gradation
- 2. Generation
- 3. Gateway
- 4. Graphics

Question ID :

Option 1 ID :

Option 2 ID :

Option 3 ID :

Option 4 ID :

Which of the following invented paper in 105 A.D?

- 1. Indian
- 2. Chinese
- 3. American
- 4. African

Option 4 ID :
Option 3 ID :
Option 2 ID :
Option 1 ID :
Question ID :

In a Dictionary Catalogue, we normally provide which of the following entries?

- I. Collaborator Added Entries
- II. Subject Added Entries
- III. Title Added Entries

- 1. Only II and III
- 2. I, II and III
- 3. Only I and II
- 4. Only I and III

Option 4 ID :
Option 3 ID :
Option 2 ID :
Option 1 ID :
Question ID :

Which of the following statements is correct regarding the characteristics of a web server?

- I. The primary function of a web server is to store, process and deliver web pages to clients.
- II. A web server can contain one or more websites.
- III. A web server processes incoming network requests over HTTP and several other related protocols.

- 1. Only I and III
- 2. Only II and III
- 3. I, II and III
- 4. Only I and II

Option 4 ID :
Option 3 ID :
Option 2 ID :
Option 1 ID :
Question ID :

In a classified catalogue, the main entry of a book starts with the _____ of the book.

- 1. call number
- 2. accession number
- 3. reference number
- 4. serial number

Question ID :

Option 1 ID :

Option 2 ID :

Option 3 ID :

Option 4 ID :

In the context of information sources, which of the following is a type of secondary periodicals?

- I. Indexing Periodical
- II. Abstracting Periodical
- 1. Neither I nor II
- 2. Only II
- 3. Both I and II
- 4. Only I

Question ID :

Option 1 ID :

Option 2 ID :

Option 3 ID :

Option 4 ID :

In the context of types of information services, which of the following statements is correct regarding Current awareness service (CAS)?

- I. It is in response to a specific query.
- II. It is a continuous service provided to the information seekers irrespective of the stage and progress of their research.
- 1. Only I
- 2. Both I and II
- 3. Only II
- 4. Neither I nor II

Question ID :

Option 1 ID :

Option 2 ID :

Option 3 ID :

Option 4 ID :

Which of the following is an advantage of centralized cataloguing?

- I. Uniform and standard cataloguing practices can be adopted.
- II. Pooling up the necessary funds to opt for centralized cataloguing may be difficult for some libraries.
- III. Some of the professional staff who are relieved of cataloguing work can be utilised for other useful professional service.

- 1. Only II and III
- 2. Only I and II
- 3. Only I and III
- 4. I, II and III

Question ID :

Option 1 ID :

Option 2 ID :

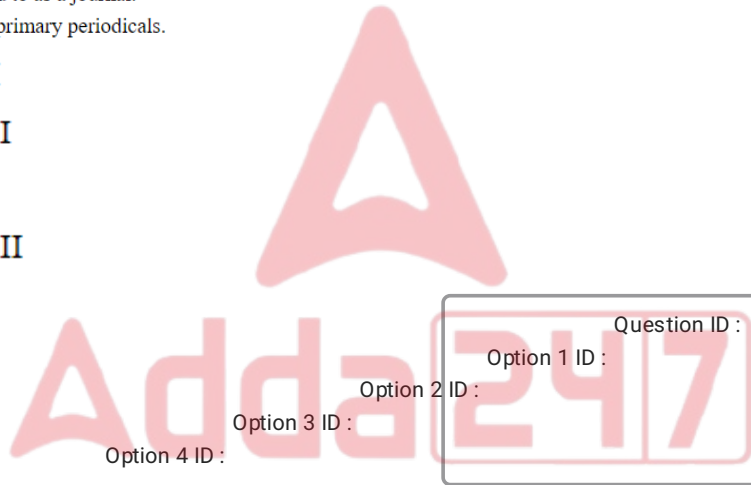
Option 3 ID :

Option 4 ID :

In the context of information sources, which of the following statements is correct regarding periodicals?

- I. A periodical is any publication that appears at regular intervals and intended to continue indefinitely.
- II. A periodical is also referred to as a journal.
- III. Scholarly periodicals are primary periodicals.

- 1. Only I and II
- 2. Only I and III
- 3. I, II and III
- 4. Only II and III



Question ID :

Option 1 ID :

Option 2 ID :

Option 3 ID :

Option 4 ID :

In the context of subject cataloguing, which of the following principles is involved in subject heading?

- I. Uniformity in headings
- II. Direct and specific entry

- 1. Only II
- 2. Both I and II
- 3. Only I
- 4. Neither I nor II

Question ID :

Option 1 ID :

Option 2 ID :

Option 3 ID :

Option 4 ID :

In the context of information services, _____ are list of references which an author mentions in his/her writing indicating that the references have been used by him/her for some purpose such as, support for a particular viewpoint, or as an authority for a statement of fact, or an acknowledgement of an earlier work on which the present work is based, or an indication of a related work and so on.

- 1. archives
- 2. periodicals
- 3. journals
- 4. citations

Option 4 ID :
Option 3 ID :
Option 2 ID :
Option 1 ID :
Question ID :

In the context of entries in catalogues, which of the following statements is correct?

I. In dictionary catalogue the entries are arranged according to alphabetical order.

II. In classified catalogue the entries are arranged according to class numbers.

- 1. Only I
- 2. Only II
- 3. Neither I nor II
- 4. Both I and II

Option 4 ID :
Option 3 ID :
Option 2 ID :
Option 1 ID :
Question ID :

In which of the following type of centralised service, a central organisation produces a bibliography from which libraries can prepare their own catalogues?

- 1. MARC Service
- 2. Cataloguing-in-Source
- 3. Information Service
- 4. Cataloguing-in-publication

Option 4 ID :
Option 3 ID :
Option 2 ID :
Option 1 ID :
Question ID :

Which of the following is NOT an objective of Indian Association of Special and Information Centres [IASLIC]?

- ✓ 1. To discourage the systematic acquisition, organization and dissemination of knowledge
- ✗ 2. To act as a centre for information in scientific, technical and other fields
- ✗ 3. To act as a centre for research special library and documentation techniques
- ✗ 4. To improve the technical efficiency of workers in special libraries

Question ID :

Option 1 ID :

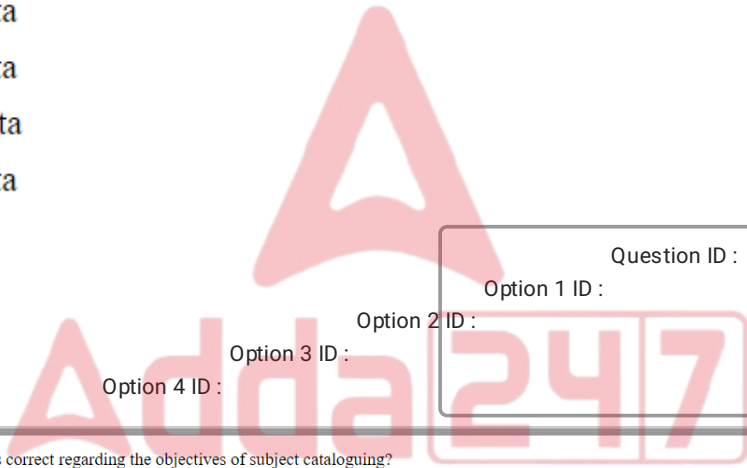
Option 2 ID :

Option 3 ID :

Option 4 ID :

The Indian Library Association was founded in _____ at _____.

- ✗ 1. 1992, Calcutta
- ✗ 2. 1983, Calcutta
- ✓ 3. 1933, Calcutta
- ✗ 4. 1947, Calcutta



Question ID :

Option 1 ID :

Option 2 ID :

Option 3 ID :

Option 4 ID :

Which of the following statements is correct regarding the objectives of subject cataloguing?

- I. To provide access by subject to all relevant material.
 - II. To provide entry through any vocabulary common to a considerable group of users, specialists or laymen.
 - III. To provide subject access to materials through all suitable principles of subject organisation such as matter and applications.
- ✓ 1. I, II and III
 - ✗ 2. Only I and III
 - ✗ 3. Only I and II
 - ✗ 4. Only II and III

Question ID :

Option 1 ID :

Option 2 ID :

Option 3 ID :

Option 4 ID :