

**AFCAT**

**Memory Based Paper**  
26 Feb 2023



# Test Prime

**ALL EXAMS,  
ONE SUBSCRIPTION**



**70,000+**  
Mock Tests



**Personalised  
Report Card**



**Unlimited  
Re-Attempt**



**600+**  
Exam Covered



**Previous Year  
Papers**



**500%**  
Refund



**ATTEMPT FREE MOCK NOW**

100 Questions

**Que. 1** Who was the Viceroy of India when the Quit India Movement started in 1942?

1. Linlithgow
2. Wilington
3. Wavell
4. Minto

Correct Option - 1

**Que. 2** In which year was the English Education Act introduced to make English the medium of instruction for higher education and to stop the promotion of oriental institutions?

1. 1835
2. 1830
3. 1854
4. 1833

Correct Option - 1

**Que. 3** Match the following:

(A) Strait of Gibraltor	(i) Between Indonesia & Malaysia
(B) Strait of Malacco	(ii) Between Gulf of Persia and Gulf of Oman
(C) Strait of Bering	(iii) Between Africa and Europe
(D) Strait of Hormuz	(iv) Between Asia and North America

1. (A) - (iii), (B) - (iv), (C) - (i), (D) - (ii)
2. (A) - (iii), (B) - (i), (C) - (iv), (D) - (ii)
3. (A) - (iv), (B) - (iii), (C) - (ii), (D) - (i)
4. (A) - (iv), (B) - (ii), (C) - (iii), (D) - (i)

Correct Option - 2

**Que. 4** "Hippocamp" is Moon of which planet?

1. Jupiter
2. Neptune
3. Uranus
4. Saturn

Correct Option - 2

---

**Que. 5** Beighton Cup is associated with \_\_\_\_\_.

1. football
2. hockey
3. badminton
4. golf

Correct Option - 2

---

**Que. 6** Which nation emerged victorious in the 2022 Davis Cup by defeating Australia 2-0 in the final?

1. Canada
2. Italy
3. Australia
4. Russia

Correct Option - 1

---

**Que. 7** Nur Sultan is the capital of which of the following country?

1. Uzbekistan
2. Turkmenistan
3. Kazakhstan
4. Kyrgyzstan

Correct Option - 3

---

**Que. 8** Sattriya dance is related to which state?

1. Arunachal Pradesh
2. Assam
3. Sikkim
4. Nagaland

Correct Option - 2

---

**Que. 9** Who led the Dandi March?

1. Mohandas Karamchand Gandhi
2. Rajmohan Gandhi
3. Devdas Gandhi
4. Hiralal Mohandas Gandhi

Correct Option - 1

---

**Que. 10** In which Indian state was the country's first carbon dioxide measurement exchange tower established?

1. Uttarakhand
2. Mumbai
3. Delhi
4. Himachal Pradesh

Correct Option - 1

**Que. 11** Consider the following statements:

1. The Constitution of India provides for a high court for each state, but the Seventh Amendment Act of 1956 authorised the Parliament to establish a common high court for two or more States or for two or more states and a union territory.
2. The Parliament can extend the jurisdiction of a high court to any union territory or exclude the jurisdiction of a high court from any union territory.

Which of the statements given above is/are correct?

1. 1 only
2. 2 only
3. Both 1 and 2
4. Neither 1 nor 2

Correct Option - 3

**Que. 12** President's Rule is declared under which Article of the Constitution?

1. Article 356
2. Article 358
3. Article 360
4. Article 352

Correct Option - 1

**Que. 13** Which Bank has received the RBI's approval to open a special vostro account with Gazprombank of Russia for trade settlement in Indian rupees?

1. Indusind Bank
2. SBI Bank
3. HDFC Bank
4. UCO bank

Correct Option - 4

**Que. 14** Which chemical is used for ripening of fruits?

1. Methane
2. Ethylene

3. Sulphuric acid
4. Glucose

Correct Option - 2

---

**Que. 15** Which is a water-soluble Vitamin?

1. Vitamin A
2. Vitamin C
3. Vitamin D
4. Vitamin K

Correct Option - 2

---

**Que. 16** Which Indian Institute of Technology (IIT) developed an artificial heart for acute heart problems?

1. IIT Bombay
2. IIT Delhi
3. IIT Madras
4. IIT Kanpur

Correct Option - 4

---

**Que. 17** Who is the author of the book named 'An idealist view of life'.

1. Jawahar Lal Nehru
2. S. Radhakrishnan
3. Jai Shankar Prasad
4. Mulk Raj Anand

Correct Option - 2

---

**Que. 18** Consider the statement in regard to the SVAMITVA scheme.

1. The aim of this scheme is to update rural land records, providing a record of rights to village households and issue property cards.
  2. SVAMITVA is a central scheme of the Ministry of Panchayati Raj and Rural Development.
  3. This scheme to be implemented across the country in a phased manner over a period of six years (2020-2026).
- Select the correct answer by using the code mentioned below.

1. Only 1 and 2
2. All a, 2 and 3
3. Only 1 and 3
4. Only 2 and 3

Correct Option - 1

---

**Que. 19** The Headquarters of Indian Council of Medical Research is located in which city?

1. Pune
2. New Delhi
3. Nagpur
4. Kolkata

Correct Option - 2

**Que. 20** Which of the following song has won the "Best original song" award at Oscar 2023?

1. Naacho Naacho
2. Yara Teri Meri Yaari
3. Neendraan Ni Aandiyaaan
4. Naatu Naatu

Correct Option - 4

**Que. 21** Match Column A with Column B.

Column A (Helicopters)		Column B (Countries)	
(a)	Apache Helicopter	1.	France
(b)	Heron drone	2.	Russia
(c)	Kamov Ka-52 Helicopter	3.	Israel
(d)	Tiger Helicopter	4.	USA

1. (a) - 2; (b) - 4; (c) - 1; (d) - 3
2. (a) - 3; (b) - 2; (c) - 1; (d) - 4
3. (a) - 3; (b) - 1; (c) - 4; (d) - 2
4. (a) - 4; (b) - 3; (c) - 2; (d) - 1

Correct Option - 4

**Que. 22** Spider Missile System belongs to which country?

1. Russia
2. U.S.A.
3. India
4. Israel

Correct Option - 4

**Que. 23** What is "Sarang" in the context of the Indian defense?

1. An indigenous light combat aircraft



2. An Indian military display team flying Advanced Light Helicopters
3. An aerobatics team operating Su-30 MKI aircraft
4. The Sanskrit name for the national animal of India

Correct Option - 2

**Que. 24** Which is the first Asian Country to join NATO's cyber defence group?

1. India
2. South Korea
3. Sri Lanka
4. Bangladesh

Correct Option - 2

**Que. 25** Match the following columns:

Operation	Evacuation
1. Operation Ganga	A. Rescue of IAF pilot Abhinandan Varhaman
2. Operation SardHawa	B. Evacuation plan from Eukraine
3. Operation Green Hunt	C. Counter-insurgency campaign
4. Operation Devi Shakti	D. Evacuation plan from Afghanistan

1. 1 - C, 2 - D, 3 - B, 4 - A
2. 1 - B, 2 - A, 3 - C, 4 - D
3. 1 - C, 2 - B, 3 - D, 4 - A
4. 1 - B, 2 - D, 3 - C, 4 - A

Correct Option - 2

**Que. 26** What will be the sum that when compounded quarterly at a rate of 8% per annum amounts to 6765201 in one year?

1. 6264000
2. 6764000
3. 6250000
4. 6406275

Correct Option - 3

**Que. 27** Aman started a journey of 200km by car. The average speed of the car for reaching the destination was 40 km/hr, and while returning home, the average speed was 20 km/hr. What was the average speed of the car for the whole journey?



1. 25 km/hr
2.  $93/5$  km/ph
3.  $80/3$  km/ph
4. 32 km/hr

Correct Option - 3

---

**Que. 28** The sum of the three numbers is 370. The first number is  $1/4$ th of the third number, and the ratio of the second number to the third is 3 : 5. Find the third number

1. 200
2. 120
3. 50
4. 160

Correct Option - 1

---

**Que. 29** A number when divided by 5 leaves a remainder 3. When the square of the same number is divided by 5, then the remainder is:

1. 2
2. 5
3. 4
4. 3

Correct Option - 3

---

**Que. 30** A sum of money is sufficient to pay A's wages for 21 days and B's wages for 28 days. The same money is sufficient to pay the wages of both for how many days?

1. 10 days
2. 12 days
3. 14 days
4. 16 days

Correct Option - 2

---

**Que. 31** A and B together take 5 days to do work, B and C take 7 days to do the same, and A and C take 4 days to do it. Who among these will take the least time to do it alone?

1. A
2. B
3. C
4. The data is not sufficient

Correct Option - 1

---

**Que. 32** There are 50 workers in a factory. Every man gets 95 Rs, and every woman gets 70 Rs. The sum of their wages is Rs 4100. Find the number of men.

1. 21
2. 26
3. 23
4. 24

Correct Option - 4

**Que. 33** A vendor lends 72,000 rupees at a rate of 12% of compound interest per annum, compounded annually. Find the interest for the 3rd year (approximate value).

1. Rs 10500
2. Rs 10838
3. Rs 10818
4. Rs 10850

Correct Option - 2

**Que. 34** Three containers are filled with a mixture of sugar and water. The ratio of their quantity is 5:4:3. The ratio of sugar and water in those containers is 2:3, 4:5, and 1:3 respectively. These containers are then mixed and shifted to another container. Now, find the ratio of sugar and water in the mixture.

1. 145:268
2. 140:263
3. 163:269
4. 145:295

Correct Option - 3

**Que. 35** Ravi travels by taxi for Rs 15 per km and by rented car for Rs 5 per km. He travels 80km in a week for Rs. 500. Find the distance traveled by taxi.

1. 8 km
2. 9 km
3. 10 km
4. 12 km

Correct Option - 3

**Que. 36** A wire of square shape with an area of  $676 \text{ cm}^2$  is bent in the form of a circle. Find the diameter of the circle (in cm).

1.  $33\frac{1}{11}$
2.  $11\frac{1}{33}$
3.  $22\frac{1}{11}$

4.  $22\frac{1}{33}$

Correct Option - 1

**Que. 37** Rakesh covers a distance in two halves. He covers the first half of the distance with his original speed and increases his speed by 60% for the second half. He covers the complete distance in 39 minutes. Find the total distance travelled by him if the speed in the first half was 15 m/s.

1. 50 km
2. 32.4 km
3. 37.8 km
4. 43.2 km

Correct Option - 4

**Que. 38** The sum of area of a rectangle 42m wide and a circle with a radius of 21m is 4116. Find the length of a rectangle.

1. 62 m
2. 63 m
3. 64 m
4. 65 m

Correct Option - 4

**Que. 39** There are 500 blue pens, 250 pink pens, and 250 yellow pens. If 50% of blue pens and 50% of pink pens are taken out, then find the percentage of yellow pens.

1. 20 %
2. 30 %
3. 40 %
4. 50 %

Correct Option - 3

**Que. 40** 20 tickets with numbers 1 to 20 written on them are mixed thoroughly and then a ticket is drawn at random out of them. Find the probability that the number on the drawn ticket is a multiple of 3 or 7.

1.  $\frac{3}{5}$
2.  $\frac{2}{7}$
3.  $\frac{2}{5}$
4.  $\frac{3}{7}$

Correct Option - 3

**Que. 41** Find  $0.\overline{09} \times 7.\overline{3}$

1.  $\frac{3}{2}$
2.  $\frac{4}{3}$
3.  $\frac{2}{3}$
4.  $\frac{3}{4}$

Correct Option - 3

---

**Que. 42** A vendor bought some items for 25,000 rupees. He sells some of them for a 10% profit and remaining on 8% profit. The total profit he gets is Rs. 2250. Find the individual profits.

1. Rs. 1250 & Rs. 1000
2. Rs. 983 & Rs. 1000
3. Rs. 1250 & Rs. 983
4. Rs. 1200 & Rs. 1050

Correct Option - 1

---

**Que. 43** The effective annual rate of interest corresponding to a nominal rate of 8% per annum payable half-yearly is:

1. 8.8%
2. 8.6%
3. 8.23%
4. 8.16%

Correct Option - 4

---

**Que. 44** Find the angle traced by hour hand of a correct clock between 6 am and 3 pm.

1.  $90^\circ$
2.  $180^\circ$
3.  $270^\circ$
4.  $30^\circ$

Correct Option - 3

---

**Que. 45** The number of students in three different schools is in the ratio 2:3:3. Students in each school have decreased by 60%, 30%, and 20%. Find the new ratio of the number of students.

1. 21:28:24
2. 23:13:12
3. 8:21:24
4. 9:14:17

Correct Option - 3

---

**Que. 46** Find the odd one from the given alternatives -

1. TBVD
2. AXCZ
3. JOKQ
4. FRHT

Correct Option - 3

---

**Que. 47** Which of the following numbers will replace the question mark (?) in the given series?  
0, 6, 24, 60, 120, ?

1. 210
2. 190
3. 220
4. 240

Correct Option - 1

---

**Que. 48** Alka and Adhir are siblings. Arun is the husband of Alka and Ankita is the wife of Adhir. Ahilya is the mother of Adhir. Ananya is the only daughter of Arun. How is Ananya related to Ahilya?

1. Ananya is Ahilya's sister
2. Ananya is the daughter of Ahilya
3. Ananya is Ahilya's niece
4. Ananya is the granddaughter of Ahilya

Correct Option - 4

---

**Que. 49** In a certain code language, if 'D' = 4 and 'AND' = 19, then how will 'ADM' be written in that language?

1. 17
2. 18
3. 19
4. 20

Correct Option - 2

---

**Que. 50** Three of the four group of words are alike in some manner. Select the odd group of words.

1. (Stock, Troupe, Robber)
2. (Crowd, Army, Herd)
3. (Team, Council, Bouquet)
4. (Shoal, Flock, Chorus)

Correct Option - 1

---

Rearrange the jumbled letters to make meaningful words and then select the one which is different.

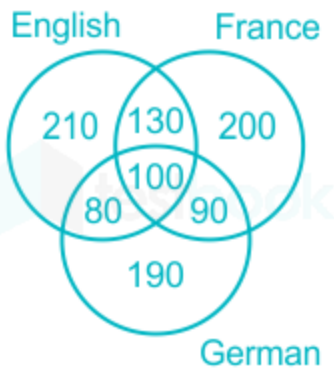
**Que. 51**

1. HCOACCKRO
2. SUIMTOOQ
3. PUOSTOC
4. METERIT

Correct Option - 3

**Que. 52**

The numbers in the figure below represent people who know the languages:



The ratio of people who know all languages to people who know only one language is

1.  $\frac{1}{6}$
2.  $\frac{1}{9}$
3.  $\frac{1}{3}$
4.  $\frac{8}{9}$

Correct Option - 1

**Que. 53**

In a certain code language, 'STORK' is written as 'URROO' and 'ASHES' is written as 'CQKBW'. How will 'BUNKE' be written in that language?

1. DRPGI
2. DSPHG
3. DSQGI
4. DSQHI

Correct Option - 4

**Que. 54**

Arrange the following in a meaningful sequence:

1. Hungry
2. Baby
3. Smile
4. Cry
5. Food

1. 1, 5, 4, 2, 3

2. 5, 3, 1, 2, 4
3. 2, 1, 4, 5, 3
4. 2, 4, 3, 1, 5

Correct Option - 3

---

**Que. 55** Ram is older than Shyam, Moti is older than Ram while Naresh is younger to Moti but older than Shyam. Who is the youngest?

1. Naresh
2. Ram
3. Moti
4. Shyam

Correct Option - 4

---

**Que. 56** In the following question, four number groups are given. In each group the three numbers are related to each other by some Logic/Rule/ Relation. Three are similar on basis of same Logic/Rule/Relation. Select the odd one out from the given alternatives.

1. (12, 24, 41)
2. (13, 26, 43)
3. (16, 32, 49)
4. (17, 34, 53)

Correct Option - 4

---

**Que. 57** A word with letters jumbled has been given. Choose the correct order of letters which are required to form the correct word.

Jumbled word: VTNEAI

1. 4, 5, 2, 1, 6, 3
2. 5, 1, 6, 3, 2, 4
3. 2, 1, 6, 4, 5, 3
4. 3, 5, 2, 6, 1, 4

Correct Option - 4

---

**Que. 58** Find the angle between the hour hand and the minute hand of a clock, when the time is 3:25 -

1.  $47\frac{1}{2}^\circ$
2.  $45^\circ$
3.  $40^\circ$
4.  $45\frac{1}{2}^\circ$

Correct Option - 1



**Que. 59** A man walks 15 metres in the front and then 15 metres to his right. Then every time turning to his left, the man walks 5 metres. 20 metres and 20 metres respectively. How far is the man from the starting point?

1. 15 metres
2. 5 metres
3. 20 metres
4. 10 metres

Correct Option - 2

**Que. 60** Refer to the following letter, number, symbol series and answer the question  
(Left) D F \* S % 8 E 2 ^ 6 L & 2 T Y # 3 5 \$ K J 9 (Right)

If all the numbers are dropped from the series, which of the following will be ninth from the right?

1. E
2. ^
3. &
4. L

Correct Option - 2

**Que. 61** C is wife of B, E is son of C, A is brother of B and father of D. How is E related to D?

1. Cousin
2. Sister
3. Father
4. Mother

Correct Option - 1

**Que. 62** Find the wrong term in the series given below:

5, 10, 17, 24, 37, 50, 65

1. 37
2. 17
3. 24
4. 50

Correct Option - 3

**Que. 63** Which two signs should be interchanged to make the given equation correct?

$$12 + 4 \div 2 - 6 = 16$$

1. - and =

2. + and -
3. ÷ and =
4. ÷ and +

Correct Option - 2

**Que. 64** In the following question, select the odd letter/letters from the given alternatives.

1. VWYB
2. LMOR
3. QSVY
4. ABDG

Correct Option - 3

**Que. 65** X, Y, Z, P, Q and R are sitting in a row facing north. X is the neighbour of Y and P. Q is the neighbour of Z and R, P is to the right of X and P and Z are immediate neighbours.

Then how many persons are between X and Q?

1. One
2. Three
3. Four
4. Two

Correct Option - 4





**Que. 66** In the following question, select the odd word from the given alternatives.

1. Lizard
2. Snake
3. Whale
4. Crocodile

Correct Option - 3

**Que. 67** Choose from the four answer figures the figure that will be formed when question figure is folded into a box.



1. 
2. 
3. 
4. 

Correct Option - 4

**Que. 68** **Direction:** In the question below are given two statements followed by two conclusions numbered I and II. You have to take the given statements to be true even if they seem to be at variance with commonly known facts. Read all the conclusions and then decide which of the given conclusions logically follows from the given statements disregarding commonly known facts.

**Statement:**

- All teachers are students.
- All principals are teachers.

**Conclusion:**

- All principals are students.
- Some teachers are principal

1. Both I and II follows
2. Only I follows
3. Only II follows
4. Neither I nor II follows.

Correct Option - 1

**Que. 69** From the given options, select the option in which the dot can be placed in exactly the same way as shown in the figure below.





1. A
2. B
3. C
4. D

Correct Option - 2

**Que. 70** Which two numbers should be interchanged to make the given equation correct?

$$4 \times 8 - 12 + 5 = 16$$

1. 8 and 5
2. 12 and 16
3. 16 and 8
4. 4 and 5

Correct Option - 1

**Que. 71** Select the most appropriate synonym of the given word.

Sagacious

1. Delicious
2. Judicious
3. Precious
4. Malicious

Correct Option - 2

**Que. 72** Choose the word that means the same as the given word.

Vacillate

1. Advance
2. Stir
3. Plunge
4. Hesitate

Correct Option - 4

Select the most appropriate synonym of the given word.

**Que. 73** Gentle

1. Fierce
2. Ferocious
3. Cruel
4. Sympathetic

Correct Option - 4

---

**Que. 74** In the following question, out of the four alternatives, select the word opposite in meaning to the word given.

Voracious

1. Indifferent
2. Ferocious
3. Rapacious
4. Rampant

Correct Option - 1

---

**Que. 75** Choose the word from the given options that is antonym to the given or stated word.

Profane

1. kitten
2. energy
3. pious
4. wild

Correct Option - 3

---

**Que. 76** **Direction :** In the following questions, choose the word opposite in meaning to the given word as your answer :

Flippant

1. Shallow
2. Serious
3. Strong
4. Successful

Correct Option - 2

---

**Que. 77** What does the following idiom mean?

To get a cold feet

1. To grasp early
2. To catch cold

3. To misunderstand
4. To be afraid

Correct Option - 4

---

**Que. 78** What is the most appropriate meaning of the idiom?

To show a clean pair of heel

1. To run away quickly and without looking back
2. To be very polite and respectful
3. To stay in one place for a long time
4. To work very hard and efficiently

Correct Option - 1

---

**Que. 79** What is the most appropriate meaning of the idiom?

Laugh in one's sleeves

1. To laugh quietly to oneself
2. To laugh loudly and boisterously
3. To cry and be sad
4. To be angry and upset

Correct Option - 1

---

**Que. 80** What is the most appropriate meaning of the idiom?

Fall like a stone

1. To fall slowly and gently
2. To fall quickly and heavily
3. To stand up and walk away
4. To jump up and down

Correct Option - 2

---

**Que. 81** Out of four alternatives, choose the one which can be substituted for the given Words/sentences.

Specialty in dealing with problems of the elderly.

1. Obstetrics
2. Pediatrics
3. Geriatrics
4. Orthodontics

Correct Option - 3

---

**Que. 82** Directions: Pick the most suitable one-word substitute for  
A person who loves mankind and works for their well being.

1. Trustee
2. Philanthropist
3. Devotee
4. Anthropologist

Correct Option - 2

**Que. 83** In the following question, some part of the sentence may have errors. Find out which part of the sentence has an error and select the appropriate option. If a sentence is free from error, select No Error.

She is (1)/ the better student (2)/ in her class (3)/ No Error (4)

1. 1
2. 2
3. 3
4. 4

Correct Option - 2

**Que. 84** Direction: Parts of the following sentence have been given as options. Select the option that contains an error.

All these things happen/ because she do not / pay heed to my words.

1. pay heed to my words
2. All these things happen
3. No error
4. because she do not

Correct Option - 4

**Que. 85** The following sentence has been divided into parts. One of them may contain an error. Select the part that contains the error from the given options. If you don't find any error, mark 'No error' as your answer.

He is faster enough / to defeat / the current record holder.

1. He is faster enough
2. No error
3. the current record holder
4. to defeat

Correct Option - 1

**Que. 86** Directions: Each item in this section has a sentence with three underlined parts labelled as (a), (b) and (c). Read each sentence to find out whether there is any error in any underlined part and



indicate your response on the answer sheet against the corresponding letter, i.e., (a) or (b) or (c). If you find no error, your response should be indicated as (d).

Some researchers(a)/believes that population explosion(b)/has some positive sides too(c)/No Error(d)

1. (a)
2. (b)
3. (c)
4. (d)

Correct Option - 2

**Que. 87** In the following question, the sentence given with blank to be filled in with an appropriate word. Select the correct alternative out of the four and indicate it by selecting the appropriate option.

The employees are told to \_\_\_\_\_ these brochures in the weekend.

1. Look up
2. Look down
3. Look after
4. Look into

Correct Option - 1

**Que. 88** Select the most appropriate option to collocate with the word 'look' to fill in the blank.

Let's take a \_\_\_ look through this file.

1. quick
2. swift
3. rapid
4. fast

Correct Option - 1

**Que. 89** Select the most appropriate option to fill in the blank.

After suffering so many losses, the company is about to go \_\_\_\_\_.

1. bankrupt
2. silent
3. cynical
4. awry

Correct Option - 1

**Que. 90** Select the most appropriate option to fill in the blank.

The farmers in this village \_\_\_\_\_ their fields with water from the river.

1. flush

2. irrigate
3. flood
4. soak

Correct Option - 2

---

**Que. 91** In the following passage, some words have been deleted. Fill in the blank with the help of alternatives given. Select the most appropriate option for each blank.

Madagascar was a place with one of the richest \_\_\_\_ (1) \_\_\_\_ in the world, and for many people, it was a \_\_\_\_ (2) \_\_\_\_ . Then years without rain changed everything. Scientists said that the area would become even drier. Madagascar could become the first country to experience \_\_\_\_ (3) \_\_\_\_ as a result of climate change.

Select the most appropriate option to fill in the blank no.1

1. Sameness
2. Similarity
3. Biodiversity
4. Paucity

Correct Option - 3

---

**Que. 92** Select the most appropriate option to fill in the blank no.2

1. Paradise
2. Sadness
3. Misery
4. Gloom

Correct Option - 1

---

**Que. 93** Select the most appropriate option to fill in the blank no.3

1. Wealth
2. Famine
3. Plenty
4. Abundance

Correct Option - 2

---

**Que. 94** Choose the correct order of the sentence.

Mahatma Gandhi \_\_\_\_\_ civil disobedience movement.

P: within seven days failing which,

Q: to stop lawlessness and barbarianism

R: gave notice to the Government

S: he would start

1. R Q P S

2. S P Q R
3. R P Q S
4. S Q P R

Correct Option - 1

---

**Que. 95** The following question, consists of an incomplete sentence or a sentence which is split into four parts. All four parts are jumbled up and are named as P, Q, R and S. These four parts are not given in their proper order. Arrange the jumbled parts of the sentence and find out which of the four combinations from the given options will correctly complete the sentence.

Literature has existed in the Americas \_\_\_\_\_ as far back as the 5th century are known.

- P: for as long as the people who lived there  
Q: of oral literature. Mayan books from  
R: cultures have a rich history  
S: have been telling stories. Native American

1. PSQR
2. PQRS
3. PSRQ
4. PQSR

Correct Option - 3

---

**Que. 96** The following questions consist of an incomplete sentence that is split into four parts. All four parts are jumbled up and named P, Q, R, and S. These four parts are not given in their proper order. Arrange the jumbled parts of the sentence and find out which of the four combinations from the given options will correctly complete the sentence.

It was thought at the time that \_\_\_\_\_ it scorched Europe and surrounding continents.

- P. however as the months turned into  
Q. and that victory would be won easily and without much cost;  
R. years and the war spread like hellfire,  
S. the war wouldn't last more than a few months,

1. SQPR
2. SQRP
3. QSRP
4. QPRS

Correct Option - 1

---

**Que. 97** The following questions consist of an incomplete sentence that is split into four parts. All four parts are jumbled up and named P, Q, R, and S. These four parts are not given in their proper order. Arrange the jumbled parts of the sentence and find out which of the four combinations from the given options will correctly complete the sentence.

The First World War, known at the time \_\_\_\_\_ military personnel and seven million civilians.

- P. series of calamities that broke the delicate arrangement of European powers,  
 Q. it was an unforeseen war that resulted from a  
 R. as "The Great War", was a four-year conflict that spanned the globe involving thirty-two countries in total;  
 S. and ended with the loss of over eleven million

1. QSPR
2. QPRS
3. RQPS
4. RSQP

Correct Option - 3

**Que. 98** Read the passage carefully and choose the best answer to each question out of the four alternatives

A group of researchers has demonstrated that pleasure and positive states of mind are better for our health. This new intellectual approach to health is not only more powerful, but also has no side effects. Central to this claim are recent findings that even getting an education may add as much as 10 years to your health. That is why National Geographic featured John de Rosen in its book *The Incredible Machine*, which discussed old age. De Rosen, an artist, continued to paint until the week he died at age 91. The book notes: "Some scientists believe that retirement to a sedentary lifestyle initiates or aggravates medical problems, thus shortening life. According to a study of retired people, adults over 65 can learn a creative skill, like oil painting, as readily as younger students." So retiring from a job in a sense means retiring from life unless supplemented by some other, preferably new activity.

What is considered as a "new intellectual approach to health"?

1. Health benefits of a clean diet.
2. Positive state of mind.
3. Mentally challenging activities.
4. Engaging in Physical activities everyday.

Correct Option - 2

**Que. 99** What/who was the primary subject of the National Geographic premiered book "The Incredible Machine"?

1. Old Age
2. John de Rosen
3. Positive effects of a healthy state of mind.
4. Education

Correct Option - 1

**Que. 100** What was John de Rosen profession?

1. Antique collector
2. Painter
3. Artist

4. Librarian

Correct Option - 3

