

**AFCAT**

**Previous Year Paper**  
**16 Feb 2019**  
**Memory Based Paper**



# Test Prime

**ALL EXAMS,  
ONE SUBSCRIPTION**



**70,000+**  
Mock Tests



Personalised  
Report Card



Unlimited  
Re-Attempt



**600+**  
Exam Covered



Previous Year  
Papers



**500%**  
Refund



**ATTEMPT FREE MOCK NOW**

## 100 Questions

---

**Que. 1** In the following question, out of the four alternatives, select the alternative which best expresses the meaning of the idiom/phrase.

Mean business

1. Being serious about what you announce.
2. Clever or expert way of doing something.
3. Don't delay in getting something done.
4. Works very well or has the desired effect.

---

**Que. 2** In the following question, out of the four alternatives, select the alternative which best expresses the meaning of the idiom/phrase.

Keep one's finger on the pulse

1. Rating something higher on your priority list
2. Examining something carefully to not miss out any details
3. Trying out every possibility to get a result
4. Being constantly aware regarding the most recent developments

---

**Que. 3** In the following question, out of the four alternatives, select the alternative which best expresses the meaning of the idiom/phrase.

Cut to the chase

1. Come to the point.
2. To run after somebody.
3. To cut out the important bits of information
4. To take a short cut.

---

**Que. 4** In the following question, out of the four alternatives, select the alternative which is the best substitute of the phrase.

Showing or having a lot of space inside; roomy

1. Capricious
2. Capacious
3. Catechism
4. Cramped

---

**Que. 5** In the following question, out of the four alternatives, select the alternative which is the best substitute of the phrase.

An uncontrolled outburst of anger and frustration

1. Tandem
2. Tantamount
3. Tantrum

4. Tardy

---

**Que. 6** In the following question, out of the four alternatives, select the alternative which is the best substitute of the phrase.

A bitterness or ill feeling about something.

1. Acrimony
2. Parsimony
3. Hegemony
4. Impious

---

**Que. 7** Read the following passage and answer the questions given below it.

In economics, a free market is a system in which the prices for goods and services are determined by the open market and consumers, in which the laws and forces of supply and demand are free from any intervention by a government, price-setting monopoly, or other authority. The laissez-faire principle expresses a preference for an absence of non-market pressures on prices and wages, such as those from discriminatory government taxes, subsidies, tariffs, regulations of purely private behaviour, or government-granted or coercive monopolies. The concept of free market contrasts with regulated market, in which a government intervenes in supply and demand through various methods such as tariffs used to restrict trade and protect the economy. In a free market economy, prices for goods and services are set freely by the forces of supply and demand and are allowed to reach their point of equilibrium without intervention by government policy. Although free markets are commonly associated with capitalism within a market economy in contemporary usage and popular culture, free markets have also been advocated by free-market anarchists, market socialists, and some proponents of cooperatives and advocates of profit sharing. Criticism of the theoretical concept consider systems with significant market power, inequality of bargaining power, or information asymmetry to be less than free, with regulation being necessary to control those imbalances.

What are the driving forces of a free market?

1. Regulations by governments
2. Demand and supply
3. Capitalism forces
4. Market monopolies

---

**Que. 8** What are the methods through which government can regulate a market?

1. Discriminatory taxes
2. Subsidies and tariffs
3. Coercive monopolies
4. All of the above

---

**Que. 9** What is the principle that guides free markets?

1. Unregulated markets
  2. Coercive monopolies
  3. Laissez faire
  4. Open market
-

**Que. 10** In the following question, the sentence given with blank to be filled in with an appropriate word. Select the correct alternative out of the four and indicate it by selecting the appropriate option.

This is \_\_\_\_\_ worse than I thought it would be.

1. far
2. about
3. more
4. the

**Que. 11** In the following question, the sentence given with blank to be filled in with an appropriate word. Select the correct alternative out of the four and indicate it by selecting the appropriate option.

They \_\_\_\_\_ the storm approaching.

1. seen
2. looked
3. admired
4. saw

**Que. 12** In the following question, the sentence given with blank to be filled in with an appropriate word. Select the correct alternative out of the four and indicate it by selecting the appropriate option.

Faith is the only power that can inspire a human being who is in \_\_\_\_\_.

1. Flair
2. Glair
3. Stair
4. Despair

**Que. 13** Directions: In the following question, some part of the sentence may have errors. Find out which part of the sentence has an error and select the appropriate option. If a sentence is free from error, select 'No Error'.

As the country would lacking laws (1)/ and a regulatory framework to (2)/ steer the process. (3)/ No Error (4)

1. 1
2. 2
3. 3
4. 4

**Que. 14** In the following question, some part of the sentence may have errors. Find out which part of the sentence has an error and select the appropriate option. If a sentence is free from error, select 'No Error'.

The opposition Party had called to its (1)/ lawmakers to vote against the bill (2)/ if the government failed to make concessions (3)/ No Error (4)

1. 1
2. 2
3. 3
4. 4

**Que. 15** In the following question, some part of the sentence may have errors. Find out which part of the sentence has an error and select the appropriate option. If a sentence is free from error, select 'No Error'.

The regime clear a floor test as a (1)/ result, the courts can still set (2)/ aside the disqualification. (3)/ No error (4)

1. 1
2. 2
3. 3
4. 4

**Que. 16** In the following passage, some of the words have been left out. Read the passage carefully and select the correct answer for the given blank out of the four alternatives.

It was a horrible journey. The trains were late, and, of course, \_\_\_\_\_; there was enough luggage in our compartment to have filled it, and still there was one more passenger than there ought to have been; an ill-conditioned old fellow who wanted my hat-box put into the van because it happened to tumble off the rack on to his head. I pointed out to him that the rack was specially constructed for light luggage, that a hat-box was light luggage, and that if the train jolted, he ought to blame the company, not me. He was \_\_\_\_\_ - to reason. His wrangling and \_\_\_\_\_ so upset me, that I went past the station at which I ought to have changed.

and, of course, \_\_\_\_\_

1. Shameless
2. Cranky
3. Overcrowded
4. Dashing

**Que. 17** He was \_\_\_\_\_ -to reason

1. Whimsical
2. Impervious
3. Common
4. Lazy

**Que. 18** His wrangling and \_\_\_\_\_

1. Jangling
2. Dangling
3. Crying
4. Cooking

**Que. 19** In the following question, out of the four alternatives, select the one which is opposite in meaning to the given word.

Parsimonious

1. Munificent
2. Cheap
3. Closefisted

4. Miser

---

**Que. 20** In the following question, out of the four alternatives, select the one which is opposite in meaning to the given word.

Virulent

1. Angry
2. Bestial
3. Benignant
4. Harsh

---

**Que. 21** In the following question, out of the four alternatives, select the one which is similar in meaning to the given word.

Predicament

1. Nonsensical
2. Nauseating
3. Avaricious
4. Quagmire

---

**Que. 22** In the following question, out of the four alternatives, select the one which is similar in meaning to the given word.

Narcissistic

1. Modest
2. Proud
3. Self-effacing
4. Unselfish

---

**Que. 23** In the following question, out of the four alternatives, select the alternative which best expresses the meaning of the idiom/phrase.

Shoot through

1. Pass with flying colours.
2. Practice a difficult task so many times that you can do it easily.
3. Reach your target by breaking through an obstacle.
4. Leave, typically to escape from or avoid someone or something.

---

**Que. 24** In the following question, out of the four alternatives, select the alternative which is the best substitute of the words/sentence.

Capable of being imagined or grasped mentally

1. Dazzling
2. Conceivable
3. Stunning
4. Spectacular

---

**Que. 25** In the following question, out of the given four alternatives, select the one which best expresses the meaning of the Idiom/Phrase.

Every cloud has a silver lining

1. Every difficult or unpleasant situation has some advantage
2. Difficult times are tough to handle
3. Difficult times need our attention
4. Difficult times are not to be scared of

---

**Que. 26** \_\_\_\_\_ won the Maldives' presidential election on 24th September 2018.

1. Abdulla Yameen
2. Ibrahim Mohamed Solih
3. Mohamed Nasheed
4. Ibrahim Nasir

---

**Que. 27** What is the capital of Nigeria?

1. Abuja
2. Astana
3. Harare
4. La Paz

---

**Que. 28** Which are the oldest mountains in India?

1. Western Ghats
2. Satpura Range
3. Aravallis
4. Eastern Ghats

---

**Que. 29** Which monsoon in India is the main reason of the rainfall during the months of June and September?

1. South West monsoon
2. North West monsoon
3. South East monsoon
4. North East monsoon

---

**Que. 30** Where is the Satish Dhawan Space Centre located?

1. Bengaluru
2. Sriharikota
3. Thumba
4. Byalalu

---

**Que. 31** Who was the founder of the Satavahana Empire?

1. Kanha



2. Simuka
3. Hala
4. Gautamiputra

---

**Que. 32** Who has won the FIFA's best male player award for 2018?

1. Mario Mandžukić
2. Luka Modric
3. Ivan Rakitić
4. Cristiano Ronaldo

---

**Que. 33** Who is known as the Father of Indian Space Program?

1. Vikram Sarabhai
2. Homi J Bhabha
3. S. Chandrashekar
4. C. V. Raman

---

**Que. 34** When was the Indian Constitution adopted?

1. 15th August, 1947
2. 26th November, 1949
3. 26th January, 1950
4. 2nd October, 1952

---

**Que. 35** Who among the following was the first Indian to get Bharat Ratna Award?

1. Mahatama Gandhi
2. Jawahar lal Nehru
3. C. Rajagopalachari
4. Subhash Chandra Bose

---

**Que. 36** No. of players allowed in a Basketball courts from a team are \_\_\_\_\_.

1. 8
2. 7
3. 6
4. 5

---

**Que. 37** Indian Air Force's first batch of women pilots is \_\_\_\_\_.

1. Mohana Singh
  2. Bhawna Kant
  3. Avani Chaturvedi
  4. All of the above
-

**Que. 38** Name the South African track and field sprinter who broke Michael Johnson's long-standing world record in Men's 400m category.

1. Kirani James
2. LaShawn Merritt
3. Otis Davis
4. Wayde Van Niekerk

**Que. 39** Geet Sethi is associated with which sport?

1. Polo
2. Shooting
3. Hockey
4. Billiards

**Que. 40** Usain Bolt who holds the world record as a part of  $4 \times 100$  meters relay is from which country?

1. Grenada
2. Antigua
3. Bahamas
4. Jamaica

**Que. 41** 'Thang ta', a martial art form is associated with which state of India?

1. Mizoram
2. Nagaland
3. Manipur
4. Tripura

**Que. 42** Who was the founder of the Theosophical Society?

1. A.O. Hume
2. Stuart Mill
3. Madame Blavatsky
4. Raja Rammohan Roy

**Que. 43** Which continent has the largest coastline?

1. Asia
2. Africa
3. Australia
4. South America

**Que. 44** The founder of Awadh state was \_\_\_\_\_.

1. Saadat Ali Khan I
2. Hyder Ali

3. Ibrahim Zubayri
4. Yusuf Adil Shah

---

**Que. 45** Who among the following authored the book 'The Golden Threshold'?

1. Sarojani Naidu
2. Anurag Mathur
3. Mahashweta Devi
4. H.P.S. Ahluwalia

---

**Que. 46** The hardest substance available on earth is-

1. Platinum
2. Coal
3. Diamond
4. Gold

---

**Que. 47** The full form of DRS is \_\_\_\_\_.

1. Decisive Returning System
2. Decision Review System
3. Decision Returining System
4. Decision Regain System

---

**Que. 48** Latitudes are \_\_\_\_\_.

1. Parallel lines
2. Tilted to 35 degree
3. Perpendicular lines
4. None of the above

---

**Que. 49** In which language and script most of the Ashoka's records were written?

1. Prakrit
2. Sanskrit
3. Pali
4. No option correct

---

**Que. 50** First Olympic games were held in \_\_\_\_\_.

1. Athens
2. Jakarta
3. Paris
4. Beijing

---

**Que. 51**

One person moves from P towards Q with a speed of 60km/h and at the same time another person moves from Q towards P with a speed of 80km/h. when they met the second person travelled 100 kms more than the first person. what was the distance between P and Q?

1. 600
2. 700
3. 300
4. 350

**Que. 52** If someone goes with  $\frac{4}{5}$ th of his actual speed he reaches the distance 1.5 hours late. What was his actual time?

1. 6 hours
2. 5 hours
3. 12 hours
4. 8 hours

**Que. 53** Find the approximate value of the expression :

$$\sqrt{78} \times (13654/123)$$

1. 1000
2. 1200
3. 800
4. 500

**Que. 54** If 15 men take 21 days of 8 hours each to do a piece of work, then what is the number of days of 6 hours each that 21 women would take, if 3 women would as much work as 2 men?

1. 30 days
2. 25 days
3. 36 days
4. 24 days

**Que. 55** The average marks of A, B and C is 66. When D's marks are also included, the average is increased by 4 marks. Now if A is replaced by E, the new average is reduced by 2 marks. What is the sum of marks of A and D, if E's marks are 52?

1. 132
2. 136
3. 142
4. 146

**Que. 56** The rate of interest in a scheme, working on the principle of simple interest, increases by 0.5% per annum every year. For first year, the rate of interest is 14% per annum. A sum of Rs. 1000 is invested in this scheme for 5 years. Find the interest that will be generated in total.

1. Rs. 500
2. Rs. 750

3. Rs. 1750
4. Rs. 610

**Que. 57** In an examination, 60% of the candidates passed in English and 70% of the candidates passed in Mathematics, but 20% failed in both of these subjects. If 2500 candidates passed in both of these subjects, the number of Candidates that appeared for the examination was

1. 3000
2. 3500
3. 4000
4. 5000

**Que. 58** Two pens are bought at the rate of Rs 20 each. Shopkeeper sells one at the profit of 25% and other at the loss of 25%. What will be the total profit or loss in the whole transaction?

1. No profit/loss
2. Profit of Rs. 1
3. Loss of Rs. 1
4. Loss of Rs. 2

**Que. 59** Two cities X and Y are 700 km apart. X to Y is a downstream journey on a stream which flows at a speed of 5 km/hr. Two boats A and B run to and fro between two cities. Speed of Boat A, which starts from city X is 45 km/hr, while speed of boat B, which starts from city Y at the same time is 25 km/hr. After how much time will two boats meet for the second time?

1. 14 hours
2. 28 hours
3. 15 hours
4. 30 hours

**Que. 60** In summer classes, 80% of the students enrolled are below 11. Out of them, 80% students attend the class regularly. If 320 students below 11 are regular, then find the ratio of the number of students below 11 years who are regular and irregular in the summer class?

1. 7 : 9
2. 9 : 16
3. 4 : 1
4. 11 : 9

**Que. 61** By increasing the price of entry ticket to a fair in the ratio 9 : 13, the number of visitors to the fair has decreased in the ratio 7 : 4. In what ratio has the total collection increased or decreased?

1. increased in the ratio 52 : 63
2. increased in the ratio 36 : 91
3. decreased in the ratio 63 : 52
4. decreased in the ratio 91 : 36

**Que. 62** A man have three sons. The man can do twice the work of three sons. The first and second son can do the work in 24 days and 36 days respectively. If the man completes the work in  $3\frac{1}{11}$  days, then find the time taken by third person to finish the work? (approximate)

1. 13 days
2. 14 days
3. 11 days
4. 16 days

**Que. 63** Aditya joined an internship on the condition that he would be paid Rs. 68 for each day and would be fined Rs.10 if he is absent. After working for 30 days he earned Rs. 1650. Determine the number of days he was absent?

1. 5 days
2. 4 days
3. 9 days
4. 10 days

**Que. 64** A trader buys jowar at Rs. 30 per kg. 20% of the grain gets wasted. He plans to sell the remaining grain so that he makes 40% overall profit. At what price (in Rs. per kg) should he sell the grain?

1. 48
2. 50
3. 52.5
4. 47.5

**Que. 65** Vipul took a loan of Rs. 10000 from a bank at 10% compound interest, compounded annually. He paid 3 annual installments of Rs. 1000 each. What amount does he need to pay in the fourth year in order to disburse the loan?

1. Rs. 11000
2. Rs. 9000
3. Rs. 8000
4. Rs. 10000

**Que. 66** If some books are bought at Rs. 9 each and sold at Rs. 15 each, then what is the profit percentage?

1. 75
2. 120
3. 80
4. 66.67

**Que. 67** What will come in place of question mark '?' in the following question?

$$\left(\frac{3}{4} \times \frac{2}{9}\right) + \left(\frac{8}{5} \div \frac{12}{5}\right) - \left(\frac{2}{3} \times \frac{1}{4}\right) = ?$$

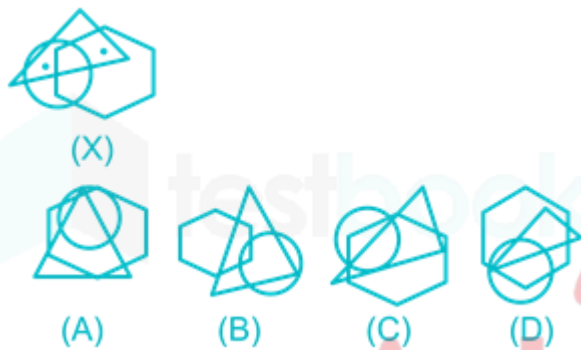
1. 1/4
2. 2/3

3.  $\frac{3}{4}$
4.  $\frac{5}{8}$

**Que. 68** In the first hall, there are 396 children who have 5 marbles each and 225 children who have 7 marbles each. 198 children with 5 marbles each and 225 children with 7 marbles each are taken to the second hall from the first hall. What will be the ratio of the number of marbles in the second hall to that in the first hall?

1. 17 : 12
2. 23 : 11
3. 47 : 19
4. 57 : 22

**Que. 69** From amongst the figures marked (A), (B), (C) and (D), select the figure which satisfies the same conditions of placement of the dots as in figure (X).



1. A
2. C
3. D
4. B

**Que. 70** Which of the following jumbled word is not the name of the book written by Munshi Premchand?

1. ODAGN
2. BANGA
3. SANDAVESA
4. ATHP AK ATHSI

**Que. 71** In the following question, select the related word from the given alternatives.

**Journey : Voyage :: Praise : ?**

1. Conception
2. Induce
3. Compliment
4. Arrogance

**Que. 72** Which answer figure will complete the pattern in the question figure?



- 1.
- 2.
- 3.
- 4.

**Que. 73** Which answer figure will complete the pattern in the question figure?



- 1.
- 2.
- 3.
- 4.

**Que. 74** Which answer figure will complete the pattern in the following question figure?





1.



2.



3.



4.

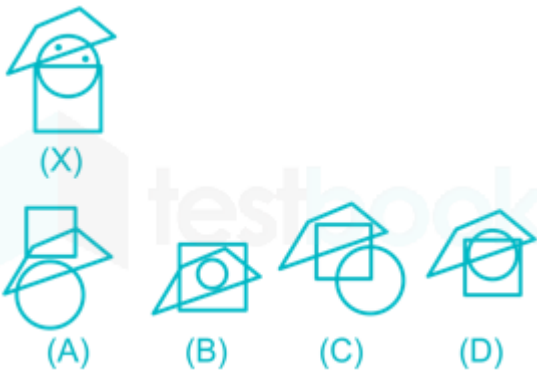


**Que. 75** In the following question, select the related name from the given alternatives

Dog : Bark :: Goat : ?

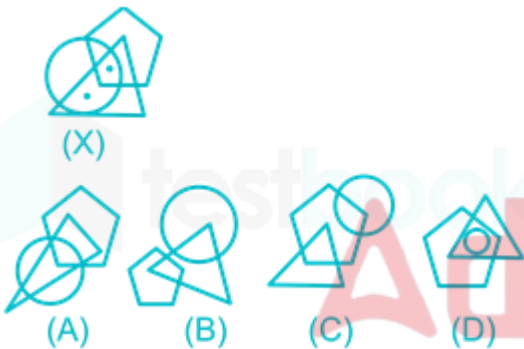
1. Growl
2. Cluck
3. Bawl
4. Bleat

**Que. 76** From amongst the figures marked (A), (B), (C) and (D), select the figure which satisfies the same conditions of placement of the dots as in figure (X).



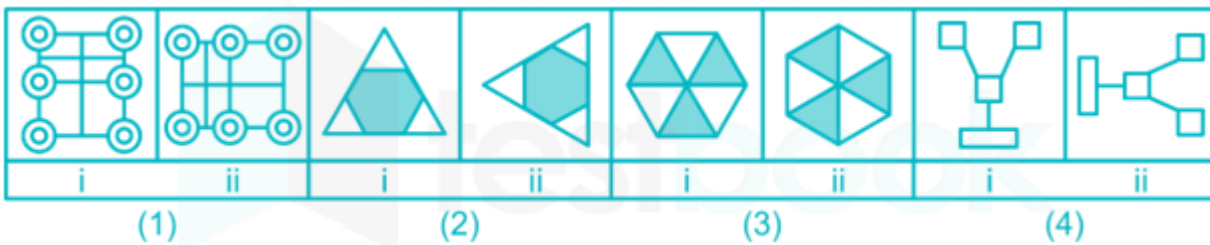
1. B
2. A
3. C
4. D

**Que. 77** From amongst the figures marked (A), (B), (C) and (D), select the figure which satisfies the same conditions of placement of the dots as in figure (X).



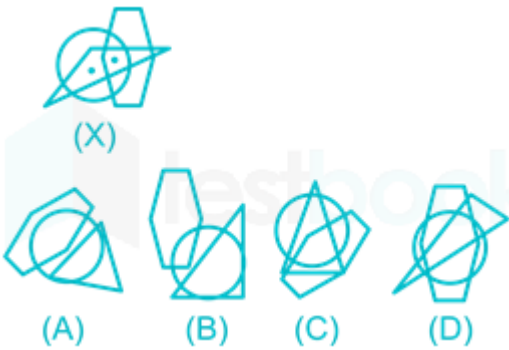
1. D
2. B
3. C
4. A

**Que. 78** In the given question, in three out four figures, figure 1 is related to figure 2 in same particular manner. Spell out the pair in which relationship does not exist between figure 1 and figure 2.



1. 1
2. 2
3. 3
4. 4

**Que. 79** From amongst the figures marked (A), (B), (C) and (D), select the figure which satisfies the same conditions of placement of the dots as in figure (X).



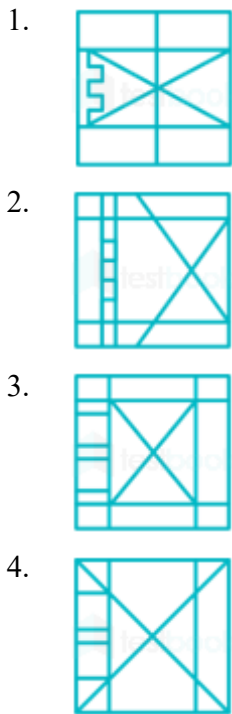
1. C and D both
2. C
3. A
4. D

**Que. 80** Identify the diagram that best represents the relationship among the given classes.  
Father, Uncle, Man

- 1.
- 2.
- 3.
- 4.

**Que. 81** From the given answer figures, select the one in which the question figure is hidden/embedded.





**Que. 82** In the following question choose the appropriate option from the given alternatives.

Bandy : Russia :: Rugby Union : ?

1. New Zealand
2. UK
3. Spain
4. Scotland

**Que. 83** In the following question, select the related word from the given alternatives.

Lethargy : Alertness :: Lazy : ?

1. Industrious
2. Coward
3. Ignorance
4. Unclean

**Que. 84** In a certain code language, A = C, B = D, C = E, and then find the code for "PALACE"?

1. QRYGUW
2. RCHGVM
3. ZGUEVG
4. RCNCEG

**Que. 85** In the following questions, four words have been given out of which three are alike in some manner, while the fourth one is different. Choose the word which is different from the rest.

1. Hour Glass
2. Sundial

3. Schedule
4. Cuckoo Clock

**Que. 86** In the following question, select the odd word from the given alternatives.

1. Inference
2. Indication
3. Conclusion
4. Thesis

**Que. 87** Which of the following jumble word is not the name of a continent?

1. UORPEE
2. ISAA
3. IFRCAA
4. RITACC





**Que. 88** In the following question find out the alternative which will replace the question mark.

Dawn : Pakistan :: The Guardian : ?

1. USA
2. France
3. Germany
4. UK

**Que. 89** Identify the diagram that best represents the relationship among the given classes.





Father, Man, Uncle

1. 
2. 
3. 
4. 

**Que. 90** In a certain code language if 'EXPECTED' is written as 'DPCEXETE' then how is 'PRACTICE' written in the same code language?

1. EATCRCIP
2. EATCCRIP
3. ATPCEIR
4. ATECRPI

**Que. 91** Identify the diagram that best represents the relationship among the given classes.  
Thief, Worker, Human being

1. 
2. 
3. 
4. 







**Que. 92** In the following question, select the odd word from the given alternatives.

1. Camera
2. Refrigerator
3. Microscope
4. Telescope

**Que. 93** From the given answer figures, select the one in which the question figure is hidden/embedded?







1. 
2. 
3. 
4. 

**Que. 94** In the following question, select the odd word from the given alternatives.

1. Observant
2. Vigilant
3. Ignorant
4. Watchful

**Que. 95** Which answer figure will complete the pattern in the question figure?



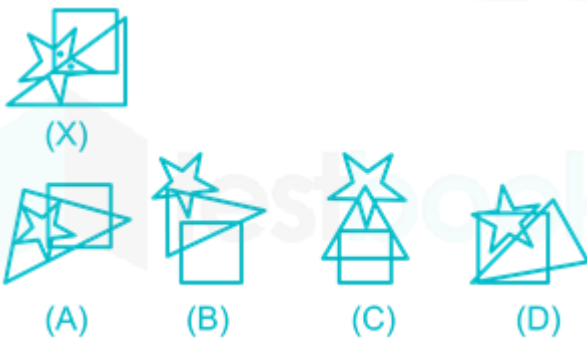
1. 
2. 
3. 
4. 

Que. 96 Which answer figure will complete the pattern in the following question figure?



- 1.
- 2.
- 3.
- 4.

Que. 97 Among the figures marked (A), (B), (C) and (D), select the figure which satisfies the same conditions of placement of the dots as in figure (X).



1. D
2. A
3. C
4. B

Que. 98 Identify the diagram that best represents the relationship among the given classes.  
Singer, Musician, Woman





**Que. 99** In the following question, select the related word from the given alternatives.

Genial : Cordial :: Acquiesce : ?

1. Mysterious
2. Accept
3. Forbid
4. Popular

**Que. 100** In the following question, select the odd word from the given alternatives.

1. Lizard
2. Snake
3. Whale
4. Crocodile

100 Questions

---

<b>Que. 1</b>	Correct Option - 1
---------------	--------------------

<b>Que. 2</b>	Correct Option - 4
---------------	--------------------

<b>Que. 3</b>	Correct Option - 1
---------------	--------------------

<b>Que. 4</b>	Correct Option - 2
---------------	--------------------

<b>Que. 5</b>	Correct Option - 3
---------------	--------------------

<b>Que. 6</b>	Correct Option - 1
---------------	--------------------

<b>Que. 7</b>	Correct Option - 2
---------------	--------------------

<b>Que. 8</b>	Correct Option - 4
---------------	--------------------

<b>Que. 9</b>	Correct Option - 3
---------------	--------------------

<b>Que. 10</b>	Correct Option - 1
----------------	--------------------

<b>Que. 11</b>	Correct Option - 4
----------------	--------------------

<b>Que. 12</b>	Correct Option - 4
----------------	--------------------

<b>Que. 13</b>	Correct Option - 1
----------------	--------------------

<b>Que. 14</b>	Correct Option - 1
----------------	--------------------

<b>Que. 15</b>	Correct Option - 1
----------------	--------------------

<b>Que. 16</b>	Correct Option - 3
----------------	--------------------

<b>Que. 17</b>	Correct Option - 2
----------------	--------------------

<b>Que. 18</b>	Correct Option - 1
----------------	--------------------

<b>Que. 19</b>	Correct Option - 1
----------------	--------------------

<b>Que. 20</b>	Correct Option - 3
----------------	--------------------

<b>Que. 21</b>	Correct Option - 4
----------------	--------------------

<b>Que. 22</b>	Correct Option - 2
----------------	--------------------

<b>Que. 23</b>	Correct Option - 4
----------------	--------------------

<b>Que. 24</b>	Correct Option - 2
----------------	--------------------

<b>Que. 25</b>	Correct Option - 1
----------------	--------------------



Que. 26	Correct Option - 2
---------	--------------------

Que. 27	Correct Option - 1
---------	--------------------

Que. 28	Correct Option - 3
---------	--------------------

Que. 29	Correct Option - 1
---------	--------------------

Que. 30	Correct Option - 2
---------	--------------------

Que. 31	Correct Option - 2
---------	--------------------

Que. 32	Correct Option - 2
---------	--------------------

Que. 33	Correct Option - 1
---------	--------------------

Que. 34	Correct Option - 2
---------	--------------------

Que. 35	Correct Option - 3
---------	--------------------

Que. 36	Correct Option - 4
---------	--------------------

Que. 37	Correct Option - 4
---------	--------------------

Que. 38	Correct Option - 4
---------	--------------------

Que. 39	Correct Option - 4
---------	--------------------

Que. 40	Correct Option - 4
---------	--------------------

Que. 41	Correct Option - 3
---------	--------------------

Que. 42	Correct Option - 3
---------	--------------------

Que. 43	Correct Option - 1
---------	--------------------

Que. 44	Correct Option - 1
---------	--------------------

Que. 45	Correct Option - 1
---------	--------------------

Que. 46	Correct Option - 3
---------	--------------------

Que. 47	Correct Option - 2
---------	--------------------

Que. 48	Correct Option - 1
---------	--------------------

Que. 49	Correct Option - 1
---------	--------------------

Que. 50	Correct Option - 1
---------	--------------------

Que. 51	Correct Option - 2
---------	--------------------



Que. 52	Correct Option - 1
---------	--------------------

Que. 53	Correct Option - 1
---------	--------------------

Que. 54	Correct Option - 1
---------	--------------------

Que. 55	Correct Option - 3
---------	--------------------

Que. 56	Correct Option - 2
---------	--------------------

Que. 57	Correct Option - 4
---------	--------------------

Que. 58	Correct Option - 1
---------	--------------------

Que. 59	Correct Option - 2
---------	--------------------

Que. 60	Correct Option - 3
---------	--------------------

Que. 61	Correct Option - 3
---------	--------------------

Que. 62	Correct Option - 3
---------	--------------------

Que. 63	Correct Option - 1
---------	--------------------

Que. 64	Correct Option - 3
---------	--------------------

Que. 65	Correct Option - 1
---------	--------------------

Que. 66	Correct Option - 4
---------	--------------------

Que. 67	Correct Option - 2
---------	--------------------

Que. 68	Correct Option - 4
---------	--------------------

Que. 69	Correct Option - 4
---------	--------------------

Que. 70	Correct Option - 4
---------	--------------------

Que. 71	Correct Option - 3
---------	--------------------

Que. 72	Correct Option - 1
---------	--------------------

Que. 73	Correct Option - 1
---------	--------------------

Que. 74	Correct Option - 1
---------	--------------------

Que. 75	Correct Option - 4
---------	--------------------

Que. 76	Correct Option - 2
---------	--------------------

Que. 77	Correct Option - 4
---------	--------------------

Que. 78	
---------	--



---

---

Correct Option - 4

---

---

**Que. 79** Correct Option - 1

---

---

**Que. 80** Correct Option - 1

---

---

**Que. 81** Correct Option - 2

---

---

**Que. 82** Correct Option - 1

---

---

**Que. 83** Correct Option - 1

---

---

**Que. 84** Correct Option - 4

---

---

**Que. 85** Correct Option - 3

---

---

**Que. 86** Correct Option - 2

---

---

**Que. 87** Correct Option - 4

---

---

**Que. 88** Correct Option - 4

---

---

**Que. 89** Correct Option - 3

---

---

**Que. 90** Correct Option - 1

---

---

**Que. 91** Correct Option - 4

---

---

**Que. 92** Correct Option - 2

---

---

**Que. 93** Correct Option - 3

---

---

**Que. 94** Correct Option - 3

---

---

**Que. 95** Correct Option - 4

---

---

**Que. 96** Correct Option - 3

---

---

**Que. 97** Correct Option - 1

---

---

**Que. 98** Correct Option - 2

---

---

**Que. 99** Correct Option - 2

---

---

**Que. 100** Correct Option - 3

---

---

