

114 Which of the following is an example of actinomorphic flower?

- (1) *Cassia* (2) *Pisum*
 (3) *Sesbania* (4) *Datura*

115 Identify the type of flowers based on the position of calyx, corolla and androecium with respect to the ovary from the given figures (a) and (b)



- (1) (a) Hypogynous; (b) Epigynous
 (2) (a) Perigynous; (b) Epigynous
 (3) (a) Perigynous; (b) Perigynous
 (4) (a) Epigynous; (b) Hypogynous

116 Match List I with List II

List I

- A. Nucleolus
 B. Centriole
 C. Leucoplasts
 D. Golgi apparatus

List II

- I. Site of formation of glycolipid
 II. Organization like the cartwheel
 III. Site for active ribosomal RNA synthesis
 IV. For storing nutrients

Choose the correct answer from the options given below:

- (1) A-II, B-III, C-I, D-IV
 (2) A-III, B-IV, C-II, D-I
 (3) A-I, B-II, C-III, D-IV
 (4) A-III, B-II, C-IV, D-I

117 What is the fate of a piece of DNA carrying only gene of interest which is transferred into an alien organism?

- A. The piece of DNA would be able to multiply itself independently in the progeny cells of the organism.
 B. It may get integrated into the genome of the recipient.
 C. It may multiply and be inherited along with the host DNA.
 D. The alien piece of DNA is not an integral part of chromosome.
 E. It shows ability to replicate.

Choose the correct answer from the options given below:

- (1) D and E only
 (2) B and C only
 (3) A and E only
 (4) A and B only

118 Hind II always cuts DNA molecules at a particular point called recognition sequence and it consists of:

- (1) 6 bp (2) 4 bp
 (3) 10 bp (4) 8 bp

119 The cofactor of the enzyme carboxypeptidase is:

- (1) Niacin (2) Flavin
 (3) Haem (4) Zinc

120 Which of the following are required for the dark reaction of photosynthesis?

- A. Light
 B. Chlorophyll
 C. CO₂
 D. ATP
 E. NADPH

Choose the correct answer from the options given below:

- (1) B, C and D only
 (2) C, D and E only
 (3) D and E only
 (4) A, B and C only

220-3x165

22/11/2023

208/37/230

329.50 x 10^2 / 10^3

Botany : Section-A (Q. No. 101 to 135)

97 The rate of a reaction quadruples when temperature changes from 27°C to 57°C. Calculate the energy of activation.

Given $R = 8.314 \text{ J K}^{-1} \text{ mol}^{-1}$, $\log 4 = 0.6021$

- (1) 380.4 kJ/mol
- (2) 3.80 kJ/mol
- (3) 3804 kJ/mol
- (4) 38.04 kJ/mol

$\log \frac{r_2}{r_1} = \frac{E_a}{2.303R} \left[\frac{T_2 - T_1}{T_1 T_2} \right]$
 $\log 4 = \frac{E_a \times 2}{2.303 \times 25 \times 330} \times \frac{330 - 27}{330 \times 27}$
 $2 \times 2.303 \times 25 \times 330 \times \frac{102}{330 \times 27} = E_a$
 $2.303 \times 50 \times 390 = E_a$

98 During the preparation of Mohr's salt solution (Ferrous ammonium sulphate), which of the following acid is added to prevent hydrolysis of Fe^{2+} ion?

- (1) concentrated sulphuric acid
- (2) dilute nitric acid
- (3) dilute sulphuric acid
- (4) dilute hydrochloric acid

99 The plot of osmotic pressure (Π) vs concentration (mol L^{-1}) for a solution gives a straight line with slope $25.73 \text{ L bar mol}^{-1}$. The temperature at which the osmotic pressure measurement is done is:

(Use $R = 0.083 \text{ L bar mol}^{-1} \text{ K}^{-1}$)

- (1) 310°C
- (2) 25.73°C
- (3) 12.05°C
- (4) 37°C

$R T = 25.73$
 $T = \frac{25.73 \times 10}{0.083}$
 $= 310 \text{ K}$
 $= 310 - 273$
 $= 37^\circ \text{C}$

100 Identify the correct answer.

- (1) BF_3 has non-zero dipole moment. ~~X~~
- (2) Dipole moment of NF_3 is greater than that of NH_3 . ~~X~~
- (3) Three canonical forms can be drawn for CO_3^{2-} ion.
- (4) Three resonance structures can be drawn for ozone.

101 A transcription unit in DNA is defined primarily by the three regions in DNA and these are with respect to upstream and down stream end;

- (1) Structural gene, Transposons, Operator gene
- (2) Inducer, Repressor, Structural gene
- (3) Promotor, Structural gene, Terminator
- (4) Repressor, Operator gene, Structural gene

Identify the set of correct statements:

- A. The flowers of *Vallisneria* are colourful and produce nectar. ~~X~~
- B. The flowers of waterlily are not pollinated by water.
- C. In most of water-pollinated species, the pollen grains are protected from wetting.
- D. Pollen grains of some hydrophytes are long and ribbon like.
- E. In some hydrophytes, the pollen grains are carried passively inside water.

Choose the correct answer from the options given below:

- (1) A, B, C and D only
- (2) A, C, D and E only
- (3) B, C, D and E only
- (4) C, D and E only

103 Lecithin, a small molecular weight organic compound found in living tissues, is an example of:

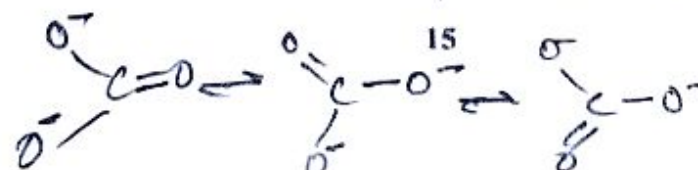
- (1) Phospholipids
- (2) Glycerides
- (3) Carbohydrates
- (4) Amino acids

104 These are regarded as major causes of biodiversity loss:

- A. Over exploitation
- B. Co-extinction
- C. Mutation
- D. Habitat loss and fragmentation
- E. Migration

Choose the correct option:

- (1) A, B, C and D only
- (2) A, B and E only
- (3) A, B and D only
- (4) A, C and D only



12 Match List I with List II

List I

- A. Robert May
 B. Alexander von Humboldt
 C. Paul Ehrlich
 D. David Tilman

List II

- I. Species-Area relationship
 II. Long term ecosystem experiment using out door plots
 III. Global species diversity at about 7 million
 IV. Rivet popper hypothesis

Choose the correct answer from the options given below:

- (1) A-III, B-I, C-IV, D-II
 (2) A-I, B-III, C-II, D-IV ✗
 (3) A-III, B-IV, C-II, D-I
 (4) A-II, B-III, C-I, D-IV ✗

13 Identify the correct description about the given figure:



- (1) Water pollinated flowers showing stamens with mucilaginous covering.
 (2) Cleistogamous flowers showing autogamy.
 (3) Compact inflorescence showing complete autogamy.
 (4) Wind pollinated plant inflorescence showing flowers with well exposed stamens.

144 In an ecosystem if the Net Primary Productivity (NPP) of first trophic level is

$100x \text{ (kcal m}^{-2}\text{) yr}^{-1}$, what would be the GPP (Gross Primary Productivity) of the third trophic level of the same ecosystem?

- (1) $x \text{ (kcal m}^{-2}\text{) yr}^{-1}$
 (2) $10x \text{ (kcal m}^{-2}\text{) yr}^{-1}$
 (3) $\frac{100x}{3x} \text{ (kcal m}^{-2}\text{) yr}^{-1}$
 (4) $\frac{x}{10} \text{ (kcal m}^{-2}\text{) yr}^{-1}$

145 Match List I with List II

List I

- A. Rose
 B. Pea
 C. Cotton
 D. Mango

List II

- I. Twisted aestivation
 II. Perigynous flower
 III. Drupe
 IV. Marginal placentation

Choose the correct answer from the options given below:

- (1) A-I, B-II, C-III, D-IV
 (2) A-IV, B-III, C-II, D-I
 (3) A-II, B-III, C-IV, D-I
 (4) A-II, B-IV, C-I, D-III

146 Match List I with List II

List I

(Types of Stamens)

- A. Monoadelphous
 B. Diadelphous
 C. Polyadelphous
 D. Epiphyllous

List II

(Example)

- I. Citrus
 II. Pea
 III. Lily
 IV. China-rose

Choose the correct answer from the options given below:

- (1) A-IV, B-I, C-II, D-III ✗
 (2) A-I, B-II, C-IV, D-III
 (3) A-III, B-I, C-IV, D-II ✗
 (4) A-IV, B-II, C-I, D-III

180 Given below are two statements :

Statement I : In the nephron, the descending limb of loop of Henle is impermeable to water and permeable to electrolytes. ✗

Statement II : The proximal convoluted tubule is lined by simple columnar brush border epithelium and increases the surface area for reabsorption. ✗

In the light of the above statements, choose the correct answer from the options given below :

- (1) Both Statement I and Statement II are false
(2) Statement I is true but Statement II is false
(3) Statement I is false but Statement II is true
(4) Both Statement I and Statement II are true

181 Given below are two statements : one is labelled as Assertion A and the other is labelled as Reason R :

Assertion A : Breast-feeding during initial period of infant growth is recommended by doctors for bringing a healthy baby. ✓

Reason R : Colostrum contains several antibodies absolutely essential to develop resistance for the new born baby.

In the light of the above statements, choose the most appropriate answer from the options given below :

- (1) Both A and R are correct but R is NOT the correct explanation of A.
(2) A is correct but R is not correct.
(3) A is not correct but R is correct.
(4) Both A and R are correct and R is the correct explanation of A.

182 Following are the stages of pathway for conduction of an action potential through the heart:

- A. AV bundle
B. Purkinje fibres ✓
C. AV node
D. Bundle branches
E. SA node

Choose the correct sequence of pathway from the options given below :

- (1) A-E-C-B-D (2) B-D-E-C-A
(3) E-A-D-B-C (4) E-C-A-D-B ✓

183 Which one is the correct product of DNA dependent RNA polymerase to the given template?

3' TACATGGCAAATATCCATTCAS' ^{GUA}

- (1) 5' AUGUAAAAGUUUUAUAGGUAAGU3' ✗
(2) 5' AUGUACCGUUUUAUAGGGAAGU3' ✗
(3) 5' ATGTACCGTTTATAGGTAAGT3' ✗
(4) 5' AUGUACCGUUUUAUAGGUAAGU3' ✓

184 Match List I with List II :

- | List I | List II |
|--|--------------------|
| A. α -1 antitrypsin replacement therapy | I. Cotton bollworm |
| B. Cry IAb | II. ADA deficiency |
| C. Cry IAc | III. Emphysema |
| D. Enzyme replacement therapy | IV. Corn borer |

Choose the correct answer from the options given below :

- (1) A-III, B-I, C-II, D-IV
(2) A-III, B-IV, C-I, D-II ✓
(3) A-II, B-IV, C-I, D-III ✗
(4) A-II, B-I, C-IV, D-III ✗

185 The "Ti plasmid" of *Agrobacterium tumefaciens* stands for

- (1) Tumor independent plasmid
(2) Tumor inducing plasmid ✓
(3) Temperature independent plasmid
(4) Tumour inhibiting plasmid

147 Which of the following are fused in somatic hybridization involving two varieties of plants?

- (1) Somatic embryos
- (2) Protoplasts
- (3) Pollens
- (4) Callus

148 Match List I with List II

List I

- A. Frederick Griffith
- B. Francois Jacob & Jacques Monod
- C. Har Gobind Khorana
- D. Meselson & Stahl

List II

- I. Genetic code
- II. Semi-conservative mode of DNA replication
- III. Transformation
- IV. Lac operon

Choose the correct answer from the options given below:

- (1) A-III, B-IV, C-I, D-II
- (2) A-II, B-III, C-IV, D-I
- (3) A-IV, B-I, C-II, D-III
- (4) A-III, B-II, C-I, D-IV

149 The DNA present in chloroplast is:

- (1) Circular, double stranded
- (2) Linear, single stranded
- (3) Circular, single stranded
- (4) Linear, double stranded

150 Match List I with List II

List I

- A. Citric acid cycle
- B. Glycolysis
- C. Electron transport system
- D. Proton gradient

List II

- I. Cytoplasm
- II. Mitochondrial matrix
- III. Intermembrane space of mitochondria
- IV. Inner mitochondrial membrane

Choose the correct answer from the options given below:

- (1) A-II, B-I, C-IV, D-III
- (2) A-III, B-IV, C-I, D-II
- (3) A-IV, B-III, C-II, D-I
- (4) A-I, B-II, C-III, D-IV

151 Which of the following is not a natural/traditional contraceptive method?

- (1) Periodic abstinence
- (2) Lactational amenorrhea
- (3) Vaults
- (4) Coitus interruptus

152 Match List I with List II:

List I

- A. Common cold
- B. Haemozoin
- C. Widal test
- D. Allergy

List II

- I. Plasmodium
- II. Typhoid
- III. Rhinoviruses
- IV. Dust mites

Choose the correct answer from the options given below:

- (1) A-I, B-III, C-II, D-IV
- (2) A-III, B-I, C-II, D-IV
- (3) A-IV, B-II, C-III, D-I
- (4) A-II, B-IV, C-III, D-I

153 Which of the following statements is incorrect?

- (1) Most commonly used bio-reactors are of stirring type.
- (2) Bio-reactors are used to produce small scale bacterial cultures.
- (3) Bio-reactors have an agitator system, an oxygen delivery system and foam control system.
- (4) A bio-reactor provides optimal growth conditions for achieving the desired product.

154 Which of the following are Autoimmune disorders?

- A. Myasthenia gravis
- B. Rheumatoid arthritis
- C. Gout
- D. Muscular dystrophy
- E. Systemic Lupus Erythematosus (SLE)

Choose the most appropriate answer from the options given below:

- (1) A, B & E only
- (2) B, C & E only
- (3) C, D & E only
- (4) A, B & D only

55 Which reaction is **NOT** a redox reaction?

- (1) $2 \text{KClO}_3 + \text{I}_2 \rightarrow 2 \text{KIO}_3 + \text{Cl}_2$
 (2) $\text{H}_2 + \text{Cl}_2 \rightarrow 2 \text{HCl}$
 (3) $\text{BaCl}_2 + \text{Na}_2\text{SO}_4 \rightarrow \text{BaSO}_4 + 2 \text{NaCl}$
 (4) $\text{Zn} + \text{CuSO}_4 \rightarrow \text{ZnSO}_4 + \text{Cu}$

56 Match List I with List II.

List I (Molecule)	List II (Number and types of bond/s between two carbon atoms)
A. ethane 	I. one σ -bond and two π -bonds
B. ethene $\text{C}=\text{C}$	II. two π -bonds
C. carbon molecule, C_2	III. one σ -bond
D. ethyne $\text{C}\equiv\text{C}$	IV. one σ -bond and one π -bond

Choose the correct answer from the options given below:

- (1) A-IV, B-III, C-II, D-I
 (2) A-III, B-IV, C-II, D-I
 (3) A-III, B-IV, C-I, D-II
 (4) A-I, B-IV, C-II, D-III

57 Match List I with List II.

List I (Complex)	List II (Type of isomerism)
A. $[\text{Co}(\text{NH}_3)_5(\text{NO}_2)]\text{Cl}_2$	I. Solvate isomerism
B. $[\text{Co}(\text{NH}_3)_5(\text{SO}_4)]\text{Br}$	II. Linkage isomerism
C. $[\text{Co}(\text{NH}_3)_6][\text{Cr}(\text{CN})_6]$	III. Ionization isomerism
D. $[\text{Co}(\text{H}_2\text{O})_6]\text{Cl}_3$	IV. Coordination isomerism

Choose the correct answer from the options given below:

- (1) A-I, B-III, C-IV, D-II
 (2) A-I, B-IV, C-III, D-II
 (3) A-II, B-IV, C-III, D-I
 (4) A-II, B-III, C-IV, D-I

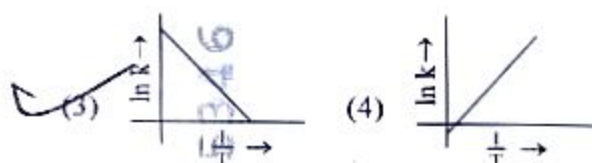
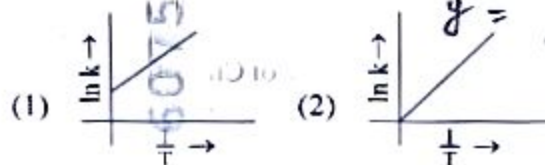
58 The E° value for the $\text{Mn}^{3+}/\text{Mn}^{2+}$ couple is more positive than that of $\text{Cr}^{3+}/\text{Cr}^{2+}$ or $\text{Fe}^{3+}/\text{Fe}^{2+}$ due to change of

- (1) d^5 to d^2 configuration
 (2) d^4 to d^5 configuration
 (3) d^3 to d^5 configuration
 (4) d^5 to d^3 configuration

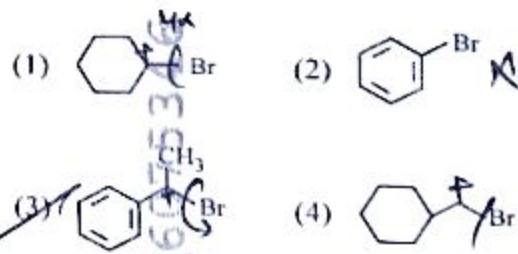
59 The highest number of helium atoms is in

- (1) 4 u of helium
 (2) 4 g of helium
 (3) 2.271098 L of helium at STP
 (4) 4 mol of helium

60 Which plot of $\ln k$ vs $\frac{1}{T}$ is consistent with Arrhenius equation?



61 The compound that will undergo $\text{S}_\text{N}1$ reaction with the fastest rate is



Botany : Section-B (Q. No. 136 to 150)

136 Spraying sugarcane crop with which of the following plant growth regulators, increases the length of stem, thus, increasing the yield?

- (1) Gibberellin
- (2) Cytokinin
- (3) Abscisic acid
- (4) Auxin

137 Given below are two statements:

Statement I : In C_3 plants, some O_2 binds to RuBisCO, hence CO_2 fixation is decreased.

Statement II : In C_4 plants, mesophyll cells show very little photorespiration while bundle sheath cells do not show photorespiration.

In the light of the above statements, choose the correct answer from the options given below:

- (1) Both Statement I and Statement II are false
- (2) Statement I is true but Statement II is false
- (3) Statement I is false but Statement II is true
- (4) Both Statement I and Statement II are true

138 Match List I with List II

List I

- A. GLUT-4
- B. Insulin
- C. Trypsin
- D. Collagen

List II

- I. Hormone
- II. Enzyme
- III. Intercellular ground substance
- IV. Enables glucose transport into cells

Choose the correct answer from the options given below:

- (1) A-I, B-II, C-III, D-IV
- (2) A-II, B-III, C-IV, D-I
- (3) A-III, B-IV, C-I, D-II
- (4) A-IV, B-I, C-II, D-III

139 Read the following statements and choose the set of correct statements:

In the members of Phaeophyceae,

- A. Asexual reproduction occurs usually by biflagellate zoospores.
- B. Sexual reproduction is by oogamous method only.
- C. Stored food is in the form of carbohydrates which is either mannitol or laminarin.
- D. The major pigments found are chlorophyll a, c and carotenoids and xanthophyll.
- E. Vegetative cells have a cellulosic wall, usually covered on the outside by gelatinous coating of algin.

Choose the correct answer from the options given below:

- (1) B, C, D and E only
- (2) A, C, D and E only
- (3) A, B, C and E only
- (4) A, B, C and D only

140 Which of the following statement is correct regarding the process of replication in *E.coli*?

- (1) The DNA dependent RNA polymerase catalyses polymerization in one direction, that is $5' \rightarrow 3'$.
- (2) The DNA dependent DNA polymerase catalyses polymerization in $5' \rightarrow 3'$ as well as $3' \rightarrow 5'$ direction.
- (3) The DNA dependent DNA polymerase catalyses polymerization in $5' \rightarrow 3'$ direction.
- (4) The DNA dependent DNA polymerase catalyses polymerization in one direction that is $3' \rightarrow 5'$.

141 Identify the step in tricarboxylic acid cycle, which does not involve oxidation of substrate.

- (1) Succinic acid \rightarrow Malic acid
- (2) Succinyl-CoA \rightarrow Succinic acid
- (3) Isocitrate \rightarrow α -ketoglutaric acid
- (4) Malic acid \rightarrow Oxaloacetic acid

191 Match List I with List II :

List I	List II
A. Unicellular glandular epithelium	I. Salivary glands
B. Compound epithelium	II. Pancreas
C. Multicellular glandular epithelium	III. <u>Goblet cells of alimentary canal</u>
D. Endocrine glandular epithelium	IV. Moist surface of buccal cavity

Choose the correct answer from the options given below :

- (1) A-IV, B-III, C-I, D-II
- (2) ~~A-III, B-IV, C-I, D-II~~
- (3) A-II, B-I, C-IV, D-III
- (4) A-II, B-I, C-III, D-IV

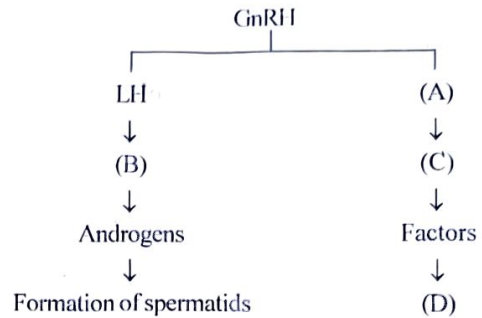
192 Match List I with List II :

List I	List II
A. RNA polymerase III	I. snRNPs
B. Termination of transcription	II. Promotor
C. Splicing of Exons	III. Rho factor
D. TATA box	IV. SnRNAs, tRNA

Choose the correct answer from the options given below :

- (1) A-III, B-II, C-IV, D-I
- (2) A-III, B-IV, C-I, D-II
- (3) ~~A-IV, B-III, C-I, D-II~~
- (4) A-II, B-IV, C-I, D-III

193 Identify the correct option (A), (B), (C), (D) with respect to spermatogenesis.



- (1) ICSH, Interstitial cells, Leydig cells, spermiogenesis.
- (2) FSH, Sertoli cells, Leydig cells, spermatogenesis.
- (3) ICSH, Leydig cells, Sertoli cells, spermatogenesis.
- (4) FSH, Leydig cells, Sertoli cells, spermiogenesis

194 Regarding catalytic cycle of an enzyme action, select the correct sequential steps :

- A. Substrate enzyme complex formation.
- B. Free enzyme ready to bind with another substrate.
- C. Release of products.
- D. Chemical bonds of the substrate broken.
- E. Substrate binding to active site.

Choose the correct answer from the options given below :

- (1) A, E, B, D, C
- (2) B, A, C, D, E
- (3) E, D, C, B, A
- (4) E, A, D, C, B

195 The following are the statements about non-chordates :

- A. Pharynx is perforated by gill slits. ✗
- B. Notochord is absent. ✓
- C. Central nervous system is dorsal.
- D. Heart is dorsal if present. ✓
- E. Post anal tail is absent. ✓

Choose the most appropriate answer from the options given below :

- (1) A, B & D only
- (2) ~~B, D & E only~~
- (3) B, C & D only
- (4) A & C only

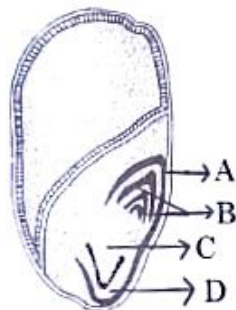
Which one of the following can be explained on the basis of Mendel's Law of Dominance?

- A. Out of one pair of factors one is dominant and the other is recessive. ✓
- B. Alleles do not show any expression and both the characters appear as such in F_2 generation. ✗
- C. Factors occur in pairs in normal diploid plants. ✓
- D. The discrete unit controlling a particular character is called factor. ✓
- E. The expression of only one of the parental characters is found in a monohybrid cross. ✓

Choose the correct answer from the options given below:

- ✓ (1) A, C, D and E only
- (2) B, C and D only
- (3) A, B, C, D and E
- (4) A, B and C only

31 Identify the part of the seed from the given figure which is destined to form root when the seed germinates.



- (1) B
- ✓ (2) C
- ✓ (3) D
- (4) A

32 Auxin is used by gardeners to prepare weed-free lawns. But no damage is caused to grass as auxin

- (1) promotes abscission of mature leaves only.
- ✓ (2) does not affect mature monocotyledonous plants.
- (3) can help in cell division in grasses, to produce growth.
- (4) promotes apical dominance.

133 Given below are two statements:

Statement I : Chromosomes become gradually visible under light microscope during leptotene stage. ✗

Statement II : The beginning of diplotene stage is recognized by dissolution of synaptonemal complex. ✓

In the light of the above statements, choose the correct answer from the options given below:

- (1) Both Statement I and Statement II are false
- (2) Statement I is true but Statement II is false
- ✓ (3) Statement I is false but Statement II is true
- (4) Both Statement I and Statement II are true

134 The capacity to generate a whole plant from any cell of the plant is called:

- (1) Micropropagation
- (2) Differentiation ✗
- (3) Somatic hybridization ✗
- ✓ (4) Totipotency

135 Given below are two statements:

Statement I : Parenchyma is living but collenchyma is dead tissue. ✗

Statement II : Gymnosperms lack xylem vessels but presence of xylem vessels is the characteristic of angiosperms. ✓

In the light of the above statements, choose the correct answer from the options given below:

- (1) Both Statement I and Statement II are false
- (2) Statement I is true but Statement II is false
- ✓ (3) Statement I is false but Statement II is true
- (4) Both Statement I and Statement II are true

121 The type of conservation in which the threatened species are taken out from their natural habitat and placed in special setting where they can be protected and given special care is called:

- (1) Biodiversity conservation
 (2) Semi-conservative method
 (3) Sustainable development
 (4) *in-situ* conservation ✗

122 Match List I with List II

- | List I | | List II |
|--|---|----------------|
| A. Two or more alternative forms of a gene | } | I. Back cross |
| B. Cross of F_1 progeny with homozygous recessive parent | | II. Ploidy |
| C. Cross of F_1 progeny with any of the parents | | III. Allele |
| D. Number of chromosome sets in plant | | IV. Test cross |

Choose the correct answer from the options given below:


- (1) A-II, B-I, C-III, D-IV
 (2) A-III, B-IV, C-I, D-II
 (3) A-IV, B-III, C-II, D-I
 (4) A-I, B-II, C-III, D-IV

123 Formation of interfascicular cambium from fully developed parenchyma cells is an example for

- (1) Redifferentiation
 (2) Dedifferentiation
 (3) Maturation
 (4) Differentiation

124 Spindle fibers attach to kinetochores of chromosomes during

- (1) Metaphase
 (2) Anaphase ✗
 (3) Telophase ✗
 (4) Prophase ✗



125 In a plant, black seed color (BB/Bb) is dominant over white seed color (bb). In order to find out the genotype of the black seed plant, with which of the following genotype will you cross it?

- (1) bb
 (2) Bb
 (3) BB/Bb
 (4) BB

126 A pink flowered Snapdragon plant was crossed with a red flowered Snapdragon plant. What type of phenotype/s is/are expected in the progeny?

- (1) Red flowered as well as pink flowered plants
 (2) Only pink flowered plants
 (3) Red, Pink as well as white flowered plants
 (4) Only red flowered plants

127 Inhibition of Succinic dehydrogenase enzyme by malonate is a classical example of:

- (1) Feedback inhibition
 (2) Competitive inhibition
 (3) Enzyme activation
 (4) Cofactor inhibition

128 Given below are two statements:

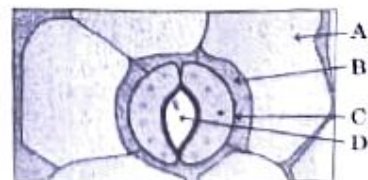
Statement I : Bt toxins are insect group specific and coded by a gene *cry* IAc. ✓

Statement II : Bt toxin exists as inactive protoxin in *B. thuringiensis*. However, after ingestion by the insect the inactive protoxin gets converted into active form due to acidic pH of the insect gut. ✗

In the light of the above statements, choose the correct answer from the options given below:

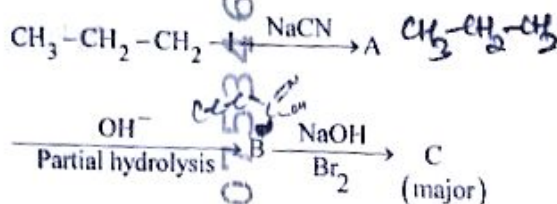
- (1) Both Statement I and Statement II are false
 (2) Statement I is true but Statement II is false
 (3) Statement I is false but Statement II is true
 (4) Both Statement I and Statement II are true

129 In the given figure, which component has thin outer walls and highly thickened inner walls?



- (1) D
 (2) A
 (3) B
 (4) C

90 Identify the major product C formed in the following reaction sequence :

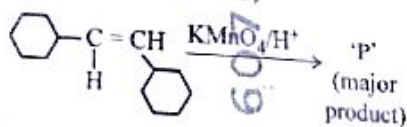


- (1) butylamine
- (2) butanamide
- (3) α -bromobutanoic acid
- (4) propylamine

91 The pair of lanthanoid ions which are diamagnetic is

- (1) Ce^{3+} and Eu^{2+} Ce^{4+} Yb^{2+} Lu^{3+}
- (2) Gd^{3+} and Eu^{3+}
- (3) Pm^{3+} and Sm^{3+}
- (4) Ce^{4+} and Yb^{2+}

92 For the given reaction:



'P' is

- (1)
- (2)
- (3)
- (4)

93 A compound X contains 32% of A, 20% of B and remaining percentage of C. Then, the empirical formula of X is :

(Given atomic masses of A = 64; B = 40; C = 32 u)

- (1) ABC_3
- (2) AB_2C_2
- (3) ABC_4
- (4) A_2BC_2

94 Given below are certain cations. Using increasing qualitative analysis, arrange them in increasing order of group number from 0 to VI.

- A. Al^{3+} C. Ba^{2+}
 B. Cu^{2+} D. Co^{2+}
 E. Mg^{2+}

Choose the correct answer from the options given below:

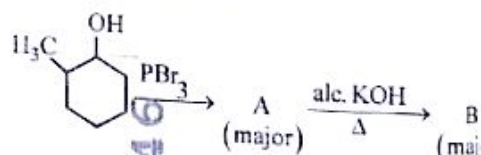
- (1) B, C, A, D, E
- (2) E, C, D, B, A
- (3) E, A, B, C, D
- (4) B, A, D, C, E

95 The work done during reversible isothermal expansion of one mole of hydrogen gas at 25°C from pressure of 20 atmosphere to 10 atmosphere is:

(Given $R = 2.0 \text{ cal K}^{-1} \text{ mol}^{-1}$)

- (1) -413.14 calories
- (2) 413.14 calories
- (3) 100 calories
- (4) 0 calorie

96 Major products A and B formed in the following reaction sequence, are



- (1) A = ; B =
- (2) A = ; B =
- (3) A = ; B =
- (4) A = ; B =

R3 English |

$$\frac{A}{64} = \frac{32}{100} \Rightarrow A = 20$$

$$\frac{B}{40} = \frac{20}{100} \Rightarrow B = 20$$

$$\frac{C}{32} = \frac{48}{100} \Rightarrow C = 48$$

$$\text{Empirical formula} = \frac{20}{20} : \frac{20}{20} : \frac{48}{20} = 1 : 1 : 2.4 = 5 : 5 : 12$$

Zoology : Section-B (Q. No. 186 to 200)

186 Match List I with List II :

- | List I | List II |
|----------------|---|
| A. P wave | I. Heart muscles are electrically silent. |
| B. QRS complex | II. Depolarisation of ventricles. |
| C. T wave | III. Depolarisation of atria. |
| D. T-P gap | IV. Repolarisation of ventricles. |

Choose the correct answer from the options given below :

- (1) A-III, B-II, C-IV, D-I ✓
 (2) A-II, B-III, C-I, D-IV ✗
 (3) A-IV, B-II, C-I, D-III ✗
 (4) A-I, B-III, C-IV, D-II ✗

187 Given below are two statements :

Statement I : Gause's competitive exclusion principle states that two closely related species competing for different resources cannot exist indefinitely. ✗

Statement II : According to Gause's principle, during competition, the inferior will be eliminated. This may be true if resources are limiting. ✓

In the light of the above statements, choose the correct answer from the options given below :

- (1) Both Statement I and Statement II are false.
 (2) Statement I is true but Statement II is false.
 (3) Statement I is false but Statement II is true. ✓
 (4) Both Statement I and Statement II are true.

188 Given below are two statements :

Statement I : Mitochondria and chloroplasts are both double membrane bound organelles. ✓

Statement II : Inner membrane of mitochondria is relatively less permeable, as compared to chloroplast.

In the light of the above statements, choose the most appropriate answer from the options given below :

- (1) Both Statement I and Statement II are incorrect.
 (2) Statement I is correct but Statement II is incorrect.
 (3) Statement I is incorrect but Statement II is correct.
 (4) Both Statement I and Statement II are correct.

189 Choose the correct statement given below regarding juxta medullary nephron.

- (1) Renal corpuscle of juxta medullary nephron lies in the outer portion of the renal medulla.
 (2) Loop of Henle of juxta medullary nephron runs deep into medulla. ✓
 (3) Juxta medullary nephrons outnumber the cortical nephrons. ✗
 (4) Juxta medullary nephrons are located in the columns of Bertini.

190 Match List I with List II :

- | List I | List II |
|------------------------|---|
| A. Exophthalmic goiter | I. Excess secretion of cortisol, moon face & hyperglycemia |
| B. Acromegaly | II. Hypo-secretion of thyroid hormone and stunted growth. |
| C. Cushing's syndrome | III. Hyper secretion of thyroid hormone & protruding eye balls. |
| D. Cretinism | IV. Excessive secretion of growth hormone. |

Choose the correct answer from the options given below :

- (1) A-IV, B-II, C-I, D-III ✗
 (2) A-III, B-IV, C-II, D-I ✗
 (3) A-III, B-IV, C-I, D-II ✓
 (4) A-I, B-III, C-II, D-IV ✗

161 Match List I with List II :

List I

- A. Fibrous joints
- B. Cartilaginous joints
- C. Hinge joints
- D. Ball and socket joints

List II

- I. Adjacent vertebrae, limited movement
- II. Humerus and Pectoral girdle, rotational movement
- III. Skull, don't allow any movement
- IV. Knee, help in locomotion

Choose the correct answer from the options given below :

- (1) A-I, B-III, C-II, D-IV
- (2) A-II, B-III, C-I, D-IV
- (3) A-III, B-I, C-IV, D-II
- (4) A-IV, B-II, C-III, D-I

162 Which of the following is not a steroid hormone?

- (1) Testosterone
- (2) Progesterone
- (3) Glucagon
- (4) Cortisol

163 In both sexes of cockroach, a pair of jointed filamentous structures called anal cerci are present on :

- (1) 10th segment
- (2) 8th and 9th segment
- (3) 11th segment
- (4) 5th segment

164 Given below are two statements : one is labelled as Assertion A and the other is labelled as Reason R :

Assertion A : FSH acts upon ovarian follicles in female and Leydig cells in male. ✗

Reason R : Growing ovarian follicles secrete estrogen in female while interstitial cells secrete androgen in male human being.

In the light of the above statements, choose the correct answer from the options given below :

- (1) Both A and R are true but R is NOT the correct explanation of A.
- (2) A is true but R is false
- (3) A is false but R is true
- (4) Both A and R are true and R is the correct explanation of A.

165 Match List I with List II :

List I

- A. Expiratory capacity
- B. Functional residual capacity
- C. Vital capacity
- D. Inspiratory capacity

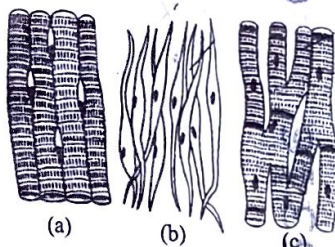
List II

- I. Expiratory reserve volume + Tidal volume + Inspiratory reserve volume
- II. Tidal volume + Expiratory reserve volume
- III. Tidal volume + Inspiratory reserve volume
- IV. Expiratory reserve volume + Residual volume

Choose the correct answer from the options given below :

- (1) A-III, B-II, C-IV, D-I
- (2) A-II, B-I, C-IV, D-III
- (3) A-I, B-III, C-II, D-IV
- (4) A-II, B-IV, C-I, D-III

166 Three types of muscles are given as a, b and c. Identify the correct matching pair along with their location in human body.



Name of muscle/location

- (1) (a) Skeletal - Triceps
- (b) Smooth - Stomach
- (c) Cardiac - Heart.
- (2) (a) Skeletal - Biceps
- (b) Involuntary - Intestine ✗
- (c) Smooth - Heart ✗
- (3) (a) Involuntary - Nose tip ✗
- (b) Skeletal - Bone ✗
- (c) Cardiac - Heart.
- (4) (a) Smooth - Toes ✗
- (b) Skeletal - Legs ✗
- (c) Cardiac - Heart.

196 Match List I with List II related to digestive system of cockroach.

List I	List II
A. The structures used for storing of food.	I. <u>Gizzard</u>
B. Ring of 6-8 blind tubules at junction of foregut and midgut.	II. Gastric Caeca
C. Ring of 100-150 yellow coloured thin filaments at junction of midgut and hindgut.	III. Malpighian tubules
D. The structures used for grinding the food.	IV. Crop

Choose the correct answer from the options given below :

- (1) A-I, B-II, C-III, D-IV ✗
 (2) A-IV, B-III, C-II, D-I ✗
 (3) A-III, B-II, C-IV, D-I ✗
 (4) A-IV, B-II, C-III, D-I

197 Given below are two statements :

Statement I : The cerebral hemispheres are connected by nerve tract known as corpus callosum. ✓

Statement II : The brain stem consists of the medulla oblongata, pons and cerebrum. ✗

In the light of the above statements, choose the most appropriate answer from the options given below :

- (1) Both Statement I and Statement II are incorrect.
 (2) Statement I is correct but Statement II is incorrect.
 (3) Statement I is incorrect but Statement II is correct.
 (4) Both Statement I and Statement II are correct.

198 Match List I with List II :

List I	List II
A. Mesozoic Era	I. Lower invertebrates
B. Proterozoic Era	II. Fish & Amphibia
C. Cenozoic Era	III. Birds & Reptiles
D. Paleozoic Era	IV. Mammals

Choose the correct answer from the options given below :

- (1) A-III, B-I, C-II, D-IV
 (2) A-I, B-II, C-IV, D-III
 (3) A-III, B-I, C-IV, D-II
 (4) A-II, B-I, C-III, D-IV

199 As per ABO blood grouping system, the blood group of father is B⁺, mother is A⁺ and child is O⁺. Their respective genotype can be

- A. I^Bi / I^Ai / ii ✓
 B. I^BI^B / I^AI^A / ii ✗
 C. I^AI^B / ii^A / I^Bi ✗
 D. I^Ai / I^Bi / I^Ai ✗
 E. ii^B / ii^A / I^AI^B ✗

Choose the most appropriate answer from the options given below :

- (1) B only
 (2) C & B only
 (3) D & E only
 (4) A only

200 Given below are two statements :

Statement I : Bone marrow is the main lymphoid organ where all blood cells including lymphocytes are produced.

Statement II : Both bone marrow and thymus provide micro environments for the development and maturation of T-lymphocytes.

In the light of the above statements, choose the most appropriate answer from the options given below :

- (1) Both Statement I and Statement II are incorrect.
 (2) Statement I is correct but Statement II is incorrect.
 (3) Statement I is incorrect but Statement II is correct.
 (4) Both Statement I and Statement II are correct.

167 Match List I with List II :

List I	List II
A. Lipase	I. Peptide bond
B. Nuclease	II. Ester bond
C. Protease	III. Glycosidic bond
D. Amylase	IV. Phosphodiester bond

Choose the correct answer from the options given below :

- (1) A-III, B-II, C-I, D-IV
(2) A-II, B-IV, C-I, D-III
(3) A-IV, B-I, C-III, D-II
(4) A-IV, B-II, C-III, D-I

168 The flippers of the Penguins and Dolphins are the example of the

(1) Natural selection

(2) Convergent evolution

(3) Divergent evolution

(4) Adaptive radiation

169 Following are the stages of cell division :

A. Gap 2 phase 3

B. Cytokinesis 5

C. Synthesis phase 2

D. Karyokinesis 4

E. Gap 1 phase 1

Choose the correct sequence of stages from the options given below :

(1) E-B-D-A-C (2) B-D-E-A-C

(3) E-C-A-D-B (4) C-E-D-A-B

170 Which one of the following factors will not affect the Hardy-Weinberg equilibrium?

(1) Genetic drift

(2) Gene migration

(3) Constant gene pool

(4) Genetic recombination

171 Given below are two statements :

Statement I : The presence or absence of hymen is not a reliable indicator of virginity. ✓

Statement II : The hymen is torn during the first coitus only. ✗

In the light of the above statements, choose the correct answer from the options given below :

(1) Both Statement I and Statement II are false

(2) Statement I is true but Statement II is false

(3) Statement I is false but Statement II is true

(4) Both Statement I and Statement II are true

172 Match List I with List II :

List I	List II
A. Typhoid	I. Fungus
B. Leishmaniasis	II. Nematode
C. Ringworm	III. Protozoa
D. Filariasis	IV. Bacteria

Choose the correct answer from the options given below :

(1) A-IV, B-III, C-I, D-II

(2) A-III, B-I, C-IV, D-II

(3) A-II, B-IV, C-III, D-I

(4) A-I, B-III, C-II, D-IV

173 Given below are some stages of human evolution. Arrange them in correct sequence. (Past to Recent)

A. *Homo habilis* 1

B. *Homo sapiens* 4

C. *Homo neanderthalensis* 3

D. *Homo erectus* 2

Choose the correct sequence of human evolution from the options given below :

(1) B-A-D-C (2) C-B-D-A

(3) A-D-C-B (4) D-A-C-B

174 Which of the following is not a component of Fallopian tube?

(1) Isthmus (2) Infundibulum

(3) Ampulla (4) Uterine fundus

175 Consider the following statements :

- A. Annelids are true coelomates ✓
- B. Poriferans are pseudocoelomates ✗
- C. Aschelminthes are acoelomates ✗
- D. Platyhelminthes are pseudocoelomates ✗

Choose the correct answer from the options given below :

- (1) A only
- (2) C only
- (3) D only
- (4) B only

176 Match List I with List II :

- | List I | List II |
|----------------------|------------------------|
| A. Axoneme | I. Centriole |
| B. Cartwheel pattern | II. Cilia and flagella |
| C. Crista | III. Chromosome |
| D. Satellite | IV. Mitochondria |

Choose the correct answer from the options given below :

- (1) A-IV, B-II, C-III, D-I ✗
- (2) A-II, B-IV, C-I, D-III
- (3) A-II, B-I, C-IV, D-III ✓
- (4) A-IV, B-III, C-II, D-I ✗

177 Match List I with List II :

- | List I | List II |
|------------------------|-----------------|
| A. <i>Pterophyllum</i> | I. Hag fish |
| B. <i>Myxine</i> | II. Saw fish |
| C. <i>Pristis</i> | III. Angel fish |
| D. <i>Exocoetus</i> | IV. Flying fish |

Choose the correct answer from the options given below :

- (1) A-III, B-I, C-II, D-IV ✓
- (2) A-IV, B-I, C-II, D-III ✗
- (3) A-III, B-II, C-I, D-IV
- (4) A-II, B-I, C-III, D-IV

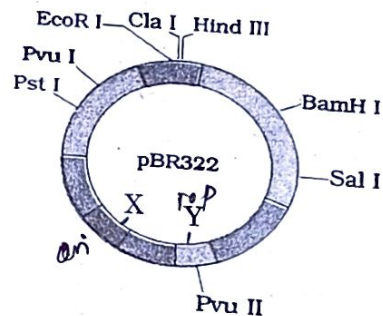
178 Match List I with List II :

- | List I | List II |
|-----------------|--|
| A. Pons | I. Provides additional space for Neurons, regulates posture and balance. |
| B. Hypothalamus | II. Controls respiration and gastric secretions. |
| C. Medulla | III. <u>Connects different regions of the brain</u> |
| D. Cerebellum | IV. Neuro secretory cells |

Choose the correct answer from the options given below :

- (1) A-III, B-IV, C-II, D-I
- (2) A-I, B-III, C-II, D-IV
- (3) A-II, B-I, C-III, D-IV ✗
- (4) A-II, B-III, C-I, D-IV ✗

179 The following diagram showing restriction sites in *E. coli* cloning vector pBR322. Find the role of 'X' and 'Y' genes :



- (1) The gene 'X' is responsible for controlling the copy number of the linked DNA and 'Y' for protein involved in the replication of Plasmid.
- (2) The gene 'X' is for protein involved in replication of Plasmid and 'Y' for resistance to antibiotics. ✗
- (3) Gene 'X' is responsible for recognition sites and 'Y' is responsible for antibiotic resistance. ✗
- (4) The gene 'X' is responsible for resistance to antibiotics and 'Y' for protein involved in the replication of Plasmid. ✓

62 Match List I with List II.

List I

Quantum Number

- A. m_l
B. m_s
C. l
D. n

List II

Information provided

- I. shape of orbital
II. size of orbital
III. orientation of orbital
IV. orientation of spin of electron

Choose the correct answer from the options given below:

- (1) ~~K-II, B-IV, C-I, D-II~~
(2) A-III, B-IV, C-II, D-I \times
(3) A-II, B-I, C-IV, D-III \times
(4) A-I, B-III, C-II, D-IV \times

63 The Henry's law constant (K_H) values of three gases (A, B, C) in water are $145, 2 \times 10^{-5}$ and 35 kbar, respectively. The solubility of these gases in water follow the order:

- (1) ~~B > C > A~~
(2) A > C > B
(3) A > B > C
(4) B > A > C

64 In which of the following processes entropy increases?

- A. A liquid evaporates to vapour. \checkmark
B. Temperature of a crystalline solid lowered from 130 K to 0 K. \times
C. $2 \text{NaHCO}_3(s) \rightarrow \text{Na}_2\text{CO}_3(s) + \text{CO}_2(g) + \text{H}_2\text{O}(g)$ \checkmark
D. $\text{Cl}_2(g) \rightarrow 2 \text{Cl}(g)$ \checkmark
Choose the correct answer from the options given below:
(1) A, B and D
(2) A, C and D
(3) C and D
(4) A and C

65 Given below are two statements:

Statement I : Aniline does not undergo Friedel-Crafts alkylation reaction. \checkmark

Statement II : Aniline cannot be prepared through Gabriel synthesis. \checkmark

In the light of the above statements, choose the correct answer from the options given below:

- (1) Both Statement I and Statement II are false.
(2) Statement I is correct but Statement II is false.
(3) Statement I is incorrect but Statement II is true.
(4) Both Statement I and Statement II are true.

R3_English]

66 Fehling's solution 'A' is

- (1) alkaline copper sulphate
(2) \checkmark alkaline solution of sodium potassium tartrate (Rochelle's salt)
(3) aqueous sodium citrate
(4) aqueous copper sulphate

67 Activation energy of any chemical reaction can be calculated if one knows the value of

- (1) probability of collision.
(2) orientation of reactant molecules during collision.
(3) rate constant at two different temperatures.
(4) \checkmark rate constant at standard temperature.

68 Arrange the following elements in increasing order of first ionization enthalpy:

Li, Be, B, C, N
 $2d, 3d, 4d, 5d$
Choose the correct answer from the options given below:

- (1) \checkmark Li < B < Be < C < N
(2) Li < Be < C < B < N
(3) Li < Be < N < B < C
(4) Li < Be < B < C < N


69 NaOH 1 gram of sodium hydroxide was treated with

25 mL of 0.75 M HCl solution, the mass of sodium hydroxide left unreacted is equal to $\frac{\text{NaOH} + \text{HCl}}{40}$

- (1) \checkmark 250 mg
(2) Zero mg
(3) 200 mg
(4) 750 mg

70 A compound with a molecular formula of C_6H_{14} has two tertiary carbons. Its IUPAC name is:

- (1) 2-methylpentane
(2) \checkmark 2,3-dimethylbutane
(3) 2,2-dimethylbutane
(4) n-hexane



10

MA 0 4
SS 16 J

4b

Contd...

$\frac{4 \pm H}{V} = \frac{3}{4000}$
 $\frac{4 \pm H}{V} = \frac{3}{4000}$
 $\frac{4 \pm H}{V} = \frac{3}{4000}$

155 Match List I with List II :

- | List I | List II |
|---------------------------|----------------------------------|
| A. Down's syndrome | I. 11 th chromosome |
| B. α -Thalassemia | II. 'X' chromosome |
| C. β -Thalassemia | III. 21 st chromosome |
| D. Klinefelter's syndrome | IV. 16 th chromosome |

Choose the correct answer from the options given below :

- (1) A-II, B-III, C-IV, D-I
 (2) A-III, B-IV, C-I, D-II
 (3) A-IV, B-I, C-II, D-III
 (4) A-I, B-II, C-III, D-IV

156 Match List I with List II :

- | List I | List II |
|--------------------------|------------------|
| A. Non-medicated IUD | I. Multiload 375 |
| B. Copper releasing IUD | II. Progestogens |
| C. Hormone releasing IUD | III. Lippes loop |
| D. Implants | IV. LNG-20 |

Choose the correct answer from the options given below :

- (1) A-I, B-III, C-IV, D-II ✗
 (2) A-IV, B-I, C-II, D-III ✗
 (3) A-III, B-I, C-IV, D-II
 (4) A-III, B-I, C-II, D-IV

157 Match List I with List II :

- | List I | List II |
|------------------|-------------------|
| A. Pleurobrachia | I. Mollusca |
| B. Radula | II. Ctenophora |
| C. Stomochord | III. Osteichthyes |
| D. Air bladder | IV. Hemichordata |

Choose the correct answer from the options given below :

- (1) A-II, B-I, C-IV, D-III
 (2) A-II, B-IV, C-I, D-III
 (3) A-IV, B-III, C-II, D-I ✗
 (4) A-IV, B-II, C-III, D-I ✗

158 Which of the following factors are favourable for the formation of oxyhaemoglobin in alveoli?

- (1) High pO_2 and Lesser H^+ concentration
 (2) Low pCO_2 and High H^+ concentration
 (3) Low pCO_2 and High temperature
 (4) High pO_2 and High pCO_2

159 Match List I with List II :

- | List I | List II |
|--------------|----------------------------------|
| A. Cocaine | I. Effective sedative in surgery |
| B. Heroin | II. <i>Cannabis sativa</i> |
| C. Morphine | III. <i>Erythroxylum</i> |
| D. Marijuana | IV. <i>Papaver somniferum</i> |

Choose the correct answer from the options given below :

- (1) A-I, B-III, C-II, D-IV ✗
 (2) A-II, B-I, C-III, D-IV ✗
 (3) A-III, B-IV, C-I, D-II
 (4) A-IV, B-III, C-I, D-II

160 Match List I with List II :

- | List I
(Sub Phases of Prophase I) | List II
(Specific characters) |
|--------------------------------------|--|
| A. Diakinesis | I. Synaptonemal complex formation |
| B. Pachytene | II. Completion of terminalisation of chiasmata |
| C. Zygotene | III. Chromosomes look like thin threads |
| D. Leptotene | IV. Appearance of recombination nodules |

Choose the correct answer from the options given below :

- (1) A-I, B-II, C-IV, D-III
 (2) A-II, B-IV, C-I, D-III
 (3) A-IV, B-III, C-II, D-I
 (4) A-IV, B-II, C-III, D-I

71

Given below are two statements:

Statement I : The boiling point of three isomeric pentanes follows the order

n-pentane > isopentane > neopentane

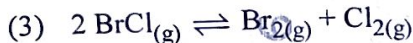
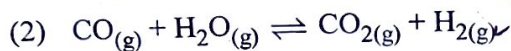
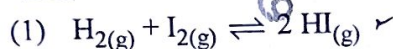
Statement II : When branching increases, the molecule attains a shape of sphere. This results in smaller surface area for contact, due to which the intermolecular forces between the spherical molecules are weak, thereby lowering the boiling point.

In the light of the above statements, choose the most appropriate answer from the options given below:

- (1) Both Statement I and Statement II are incorrect.
- (2) Statement I is correct but Statement II is incorrect.
- (3) Statement I is incorrect but Statement II is correct.
- (4) Both Statement I and Statement II are correct.

72

In which of the following equilibria, K_p and K_c are **NOT** equal?



73

The reagents with which glucose does **not** react to give the corresponding tests/products are

A. Tollen's reagent

B. Schiff's reagent

C. HCN

D. NH_2OH

E. NaHSO_3

Choose the correct options from the given below:

(1) A and D

(2) B and E

(3) E and D

(4) B and C

74

Match List I with List II.

List I
(Compound)

A. NH_3

B. BrF_5

C. XeF_4

D. SF_6

List II

(Shape/geometry)

I. Trigonal Pyramidal

II. Square Planar

III. Octahedral

IV. Square Pyramidal

Choose the correct answer from the options given below:

(1) A-II, B-IV, C-III, D-I

(2) A-III, B-IV, C-I, D-II

(3) A-II, B-III, C-IV, D-I

(4) A-I, B-IV, C-II, D-III

75

Among Group 16 elements, which one does **NOT** show -2 oxidation state?

(1) Se

(2) Te

(3) Po

(4) O

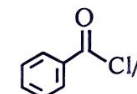
76

Match List I with List II.

List I (Reaction)



List II (Reagents/Condition)

I.  / Anhyd. AlCl_3

II. CrO_3

III. KMnO_4 / KOH , Δ

IV. (i) O_3

(ii) $\text{Zn-H}_2\text{O}$

Choose the correct answer from the options given below:

(1) A-III, B-I, C-II, D-IV

(2) A-IV, B-I, C-II, D-III

(3) A-I, B-IV, C-II, D-III

(4) A-IV, B-I, C-III, D-II

11

33 A logic circuit provides the output Y as per the following truth table :

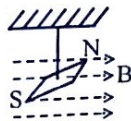
A	B	Y
0	0	1
0	1	0
1	0	1
1	1	0

The expression for the output Y is :

- ~~(1) $A \cdot B + \bar{A}$~~ ~~(2) $\bar{A} \cdot B$~~
 (3) B (4) $A \cdot B + \bar{A}$

34 In a uniform magnetic field of 0.049 T, a magnetic needle performs 20 complete oscillations in 5 seconds as shown. The moment of inertia of the needle is 9.8×10^{-6} kg m². If the magnitude of magnetic moment of the needle is $x \times 10^{-5}$ Am²; then the value of 'x' is :

$\omega = \frac{2\pi n}{t}$
 $\omega = \frac{2\pi \times 20}{5}$
 $\omega = 8\pi$
 $B = 0.049$



- (1) $128 \pi^2$ (2) $50 \pi^2$
 (3) $1280 \pi^2$ (4) $5 \pi^2$

35 A bob is whirled in a horizontal plane by means of a string with an initial speed of ω rpm. The tension in the string is T . If speed becomes 2ω while keeping the same radius, the tension in the string becomes :

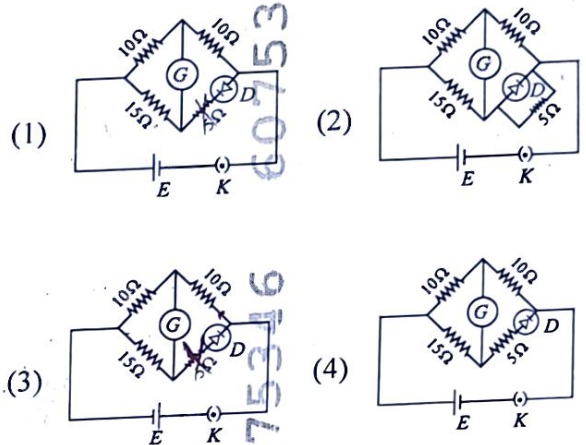
- (1) $4T$ (2) $\frac{T}{4}$
 (3) $\sqrt{2}T$ (4) T

$\omega = \frac{2\pi n}{t}$
 $\omega \propto v$
 $T = 4T$

36 A metallic bar of Young's modulus, 0.5×10^{11} N m⁻² and coefficient of linear thermal expansion 10^{-5} °C⁻¹, length 1 m and area of cross-section 10^{-3} m² is heated from 0°C to 100°C without expansion or bending. The compressive force developed in it is:

- (1) 50×10^3 N (2) 100×10^3 N
 (3) 2×10^3 N (4) 5×10^3 N

37 Choose the correct circuit which can achieve the bridge balance.



38 A small telescope has an objective of focal length 140 cm and an eye piece of focal length 5.0 cm. The magnifying power of telescope for viewing a distant object is:

- (1) 28 (2) 17
 (3) 32 (4) 34

$\frac{f_o}{f_e} = \frac{140}{5} = 28$

39 An iron bar of length L has magnetic moment M . It is bent at the middle of its length such that the two arms make an angle 60° with each other. The magnetic moment of this new magnet is:

- (1) $\frac{M}{2}$ (2) $2M$
 (3) $\frac{M}{\sqrt{3}}$ (4) M

$M = ml$

$M = ml \sin 30^\circ$
 $M = \frac{ml}{2}$

C N O F
9 13

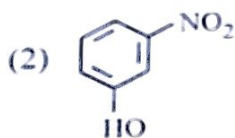
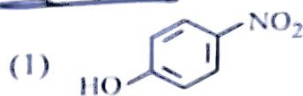
77 Arrange the following elements in increasing order of electronegativity:

N, O, F, C, Si

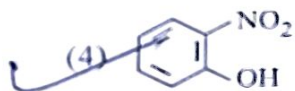
Choose the correct answer from the options given below:

- (1) $Si < C < O < N < F$
 (2) $O < F < N < C < Si$
 (3) $F < O < N < C < Si$
 (4) $Si < C < N < O < F$

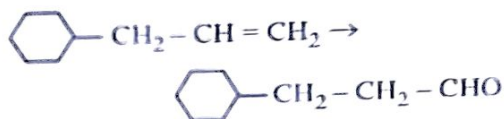
78 Intramolecular hydrogen bonding is present in



(3) HF



79 Identify the correct reagents that would bring about the following transformation.



- (1) (i) BH_3
 (ii) H_2O_2 / OH^-
 (iii) PCC
 (2) (i) BH_3
 (ii) H_2O_2 / OH^-
 (iii) alk. $KMnO_4$
 (iv) H_3O^+

- (3) (i) H_2O / H^+
 (ii) PCC
 (4) (i) H_2O / H^+
 (ii) CrO_3

80 Match List I with List II.

List I
(Conversion)

List II
(Number of Faraday required)

- A. 1 mol of H_2O to O_2 I. 3F
 B. 1 mol of MnO_4^- to Mn^{2+} II. 2F
 C. 1.5 mol of Ca from molten $CaCl_2$ III. 1F
 D. 1 mol of FeO to Fe_2O_3 IV. 5F

Choose the correct answer from the options given below:

- (1) A-III, B-IV, C-I, D-II
 (2) A-II, B-III, C-I, D-IV
 (3) A-III, B-IV, C-II, D-I
 (4) A-II, B-IV, C-I, D-III

81 Given below are two statements:

Statement I : The boiling point of hydrides of Group 16 elements follow the order $H_2O > H_2Te > H_2Se > H_2S$.

Statement II : On the basis of molecular mass, H_2O is expected to have lower boiling point than the other members of the group but due to the presence of extensive H-bonding in H_2O , it has higher boiling point.

In the light of the above statements, choose the correct answer from the options given below:

- (1) Both Statement I and Statement II are false.
 (2) Statement I is true but Statement II is false.
 (3) Statement I is false but Statement II is true.
 (4) Both Statement I and Statement II are true.

82 Given below are two statements:

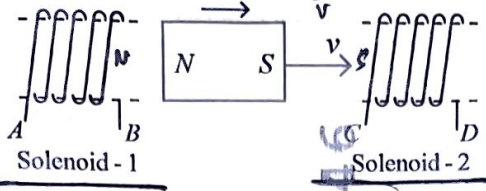
Statement I : Both $[Co(NH_3)_6]^{3+}$ and $[CoF_6]^{3-}$ complexes are octahedral but differ in their magnetic behaviour.

Statement II : $[Co(NH_3)_6]^{3+}$ is diamagnetic whereas $[CoF_6]^{3-}$ is paramagnetic.

In the light of the above statements, choose the correct answer from the options given below:

- (1) Both Statement I and Statement II are false.
 (2) Statement I is true but Statement II is false.
 (3) Statement I is false but Statement II is true.
 (4) Both Statement I and Statement II are true.

10



In the above diagram, a strong bar magnet is moving towards solenoid-2 from solenoid-1. The direction of induced current in solenoid-1 and that in solenoid-2, respectively, are through the directions:

- (1) BA and CD (2) AB and CD
 (3) BA and DC (4) AB and DC

11 Two bodies A and B of same mass undergo completely inelastic one dimensional collision. The body A moves with velocity v_1 while body B is at rest before collision. The velocity of the system after collision is v_2 . The ratio $v_1 : v_2$ is:

- (1) 2:1 (2) 4:1 (3) 1:4 (4) 1:2

12 Given below are two statements: one is labelled as Assertion A and the other is labelled as Reason R.

Assertion A: The potential (V) at any axial point, at 2 m distance (r) from the centre of the dipole of dipole moment vector \vec{P} of magnitude, $4 \times 10^{-6} \text{ C m}$, is $\pm 9 \times 10^3 \text{ V}$.

(Take $\frac{1}{4\pi\epsilon_0} = 9 \times 10^9 \text{ SI units}$)

Reason R: $V = \pm \frac{2P}{4\pi\epsilon_0 r^2}$, where r is the

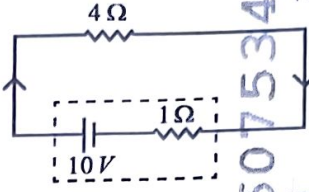
distance of any axial point, situated at 2 m from the centre of the dipole.

In the light of the above statements, choose the correct answer from the options given below:

- (1) Both A and R are true and R is NOT the correct explanation of A.
 (2) A is true but R is false.
 (3) A is false but R is true.
 (4) Both A and R are true and R is the correct explanation of A.

13

The terminal voltage of the battery, whose emf is 10V and internal resistance 1Ω , when connected through an external resistance of 4Ω as shown in the figure is:



- (1) 6V (2) 8V
 (3) 10V (4) 4V

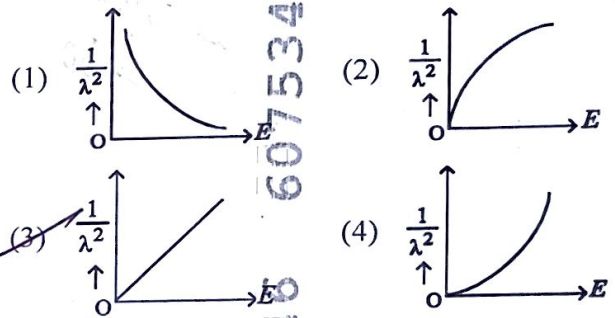
14

A particle moving with uniform speed in a circular path maintains:

- (1) constant acceleration.
 (2) constant velocity but varying acceleration.
 (3) varying velocity and varying acceleration.
 (4) constant velocity.

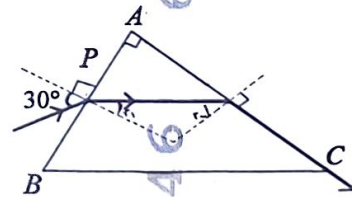
The graph which shows the variation of $\left(\frac{1}{\lambda^2}\right)$

and its kinetic energy, E is (where λ is de Broglie wavelength of a free particle):



A light ray enters through a right angled prism at point P with the angle of incidence 30° as shown in figure. It travels through the prism parallel to its base BC and emerges along the face AC. The refractive index of the prism is:

- (1) $\frac{\sqrt{5}}{2}$ (2) $\frac{\sqrt{3}}{4}$
 (3) $\frac{\sqrt{3}}{2}$ (4) $\frac{\sqrt{5}}{4}$



$\mu_1 \sin i = \mu_2 \sin r$
 $\mu \frac{1}{2} = \mu_2 \sin 60$
 $\frac{1}{2} = \mu_2 \frac{\sqrt{3}}{2}$
 $\mu_2 = \frac{1}{\sqrt{3}}$

$M L^2 T^{-2} = F$ $B = M L^2 T^{-3}$
 $\propto (M L^2 T^{-4})$

Chemistry : Section-A (Q. No. 51 to 85)

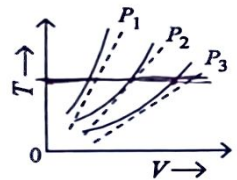
47 A force defined by $F = \alpha t^2 + \beta t$ acts on a particle at a given time t . The factor which is dimensionless, if α and β are constants, is:

- (1) α/β (2) $\alpha\beta t$
 (3) $\alpha\beta/t$ (4) β/α

48 If the plates of a parallel plate capacitor connected to a battery are moved close to each other, then
 A. the charge stored in it, increases. ✓
 B. the energy stored in it, decreases. ✗
 C. its capacitance increases. ✓
 D. the ratio of charge to its potential remains the same. ✗
 E. the product of charge and voltage increases. ✓
 Choose the most appropriate answer from the options given below:

- (1) A, C and E only ✓
 (2) B, D and E only
 (3) A, B and C only
 (4) A, B and E only

49 The following graph represents the T-V curves of an ideal gas (where T is the temperature and V the volume) at three pressures P_1, P_2 and P_3 compared with those of Charles's law represented as dotted lines.



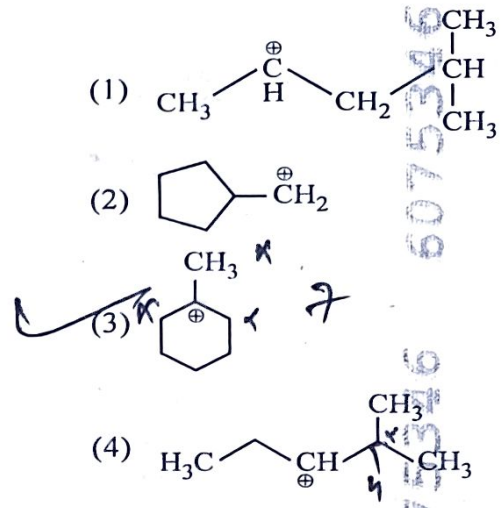
Then the correct relation is:

- (1) $P_1 > P_3 > P_2$ (2) $P_2 > P_1 > P_3$
 (3) $P_1 > P_2 > P_3$ ✓ (4) $P_3 > P_2 > P_1$

50 The minimum energy required to launch a satellite of mass m from the surface of earth of mass M and radius R in a circular orbit at an altitude of $2R$ from the surface of the earth is:

- (1) $\frac{2GmM}{3R}$ (2) $\frac{GmM}{2R}$
 (3) $\frac{GmM}{3R}$ ✓ (4) $\frac{5GmM}{6R}$

51 The most stable carbocation among the following is:



52 For the reaction $2A \rightleftharpoons B + C$, $K_c = 4 \times 10^{-3}$. At a given time, the composition of reaction mixture is: $[A] = [B] = [C] = 2 \times 10^{-3} M$. Then, which of the following is correct?

- (1) Reaction has a tendency to go in forward direction.
 (2) Reaction has a tendency to go in backward direction. ✓
 (3) Reaction has gone to completion in forward direction.
 (4) Reaction is at equilibrium.

53 'Spin only' magnetic moment is same for which of the following ions?

- A. Ti^{3+} $n = 1$ B. Cr^{2+} $n = 4$
 C. Mn^{2+} $n = 5$ D. Fe^{2+} $n = 4$
 E. Sc^{3+} $n = 0$

Choose the most appropriate answer from the options given below:

- (1) A and E only (2) B and C only
 (3) A and D only (4) B and D only ✓

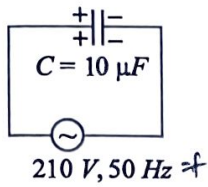
54 The energy of an electron in the ground state ($n = 1$) for He^+ ion is $-x$ J, then that for an electron in $n = 2$ state for Be^{3+} ion in J is:

- (1) $-\frac{x}{9}$ (2) $-4x$
 (3) $-\frac{4}{9}x$ (4) $-x$ ✓

$\frac{GMm}{2} \left(\frac{1}{r_1} - \frac{1}{r_2} \right)$ so Ti $U, 8 Cr$ Mn Fe Co Ni Cu Zn
 $d^1 d^2 d^3 d^4 d^5 d^6 d^7 d^8 d^9 d^{10}$
 $\frac{3-1}{2} = \frac{2}{2} \times \frac{GMm}{2R}$

$$I_{rms} = \frac{V_0}{\sqrt{2}}$$

- 40 A 10 μF capacitor is connected to a 210 V, 50 Hz source as shown in figure. The peak current in the circuit is nearly ($\pi = 3.14$):



$$I_{rms} = \frac{210}{\sqrt{2}}$$

$$= \frac{210 \times 2\pi f C}{1}$$

$$I_0 = 210 \times 2 \times 3.14 \times 50 \times 10^{-6} \times 2$$

$$= 210 \times 2 \times 3.14 \times 5 \times 10^{-3} \times 4$$

$$= 210 \times 3.14 \times 1.4$$

$$= 921 \times 1.4$$

$$= 66 \times 1.4$$

- (1) 0.93 A
(2) 1.20 A
(3) 0.35 A
(4) 0.58 A

- 41 Two heaters A and B have power rating of 1 kW and 2 kW, respectively. Those two are first connected in series and then in parallel to a fixed power source. The ratio of power outputs for these two cases is:

- (1) 2 : 9
(2) 1 : 2
(3) 2 : 3
(4) 1 : 1

- 42 If the mass of the bob in a simple pendulum is increased to thrice its original mass and its length is made half its original length, then the new time

period of oscillation is $\frac{x}{2}$ times its original time period. Then the value of x is:

- (1) $\sqrt{2}$
(2) $2\sqrt{3}$
(3) 4
(4) $\sqrt{3}$

- 43 The property which is not of an electromagnetic wave travelling in free space is that :

- (1) the energy density in electric field is equal to energy density in magnetic field.
(2) they travel with a speed equal to $\frac{1}{\sqrt{\mu_0 \epsilon_0}}$.
(3) they originate from charges moving with uniform speed.
(4) they are transverse in nature.

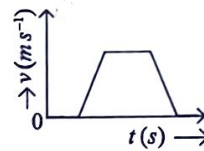
- 44 A sheet is placed on a horizontal surface in front of a strong magnetic pole. A force is needed to :

- A. hold the sheet there if it is magnetic.
B. hold the sheet there if it is non-magnetic.
C. move the sheet away from the pole with uniform velocity if it is conducting.
D. move the sheet away from the pole with uniform velocity if it is both, non-conducting and non-polar.

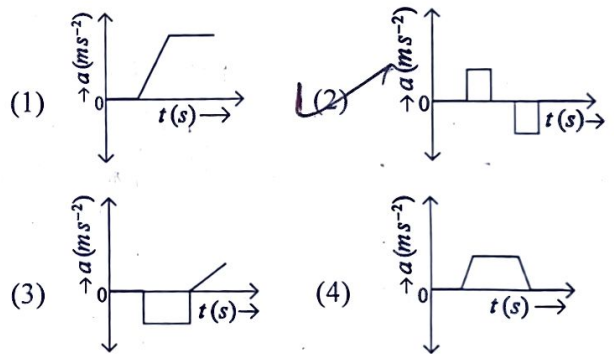
Choose the correct statement(s) from the options given below:

- (1) A and C only
(2) A, C and D only
(3) C only
(4) B and D only

- 45 The velocity (v) – time (t) plot of the motion of a body is shown below :



The acceleration (a) – time (t) graph that best suits this motion is :



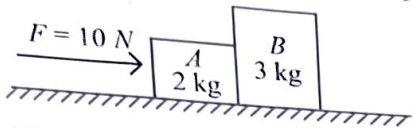
- 46 A parallel plate capacitor is charged by connecting it to a battery through a resistor. If I is the current in the circuit, then in the gap between the plates :

- (1) displacement current of magnitude equal to I flows in the same direction as I.
(2) displacement current of magnitude equal to I flows in a direction opposite to that of I.
(3) displacement current of magnitude greater than I flows but can be in any direction.
(4) there is no current.



25 A horizontal force 10 N is applied to a block A as shown in figure. The mass of blocks A and B are 2 kg and 3 kg, respectively. The blocks slide over a frictionless surface. The force exerted by block A on block B is :

$$a = \frac{F}{5} = 2 \text{ m/s}^2$$



- (1) 4 N
- (2) 6 N
- (3) 10 N
- (4) zero

26 The quantities which have the same dimensions as those of solid angle are :

- (1) stress and angle
- (2) strain and arc
- (3) angular speed and stress $\frac{F}{A}$
- (4) strain and angle

27 The moment of inertia of a thin rod about an axis passing through its mid point and perpendicular to the rod is 2400 g cm². The length of the 400 g rod is nearly :

- (1) 17.5 cm
- (2) 20.7 cm
- (3) 72.0 cm
- (4) 8.5 cm

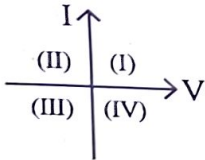
$$\frac{ML^2}{12} = 2400$$

$$\frac{400 \times L^2}{12} = 2400$$

$$L^2 = \frac{2400 \times 12}{400} = 72$$

$$L = \sqrt{72}$$

28 Consider the following statements A and B and identify the correct answer :



- A. For a solar-cell, the I-V characteristics lies in the IV quadrant of the given graph.
 - B. In a reverse biased pn junction diode, the current measured in (μA), is due to majority charge carriers.
- (1) A is incorrect but B is correct.
 - (2) Both A and B are correct.
 - (3) Both A and B are incorrect.
 - (4) A is correct but B is incorrect.

29 A wire of length 'l' and resistance 100 Ω is divided into 10 equal parts. The first 5 parts are connected in series while the next 5 parts are connected in parallel. The two combinations are again connected in series. The resistance of this final combination is:

- (1) 52 Ω
- (2) 55 Ω
- (3) 60 Ω
- (4) 26 Ω

30 If $x = 5 \sin\left(\pi t + \frac{\pi}{3}\right) \text{ m}$ represents the motion of a particle executing simple harmonic motion, the amplitude and time period of motion, respectively, are :

- (1) 5 m, 2 s
- (2) 5 cm, 1 s
- (3) 5 m, 1 s
- (4) 5 cm, 2 s

31 If c is the velocity of light in free space, the correct statements about photon among the following are :

- A. The energy of a photon is $E = hv$.
- B. The velocity of a photon is c.
- C. The momentum of a photon, $p = \frac{hv}{c}$.
- D. In a photon-electron collision, both total energy and total momentum are conserved.
- E. Photon possesses positive charge.

Choose the correct answer from the options given below :

- (1) A, B, C and D only
- (2) A, C and D only
- (3) A, B, D and E only
- (4) A and B only

32 Match List I with List II.

List I (Spectral Lines of Hydrogen for transitions from)	List II (Wavelengths (nm))
A. $n_2 = 3$ to $n_1 = 2$	I. 410.2
B. $n_2 = 4$ to $n_1 = 2$	II. 434.1
C. $n_2 = 5$ to $n_1 = 2$	III. 656.3
D. $n_2 = 6$ to $n_1 = 2$	IV. 486.1

Choose the correct answer from the options given below :

- (1) A-III, B-IV, C-II, D-I
- (2) A-IV, B-III, C-I, D-II
- (3) A-I, B-II, C-III, D-IV
- (4) A-II, B-I, C-IV, D-III

R3_English]

$$\begin{array}{r} 1232 \\ 236 \\ 218 \\ \hline 3192 \end{array}$$

$$6 \times 12 = 72$$

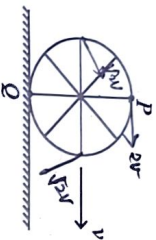
8.4

$$\Delta x = \frac{F \Delta L}{YA}$$

$$= \frac{K \Delta L}{YA}$$

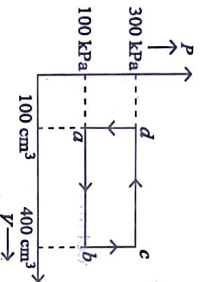
$$\Delta L = \frac{1}{2} F \Delta L$$

- 17 A wheel of a bullock cart is rolling on a level road as shown in the figure below. If its linear speed is v in the direction shown, which one of the following options is correct (P and Q are any highest and lowest points on the wheel, respectively)?



- (1) Point P moves faster than point Q .
 (2) Both the points P and Q move with equal speed.
 (3) Point P has zero speed.
 (4) Point P moves slower than point Q .

- 18 A thermodynamic system is taken through the cycle $abcda$. The work done by the gas along the path bc is :



- (1) 30 J (2) -90 J
 (3) -60 J (4) zero

- 19 In an ideal transformer, the turns ratio is $\frac{N_p}{N_s} = \frac{1}{2}$. The ratio $V_s : V_p$ is equal to (the symbols carry their usual meaning) :
- (1) 2 : 1 (2) 1 : 1
 (3) 1 : 4 (4) 1 : 2

- 20 A thin flat circular disc of radius 4.5 cm is placed gently over the surface of water. If surface tension of water is 0.07 Nm^{-1} , then the excess force required to take it away from the surface is :
- (1) 198 N (2) 1.98 mN
 (3) 99 N (4) 19.8 mN

21

The maximum elongation of a steel wire of 1 m length if the elastic limit of steel and its Young's modulus, respectively, are $8 \times 10^8 \text{ N m}^{-2}$ and $2 \times 10^{11} \text{ N m}^{-2}$, is :

- (1) 0.4 mm (2) 40 mm
 (3) 8 mm (4) 4 mm

- 22 The mass of a planet is $\frac{1}{10}$ th that of the earth and

its diameter is half that of the earth. The acceleration due to gravity on that planet is :

- (1) 9.8 m s^{-2} (2) 4.9 m s^{-2}
 (3) 3.92 m s^{-2} (4) 19.6 m s^{-2}

23

In a vernier calipers, $(N + 1)$ divisions of vernier scale coincide with N divisions of main scale. If 1 MSD represents 0.1 mm, the vernier constant (in cm) is :

- (1) $\frac{1}{100(N+1)}$ (2) 100N

- (3) $10(N+1)$ (4) $\frac{1}{10N}$

24

Given below are two statements :

Statement I : Atoms are electrically neutral as they contain equal number of positive and negative charges.

Statement II : Atoms of each element are stable and emit their characteristic spectrum.

In the light of the above statements, choose the most appropriate answer from the options given below :

- (1) Both Statement I and Statement II are incorrect.
 (2) Statement I is correct but Statement II is incorrect.
 (3) Statement I is incorrect but Statement II is correct.
 (4) Both Statement I and Statement II are correct.

R3_English I

$$T = \frac{E}{v}$$

$$2 \times 6288 \times 4 \times 10^{-7} \times T = 2 \times 2 \times E = F$$

$$0.509 \times 2 \times 3914 \times \frac{455}{100} = F$$

4

I Contd...

Physics : Section-A (Q. No. 1 to 35)

1 At any instant of time t , the displacement of any particle is given by $2t - 1$ (SI unit) under the influence of force of $5N$. The value of instantaneous power is (in SI unit): $P = F \cdot V$

- (1) 5
(2) ~~7~~ 10
(3) 6
(4) ~~10~~ 10

2 If the monochromatic source in Young's double slit experiment is replaced by white light, then

- (1) there will be a central dark fringe surrounded by a few coloured fringes.
(2) there will be a central bright white fringe surrounded by a few coloured fringes.
(3) all bright fringes will be of equal width.
(4) interference pattern will disappear.



In the nuclear emission stated above, the mass number and atomic number of the product Q respectively, are :

- (1) 286, 80
(2) 288, 82
(3) ~~286, 81~~
(4) 280, 81

4 Match List-I with List-II.

List-I

(Material)

- A. Diamagnetic $\chi = 0$
B. Ferromagnetic $\chi > \chi_c \geq -1$
C. Paramagnetic $\chi > > 1$
D. Non-magnetic $0 < \chi < \epsilon$ (a small positive number)

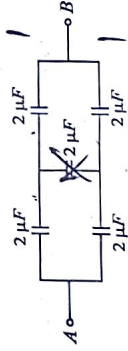
List-II

(Susceptibility (χ))

Choose the correct answer from the options given below:

- (1) A-II, B-I, C-III, D-IV
(2) A-III, B-II, C-I, D-IV
(3) A-IV, B-III, C-II, D-I
(4) ~~A-II, B-III, C-IV, D-I~~

5 In the following circuit, the equivalent capacitance between terminal A and terminal B is :



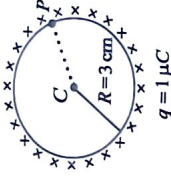
- (1) $1 \mu F$
(2) $0.5 \mu F$
(3) $4 \mu F$
(4) ~~$2 \mu F$~~

R3_English I

6

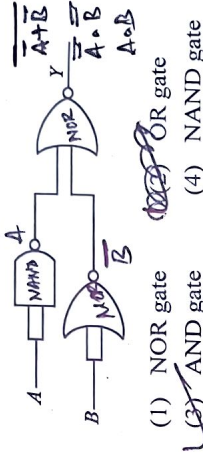
A thin spherical shell is charged by some source. The potential difference between the two points C and P (in V) shown in the figure is:

(Take $\frac{1}{4\pi\epsilon_0} = 9 \times 10^9$ SI units)



- (1) 1×10^5
(2) 0.5×10^5
(3) zero
(4) 3×10^5

7 The output (Y) of the given logic gate is similar to the output of an/a :



- (1) NOR gate
(2) ~~AND gate~~
(3) ~~OR gate~~
(4) NAND gate

8 An unpolarised light beam strikes a glass surface at Brewster's angle. Then

- (1) the refracted light will be completely polarised.
(2) both the reflected and refracted light will be completely polarised.
(3) the reflected light will be completely polarised but the refracted light will be partially polarised.
(4) the reflected light will be partially polarised.

9 A tightly wound 100 turns coil of radius 10 cm carries a current of 7 A. The magnitude of the magnetic field at the centre of the coil is (Take permeability of free space as $4\pi \times 10^{-7}$ SI units):

- (1) 4.4 T
(2) ~~4.4 mT~~
(3) 44 T
(4) 44 mT

2 $B = \frac{\mu_0 NI}{2R} = \frac{4\pi \times 10^{-7} \times 100 \times 7}{2 \times 10} = \frac{4 \times 10^{-4} \times 7 \times 10^2}{2} = 4 \times 10^{-4} \times 7 \times 10^2 = 4 \times 10^{-4} \times 7 \times 10^2$

33 A logic circuit provides the output Y as per the following truth table :

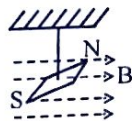
A	B	Y
0	0	1
0	1	0
1	0	1
1	1	0

The expression for the output Y is :

- ~~(1) $A\bar{B} + \bar{A}B$~~ ~~(2) $\bar{A}\bar{B}$~~
 (3) B (4) $A.B + \bar{A} \cdot \bar{B}$

34 In a uniform magnetic field of 0.049 T, a magnetic needle performs 20 complete oscillations in 5 seconds as shown. The moment of inertia of the needle is 9.8×10^{-6} kg m². If the magnitude of magnetic moment of the needle is $x \times 10^{-5}$ Am²; then the value of 'x' is :

20 oscillations in 5 sec
 $\rightarrow 20 \times 2\pi = 40\pi$
 $\rightarrow 2\pi = 40\pi / 5 = 8\pi$
 $\rightarrow 2\pi = 8\pi$
 $\rightarrow 2 = 8$
 $\rightarrow 2 = 8$
 $\rightarrow 2 = 8$



- (1) $128\pi^2$ (2) $50\pi^2$
 (3) $1280\pi^2$ (4) $5\pi^2$

35 A bob is whirled in a horizontal plane by means of a string with an initial speed of ω rpm. The tension in the string is T . If speed becomes 2ω while keeping the same radius, the tension in the string becomes :

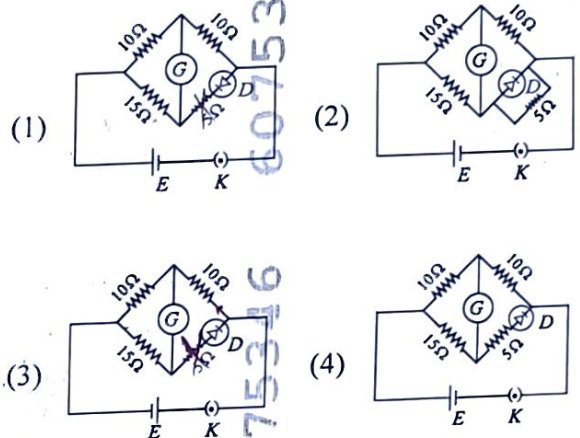
- (1) $4T$ (2) $\frac{T}{4}$
 (3) $\sqrt{2}T$ (4) T

$\omega = \frac{2\pi N}{60}$
 $\omega \rightarrow 2\omega$
 $T \propto \omega^2$
 $T \propto (2\omega)^2 = 4\omega^2$
 $T = 4T$

36 A metallic bar of Young's modulus, 0.5×10^{11} N m⁻² and coefficient of linear thermal expansion 10^{-5} °C⁻¹, length 1 m and area of cross-section 10^{-3} m² is heated from 0°C to 100°C without expansion or bending. The compressive force developed in it is:

- (1) 50×10^3 N (2) 100×10^3 N
 (3) 2×10^3 N (4) 5×10^3 N

37 Choose the correct circuit which can achieve the bridge balance.




38 A small telescope has an objective of focal length 140 cm and an eye piece of focal length 5.0 cm. The magnifying power of telescope for viewing a distant object is:

- (1) 28 (2) 17
 (3) 32 (4) 34

$M = \frac{f_o}{f_e} = \frac{140}{5} = 28$

39 An iron bar of length L has magnetic moment M . It is bent at the middle of its length such that the two arms make an angle 60° with each other. The magnetic moment of this new magnet is:

- (1) $\frac{M}{2}$ (2) $2M$
 (3) $\frac{M}{\sqrt{3}}$ (4) M



$M = mL$

C N O F
9 13

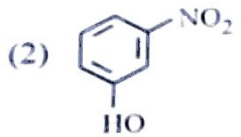
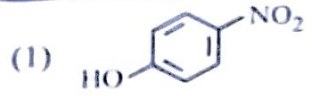
77 Arrange the following elements in increasing order of electronegativity:

N, O, F, C, Si

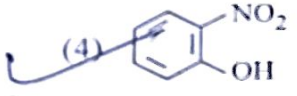
Choose the correct answer from the options given below:

- (1) $Si < C < O < N < F$
- (2) $O < F < N < C < Si$
- (3) $F < O < N < C < Si$
- (4) $Si < C < N < O < F$

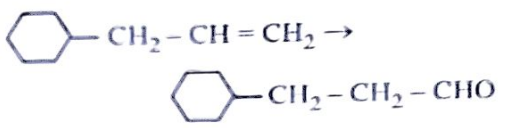
78 Intramolecular hydrogen bonding is present in



(3) HF



79 Identify the correct reagents that would bring about the following transformation.



- (1) (i) BH_3
- (ii) $\text{H}_2\text{O}_2/\text{OH}^\ominus$
- (iii) PCC
- (2) (i) BH_3
- (ii) $\text{H}_2\text{O}_2/\text{OH}^\ominus$
- (iii) alk. KMnO_4
- (iv) $\text{H}_3\text{O}^\oplus$

- (3) (i) $\text{H}_2\text{O}/\text{H}^+$
- (ii) PCC
- (4) (i) $\text{H}_2\text{O}/\text{H}^+$
- (ii) CrO_3

80 Match List I with List II.

List I
(Conversion)

List II
(Number of Faraday required)

- | | |
|--|---------|
| A. 1 mol of $\text{H}_2\overset{+2}{\text{O}} \rightarrow \overset{0}{\text{O}_2}$ | I. 3F |
| B. 1 mol of $\text{MnO}_4^- \rightarrow \text{Mn}^{2+}$ | II. 2F |
| C. 1.5 mol of Ca from molten CaCl_2 | III. 1F |
| D. 1 mol of $\text{FeO} \rightarrow \text{Fe}_2\text{O}_3$ | IV. 5F |

Choose the correct answer from the options given below:

- (1) A-III, B-IV, C-I, D-II ✗
- (2) A-II, B-III, C-I, D-IV
- (3) A-III, B-IV, C-II, D-I ✗
- (4) A-II, B-IV, C-I, D-III

81 Given below are two statements:

Statement I : The boiling point of hydrides of Group 16 elements follow the order $\text{H}_2\text{O} > \text{H}_2\text{Te} > \text{H}_2\text{Se} > \text{H}_2\text{S}$.

Statement II : On the basis of molecular mass, H_2O is expected to have lower boiling point than the other members of the group but due to the presence of extensive H-bonding in H_2O , it has higher boiling point.

In the light of the above statements, choose the correct answer from the options given below:

- (1) Both Statement I and Statement II are false.
- (2) Statement I is true but Statement II is false.
- (3) Statement I is false but Statement II is true.
- (4) Both Statement I and Statement II are true.

82 Given below are two statements :

Statement I : Both $[\text{Co}(\text{NH}_3)_6]^{3+}$ and $[\text{CoF}_6]^{3-}$ complexes are octahedral but differ in their magnetic behaviour.

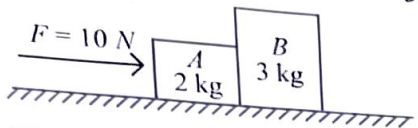
Statement II : $[\text{Co}(\text{NH}_3)_6]^{3+}$ is diamagnetic whereas $[\text{CoF}_6]^{3-}$ is paramagnetic.

In the light of the above statements, choose the correct answer from the options given below:

- (1) Both Statement I and Statement II are false.
- (2) Statement I is true but Statement II is false.
- (3) Statement I is false but Statement II is true.
- (4) Both Statement I and Statement II are true.

25 A horizontal force 10 N is applied to a block A as shown in figure. The mass of blocks A and B are 2 kg and 3 kg, respectively. The blocks slide over a frictionless surface. The force exerted by block A on block B is :

$a = \frac{F}{5} = 2 \text{ m/s}^2$



- (1) 4 N
- (2) 6 N
- (3) 10 N
- (4) zero

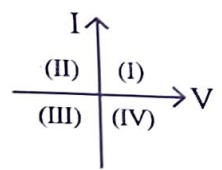
26 The quantities which have the same dimensions as those of solid angle are :

- (1) stress and angle \times
- (2) strain and arc \checkmark
- (3) angular speed and stress $\frac{F}{A} \times$
- (4) strain and angle

27 The moment of inertia of a thin rod about an axis passing through its mid point and perpendicular to the rod is 2400 g cm². The length of the 400 g rod is nearly :

- (1) 17.5 cm
 - (2) 20.7 cm
 - (3) 72.0 cm \times
 - (4) 8.5 cm \checkmark
- $\frac{ML^2}{12} = 2400$
 $L^2 = \frac{2400 \times 12}{400} = 72$
 $L = \sqrt{72} = 8.5$

28 Consider the following statements A and B and identify the correct answer :



- A. For a solar-cell, the I-V characteristics lies in the IV quadrant of the given graph. \checkmark
 - B. In a reverse biased pn junction diode, the current measured in (μA), is due to majority charge carriers. \times
- (1) A is incorrect but B is correct.
 - (2) Both A and B are correct.
 - (3) Both A and B are incorrect.
 - (4) A is correct but B is incorrect. \checkmark

29 A wire of length 'l' and resistance 100 Ω is divided into 10 equal parts. The first 5 parts are connected in series while the next 5 parts are connected in parallel. The two combinations are again connected in series. The resistance of this final combination is:

- (1) 52 Ω
- (2) 55 Ω
- (3) 60 Ω
- (4) 26 Ω

30 If $x = 5 \sin\left(\pi t + \frac{\pi}{3}\right) \text{ m}$ represents the motion of a particle executing simple harmonic motion, the amplitude and time period of motion, respectively, are :

- (1) 5 m, 2 s
- (2) 5 cm, 1 s \times
- (3) 5 m, 1 s
- (4) 5 cm, 2 s \times

31 If c is the velocity of light in free space, the correct statements about photon among the following are :

- A. The energy of a photon is $E = hv$. \checkmark
- B. The velocity of a photon is c. \checkmark
- C. The momentum of a photon, $p = \frac{hv}{c}$. \checkmark
- D. In a photon-electron collision, both total energy and total momentum are conserved.
- E. Photon possesses positive charge. \times

Choose the correct answer from the options given below :

- (1) A, B, C and D only \checkmark
- (2) A, C and D only
- (3) A, B, D and E only
- (4) A and B only

32 Match List I with List II.

List I (Spectral Lines of Hydrogen for transitions from)	List II (Wavelengths (nm))
A. $n_2 = 3$ to $n_1 = 2$	I. 410.2
B. $n_2 = 4$ to $n_1 = 2$	II. 434.1
C. $n_2 = 5$ to $n_1 = 2$	III. 656.3
D. $n_2 = 6$ to $n_1 = 2$	IV. 486.1

Choose the correct answer from the options given below :

- (1) A-III, B-IV, C-II, D-I \checkmark
- (2) A-IV, B-III, C-I, D-II
- (3) A-I, B-II, C-III, D-IV
- (4) A-II, B-I, C-IV, D-III

Handwritten notes and calculations at the bottom of the page, including 2×12 , 8.4 , and other scribbles.

Physics : Section-A (Q. No. 1 to 35)

1 At any instant of time t , the displacement of any particle is given by $\frac{2t-1}{2}$ (SI unit) under the influence of force of $5N$. The value of instantaneous power is (in SI unit): $P = F \cdot v = 5 \times 2 = 10$

2 If the monochromatic source in Young's double slit experiment is replaced by white light, then (1) there will be a central dark fringe surrounded by a few coloured fringes. (2) there will be a central bright white fringe surrounded by a few coloured fringes. (3) all bright fringes will be of equal width. (4) interference pattern will disappear.

3 ${}^{290}_{82}\text{X} \xrightarrow{\alpha} \text{Y} \xrightarrow{\gamma} \text{Z} \xrightarrow{\beta} \text{P} \xrightarrow{e^-}$

In the nuclear emission stated above, the mass number and atomic number of the product Q respectively, are :

- (1) 286, 80
(2) 288, 82
(3) 286, 81
(4) 280, 81

4 Match List-I with List-II.

List-I

(Material)

- A. Diamagnetic $\chi = 0$
 B. Ferromagnetic $\chi > \chi \geq -1$
 C. Paramagnetic $\chi \gg 1$
 D. Non-magnetic $0 < \chi < \epsilon$ (a small positive number)

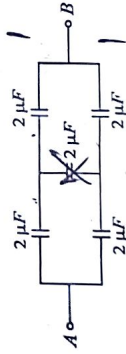
List-II

(Susceptibility (χ))

Choose the correct answer from the options given below:

- (1) A-II, B-I, C-III, D-IV
 (2) A-III, B-II, C-I, D-IV
 (3) A-IV, B-III, C-II, D-I
 (4) A-II, B-III, C-IV, D-I

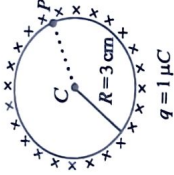
5 In the following circuit, the equivalent capacitance between terminal A and terminal B is :



- (1) $1 \mu\text{F}$
 (2) $0.5 \mu\text{F}$
 (3) $4 \mu\text{F}$
 (4) $2 \mu\text{F}$

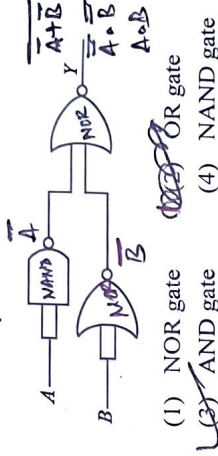
6 A thin spherical shell is charged by some source. The potential difference between the two points C and P (in V) shown in the figure is:

(Take $\frac{1}{4\pi\epsilon_0} = 9 \times 10^9$ SI units)



- (1) 1×10^5
 (2) 0.5×10^5
 (3) Zero
 (4) 3×10^5

7 The output (Y) of the given logic gate is similar to the output of an/a :



- (1) NOR gate
 (2) AND gate
 (3) OR gate
 (4) NAND gate

8 An unpolarised light beam strikes a glass surface at Brewster's angle. Then

- (1) the refracted light will be completely polarised.
 (2) both the reflected and refracted light will be completely polarised.
 (3) the reflected light will be completely polarised but the refracted light will be partially polarised.
 (4) the reflected light will be partially polarised.

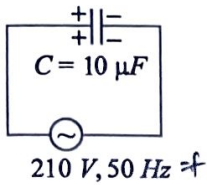
9 A tightly wound 100 turns coil of radius 10 cm carries a current of 7 A. The magnitude of the magnetic field at the centre of the coil is (Take permeability of free space as $4\pi \times 10^{-7}$ SI units):

- (1) 4.4 T
 (2) 4.4 mT
 (3) 44 T
 (4) 44 mT

2 $B = \frac{\mu_0 NI}{2r} = \frac{4\pi \times 10^{-7} \times 100 \times 7 \times 100}{2 \times 10} = \frac{4 \times 10^{-4} \times 10^5 \times 7}{2} = 14 \times 10^{-4} \times 10^5$

$$I_{rms} = \frac{I_0}{\sqrt{2}}$$

- 40 A 10 μF capacitor is connected to a 210 V, 50 Hz source as shown in figure. The peak current in the circuit is nearly ($\pi = 3.14$):



$$I_{rms} = \frac{210}{\sqrt{2} \times 10 \times 10^{-6} \times 2\pi \times 50}$$

$$I_0 = 210 \times 2 \times 3.14 \times 50 \times 10^{-6} \times \sqrt{2}$$

$$= 21 \times 2 \times 3.14 \times 5 \times 10^{-3} \times 1.4$$

$$= 21 \times 0.3 \times 3.14 \times 1.4$$

$$= 28.1 \times 2.2 \times 1.4$$

$$= 66 \times 1.4$$

- (1) 0.93 A
(3) 0.35 A
(2) 1.20 A
(4) 0.58 A

- 41 Two heaters A and B have power rating of 1 kW and 2 kW, respectively. Those two are first connected in series and then in parallel to a fixed power source. The ratio of power outputs for these two cases is:

- (1) 2 : 9
(3) 2 : 3
(2) 1 : 2
(4) 1 : 1

- 42 If the mass of the bob in a simple pendulum is increased to thrice its original mass and its length is made half its original length, then the new time

period of oscillation is $\frac{x}{2}$ times its original time period. Then the value of x is:

- (1) $\sqrt{2}$
(3) 4
(2) $2\sqrt{3}$
(4) $\sqrt{3}$

- 43 The property which is not of an electromagnetic wave travelling in free space is that :

- (1) the energy density in electric field is equal to energy density in magnetic field.
(2) they travel with a speed equal to $\frac{1}{\sqrt{\mu_0 \epsilon_0}}$.
(3) they originate from charges moving with uniform speed.
(4) they are transverse in nature.

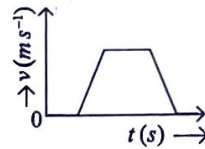
- 44 A sheet is placed on a horizontal surface in front of a strong magnetic pole. A force is needed to :

- A. hold the sheet there if it is magnetic.
B. hold the sheet there if it is non-magnetic.
C. move the sheet away from the pole with uniform velocity if it is conducting.
D. move the sheet away from the pole with uniform velocity if it is both, non-conducting and non-polar.

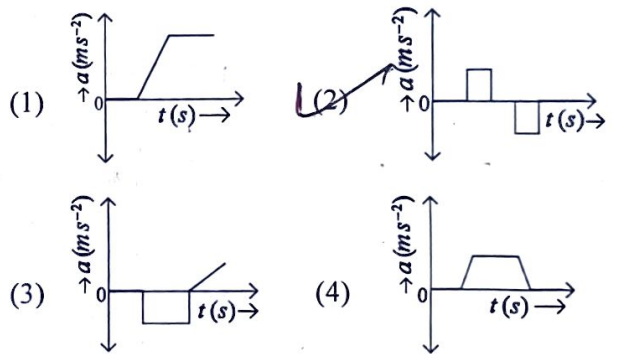
Choose the correct statement(s) from the options given below:

- (1) A and C only
(2) A, C and D only
(3) C only
(4) B and D only

- 45 The velocity (v) – time (t) plot of the motion of a body is shown below :



The acceleration (a) – time (t) graph that best suits this motion is :



- 46 A parallel plate capacitor is charged by connecting it to a battery through a resistor. If I is the current in the circuit, then in the gap between the plates :

- (1) displacement current of magnitude equal to I flows in the same direction as I .
(2) displacement current of magnitude equal to I flows in a direction opposite to that of I .
(3) displacement current of magnitude greater than I flows but can be in any direction.
(4) there is no current.

