

150 Questions

Que. 1 Who was the first Indian Governor of Reserve Bank of India ?

1. Deshmukh
2. Raghuram Rajan
3. Suresh Mathur
4. Krishnamachari

Correct Option - 1

Que. 2 The student who designed the Rs. sign was studying at :

1. JNU
2. IIT Bombay
3. Hyderabad University
4. IIT Madras

Correct Option - 2

Que. 3 The bank note press is at :

1. Nashik
2. Dewas
3. Salbani
4. Hoshangabad

Correct Option - 2

Que. 4 It is not among the four largest states in terms of population :

1. Bihar
2. Uttar Pradesh
3. Maharashtra
4. Tamil Nadu

Correct Option - 4

Que. 5 Its population density per square kilometer is highest :

1. Bihar
2. West Bengal
3. Kerala
4. Uttar Pradesh

Correct Option - 1

Que. 6 The name of the first supercomputer developed in India was :

1. Param 8000
2. Aditya
3. Anupam-Adhyay
4. Saga-220

Correct Option - 1

Que. 7 When did 4G service start in India ?

1. 2000
2. 2012
3. 2016
4. Not started yet

Correct Option - 2

Que. 8 The share price index of UK is

1. STOXX
2. FTSE 100
3. SET
4. JCI

Correct Option - 2

Que. 9 He is called Mahamana

1. Gandhiji
2. Nehru
3. Malviya
4. Rajiv Gandhi

Correct Option - 3

Que. 10 Who was the first Indian actress?

1. Devika Rani
2. Madhubala
3. Meena Kumari
4. Nargis

Correct Option - 1

Que. 11 It was the first country to declare a carbon tax :

1. Sweden
2. Germany
3. New Zealand
4. America

Correct Option - 1

Que. 12 Kiwi bird is found at :

1. Norway
2. England
3. New Zealand
4. Spain

Correct Option - 3

Que. 13 The currency of Brazil is

1. Ruble
2. Real
3. Bar
4. Riyal

Correct Option - 2

Que. 14 Which is called the city of palaces ?

1. Patna
2. Kolkata
3. Chandigarh
4. Lucknow

Correct Option - 2

Que. 15 Who is known as the "King of Good Times"?

1. Shahrukh khan
2. Salman Khan
3. Vijay Malaya
4. Kejriwal

Correct Option - 3

Que. 16 This was Mumbai's first test tube baby and in 2016 she gave birth to a baby boy :

1. Durga
2. Harsha
3. Simi
4. Radha

Correct Option - 2

Que. 17 Who was the first woman pilot of Indian Airlines ?

1. Durga Banerjee
2. Diana Edulji
3. Neerja
4. Aarti Saha

Correct Option - 1

Que. 18 This bank has allowed its employees to access the bank's servers from home :

1. SBI
2. HDFC
3. Yes Bank
4. ICICI

Correct Option - 1

Que. 19 This writer was born in Bihar :

1. Phanishwarnath 'Renu'
2. Premchand

3. Mahadevi Verma
4. Ramkumar Verma

Correct Option - 1

Que. 20 He was a famous critic of Hindi literature :

1. Namwar Singh
2. Hari Shankar Parsai
3. Jai Shankar Prasad
4. Nirala

Correct Option - 1

Que. 21 The writer of 'Padmaavat' was

1. Kabir
2. Tulsidas
3. Jayasi
4. Nirala

Correct Option - 3

Que. 22 The author of "Game of Thrones" is

1. George Martin
2. R. Andrade
3. Sue Grafton
4. David Baldasi

Correct Option - 1

Que. 23 The author of "India After Gandhi" is

1. Chetan Bhagat
2. Suresh Menon
3. Ramachandra Guha
4. Naveen Chawla

Correct Option - 3

Que. 24 His prison room is a tourist spot :

1. Veer Savarkar
2. Kanhaiya
3. Jai Prakash Narayan
4. Anna Hazare

Correct Option - 1

Que. 25 Who chose the @ sign for e-mail?

1. Ray Tomlinson
2. Shiva Ayyadurai
3. Bill Gate
4. Steve Job

Correct Option - 1

Que. 26 Amartya Sen was awarded Nobel Prize for:

1. Chemistry
2. Economics
3. Social Sciences
4. Peace

Correct Option - 2

Que. 27 Apart from Bihar, Chhau is also a folk dance of-

1. West Bengal
2. Mizoram
3. Madhya Pradesh
4. Uttar Pradesh

Correct Option - 1

Que. 28 Bismillah Khan was famous for playing this instrument-

1. Violin
2. Veena
3. Sitar
4. Shehnai

Correct Option - 4

Que. 29 This singing style originated in the court of Nawab Wajid Ali Shah:

1. Qawwali
2. Dadra
3. Thumri
4. Ghazal

Correct Option - 3

Que. 30 Who founded the "Swaraj Party"?

1. Motilal Nehru
2. Vallabh Bhai Patel
3. Rabindranath Tagore
4. Veer Savarkar

Correct Option - 1

Que. 31 This author/writer now writes in Italian instead of English?

1. Jhumpa Lahiri
2. Vikram Seth
3. Kiran Desai
4. Arundhati Roy

Correct Option - 1

Que. 32 The autobiography "The Test of My Life" is of:

1. Yuvraj
2. Dravid
3. Sachin
4. Dhoni

Correct Option - 1

Que. 33 Tropic of Cancer does not pass through the middle of this state:

1. Bihar
2. Chhattisgarh
3. Jharkhand
4. Tripura

Correct Option - 1

Que. 34 What is the Brahmaputra river called in Bangladesh?

1. Padma
2. Jamuna
3. Dihang
4. Bhima

Correct Option - 2

Que. 35 Which part of the Indian constitution deals with the policy-directing elements for the state?

1. I
2. II
3. III
4. IV

Correct Option - 4

Que. 36 Which schedule of the Indian Constitution deals with languages?

1. 4
2. 8
3. 10
4. 12

Correct Option - 2

Que. 37 For how many years was Dr. Rajendra Prasad the President?

1. 6
2. 8
3. 12
4. 5

Correct Option - 3

Que. 38 The source of the presidential election system in the Indian Constitution is the Constitution of country _____.

1. Germany
2. England
3. Ireland
4. Japan

Correct Option - 3

Que. 39 How many members of Lok Sabha are nominated by the President?

1. 2
2. 3
3. 10
4. 0

Correct Option - 1

Que. 40 Who presented the Sarvodaya scheme to the government in 1950?

1. Vinoba Bhave
2. Anna Hazare
3. Jai Prakash Narayan
4. Lal Bahadur Shastri

Correct Option - 3

Que. 41 It shares the least terrestrial share with India,

1. Bangladesh
2. China
3. Pakistan
4. Myanmar

Correct Option - 4

Que. 42 At present the foreign direct investment limit for railway infrastructure is _____.

1. 50%
2. 75%
3. 100%
4. 0%

Correct Option - 3

Que. 43 _____ determines the income inequality of the people of a country.

1. Lorenz Curve
2. Minhas Curve
3. Jaitley Curve
4. Chidambaram Curve

Correct Option - 1

Que. 44 When was the National Highway Scheme started?

1. 1948
2. 1975

3. 1995
4. 2001

Correct Option - 3

Que. 45 What is the Yellow Revolution related to?

1. Pulses
2. Oilseeds
3. Sunflower
4. Fish

Correct Option - 2

Que. 46 What percentage of coffee produced in India is exported?

1. ~ 20
2. ~ 70
3. ~ 10
4. ~ 50

Correct Option - 2

Que. 47 Durgapur Steel Plant was established with the help of _____.

1. Germany
2. America
3. England
4. Norway

Correct Option - 3

Que. 48 In which year budget was GST first mentioned?

1. 2006-07
2. 2013-14
3. 1998-99
4. 2015-16

Correct Option - 1

Que. 49 What was the name of the State Bank of India before nationalisation?

1. Imperial Bank Of India
2. Company Bank Of India
3. Bank Of Madras
4. Bank of Bombay

Correct Option - 1

Que. 50 We are in the middle of this five year plan:

1. 9th
2. 12th
3. 13th
4. 7th

Correct Option - 2

Que. 51 What are enzymes basically?

1. Fat
2. Sugar
3. Protein
4. Vitamins

Correct Option - 3

Que. 52 What does a patient of myopia need to get rid of it?

1. Concave lens
2. Convex lens
3. Biconvex lens
4. Lens transplant

Correct Option - 1

Que. 53 Relative humidity is measured by?

1. Hydrometer
2. Hygrometer
3. Lactometer
4. Potentiometer

Correct Option - 2

Que. 54 Which light has the shortest wavelength?

1. Red
2. Yellow
3. Blue
4. Violet

Correct Option - 4

Que. 55 What is the unit of work?

1. Joule
2. Neutron
3. Watt
4. Dyne

Correct Option - 1

Que. 56 Whose unit is light year?

1. Distance
2. Time
3. Age
4. Light intensity

Correct Option - 1

Que. 57 Which is not an electromagnetic wave?

1. Radio
2. Infrared
3. Sound
4. Ultraviolet

Correct Option - 3

Que. 58 What will be the value of Planck's constant in joules second?

1. 6.63×10^{34}
2. 16.63×10^{-34}
3. 6.36×10^{-34}
4. 6.63×10^{-34}

Correct Option - 4

Que. 59 From which part of the turmeric plant is it obtained?

1. Stem
2. Root
3. Fruit
4. Flower

Correct Option - 1

Que. 60 What is the Curie temperature related to?

1. Sound
2. Magnetism
3. Radioactivity
4. Lens

Correct Option - 2

Que. 61 If a person walks towards a plane mirror with a speed v , then with what speed will he see his image in the mirror coming towards him?

1. $2v$
2. $\frac{1}{v}$
3. v^2
4. v

Correct Option - 1

Que. 62 Which planet has abundant H_2 in its atmosphere?

1. Saturn
2. Venus
3. Mars
4. Varun

Correct Option - 1

Que. 63 What percentage of the Earth's surface is covered by oceans?

1. 20
2. 40
3. 70
4. 55

Correct Option - 3

Que. 64 Which is the driest place in the world?

1. Wastack
2. Erica
3. McMurdo
4. Ethiopia

Correct Option - 3

Que. 65 Which of the following is a hot current?

1. Oyashio
2. Humboldt
3. Canaries
4. Gulf Stream

Correct Option - 4

Que. 66 How many countries are surrounded by land?

1. 22
2. 44
3. 66
4. 88

Correct Option - 2

Que. 67 The two stars are 3.6×10^{-7} m and 4.8×10^{-7} m respectively. If they emit maximum energy at wavelengths what will be the ratio of their temperatures T/T_1 ?

1. $\frac{2}{3}$
2. $\frac{4}{3}$
3. $\frac{3}{4}$
4. $\frac{3}{2}$

Correct Option - 2

Que. 68 Which country has the most time zones?

1. France
2. Australia
3. Denmark
4. Spain

Correct Option - 1

Que. 69 How many districts are there in Bihar?

1. 22
2. 38
3. 15
4. 49

Correct Option - 2

Que. 70 Which side of Bihar has the highest population in the state?

1. East
2. West
3. North
4. South

Correct Option - 1

Que. 71 Where is Chilka Lake?

1. Odisha
2. West Bengal
3. Manipur
4. Bihar

Correct Option - 1

Que. 72 What will be the least common factor of 12, 27, and 40?

1. 120
2. 1080
3. 540
4. 2160

Correct Option - 2

Que. 73 What is the highest common factor of $\frac{1}{2}$, $\frac{3}{4}$, $\frac{5}{6}$, $\frac{7}{8}$ and $\frac{9}{10}$?

1. $\frac{1}{210}$
2. $\frac{1}{21}$
3. $\frac{1}{12}$
4. $\frac{1}{120}$

Correct Option - 4

Que. 74 Which is the most significant digit among $\frac{1}{3}$, $\frac{2}{5}$, $\frac{3}{4}$ and $\frac{1}{6}$?

1. $\frac{1}{3}$
2. $\frac{2}{5}$
3. $\frac{3}{4}$
4. $\frac{1}{6}$

Correct Option - 3

Que. 75 Where is Sumatra Island?

1. Indian Ocean
2. Arctic Ocean
3. Atlantic Ocean
4. Pacific Ocean

Correct Option - 1

Que. 76 A shopkeeper buys 6 balloons for one rupee. How many balloons should he sell for one rupee so that he makes a profit of 20%?

1. 3
2. 4
3. 5
4. 6

Correct Option - 3

Que. 77 Simplify: $\sqrt{810}$

1. $9\sqrt{10}$
2. $10\sqrt{9}$
3. $\sqrt{\frac{9}{10}}$
4. $\sqrt{\frac{10}{9}}$

Correct Option - 1

Que. 78 Simplify: $b - [b - (a + b) - \{b - (b - a + b)\} + 2a]$

1. a
2. 2a
3. 4a
4. 0

Correct Option - 4

Que. 79 The difference between a digit and its $\frac{3}{5}$ th value is 50. That digit is

1. 120
2. 123
3. 124
4. 125

Correct Option - 4

Que. 80 Shyam is 7 years younger than Ram. The ratio of their ages is 7 : 9. What is Shyam's age (in years)?

1. 23.5
2. 24.5
3. 12.5
4. 14.5

Correct Option - 2

Que. 81 A can complete a work in 10 days and B in 15 days. If both of them work together, then in how many days will the work be completed?

1. 5
2. 6
3. 7
4. 8

Correct Option - 2

Que. 82 If the profit triples on doubling the selling price, then the % profit is

1. $66\frac{2}{3}$
2. 100
3. $105\frac{1}{3}$
4. 120

Correct Option - 2

Que. 83 NaCl has _____ bond.

1. Ionic
2. Covalent
3. Co-ordinate
4. H-Bond

Correct Option - 1

Que. 84 How many types of quantum numbers are there?

1. 5
2. 2
3. 3
4. 4

Correct Option - 4

Que. 85 Which of the following is used to determine the age of archaeological wood?

1. ${}_{92}\text{U}^{235}$
2. ${}_{6}\text{C}^{14}$
3. ${}_{92}\text{U}^{238}$
4. ${}_{6}\text{C}^{12}$

Correct Option - 2

Que. 86 Which of the following equation represents Charles's law?

1. $V \propto \frac{C}{T}$
2. $V \propto \frac{1}{P}$
3. $V \propto T$
4. $T \propto \frac{1}{V}$

Correct Option - 3

Que. 87 It does not contain 6×10^{23} atoms:

1. 6 g of Carbon
2. 1 g of Hydrogen
3. 14 g of Nitrogen
4. 35.5 g of Chlorine

Correct Option - 4

Que. 88 Epsom salt is a compound of _____.

1. Ca
2. Mg
3. Ba
4. Pb

Correct Option - 2

Que. 89 _____ is present in german silver.

1. Cu
2. Ag
3. Sn
4. Al

Correct Option - 1

Que. 90 The contact method is used in the manufacture of _____.

1. HNO_3
2. HCl
3. H_3PO_4
4. H_2SO_4

Correct Option - 4

Que. 91 The chemical name of heavy water is

1. Deuterium monoxide
2. Deuterium Oxide
3. Tritium oxide
4. Tritium monoxide

Correct Option - 2

Que. 92 How many types of white blood cells are there in human body?

1. 3
2. 4
3. 5
4. 6

Correct Option - 3

Que. 93 Lymph is present in:

1. vascular tissue
2. cartilage
3. squamous tissue
4. nerve fibers

Correct Option - 1

Que. 94 In jaundice, the amount of the _____ increases in the blood.

1. Bilirubin
2. Hemoglobin
3. Bile acid
4. Pyruvic acid

Correct Option - 1

Que. 95 Which of the following is the largest gland?

1. Pancreas
2. Liver
3. lung
4. Kidney

Correct Option - 2

Que. 96 Which of the following is Sanguivorous?

1. snake
2. earthworm
3. cockroach
4. mosquito

Correct Option - 4

Que. 97 Which of the following is known as master gland?

1. Thyroid
2. Pituitary
3. Adrenal
4. Pancreas

Correct Option - 2

Que. 98 Which of the following vitamin is tocopherol?

1. A
2. B
3. D
4. E

Correct Option - 4

Que. 99 _____ is famous for its social system.

1. Cow
2. Pig

3. honey-bee
4. fish

Correct Option - 3

Que. 100 In nylon, the bond between its monomers is _____.

1. ionic
2. amide
3. H-bond
4. ester

Correct Option - 2

Que. 101 Three travelers reach a city which has 4 hotels. In how many different ways can they stay in each of the different hotels?

1. 12
2. 24
3. 8
4. 16

Correct Option - 2

Que. 102 4 men board a bus which has 6 vacant seats. In how many ways can they sit?

1. 30
2. 120
3. 320
4. 360

Correct Option - 4

Que. 103 In how many ways can 5 motors be selected from 12 motors if one of the mentioned motors is not selected forever?

1. 462
2. 4620
3. 7920
4. 2970

Correct Option - 1

Que. 104 In how many ways can 9 be found by throwing two dice?

1. 1
2. 2
3. 3
4. 4

Correct Option - 4

Que. 105 Probability of 3 students solving a question are $\frac{1}{2}$, $\frac{1}{3}$, and $\frac{1}{4}$. Probability to solve the question is:


1. $\frac{1}{4}$
2. $\frac{1}{2}$

3. $\frac{7}{12}$

4. $\frac{3}{4}$

Correct Option - 4

Que. 106 Select the figure that continues the series below.



Correct Option - 3

Que. 107 Select the figure that continues the series below.





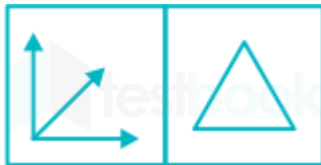
Correct Option - 2


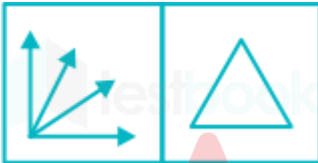

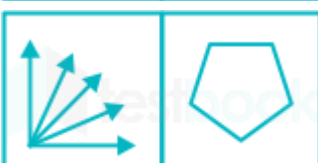
Que. 108 In a code SYSTEM is written as SYSMET and NEARER is written as AENRER, FRACTION will be written as :

1. CARFTINO
2. CARFTION
3. ARFCNOIT
4. CARFNOIT

Correct Option - 4

Que. 109 Which pair of figures have the same relationship as the figures given below?



1. 
2. 
3. 
4. 

Correct Option - 4

Que. 110 A man walks 40 miles on the last day of his vacation. This increases his daily average by 32 to 33 miles. How many days was his leave?

1. 7
2. 8
3. 9
4. 10

Correct Option - 2

Que. 111 What is the value of x in the following?



38	1924	96
64	3217	68
48	x	56

1. 2414
2. 1424
3. 4214
4. 4412





Correct Option - 1

Que. 112 473982 is related to 1419 in the same way as 329684 is related to 1418. 751694 is related to which of the following?

1. 1931
2. 1193
3. 1319
4. 1139

Correct Option - 3



Que. 113 Which of the following is not correctly matched?

1. 
2. 
3. 
4. 

Correct Option - 2

Que. 114 Which figure has the same relation to the third figure as the second figure is to the first?



1. 
2. 



Correct Option - 3

Que. 115 Sally has one-third more than David has. David has one-third more than Francis has. There are a total of 111. How many does Francis have?

1. 27
2. 36
3. 48
4. 68

Correct Option - 1

Que. 116 Which of the following is rearranged to form an English word?

1. TCAPU
2. LEABO
3. TCINO
4. LIUDT

Correct Option - 3

Que. 117 If the values of A, B, C, D, E, F etc. are 4, 3, 2, 4, 3, 2, ..., then the sum of the values of the letters of SICK will be

1. 11
2. 12
3. 13
4. 9

Correct Option - 1

Que. 118 In $(15^{15}) = 15^{2.5} \times 15^X$ the value of X is:

1. 6
2. 15
3. 7.5
4. 12.5

Correct Option - 4

Que. 119 in $5555 \times 555 \times 55 = x \times 555 \times 5$, what is the value of x?

1. 30525
2. 152625
3. 61105
4. 6105

Correct Option - 3

Que. 120 If $a = (-2) \times (-3)$ and $b = \sqrt{36}$, which of the following is true?

1. $a = b$
2. $a = -\frac{1}{b}$
3. $a = \sqrt{b}$
4. $a = \frac{1}{b}$

Correct Option - 1

Que. 121 The value of $(1 + 15 + 151) \times 2 + 36 = x$. x is:

1. 12024
2. 370
3. 720
4. 205

Correct Option - 2

Que. 122 By what minimum digit should 4320 be multiplied to make it a perfect cube?

1. 10
2. 20
3. 30
4. 50

Correct Option - 4

Que. 123 A man cuts a log which is 140 kg. In first week he throws away $\frac{1}{10}$. In second week he throws away $\frac{2}{3}$ of the remaining. In third week he throws away 20% of the remaining. What is the weight (in kg) of log left with him?

1. 36.3
2. 42.0
3. 63.3
4. 33.6

Correct Option - 4

Que. 124 A committee of 3 persons in which at least one is woman, is to be formed by choosing from three men and 3 women. In how many different ways this can be done?

1. 20
2. 19
3. 120
4. 420

Correct Option - 2

Que. 125 The following words are based on the word 'PRESCRIBE'. Which one is not matched?

1. PRESS
2. PIECE

3. SPREE
4. PRICE

Correct Option - 1

Que. 126 Choose the correct reflection of the following :



- 1.
- 2.
- 3.
- 4.

Correct Option - 3

Que. 127 In a standard cube, 1 and 3 are written on the visible faces. What will be the sum of the digits on the opposite faces?

1. 10
2. 11
3. 15
4. 6

Correct Option - 1

Que. 128 In the class of 49, the rank of X is 18th. What is his rank from the end?

1. 18
2. 19
3. 31
4. 32

Correct Option - 4

Que. 129 How many digits in the number 7346285 will not change their position if the digits are written in their ascending order?

1. 0
2. 1
3. 2
4. 4

Correct Option - 3

Que. 130

The number of digits in the number 5109238674 are interchanged in such a way that 1st and 6th digits, 2nd and 7th digits are interchanged. Rest of the digits also change their places in the same way. What will be the 3rd digit from the right in the rearranged number ?

1. 9
2. 0
3. 6
4. 3

Correct Option - 2

Que. 131 $\frac{4}{5}$ th of 70 is less than $\frac{5}{7}$ th of 112 by what %?

1. 42
2. 30
3. 24
4. 36

Correct Option - 2

Que. 132 Choose the correct reflection of the following :



- 1.
- 2.
- 3.
- 4.

Correct Option - 3

Que. 133 In a standard cube, 1 and 3 are written on the visible faces. What will be the sum of the digits on the opposite faces?

1. 10
2. 11
3. 15
4. 6

Correct Option - 1

Que. 134 In the class of 49, the rank of X is 18th. What is his rank from the end?

1. 18
2. 19
3. 31
4. 32

Correct Option - 4

Que. 135 How many digits in the number 7346285 will not change their position if the digits are written in their ascending order?

1. 0
2. 1
3. 2
4. 4

Correct Option - 3

Que. 136 The number of digits in the number 5109238674 are interchanged in such a way that 1st and 6th digits, 2nd and 7th digits are interchanged. Rest of the digits also change their places in the same way. What will be the 3rd digit from the right in the rearranged number?

1. 9
2. 0
3. 6
4. 3

Correct Option - 2

Que. 137 $\frac{4}{5}$ of 70 is how much percent less than $\frac{5}{7}$ of 112?

1. 42
2. 30
3. 24
4. 36

Correct Option - 2

Que. 138 A committee of 3 persons is to be formed by choosing from three men and 3 women in which at least one is a woman. In how many different ways can this be done?

1. 20
2. 19
3. 120
4. 420

Correct Option - 2

Que. 139 The following word is based on the word 'PRESCRIBE'.

Which one is not matched?

1. PRESS
2. PIECE
3. SPREE

4. PRICE

Correct Option - 1

Que. 140 4th number in sequence $2, 2\frac{1}{2}, 3\frac{1}{3}, \dots$ is:

1. $\frac{5}{2}$
2. $5\frac{1}{4}$
3. 5
4. $5\frac{1}{8}$

Correct Option - 3

Que. 141 The next number in the sequence 71, 81, 74, 77, 77, 73, 80, 69 will be:

1. 80
2. 83
3. 77
4. 71

Correct Option - 2

Que. 142 If 3182596 means 65283 and 6742835 means 53476, then what is the meaning of 7496258:

1. 85647
2. 58467
3. 74658
4. 79284

Correct Option - 1

Que. 143 The value of x in the sequence 0, 27, 54, x, 108, 135 is:

1. 73
2. 81
3. 69
4. 85

Correct Option - 2

Que. 144 The next letter in the sequence A, C, F, J, O, ... will be:

1. T
2. U
3. R
4. V

Correct Option - 2

Que. 145 In which of the following, rearranging the letters will make a meaningful English word?

1. LEVUR
2. TNIEC
3. IRNAL
4. ANOIP

Correct Option - 4

Que. 146 What will be the next digit in the sequence 0, 1, 3, 6, 7, 9, 12, 13, 15, 18, ...?

1. 19
2. 21
3. 24
4. 20

Correct Option - 1

Que. 147 In a clock, the hour hand is facing north at 6 pm. In which direction will the minute hand point at 9.15 at night?

1. south-east
2. south
3. north
4. west

Correct Option - 4

Que. 148 34 is related to 12 in the same way as 59 is related to:

1. 45
2. 38
3. 26
4. 14

Correct Option - 1

Que. 149 Horse : Horseman :: Motor : ?

1. chauffeur
2. steering
3. mechanic
4. brake

Correct Option - 1

Que. 150 Melt : Liquid :: Solidify : ?

1. to condense
2. solid
3. ice
4. crystal

Correct Option - 2