

**JCI
Jr. Asst.**

Previous Year Paper
01 Mar, 2022



Roll No:

No:

Name:

Exam Date: 01-Mar-2022

Exam Time: 10:00-11:30

Post Name: Junior Assistant

Registered Photo



Exam Day Photo



Reasoning - Reasoning

Question No.1

Marks: 1.00

Bookmark

A stands in the 13th position from the front of the queue and there are 2 persons between A and B. B stands after A. If the first 8 persons are removed from the queue then what is the position of B from the front of the queue?

A पंक्ति के सामने से 13वें स्थान पर खड़ा है और A और B के बीच 2 व्यक्ति खड़े हैं। B, A के बाद खड़ा है। यदि पहले 8 व्यक्तियों को पंक्ति से हटा दिया जाता है तो पंक्ति के सामने से B का स्थान क्या है?

- (A) 5
5
- (B) 8 (Correct Answer) (Chosen option)
8
- (C) 7
7
- (D) 6
6

Question No.2

Marks: 1.00

Bookmark

A child is standing in a lawn facing South-East direction. If the child turns 152.5 degrees in anti-clockwise direction and 62.5 degrees in clockwise direction, which direction will the child face now?

एक बच्चा लॉन में दक्षिण-पूर्व दिशा की ओर अभिमुख होकर खड़ा है। यदि बच्चा वामावर्त दिशा में 152.5 डिग्री और दक्षिणावर्त दिशा में 62.5 डिग्री मुड़ता है, तो बच्चा अब किस दिशा की ओर अभिमुख होगा?

- (A) South-East
दक्षिण-पूर्व
- (B) South-West
दक्षिण-पश्चिम
- (C) North-West
उत्तर-पश्चिम
- (D) North-East (Correct Answer) (Chosen option)
उत्तर-पूर्व

Case Study - 3 to 6

4.00

Directions: In a certain code language:

'late is bad' is written as 'bo ka ri',

'strict but late' is written as 'cn fp bo',

'he is strict' is written as 'ka cn gl'.

Question No.3

Marks: 1.00

Bookmark

What is the code for 'strict' in the given code language?

दी गई कूट भाषा में 'street' के लिए कूट क्या है?

- (A) fb
fb
- (B) cn (Correct Answer) (Chosen option)
cn
- (C) ka
ka
- (D) bo
bo

Question No.4

Marks: 1.00

Bookmark

What does the code 'ka' stand for?

कूट 'ka' का क्या अर्थ है?

- (A) **is (Correct Answer)** (Chosen option)
is
- (B) late
late
- (C) bad
bad
- (D) strict
strict

Question No.5

Marks: 1.00

Bookmark

What is the code for 'bad' in the given code language?

दी गई कूट भाषा में 'bad' के लिए कूट क्या है?

- (A) **ri (Correct Answer)** (Chosen option)
ri
- (B) ka
ka
- (C) cn
cn
- (D) bo
bo

Question No.6

Marks: 1.00

Bookmark

What does the code 'gl' stand for?

कूट 'gl' का क्या अर्थ है?

- (A) is
is
- (B) strict
strict
- (C) but
but
- (D) **he (Correct Answer)** (Chosen option)
he

Question No.7

Marks: 1.00

Bookmark

If a man covers the first half of the journey at 266 kmph and the second half of the journey at 399 kmph, find the average speed of the total journey. (In kmph)

यदि एक व्यक्ति यात्रा के पहले आधे भाग को 266 kmph की गति से और यात्रा के दूसरे आधे भाग को 399 kmph की गति से तय करता है, तो कुल यात्रा की औसत गति ज्ञात कीजिए। (kmph में)

- (A) 320.2
320.2
- (B) 318.2
318.2
- (C) 321.2
321.2
- (D) **319.2 (Correct Answer)** (Chosen option)
319.2

Question No.8

Marks: 1.00

Bookmark

What should be written in the place of question mark in the given series?

M8, O15, Q22, ?, U36

दी गई श्रृंखला में प्रश्नवाचक चिन्ह के स्थान पर क्या लिखा जाना चाहिए?

M8, O15, Q22, ?, U36

- (A) **S29 (Correct Answer)** (Chosen option)
S29
- (B) Q22
Q22

- (C) U25
U25
- (D) T25
T25

Question No.9

Marks: 1.00

Bookmark

A man starts from his house and walks 11 km North and turns towards his right and walks 5 km and continues in the same direction for another 14 km. He then walks 11 km in South direction and finally walks 13 km in West direction. What is the distance between his starting and ending point?

एक आदमी अपने घर से चलना शुरू करता है और 11 km उत्तर की ओर चलता है और अपनी दाहिनी ओर मुड़कर 5 km चलता है और तत्पश्चात उसी दिशा में और 14 km तक चलता है। फिर वह दक्षिण दिशा में 11 km चलता है और अंत में पश्चिम दिशा में 13 km चलता है। उसके आरंभिक और अंतिम बिंदु के बीच की दूरी क्या है?

- (A) 10 km
10 km
- (B) 5 km
5 km
- (C) **6 km (Correct Answer)** (Chosen option)
6 km
- (D) 8 km
8 km

Question No.10

Marks: 1.00

Bookmark

Find the next number in the series.

1225, 1150, 990, 745, 415, ?

श्रृंखला में अगली संख्या ज्ञात कीजिए।

1225, 1150, 990, 745, 415, ?

- (A) 8
8
- (B) **0 (Correct Answer)** (Chosen option)
0
- (C) 1
1
- (D) 9
9

Question No.11

Marks: 1.00

Bookmark

Pointing to a woman, a lady said, "She is the daughter of my father's son's grandfather who has only one child." How is the woman related to the lady?

एक महिला की ओर इशारा करते हुए, एक औरत ने कहा, "वह मेरे पिता के बेटे के ग्रैंड फादर की बेटी है, ग्रैंड फादर की केवल एक ही संतान है।" महिला का औरत से क्या संबंध है?

- (A) **Aunt (Chosen option)**
आंटी
- (B) **Mother (Correct Answer)**
माता
- (C) Granddaughter
ग्रैंड डॉटर
- (D) Daughter
बेटी

Question No.12

Marks: 1.00

Bookmark

A box containing the denominations of one rupee coins, two rupee coins and five rupee coins amount to Rs.1080. There are equal number of coins in all denominations. What is the total number of coins in the box?

एक बॉक्स में एक रुपये, दो रुपये और पांच रुपये मूल्यवर्ग के सिक्के हैं जिनका कुल मूल्य Rs.1080 है। सभी मूल्यवर्गों के सिक्कों की संख्या समान है। बॉक्स में सिक्कों की कुल संख्या कितनी है?

- (A) 115
115
- (B) 425
425

- (C) 405 (Correct Answer) (Chosen option)
405
- (D) 135
135

Question No.13

Marks: 1.00

Bookmark

A woman started to walk for 10 km in the East direction. She then took a right turn and walked 14 km and took a left turn and walked 19 km in that direction. She walked 14 km in the North direction, took a left turn to walk 19 km before walking 24 km in the north direction. How far is the starting point from the ending point?

एक महिला ने पूर्व दिशा में 10 km चलना शुरू किया। फिर वह दायें मुड़कर 14 km चलती है और तत्पश्चात बाएं मुड़कर उस दिशा में 19 km चलती है। वह उत्तर दिशा में 14 km चलती है, फिर उत्तर दिशा में 24 km चलने से पहले 19 km चलने के लिए बाएं मुड़ती है। आरंभिक बिंदु, अंतिम बिंदु से कितनी दूर है?

- (A) 24 km
24 km
- (B) 26 km (Correct Answer) (Chosen option)
26 km
- (C) 16 km
16 km
- (D) 14 km
14 km

Question No.14

Marks: 1.00

Bookmark

Read the given details carefully and answer the question given below

A@B means A is the father of B
A#B means A is the mother of B
A+B means A is the son of B
A*B means A is the Daughter of B

In the relation **M#N#O+P** how is P related to M?

दिए गए विवरण को ध्यान से पढ़ें और नीचे दिए गए प्रश्न का उत्तर दें

A@B का अर्थ है A, B का पिता है
A#B का अर्थ है A, B की माता है
A+B का अर्थ है A, B का पुत्र है
A*B का अर्थ है A, B की पुत्री है

संबंध **M#N#O+P** में, P का M से क्या संबंध है?

- (A) Grandmother
ग्रैंड मदर
- (B) Daughter-in-law
डॉटर-इन-लॉ
- (C) Grandfather
ग्रैंड फादर
- (D) Son-in-law (Correct Answer) (Chosen option)
सन-इन-लॉ

Question No.15

Marks: 1.00

Bookmark

Pointing to a girl, a man said, "She is the niece of my mother's only son's father's only daughter." How is the girl related to the man?

एक लड़की की ओर इशारा करते हुए एक आदमी ने कहा, "वह मेरी माँ के इकलौते बेटे के पिता की इकलौती बेटी की नीस है।" लड़की का उस आदमी से क्या संबंध है?

- (A) Niece (Chosen option)
नीस
- (B) Daughter (Correct Answer)
बेटी
- (C) Granddaughter
ग्रैंड डॉटर
- (D) Cousin

Question No.16

Marks: 1.00

Bookmark

Anita travels at a speed of 66 kmph and she reaches the destination in 6 hours. Find the distance she travels. (In km)

अनीता 66 kmph की गति से यात्रा करती है और वह 6 घंटे में गंतव्य तक पहुंच जाती है। उसके द्वारा तय की गई दूरी ज्ञात कीजिए। (km में)

- (A) 398
398
- (B) **396 (Correct Answer)** (Chosen option)
396
- (C) 400
400
- (D) 394
394

Question No.17

Marks: 1.00

Bookmark

How many minutes will Raman take to cover a distance of 1575 meters if he runs at a speed of 54 km/hr?

यदि रमन 54 km/hr की गति से दौड़ता है, तो 1575 मीटर की दूरी तय करने में उसे कितने मिनट लगेंगे?

- (A) 1.65
1.65
- (B) 1.45
1.45
- (C) **1.75 (Correct Answer)** (Chosen option)
1.75
- (D) 1.55
1.55

Question No.18

Marks: 1.00

Bookmark

Find the next number in the series.

654, 738, 658, 734, 662, ?

श्रृंखला में अगली संख्या ज्ञात कीजिए।

654, 738, 658, 734, 662, ?

- (A) 744
744
- (B) 742
742
- (C) **730 (Correct Answer)** (Chosen option)
730
- (D) 734
734

Question No.19

Marks: 1.00

Bookmark

Dhivya walked 13 km towards North and took a right turn and walked 19 km. She walked 4 km towards North and 7 km towards West. She then finally walked 17 km towards South. How far is she from the starting point?

दिव्या उत्तर की ओर 13 km चलती है और दायें मुड़ती है और 19 km चलती है। वह उत्तर की ओर 4 km और पश्चिम की ओर 7 km चलती है। फिर वह अंततः दक्षिण की ओर 17 km चलती है। वह आरंभिक बिंदु से कितनी दूर है?

- (A) 14 km
14 km
- (B) **12 km (Correct Answer)** (Chosen option)
12 km
- (C) 15 km
15 km
- (D) 16 km
16 km

Question No.20

Marks: 1.00

Bookmark

Find the next number in the series.

1, 3, 11, 53, 261, ?

श्रृंखला में अगली संख्या ज्ञात कीजिए।

1, 3, 11, 53, 261, ?

- (A) **1303 (Correct Answer)** (Chosen option)
1303
- (B) 1330
1330
- (C) 1301
1301
- (D) 1031
1031

Question No.21

Marks: 1.00

Bookmark

What should be written in the place of question mark in the given series?

G4, I8, ?, M16, O20

दी गई श्रृंखला में प्रश्नवाचक चिन्ह के स्थान पर क्या लिखा जाना चाहिए?

G4, I8, ?, M16, O20

- (A) J12
J12
- (B) J14
J14
- (C) **K12 (Correct Answer)** (Chosen option)
K12
- (D) K14
K14

Question No.22

Marks: 1.00

Bookmark

E is the son of A who is the only child of her mother. D is the daughter of C who is the sibling of A's spouse. B is the only son of C's mother, F. How is A related to F?

E, A का पुत्र है, A अपनी माँ का इकलौता संतान है। D, C की पुत्री है और C, A के/की जीवनसाथी का/की सहोदर/सहोदरा है। B, C की माता F का इकलौता पुत्र है। A का F से क्या संबंध है?

- (A) Niece
नीस
- (B) Daughter
बेटी
- (C) Cousin
कज़िन
- (D) **Daughter-in-law (Correct Answer)** (Chosen option)
डॉटर-इन-लॉ

Question No.23

Marks: 1.00

Bookmark

In this question, a statement is given followed by two conclusions numbered i and ii. You have to assume everything in the statement to be true, then consider the two conclusions together and decide which of them logically follows beyond a reasonable doubt from the information given in the statement.

Statement:

One who has faith in God doesn't commit sin. Ram has faith in God.

Conclusion:

- i) Ram doesn't commit sin.
ii) One who doesn't commit sin will have faith in God.

Choose the appropriate one from the following options

- (A) Only conclusion i follows
(B) Only conclusion ii follows
(C) Either i or ii follows
(D) Neither i nor ii follows and
(E) Both i and ii follow.

इस प्रश्न में, एक कथन दिया गया है जिसके बाद दो निष्कर्ष i और ii दिए गए हैं। आपको कथन में दी गई सभी बातों को सत्य मान लेना है, फिर दोनों निष्कर्षों पर एक साथ विचार करना है और निर्णय करना है कि उनमें से कौन सा निष्कर्ष, कथन में दी गई

जानकारी का एक उचित संदेह से परे तार्किक रूप से अनुसरण करता है।
कथन: जो ईश्वर में विश्वास रखता है वह पाप नहीं करता है। राम ईश्वर में आस्था रखता है।
निष्कर्ष:

- i) राम पाप नहीं करता।
- ii) जो पाप नहीं करता है, वह ईश्वर में आस्था रखता है।

निम्नलिखित विकल्पों में से उपयुक्त विकल्प का चयन करें

- (A) केवल निष्कर्ष i अनुसरण करता है
- (B) केवल निष्कर्ष ii अनुसरण करता है
- (C) या तो i या ii अनुसरण करता है
- (D) न तो i और न ही ii अनुसरण करता है और
- (E) i और ii दोनों अनुसरण करते हैं।

- (A) B
- (B) D
- (C) **A (Correct Answer)** (Chosen option)
- (D) E

Question No.24

Marks: 1.00

Bookmark

Mukesh stands in the 4th position from the front in a queue and there are 2 persons between Mukesh and Rakesh. Rakesh stands after Mukesh. If the first person is removed from the queue then what is the position of Rakesh from the front of the queue?

मुकेश एक पंक्ति में सामने से चौथे स्थान पर खड़ा है और मुकेश और राकेश के बीच 2 व्यक्ति खड़े हैं। राकेश, मुकेश के पीछे खड़ा है। यदि पहले व्यक्ति को पंक्ति से हटा दिया जाता है, तो पंक्ति के सामने से राकेश का स्थान क्या होगा?

- (A) 5
- (B) **6 (Correct Answer)** (Chosen option)
- (C) 3
- (D) 4

Question No.25

Marks: 1.00

Bookmark

What will be written in the place of question mark in the given series?

C3A1N14R18?24

दी गई श्रृंखला में प्रश्नवाचक चिन्ह के स्थान पर क्या लिखा जाएगा?

C3A1N14R18?24

- (A) W
- (B) U
- (C) V
- (D) **X (Correct Answer)** (Chosen option)

General Knowledge - General Knowledge

Question No.1

Marks: 1.00

Bookmark

What is the maximum tenure of Comptroller and Auditor General of India?

भारत के नियंत्रक और महालेखा परीक्षक का अधिकतम कार्यकाल कितना होता है?

- (A) **6 years (Correct Answer)** (Chosen option)
- (B) 10 years
- (C) 3 years

- 3 वर्ष
(D) 5 years
5 वर्ष

Question No.2

Marks: 1.00

Bookmark

Who among the following has described the Directive Principles and the Fundamental Rights as the 'Conscience of the Constitution'?

निम्नलिखित में से किसने निदेशक तत्वों और मौलिक अधिकारों को 'संविधान की आत्मा' के रूप में वर्णित किया है?

- (A) Alladi Krishnaswamy Iyer
अल्लादी कृष्णास्वामी अय्यर
- (B) Dr.B.R.Ambedkar (Chosen option)
डॉ. बी. आर. अम्बेडकर
- (C) Granville Austin (Correct Answer)
ग्रानविल ऑस्टिन
- (D) K.M.Munshi
के. एम. मुंशी

Question No.3

Marks: 1.00

Bookmark

Which forest in India is the home to the Asiatic lions?

भारत में कौन-सा जंगल एशियाई शेरों का घर है?

- (A) Gir forest (Correct Answer) (Chosen option)
गिर जंगल
- (B) North east forest
पूर्वोत्तर जंगल
- (C) Himalayan Forest
हिमालयी जंगल
- (D) Nallamella Forest
नल्लामेला जंगल

Question No.4

Marks: 1.00

Bookmark

Who among the following chaired the 7th Meeting of 'BRICS Communication Ministers 2021'?

निम्नलिखित में से किसने 'ब्रिक्स संचार मंत्री 2021' की 7वीं बैठक की अध्यक्षता की?

- (A) Ashwini Vaishnav (Chosen option)
अश्विनी वैष्णव
- (B) Anurag Singh Thakur
अनुराग सिंह ठाकुर
- (C) Rajeev Chandrasekhar
राजीव चंद्रशेखर
- (D) Devusinh Chauhan (Correct Answer)
देवूसिंह चौहान

Question No.5

Marks: 1.00

Bookmark

Which kind of inflation takes place when the supply falls drastically and the demand remains at the same level?

जब आपूर्ति में भारी गिरावट आती है और मांग समान स्तर पर रहती है तो किस प्रकार की मुद्रास्फीति होती है?

- (A) Reflation
पुनः मुद्रास्फीति
- (B) Bottleneck Inflation (Correct Answer) (Chosen option)
अवरोध मुद्रास्फीति
- (C) Stagflation
मुद्रास्फीतिजनित मंदी
- (D) Skewflation
विषम मुद्रास्फीति [स्किऊ-फ्लेशन]

Question No.6

Marks: 1.00

Bookmark

Which of the following articles was added to the Indian Constitution through the 97th Constitutional Amendment Act of 2011?

निम्नलिखित में से कौन सा अनुच्छेद 2011 के 97वें संविधान संशोधन अधिनियम के माध्यम से भारतीय संविधान में जोड़ा गया था?

- (A) Article 151
अनुच्छेद 151
- (B) **Article 43B (Correct Answer) (Chosen option)**
अनुच्छेद 43बी
- (C) Article 127
अनुच्छेद 127
- (D) Article 51
अनुच्छेद 51

Question No.7

Marks: 1.00

Bookmark

Which of the following resembles the 'Instrument of Instructions' enumerated in the Government of India Act of 1935?

निम्नलिखित में से कौन, भारत सरकार अधिनियम 1935 में वर्णित 'निर्देशों का दस्तावेज (इंस्ट्रुमेंट ऑफ इंस्ट्रक्शंस)' से मिलता जुलता है?

- (A) Anti-Defection Law
दलबदल विरोधी कानून
- (B) **Directive Principles of State Policy (Correct Answer) (Chosen option)**
राज्य के नीति निर्देशक सिद्धांत
- (C) Judicial review
न्यायिक समीक्षा
- (D) Preamble of the Constitution
संविधान की प्रस्तावना

Question No.8

Marks: 1.00

Bookmark

What is the other name for "Tropical Grasslands in East Africa Region"?

"पूर्वी अफ्रीका क्षेत्र में स्थित उष्णकटिबंधीय तृणभूमि" का दूसरा नाम क्या है?

- (A) Pampas
पम्पास
- (B) Llanos
ललनोस
- (C) **Savanna (Correct Answer) (Chosen option)**
सवाना
- (D) Campos
कैम्पोस

Question No.9

Marks: 1.00

Bookmark

Which one of the following was a sea port on the east coast during the ancient times?

प्राचीन काल में, निम्नलिखित में से कौन सा पूर्वी तट पर स्थित एक समुद्री बंदरगाह था?

- (A) Kausambi
कौशाम्बी
- (B) **Tamralipti (Correct Answer) (Chosen option)**
ताम्रलिप्ति
- (C) Ujjayini
उज्जयिनी
- (D) Mahishmati
माहिष्मती

Question No.10

Marks: 1.00

Bookmark

Which country had successfully test launched a Tsirkon (Zircon) hypersonic cruise missile from a submarine?

किस देश ने पनडुब्बी से सिरकॉन (जिरकोन) हाइपरसोनिक क्रूज़ मिसाइल का सफलतापूर्वक परीक्षण किया था?

- (A) **Russia (Correct Answer) (Chosen option)**
रूस

- (B) United States of America
संयुक्त राज्य अमेरिका
- (C) China
चीन
- (D) France
फ्रांस

Question No.11

Marks: 1.00

Bookmark

Which is the "Earth's only Satellite"?

"पृथ्वी का एकमात्र उपग्रह" कौन सा है?

- (A) Deimos
डीमोस
- (B) Callisto
कैलिस्टो
- (C) **Moon (Correct Answer) (Chosen option)**
चन्द्रमा
- (D) Phobos
फोबोस

Question No.12

Marks: 1.00

Bookmark

Karyala is the famous performing art of _____.

करयाला _____ की प्रसिद्ध निष्पादन कला है।

- (A) **Himachal Pradesh (Correct Answer)**
हिमाचल प्रदेश
- (B) Telangana
तेलंगाना
- (C) Kerala (Chosen option)
केरल
- (D) Andhra Pradesh
आंध्र प्रदेश

Question No.13

Marks: 1.00

Bookmark

Who is the ex-officio Chairman of the Rajya Sabha in Indian Parliament?

भारतीय संसद में राज्य सभा के पदेन सभापति कौन होते हैं?

- (A) The Prime Minister of India
भारत के प्रधानमंत्री
- (B) **The Vice-President of India (Correct Answer) (Chosen option)**
भारत के उपराष्ट्रपति
- (C) The President of India
भारत के राष्ट्रपति
- (D) Union Minister of Parliamentary Affairs
केंद्रीय संसदीय कार्य मंत्री

Question No.14

Marks: 1.00

Bookmark

In which State or Union territory is the Zoji la pass located?

ज़ोजी ला दर्रा किस राज्य या केंद्र शासित प्रदेश में स्थित है?

- (A) Sikkim
सिक्किम
- (B) Uttrakhand
उत्तराखंड
- (C) **Ladakh (Correct Answer)**
लद्दाख
- (D) Jammu (Chosen option)
जम्मू

Question No.15

Marks: 1.00

Bookmark

Which river is also known as Vishnu ganga?
किस नदी को विष्णु गंगा के नाम से भी जाना जाता है?

- (A) Bhagirathi
भागीरथी
- (B) **Alaknanda (Correct Answer) (Chosen option)**
अलकनंदा
- (C) Son
सोन
- (D) Betwa
बेतवा

Question No.16

Marks: 1.00

Bookmark

When was NITI Aayog established?
नीति आयोग की स्थापना कब हुई थी?

- (A) **Jan 1 2015 (Correct Answer) (Chosen option)**
1 जनवरी 2015
- (B) Jan 1 2014
1 जनवरी 2014
- (C) Jan 1 2016
1 जनवरी 2016
- (D) Jan 1 2017
1 जनवरी 2017

Question No.17

Marks: 1.00

Bookmark

Sharavati is an important river of which state?
शरावती किस राज्य की एक महत्वपूर्ण नदी है?

- (A) Andhra Pradesh
आंध्र प्रदेश
- (B) Tamil Nadu
तमिलनाडु
- (C) **Karnataka (Correct Answer) (Chosen option)**
कर्नाटक
- (D) Maharashtra
महाराष्ट्र

Question No.18

Marks: 1.00

Bookmark

Which ruler was also known as 'Vikramaditya'?
किस शासक को 'विक्रमादित्य' के नाम से भी जाना जाता था?

- (A) Bindusara
बिंदुसार
- (B) Ashoka
अशोक
- (C) **Chandragupta II (Correct Answer) (Chosen option)**
चंद्रगुप्त द्वितीय
- (D) Rudradaman
रुद्रदमन

Question No.19

Marks: 1.00

Bookmark

The Word "Laterite" has been derived from the _____ language.
"लेटराइट" शब्द _____ भाषा से लिया गया है।

- (A) Greek
यूनानी (ग्रीक)
- (B) French
फ्रांसीसी (फ्रेंच)

- (C) Spanish
स्पेनिश
- (D) **Latin (Correct Answer) (Chosen option)**
लातीनी (लैटिन)

Question No.20

Marks: 1.00

Bookmark

Mahatma Gandhi's biography 'Non Co-operation' was written by _____.
महात्मा गांधी की जीवनी 'नॉन-कोऑपरेशन' _____ द्वारा लिखी गई थी।

- (A) Dadabhai Naoroji
दादाभाई नौरोजी
- (B) **Louis Fischer (Correct Answer) (Chosen option)**
लुई फिशर
- (C) Rabindranath Tagore
रवींद्रनाथ टैगोर
- (D) A O Hume
ए ओ ह्यूम

Question No.21

Marks: 1.00

Bookmark

Prime Minister (PM) Narendra Modi co-chaired the virtual 18th India-ASEAN (Association of Southeast Asian Nations) Summit 2021 at the invitation of _____.
प्रधानमंत्री (पीएम) नरेंद्र मोदी ने _____ के निमंत्रण पर आभासी 18 वें भारत-आसियान (दक्षिणपूर्व एशियाई देशों का संघ) शिखर सम्मेलन 2021 की सह-अध्यक्षता की।

- (A) Singapore Prime Minister
सिंगापुर के प्रधानमंत्री
- (B) **Sultan of Brunei (Correct Answer) (Chosen option)**
ब्रुनेई के सुल्तान
- (C) Malaysian Prime minister
मलेशियाई प्रधानमंत्री
- (D) Vietnam President
वियतनाम राष्ट्रपति

Question No.22

Marks: 1.00

Bookmark

Who built the famous Brihadeshwara temple at Tanjore?
तंजौर में प्रसिद्ध बृहदेश्वर मंदिर किसने बनवाया था?

- (A) **Rajendra Chola (Chosen option)**
राजेंद्र चोल
- (B) Vijayalaya Chola
विजयालय चोल
- (C) Vijayaditya Chola
विजयादित्य चोल
- (D) **Raja Raja Chola (Correct Answer)**
राजाराज चोल

Question No.23

Marks: 1.00

Bookmark

Kuchipudi is a classical dance form of which state?
कुचिपुड़ी किस राज्य का शास्त्रीय नृत्य है?

- (A) West Bengal
पश्चिम बंगाल
- (B) **Andhra Pradesh (Correct Answer) (Chosen option)**
आंध्र प्रदेश
- (C) Tamil Nadu
तमिलनाडु
- (D) Uttar Pradesh
उत्तर प्रदेश

Question No.24

Marks: 1.00

Bookmark

In 1946, the British Government tried the _____ to convince the Congress and Muslim league for a federal system.

संघीय व्यवस्था हेतु, ब्रिटिश सरकार ने सन 1946 में _____ के माध्यम से कांग्रेस और मुस्लिम लीग को मनाने का प्रयास किया।

- (A) C.Rajagopalachari Formula
सी. राजगोपालाचारी फॉर्मूला
- (B) **Cabinet Mission (Correct Answer) (Chosen option)**
कैबिनेट मिशन
- (C) Cripps Mission
क्रिप्स मिशन
- (D) Simon Commission
साइमन कमीशन

Question No.25

Marks: 1.00

Bookmark

As per latest RBI Guidelines, Certificate of Deposit(CD) shall be issued in minimum denomination of:

आरबीआई के नवीनतम दिशानिर्देशों के अनुसार, जमा प्रमाणपत्र (सीडी) _____ के न्यूनतम मूल्यवर्ग में जारी किया जाएगा।

- (A) **5 Lakh (Correct Answer) (Chosen option)**
5 लाख
- (B) 3 Lakhs
3 लाख
- (C) 4 Lakh
4 लाख
- (D) 2 Lakhs
2 लाख

Quantitative Aptitude - Quantitative Aptitude

Question No.1

Marks: 1.00

Bookmark

Find 40% of 101050.

101050 का 40% ज्ञात कीजिए।

- (A) 40390
40390
- (B) 40620
40620
- (C) **40420 (Correct Answer) (Chosen option)**
40420
- (D) 40520
40520

Question No.2

Marks: 1.00

Bookmark

What value should come in the place of question mark (?) in the following equation?

$$(6190+13211) \div ? = 669$$

निम्नलिखित समीकरण में प्रश्नवाचक चिन्ह (?) के स्थान पर कौनसा मान आना चाहिए?

$$(6190+13211) \div ? = 669$$

- (A) 27
27
- (B) 25
25
- (C) 31
31
- (D) **29 (Correct Answer) (Chosen option)**
29

Question No.3

Marks: 1.00

Bookmark

A mixture contains milk and water in the ratio 7:6. If 21 litres of water is added to the mixture, milk and water in the mixture becomes equal. Find the quantity of milk in the mixture. (In litres)

एक मिश्रण में दूध और पानी का अनुपात 7:6 है। यदि मिश्रण में 21 लीटर पानी मिला दिया जाए, तो मिश्रण में दूध और पानी बराबर हो जाता है। मिश्रण में दूध की मात्रा ज्ञात कीजिए। (लीटर में)

- (A) 157
157
- (B) **147 (Correct Answer)** (Chosen option)
147
- (C) 162
162
- (D) 152
152

Question No.4

Marks: 1.00

Bookmark

The ratio of two numbers is 23:24 and their sum is 188. Find the greater number.
दो संख्याओं का अनुपात 23:24 है और उनका योग 188 है। बड़ी संख्या ज्ञात कीजिए।

- (A) 104
104
- (B) **96 (Correct Answer)** (Chosen option)
96
- (C) 92
92
- (D) 100
100

Question No.5

Marks: 1.00

Bookmark

What value should come in the place of question mark (?) in the following equation?

$$(236 \div 4) + (19/7)(20/8)(56) = 34 + ?$$

निम्नलिखित समीकरण में प्रश्नवाचक चिन्ह (?) के स्थान पर कौनसा मान आना चाहिए?

$$(236 \div 4) + (19/7)(20/8)(56) = 34 + ?$$

- (A) 403
403
- (B) 399
399
- (C) 401
401
- (D) **405 (Correct Answer)** (Chosen option)
405

Question No.6

Marks: 1.00

Bookmark

Find the time when: (In years)

Principal = Rs.6525, SI = Rs.7830 and rate = 8% p.a.

समय ज्ञात कीजिए जब: (वर्षों में)

मूलधन = Rs.6525, साधारण ब्याज = Rs.7830 और दर = 8% प्रति वर्ष।

- (A) 20
20
- (B) **15 (Correct Answer)** (Chosen option)
15
- (C) 30
30
- (D) 25
25

Question No.7

Marks: 1.00

Bookmark

Find the average of numbers 143, 294, 142, 146, 138, 144, 134.

143, 294, 142, 146, 138, 144, 134 — इन संख्याओं का औसत ज्ञात कीजिए।

- (A) 173
173
- (B) **163 (Correct Answer)** (Chosen option)
163
- (C) 183

183

- (D) 193
193

Question No.8

Marks: 1.00

Bookmark

What value should come in the place of question mark (?) in the following equation?

$$(15 \times 15 \times 15) \div (5 \times 5 \times 5) = ?$$

निम्नलिखित समीकरण में प्रश्नवाचक चिन्ह (?) के स्थान पर कौनसा मान आना चाहिए?

$$(15 \times 15 \times 15) \div (5 \times 5 \times 5) = ?$$

- (A) **27 (Correct Answer)** (Chosen option)
27
- (B) 33
33
- (C) 29
29
- (D) 31
31

Question No.9

Marks: 1.00

Bookmark

Prasad obtained 71, 70, 72, 77 and 80 marks(out of 100) in English, Mathematics, Physics, Chemistry and Biology. What is his average mark?

प्रसाद ने अंग्रेजी, गणित, भौतिकी, रसायन विज्ञान और जीव विज्ञान में (100 में से) 71, 70, 72, 77 और 80 अंक प्राप्त किए। उसका औसत अंक क्या है?

- (A) **74 (Correct Answer)** (Chosen option)
74
- (B) 76
76
- (C) 70
70
- (D) 72
72

Question No.10

Marks: 1.00

Bookmark

What percent of 1716 is 429?

1716 का कितना प्रतिशत 429 होता है?

- (A) 30
30
- (B) 20
20
- (C) 35
35
- (D) **25 (Correct Answer)** (Chosen option)
25

Question No.11

Marks: 1.00

Bookmark

Find the simple interest when: (In Rs.)

Principal = Rs.4190, rate = 5% p.a. and time = 12 years

साधारण ब्याज ज्ञात कीजिए जब: (Rs. में)

मूलधन = Rs.4190, दर = 5% प्रति वर्ष और समय = 12 वर्ष

- (A) **2514 (Correct Answer)** (Chosen option)
2514
- (B) 2214
2214
- (C) 2414
2414
- (D) 2314
2314

Question No.12

Marks: 1.00

Bookmark If $9a=10b$ and $11b=12c$, Find $a:b:c$?यदि $9a=10b$ और $11b=12c$ हैं, तो $a:b:c$ ज्ञात करें?

- (A) 36:33:40
36:33:40
- (B) 40:37:33
40:37:33
- (C) **40:36:33 (Correct Answer)** (Chosen option)
40:36:33
- (D) 33:40:36
33:40:36

Question No.13

Marks: 1.00

Bookmark

A basket is bought for Rs.693 and sold at Rs.507. Find 50% of Loss. (In Rs.)

एक टोकरी Rs.693 में खरीदी जाती है और Rs.507 में बेची जाती है। हानि का 50% ज्ञात कीजिए। (Rs. में)

- (A) 87
87
- (B) 89
89
- (C) **93 (Correct Answer)** (Chosen option)
93
- (D) 91
91

Question No.14

Marks: 1.00

Bookmark

Mitansh and Nasib together can do a piece of work in 48 days and Otto can do it in 144 days. In how many days will Mitansh, Nasib and Otto can do it together?

मितांश और नसीब मिलकर एक काम को 48 दिनों में पूरा कर सकते हैं और ओटो इसे 144 दिनों में कर पूरा सकता है। मितांश, नसीब और ओटो, इस काम को एकसाथ कितने दिनों में कर पूरा सकते हैं?

- (A) 30
30
- (B) 32
32
- (C) 34
34
- (D) **36 (Correct Answer)** (Chosen option)
36

Question No.15

Marks:

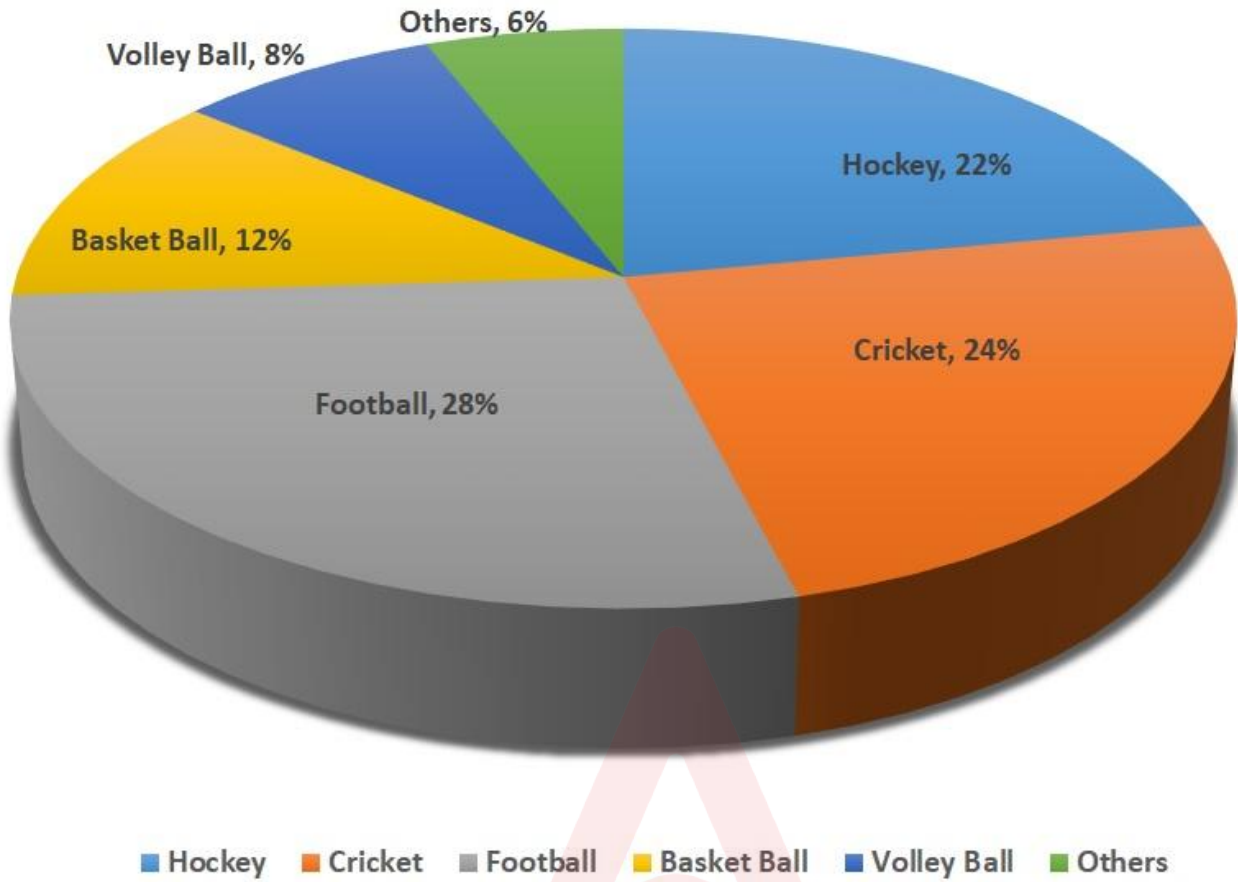
1.00

Bookmark

The pie chart given here shows the spendings of a college on various sports during a particular year. Study the graph carefully and answer the questions given below it.

If the total amount spent on sports during the year be Rs.1,80,000 , find the amount spent on Volley Ball. (In Rs.)

Spending of a college on various sports during a particular year (in %)

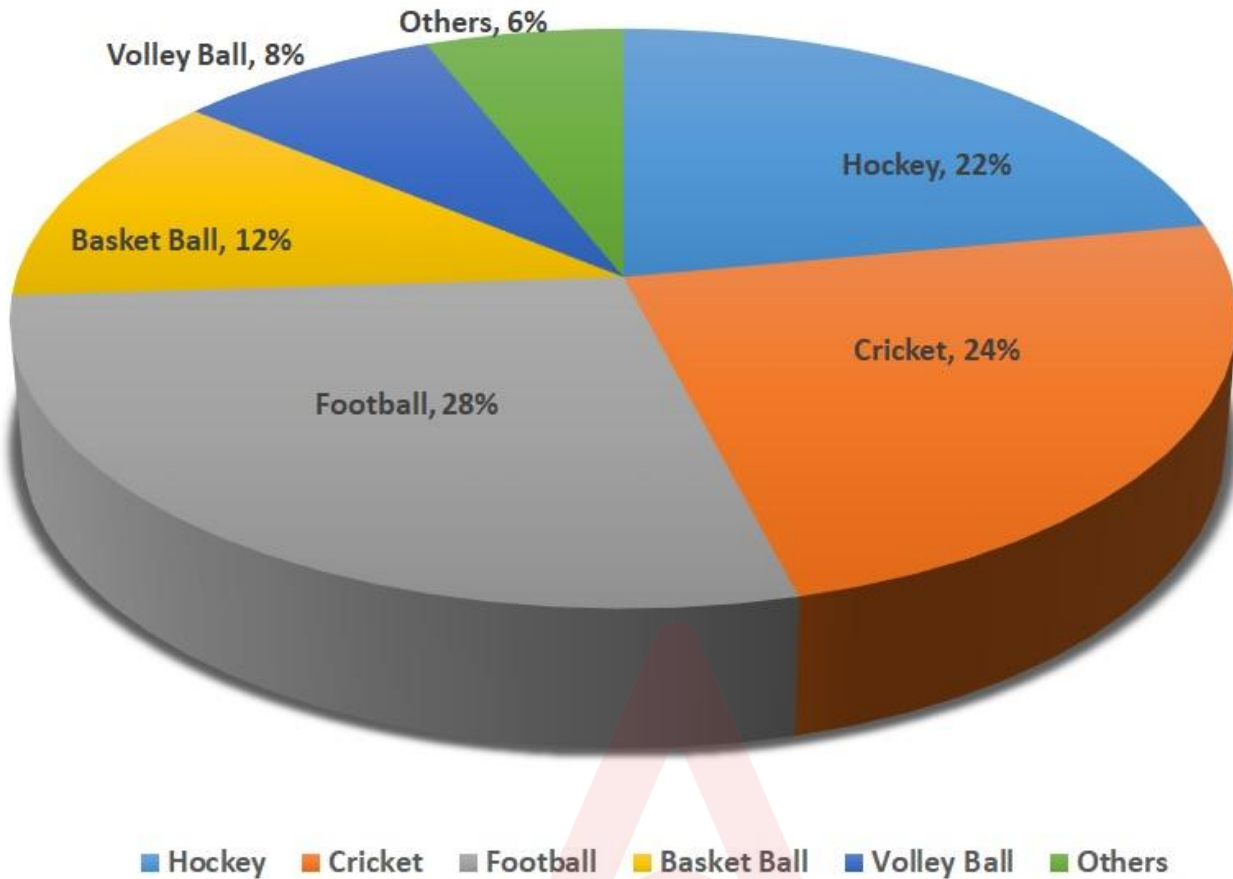


यहां दिया गया पाई चार्ट एक विशेष वर्ष के दौरान विभिन्न खेलों पर एक कॉलेज के खर्च को दर्शाता है।
ग्राफ का ध्यानपूर्वक अध्ययन करें और उसके नीचे दिए गए प्रश्नों के उत्तर दें।
यदि वर्ष के दौरान खेल पर खर्च की गई कुल राशि Rs.1,80,000 है,



तो वॉलीबॉल पर खर्च की गई राशि ज्ञात कीजिए। (Rs. में)

Spending of a college on various sports during a particular year (in %)



- (A) 15400
15400
- (B) **14400 (Correct Answer)** (Chosen option)
14400
- (C) 13400
13400
- (D) 12400
12400

Question No.16

Marks: 1.00

Bookmark

The ratio of three numbers is 32:33:34 and their sum is 4950. Find the second number.
तीन संख्याओं का अनुपात 32:33:34 है और उनका योग 4950 है। दूसरी संख्या ज्ञात कीजिए।

- (A) **1650 (Correct Answer)** (Chosen option)
1650
- (B) 1686
1686
- (C) 1674
1674
- (D) 1662
1662

Question No.17

Marks: 1.00

Bookmark

A can finish a work in 150 days and B can do the same work in 225 days. Working together, they will complete the same work in how many days?

A एक काम को 150 दिनों में पूरा कर सकता है और B उसी काम को 225 दिनों में कर सकता है। एक साथ काम करते हुए, वे उसी काम को कितने दिनों में पूरा करेंगे?

- (A) 92
92

(B) 90 (Correct Answer) (Chosen option)

90

(C) 88
88

(D) 86
86

Question No.18

Marks: 1.00

Bookmark

A toy is bought for Rs.415 and sold at Rs.531. Find 50% of profit. (In Rs.)

एक खिलौना Rs.415 में खरीदा जाता है और Rs.531 में बेचा जाता है। लाभ का 50% ज्ञात कीजिए। (Rs. में)

(A) 58 (Correct Answer) (Chosen option)

58

(B) 56
56

(C) 62
62

(D) 60
60

Question No.19

Marks: 1.00

Bookmark

Find the area of Isosceles Right Angle Triangle, whose side is 50 cm. (In cm^2)

एक समद्विबाहु समकोण त्रिभुज की भुजा 50 cm है। इसका क्षेत्रफल ज्ञात करें। (cm^2 में)

(A) 1250 (Correct Answer) (Chosen option)

1250

(B) 1450
1450

(C) 1350
1350

(D) 1150
1150

Question No.20

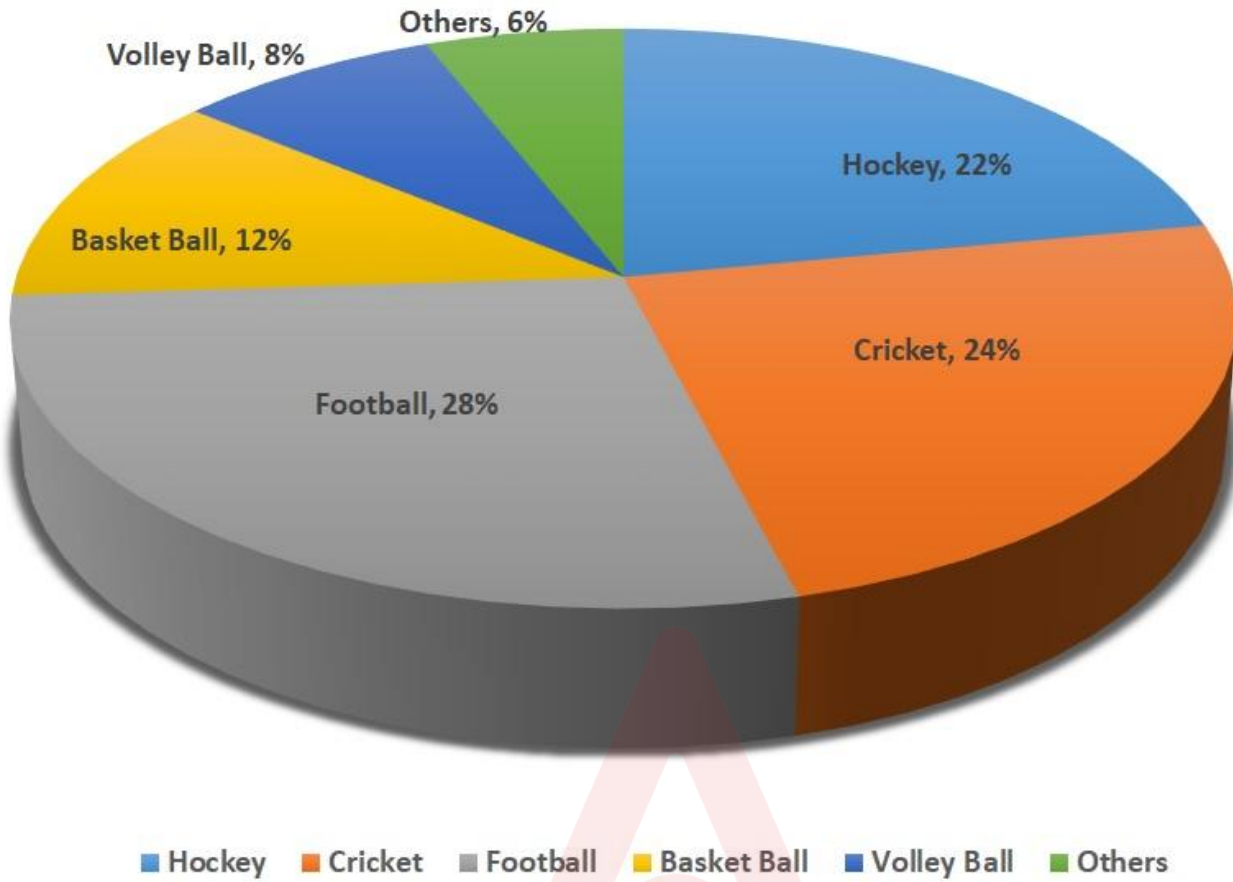
Marks:
1.00

Bookmark

The pie chart given here shows the spendings of a college on various sports during a particular year. Study the graph carefully and answer the questions given below it.

If the total amount spent on sports during the year be Rs.1,80,000 , find the amount spent on Basketball. (In Rs.)

Spending of a college on various sports during a particular year (in %)

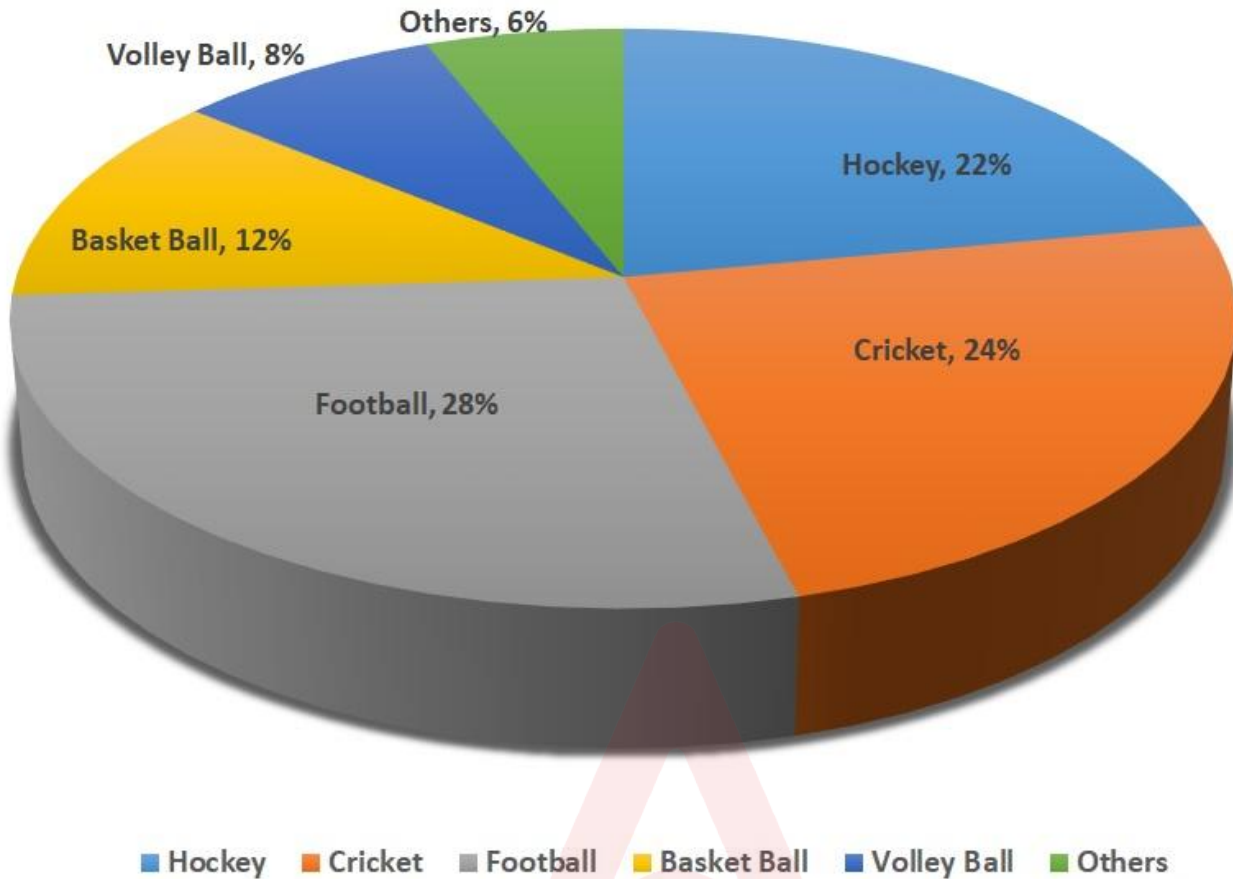


यहां दिया गया पाई चार्ट एक विशेष वर्ष के दौरान विभिन्न खेलों पर एक कॉलेज के खर्च को दर्शाता है।
ग्राफ का ध्यानपूर्वक अध्ययन करें और इसके नीचे दिए गए प्रश्नों के उत्तर दें।
यदि वर्ष के दौरान खेल पर खर्च की गई कुल राशि Rs.1,80,000 है,



तो बास्केटबॉल पर खर्च की गई राशि का पता लगाएं। (Rs. में)

Spending of a college on various sports during a particular year (in %)



- (A) 24600
24600
- (B) 22600
22600
- (C) 23600
23600
- (D) **21600 (Correct Answer)** (Chosen option)
21600

Question No.21

Marks: 1.00

Bookmark

What value should come in the place of question mark (?) in the following equation?

$$? \times (157+58.5) = 10775$$

निम्नलिखित समीकरण में प्रश्नवाचक चिन्ह (?) के स्थान पर कौनसा मान आना चाहिए?

$$? \times (157+58.5) = 10775$$

- (A) 52
52
- (B) **50 (Correct Answer)** (Chosen option)
50
- (C) 48
48
- (D) 54
54

Question No.22

Marks: 1.00

Bookmark

Pipe A can fill a tank in 153 minutes and Pipe B can empty the same tank in 306 minutes. If both pipes are opened together, how many minutes will it take to fill the empty tank?

पाइप A एक टंकी को 153 मिनट में भर सकता है और पाइप B उसी टंकी को 306 मिनट में खाली कर सकता है। यदि दोनों पाइपों को एक साथ खोल दिया जाए, तो खाली टंकी को भरने में कितने मिनट का समय लगेगा?

- (A) 304
304
- (B) 310
310
- (C) **306 (Correct Answer)** (Chosen option)
306
- (D) 308
308

Question No.23

Marks: 1.00

Bookmark

The average of 4 terms is 143 and the 1st term is $\frac{1}{3}$ of the remaining terms. What will be the first term?
4 पदों का औसत 143 है और पहला पद, बाकि पदों का $\frac{1}{3}$ है। पहला पद क्या होगा?

- (A) 145
145
- (B) 141
141
- (C) 147
147
- (D) **143 (Correct Answer)** (Chosen option)
143

Question No.24

Marks: 1.00

Bookmark

If 30% of a certain number is 717, then what is 70% of that number?
यदि एक निश्चित संख्या का 30% 717 है, तो उस संख्या का 70% कितना है?

- (A) 1773
1773
- (B) **1673 (Correct Answer)** (Chosen option)
1673
- (C) 1973
1973
- (D) 1873
1873

Question No.25

Marks: 1.00

Bookmark

If 219% of $X = 391\%$ of 219, what is the value of X ?
यदि X का 219% = 219 का 391% है, तो X का मान क्या है?

- (A) 385
385
- (B) 387
387
- (C) 389
389
- (D) **391 (Correct Answer)** (Chosen option)
391

English - English

Case Study - 1 to 3

3.00

Read the short passage below and answer the questions that follow.

Alfred Nobel's willed legacy to reward exceptional work that furthers fraternity among nations, eliminates or reduces armies and promotes congresses of peace has brought the Nobel Peace Prize to a variety of causes — from abolition of landmines, nuclear and chemical weapons to addressing climate change, besides conflict resolution. This year's prize has been awarded to the World Food Programme (WFP), of the UN system, for its contribution to combating hunger in conflict and disaster-struck sites. The Norwegian Nobel Committee took note of the WFP's life-saving role in the year of the pandemic, staving off catastrophes of hunger in Yemen, Congo, Nigeria, South Sudan and Burkina Faso. The Prize is a fitting tribute to the aid workers who brave hazardous conditions to reach starving people in theatres of war, civil strife and natural disasters, moving food on aircraft, trucks and even all-terrain amphibious vehicles. The decision to honour the WFP echoes the advice of another peace laureate from 1949, Lord John Boyd Orr, the first head of the FAO, that peace cannot be built on empty stomachs. That counsel must resonate even more with all countries and foster greater cooperation to close the WFP's funding gap of \$4.1 billion, as the world's hunger map presents a depressing picture with more than a quarter of the population facing undernourishment in many

countries; in strife-ridden Syria, an estimated 4.6 million people survive on food aid. Clearly, without stronger commitment from the big powers, the challenge to feed the millions who suffer acute hunger due to conflict and failed agriculture can never be met.

The recognition that the WFP has received can help the humanitarian organisation prepare for a decade of ambition and help meet the Sustainable Development Goals (SDG). Of central importance is SDG 2 — achieving zero hunger by 2030 — a target that requires **determination** to resolve festering armed conflict, and more fundamentally, to mitigate carbon emissions early and avert effects on agriculture from disastrous climate events. As the Norwegian committee has pointed out, the need for international solidarity and multilateral cooperation is more conspicuous than ever. Democracy also needs strengthening to help achieve equitable food distribution and end hunger, a salutary outcome experienced by free societies that also have unfettered media. Several poor countries have suffered a severe setback to their developmental aspirations due to the pandemic, and lack strong institutional governance to manage the crisis. This is a time for the world's big powers to strengthen the UN system, espousing fraternity, shunning militarism, greening economies and resolving conflicts in the true spirit of the Peace Prize.

Question No.1

Marks: 1.00

Bookmark

Who was the first head of the FAO?
Who was the first head of the FAO?

- (A) Woodrow Wilson
Woodrow Wilson
- (B) **Lord John Boyd Orr (Correct Answer)** (Chosen option)
Lord John Boyd Orr
- (C) NC Saxena
NC Saxena
- (D) Alfred Nobel
Alfred Nobel

Question No.2

Marks: 1.00

Bookmark

The letter G in the SDG stands for:
The letter G in the SDG stands for:

- (A) Grades
Grades
- (B) Groups
Groups
- (C) Gaps
Gaps
- (D) **Goals (Correct Answer)** (Chosen option)
Goals

Question No.3

Marks: 1.00

Bookmark

What is the contextual meaning for the highlighted word 'Determination'?
What is the contextual meaning for the highlighted word 'Determination'?

- (A) Theory
Theory
- (B) Spurious
Spurious
- (C) Ambiguity
Ambiguity
- (D) **Certainty (Correct Answer)** (Chosen option)
Certainty

Question No.4

Marks: 1.00

Bookmark

Replace the underlined phrase grammatically and conceptually with the help of the given options. If the given sentence is correct then select the option 'The given sentence is correct'.

Bus commuters in Tamil Nadu **will have to face a harrowing time from** Thursday as nine transport trade unions will begin observing their indefinite strike today.

Replace the underlined phrase grammatically and conceptually with the help of the given options. If the given sentence is correct then select the option 'The given sentence is correct'.

Bus commuters in Tamil Nadu **will have to face a harrowing time from** Thursday as nine transport trade unions will begin observing their indefinite strike today.

- (A) will has to face a harrowing time from
will has to face a harrowing time from
- (B) will have for face a harrowing time from
will have for face a harrowing time from
- (C) will has to face an harrowing time from
will has to face an harrowing time from
- (D) **The given sentence is correct (Correct Answer) (Chosen option)**
The given sentence is correct

Question No.5

Marks: 1.00

Bookmark

Fill in the blank with suitable verb.

Have you _____ chinese food before?
Fill in the blank with suitable verb.

Have you _____ chinese food before?

- (A) **eaten (Correct Answer) (Chosen option)**
eaten
- (B) eat
eat
- (C) ate
ate
- (D) eats
eats

Question No.6

Marks: 1.00

Bookmark

Choose the word which best expresses the similar **meaning** of the given word " EQUIVOCATION ".
Choose the word which best expresses the similar **meaning** of the given word " EQUIVOCATION ".

- (A) uprightness
uprightness
- (B) Honesty
Honesty
- (C) **Ambiguity (Correct Answer) (Chosen option)**
Ambiguity
- (D) Certainty
Certainty

Question No.7

Marks: 1.00

Bookmark

Find the word which is correctly spelt from the given options.
Find the word which is correctly spelt from the given options.

- (A) Arithmatic
Arithmatic
- (B) Hypothatical
Hypothatical
- (C) Buisness
Buisness
- (D) **Embellish (Correct Answer) (Chosen option)**
Embellish

Question No.8

Marks: 1.00

Bookmark

Choose the word which best expresses the similar **meaning** of the given word " ORNATE ".
Choose the word which best expresses the similar **meaning** of the given word " ORNATE ".

- (A) Dull
Dull
- (B) **Elegant (Correct Answer) (Chosen option)**
Elegant
- (C) Unsophisticated
Unsophisticated
- (D) Callow
Callow

Question No.9

Marks: 1.00

Bookmark

Fill in the blank with suitable verb.

Jasmine _____ for her relatives.
Fill in the blank with suitable verb.

Jasmine _____ for her relatives.

- (A) **was waiting (Correct Answer) (Chosen option)**
was waiting
- (B) waiting
waiting
- (C) wait
wait
- (D) has waiting
has waiting

Question No.10

Marks: 1.00

Bookmark

Replace the underlined phrase grammatically and conceptually with the help of the given options. If the given sentence is correct then select the option 'The given sentence is correct'.

The strike will been observed by eight State Transport Undertakings (STUs), including the Metropolitan Transport Corporation.

Replace the underlined phrase grammatically and conceptually with the help of the given options. If the given sentence is correct then select the option 'The given sentence is correct'.

The strike will been observed by eight State Transport Undertakings (STUs), including the Metropolitan Transport Corporation.

- (A) will being observe by eight State Transport
will being observe by eight State Transport
- (B) **will be observed by eight State Transport (Correct Answer) (Chosen option)**
will be observed by eight State Transport
- (C) will been observed to eight State Transport
will been observed to eight State Transport
- (D) The given sentence is correct
The given sentence is correct

Question No.11

Marks: 1.00

Bookmark

Fill in the blanks with suitable Preposition from the given alternatives.

The train leaves the junction _____ 7.10 A.M. each morning.
Fill in the blanks with suitable Preposition from the given alternatives.

The train leaves the junction _____ 7.10 A.M. each morning.

- (A) **at (Correct Answer) (Chosen option)**
at
- (B) in
in
- (C) against
against
- (D) across
across

Question No.12

Marks: 1.00

Bookmark

Choose the word which expresses nearly the **opposite** meaning of the given word " INTERIM ".
Choose the word which expresses nearly the **opposite** meaning of the given word " INTERIM ".

- (A) **Permanent (Correct Answer) (Chosen option)**
Permanent
- (B) Acting
Acting
- (C) Provisional

- Provisional
(D) Temporary
Temporary

Question No.13

Marks: 1.00

Bookmark

Choose the word which expresses nearly the **opposite** meaning of the given word "TURMOIL".
Choose the word which expresses nearly the **opposite** meaning of the given word "TURMOIL".

- (A) Disturbance
Disturbance
(B) Disorder
Disorder
(C) **Calm (Correct Answer) (Chosen option)**
Calm
(D) Bustle
Bustle

Question No.14

Marks: 1.00

Bookmark

Choose the word which expresses nearly the **opposite** meaning of the given word "ARBITRATION".
Choose the word which expresses nearly the **opposite** meaning of the given word "ARBITRATION".

- (A) Decision
Decision
(B) Compromise
Compromise
(C) Agreement
Agreement
(D) **Disagreement (Correct Answer) (Chosen option)**
Disagreement

Question No.15

Marks: 1.00

Bookmark

Fill in the blanks with suitable Article from the given alternatives.

Most of _____ chimneys come with a lifetime warranty offer so that you can enjoy cooking for many years.

Fill in the blanks with suitable Article from the given alternatives.

Most of _____ chimneys come with a lifetime warranty offer so that you can enjoy cooking for many years.

- (A) a
a
(B) an
an
(C) **the (Correct Answer) (Chosen option)**
the
(D) No Article
No Article

Question No.16

Marks: 1.00

Bookmark

Choose the word which best expresses the similar **meaning** of the given word "PANACHE".
Choose the word which best expresses the similar **meaning** of the given word "PANACHE".

- (A) Awkward
Awkward
(B) **Flamboyance (Correct Answer) (Chosen option)**
Flamboyance
(C) Apathy
Apathy
(D) Dislike
Dislike

Question No.17

Marks: 1.00

Bookmark

Fill in the blank with suitable verb.

She _____ a speech in the function.
Fill in the blank with suitable verb.

She _____ a speech in the function.

- (A) will be give
will be give
- (B) will does
will does
- (C) **will give (Correct Answer) (Chosen option)**
will give
- (D) would have be giving
would have be giving

Question No.18

Marks: 1.00

Bookmark

Fill in the blanks with suitable Preposition from the given alternatives.

Centre approves the construction of buds _____ Kaleswaram project.
Fill in the blanks with suitable Preposition from the given alternatives.

Centre approves the construction of buds _____ Kaleswaram project.

- (A) by
by
- (B) since
since
- (C) **under (Correct Answer) (Chosen option)**
under
- (D) about
about

Question No.19

Marks: 1.00

Bookmark

Fill in the blanks with suitable Article from the given alternatives.

English has become one of _____ common languages among people.
Fill in the blanks with suitable Article from the given alternatives.

English has become one of _____ common languages among people.

- (A) **the (Correct Answer) (Chosen option)**
the
- (B) a
a
- (C) an
an
- (D) No article
No article

Question No.20

Marks: 1.00

Bookmark

Rearrange the following to form a meaningful sentence and find the most logical order from the given options.

P: to a family of lighthouse designers
Q: suffered from respiratory problems for most of his life
R: Robert Louis Stevenson born in Scotland
S: was an only and sick child who

Rearrange the following to form a meaningful sentence and find the most logical order from the given options.

P: to a family of lighthouse designers
Q: suffered from respiratory problems for most of his life
R: Robert Louis Stevenson born in Scotland
S: was an only and sick child who

- (A) RSPQ
RSPQ
- (B) RSQP
RSQP
- (C) **RPSQ (Correct Answer) (Chosen option)**
RPSQ
- (D) RPQS
RPQS

Question No.21

Marks: 1.00

Bookmark

Fill in the blanks with suitable determiner from the given alternatives.

Could you pour me _____ water, please?

Fill in the blanks with suitable determiner from the given alternatives.

Could you pour me _____ water, please?

- (A) much
much
- (B) **some (Correct Answer) (Chosen option)**
some
- (C) any
any
- (D) most
most

Question No.22

Marks: 1.00

Bookmark

Find the word which is correctly spelt from the given options.

Find the word which is correctly spelt from the given options.

- (A) Encoragement
Encoragement
- (B) Catalist
Catalist
- (C) **Candidate (Correct Answer) (Chosen option)**
Candidate
- (D) Arthiritis
Arthiritis

Question No.23

Marks: 1.00

Bookmark

Fill in the blanks with suitable Preposition from the given alternatives.

The way to a man's heart is _____ his stomach.

Fill in the blanks with suitable Preposition from the given alternatives.

The way to a man's heart is _____ his stomach.

- (A) for
for
- (B) along
along
- (C) **through (Correct Answer) (Chosen option)**
through
- (D) after
after

Question No.24

Marks: 1.00

Bookmark

Rearrange the following to form a meaningful sentence and find the most logical order from the given options.

P: Polonius and Claudius spy on the

Q: during which Hamlet flies into

R: meeting between Ophelia and Hamlet

S: rage against women and marriage

Rearrange the following to form a meaningful sentence and find the most logical order from the given options.

P: Polonius and Claudius spy on the

Q: during which Hamlet flies into

R: meeting between Ophelia and Hamlet

S: rage against women and marriage

- (A) QSRP
QSRP
- (B) QSPR
QSPR
- (C) **PRQS (Correct Answer)** (Chosen option)
PRQS
- (D) PQRS
PQRS

Question No.25

Marks: 1.00

Bookmark

Fill in the blanks with suitable Article from the given alternatives.

The Hindu is _____ ninth-most-circulated newspaper in India.
Fill in the blanks with suitable Article from the given alternatives.

The Hindu is _____ ninth-most-circulated newspaper in India.

- (A) No Article
No Article
- (B) an
an
- (C) a
a
- (D) **the (Correct Answer)** (Chosen option)
the

Save & Print

Adda247