

## Multi Tasking Non Technical Staff and Havaladar CBIC and CBN Examination 2023

Roll Number	
Candidate Name	
Venue Name	R K Digital Computer Centre 1
Exam Date	04/09/2023
Exam Time	12:30 PM - 2:30 PM
Subject	MTS Non Tech Havaladar CBIC and CBN Examination 2023

Section : Numerical and Mathematical Ability

**Q.1** A sum invested at the rate of 6% simple interest per annum grows to ₹1,13,880 in 5 years. What is the simple interest, if the same amount is invested for 8 years at the rate of 9% per annum?

- Ans  1. ₹63,072  
 2. ₹60,565  
 3. ₹65,392  
 4. ₹58,050

Question ID : 264330158753

Option 1 ID : 264330622371

Option 2 ID : 264330622374

Option 3 ID : 264330622373

Option 4 ID : 264330622372

Status : Answered

Chosen Option : 1

**Q.2** Find the compound interest (Compounded annually) on ₹2,000 for  $2\frac{1}{2}$  years at 10% per annum.

- Ans  1. ₹ 561  
 2. ₹ 500  
 3. ₹ 521  
 4. ₹ 541

Question ID : 264330156078

Option 1 ID : 264330611711

Option 2 ID : 264330611713

Option 3 ID : 264330611714

Option 4 ID : 264330611712

Status : Answered

Chosen Option : 3

**Q.3** Study the given table and answer the question that follows.  
The table shows the number of voters in four different villages P, Q, R, S.

Villages	Total number of registered voters	Percentage of people who voted (Out of the total number of registered voters)
P	1100	68
Q	1450	62
R	1200	73
S	1124	87

The number of people who did not vote in village P is what percentage more than that who did not vote in village R?

- Ans
- 1.  $6\frac{52}{81}\%$
  - 2.  $8\frac{52}{81}\%$
  - 3.  $7\frac{52}{81}\%$
  - 4.  $9\frac{52}{81}\%$

Question ID : 264330157907  
Option 1 ID : 264330618987  
Option 2 ID : 264330618989  
Option 3 ID : 264330618988  
Option 4 ID : 264330618990

Status : Answered

Chosen Option : 3

**Q.4** Find the total surface area of a cuboid whose dimensions are 18 m, 6 m and 3 m.

- Ans
- 1.  $90\text{ m}^2$
  - 2.  $180\text{ m}^2$
  - 3.  $324\text{ m}^2$
  - 4.  $360\text{ m}^2$

Question ID : 264330153898  
Option 1 ID : 264330603056  
Option 2 ID : 264330603055  
Option 3 ID : 264330603058  
Option 4 ID : 264330603057

Status : Answered

Chosen Option : 4

**Q.5** Yug covers a certain distance with a speed of 56 km/h in  $\frac{3}{2}$  hours. If he wants to cover the same distance in 7 hours, what would be his speed (in km/h)?

- Ans**
- 1. 16
  - 2. 20
  - 3. 14
  - 4. 12

Question ID : 264330155752  
Option 1 ID : 264330610413  
Option 2 ID : 264330610414  
Option 3 ID : 264330610412  
Option 4 ID : 264330610411  
Status : Answered  
Chosen Option : 4

**Q.6** Vikram saves 13% of his monthly salary. If his monthly expenditure is ₹5,220, then his monthly savings is:

- Ans**
- 1. ₹680
  - 2. ₹580
  - 3. ₹349
  - 4. ₹780

Question ID : 264330156430  
Option 1 ID : 264330613112  
Option 2 ID : 264330613114  
Option 3 ID : 264330613111  
Option 4 ID : 264330613113  
Status : Answered  
Chosen Option : 4

**Q.7** 20 men can complete a piece of work in 40 days, and 40 women can do the same work in 60 days. If 10 men and 20 women work together, then in how many days will the work be completed?

- Ans**
- 1. 60
  - 2. 50
  - 3. 48
  - 4. 40

Question ID : 264330156012  
Option 1 ID : 264330611447  
Option 2 ID : 264330611450  
Option 3 ID : 264330611449  
Option 4 ID : 264330611448  
Status : Answered  
Chosen Option : 3

**Q.8** A grocery seller mixes two varieties of tea costing ₹300 per kg and ₹160 per kg in such a ratio that by selling this mixture at the rate of ₹187 per kg the shopkeeper earns 10% profit. In what respective ratio does the grocery seller mix the two varieties of tea?

- Ans**
- 1. 2 : 13
  - 2. 13 : 3
  - 3. 13 : 2
  - 4. 1 : 13

Question ID : 264330154118

Option 1 ID : 264330603936

Option 2 ID : 264330603937

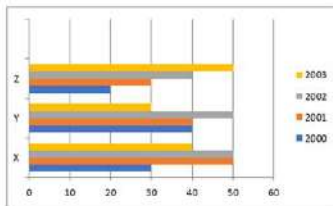
Option 3 ID : 264330603935

Option 4 ID : 264330603938

Status : Answered

Chosen Option : 1

**Q.9** The following bar graph indicates the production of cement by 3 companies X, Y and Z during the years 2000 - 2003. The quantity is in lakh bags. Study the bar graph carefully and answer the question.



What is the ratio of the average production of company X during the period 2000 - 2003 to the production of company Y during the same period (in lakh bags).

- Ans**
- 1. 17 : 16
  - 2. 8 : 7
  - 3. 12 : 17
  - 4. 10 : 7

Question ID : 264330153858

Option 1 ID : 264330602897

Option 2 ID : 264330602895

Option 3 ID : 264330602898

Option 4 ID : 264330602896

Status : Answered

Chosen Option : 3

**Q.10** The least common multiple (LCM) of  $p$  and  $q$  is  $r$ . The LCM of  $p^2q$  and  $pq^2$  is \_\_\_\_\_.

- Ans**
- 1.  $pqr^3$
  - 2.  $pqr$
  - 3.  $pq$
  - 4.  $pqr^2$

Question ID : 264330156247

Option 1 ID : 264330612390

Option 2 ID : 264330612388

Option 3 ID : 264330612387

Option 4 ID : 264330612389

Status : Answered

Chosen Option : 2

**Q.11** Two trains started from a station, at the same time in the same direction, at speeds of 90 km/h and 80 km/h. What will be the distance between the two trains after 5 hours?

- Ans**
- 1. 55 km
  - 2. 50 km
  - 3. 45 km
  - 4. 40 km

Question ID : 264330155971  
Option 1 ID : 264330611285  
Option 2 ID : 264330611283  
Option 3 ID : 264330611286  
Option 4 ID : 264330611284  
Status : Answered  
Chosen Option : 2

**Q.12** A solid piece of metal, cuboidal in shape, with dimensions 12 cm, 9 cm and 2 cm is recast into a cube. What is the lateral surface area (in  $\text{cm}^2$ ) of the cube?

- Ans**
- 1. 144
  - 2. 216
  - 3. 204
  - 4. 162

Question ID : 264330153793  
Option 1 ID : 264330602636  
Option 2 ID : 264330602635  
Option 3 ID : 264330602638  
Option 4 ID : 264330602637  
Status : Answered  
Chosen Option : 1

**Q.13** A person buys a table fan for ₹2,800 and sells it at a loss of 12%. What is the selling price of the table fan?

- Ans**
- 1. ₹2,466
  - 2. ₹2,468
  - 3. ₹2,462
  - 4. ₹2,464

Question ID : 264330156220  
Option 1 ID : 264330612281  
Option 2 ID : 264330612282  
Option 3 ID : 264330612279  
Option 4 ID : 264330612280  
Status : Answered  
Chosen Option : 4

Q.14 If  $A : B = 7 : 9$  and  $B : C = 5 : 6$ , Find the ratio of C and A respectively.

- Ans
- 1. 15 : 14
  - 2. 14 : 15
  - 3. 54 : 35
  - 4. 35 : 54

Question ID : 264330153767  
Option 1 ID : 264330602534  
Option 2 ID : 264330602533  
Option 3 ID : 264330602532  
Option 4 ID : 264330602531  
Status : Answered  
Chosen Option : 4

Q.15 The average weight of 17 men is 63 kg and the average weight of 36 women is 54 kg. What is the average weight (in kg) of all the men and women together? (Rounded off to the nearest integer)

- Ans
- 1. 59
  - 2. 62
  - 3. 57
  - 4. 52

Question ID : 264330155727  
Option 1 ID : 264330610312  
Option 2 ID : 264330610311  
Option 3 ID : 264330610313  
Option 4 ID : 264330610314  
Status : Answered  
Chosen Option : 1

Q.16 A vessel contains liquid A and liquid B in the ratio 4 : 9. If 8 litres of liquid A is added to the vessel, the new ratio becomes 8 : 9. Find the quantity of liquid A (in litres) in the original mixture.

- Ans
- 1. 12
  - 2. 9
  - 3. 8
  - 4. 6

Question ID : 264330155729  
Option 1 ID : 264330610319  
Option 2 ID : 264330610320  
Option 3 ID : 264330610321  
Option 4 ID : 264330610322  
Status : Answered  
Chosen Option : 3

Q.17 Which of the following expressions has value equal to 0?

Ans

✗ 1.  $(2 \times 3 + 5 - (1 - 2(3 - 2 \times 2)))$

✗ 2.  $(2 \times 3 - 5 - (1 + 2(3 - 2 \times 2)))$

✓ 3.  $(2 \times 3 - 5 + (1 + 2(3 - 2 \times 2)))$

✗ 4.  $(2 \times 3 - 5 - (1 - 2(3 - 2 \times 2)))$

Question ID : 264330153796

Option 1 ID : 264330602650

Option 2 ID : 264330602648

Option 3 ID : 264330602649

Option 4 ID : 264330602647

Status : Answered

Chosen Option : 3

Q.18 Two numbers are in the ratio of 6 : 7. If the difference between these numbers is 16, then find the numbers.

Ans

✓ 1. 96, 112

✗ 2. 80, 96

✗ 3. 120, 136

✗ 4. 104, 120

Question ID : 264330153876

Option 1 ID : 264330602967

Option 2 ID : 264330602969

Option 3 ID : 264330602968

Option 4 ID : 264330602970

Status : Answered

Chosen Option : 1

Q.19 A, B and C can complete a work in 10, 15 and 20 days, respectively. They work on alternate days such that 1<sup>st</sup> day A, 2<sup>nd</sup> day B and 3<sup>rd</sup> day C. Again 4<sup>th</sup> day A, 5<sup>th</sup> day B and so on. If they work in the same way, in how many days will the work be completed?

Ans

✗ 1.  $13 \frac{1}{4}$

✗ 2. 15

✗ 3. 14

✓ 4.  $13 \frac{1}{2}$

Question ID : 264330154060

Option 1 ID : 264330603704

Option 2 ID : 264330603705

Option 3 ID : 264330603703

Option 4 ID : 264330603706

Status : Answered

Chosen Option : 4

**Q.20** A grocer purchased 50 kg of sugar at ₹40 per kg and mixed with 70 kg of sugar at ₹30 per kg. At what rate should he sell the mixture (per kg) to gain 20%?

- Ans**
- 1. ₹60
  - 2. ₹20
  - 3. ₹35
  - 4. ₹41

Question ID : 264330155997  
Option 1 ID : 264330611387  
Option 2 ID : 264330611389  
Option 3 ID : 264330611388  
Option 4 ID : 264330611390  
Status : Answered  
Chosen Option : 4

Section : Reasoning Ability and Problem Solving

**Q.1** 2 is related to 40 following a certain logic. Following the same logic, 5 is related to 250. To which of the following is 7 related to, following the same logic?

- Ans**
- 1. 470
  - 2. 490
  - 3. 450
  - 4. 400

Question ID : 264330151579  
Option 1 ID : 264330593945  
Option 2 ID : 264330593946  
Option 3 ID : 264330593944  
Option 4 ID : 264330593943  
Status : Answered  
Chosen Option : 2

**Q.2** Select the combination of letters that when sequentially placed in the blanks of the given series, will complete the series.

R \_ \_ RT \_ R \_ R \_ TR

- Ans**
- 1. RTRRT
  - 2. TTTRR
  - 3. TRRTR
  - 4. RTTTR

Question ID : 264330151641  
Option 1 ID : 264330594194  
Option 2 ID : 264330594191  
Option 3 ID : 264330594193  
Option 4 ID : 264330594192  
Status : Answered  
Chosen Option : 3



**Q.3** J, K, P, Q, R and M are sitting around a circular table facing the centre.  
J is sitting to the immediate left of M. R is sitting 2nd to the left of J. K is sitting 3rd to the right of J. P sits to the immediate right of R.  
Who sits 2nd to the left of K?

- Ans**
- 1. R
  - 2. Q
  - 3. M
  - 4. P

Question ID : 264330155651  
Option 1 ID : 264330610007  
Option 2 ID : 264330610010  
Option 3 ID : 264330610009  
Option 4 ID : 264330610008  
Status : Answered  
Chosen Option : 3

**Q.4** What should come in place of '?' in the given series?

3 20 54 ? 258 530 1074

- Ans**
- 1. 122
  - 2. 128
  - 3. 118
  - 4. 124

Question ID : 264330151499  
Option 1 ID : 264330593624  
Option 2 ID : 264330593626  
Option 3 ID : 264330593623  
Option 4 ID : 264330593625  
Status : Answered  
Chosen Option : 1

**Q.5** Read the given statements and conclusions carefully. You have to take the given statements to be true even if they seem to be at variance from commonly known facts. You have to decide which conclusion/s logically follow/s from the given statements.

Statements: All crows are sparrows. Some sparrows are parrots. All parrots are yellow.

Conclusion I: Some crows are parrots.

Conclusion II: Some yellow are parrots.

- Ans**
- 1. Only conclusion (II) is follow.
  - 2. Both conclusions (I) and (II) are follow.
  - 3. Only conclusion (I) is follow.
  - 4. Neither conclusion (I) nor (II) is follow.

Question ID : 264330155929  
Option 1 ID : 264330611120  
Option 2 ID : 264330611122  
Option 3 ID : 264330611119  
Option 4 ID : 264330611121  
Status : Answered  
Chosen Option : 1

**Q.6** The position of how many letters will remain unchanged if each of the letter in the word 'CATEGORY' is arranged in alphabetical order?

- Ans**
- 1. Three
  - 2. Two
  - 3. None
  - 4. One

Question ID : 264330154327  
Option 1 ID : 264330604774  
Option 2 ID : 264330604771  
Option 3 ID : 264330604773  
Option 4 ID : 264330604772  
Status : Answered  
Chosen Option : 4

**Q.7** What should come in place of ? in the given series?

978 967 956 945 934 ?

- Ans**
- 1. 922
  - 2. 923
  - 3. 921
  - 4. 924

Question ID : 264330151553  
Option 1 ID : 264330593840  
Option 2 ID : 264330593841  
Option 3 ID : 264330593839  
Option 4 ID : 264330593842  
Status : Answered  
Chosen Option : 2

**Q.8** What should come in place of ? in the given series based on the English alphabetical order?

ETM, AWO, WZQ, SCS, ?

- Ans**
- 1. MEU
  - 2. NFV
  - 3. OFU
  - 4. MEV

Question ID : 264330155807  
Option 1 ID : 264330610632  
Option 2 ID : 264330610631  
Option 3 ID : 264330610634  
Option 4 ID : 264330610633  
Status : Answered  
Chosen Option : 3

**Q.9** In a certain code language, 'YJM' is coded as '26-11-14' and 'SOP' is coded as '20-16-17'. What is the code for 'BTX' in the given code language?

- Ans**
- 1. 3-21-25
  - 2. 5-22-24
  - 3. 5-23-25
  - 4. 4-22-24

Question ID : **264330155822**  
Option 1 ID : **264330610691**  
Option 2 ID : **264330610694**  
Option 3 ID : **264330610693**  
Option 4 ID : **264330610692**  
Status : **Answered**  
Chosen Option : **1**

**Q.10** If G means '-'; D means '×'; A means '+'; B means '÷', then what will come in place of the question mark (?) in the following equation?

$$19 \text{ D } 6 \text{ B } 34 \text{ A } 2 \text{ G } 27 = ?$$

- Ans**
- 1. 126
  - 2. 104
  - 3. 65
  - 4. 83

Question ID : **264330154688**  
Option 1 ID : **264330606218**  
Option 2 ID : **264330606217**  
Option 3 ID : **264330606216**  
Option 4 ID : **264330606215**  
Status : **Answered**  
Chosen Option : **2**

**Q.11** In a certain code language, 'LIAR' is coded as '5148' and 'REAL' is coded as '1582'. What is the code for 'E' in the given code language?

- Ans**
- 1. 5
  - 2. 8
  - 3. 2
  - 4. 1

Question ID : **264330151702**  
Option 1 ID : **264330594437**  
Option 2 ID : **264330594436**  
Option 3 ID : **264330594438**  
Option 4 ID : **264330594435**  
Status : **Answered**  
Chosen Option : **3**

**Q.12** Select the combination of letters that when sequentially placed in the blanks of the given series will make it logically complete.

KC\_OK\_PO\_YSOKWV\_ K\_YO

- Ans**
- 1. MDHTV
  - 2. LJMST
  - 3. KJNVL
  - 4. MAKOU

Question ID : 264330156319  
Option 1 ID : 264330612676  
Option 2 ID : 264330612677  
Option 3 ID : 264330612675  
Option 4 ID : 264330612678  
Status : Answered  
Chosen Option : 2

**Q.13** In the following number-pairs, the second number is obtained by applying certain mathematical operations to the first number. Select the set in which the numbers are related in the same way as are the numbers of the following sets.

(NOTE: Operations should be performed on the whole numbers, without breaking down the numbers into its constituent digits. E.g. 13 – Operations on 13 such as adding / subtracting / multiplying etc. to 13 can be performed. Breaking down 13 into 1 and 3 and then performing mathematical operations on 1 and 3 is not allowed)

65, 74  
87, 96

- Ans**
- 1. 75, 123
  - 2. 63, 157
  - 3. 81, 156
  - 4. 92, 101

Question ID : 264330151622  
Option 1 ID : 264330594117  
Option 2 ID : 264330594118  
Option 3 ID : 264330594116  
Option 4 ID : 264330594115  
Status : Answered  
Chosen Option : 4

**Q.14** What should come in place of '?' in the given series?

13 52 169 520 1573 ?

- Ans**
- 1. 4781
  - 2. 4732
  - 3. 4895
  - 4. 4863

Question ID : 264330151477  
Option 1 ID : 264330593536  
Option 2 ID : 264330593535  
Option 3 ID : 264330593538  
Option 4 ID : 264330593537  
Status : Answered  
Chosen Option : 2

Q.15 Which figure should replace the question mark (?) if the following figure series were to be continued?

P	E	8	↑	8	3	3	8	↑	E	↑	⊖		
	⊖			P			□			3			?
↑	A	3	⊖	E	A	E	A	⊖	□	8	A		

Ans

✗ 1.

⊖	↑	E
		□
8	A	3

✓ 2.

⊖	↑	E
		L
8	A	□

✗ 3.

⊖	E	↑
		□
8	A	3

✗ 4.

⊖	E	↑
		L
8	A	□

Question ID : 264330154734

Option 1 ID : 264330606400

Option 2 ID : 264330606402

Option 3 ID : 264330606401

Option 4 ID : 264330606399

Status : Answered

Chosen Option : 2

**Q.16** उस शब्द-युग्म का चयन कीजिए जो नीचे दिए गए शब्दों के युग्म में व्यक्त किए गए समान संबंध का सबसे अच्छा निरूपण करता है।

(शब्दों को अर्थपूर्ण हिंदी शब्दों के रूप में माना जाना चाहिए और उन्हें शब्द में अक्षरों की संख्या/व्यंजन/स्वरों की संख्या के आधार पर एक दूसरे से संबंधित नहीं किया जाना चाहिए।)

सराहना : प्रशंसा करना

**Ans**

- ✓ 1. दावत देना : खातिर करना
- ✗ 2. रिझाना : ठुकरा देना
- ✗ 3. सुंदर बनाना : तरोताज़ा करना
- ✗ 4. सिखाना : सीखना

Question ID : 264330154640

Option 1 ID : 264330606023

Option 2 ID : 264330606026

Option 3 ID : 264330606025

Option 4 ID : 264330606024

Status : Answered

Chosen Option : 1

**Q.17** Read the given statement(s) and conclusions carefully. Assuming that the information given in the statements is true, even if it appears to be at variance with commonly known facts, decide which of the given conclusions logically follow(s) from the statement(s).

Statements: All the actors are girls. All the girls are beautiful.

Conclusions:

- (I) All the actors are beautiful.
- (II) Some girls are actors.

**Ans**

- ✓ 1. Both conclusions (I) and (II) are follows.
- ✗ 2. Only conclusion (II) is follows.
- ✗ 3. Only conclusion (I) is follows.
- ✗ 4. Neither conclusion (I) nor (II) is follows.

Question ID : 264330154431

Option 1 ID : 264330605190

Option 2 ID : 264330605188

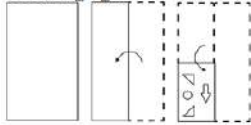
Option 3 ID : 264330605187

Option 4 ID : 264330605189

Status : Answered

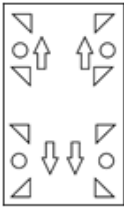
Chosen Option : 1

**Q.18** The sequence of folding a piece of paper and the manner in which the folded paper is cut is shown in the following figures. How would this paper look when unfolded?

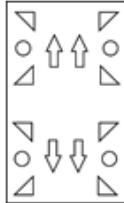


**Ans**

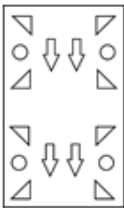
✗ 1.



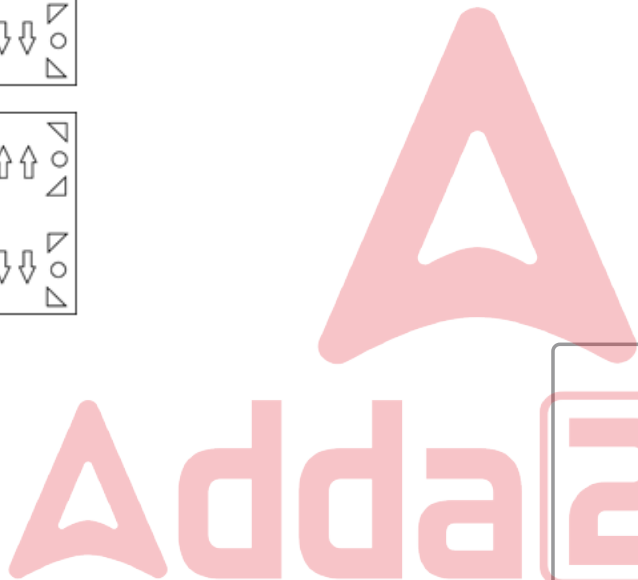
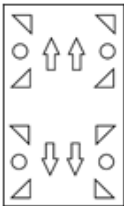
✓ 2.



✗ 3.



✗ 4.



Question ID : 264330155613

Option 1 ID : 264330609857

Option 2 ID : 264330609858

Option 3 ID : 264330609855

Option 4 ID : 264330609856

Status : Answered

Chosen Option : 2

**Q.19** What will come in place of '?' in the following equation, if '+' and '×' are interchanged and '-÷' and '÷+' are interchanged?

$$18 - 9 + 4 \times 3 + 5 = ?$$

**Ans** ✗ 1. 17

✓ 2. 13

✗ 3. 18

✗ 4. 19

Question ID : 264330154670

Option 1 ID : 264330606145

Option 2 ID : 264330606143

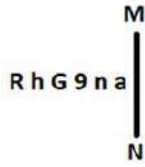
Option 3 ID : 264330606144

Option 4 ID : 264330606146

Status : Answered

Chosen Option : 2

Q.20 Select the correct mirror image of the given figure when the mirror is placed at MN as shown below.



- Ans
- 1. a u e e h R
  - 2. s u e G h R
  - 3. a u e e h R
  - 4. R h e n a

Question ID : 264330151512  
Option 1 ID : 264330593676  
Option 2 ID : 264330593675  
Option 3 ID : 264330593677  
Option 4 ID : 264330593678  
Status : Answered  
Chosen Option : 3

Section : General Awareness

Q.1 The Gua and Noamundi mines are located in with state of India?

- Ans
- 1. Assam
  - 2. Haryana
  - 3. Rajasthan
  - 4. Jharkhand

Question ID : 264330161527  
Option 1 ID : 264330633435  
Option 2 ID : 264330633438  
Option 3 ID : 264330633437  
Option 4 ID : 264330633436  
Status : Answered  
Chosen Option : 4

Q.2 What is a fiscal year?

- Ans
- 1. A year that represents the financial reporting period for the government
  - 2. A year with a surplus in government revenue
  - 3. A year with a deficit in government revenue
  - 4. A year in which tax rates are increased

Question ID : 264330157272  
Option 1 ID : 264330616454  
Option 2 ID : 264330616451  
Option 3 ID : 264330616452  
Option 4 ID : 264330616453  
Status : Answered  
Chosen Option : 1



Q.3 The Constitution (Scheduled Castes and Scheduled Tribes) Order (Second Amendment) Bill, 2022, was passed in December 2022 and is related to which state?

- Ans
- 1. Bihar
  - 2. Uttarakhand
  - 3. Uttar Pradesh
  - 4. Karnataka

Question ID : 264330158334  
Option 1 ID : 264330620698  
Option 2 ID : 264330620696  
Option 3 ID : 264330620695  
Option 4 ID : 264330620697  
Status : Not Answered  
Chosen Option : --

Q.4 Identify the Kuchipudi dancer from following, who was awarded with 'Padma Shri' in the year 2022.

- Ans
- 1. Vidyanand Sarek
  - 2. Padmaja Reddy
  - 3. Dr. Veeraswamy Seshiah
  - 4. KV Rabiya

Question ID : 264330155528  
Option 1 ID : 264330609516  
Option 2 ID : 264330609517  
Option 3 ID : 264330609515  
Option 4 ID : 264330609518  
Status : Answered  
Chosen Option : 2

Q.5 Buddha Purnima is marked on a full moon day in the Hindu month of \_\_\_\_\_.

- Ans
- 1. Vaisakh
  - 2. Jyaistha
  - 3. Bhadra
  - 4. Ashadha

Question ID : 264330160830  
Option 1 ID : 264330630651  
Option 2 ID : 264330630652  
Option 3 ID : 264330630654  
Option 4 ID : 264330630653  
Status : Not Answered  
Chosen Option : --

Q.6 Which of the following is the official language of Afghanistan?

- Ans
- 1. Sinhala
  - 2. Burmese
  - 3. Dari
  - 4. Dzongkha

Question ID : 264330160175  
Option 1 ID : 264330628040  
Option 2 ID : 264330628042  
Option 3 ID : 264330628039  
Option 4 ID : 264330628041  
Status : Answered  
Chosen Option : 3

**Q.7 Who started the temple entry movement in 1927?**

- Ans**  1. Mahadev Govind Ranade  
 2. Bhimrao Ambedkar  
 3. Mahatma Gandhi  
 4. Annie Besant

Question ID : 264330162350  
Option 1 ID : 264330636729  
Option 2 ID : 264330636728  
Option 3 ID : 264330636727  
Option 4 ID : 264330636730  
Status : Answered  
Chosen Option : 2

**Q.8 In which state is Gobind Sagar (Bhakra Nangal Project) located?**

- Ans**  1. Himachal Pradesh  
 2. Gujarat  
 3. Rajasthan  
 4. Punjab

Question ID : 264330160140  
Option 1 ID : 264330627900  
Option 2 ID : 264330627902  
Option 3 ID : 264330627901  
Option 4 ID : 264330627899  
Status : Answered  
Chosen Option : 1

**Q.9 Pandit Ravi Shankar is known worldwide for playing which of the following musical instruments?**

- Ans**  1. Mohan Veena  
 2. Sarod  
 3. Been  
 4. Sitar

Question ID : 264330161771  
Option 1 ID : 264330634414  
Option 2 ID : 264330634413  
Option 3 ID : 264330634411  
Option 4 ID : 264330634412  
Status : Answered  
Chosen Option : 4

**Q.10 The Arabian Sea is an extension of which of the following oceans?**

- Ans**  1. Pacific Ocean  
 2. Southern Ocean  
 3. Arctic Ocean  
 4. Indian ocean

Question ID : 264330157836  
Option 1 ID : 264330618703  
Option 2 ID : 264330618706  
Option 3 ID : 264330618705  
Option 4 ID : 264330618704  
Status : Answered  
Chosen Option : 4

Q.11 Which of the following is a dimension of microfinance institutions (MFIs) in India?

- Ans  1. Outreach to rural areas  
 2. Loan interest rates  
 3. Investment in the stock market  
 4. Availability of credit cards

Question ID : 264330157292  
Option 1 ID : 264330616534  
Option 2 ID : 264330616531  
Option 3 ID : 264330616533  
Option 4 ID : 264330616532  
Status : Answered  
Chosen Option : 2

Q.12 Shambhu Maharaj was a renowned guru of which of the following Gharanas of Kathak?

- Ans  1. Lucknow  
 2. Jaipur  
 3. Raigarh  
 4. Banaras

Question ID : 264330160810  
Option 1 ID : 264330630572  
Option 2 ID : 264330630571  
Option 3 ID : 264330630574  
Option 4 ID : 264330630573  
Status : Answered  
Chosen Option : 1

Q.13 Which is the oldest Stupa of the Buddhist Period?

- Ans  1. Dhamek Stupa  
 2. Mahabodhi Stupa  
 3. Kesariya Stupa  
 4. Sanchi Stupa

Question ID : 264330160761  
Option 1 ID : 264330630378  
Option 2 ID : 264330630375  
Option 3 ID : 264330630376  
Option 4 ID : 264330630377  
Status : Not Answered  
Chosen Option : --

Q.14 Who conducts elections for both the houses of Parliament in India?

- Ans  1. Ministry of Parliamentary Affairs  
 2. Election Commission  
 3. President  
 4. Prime Minister

Question ID : 264330160860  
Option 1 ID : 264330630773  
Option 2 ID : 264330630771  
Option 3 ID : 264330630774  
Option 4 ID : 264330630772  
Status : Answered  
Chosen Option : 2

Q.15 The third battle of Panipat was fought in which of the following years?

- Ans  1. 1761  
 2. 1707  
 3. 1786  
 4. 1751

Question ID : 264330161734  
Option 1 ID : 264330634264  
Option 2 ID : 264330634263  
Option 3 ID : 264330634266  
Option 4 ID : 264330634265  
Status : Answered  
Chosen Option : 1

Q.16 'Untouchable' is a novel written by:

- Ans  1. Mulk Raj Anand  
 2. RC Majumdar  
 3. Premchand  
 4. Bankim Chandra Chattopadhyay

Question ID : 264330155498  
Option 1 ID : 264330609395  
Option 2 ID : 264330609396  
Option 3 ID : 264330609398  
Option 4 ID : 264330609397  
Status : Answered  
Chosen Option : 2

Q.17 Which dance form is associated with Natwari Dance?

- Ans  1. Kathak  
 2. Kuchipudi  
 3. Odissi  
 4. Kathakali

Question ID : 264330159053  
Option 1 ID : 264330623572  
Option 2 ID : 264330623574  
Option 3 ID : 264330623571  
Option 4 ID : 264330623573  
Status : Not Answered  
Chosen Option : --

Q.18 Birsa Munda hockey stadium is one of the India's largest hockey stadium. In which state is this stadium situated?

- Ans  1. Madhya Pradesh  
 2. Bihar  
 3. Odisha  
 4. Chhattisgarh

Question ID : 264330158355  
Option 1 ID : 264330620781  
Option 2 ID : 264330620779  
Option 3 ID : 264330620782  
Option 4 ID : 264330620780  
Status : Answered  
Chosen Option : 3

**Q.19** The directive principles are largely classified into three broad categories. Which of the following is NOT the part of this classification?

- Ans**
- 1. Liberal
  - 2. Socialistic
  - 3. Gandhian
  - 4. Authoritative

Question ID : 264330160859  
Option 1 ID : 264330630769  
Option 2 ID : 264330630767  
Option 3 ID : 264330630768  
Option 4 ID : 264330630770  
Status : Answered  
Chosen Option : 4

**Q.20** Which of the following countries did India defeat to clinch its maiden Women's Junior Hockey Asia Cup title?

- Ans**
- 1. Japan
  - 2. Chinese Taipei
  - 3. Malaysia
  - 4. South Korea

Question ID : 264330161129  
Option 1 ID : 264330631848  
Option 2 ID : 264330631850  
Option 3 ID : 264330631849  
Option 4 ID : 264330631847  
Status : Answered  
Chosen Option : 2

**Q.21** Who among the following is the author of the book 'Sita: An Illustrated Retelling of the Ramayana'?

- Ans**
- 1. Ravinder Singh
  - 2. Devdutt Pattanaik
  - 3. Amish Tripathi
  - 4. Durjoy Datta

Question ID : 264330155457  
Option 1 ID : 264330609234  
Option 2 ID : 264330609233  
Option 3 ID : 264330609231  
Option 4 ID : 264330609232  
Status : Not Answered  
Chosen Option : --

Q.22 Which soft metal in group 1 of the periodic table tarnishes within a few seconds of exposure to air?

- Ans  1. Barium  
 2. Sodium  
 3. Strontium  
 4. Francium

Question ID : 264330161054  
Option 1 ID : 264330631548  
Option 2 ID : 264330631549  
Option 3 ID : 264330631547  
Option 4 ID : 264330631550  
Status : Answered  
Chosen Option : 1

Q.23 The 'Ka Shad Mastieh' or victory dance of the \_\_\_\_\_ tribe of Meghalaya is an ancient war dance performed during the prominent festival of the tribe.

- Ans  1. Bhoi  
 2. War  
 3. Khasi  
 4. Jaintia

Question ID : 264330161345  
Option 1 ID : 264330632709  
Option 2 ID : 264330632710  
Option 3 ID : 264330632708  
Option 4 ID : 264330632707  
Status : Answered  
Chosen Option : 3

Q.24 What is the weight of the ball in handball for men?

- Ans  1. 425 to 475 gm  
 2. 325 to 375 gm  
 3. 525 to 575 gm  
 4. 225 to 275 gm

Question ID : 264330158248  
Option 1 ID : 264330620353  
Option 2 ID : 264330620351  
Option 3 ID : 264330620354  
Option 4 ID : 264330620352  
Status : Not Answered  
Chosen Option : --

**Q.25** Which vitamin is needed for a healthy immune system, low-light vision, and healthy skin?

- Ans
- 1. Vitamin K
  - 2. Vitamin B2
  - 3. Vitamin B9
  - 4. Vitamin A

Question ID : 264330160991  
Option 1 ID : 264330631296  
Option 2 ID : 264330631298  
Option 3 ID : 264330631297  
Option 4 ID : 264330631295  
Status : Answered  
Chosen Option : 4

Section : English Language and Comprehension

**Q.1** Select the option that can be used as a one-word substitute for the given group of words.  
Study of sound and sound waves

- Ans
- 1. Botany
  - 2. Physics
  - 3. Demography
  - 4. Acoustics

Question ID : 264330152772  
Option 1 ID : 264330598679  
Option 2 ID : 264330598681  
Option 3 ID : 264330598680  
Option 4 ID : 264330598682  
Status : Answered  
Chosen Option : 4

**Q.2** Select the most appropriate option to fill in the blank.  
The students of class 7 gave their teacher a gift, which was \_\_\_\_\_ to her.

- Ans
- 1. revealing
  - 2. shocking
  - 3. confusing
  - 4. surprising

Question ID : 264330152580  
Option 1 ID : 264330597923  
Option 2 ID : 264330597925  
Option 3 ID : 264330597926  
Option 4 ID : 264330597924  
Status : Answered  
Chosen Option : 4

**Q.3** Select the most appropriate synonym of the given word.  
**Obsession**

- Ans**  1. Discrimination  
 2. Fascination  
 3. Unconcern  
 4. Sympathy

Question ID : 264330153559  
Option 1 ID : 264330601736  
Option 2 ID : 264330601737  
Option 3 ID : 264330601735  
Option 4 ID : 264330601738  
Status : Answered  
Chosen Option : 2

**Q.4** The following sentence has been split into four segments. Identify the segment that contains a grammatical error and select the option which rectifies that error.

A lot of adulterants / are chemicals that can lead / to an range of health problems / in both children and adults.

- Ans**  1. to a range of health problems  
 2. are chemical that can lead  
 3. A lot of adulterant  
 4. in both children and adult.

Question ID : 264330141340  
Option 1 ID : 264330553696  
Option 2 ID : 264330553695  
Option 3 ID : 264330553697  
Option 4 ID : 264330553698  
Status : Answered  
Chosen Option : 1

**Q.5** Select the most appropriate option that can substitute the underlined segment in the given sentence.

They would find someone drive the wagon back across the desert.

- Ans**  1. in drive in the  
 2. to drive  
 3. to drive the  
 4. in driving

Question ID : 264330153482  
Option 1 ID : 264330601446  
Option 2 ID : 264330601445  
Option 3 ID : 264330601443  
Option 4 ID : 264330601444  
Status : Answered  
Chosen Option : 3



**Q.6** The following sentence has been split into four segments. Identify the segment that contains a grammatical error.

The ball / I kicked / went highly / in the sky.

- Ans
- 1. The ball
  - 2. went highly
  - 3. in the sky
  - 4. I kicked

Question ID : 264330153184  
Option 1 ID : 264330600295  
Option 2 ID : 264330600297  
Option 3 ID : 264330600298  
Option 4 ID : 264330600296  
Status : Answered  
Chosen Option : 2

**Q.7** Select the most appropriate idiom to fill in the blank.

Rajat is known for his notorious nature. He will be friendly to your face but likes

\_\_\_\_\_.

- Ans
- 1. to blow his trumpet
  - 2. to stab you in the back
  - 3. to paint the whole town red
  - 4. to get all bent out of the shape

Question ID : 264330153562  
Option 1 ID : 264330601750  
Option 2 ID : 264330601748  
Option 3 ID : 264330601749  
Option 4 ID : 264330601747  
Status : Answered  
Chosen Option : 2

**Q.8** Select the most appropriate meaning of the given idiom.

Barking up the wrong tree

- Ans
- 1. Provoke trouble
  - 2. To make a bad situation worse
  - 3. Getting a good start is important
  - 4. To be mistaken, to be looking for solutions in the wrong place

Question ID : 264330153280  
Option 1 ID : 264330600677  
Option 2 ID : 264330600676  
Option 3 ID : 264330600678  
Option 4 ID : 264330600675  
Status : Answered  
Chosen Option : 4

**Q.9** Select the option that can be used as a one-word substitute for the given group of words.

A creature which depends on others

- Ans
- 1. Microbes
  - 2. Virus
  - 3. Parasite
  - 4. Bacteria

Question ID : 264330152586

Option 1 ID : 264330597949

Option 2 ID : 264330597947

Option 3 ID : 264330597950

Option 4 ID : 264330597948

Status : Answered

Chosen Option : 3

**Q.10** Select the most appropriate idiom to fill in the blank.

The play I saw last night was a \_\_\_\_\_.

- Ans
- 1. hit the road
  - 2. hit the hay
  - 3. smash hit
  - 4. hit the roof

Question ID : 264330153099

Option 1 ID : 264330599962

Option 2 ID : 264330599959

Option 3 ID : 264330599960

Option 4 ID : 264330599961

Status : Answered

Chosen Option : 3

**Q.11** Select the most appropriate option to fill in the blank.

He is \_\_\_\_\_ of many chain snatching cases in Dariyaganj.

- Ans
- 1. ackused
  - 2. acxused
  - 3. akused
  - 4. accused

Question ID : 264330153306

Option 1 ID : 264330600781

Option 2 ID : 264330600780

Option 3 ID : 264330600779

Option 4 ID : 264330600782

Status : Answered

Chosen Option : 4

**Q.12** The following sentence has been split into four segments. Identify the segment that contains a grammatical error.  
Despite the setbacks and obstacles we faced, / our team rallied together and achieved our goals, / which teach us the importance of / teamwork, resilience, and determination.

- Ans**
- 1. Despite the setbacks and obstacles we faced,
  - 2. teamwork, resilience, and determination
  - 3. which teach us the importance of
  - 4. our team rallied together and achieved our goals,

Question ID : 264330144181  
Option 1 ID : 264330564987  
Option 2 ID : 264330564990  
Option 3 ID : 264330564989  
Option 4 ID : 264330564988  
Status : Answered  
Chosen Option : 3

**Q.13** Select the option that correctly rectifies the spelling error that is underlined.  
The questionnaire used by the researcher was of top quality.

- Ans**
- 1. questionnaire
  - 2. questionnaire
  - 3. questionairre
  - 4. questionnairee

Question ID : 264330153422  
Option 1 ID : 264330601219  
Option 2 ID : 264330601220  
Option 3 ID : 264330601221  
Option 4 ID : 264330601222  
Status : Answered  
Chosen Option : 2

**Q.14** The given sentence contains an error. Select the option that correctly rectifies the error.  
That career competition was the difficultest exam he had ever given.

- Ans**
- 1. That career competition was the difficultest exam than any he had ever given.
  - 2. That career competition was the most difficult exam than any he had ever given.
  - 3. That career competition was the most difficultest exam he had ever given.
  - 4. That career competition was the most difficult exam he had ever given.

Question ID : 264330152607  
Option 1 ID : 264330598034  
Option 2 ID : 264330598032  
Option 3 ID : 264330598031  
Option 4 ID : 264330598033  
Status : Answered  
Chosen Option : 4

**Q.15** Select the most appropriate idiom for the following sentence.  
Shweta organises the sale of handmade pottery at a cheap rate.

- Ans  1. Hush money  
 2. Go for a song  
 3. Having one's cake and eating it too  
 4. Making a fuss out of something

Question ID : 264330141303  
Option 1 ID : 264330553547  
Option 2 ID : 264330553548  
Option 3 ID : 264330553549  
Option 4 ID : 264330553550  
Status : Answered  
Chosen Option : 2

**Q.16** Select the most appropriate ANTONYM of the given word.  
Guilty

- Ans  1. Responsible  
 2. Innocent  
 3. Criminal  
 4. Patient

Question ID : 264330153364  
Option 1 ID : 264330601009  
Option 2 ID : 264330601008  
Option 3 ID : 264330601010  
Option 4 ID : 264330601007  
Status : Answered  
Chosen Option : 2

**Q.17** Identify the INCORRECTLY spelt word in the following sentence and select its correct spelling from the given options.  
The colours of the rainbow seemed to shine through the triangular prism as the sun hit the object.

- Ans  1. rainbouw  
 2. son  
 3. triangular  
 4. object

Question ID : 264330153110  
Option 1 ID : 264330600003  
Option 2 ID : 264330600005  
Option 3 ID : 264330600004  
Option 4 ID : 264330600006  
Status : Answered  
Chosen Option : 3

Q.18 Select the most appropriate option that can substitute the underlined segment in the given sentence.

The intrepid group of adventurers climbed the mountain despite of bad weather and road closures.

- Ans
- 1. despite
  - 2. in spite
  - 3. in view of
  - 4. due to

Question ID : 264330151854  
Option 1 ID : 264330595035  
Option 2 ID : 264330595036  
Option 3 ID : 264330595037  
Option 4 ID : 264330595038  
Status : Answered  
Chosen Option : 1

Q.19 Select the most appropriate option that can substitute the underlined segment in the given sentence.

The airplane flowed over the mountains, offering the passengers a breath-taking view of the majestic peaks below.

- Ans
- 1. flew beyond
  - 2. flew over
  - 3. flowed above
  - 4. flowed beyond

Question ID : 264330151858  
Option 1 ID : 264330595054  
Option 2 ID : 264330595053  
Option 3 ID : 264330595052  
Option 4 ID : 264330595051  
Status : Answered  
Chosen Option : 2

Q.20 Select the most appropriate ANTONYM of the given word.  
Ecstasy

- Ans
- 1. Euphoria
  - 2. Coarse
  - 3. Natural
  - 4. Despair

Question ID : 264330152676  
Option 1 ID : 264330598307  
Option 2 ID : 264330598309  
Option 3 ID : 264330598308  
Option 4 ID : 264330598310  
Status : Answered  
Chosen Option : 4

**Comprehension:**

In the following passage, some words have been deleted. Read the passage carefully and select the most appropriate option to fill in each blank.

As a boy, I was always exploring lonely places—neglected gardens and orchards, unoccupied houses, patches of scrub or wasteland, the fields outside the town, the fringes of the forest. On one of my rambles (1)\_\_\_\_\_the bungalow, I pushed my way through a thicket of lantana bushes and stumbled over a thick stone slab, twisting my ankle slightly as I fell. For some time, I sat on the grass massaging my foot. When the pain eased, I looked more (2)\_\_\_\_\_ at the stone slab and was surprised to find that it was a gravestone. It was almost entirely covered by ivy; obviously no one had been near it for years. I tugged at the ivy and some of it came away in my hands. There was some (3)\_\_\_\_\_ lettering on the grave, half-obscured by grass and moss. I could make out a name—Rose—but little more. I sat there for some time, (4)\_\_\_\_\_ over my discovery. I was wondering why 'Rose' should have been buried at so lonely a spot when there was a (5)\_\_\_\_\_ not far away.

**SubQuestion No : 21**

**Q.21** Select the most appropriate option to fill in blank number 1.

- Ans
- 1. before
  - 2. behind
  - 3. by dint of
  - 4. below

Question ID : 264330153544

Option 1 ID : 264330601676

Option 2 ID : 264330601678

Option 3 ID : 264330601677

Option 4 ID : 264330601675

Status : Answered

Chosen Option : 2

**Comprehension:**

In the following passage, some words have been deleted. Read the passage carefully and select the most appropriate option to fill in each blank.

As a boy, I was always exploring lonely places—neglected gardens and orchards, unoccupied houses, patches of scrub or wasteland, the fields outside the town, the fringes of the forest. On one of my rambles (1)\_\_\_\_\_the bungalow, I pushed my way through a thicket of lantana bushes and stumbled over a thick stone slab, twisting my ankle slightly as I fell. For some time, I sat on the grass massaging my foot. When the pain eased, I looked more (2)\_\_\_\_\_ at the stone slab and was surprised to find that it was a gravestone. It was almost entirely covered by ivy; obviously no one had been near it for years. I tugged at the ivy and some of it came away in my hands. There was some (3)\_\_\_\_\_ lettering on the grave, half-obscured by grass and moss. I could make out a name—Rose—but little more. I sat there for some time, (4)\_\_\_\_\_ over my discovery. I was wondering why 'Rose' should have been buried at so lonely a spot when there was a (5)\_\_\_\_\_ not far away.

**SubQuestion No : 22**

**Q.22** Select the most appropriate option to fill in blank number 2.

- Ans
- 1. closely
  - 2. emptyly
  - 3. frankly
  - 4. lawfully

Question ID : 264330153545

Option 1 ID : 264330601681

Option 2 ID : 264330601679

Option 3 ID : 264330601680

Option 4 ID : 264330601682

Status : Answered

Chosen Option : 1

**Comprehension:**

In the following passage, some words have been deleted. Read the passage carefully and select the most appropriate option to fill in each blank.

As a boy, I was always exploring lonely places—neglected gardens and orchards, unoccupied houses, patches of scrub or wasteland, the fields outside the town, the fringes of the forest. On one of my rambles (1)\_\_\_\_\_the bungalow, I pushed my way through a thicket of lantana bushes and stumbled over a thick stone slab, twisting my ankle slightly as I fell. For some time, I sat on the grass massaging my foot. When the pain eased, I looked more (2)\_\_\_\_\_ at the stone slab and was surprised to find that it was a gravestone. It was almost entirely covered by ivy; obviously no one had been near it for years. I tugged at the ivy and some of it came away in my hands. There was some (3)\_\_\_\_\_ lettering on the grave, half-obscured by grass and moss. I could make out a name—Rose—but little more. I sat there for some time, (4)\_\_\_\_\_ over my discovery. I was wondering why 'Rose' should have been buried at so lonely a spot when there was a (5)\_\_\_\_\_ not far away.

**SubQuestion No : 23**

**Q.23** Select the most appropriate option to fill in blank number 3.

- Ans
- 1. idiotic
  - 2. sturdy
  - 3. blurred
  - 4. nomadic

Question ID : 264330153546  
Option 1 ID : 264330601686  
Option 2 ID : 264330601683  
Option 3 ID : 264330601684  
Option 4 ID : 264330601685  
Status : Answered  
Chosen Option : 3

**Comprehension:**

In the following passage, some words have been deleted. Read the passage carefully and select the most appropriate option to fill in each blank.

As a boy, I was always exploring lonely places—neglected gardens and orchards, unoccupied houses, patches of scrub or wasteland, the fields outside the town, the fringes of the forest. On one of my rambles (1)\_\_\_\_\_the bungalow, I pushed my way through a thicket of lantana bushes and stumbled over a thick stone slab, twisting my ankle slightly as I fell. For some time, I sat on the grass massaging my foot. When the pain eased, I looked more (2)\_\_\_\_\_ at the stone slab and was surprised to find that it was a gravestone. It was almost entirely covered by ivy; obviously no one had been near it for years. I tugged at the ivy and some of it came away in my hands. There was some (3)\_\_\_\_\_ lettering on the grave, half-obscured by grass and moss. I could make out a name—Rose—but little more. I sat there for some time, (4)\_\_\_\_\_ over my discovery. I was wondering why 'Rose' should have been buried at so lonely a spot when there was a (5)\_\_\_\_\_ not far away.

**SubQuestion No : 24**

**Q.24** Select the most appropriate option to fill in blank number 4.

- Ans
- 1. sleeping
  - 2. pondering
  - 3. being
  - 4. pulling

Question ID : 264330153547  
Option 1 ID : 264330601690  
Option 2 ID : 264330601687  
Option 3 ID : 264330601688  
Option 4 ID : 264330601689  
Status : Answered  
Chosen Option : 2

**Comprehension:**

In the following passage, some words have been deleted. Read the passage carefully and select the most appropriate option to fill in each blank.

As a boy, I was always exploring lonely places—neglected gardens and orchards, unoccupied houses, patches of scrub or wasteland, the fields outside the town, the fringes of the forest. On one of my rambles (1)\_\_\_\_\_the bungalow, I pushed my way through a thicket of lantana bushes and stumbled over a thick stone slab, twisting my ankle slightly as I fell. For some time, I sat on the grass massaging my foot. When the pain eased, I looked more (2)\_\_\_\_\_ at the stone slab and was surprised to find that it was a gravestone. It was almost entirely covered by ivy; obviously no one had been near it for years. I tugged at the ivy and some of it came away in my hands. There was some (3)\_\_\_\_\_ lettering on the grave, half-obscured by grass and moss. I could make out a name—Rose—but little more. I sat there for some time, (4)\_\_\_\_\_ over my discovery. I was wondering why 'Rose' should have been buried at so lonely a spot when there was a (5)\_\_\_\_\_ not far away.

**SubQuestion No : 25**

**Q.25** Select the most appropriate option to fill in blank number 5.

- Ans
- 1. dormitory
  - 2. kennel
  - 3. sanctuary
  - 4. cemetery

Question ID : 264330153548

Option 1 ID : 264330601694

Option 2 ID : 264330601691

Option 3 ID : 264330601692

Option 4 ID : 264330601693

Status : Answered

Chosen Option : 4

