

Multi Tasking Non Technical Staff and Havaladar CBIC and CBN Examination 2023

Roll Number	
Candidate Name	
Venue Name	iON Digital Zone iDZ 2 Duhai
Exam Date	08/09/2023
Exam Time	12:30 PM - 2:30 PM
Subject	MTS Non Tech Havaladar CBIC and CBN Examination 2023

Section : Numerical and Mathematical Ability

Q.1 A boat covers a certain distance downstream in 5 hours but takes 8 hours to return upstream to the starting point. If the speed of the stream is 6 km/h, find the speed of the boat in still water.

- Ans**
- ✓ 1. 26 km/h
 - ✗ 2. 13 km/h
 - ✗ 3. 78 km/h
 - ✗ 4. 39 km/h

Question ID : 264330153884

Option 1 ID : 264330603002

Option 2 ID : 264330603001

Option 3 ID : 264330602999

Option 4 ID : 264330603000

Status : Answered

Chosen Option : 1

Q.2 Three numbers are in the ratio 5 : 2 : 7. The sum of their squares is 3822. The biggest number is:

- Ans**
- ✗ 1. 35
 - ✗ 2. 38
 - ✗ 3. 78
 - ✓ 4. 49

Question ID : 264330154047

Option 1 ID : 264330603654

Option 2 ID : 264330603651

Option 3 ID : 264330603653

Option 4 ID : 264330603652

Status : Answered

Chosen Option : 4

Q.3 A path of uniform width 2.5 m runs around the outside of a rectangular field of dimensions 45 m × 35 m. What is the area of the path (in m^2) ?

- Ans**
- 1. 500
 - 2. 425
 - 3. 475
 - 4. 525

Question ID : 264330153787
Option 1 ID : 264330602612
Option 2 ID : 264330602613
Option 3 ID : 264330602614
Option 4 ID : 264330602611
Status : Answered
Chosen Option : 1

Q.4 In a certain time, a sum becomes 5 times at the rate of 6% per annum on simple interest. At what rate of interest, the same sum becomes 8 times in the same duration?

- Ans**
- 1. 8.5%
 - 2. 10.5%
 - 3. 5.5%
 - 4. 12.5%

Question ID : 264330155747
Option 1 ID : 264330610393
Option 2 ID : 264330610392
Option 3 ID : 264330610394
Option 4 ID : 264330610391
Status : Answered
Chosen Option : 2

Q.5 Find the amount if ₹10,200 is invested at the rate of 8% per annum compound interest for $1\frac{1}{2}$ years when interest is compounded half yearly (up to two decimal places).

- Ans**
- 1. ₹11,743.61
 - 2. ₹11,473.61
 - 3. ₹11,764.28
 - 4. ₹11,347.28

Question ID : 264330156363
Option 1 ID : 264330612854
Option 2 ID : 264330612852
Option 3 ID : 264330612853
Option 4 ID : 264330612851
Status : Answered
Chosen Option : 2

Q.6 In what ratio, rice costing ₹185 per kg be mixed with rice costing ₹95 per kg such that by selling the mixture at ₹140 per kg there is a gain of 40%?

- Ans**
- 1. 2 : 19
 - 2. 3 : 23
 - 3. 2 : 13
 - 4. 1 : 17

Question ID : 264330154079
Option 1 ID : 264330603779
Option 2 ID : 264330603780
Option 3 ID : 264330603782
Option 4 ID : 264330603781
Status : Answered
Chosen Option : 4

Q.7 Among four numbers the sum of the smallest and largest is 72 more than the sum of middle two numbers . If the numbers are in the ratio 6 : 7 : 15 : 19, then the smallest number is:

- Ans**
- 1. 72
 - 2. 144
 - 3. 168
 - 4. 216

Question ID : 264330154051
Option 1 ID : 264330603670
Option 2 ID : 264330603669
Option 3 ID : 264330603668
Option 4 ID : 264330603667
Status : Answered
Chosen Option : 3

Q.8 A man runs across an 1800 m long street in 6 min. Calculate his speed in m/sec.

- Ans**
- 1. 5
 - 2. 4
 - 3. 6
 - 4. 8

Question ID : 264330156111
Option 1 ID : 264330611843
Option 2 ID : 264330611845
Option 3 ID : 264330611844
Option 4 ID : 264330611846
Status : Answered
Chosen Option : 1

Q.9 The following marks are obtained by a student in five subjects.

Subjects	Marks
Geography	42
History	43
Civics	51
Hindi	54
CS	50

What is the difference between the minimum and maximum marks scored by the student?

- Ans
- 1. 10
 - 2. 4
 - 3. 2
 - 4. 12

Question ID : 264330156536

Option 1 ID : 264330613533

Option 2 ID : 264330613534

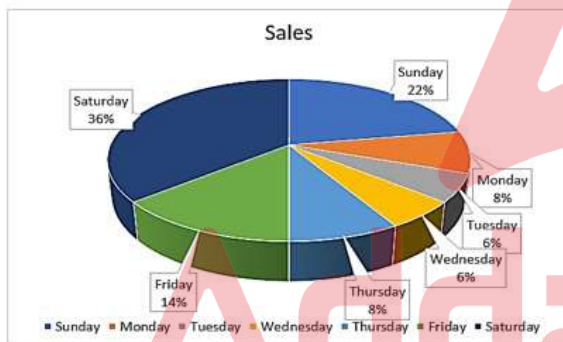
Option 3 ID : 264330613532

Option 4 ID : 264330613531

Status : Answered

Chosen Option : 4

Q.10 The sale of tickets (in thousands) in days of a week is given in the pie chart:



The combined angle made at the centre by which days is equal to the angle made by Saturday?

- Ans
- 1. Sunday, Monday and Tuesday
 - 2. Tuesday, Wednesday and Thursday
 - 3. Monday, Tuesday and Wednesday
 - 4. Wednesday, Thursday and Friday

Question ID : 264330153823

Option 1 ID : 264330602758

Option 2 ID : 264330602756

Option 3 ID : 264330602755

Option 4 ID : 264330602757

Status : Answered

Chosen Option : 1

Q.11 A and B can do a piece of work in 6 and 12 days, respectively. If they work alternately and A begins the work, in how many days will the work be completed?

- Ans
- 1. 9
 - 2. 8
 - 3. $8\frac{1}{2}$
 - 4. $9\frac{1}{2}$

Question ID : 264330153855
Option 1 ID : 264330602883
Option 2 ID : 264330602885
Option 3 ID : 264330602886
Option 4 ID : 264330602884
Status : Answered
Chosen Option : 2

Q.12 A dealer buys some goods for ₹3,600. If the overhead expenses be 5% of the cost price, then at what price should it be sold to earn 15%?

- Ans
- 1. ₹4,347
 - 2. ₹4,734
 - 3. ₹4,437
 - 4. ₹4,743

Question ID : 264330159025
Option 1 ID : 264330623461
Option 2 ID : 264330623462
Option 3 ID : 264330623459
Option 4 ID : 264330623460
Status : Answered
Chosen Option : 1

Q.13 The income of a company increases 25% per annum. If its income is ₹26,64,000 in the year 1999 what was its income in the year 1997?

- Ans
- 1. ₹ 16,50,000
 - 2. ₹ 17,04,960
 - 3. ₹ 15,50,000
 - 4. ₹ 17,50,000

Question ID : 264330156072
Option 1 ID : 264330611689
Option 2 ID : 264330611688
Option 3 ID : 264330611690
Option 4 ID : 264330611687
Status : Answered
Chosen Option : 2

Q.14 The average of a batsman in 20 innings is 41 runs. In the next inning, he scored 41 runs. What will be his new average?

- Ans**
- 1. 39
 - 2. 41
 - 3. 38
 - 4. 36

Question ID : 264330156212
Option 1 ID : 264330612249
Option 2 ID : 264330612250
Option 3 ID : 264330612248
Option 4 ID : 264330612247
Status : Answered
Chosen Option : 2

Q.15 Aisha and Razia can complete a work in 50 days and 75 days, respectively. In how many days will the entire work be completed if both of them work together?

- Ans**
- 1. 32
 - 2. 25
 - 3. 30
 - 4. 28

Question ID : 264330155718
Option 1 ID : 264330610278
Option 2 ID : 264330610275
Option 3 ID : 264330610277
Option 4 ID : 264330610276
Status : Answered
Chosen Option : 3

Q.16 A man sold his cycle at 17% loss. If he had sold it for ₹1,056 more, he would have made 5% profit. The cost price of the cycle is:

- Ans**
- 1. ₹4,700
 - 2. ₹3,800
 - 3. ₹5,100
 - 4. ₹4,800

Question ID : 264330154080
Option 1 ID : 264330603784
Option 2 ID : 264330603783
Option 3 ID : 264330603785
Option 4 ID : 264330603786
Status : Answered
Chosen Option : 4

Q.17 Find the HCF of 230, 276, and 322.

- Ans
- 1. 23
 - 2. 12
 - 3. 46
 - 4. 14

Question ID : 264330156090
Option 1 ID : 264330611759
Option 2 ID : 264330611761
Option 3 ID : 264330611762
Option 4 ID : 264330611760
Status : Answered
Chosen Option : 3

Q.18 On simplifying the following expression, we get _____.

$$\frac{24\sqrt{45} - 16\sqrt{20} + \sqrt{245} - 47\sqrt{5}}{3\frac{1}{5} + 1\frac{2}{5} - 2\frac{1}{6} - 2\frac{1}{5} - 5\frac{2}{5} + 3\frac{1}{6}}$$

- Ans
- 1. 0
 - 2. 3
 - 3. 1
 - 4. 2

Question ID : 264330154114
Option 1 ID : 264330603922
Option 2 ID : 264330603919
Option 3 ID : 264330603921
Option 4 ID : 264330603920
Status : Answered
Chosen Option : 1

Q.19 The speed of a bus from station A to B is 55 km/h, and while coming back from station B to A, the speed of the bus is 95 km/h. The average speed (in km/h) of the bus during the whole journey is:

- Ans
- 1. $72\frac{1}{3}$
 - 2. $67\frac{1}{3}$
 - 3. $62\frac{2}{3}$
 - 4. $69\frac{2}{3}$

Question ID : 264330156512
Option 1 ID : 264330613438
Option 2 ID : 264330613435
Option 3 ID : 264330613436
Option 4 ID : 264330613437
Status : Answered
Chosen Option : 4

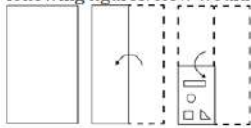
Q.20 What is the total surface area (in cm^2) of a right circular cone of radius 10.5 cm and slant height 13 cm? Take $\pi = \frac{22}{7}$

- Ans**
- 1. 577.5
 - 2. 757.5
 - 3. 775.5
 - 4. 787.5

Question ID : 264330153790
 Option 1 ID : 264330602625
 Option 2 ID : 264330602624
 Option 3 ID : 264330602626
 Option 4 ID : 264330602623
 Status : Answered
 Chosen Option : 3

Section : Reasoning Ability and Problem Solving

Q.1 The sequence of folding a piece of paper and the manner in which the folded paper is cut is shown in the following figures. How would this paper look when unfolded?



Ans

- 1.
- 2.
- 3.
- 4.

Question ID : 264330155606
 Option 1 ID : 264330609830
 Option 2 ID : 264330609828
 Option 3 ID : 264330609829
 Option 4 ID : 264330609827
 Status : Answered
 Chosen Option : 3

Q.2 In a certain code language, 'YOJ' is coded as 'BRM' and 'DSP' is coded as 'GVS'. What is the code for 'ZMC' in the given code language?

- Ans**
- 1. DQE
 - 2. CPF
 - 3. CQF
 - 4. DPG

Question ID : 264330155832

Option 1 ID : 264330610733

Option 2 ID : 264330610734

Option 3 ID : 264330610732

Option 4 ID : 264330610731

Status : Answered

Chosen Option : 2

Q.3 Read the given statement(s) and conclusions carefully. Assuming that the information given in the statements is true, even if it appears to be at variance with commonly known facts, decide which of the given conclusions logically follow(s) from the statement(s).

Statements: All the pencils are pens. All the pens are inks.

Conclusions:

(I) All the pencils are inks.

(II) Some inks are pencils.

- Ans**
- 1. Neither conclusion (I) nor (II) is follows.
 - 2. Both conclusions (I) and (II) are follows.
 - 3. Only conclusion (II) is follows.
 - 4. Only conclusion (I) is follows.

Question ID : 264330154427

Option 1 ID : 264330605173

Option 2 ID : 264330605174

Option 3 ID : 264330605172

Option 4 ID : 264330605171

Status : Answered

Chosen Option : 2

Q.4 If 'A' stands for '+', 'B' stands for '×', 'C' stands for '÷' and 'D' stands for '-', what will come in place of the question mark (?) in the following equation?
(54 A 9) C 34 D (10 B 3) C 46 D 16 = ?

- Ans**
- 1. 40
 - 2. 32
 - 3. 46
 - 4. 54

Question ID : 264330151793

Option 1 ID : 264330594801

Option 2 ID : 264330594800

Option 3 ID : 264330594799

Option 4 ID : 264330594802

Status : Answered

Chosen Option : 1

Q.5 Select the word-pair that best represents a similar relationship to the one expressed in the pair of words given below.

(The words must be considered as meaningful English words and must not be related to each other based on the number of letters/number of consonants/vowels in the word)

Correspond : Letters

- Ans**
- ✓ 1. Barter : Commodities
 - ✗ 2. Trespass : Boundaries
 - ✗ 3. Arbitrate : Controversies
 - ✗ 4. Debate : Problems

Question ID : 264330154639
Option 1 ID : 264330606022
Option 2 ID : 264330606020
Option 3 ID : 264330606019
Option 4 ID : 264330606021
Status : Answered
Chosen Option : 2

Q.6 What should come in place of ? in the given series based on the English alphabetical order?

LVF, IUC, FTZ, CSW, ?

- Ans**
- ✓ 1. ZRT
 - ✗ 2. ZQW
 - ✗ 3. YSX
 - ✗ 4. YQW

Question ID : 264330155790
Option 1 ID : 264330610565
Option 2 ID : 264330610566
Option 3 ID : 264330610563
Option 4 ID : 264330610564
Status : Answered
Chosen Option : 1

Q.7 What should come in place of '?' in the given series?

2 16 86 436 2186 ?

- Ans**
- ✗ 1. 10578
 - ✗ 2. 11032
 - ✗ 3. 11486
 - ✓ 4. 10936

Question ID : 264330151463
Option 1 ID : 264330593479
Option 2 ID : 264330593481
Option 3 ID : 264330593482
Option 4 ID : 264330593480
Status : Answered
Chosen Option : 4

Q.8 In a certain code language, 'good vibes only' is coded as 'vn mj kl' and 'change is good' is coded as 'mj ro dh'. How is 'good' coded in the given language?

- Ans**
- 1. ro
 - 2. dh
 - 3. vn
 - 4. mj

Question ID : 264330151688
Option 1 ID : 264330594382
Option 2 ID : 264330594381
Option 3 ID : 264330594380
Option 4 ID : 264330594379
Status : Answered
Chosen Option : 4

Q.9 What should come in place of ? in the given series based on the English alphabetical order?

JAS, HDV, FGY, DJB, ?

- Ans**
- 1. DNE
 - 2. CNF
 - 3. BME
 - 4. CMG

Question ID : 264330155794
Option 1 ID : 264330610582
Option 2 ID : 264330610580
Option 3 ID : 264330610581
Option 4 ID : 264330610579
Status : Answered
Chosen Option : 3

Adda247

Q.10 Which figure should replace the question mark (?) if the following figure series were to be continued?

△	G	S	S	7	B	2	△	7	7	S	G	
	B			△			G			2		?
	7			G			S			△		

Ans

✗ 1.

↑	△	7
	S	
		2

✗ 2.

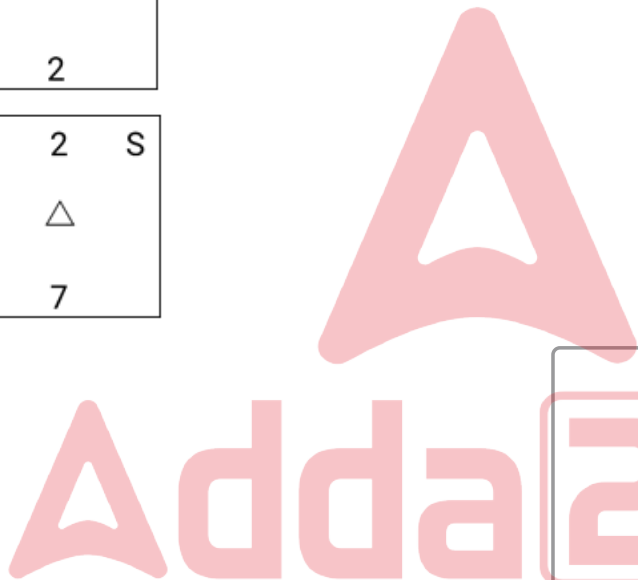
↑	7	S
	△	
		G

✗ 3.

↑	7	S
	△	
		2

✓ 4.

↑	2	S
	△	
		7



Question ID : 264330154765
 Option 1 ID : 264330606524
 Option 2 ID : 264330606523
 Option 3 ID : 264330606526
 Option 4 ID : 264330606525
 Status : Answered
 Chosen Option : 4

Q.11 The position of how many letters will remain unchanged if each of the letter in the word 'DURATION' is arranged in alphabetical order?

- Ans**
- ✗ 1. Four
 - ✓ 2. None
 - ✗ 3. Five
 - ✗ 4. One

Question ID : 264330154329
 Option 1 ID : 264330604780
 Option 2 ID : 264330604781
 Option 3 ID : 264330604779
 Option 4 ID : 264330604782
 Status : Answered
 Chosen Option : 2

Q.12 In the following number-pairs, the second number is obtained by applying certain mathematical operations to the first number. Select the set in which the numbers are related in the same way as are the numbers of the following sets.
(NOTE : Operations should be performed on the whole numbers, without breaking down the numbers into its constituent digits. E.g. 13 – Operations on 13 such as adding / subtracting / multiplying etc. to 13 can be performed. Breaking down 13 into 1 and 3 and then performing mathematical operations on 1 and 3 is not allowed)
2, 7
5, 16

- Ans**
- 1. 14, 45
 - 2. 11, 23
 - 3. 20, 58
 - 4. 15, 46

Question ID : 264330151625
Option 1 ID : 264330594128
Option 2 ID : 264330594127
Option 3 ID : 264330594130
Option 4 ID : 264330594129
Status : Answered
Chosen Option : 4

Q.13 Select the combination of letters that when sequentially placed in the blanks of the given series, will complete the series.

J _ K _ K K J _ K _ _ K

- Ans**
- 1. JJKJK
 - 2. KJKJK
 - 3. JKJKJ
 - 4. KJKJ

Question ID : 264330151645
Option 1 ID : 264330594209
Option 2 ID : 264330594208
Option 3 ID : 264330594210
Option 4 ID : 264330594207
Status : Answered
Chosen Option : 2

Q.14 Read the given statements and conclusions carefully. You have to take the given statements to be true even if they seem to be at variance from commonly known facts. You have to decide which conclusion/s logically follow/s from the given statements.

Statements: Some beds are telephones. All telephones are pillows. Some pillows are cupboards.

Conclusion I: Some pillows are telephones.

Conclusion II: Some beds are pillows.

- Ans**
- 1. Both conclusions (I) and (II) are follow.
 - 2. Only conclusion (I) is follow.
 - 3. Neither conclusion (I) nor (II) is follow.
 - 4. Only conclusion (II) is follow.

Question ID : 264330155914
Option 1 ID : 264330611062
Option 2 ID : 264330611059
Option 3 ID : 264330611061
Option 4 ID : 264330611060
Status : Answered
Chosen Option : 1

Q.15 What should come in place of ? in the given series?

37 36 33 32 29 ?

Ans 1. 28

2. 26

3. 27

4. 24

Question ID : 264330151719

Option 1 ID : 264330594506

Option 2 ID : 264330594504

Option 3 ID : 264330594503

Option 4 ID : 264330594505

Status : Answered

Chosen Option : 1

Q.16 16 is related to 29 following a certain logic. Following the same logic, 85 is related to 98. To which of the following is 53 related to, following the same logic?

Ans 1. 66

2. 62

3. 64

4. 68

Question ID : 264330151594

Option 1 ID : 264330594005

Option 2 ID : 264330594003

Option 3 ID : 264330594004

Option 4 ID : 264330594006

Status : Answered

Chosen Option : 1

Q.17 What should come in place of '?' in the given series?

20 54 156 ? 1380 4134 12396

Ans 1. 506

2. 474

3. 358

4. 462

Question ID : 264330151448

Option 1 ID : 264330593422

Option 2 ID : 264330593421

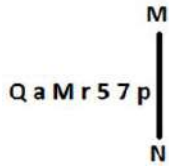
Option 3 ID : 264330593419

Option 4 ID : 264330593420

Status : Answered

Chosen Option : 4

Q.18 Select the correct mirror image of the given figure when the mirror is placed at MN as shown below.



- Ans
- 1. q 7 2 1 W e Q
 - 2. q 7 5 1 M a Q
 - 3. q 7 5 1 M 6 Q
 - 4. q 7 2 1 M 6 Q

Question ID : 264330151524

Option 1 ID : 264330593725

Option 2 ID : 264330593724

Option 3 ID : 264330593723

Option 4 ID : 264330593726

Status : Answered

Chosen Option : 4

Q.19 Abeer, Bela, Deepa, Farheen, Heera, and Girish are sitting around a circular table facing the centre. Girish sits 2nd to the right of Deepa. Farheen sits to the immediate left of Girish. Bela sits 2nd to the right of Farheen. Heera is an immediate neighbour of Deepa. Who sits to the immediate right of Bela?

- Ans
- 1. Girish
 - 2. Deepa
 - 3. Heera
 - 4. Abeer

Question ID : 264330155656

Option 1 ID : 264330610030

Option 2 ID : 264330610027

Option 3 ID : 264330610028

Option 4 ID : 264330610029

Status : Answered

Chosen Option : 4

Q.20 If F means '-', C means '+', D means '÷', A means '×', then what will come in place of the question mark (?) in the following equation?

$$65 A 39 D 3 F 23 C 2 = ?$$

- Ans
- 1. 64
 - 2. 32
 - 3. 56
 - 4. 42

Question ID : 264330154689

Option 1 ID : 264330606222

Option 2 ID : 264330606219

Option 3 ID : 264330606221

Option 4 ID : 264330606220

Status : Answered

Chosen Option : 2

Q.1 The 11th Fundamental Duty provides opportunities for education for the _____ age group of children.

- Ans 1. 6-14
 2. 5-15
 3. 2-11
 4. 6-18

Question ID : 264330159901
Option 1 ID : 264330626952
Option 2 ID : 264330626954
Option 3 ID : 264330626953
Option 4 ID : 264330626951
Status : Answered
Chosen Option : 1

Q.2 As per the Census of India 2011, which Union Territory recorded the lowest population growth rate?

- Ans 1. Lakshadweep
 2. Delhi
 3. Daman and Diu
 4. Chandigarh

Question ID : 264330161553
Option 1 ID : 264330633540
Option 2 ID : 264330633541
Option 3 ID : 264330633539
Option 4 ID : 264330633542
Status : Answered
Chosen Option : 1

Q.3 In which year were the Arms Act and Vernacular Press Act passed?

- Ans 1. 1878
 2. 1879
 3. 1877
 4. 1876

Question ID : 264330160876
Option 1 ID : 264330630837
Option 2 ID : 264330630838
Option 3 ID : 264330630836
Option 4 ID : 264330630835
Status : Answered
Chosen Option : 4

Q.4 In which state of India is Kaziranga National Park located?

- Ans 1. Assam
 2. Gujarat
 3. Karnataka
 4. West Bengal

Question ID : 264330161497
Option 1 ID : 264330633315
Option 2 ID : 264330633317
Option 3 ID : 264330633316
Option 4 ID : 264330633318
Status : Answered
Chosen Option : 1

Q.5 Whose autobiography is titled 'Ace against Odds'?

- Ans 1. Sania Mirza
 2. Saina Nehwal
 3. Mirabai Chanu
 4. Mary Kom

Question ID : 264330155450
Option 1 ID : 264330609205
Option 2 ID : 264330609204
Option 3 ID : 264330609206
Option 4 ID : 264330609203
Status : Answered
Chosen Option : 1

Q.6 By what name are the flat membrane-enclosed sacs present in the Golgi apparatus known?

- Ans 1. Lamellae
 2. Cisternae
 3. Cristae
 4. Stroma

Question ID : 264330161083
Option 1 ID : 264330631663
Option 2 ID : 264330631664
Option 3 ID : 264330631665
Option 4 ID : 264330631666
Status : Answered
Chosen Option : 2

Q.7 The Swarna Jayanti Shahari Rojgar Yojana (SJSRY) was launched in the year _____ by Government of India.

- Ans 1. 1990
 2. 1997
 3. 2010
 4. 2004

Question ID : 264330161574
Option 1 ID : 264330633623
Option 2 ID : 264330633624
Option 3 ID : 264330633626
Option 4 ID : 264330633625
Status : Answered
Chosen Option : 4

Q.8 Manna Dey was a famous personality of India in the field of _____.

- Ans
- 1. Science
 - 2. Games
 - 3. Politics
 - 4. Music

Question ID : 264330155512
Option 1 ID : 264330609453
Option 2 ID : 264330609454
Option 3 ID : 264330609452
Option 4 ID : 264330609451
Status : Answered
Chosen Option : 4

Q.9 'Chapchar Kut' is a festival from the state of _____. It is celebrated during March after the completion of the most arduous task of Jhum operation i.e., jungle clearing (clearing of the remnants of burning).

- Ans
- 1. Mizoram
 - 2. Nagaland
 - 3. Jharkhand
 - 4. Chhattisgarh

Question ID : 264330160822
Option 1 ID : 264330630622
Option 2 ID : 264330630619
Option 3 ID : 264330630620
Option 4 ID : 264330630621
Status : Not Answered
Chosen Option : --

Q.10 In which event at the 2023 ISSF Junior World Cup Championships did Amanpreet Singh win a gold medal for India?

- Ans
- 1. Men's 10 m air rifle
 - 2. Men's 10 m air pistol team
 - 3. Men's 25 m pistol
 - 4. Men's 25 m rapid fire pistol

Question ID : 264330161141
Option 1 ID : 264330631896
Option 2 ID : 264330631898
Option 3 ID : 264330631895
Option 4 ID : 264330631897
Status : Answered
Chosen Option : 3

Q.11 In which of the following States was the 2023 World Squash Championship held?

- Ans 1. Kerala
 2. Tamil Nadu
 3. Odisha
 4. Karnataka

Question ID : 264330161143
Option 1 ID : 264330631906
Option 2 ID : 264330631905
Option 3 ID : 264330631904
Option 4 ID : 264330631903
Status : Answered
Chosen Option : 4

Q.12 Mumtaz Khan was named 'FIH Women's Rising Star of the Year' in 2022. She plays which of the following sports?

- Ans 1. Hockey
 2. Fencing
 3. Football
 4. High Jump

Question ID : 264330158360
Option 1 ID : 264330620800
Option 2 ID : 264330620802
Option 3 ID : 264330620799
Option 4 ID : 264330620801
Status : Answered
Chosen Option : 2

Q.13 Which of the following is a common financial service provided by Micro Finance Institutions?

- Ans 1. Mortgage loans for luxury homes
 2. Investment advisory services for high-net-worth individuals
 3. Credit card issuance
 4. Small loans to low-income individuals for entrepreneurial activities

Question ID : 264330157286
Option 1 ID : 264330616508
Option 2 ID : 264330616510
Option 3 ID : 264330616507
Option 4 ID : 264330616509
Status : Answered
Chosen Option : 4

Q.14 The Rathwas, who dwell in the state of _____, perform the Rathwa dance on the occasion of Holi (festival of colours).

- Ans 1. Andhra Pradesh
 2. Telangana
 3. Maharashtra
 4. Gujarat

Question ID : 264330160800
Option 1 ID : 264330630532
Option 2 ID : 264330630534
Option 3 ID : 264330630531
Option 4 ID : 264330630533
Status : Answered
Chosen Option : 2

Q.15 Which Article of the Constitution of India provides for a governor for each state?

- Ans
- 1. Article 173
 - 2. Article 157
 - 3. Article 153
 - 4. Article 156

Question ID : 264330161294
Option 1 ID : 264330632506
Option 2 ID : 264330632505
Option 3 ID : 264330632503
Option 4 ID : 264330632504
Status : Answered
Chosen Option : 2

Q.16 Who was the first Woman President of Indian National Congress?

- Ans
- 1. Sarojini Naidu
 - 2. Asaf Ali
 - 3. Annie Besant
 - 4. Usha Mehta

Question ID : 264330162342
Option 1 ID : 264330636695
Option 2 ID : 264330636697
Option 3 ID : 264330636698
Option 4 ID : 264330636696
Status : Answered
Chosen Option : 3

Q.17 _____ was a star of the Kathak dance form described as 'Nritya Samragini' (the empress of dance) by Rabindranath Tagore.

- Ans
- 1. Sitara Devi
 - 2. Rukmini Devi Arundale
 - 3. Mrinalini Sarabhai
 - 4. Mallika Sarabhai

Question ID : 264330160811
Option 1 ID : 264330630577
Option 2 ID : 264330630575
Option 3 ID : 264330630578
Option 4 ID : 264330630576
Status : Answered
Chosen Option : 4

Q.18 Which of the following methods is used to calculate national income by summing up the total spending on final goods and services in an economy?

- Ans
- 1. Value-added method
 - 2. Output method
 - 3. Expenditure method
 - 4. Income method

Question ID : 264330157316
Option 1 ID : 264330616630
Option 2 ID : 264330616629
Option 3 ID : 264330616628
Option 4 ID : 264330616627
Status : Answered
Chosen Option : 3

Q.19 Former Governor of Jharkhand from the year 2004 to 2009, _____, passed away in Lucknow in 2022.

- Ans
- 1. Ramesh Bais
 - 2. Syed Ahmed
 - 3. Syed Sibtey Razi
 - 4. Kateekal Sankaranarayanan

Question ID : 264330161405
Option 1 ID : 264330632950
Option 2 ID : 264330632949
Option 3 ID : 264330632948
Option 4 ID : 264330632947
Status : Answered
Chosen Option : 2

Q.20 According to the IUPAC nomenclature system, which functional group is characterised by the presence of a -OH group, usually in a water-like bent shape?

- Ans
- 1. Carbonyls
 - 2. Amines
 - 3. Alcohols
 - 4. Esters

Question ID : 264330161051
Option 1 ID : 264330631536
Option 2 ID : 264330631538
Option 3 ID : 264330631535
Option 4 ID : 264330631537
Status : Answered
Chosen Option : 1

Q.21 Ajmer Sharif is the shrine of which of the following Sufi saints?

- Ans
- 1. Mohammad Ghori
 - 2. Mohammad Bin Tughlaq
 - 3. Khwaja Moinuddin Chishti
 - 4. Bhaktiyar Khilji

Question ID : 264330160765
Option 1 ID : 264330630394
Option 2 ID : 264330630391
Option 3 ID : 264330630393
Option 4 ID : 264330630392
Status : Answered
Chosen Option : 3

Q.22 Whose autobiography is titled as 'Wings of Fire: An Autobiography'?

- Ans
- 1. E Sreedharan
 - 2. APJ Abdul Kalam
 - 3. Rajender Singh
 - 4. Satyabhama Das Biju

Question ID : 264330155446
Option 1 ID : 264330609188
Option 2 ID : 264330609187
Option 3 ID : 264330609189
Option 4 ID : 264330609190
Status : Answered
Chosen Option : 2

Q.23 Which of the following Carnatic musicians was the first to receive the Bharat Ratna?

- Ans
- 1. Tyagaraja
 - 2. MS Subbulakshmi
 - 3. Syama Sastri
 - 4. KJ Yesudas

Question ID : 264330161767
Option 1 ID : 264330634398
Option 2 ID : 264330634395
Option 3 ID : 264330634397
Option 4 ID : 264330634396
Status : Answered
Chosen Option : 2

Q.24 Which of the following is the highest navigable lake in the world?

- Ans
- 1. Huron
 - 2. Titicaca
 - 3. Superior
 - 4. Como

Question ID : 264330161324
Option 1 ID : 264330632625
Option 2 ID : 264330632624
Option 3 ID : 264330632623
Option 4 ID : 264330632626
Status : Answered
Chosen Option : 2

Q.25 Rukmini Devi Arundale was associated with which Indian classical dance form?

- Ans
- 1. Manipuri
 - 2. Kathak
 - 3. Bharatanatyam
 - 4. Mohiniyattam

Question ID : 264330155520
Option 1 ID : 264330609485
Option 2 ID : 264330609486
Option 3 ID : 264330609483
Option 4 ID : 264330609484
Status : Answered
Chosen Option : 3

Section : English Language and Comprehension

Q.1 Select the option that rectifies the spelling of the underlined word in the given sentence.

He felt priviledged to have received the country's greatest honour.

- Ans
- 1. previllaged
 - 2. privileged
 - 3. privilegede
 - 4. privilaged

Question ID : 264330153225
Option 1 ID : 264330600460
Option 2 ID : 264330600461
Option 3 ID : 264330600459
Option 4 ID : 264330600462
Status : Answered
Chosen Option : 2

Q.2 Select the option that can be used as a one-word substitute for the underlined segment in the following sentence.

Hundreds of people were removed from a place by the government recently due to a war-like situation.

- Ans
- 1. assassinated
 - 2. evacuated
 - 3. invaded
 - 4. terminated

Question ID : 264330152716
Option 1 ID : 264330598466
Option 2 ID : 264330598464
Option 3 ID : 264330598465
Option 4 ID : 264330598463
Status : Answered
Chosen Option : 2

Q.3 Select the most appropriate meaning of the underlined idiom in the following sentence.

Buying a home in the city centre will cost you an arm and a leg.

- Ans
- 1. Nothing extra
 - 2. A large amount of money
 - 3. A small amount of money
 - 4. Physical pain

Question ID : 264330153048
Option 1 ID : 264330599762
Option 2 ID : 264330599760
Option 3 ID : 264330599759
Option 4 ID : 264330599761
Status : Answered
Chosen Option : 2

Q.4 Select the option that can be used as a one-word substitute for the given group of words.

One who has love for mankind
OR

One who makes an active effort to promote human welfare

- Ans
- 1. Philosopher
 - 2. Patriot
 - 3. Autocrat
 - 4. Philanthropist

Question ID : 264330153554
Option 1 ID : 264330601716
Option 2 ID : 264330601717
Option 3 ID : 264330601718
Option 4 ID : 264330601715
Status : Answered
Chosen Option : 4

Q.5 Select the most appropriate meaning of the given idiom.
From scratch

- Ans
- 1. From a skin disease
 - 2. From the beginning
 - 3. From utter disorder
 - 4. From death

Question ID : 264330156173
Option 1 ID : 264330612091
Option 2 ID : 264330612094
Option 3 ID : 264330612092
Option 4 ID : 264330612093
Status : Answered
Chosen Option : 2

Q.6 The following sentence has been divided into four parts. Identify the part that contains an error.

(A) Four divided by / (B) two is coming / (C) out to / (D) be two.

- Ans
- 1. D
 - 2. C
 - 3. B
 - 4. A

Question ID : 264330152628
Option 1 ID : 264330598118
Option 2 ID : 264330598117
Option 3 ID : 264330598116
Option 4 ID : 264330598115
Status : Answered
Chosen Option : 3

Q.7 Select the most appropriate meaning of the underlined idiom.

The detective went the whole nine yards in his investigation.

- Ans
- 1. Measuring every step
 - 2. Everything, all the way
 - 3. Close affinity with the law
 - 4. Taking the distant call

Question ID : 264330153147
Option 1 ID : 264330600148
Option 2 ID : 264330600150
Option 3 ID : 264330600149
Option 4 ID : 264330600147
Status : Answered
Chosen Option : 2

Q.8 Select the most appropriate option to fill in the blank.
Many soldiers marched in _____ at the international border.

- Ans
- 1. dress
 - 2. uniform
 - 3. fabric
 - 4. clothes

Question ID : 264330152583
Option 1 ID : 264330597935
Option 2 ID : 264330597937
Option 3 ID : 264330597938
Option 4 ID : 264330597936
Status : Answered
Chosen Option : 2

Q.9 The following sentence has been split into four segments. Identify the segment that contains a grammatical error.

This scripture / has been /translated in / seventy languages.

- Ans
- 1. seventy languages
 - 2. This scripture
 - 3. has been
 - 4. translated in

Question ID : 264330155431
Option 1 ID : 264330609134
Option 2 ID : 264330609131
Option 3 ID : 264330609132
Option 4 ID : 264330609133
Status : Answered
Chosen Option : 4

Q.10 Select the sentence that has NO spelling errors.

- Ans
- 1. The elderly woman was delighted to receive a bouquet of fragrant flowers from her thoughtful grandson, who had come to visit her at the nursing home
 - 2. The elderly woman was delighted to receive a bouque of fragrant flowers from her thoughtfull grandson, who had come to visit her at the nursing home
 - 3. The elderly woman was deligted to receive a bouque of fregrant flowers from her thoughtful grandson, who had come to visit her at the nursing home
 - 4. The elderly woman was delighed to recive a bouquet of fragrant flowers from her thoughtfull grandson, who had come to visit her at the nursing home

Question ID : 264330152648
Option 1 ID : 264330598196
Option 2 ID : 264330598198
Option 3 ID : 264330598195
Option 4 ID : 264330598197
Status : Answered
Chosen Option : 1

Q.11 Select the most appropriate option to fill in the blank.

She was known for her _____ attention to detail, always making sure everything was perfectly organised and in its proper place.

- Ans
- 1. fastidious
 - 2. scornful
 - 3. tedious
 - 4. exact

Question ID : 264330151863
Option 1 ID : 264330595073
Option 2 ID : 264330595072
Option 3 ID : 264330595071
Option 4 ID : 264330595074
Status : Answered
Chosen Option : 4

Q.12 Select the option that can be used as a one-word substitute for the given group of words.

The killing of a king

- Ans** 1. Regicide
 2. Fratricide
 3. Sororicide
 4. Patricide

Question ID : 264330151868
Option 1 ID : 264330595091
Option 2 ID : 264330595094
Option 3 ID : 264330595092
Option 4 ID : 264330595093
Status : Answered
Chosen Option : 1

Q.13 Select the most appropriate option to fill in the blanks.

(Ø = No article)

___ doctor suggested doing some eye exercises and wearing ___ pair of powered glasses.

- Ans** 1. A; a
 2. Ø; a
 3. A; Ø
 4. The; a

Question ID : 264330151329
Option 1 ID : 264330592945
Option 2 ID : 264330592944
Option 3 ID : 264330592946
Option 4 ID : 264330592943
Status : Answered
Chosen Option : 1

Q.14 Parts of the following sentence have been given as options. Select the option that contains an error.

They have less books than I have.

- Ans** 1. I have
 2. They have
 3. than
 4. less books

Question ID : 264330152802
Option 1 ID : 264330598802
Option 2 ID : 264330598799
Option 3 ID : 264330598801
Option 4 ID : 264330598800
Status : Answered
Chosen Option : 4

Q.15 Select the most appropriate meaning of the given idiom.
Into hot water

- Ans**
- 1. Not on good terms
 - 2. In favour with
 - 3. Came to nothing
 - 4. Into trouble

Question ID : 264330152574
Option 1 ID : 264330597899
Option 2 ID : 264330597901
Option 3 ID : 264330597902
Option 4 ID : 264330597900
Status : Answered
Chosen Option : 4

Q.16 Select the most appropriate synonym of the bracketed word in the following sentence to fill in the blank.
The sun was setting over the mountains, painting the sky with _____ (energetic) shades of orange and pink.

- Ans**
- 1. vibrant
 - 2. reactive
 - 3. faded
 - 4. bright

Question ID : 264330152661
Option 1 ID : 264330598247
Option 2 ID : 264330598250
Option 3 ID : 264330598248
Option 4 ID : 264330598249
Status : Answered
Chosen Option : 1

Q.17 The following sentence has been split into four segments. Identify the segment that contains an error.
She was writing / a letter to her grandmother / when the power / gone out.

- Ans**
- 1. gone out
 - 2. a letter to her grandmother
 - 3. She was writing
 - 4. when the power

Question ID : 264330155319
Option 1 ID : 264330608718
Option 2 ID : 264330608716
Option 3 ID : 264330608715
Option 4 ID : 264330608717
Status : Answered
Chosen Option : 1

Q.18 Select the most appropriate **ANTONYM** of the given word.
Nonchalant

- Ans** 1. Flexible
 2. Caring
 3. Marvellous
 4. Covert

Question ID : 264330153539
Option 1 ID : 264330601661
Option 2 ID : 264330601660
Option 3 ID : 264330601662
Option 4 ID : 264330601659
Status : Answered
Chosen Option : 4

Q.19 Select the most appropriate synonym of the given word.
Grief

- Ans** 1. Pleasure
 2. Jollity
 3. Pain
 4. Content

Question ID : 264330151821
Option 1 ID : 264330594911
Option 2 ID : 264330594914
Option 3 ID : 264330594912
Option 4 ID : 264330594913
Status : Answered
Chosen Option : 3

Q.20 There is a spelling error in the given sentence. Select the option that contains the **INCORRECTLY** spelt word.
The profesor's niece was planning a pleasant surprise for him.

- Ans** 1. profesor
 2. planning
 3. pleasant
 4. niece

Question ID : 264330152835
Option 1 ID : 264330598931
Option 2 ID : 264330598933
Option 3 ID : 264330598934
Option 4 ID : 264330598932
Status : Answered
Chosen Option : 1

Comprehension:

In the following passage, some words have been deleted. Read the passage carefully and select the most appropriate option to fill in each blank.

Tim Cook, CEO of Apple who has recently _____ (1) India, has some _____ (2) for parents: limit the screen time for children. He says: "Kids are born _____ (3), they're digital kids now. And it is, I think, important to set some hard rails around it." Various surveys of Indian children show alarming findings. A Saurashtra University survey of _____ (4) a thousand children and their parents in Rajkot finds that 92% students prefer playing mobile games over playing outside and 78% students _____ (5) to having their phone while having meals. In another survey by Local Circles, nearly 55% of parents admit that their children aged 9-13 have access to a smartphone throughout the day.

SubQuestion No : 21

Q.21 Select the most appropriate option to fill in blank number 1.

- Ans 1. visiting
 2. visited
 3. visit
 4. visits

Question ID : 264330152760

Option 1 ID : 264330598637

Option 2 ID : 264330598636

Option 3 ID : 264330598635

Option 4 ID : 264330598638

Status : Answered

Chosen Option : 2

Comprehension:

In the following passage, some words have been deleted. Read the passage carefully and select the most appropriate option to fill in each blank.

Tim Cook, CEO of Apple who has recently _____ (1) India, has some _____ (2) for parents: limit the screen time for children. He says: "Kids are born _____ (3), they're digital kids now. And it is, I think, important to set some hard rails around it." Various surveys of Indian children show alarming findings. A Saurashtra University survey of _____ (4) a thousand children and their parents in Rajkot finds that 92% students prefer playing mobile games over playing outside and 78% students _____ (5) to having their phone while having meals. In another survey by Local Circles, nearly 55% of parents admit that their children aged 9-13 have access to a smartphone throughout the day.

SubQuestion No : 22

Q.22 Select the most appropriate option to fill in blank number 2.

- Ans 1. suggesting
 2. advise
 3. suggest
 4. advice

Question ID : 264330152761

Option 1 ID : 264330598642

Option 2 ID : 264330598639

Option 3 ID : 264330598641

Option 4 ID : 264330598640

Status : Answered

Chosen Option : 4

Comprehension:

In the following passage, some words have been deleted. Read the passage carefully and select the most appropriate option to fill in each blank.

Tim Cook, CEO of Apple who has recently _____ (1) India, has some _____ (2) for parents: limit the screen time for children. He says: "Kids are born _____ (3), they're digital kids now. And it is, I think, important to set some hard rails around it." Various surveys of Indian children show alarming findings. A Saurashtra University survey of _____ (4) a thousand children and their parents in Rajkot finds that 92% students prefer playing mobile games over playing outside and 78% students _____ (5) to having their phone while having meals. In another survey by Local Circles, nearly 55% of parents admit that their children aged 9-13 have access to a smartphone throughout the day.

SubQuestion No : 23

Q.23 Select the most appropriate option to fill in blank number 3.

- Ans
- 1. digitally
 - 2. digitalise
 - 3. digital
 - 4. digitalised

Question ID : 264330152762

Option 1 ID : 264330598644

Option 2 ID : 264330598645

Option 3 ID : 264330598643

Option 4 ID : 264330598646

Status : Answered

Chosen Option : 4

Comprehension:

In the following passage, some words have been deleted. Read the passage carefully and select the most appropriate option to fill in each blank.

Tim Cook, CEO of Apple who has recently _____ (1) India, has some _____ (2) for parents: limit the screen time for children. He says: "Kids are born _____ (3), they're digital kids now. And it is, I think, important to set some hard rails around it." Various surveys of Indian children show alarming findings. A Saurashtra University survey of _____ (4) a thousand children and their parents in Rajkot finds that 92% students prefer playing mobile games over playing outside and 78% students _____ (5) to having their phone while having meals. In another survey by Local Circles, nearly 55% of parents admit that their children aged 9-13 have access to a smartphone throughout the day.

SubQuestion No : 24

Q.24 Select the most appropriate option to fill in blank number 4.

- Ans
- 1. closer than
 - 2. bigger than
 - 3. above than
 - 4. more than

Question ID : 264330152763

Option 1 ID : 264330598650

Option 2 ID : 264330598649

Option 3 ID : 264330598647

Option 4 ID : 264330598648

Status : Answered

Chosen Option : 4

Comprehension:

In the following passage, some words have been deleted. Read the passage carefully and select the most appropriate option to fill in each blank.

Tim Cook, CEO of Apple who has recently _____ (1) India, has some _____ (2) for parents: limit the screen time for children. He says: "Kids are born _____ (3), they're digital kids now. And it is, I think, important to set some hard rails around it." Various surveys of Indian children show alarming findings. A Saurashtra University survey of _____ (4) a thousand children and their parents in Rajkot finds that 92% students prefer playing mobile games over playing outside and 78% students _____ (5) to having their phone while having meals. In another survey by Local Circles, nearly 55% of parents admit that their children aged 9-13 have access to a smartphone throughout the day.

SubQuestion No : 25

Q.25 Select the most appropriate option to fill in blank number 5.

- Ans 1. habituated
 2. habituating
 3. will be habituating
 4. are habituated

Question ID : 264330152764

Option 1 ID : 264330598653

Option 2 ID : 264330598652

Option 3 ID : 264330598651

Option 4 ID : 264330598654

Status : Answered

Chosen Option : 4

