

Adda247
বাংলা



SSC MTS & Havaldar 2024 eBook

SSC MTS ডিকোডিং

SSC MTS এবং হাভালদার নিয়োগ 2024: ওভারভিউ

সংস্থার নাম	স্টাফ সিলেকশন কমিশন(SSC)
পোস্ট	মাল্টি-টাস্কিং স্টাফ (MTS), এবং হাভালদার (CBIC & CBN)
ভ্যাকেন্সি	9583 (সংশোধিত)
বিজ্ঞপ্তি প্রকাশের তারিখ	27শে জুন 2024
আবেদনের তারিখ	27শে জুন 2024 থেকে 3রা আগস্ট 2024
নির্বাচন প্রক্রিয়া	<ul style="list-style-type: none"> কম্পিউটার ভিত্তিক পরীক্ষা (অনলাইন) PET/PST (শুধুমাত্র হাভালদার পদের জন্য) ডকুমেন্ট ভেরিফিকেশন
বয়সীমা	<ul style="list-style-type: none"> সর্বনিম্ন বয়স - 18 বছর সর্বোচ্চ বয়স - 25 বছর (MTS) / 27 বছর (হাভালদার)
শিক্ষাগত যোগ্যতা	মাধ্যমিক পাস
পরীক্ষার ধরন	জাতীয় পর্যায়
আবেদনের মোড	অনলাইন
পরীক্ষার মোড	অনলাইন
স্যালারি	মাসিক Rs. 18,000/ to 22,000/
অফিসিয়াল ওয়েবসাইট	www.ssc.gov.in

SSC MTS পরীক্ষা 2024

স্টাফ সিলেকশন কমিশন SSC MTS হাভালদার (CBIC এবং CBN) এবং মাল্টি টাস্কিং স্টাফ পদের জন্য বিপুল সংখ্যক ভ্যাকেন্সিতে নিয়োগের জন্য বার্ষিক SSC MTS পরীক্ষা পরিচালনা করে। নিম্নলিখিত পদে প্রার্থীদের নিয়োগ দেওয়া হবে।

- হাভালদার
- পিয়ন
- দফতরী
- জমাদার
- জুনিয়র গেস্টটনার অপারেটর
- চৌকিদার
- সাফাইওয়াল
- মালি ইত্যাদি


BENGALI


SSC MTS MERIT LIST

লাইভ ক্লাস + রেকর্ডেড ভিডিও +
স্টাডি ম্যাট + মক টেস্ট
Preparation To Selection



Starts: 16 Aug, 2024

SSC MTS ভ্যাকেন্সি ট্রেন্ড

বছর	ভ্যাকেন্সির সংখ্যা
2024	9583
2023	1788
2022	11788
2021	4136
2020	3888
2019	9069

SSC MTS কাট অফ ট্রেন্ড

SSC MTS কাট অফ 2023 [18-25 বছর]

States	UR	SC	ST	OBC	EWS	ESM
All India	147.77693	-	-	-	-	-
Andaman & Nicobar Islands	134.57097	-	-	-	-	-
Andhra Pradesh	133.39728	132.01853	-	133.32405	131.34542	123.52241
Arunachal Pradesh	134.65945	-	-	-	-	-
Assam	135.71559	-	-	134.37096	-	102.94797
Bihar	-	-	-	152.81446	-	-
Chhattisgarh	-	-	-	-	-	-
Chandigarh	146.62801	139.51629	-	-	138.67809	-
Delhi	135.74927	131.17592	127.33086	134.21489	132.70906	104.42128
Goa	-	-	-	-	132.69256	-
Gujarat	135.65128	135.46212	127.00311	133.93687	-	-
Haryana	142.84727	-	145.06387	-	137.60904	-
Himachal Pradesh	138.33272	-	-	136.02459	136.19903	-
Jammu Kashmir	135.30232	132.77082	-	-	134.38118	-
Jharkhand	139.74714	135.30232	-	138.61325	138.35806	111.64798
Karnataka	132.73999	130.55360	-	133.43503	131.19476	110.60156
Kerala	137.42546	-	-	-	130.48337	116.99100
Lakshadweep	134.40190	130.75502	-	134.95780	-	-
Maharashtra	133.41967	133.32769	127.00311	133.39757	132.48932	116.69333
Madhya Pradesh	140.47566	135.37947	132.69256	139.89480	-	-
Manipur	135.47095	-	-	-	-	-
Meghalaya	133.98074	130.48350	127.98849	133.30087	131.89502	101.26727
Mizoram	133.32769	133.43503	-	-	-	-

States	UR	SC	ST	OBC	EWS	ESM
Nagaland	-	130.11344	-	-	-	-
Odisha	135.98607	134.40190	128.31989	134.49459	132.40357	115.06872
Punjab	137.19109	134.68085	138.38692	-	134.68085	-
Rajasthan	136.62171	132.21061	138.40427	135.65128	133.93687	111.47652
Tamil Nadu & Puducherry	132.35393	131.17592	126.17165	133.93687	130.09643	112.69440
Telangana	132.23076	130.37137	127.49389	132.21061	130.24663	106.49777
Tripura	135.30232	-	-	133.43801	-	-
Uttar Pradesh	145.78487	-	-	145.17468	144.56138	-
Uttarakhand	135.20696	132.70906	127.27043	134.34515	132.48932	111.39546
West Bengal	138.33669	138.55895	135.46212	134.91475	133.93687	107.72220

SSC MTS কাট অফ 2023 [18-27 বছর]

States	UR	SC	ST	OBC	EWS	ESM
Andaman & Nicobar Islands	-	-	-	141.33035	-	-
Andhra Pradesh	134.48027	-	126.23423	133.95815	133.30087	108.62298
Arunachal Pradesh	138.67809	-	-	133.86599	132.76245	-
Assam	-	134.80838	-	136.76078	-	-
Bihar	146.62801	-	-	-	-	-
Delhi	135.37947	133.93687	128.48488	133.93687	133.43503	103.85177
Jammu Kashmir	135.74927	134.4316	-	142.68805	134.40190	-
Jharkhand	143.28990	134.65945	-	140.24801	-	-
Karnataka	136.48829	-	-	-	-	-
Kerala	138.26974	133.93687	-	-	-	-
Maharashtra	135.39292	-	130.12571	133.95815	133.43503	-
Madhya Pradesh	138.26974	133.93687	-	-	-	-
Manipur	-	-	-	-	132.23839	-
Meghalaya	134.95780	130.44559	126.93907	-	-	-
Mizoram	134.66917	-	-	-	-	-
Nagaland	134.21489	-	-	-	-	-
Rajasthan	135.39292	-	136.76818	134.74785	133.43801	-
Tamil Nadu & Puducherry	-	-	-	138.23494	-	-
Telangana	-	-	126.91741	134.43126	-	-
Tripura	-	-	-	134.21489	-	-
Uttar Pradesh	145.13335	141.15936	135.30232	144.64798	-	-
West Bengal	139.82489	136.41777	-	-	139.55714	-

SSC MTS হাভালদার কাট অফ

CCA	Category	Session I	Session II
BHUBANESHWAR	UR	127.98896	148.69744
CHENNAI	UR	122.09914	136.39129
DELHI	UR	115.51169	163.49158
GOA	UR	121.85402	138.77602
HYDERABAD	UR	127.98896	149.52063
LUCKNOW	UR	102.62580	137.34611
MUMBAI	UR	111.74201	141.21474
THIRUVANANTHAPURAM	UR	89.70514	142.93738
CBN	UR	127.98896	133.45683
DGPM	UR	127.98896	133.01742

SSC MTS 2024 যোগ্যতা

যোগ্যতায় সাধারণত শিক্ষাগত যোগ্যতা, বয়স সীমা এবং জাতীয়তার প্রয়োজনীয়তা অন্তর্ভুক্ত থাকে। নিচে SSC MTS 2024 পরীক্ষার জন্য সম্পূর্ণ যোগ্যতা দেখুন।

জাতীয়তা:

একজন প্রার্থী অবশ্যই হতে হবে:

- ভারতের একজন নাগরিক, বা
- নেপালের এর অধিবাসী, বা
- ভুটানের অধিবাসী, বা
- একজন তিব্বতি উদ্ভাস্ত
- ভারতীয় বংশোদ্ভূত একজন ব্যক্তি যিনি পাকিস্তান, বার্মা, শ্রীলঙ্কা, পূর্ব আফ্রিকার দেশ কেনিয়া, উগান্ডা, তানজানিয়ার ইউনাইটেড রিপাবলিক (পূর্বে টাঙ্গানিকা এবং জানজিবার), জাম্বিয়া, মালাউই, জাম্বার, ইথিওপিয়া এবং ভিয়েতনাম থেকে অভিবাসী হয়েছেন। স্থায়ীভাবে ভারতে বসতি স্থাপন করেছেন।

শিক্ষাগত যোগ্যতা:

প্রার্থীদের অবশ্যই একটি স্বীকৃত বোর্ড থেকে ম্যাট্রিকুলেশন (10 পাস) বা সমমানের পরীক্ষায় উত্তীর্ণ হতে হবে।

আবেদনপত্র প্রাপ্তির শেষ তারিখের আগে কোনো প্রার্থী কোয়ালিফাইং পরীক্ষায় উত্তীর্ণ না হলে, তাকে আবেদন করার অনুমতি দেওয়া হবে না।

বয়সসীমা(1লা আগস্ট 2024 তারিখ অনুযায়ী):

- MTS পদের জন্য বয়সসীমা 18 থেকে 25 বছরের মধ্যে এবং CBIC এবং CBN-এ হাভালদার পদের জন্য 18 থেকে 27 বছর নির্ধারণ করা হয়েছে।
- পূর্ব-উল্লিখিত বয়সের প্রয়োজনীয়তা ছাড়াও, সংরক্ষিত বিভাগের প্রার্থীদের সরকারী নিয়ম অনুসারে বয়সে ছাড় দেওয়া হয়।



ক্যাটাগরি	বয়স শিথিলকরণ
SC/ ST	5 বছর
OBC	3 বছর
PwD (Unreserved)	10 বছর
PwD (OBC)	13 বছর
PwD (SC/ ST)	15 বছর
Ex-Servicemen (ESM)	অনলাইন আবেদন প্রাপ্তির শেষ তারিখে প্রকৃত বয়স থেকে সামরিক পরিষেবা থেকে অবসর নেওয়ার পর 3 বছর।

SSC MTS আবেদন ফি 2024

SSC MTS 2024-এর জন্য আবেদন ফি বিভিন্ন বিভাগের প্রার্থীদের জমা দিতে হবে নীচে দেওয়া হল।

- SSC MTS 2024-এর জন্য আবেদন ফি হল 100/- টাকা বাদ দেওয়া বিভাগগুলি ছাড়া।
- SC/ST/PWD/প্রাক্তন সৈনিক/মহিলা বিভাগের অন্তর্গত প্রার্থীদের আবেদন ফি প্রদান থেকে অব্যাহতি দেওয়া হয়েছে।

SSC MTS 2024 নির্বাচন প্রক্রিয়া

- CBE
- PET/PST (শুধুমাত্র হাভালদার পদের জন্য)
- ডকুমেন্ট ভেরিফিকেশন

SSC MTS 2024 পরীক্ষার প্যাটার্ন

SSC MTS Exam Pattern 2024 Paper 1

Part	Subject	No. Of Questions	Marks	Time Duration (For all four Parts)
Session I				
I	Numerical and Mathematical Ability	20	60	45 Minutes (60 Minutes for candidates eligible for scribes as per para 8)
II	Reasoning Ability and Problem Solving	20	60	
Session II				
I	English Language and Comprehension	25	75	45 Minutes (60 Minutes for candidates eligible for scribes as per para 8)
II	General Awareness	25	75	

SSC MTS 2024 সিলেবাস

প্রার্থীদের অবশ্যই এখানে MTS হাভালদার নির্বাচন প্রক্রিয়া সহ SSC MTS সিলেবাস এবং পরীক্ষার প্যাটার্নের বিশদ জানতে হবে।

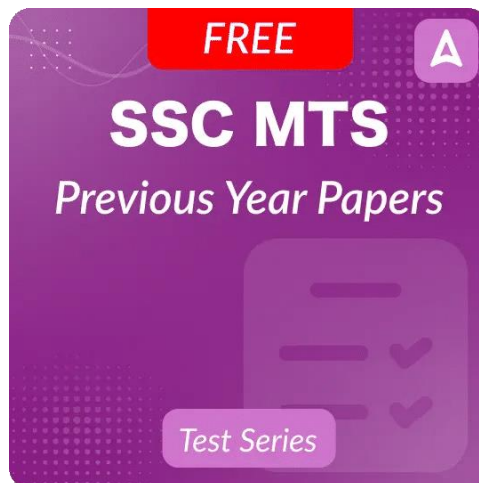
Subject	Topics
Numerical and Mathematical Ability	<ul style="list-style-type: none"> • Integers & Whole Numbers • LCM & HCF • Decimals & Fractions • BODMAS • Percentage • Ratio and Proportions • Work and Time • Direct and inverse Proportions • Averages

	<ul style="list-style-type: none"> • Simple Interest • Profit and Loss • Discount • Area and Perimeter of Basic Geometric Figures • Distance and Time • Lines and Angles • Interpretation of simple Graphs and Data • Square and Square roots, etc
Reasoning Ability and Problem-Solving	<ul style="list-style-type: none"> • Alpha-Numeric Series • Coding and Decoding • Analogy • Directions • Similarities and Differences • Jumbling • Problem Solving and Analysis • Age Calculations • Calendar & Clock • Non-verbal Reasoning, etc.
General Awareness	<ul style="list-style-type: none"> • History, Geography, Art and Culture, Civics, Economics, General Science and Environmental studies up to 10th standard.
English Language and Comprehension	<ul style="list-style-type: none"> • Spelling/detecting misspelled words • Antonym • Synonym • One word substitution • Sentence structure • Correct Usage • Idioms and Phrases • Comprehension, etc.

SSC MTS 2024 স্যালারি

SSC প্রতি বছর বিভিন্ন স্তরে হাজার হাজার প্রার্থী নিয়োগের জন্য বিভিন্ন পরীক্ষা পরিচালনা করে। SSC MTS বিভিন্ন মাল্টি-টাস্কিং পোস্টের জন্য প্রার্থীদের নিয়োগ করে যেমন ওয়াচম্যান, গার্ডেনার, পিয়ন ইত্যাদি। এই পোস্টগুলি হল গ্রুপ "C" নন-গেজেটেড এবং অ-মন্ত্রণালয় পদ।

SSC MTS স্যালারি 2024 পে ব্যান্ড-1 (Rs.5200 – 20200) + গ্রেড পে Rs.1800-এর অধীনে পড়ে যাইহোক, MTS-এর স্যালারি Rs. 25,000 - 30,000/মাস (প্রায়) এর মধ্যে হয়।



Multi Tasking Non Technical Staff and Havaladar CBIC and CBN Examination 2023

Roll Number	
Candidate Name	
Venue Name	iON Digital Zone iDZ Thondamuthur
Exam Date	01/09/2023
Exam Time	9:00 AM - 11:00 AM
Subject	MTS Non Tech Havaladar CBIC and CBN Examination 2023

Section : Numerical and Mathematical Ability

Q.1 If the first number is 20% less than the third number and the ratio of the second to the third number is 7 : 10, then the average of the first and the third number is how much per cent more than the second number?

- Ans**
- 1. $26\frac{4}{7}$
 - 2. $28\frac{2}{7}$
 - 3. $28\frac{4}{7}$
 - 4. $24\frac{2}{7}$

Question ID : 264330155958
Option 1 ID : 264330611234
Option 2 ID : 264330611232
Option 3 ID : 264330611231
Option 4 ID : 264330611233
Status : Answered
Chosen Option : 3

Q.2 Geeta deposited a certain sum of money in her bank account which amounted to ₹27,783 in 3 years at 5% per annum, the interest being compounded annually. What amount did she deposit?

- Ans**
- 1. ₹25,500
 - 2. ₹25,000
 - 3. ₹26,000
 - 4. ₹24,000

Question ID : 264330154129
Option 1 ID : 264330603980
Option 2 ID : 264330603981
Option 3 ID : 264330603979
Option 4 ID : 264330603982
Status : Answered
Chosen Option : 4

Q.3 A truck driver drove 60 km/h for three hours. Then he stopped for one hour and did not go anywhere. Then, he drove four more hours at 60 km/h. What was the driver's average speed (in km/h)?

- Ans**
- ✓ 1. 52.5
 - ✗ 2. 62.4
 - ✗ 3. 50.5
 - ✗ 4. 42.8

Question ID : 264330156099

Option 1 ID : 264330611796

Option 2 ID : 264330611798

Option 3 ID : 264330611795

Option 4 ID : 264330611797

Status : Answered

Chosen Option : 1

Q.4 The following table indicates the number of candidates who appeared in an entrance examination from four different cities A, B, C, D and the ratio of passing and failing. Study the table carefully and answer the question.

City	No. of candidates appeared	Ratio of passing and failing
A	660	5 : 6
B	650	2 : 3
C	500	3 : 2
D	630	4 : 5

Which city has the highest number of candidates who failed in the entrance examination and find its rate of per cent in that city, respectively?

- Ans**
- ✗ 1. A, 50%
 - ✓ 2. B, 60%
 - ✗ 3. D, 60%
 - ✗ 4. C, 50%

Question ID : 264330156014

Option 1 ID : 264330611456

Option 2 ID : 264330611457

Option 3 ID : 264330611455

Option 4 ID : 264330611458

Status : Answered

Chosen Option : 2

Q.5 Disha invested an amount of ₹20,000 for 9 years at a simple interest per annum and obtain the total amount of ₹33,500. What is the rate of interest?

- Ans**
- ✗ 1. 8%
 - ✗ 2. 8.5%
 - ✓ 3. 7.5%
 - ✗ 4. 9%

Question ID : 264330156188

Option 1 ID : 264330612154

Option 2 ID : 264330612153

Option 3 ID : 264330612152

Option 4 ID : 264330612151

Status : Answered

Chosen Option : 3

Q.6 Simplify:

$$(13 \div 13 \text{ of } 13 + 13) / (13 \div 13 \times 13 + 13)$$

Ans

1. $\frac{1}{26}$

2. $\frac{15}{26}$

3. $\frac{13}{96}$

4. $\frac{85}{169}$

Question ID : 264330156088

Option 1 ID : 264330611751

Option 2 ID : 264330611752

Option 3 ID : 264330611754

Option 4 ID : 264330611753

Status : Answered

Chosen Option : 4

Q.7 The cost price of an item is ₹4,350. What is the profit percentage (rounded off to 1 decimal place) if it is sold at ₹5,680?

Ans

1. 28.5%

2. 40.7%

3. 36.8%

4. 30.6%

Question ID : 264330156475

Option 1 ID : 264330613290

Option 2 ID : 264330613287

Option 3 ID : 264330613288

Option 4 ID : 264330613289

Status : Answered

Chosen Option : 4

Q.8 In a class of 37 students, there are 22 girls. The average weight of these girls is 46 kg and the average weight of the whole class is 50 kg. What is the average weight (in kg) of the boys in that class? (Rounded off to 2 decimal places)

Ans

1. 60.74

2. 55.87

3. 61.35

4. 58.25

Question ID : 264330155728

Option 1 ID : 264330610317

Option 2 ID : 264330610315

Option 3 ID : 264330610318

Option 4 ID : 264330610316

Status : Answered

Chosen Option : 2

Q.9 A boat takes 20 hours for travelling downstream from point A to point B and comes back to a midpoint C between A and B. The speed of the stream is 5 km/h and the speed of the boat in still water is 10 km/h. Find the distance between A and B (in km).

- Ans**
- 1. 100
 - 2. 120
 - 3. 150
 - 4. 75

Question ID : 264330153854
Option 1 ID : 264330602880
Option 2 ID : 264330602879
Option 3 ID : 264330602881
Option 4 ID : 264330602882
Status : Answered
Chosen Option : 2

Q.10 Raju sold an article to Ravi at 10% gain. Ravi sold the article to Ramu at a loss of 10%. If Ramu paid ₹1,485 to Ravi, find the selling price of Raju to Ravi.

- Ans**
- 1. ₹1,200
 - 2. ₹1,500
 - 3. ₹1,650
 - 4. ₹1,600

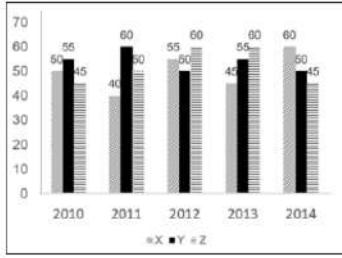
Question ID : 264330153840
Option 1 ID : 264330602825
Option 2 ID : 264330602823
Option 3 ID : 264330602826
Option 4 ID : 264330602824
Status : Answered
Chosen Option : 3

Q.11 A and B can do a piece of work in 4 days, B and C can do the same work in 5 days, A and C can do it in 10 days. If A, B, C work together, in how many days can they complete the work?

- Ans**
- 1. $3\frac{11}{7}$
 - 2. $11\frac{3}{7}$
 - 3. $3\frac{7}{11}$
 - 4. $11\frac{7}{3}$

Question ID : 264330156009
Option 1 ID : 264330611437
Option 2 ID : 264330611436
Option 3 ID : 264330611438
Option 4 ID : 264330611435
Status : Answered
Chosen Option : 3

Q.12 The graph shows the production of tyres (in Lakhs) by three different companies X, Y, and Z over the years.
Directions: Study the following graph carefully to answer the question given below it.



What is the difference between the average production per year of the company with the highest average production and that of the company with the lowest average production in Lakhs?

- Ans**
- 1. 2
 - 2. 6
 - 3. 8
 - 4. 4

Question ID : 264330153891
 Option 1 ID : 264330603027
 Option 2 ID : 264330603029
 Option 3 ID : 264330603030
 Option 4 ID : 264330603028
 Status : Answered
 Chosen Option : 4

Q.13 What is the mean proportional of 9.61 and 3.61?

- Ans**
- 1. 3.17
 - 2. 5.89
 - 3. 4.87
 - 4. 6.78

Question ID : 264330154085
 Option 1 ID : 264330603803
 Option 2 ID : 264330603805
 Option 3 ID : 264330603804
 Option 4 ID : 264330603806
 Status : Answered
 Chosen Option : 2

Q.14 Two numbers A and B are such that the sum of 6% of A and 4% of B is two-fifth of the sum of 7% of A and 11% of B, then the ratio A : B is:

- Ans**
- 1. 3 : 7
 - 2. 5 : 8
 - 3. 1 : 8
 - 4. 1 : 7

Question ID : 264330154088
 Option 1 ID : 264330603816
 Option 2 ID : 264330603818
 Option 3 ID : 264330603817
 Option 4 ID : 264330603815
 Status : Answered
 Chosen Option : 3

Q.15 Two trains of length 110 m and 85 m are moving in the same direction at 12 m/s and 7 m/s, respectively. Find the time (in seconds) taken by the faster train to cross the slower train.

- Ans** 1. 39
 2. 35
 3. 19
 4. 29

Question ID : 264330155753

Option 1 ID : 264330610418

Option 2 ID : 264330610417

Option 3 ID : 264330610415

Option 4 ID : 264330610416

Status : Answered

Chosen Option : 1

Q.16 In what ratio must a grocer mix two varieties of rice costing ₹128 and ₹143 per kg, respectively, to get a mixture of rice worth ₹137.75 per kg?

- Ans** 1. 12:5
 2. 7:13
 3. 5:4
 4. 6:7

Question ID : 264330153759

Option 1 ID : 264330602499

Option 2 ID : 264330602500

Option 3 ID : 264330602501

Option 4 ID : 264330602502

Status : Answered

Chosen Option : 2

Q.17 Two persons take steps of 77 cm and 88 cm, respectively. If they start in step, then what is the minimum distance (in cm) they should cover so that both of them can cover the distance in complete steps?

- Ans** 1. 968
 2. 828
 3. 616
 4. 560

Question ID : 264330156295

Option 1 ID : 264330612581

Option 2 ID : 264330612580

Option 3 ID : 264330612582

Option 4 ID : 264330612579

Status : Answered

Chosen Option : 3

Q.18 The surface area of a sphere is 616 cm^2 , find its diameter.

Take $\pi = \frac{22}{7}$

- Ans
- 1. 14 cm
 - 2. 2 cm
 - 3. 4 cm
 - 4. 3 cm

Question ID : 264330156369
Option 1 ID : 264330612875
Option 2 ID : 264330612876
Option 3 ID : 264330612878
Option 4 ID : 264330612877
Status : Answered
Chosen Option : 1

Q.19 The diameter of a metallic sphere is 6 cm. It is melted and drawn into a wire having a diameter of the cross section as 0.4 cm. Find the length of the wire (in metres).

- Ans
- 1. 18
 - 2. 9
 - 3. 12
 - 4. 10

Question ID : 264330153866
Option 1 ID : 264330602930
Option 2 ID : 264330602929
Option 3 ID : 264330602928
Option 4 ID : 264330602927
Status : Answered
Chosen Option : 2

Q.20 A, B and C can do a piece of work in 10, 15, 12 days, respectively. A and B worked alternately for 5 days each and left. Then C joined and completed the work. In how many days did C complete the remaining work?

- Ans
- 1. 3
 - 2. 1
 - 3. 4
 - 4. 2

Question ID : 264330153856
Option 1 ID : 264330602888
Option 2 ID : 264330602890
Option 3 ID : 264330602887
Option 4 ID : 264330602889
Status : Answered
Chosen Option : 4

Q.1 287 is related to 398 following a certain logic. Following the same logic, 378 is related to 489. To which of the following is 852 related to, following the same logic?

- Ans**
- 1. 643
 - 2. 963
 - 3. 346
 - 4. 543

Question ID : 264330151602
Option 1 ID : 264330594036
Option 2 ID : 264330594035
Option 3 ID : 264330594038
Option 4 ID : 264330594037
Status : Answered
Chosen Option : 2

Q.2 If 'A' stands for '+', 'B' stands for '×', 'C' stands for '÷' and 'D' stands for '-', what will come in place of the question mark (?) in the following equation?
(87 A 29) B 14 D 24 C 14 C 6 B 5 = ?

- Ans**
- 1. 68
 - 2. 74
 - 3. 62
 - 4. 56

Question ID : 264330151805
Option 1 ID : 264330594848
Option 2 ID : 264330594850
Option 3 ID : 264330594849
Option 4 ID : 264330594847
Status : Answered
Chosen Option : 3

Q.3 What should come in place of '?' in the given series?

9 15 33 87 ? 735 2193

- Ans**
- 1. 241
 - 2. 249
 - 3. 237
 - 4. 225

Question ID : 264330151483
Option 1 ID : 264330593561
Option 2 ID : 264330593562
Option 3 ID : 264330593560
Option 4 ID : 264330593559
Status : Answered
Chosen Option : 2

Q.4 What should come in place of ? in the given series based on the English alphabetical order?

CNT, FQU, ITV, LWW, ?

- Ans**
- 1. OZX
 - 2. NYY
 - 3. MXZ
 - 4. LYX

Question ID : 264330155786
Option 1 ID : 264330610550
Option 2 ID : 264330610549
Option 3 ID : 264330610548
Option 4 ID : 264330610547
Status : Answered
Chosen Option : 1

Q.5 38 is related to 49 following a certain logic. Following the same logic, 64 is related to 75. To which of the following is 83 related to, following the same logic?

- Ans**
- 1. 93
 - 2. 95
 - 3. 92
 - 4. 94

Question ID : 264330151593
Option 1 ID : 264330594000
Option 2 ID : 264330594002
Option 3 ID : 264330593999
Option 4 ID : 264330594001
Status : Answered
Chosen Option : 4

Q.6 What should come in place of '?' in the given series?

3 9 45 261 1557 ?

- Ans**
- 1. 9555
 - 2. 8572
 - 3. 9433
 - 4. 9333

Question ID : 264330151451
Option 1 ID : 264330593434
Option 2 ID : 264330593431
Option 3 ID : 264330593433
Option 4 ID : 264330593432
Status : Answered
Chosen Option : 4

Q.7 What will come in the place of '?' in the following equation, if '+' and '-' are interchanged and '×' and '÷' are interchanged?

$$32 - 512 \times 64 \div 8 + 64 = ?$$

- Ans
- 1. 42
 - 2. 22
 - 3. 32
 - 4. 52

Question ID : 264330155677

Option 1 ID : 264330610113

Option 2 ID : 264330610111

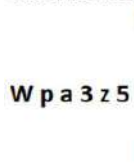
Option 3 ID : 264330610112

Option 4 ID : 264330610114

Status : Answered

Chosen Option : 3

Q.8 Select the correct mirror image of the given figure when the mirror is placed at MN as shown below.



- Ans
- 1. 5z3 ɹp W
 - 2. z5ɛ ɹp M
 - 3. ƶzz ɹb M
 - 4. ƶzɛ ɹq W

Question ID : 264330151510

Option 1 ID : 264330593667

Option 2 ID : 264330593670

Option 3 ID : 264330593668

Option 4 ID : 264330593669

Status : Answered

Chosen Option : 4

Q.9 What should come in place of '?' in the given series?

16 65 261 1045 4181 ?

- Ans
- 1. 16945
 - 2. 16273
 - 3. 16725
 - 4. 16892

Question ID : 264330151475

Option 1 ID : 264330593530

Option 2 ID : 264330593527

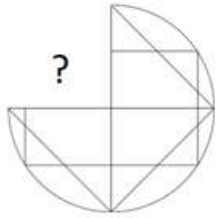
Option 3 ID : 264330593528

Option 4 ID : 264330593529

Status : Answered

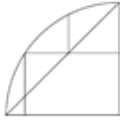
Chosen Option : 3

Q.10 Identify the figure that completes the pattern (rotation is NOT allowed).



Ans

✗ 1.



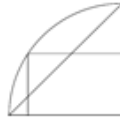
✗ 2.



✗ 3.



✓ 4.



Question ID : 264330154514

Option 1 ID : 264330605521

Option 2 ID : 264330605520

Option 3 ID : 264330605519

Option 4 ID : 264330605522

Status : Answered

Chosen Option : 4

Q.11 Select the word-pair that best represents a similar relationship to the one expressed in the pair of words given below.

(The words must be considered as meaningful English words and must not be related to each other based on the number of letters/number of consonants/vowels in the word)

Reflection : Light

Ans

✗ 1. Sentiment : Feeling

✓ 2. Echo : Sound

✗ 3. Iris : Sight

✗ 4. Movie : Scene

Question ID : 264330154638

Option 1 ID : 264330606017

Option 2 ID : 264330606016

Option 3 ID : 264330606018

Option 4 ID : 264330606015

Status : Answered

Chosen Option : 2

Q.12 Read the given statements and conclusions carefully. You have to take the given statements to be true even if they seem to be at variance from commonly known facts. You have to decide which conclusion/s logically follow/s from the given statements.

Statements: All rags are carpets. Some carpets are steel. Some steel are bottles.

Conclusion I: All carpets are rags.

Conclusion II: Some carpets are bottles.

- Ans**
- 1. Only conclusion (I) is follow.
 - 2. Both conclusions (I) and (II) are follow.
 - 3. Only conclusion (II) is follow.
 - 4. Neither conclusion (I) nor (II) is follow.

Question ID : 264330155925
Option 1 ID : 264330611103
Option 2 ID : 264330611106
Option 3 ID : 264330611104
Option 4 ID : 264330611105
Status : Answered
Chosen Option : 4

Q.13 Find out the correct alternative that when filled in the blanks in the same sequence will make the series logically complete.

X _AL ZH _L _KAL DNA_ _QAL

- Ans**
- 1. FBPSB
 - 2. FABLE
 - 3. EABLF
 - 4. EBFLA

Question ID : 264330154726
Option 1 ID : 264330606370
Option 2 ID : 264330606368
Option 3 ID : 264330606369
Option 4 ID : 264330606367
Status : Answered
Chosen Option : 3

Q.14 The position of how many letters will remain unchanged if each of the letter in the word 'FINGER' is arranged in alphabetical order?

- Ans**
- 1. Two
 - 2. One
 - 3. Three
 - 4. Four

Question ID : 264330154326
Option 1 ID : 264330604769
Option 2 ID : 264330604770
Option 3 ID : 264330604768
Option 4 ID : 264330604767
Status : Answered
Chosen Option : 2

Q.15 In a certain code language, 'BLUE' is coded as '1542' and 'ABLE' is coded as '1745'. What is the code for 'A' in the given code language?

- Ans** 1. 7
 2. 1
 3. 4
 4. 5

Question ID : 264330151690

Option 1 ID : 264330594390

Option 2 ID : 264330594387

Option 3 ID : 264330594389

Option 4 ID : 264330594388

Status : Answered

Chosen Option : 1

Q.16 Read the given statement(s) and conclusions carefully. Assuming that the information given in the statements is true, even if it appears to be at variance with commonly known facts, decide which of the given conclusions logically follow(s) from the statement(s).

Statements: All chocolates are sweets. Some sweets are harmful.

Conclusions:

(I) All Chocolates are harmful.

(II) Some harmful are chocolates.

- Ans** 1. Neither conclusion (I) nor (II) is follows.
 2. Both conclusions (I) and (II) are follows.
 3. Only conclusion (II) is follows.
 4. Only conclusion (I) is follows.

Question ID : 264330154433

Option 1 ID : 264330605197

Option 2 ID : 264330605198

Option 3 ID : 264330605196

Option 4 ID : 264330605195

Status : Answered

Chosen Option : 1

বাংলা

Q.19 Six people, P, Q, R, S, T and U are sitting in a straight line, facing north. U sits fourth to the right of R. R is not sitting at the extreme end of the line. T is the immediate neighbour of U and S. Q sits third to the left of S.

Who is sitting immediately to the right of R?

- Ans**
- 1. S
 - 2. T
 - 3. Q
 - 4. P

Question ID : 264330155549
Option 1 ID : 264330609601
Option 2 ID : 264330609602
Option 3 ID : 264330609599
Option 4 ID : 264330609600
Status : Answered
Chosen Option : 4

Q.20 Select the combination of letters that when sequentially placed in the blanks of the given series, will complete the series.

P _ _ P O _ P _ P _ O P

- Ans**
- 1. POPPO
 - 2. POOOP
 - 3. OOOPP
 - 4. OPOP

Question ID : 264330151650
Option 1 ID : 264330594227
Option 2 ID : 264330594229
Option 3 ID : 264330594230
Option 4 ID : 264330594228
Status : Answered
Chosen Option : 4

Section : General Awareness

Q.1 FIFA U-17 Women's World Cup 2022 matches were NOT held in which state?

- Ans**
- 1. Maharashtra
 - 2. Odisha
 - 3. Goa
 - 4. Gujarat

Question ID : 264330158223
Option 1 ID : 264330620251
Option 2 ID : 264330620254
Option 3 ID : 264330620252
Option 4 ID : 264330620253
Status : Not Answered
Chosen Option : --

Q.2 Who among the following is one of the co-authors of the book, 'Cracking The Code:My Journey in Bollywood'?

- Ans**
- 1. Harshvardhan Kapoor
 - 2. Nawazuddin Siddique
 - 3. Ayushmann Khurrana
 - 4. Rajkumar Rao

Question ID : 264330161906
Option 1 ID : 264330634954
Option 2 ID : 264330634951
Option 3 ID : 264330634953
Option 4 ID : 264330634952
Status : Not Answered
Chosen Option : --

Q.3 In 1873, who published the first photograph of nerve tissue stained with the black reaction technique, describing a whole nerve cell?

- Ans**
- 1. Gunter Blobel
 - 2. Camillo Golgi
 - 3. William Harvey
 - 4. Paul Ehrlich

Question ID : 264330161088
Option 1 ID : 264330631686
Option 2 ID : 264330631685
Option 3 ID : 264330631683
Option 4 ID : 264330631684
Status : Not Answered
Chosen Option : --

Q.4 In October 2022, Virat Kohli became the first Indian to complete how many runs in T20 cricket history?

- Ans**
- 1. 11000
 - 2. 9000
 - 3. 5000
 - 4. 15000

Question ID : 264330158362
Option 1 ID : 264330620809
Option 2 ID : 264330620808
Option 3 ID : 264330620807
Option 4 ID : 264330620810
Status : Not Answered
Chosen Option : --

Q.5 According to Sikh literature, the birth anniversary of Guru Nanak Dev is celebrated on the full moon day of the Indian lunar month _____.

- Ans
- 1. Magh
 - 2. Paush
 - 3. Ashada
 - 4. Kartik

Question ID : 264330160833
Option 1 ID : 264330630666
Option 2 ID : 264330630664
Option 3 ID : 264330630663
Option 4 ID : 264330630665
Status : Not Answered
Chosen Option : --

Q.6 Yakshagana is a folk dance that belongs to the state of _____.

- Ans
- 1. Kerala
 - 2. Karnataka
 - 3. Haryana
 - 4. Rajasthan

Question ID : 264330159057
Option 1 ID : 264330623587
Option 2 ID : 264330623588
Option 3 ID : 264330623589
Option 4 ID : 264330623590
Status : Answered
Chosen Option : 2

Q.7 The brick temple of Bhitargaon is situated in which state?

- Ans
- 1. Odisha
 - 2. Jharkhand
 - 3. Uttar Pradesh
 - 4. Madhya Pradesh

Question ID : 264330160781
Option 1 ID : 264330630456
Option 2 ID : 264330630455
Option 3 ID : 264330630458
Option 4 ID : 264330630457
Status : Not Answered
Chosen Option : --

Q.8 Which of the following movements was founded in Bengal?

- Ans
- 1. Ramakrishna Mission
 - 2. Arya Samaj
 - 3. Satyashodhak Samaj
 - 4. Prarthana Samaj

Question ID : 264330160891
Option 1 ID : 264330630896
Option 2 ID : 264330630895
Option 3 ID : 264330630898
Option 4 ID : 264330630897
Status : Answered
Chosen Option : 1

Q.9 On 15 August 1947, the first prime minister of India, Jawaharlal Nehru, raised the Indian National Flag above the _____ of Red Fort in Delhi.

- Ans
- 1. Delhi Gate
 - 2. Kashmiri Gate
 - 3. Ajmeri Gate
 - 4. Lahori Gate

Question ID : 264330161347
Option 1 ID : 264330632717
Option 2 ID : 264330632715
Option 3 ID : 264330632718
Option 4 ID : 264330632716
Status : Answered
Chosen Option : 1

Q.10 'Mandarin' is the official language of which neighbouring country of India?

- Ans
- 1. Afghanistan
 - 2. Bhutan
 - 3. Sri Lanka
 - 4. China

Question ID : 264330161563
Option 1 ID : 264330633579
Option 2 ID : 264330633581
Option 3 ID : 264330633580
Option 4 ID : 264330633582
Status : Answered
Chosen Option : 4

Q.11 Which of the following is used to measure the total output of goods and services in an economy including depreciation during a specific period within country?

- Ans
- 1. Net Domestic Product (NDP)
 - 2. Gross National Product (GNP)
 - 3. Net National Product (NNP)
 - 4. Gross Domestic Product (GDP)

Question ID : 264330157311
Option 1 ID : 264330616610
Option 2 ID : 264330616608
Option 3 ID : 264330616609
Option 4 ID : 264330616607
Status : Answered
Chosen Option : 1

Q.12 Which of the following is NOT related to the sport of swimming?

- Ans
- 1. Breaststroke
 - 2. Back stroke
 - 3. Freestyle
 - 4. Penalty Corner

Question ID : 264330158244
Option 1 ID : 264330620337
Option 2 ID : 264330620336
Option 3 ID : 264330620335
Option 4 ID : 264330620338
Status : Answered
Chosen Option : 4

Q.13 The East-West corridor, which is a part of the Golden Quadrilateral super highways, links which two cities of India from the following?

- Ans
- 1. Ahmadnagar and Imphal
 - 2. Silchar and Porbander
 - 3. Jaipur and Gangtok
 - 4. Gandhi Nagar and Silchar

Question ID : 264330161490
Option 1 ID : 264330633290
Option 2 ID : 264330633289
Option 3 ID : 264330633288
Option 4 ID : 264330633287
Status : Answered
Chosen Option : 2

Q.14 What is the name of the seventh most abundant metal in the earth's crust, which is derived from the medieval Latin word 'Kalium'?

- Ans
- 1. Aluminium
 - 2. Magnesium
 - 3. Calcium
 - 4. Potassium

Question ID : 264330161060
Option 1 ID : 264330631574
Option 2 ID : 264330631571
Option 3 ID : 264330631573
Option 4 ID : 264330631572
Status : Answered
Chosen Option : 4

Q.15 What is the aim of Article 44 of the Indian Constitution?

- Ans
- 1. To protect every monument or place of artistic or historic interest
 - 2. To separate judiciary from the executive in the public services of the State
 - 3. To protect and improve the environment and safeguard the forests and wildlife of the country
 - 4. To secure for the citizen, a uniform civil code through the territory of India

Question ID : 264330162253
Option 1 ID : 264330636341
Option 2 ID : 264330636342
Option 3 ID : 264330636340
Option 4 ID : 264330636339
Status : Answered
Chosen Option : 4

Q.16 Which of the following novels of Kamleshwar was awarded the Sahitya Akademi Award in 2003?

- Ans
- 1. Jalti Hui Nadi
 - 2. Kaali Aandhi
 - 3. Kitne Pakistan
 - 4. Ek Sadak Sattavan Galiyan

Question ID : 264330161762
Option 1 ID : 264330634377
Option 2 ID : 264330634378
Option 3 ID : 264330634376
Option 4 ID : 264330634375
Status : Not Answered
Chosen Option : --

Q.17 Which of the following institutes was founded by MG Ranade and GV Joshi?

- Ans
- 1. Abhinav Bharat
 - 2. The Indian National Congress
 - 3. The Bombay Presidency Association
 - 4. Poona Sarvajanik Sabha

Question ID : 264330160883
Option 1 ID : 264330630866
Option 2 ID : 264330630865
Option 3 ID : 264330630863
Option 4 ID : 264330630864
Status : Answered
Chosen Option : 1

Q.18 Roshan Kumari, Shovana Narayan, Maya Rao and Kumudini Lakhia are eminent artists.

- Ans
- 1. Odissi
 - 2. Kuchipudi
 - 3. Kathak
 - 4. Manipuri

Question ID : 264330160812
Option 1 ID : 264330630580
Option 2 ID : 264330630581
Option 3 ID : 264330630579
Option 4 ID : 264330630582
Status : Answered
Chosen Option : 3

Q.19 Rani Machaiah is a _____ folk dancer who was awarded Padma Shri in 2023.

- Ans
- 1. Ummathat
 - 2. Lambadi
 - 3. Gussadi
 - 4. Dhimsa

Question ID : 264330155487
Option 1 ID : 264330609352
Option 2 ID : 264330609354
Option 3 ID : 264330609351
Option 4 ID : 264330609353
Status : Not Answered
Chosen Option : --

Q.20 What is the difference between a debit card and a credit card?

- Ans** 1. Debit cards are used for online transactions, while credit cards are used for in-person purchases.
2. Credit cards require a PIN, while debit cards require a signature.
3. Debit cards withdraw money directly from a bank account, while credit cards allow borrowing up to a certain limit.
4. Debit cards have higher interest rates than credit cards.

Question ID : 264330157309

Option 1 ID : 264330616599

Option 2 ID : 264330616602

Option 3 ID : 264330616600

Option 4 ID : 264330616601

Status : Answered

Chosen Option : 3

Q.21 The Constitution (Scheduled Tribes) Order (Second Amendment) Bill, 2022 has included Narikoravan and Kurivikkaran communities in the list of Scheduled Tribes of which state?

- Ans** 1. Bihar
2. Tamil Nadu
3. Chhattisgarh
4. Odisha

Question ID : 264330158333

Option 1 ID : 264330620691

Option 2 ID : 264330620694

Option 3 ID : 264330620693

Option 4 ID : 264330620692

Status : Answered

Chosen Option : 2

Q.22 Which group of musicians were awarded by 'Bharat Ratna' from the following? (As of May 2023.)

- Ans** 1. Anu Malik and Udit Narayan
2. Pandit Ravi Shankar and Pandit Bhimsen Joshi
3. Asha Bhosle and Kishore Kumar
4. AR Rahman and Hariprasad Chaurasia

Question ID : 264330155511

Option 1 ID : 264330609449

Option 2 ID : 264330609447

Option 3 ID : 264330609450

Option 4 ID : 264330609448

Status : Answered

Chosen Option : 2

Q.23 Which river is also known as Tsangpo?

- Ans**
- 1. Ganga river
 - 2. Gandak river
 - 3. Kaveri river
 - 4. Brahmaputra river

Question ID : 264330160151
Option 1 ID : 264330627943
Option 2 ID : 264330627946
Option 3 ID : 264330627945
Option 4 ID : 264330627944
Status : Answered
Chosen Option : 4

Q.24 What is the destination of the water drained off by the Nile river?

- Ans**
- 1. Lake Victoria
 - 2. Indian Ocean
 - 3. Mediterranean Sea
 - 4. Lake Tanganyika

Question ID : 264330161329
Option 1 ID : 264330632646
Option 2 ID : 264330632643
Option 3 ID : 264330632644
Option 4 ID : 264330632645
Status : Answered
Chosen Option : 3

Q.25 Article 149 of the Constitution deals with _____.

- Ans**
- 1. the qualifications required for the appointment of the Comptroller and Auditor-General of India
 - 2. the duties and powers of the Comptroller and Auditor-General of India
 - 3. the term of office of the Comptroller and Auditor-General of India
 - 4. the appointment of the Comptroller and Auditor-General of India

Question ID : 264330161287
Option 1 ID : 264330632477
Option 2 ID : 264330632475
Option 3 ID : 264330632478
Option 4 ID : 264330632476
Status : Answered
Chosen Option : 4

Q.1 Select the most appropriate ANTONYM of the given word.
Feud

- Ans 1. Gross
 2. Peril
 3. Harmony
 4. Vigour

Question ID : 264330152677
Option 1 ID : 264330598312
Option 2 ID : 264330598314
Option 3 ID : 264330598313
Option 4 ID : 264330598311
Status : Answered
Chosen Option : 4

Q.2 Parts of the following sentence have been given as options. Select the option that contains an error.

All these things happen/ because she do not / pay heed to my words.

- Ans 1. pay heed to my words
 2. All these things happen
 3. No error
 4. because she do not

Question ID : 264330155379
Option 1 ID : 264330608933
Option 2 ID : 264330608931
Option 3 ID : 264330608934
Option 4 ID : 264330608932
Status : Not Answered
Chosen Option : --

Q.3 Select the most appropriate option that can substitute the underlined segment in the given sentence.

Professor said that I will be late for the lecture.

- Ans 1. he shall be late for the lecture
 2. he is late for the lecture
 3. he would be late for the lecture
 4. he may be late for the lecture

Question ID : 264330152712
Option 1 ID : 264330598448
Option 2 ID : 264330598449
Option 3 ID : 264330598447
Option 4 ID : 264330598450
Status : Answered
Chosen Option : 3

Q.4 Select the INCORRECTLY spelt word.

- Ans 1. Separate
 2. Accommodate
 3. Definitely
 4. Embarass

Question ID : 264330152644
Option 1 ID : 264330598182
Option 2 ID : 264330598179
Option 3 ID : 264330598180
Option 4 ID : 264330598181
Status : Answered
Chosen Option : 1

Q.5 Select the most appropriate meaning of the given idiom.
Sell like hot cakes

- Ans 1. Quick sell out
 2. Selling cakes
 3. Being ignored
 4. Eating hot cake

Question ID : 264330152725
Option 1 ID : 264330598500
Option 2 ID : 264330598501
Option 3 ID : 264330598499
Option 4 ID : 264330598502
Status : Answered
Chosen Option : 1

Q.6 Select the most appropriate option that can substitute the underlined segment in the given sentence.

Andrew will playing basketball at the college tournament.

- Ans 1. are play the
 2. are play
 3. is playing
 4. is played

Question ID : 264330153473
Option 1 ID : 264330601408
Option 2 ID : 264330601407
Option 3 ID : 264330601409
Option 4 ID : 264330601410
Status : Answered
Chosen Option : 3

Q.7 Select the most appropriate word to fill in the blank.
Hardik Pandya hit four _____ fours and scored 72 runs in the match.

- Ans** 1. continuous
 2. consecutive
 3. ongoing
 4. constant

Question ID : 264330153507
Option 1 ID : 264330601540
Option 2 ID : 264330601539
Option 3 ID : 264330601542
Option 4 ID : 264330601541
Status : Answered
Chosen Option : 2

Q.8 Select the sentence that has NO spelling errors.

- Ans** 1. The doctor presribed some medicine to alleviate my parsistent cough, which has been boathering me for days.
 2. The doctor precribed some medicine to aleviate my persistent cough, which has been bothering me for days.
 3. The doctor prescribed some medicine to aleviate my parsistent cough, which has been boathering me for days.
 4. The doctor prescribed some medicine to alleviate my persistent cough, which has been bothering me for days.

Question ID : 264330152649
Option 1 ID : 264330598201
Option 2 ID : 264330598200
Option 3 ID : 264330598202
Option 4 ID : 264330598199
Status : Answered
Chosen Option : 4

Q.9 Select the most appropriate synonym of the bracketed word in the following sentence to fill in the blank.
The athlete's perseverance and mental toughness _____ (facilitate) her to overcome adversity and achieve her goals.

- Ans** 1. restricted
 2. enabled
 3. limited
 4. hindered

Question ID : 264330152653
Option 1 ID : 264330598216
Option 2 ID : 264330598218
Option 3 ID : 264330598215
Option 4 ID : 264330598217
Status : Answered
Chosen Option : 2

Q.10 The following sentence has been split into four segments. Identify the segment that contains a grammatical error.

Throughout my career as a journalist, / I covered many important stories and / interviewed numerous individuals, which allow me / to share important information and insights with my readers.

- Ans
- 1. to share important information and insights with my readers
 - 2. I covered many important stories and
 - 3. Throughout my career as a journalist,
 - 4. interviewed numerous individuals, which allow me

Question ID : 264330144182

Option 1 ID : 264330564994

Option 2 ID : 264330564992

Option 3 ID : 264330564991

Option 4 ID : 264330564993

Status : Answered

Chosen Option : 4

Q.11 The following sentence has been split into four segments. Identify the segment that contains a grammatical error.

Harish says / that his sister / loves to play / harmonium.

- Ans
- 1. harmonium
 - 2. loves to play
 - 3. Harish says
 - 4. that his sister

Question ID : 264330153165

Option 1 ID : 264330600222

Option 2 ID : 264330600221

Option 3 ID : 264330600219

Option 4 ID : 264330600220

Status : Answered

Chosen Option : 1

Q.12 Select the most appropriate option that can substitute the underlined segment in the following sentence.

Selling, purchasing, and using an illegally copied product is a criminal offence.

- Ans
- 1. an obsolete
 - 2. a pirated
 - 3. an outlawed
 - 4. a crooked

Question ID : 264330152633

Option 1 ID : 264330598135

Option 2 ID : 264330598136

Option 3 ID : 264330598137

Option 4 ID : 264330598138

Status : Answered

Chosen Option : 2

Q.13 Select the most appropriate option to fill in the blank.
The hiring manager has already offered you the job; now, _____ to accept or decline the offer.

- Ans
- 1. a penny for your thoughts
 - 2. the ball is in your court
 - 3. pull your leg
 - 4. get your act together

Question ID : 264330151891
Option 1 ID : 264330595184
Option 2 ID : 264330595183
Option 3 ID : 264330595185
Option 4 ID : 264330595186
Status : Answered
Chosen Option : 2

Q.14 Select the most appropriate option to fill in the blank.
Oberon doesn't like the way Demetrius _____ to Helena. (Credit: A Midsummer Night's Dream)

- Ans
- 1. talked
 - 2. talks
 - 3. talking
 - 4. to talk

Question ID : 264330153511
Option 1 ID : 264330601555
Option 2 ID : 264330601556
Option 3 ID : 264330601557
Option 4 ID : 264330601558
Status : Answered
Chosen Option : 2

Q.15 Select the most appropriate meaning of the given idiom.
Let sleeping dogs lie

- Ans
- 1. To let somebody sleep
 - 2. To fall sick intentionally
 - 3. Leave an existing situation as it is
 - 4. To care for the pet

Question ID : 264330156172
Option 1 ID : 264330612088
Option 2 ID : 264330612089
Option 3 ID : 264330612090
Option 4 ID : 264330612087
Status : Answered
Chosen Option : 3

Q.16 Select the option that can be used as a one-word substitute for the given group of words.

A cage made for birds.

OR

A place for keeping the birds in a confined space.

- Ans
- 1. Aquarium
 - 2. Apiary
 - 3. Aviary
 - 4. Arena

Question ID : 264330153553

Option 1 ID : 264330601713

Option 2 ID : 264330601711

Option 3 ID : 264330601714

Option 4 ID : 264330601712

Status : Answered

Chosen Option : 3

Q.17 Select the most appropriate synonym of the given word.
Repulsive

- Ans
- 1. Attractive
 - 2. Reliable
 - 3. Disgusting
 - 4. Uniform

Question ID : 264330151922

Option 1 ID : 264330595303

Option 2 ID : 264330595305

Option 3 ID : 264330595304

Option 4 ID : 264330595306

Status : Answered

Chosen Option : 3

Q.18 Select the option that rectifies the spelling of the underlined word in the given sentence.

The sergent brought in a lot of changes as soon as he was given charge.

- Ans
- 1. seargeant
 - 2. sergeannt
 - 3. sergant
 - 4. sergeant

Question ID : 264330153156

Option 1 ID : 264330600185

Option 2 ID : 264330600184

Option 3 ID : 264330600183

Option 4 ID : 264330600186

Status : Answered

Chosen Option : 3

Q.19 The given sentence contains an error. Select the option that correctly rectifies the error.

The boy told his mother that he saw the most tall giraffe at the zoo.

- Ans
- 1. The boy told his mother that he saw the tallest giraffe at the zoo.
 - 2. The boy told his mother that he saw the most taller giraffe at the zoo.
 - 3. The boy told his mother that he saw the most tallest giraffe at the zoo.
 - 4. The boy told his mother that he saw the more taller giraffe at the zoo.

Question ID : 264330152606

Option 1 ID : 264330598030

Option 2 ID : 264330598028

Option 3 ID : 264330598029

Option 4 ID : 264330598027

Status : Answered

Chosen Option : 1

Q.20 Select the most appropriate meaning of the given idiom.

Call the shots

- Ans
- 1. To be a follower that makes less important decision
 - 2. To be in a position to make decisions that influences a situation
 - 3. To be in a powerless position that follows orders
 - 4. To be in a neutral position

Question ID : 264330153073

Option 1 ID : 264330599857

Option 2 ID : 264330599856

Option 3 ID : 264330599858

Option 4 ID : 264330599855

Status : Answered

Chosen Option : 2

Comprehension:

In the following passage, some words have been deleted. Fill in the blanks with the help of the alternatives given. Select the most appropriate option for each blank.

That evening we sat in the courtyard of the hotel once more, (1) _____ the sun sink below the western isles. I told Alexi what had happened that day. I (2) _____ I could glimpse the grey stone wall of Lismore House (3) _____ its island hilltop, the red light of the setting sun glinting from the windows, and from there the wasted frame of Jonathan Blake gazing out across the sea, on nothing, his boy waiting for him to die. But it was my (4) _____, simply the image on my mind, like the image burned on to your eyes when you have (5) _____ too long at the sun, the passing footprint of a creature long gone.

SubQuestion No : 21

Q.21 Select the most appropriate option to fill in blank no. 1.

- Ans
- 1. watching
 - 2. wallowing
 - 3. risking
 - 4. practising

Question ID : 264330153445

Option 1 ID : 264330601299

Option 2 ID : 264330601302

Option 3 ID : 264330601301

Option 4 ID : 264330601300

Status : Answered

Chosen Option : 1

Comprehension:

In the following passage, some words have been deleted. Fill in the blanks with the help of the alternatives given. Select the most appropriate option for each blank.
That evening we sat in the courtyard of the hotel once more, (1) _____ the sun sink below the western isles. I told Alexi what had happened that day. I (2) _____ I could glimpse the grey stone wall of Lismore House (3) _____ its island hilltop, the red light of the setting sun glinting from the windows, and from there the wasted frame of Jonathan Blake gazing out across the sea, on nothing, his boy waiting for him to die. But it was my (4) _____, simply the image on my mind, like the image burned on to your eyes when you have (5) _____ too long at the sun, the passing footprint of a creature long gone.

SubQuestion No : 22

Q.22 Select the most appropriate option to fill in blank no. 2.

- Ans 1. fancied
 2. groped
 3. imbibed
 4. translated

Question ID : 264330153446

Option 1 ID : 264330601305

Option 2 ID : 264330601306

Option 3 ID : 264330601303

Option 4 ID : 264330601304

Status : Answered

Chosen Option : 1

Comprehension:

In the following passage, some words have been deleted. Fill in the blanks with the help of the alternatives given. Select the most appropriate option for each blank.
That evening we sat in the courtyard of the hotel once more, (1) _____ the sun sink below the western isles. I told Alexi what had happened that day. I (2) _____ I could glimpse the grey stone wall of Lismore House (3) _____ its island hilltop, the red light of the setting sun glinting from the windows, and from there the wasted frame of Jonathan Blake gazing out across the sea, on nothing, his boy waiting for him to die. But it was my (4) _____, simply the image on my mind, like the image burned on to your eyes when you have (5) _____ too long at the sun, the passing footprint of a creature long gone.

SubQuestion No : 23

Q.23 Select the most appropriate option to fill in blank no. 3.

- Ans 1. off
 2. on
 3. aside
 4. for

Question ID : 264330153447

Option 1 ID : 264330601307

Option 2 ID : 264330601308

Option 3 ID : 264330601309

Option 4 ID : 264330601310

Status : Answered

Chosen Option : 2

Comprehension:

In the following passage, some words have been deleted. Fill in the blanks with the help of the alternatives given. Select the most appropriate option for each blank.
That evening we sat in the courtyard of the hotel once more, (1) _____ the sun sink below the western isles. I told Alexi what had happened that day. I (2) _____ I could glimpse the grey stone wall of Lismore House (3) _____ its island hilltop, the red light of the setting sun glinting from the windows, and from there the wasted frame of Jonathan Blake gazing out across the sea, on nothing, his boy waiting for him to die. But it was my (4) _____, simply the image on my mind, like the image burned on to your eyes when you have (5) _____ too long at the sun, the passing footprint of a creature long gone.

SubQuestion No : 24**Q.24** Select the most appropriate option to fill in blank no. 4.

- Ans 1. dribble
 2. straw
 3. fantasy
 4. habitat

Question ID : 264330153448

Option 1 ID : 264330601312

Option 2 ID : 264330601311

Option 3 ID : 264330601313

Option 4 ID : 264330601314

Status : Answered

Chosen Option : 3

Comprehension:

In the following passage, some words have been deleted. Fill in the blanks with the help of the alternatives given. Select the most appropriate option for each blank.
That evening we sat in the courtyard of the hotel once more, (1) _____ the sun sink below the western isles. I told Alexi what had happened that day. I (2) _____ I could glimpse the grey stone wall of Lismore House (3) _____ its island hilltop, the red light of the setting sun glinting from the windows, and from there the wasted frame of Jonathan Blake gazing out across the sea, on nothing, his boy waiting for him to die. But it was my (4) _____, simply the image on my mind, like the image burned on to your eyes when you have (5) _____ too long at the sun, the passing footprint of a creature long gone.

SubQuestion No : 25**Q.25** Select the most appropriate option to fill in blank no. 5.

- Ans 1. resumed
 2. rusted
 3. blocked
 4. stared

Question ID : 264330153449

Option 1 ID : 264330601317

Option 2 ID : 264330601315

Option 3 ID : 264330601316

Option 4 ID : 264330601318

Status : Answered

Chosen Option : 4

Multi Tasking Non Technical Staff and Havaladar CBIC and CBN Examination 2023

Roll Number	
Candidate Name	
Venue Name	iON Digital Zone iDZ 2 Patliputra
Exam Date	01/09/2023
Exam Time	12:30 PM - 2:30 PM
Subject	MTS Non Tech Havaladar CBIC and CBN Examination 2023

Section : Numerical and Mathematical Ability

Q.1 The area of a trapezium shaped field is 1720 m^2 , the distance between its parallel sides is 40 m and the length of one of the parallel sides is 48 m. What is the length (in m) of the other parallel side?

- Ans**
- 1. 56
 - 2. 38
 - 3. 42
 - 4. 34

Question ID : 264330153788

Option 1 ID : 264330602615

Option 2 ID : 264330602616

Option 3 ID : 264330602617

Option 4 ID : 264330602618

Status : Answered

Chosen Option : 2

Q.2 Ram can do a piece of work in 18 hours. Shyam and Naresh can do it in 9 hours. Ram and Naresh can do it in 12 hours. How long will Shyam alone take to do it?

- Ans**
- 1. 15 hours
 - 2. 9 hours
 - 3. 12 hours
 - 4. 11 hours

Question ID : 264330156566

Option 1 ID : 264330613654

Option 2 ID : 264330613651

Option 3 ID : 264330613653

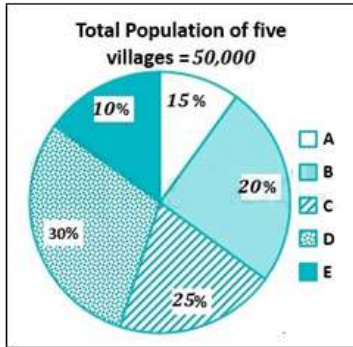
Option 4 ID : 264330613652

Status : Answered

Chosen Option : 3

Q.3 Study the given pie-chart and answer the question that follows.

The pie-chart shows the percentage of the population in five villages in a year.



Find the ratio of population in villages B and D.

- Ans
- 1. 1 : 3
 - 2. 3 : 1
 - 3. 2 : 3
 - 4. 3 : 2

Question ID : 264330156243

Option 1 ID : 264330612371

Option 2 ID : 264330612373

Option 3 ID : 264330612372

Option 4 ID : 264330612374

Status : Answered

Chosen Option : 3

Q.4 Find the fourth proportional to $(a + b)^2 \times (a^3 - b^3)$, $(a^3 + b^3)$, $(a^2 - b^2)$.

- Ans
- 1. $\frac{(a^2 - ab + b^2)}{(a + b)}$
 - 2. $\frac{(a^2 + ab + b^2)}{(a - b)}$
 - 3. $\frac{(a^2 - ab + b^2)}{(a^2 + ab + b^2)}$
 - 4. $\frac{(a^2 + ab + b^2)}{(a^2 - b^2)}$

Question ID : 264330153846

Option 1 ID : 264330602849

Option 2 ID : 264330602848

Option 3 ID : 264330602850

Option 4 ID : 264330602847

Status : Not Attempted and Marked For Review

Chosen Option : --

Q.5 If $(x - 2)$ is a factor of $(2x^2 + 12kx - 25k)$, then what is the value of k ?

- Ans
- 1. 2
 - 2. 8
 - 3. 4
 - 4. 6

Question ID : 264330156203

Option 1 ID : 264330612211

Option 2 ID : 264330612214

Option 3 ID : 264330612212

Option 4 ID : 264330612213

Status : **Not Attempted and Marked For Review**

Chosen Option : --

Q.6 A 360 m long train running at the speed of 108 km/h crosses another train running in the opposite direction at the speed of 90 km/h in 12 seconds. What is the length (in m) of the other train?

- Ans
- 1. 330
 - 2. 270
 - 3. 300
 - 4. 345

Question ID : 264330156491

Option 1 ID : 264330613351

Option 2 ID : 264330613352

Option 3 ID : 264330613354

Option 4 ID : 264330613353

Status : **Answered**

Chosen Option : 3

Q.7 A cuboid with dimension $2 \times 4 \times 1$ units is melted and a new cube is made. What is the total surface area of the cube formed in square units?

- Ans
- 1. 32
 - 2. 28
 - 3. 24
 - 4. 16

Question ID : 264330153827

Option 1 ID : 264330602772

Option 2 ID : 264330602771

Option 3 ID : 264330602773

Option 4 ID : 264330602774

Status : **Answered**

Chosen Option : 3

Q.8 Samridhi sold a gold ring at a loss of 26%. If the cost price of the gold ring is ₹38,500, what is the selling price of the gold ring?

- Ans**
- ✓ 1. ₹28,490
 - ✗ 2. ₹30,500
 - ✗ 3. ₹29,590
 - ✗ 4. ₹38,600

Question ID : 264330156181
Option 1 ID : 264330612125
Option 2 ID : 264330612123
Option 3 ID : 264330612126
Option 4 ID : 264330612124
Status : Answered
Chosen Option : 1

Q.9 Student gets 62, 58, 72, 58 and 83 marks in Sanskrit, English, Mathematics, Social and Computer Science, respectively. His average marks in Mathematics, Social and Computer Science are _____ more than the average marks in Sanskrit, English and Mathematics.

- Ans**
- ✗ 1. 9
 - ✗ 2. 8
 - ✗ 3. 6
 - ✓ 4. 7

Question ID : 264330156251
Option 1 ID : 264330612406
Option 2 ID : 264330612405
Option 3 ID : 264330612403
Option 4 ID : 264330612404
Status : Answered
Chosen Option : 4

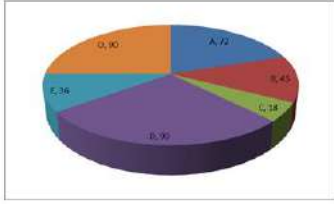
Q.10 P and Q are inversely proportional to each other and P is 10, when Q is 6. What will be the value of Q when P is 15?

- Ans**
- ✗ 1. 9
 - ✓ 2. 4
 - ✗ 3. 10
 - ✗ 4. 5

Question ID : 264330154125
Option 1 ID : 264330603963
Option 2 ID : 264330603964
Option 3 ID : 264330603966
Option 4 ID : 264330603965
Status : Marked For Review
Chosen Option : 2

Q.11 The pie diagram represents the export of different types of fabrics (in degree measure) from India during 2015.

If the income from one ton of fabric A is three times that from the fabric C, then the ratio between the income from A to C is:



- Ans**
- 1. 1 : 3
 - 2. 3 : 1
 - 3. 12 : 1
 - 4. 6 : 1

Question ID : 264330154066

Option 1 ID : 264330603730

Option 2 ID : 264330603727

Option 3 ID : 264330603728

Option 4 ID : 264330603729

Status : Answered

Chosen Option : 3

Q.12 The average marks of 13 students in a subject is 66. If the average of the first seven students is 67 and that of the last seven students is 69, then the marks of the seventh student is:

- Ans**
- 1. 99
 - 2. 91
 - 3. 97
 - 4. 94

Question ID : 264330154076

Option 1 ID : 264330603770

Option 2 ID : 264330603767

Option 3 ID : 264330603769

Option 4 ID : 264330603768

Status : Answered

Chosen Option : 4

Q.13 Shobha purchased a small plot in a residential area for ₹6,00,000 and sold it to Lakshita at a profit of 20%. Lakshita, in turn, sold it to Dinesh at a loss of 10%. How much did Dinesh pay for the plot?

- Ans**
- 1. ₹6,40,000
 - 2. ₹6,48,000
 - 3. ₹6,08,000
 - 4. ₹6,00,000

Question ID : 264330154122

Option 1 ID : 264330603952

Option 2 ID : 264330603951

Option 3 ID : 264330603953

Option 4 ID : 264330603954

Status : Answered

Chosen Option : 2

Q.14 A sum of money deposited at simple interest amounts to ₹1,020 in three years and ₹980 in two years. The sum deposited is:

- Ans** 1. ₹900
 2. ₹880
 3. ₹920
 4. ₹840

Question ID : 264330158840
Option 1 ID : 264330622721
Option 2 ID : 264330622720
Option 3 ID : 264330622722
Option 4 ID : 264330622719
Status : Answered
Chosen Option : 1

Q.15 A sum of money becomes ₹6,400 in 3 years and ₹8,100 in 5 years on compound interest compounded annually. Find the rate of interest per annum.

- Ans** 1. $12\frac{3}{8}\%$
 2. $12\frac{4}{8}\%$
 3. $12\frac{6}{8}\%$
 4. $12\frac{5}{8}\%$

Question ID : 264330156228
Option 1 ID : 264330612311
Option 2 ID : 264330612312
Option 3 ID : 264330612314
Option 4 ID : 264330612313
Status : Not Answered
Chosen Option : --

Q.16 There is a 25 litre mixture of milk and water, containing milk and water in the ratio 3 : 2. Find the number of litres of water that should be added to the mixture so that the resultant mixture has 50% water in it.

- Ans** 1. 10
 2. 8
 3. 5
 4. 12

Question ID : 264330155990
Option 1 ID : 264330611362
Option 2 ID : 264330611360
Option 3 ID : 264330611361
Option 4 ID : 264330611359
Status : Answered
Chosen Option : 3

Q.17 Simplify the following:
 $(16\frac{2}{5} - 12\frac{1}{15}) \div 3\frac{4}{81} = ?$

- Ans
- 1. $1\frac{9}{13}$
 - 2. $1\frac{9}{19}$
 - 3. $1\frac{8}{19}$
 - 4. $2\frac{8}{13}$

Question ID : 264330156334
Option 1 ID : 264330612738
Option 2 ID : 264330612735
Option 3 ID : 264330612737
Option 4 ID : 264330612736
Status : Answered
Chosen Option : 3

Q.18 The price of a fan is first decreased by 28% and then increased by 35%. If the resulting price is ₹1,215, find the original price of the fan.

- Ans
- 1. ₹1,250
 - 2. ₹1,520
 - 3. ₹2,150
 - 4. ₹1,052

Question ID : 264330156555
Option 1 ID : 264330613608
Option 2 ID : 264330613609
Option 3 ID : 264330613610
Option 4 ID : 264330613607
Status : Answered
Chosen Option : 3

Q.19 A can do a piece of work in 36 days, while B can do it in 48 days. B worked on it for 12 days and leaves it. How many days will A take to finish the remaining work?

- Ans
- 1. 21
 - 2. 27
 - 3. 28
 - 4. 32

Question ID : 264330154095
Option 1 ID : 264330603845
Option 2 ID : 264330603846
Option 3 ID : 264330603844
Option 4 ID : 264330603843
Status : Answered
Chosen Option : 2

Q.20 A policeman chases a thief who is 630 metres ahead of him. If they run at a speed of 9.5 km per hour and 6.5 km per hour, respectively, then what distance (in km, rounded off to 1 decimal place) does the thief run before he is nabbed by the policeman?

- Ans**
- 1. 1.8
 - 2. 2.0
 - 3. 1.4
 - 4. 1.2

Question ID : 264330156309

Option 1 ID : 264330612636

Option 2 ID : 264330612635

Option 3 ID : 264330612638

Option 4 ID : 264330612637

Status : Answered

Chosen Option : 3

Section : Reasoning Ability and Problem Solving

Q.1 FKQN is related to LQWT in a certain way based on the English alphabetical order. In the same way, CHOJ is related to INUP. To which of the following is DOSG related to, following the same logic?

- Ans**
- 1. JSWM
 - 2. JUYM
 - 3. IUVL
 - 4. HQWK

Question ID : 264330151658

Option 1 ID : 264330594262

Option 2 ID : 264330594259

Option 3 ID : 264330594261


Option 4 ID : 264330594260

Status : Answered

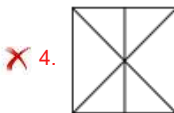
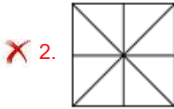
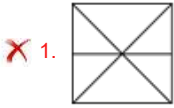
Chosen Option : 2

বাংলা

Q.2 Identify the figure that completes the pattern (rotation is NOT allowed).



Ans



Question ID : 264330154512

Option 1 ID : 264330605511

Option 2 ID : 264330605512

Option 3 ID : 264330605514

Option 4 ID : 264330605513

Status : Answered

Chosen Option : 3

Q.3 What should come in place of '?' in the given series?

5 11 29 ? 245 731 2189

Ans 1. 97

2. 83

3. 85

4. 79

Question ID : 264330151491

Option 1 ID : 264330593594

Option 2 ID : 264330593592

Option 3 ID : 264330593593

Option 4 ID : 264330593591

Status : Not Attempted and
Marked For Review

Chosen Option : --

Q.4 What should come in place of '?' in the given series?

25 39 67 123 235 ?

- Ans
- 1. 434
 - 2. 459
 - 3. 378
 - 4. 291

Question ID : 264330151450
Option 1 ID : 264330593429
Option 2 ID : 264330593430
Option 3 ID : 264330593427
Option 4 ID : 264330593428
Status : Answered
Chosen Option : 2

Q.5 What should come in place of '?' in the given series?

7 22 52 112 232 ?

- Ans
- 1. 482
 - 2. 484
 - 3. 462
 - 4. 472

Question ID : 264330151460
Option 1 ID : 264330593469
Option 2 ID : 264330593470
Option 3 ID : 264330593467
Option 4 ID : 264330593468
Status : Answered
Chosen Option : 4

Q.6 Read the given statements and conclusions carefully. You have to take the given statements to be true even if they seem to be at variance from commonly known facts. You have to decide which conclusion/s logically follow/s from the given statements.

Statements: All TVs are radios. Some radios are dryers. All dryers are hot.

Conclusion I: Some TVs are radios.

Conclusion II: Some dryers are TVs.

- Ans
- 1. Neither conclusion (I) nor (II) is follow.
 - 2. Both conclusions (I) and (II) are follow.
 - 3. Only conclusion (I) is follow.
 - 4. Only conclusion (II) is follow.

Question ID : 264330155913
Option 1 ID : 264330611057
Option 2 ID : 264330611058
Option 3 ID : 264330611055
Option 4 ID : 264330611056
Status : Answered
Chosen Option : 3

Q.7 F, G, H, I, J, K, L and M are sitting around a square table facing the centre. Some of them are sitting at the corners of the table while some are sitting at the exact centre of the sides. G, I, H, and J are not sitting in any of the corners. G is sitting to the immediate left of K and immediate right of L. I is sitting to the immediate right of K. F is sitting to the immediate right of I and immediate left of H. J is sitting to the immediate right of M and immediate left of L. Who is sitting to the immediate left of M?

- Ans**
- 1. I
 - 2. H
 - 3. J
 - 4. G

Question ID : 264330155872

Option 1 ID : 264330610891

Option 2 ID : 264330610892

Option 3 ID : 264330610894

Option 4 ID : 264330610893

Status : Answered

Chosen Option : 2

Q.8 Read the given statements and conclusions carefully. You have to take the given statements to be true even if they seem to be at variance from commonly known facts. You have to decide which conclusion/s logically follow/s from the given statements.

Statements: Some cows are animals. All animals are big. No big is a mobile.

Conclusion I: All cows are animals.

Conclusion II: No big is an animal.

- Ans**
- 1. Only conclusion (I) is follow.
 - 2. Neither conclusion (I) nor (II) is follow.
 - 3. Both conclusions (I) and (II) are follow.
 - 4. Only conclusion (II) is follow.

Question ID : 264330155891

Option 1 ID : 264330610967

Option 2 ID : 264330610969

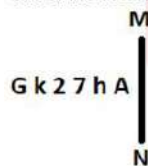
Option 3 ID : 264330610970

Option 4 ID : 264330610968

Status : Answered

Chosen Option : 2

Q.9 Select the correct mirror image of the given figure when the mirror is placed at MN as shown below.



- Ans**
- 1. A h 7 2 k G
 - 2. A h 7 2 k G
 - 3. A h 2 7 k G
 - 4. A h 7 2 k G

Question ID : 264330151521

Option 1 ID : 264330593714

Option 2 ID : 264330593711

Option 3 ID : 264330593713

Option 4 ID : 264330593712

Status : Answered

Chosen Option : 1

Q.10 In a certain code language, 'ESCORT' is coded as 'GRBNQV' and 'APRON' is coded as 'COQNP'. What is the code for 'CRANKY' in the given code language?

- Ans**
- 1. FPZKNC
 - 2. DQYNKB
 - 3. DPANJB
 - 4. EQZMJA

Question ID : 264330155830
Option 1 ID : 264330610726
Option 2 ID : 264330610723
Option 3 ID : 264330610724
Option 4 ID : 264330610725
Status : Answered
Chosen Option : 4

Q.11 What should come in place of ? in the given series based on the English alphabetical order?

QDS, NET, KFU, HGV, ?

- Ans**
- 1. FGV
 - 2. FHU
 - 3. EHW
 - 4. GHU

Question ID : 264330155795
Option 1 ID : 264330610584
Option 2 ID : 264330610585
Option 3 ID : 264330610583
Option 4 ID : 264330610586
Status : Answered
Chosen Option : 3

Q.12 What will come in place of '?' in the following equation, if '+' and '×' are interchanged and '-' and '+' are interchanged?

$$14 + 5 + 2 - 1 \times 3 = ?$$

- Ans**
- 1. 23
 - 2. 16
 - 3. 17
 - 4. 71

Question ID : 264330154665
Option 1 ID : 264330606124
Option 2 ID : 264330606125
Option 3 ID : 264330606123
Option 4 ID : 264330606126
Status : Answered
Chosen Option : 4

Q.13 In a certain code language, 'BATH' is coded as '1482' and 'HALT' is coded as '8126'. What is the code for 'L' in the given code language?

- Ans**
- 1. 1
 - 2. 8
 - 3. 2
 - 4. 6

Question ID : 264330151712
Option 1 ID : 264330594477
Option 2 ID : 264330594478
Option 3 ID : 264330594475
Option 4 ID : 264330594476
Status : Answered
Chosen Option : 4

Q.14 If 2nd Oct 2003 is Thursday, then what will be the day of the week on 15th July 2010?

- Ans**
- 1. Monday
 - 2. Friday
 - 3. Thursday
 - 4. Tuesday

Question ID : 264330154334
Option 1 ID : 264330604801
Option 2 ID : 264330604800
Option 3 ID : 264330604802
Option 4 ID : 264330604799
Status : Not Answered
Chosen Option : --

Q.15 Select the combination of letters that when sequentially placed in the blanks of the given series, will complete the series.

HI_H__HI__IH

- Ans**
- 1. HIHHH
 - 2. HIHIIH
 - 3. IIIHI
 - 4. IHIIIH

Question ID : 264330151646
Option 1 ID : 264330594211
Option 2 ID : 264330594213
Option 3 ID : 264330594212
Option 4 ID : 264330594214
Status : Answered
Chosen Option : 1

Q.16 284 is related to 142 following a certain logic. Following the same logic, 612 is related to 306. To which of the following is 522 related to, following the same logic?

- Ans**
- 1. 262
 - 2. 261
 - 3. 263
 - 4. 264

Question ID : 264330151583
Option 1 ID : 264330593960
Option 2 ID : 264330593959
Option 3 ID : 264330593961
Option 4 ID : 264330593962
Status : Answered
Chosen Option : 2

Q.17 In the following number-pairs, the second number is obtained by applying certain mathematical operations to the first number. Select the set in which the numbers are related in the same way as are the numbers of the following sets.
(NOTE: Operations should be performed on the whole numbers, without breaking down the numbers into its constituent digits. E.g. 13 – Operations on 13 such as adding / subtracting / multiplying etc. to 13 can be performed. Breaking down 13 into 1 and 3 and then performing mathematical operations on 1 and 3 is not allowed)

5, 24
12, 143

- Ans**
- 1. 27, 345
 - 2. 14, 195
 - 3. 18, 652
 - 4. 21, 126

Question ID : 264330151623
Option 1 ID : 264330594120
Option 2 ID : 264330594119
Option 3 ID : 264330594122
Option 4 ID : 264330594121
Status : Answered
Chosen Option : 2

Q.18 If G means '-', C means '×', D means '+', B means '+', then what will come in place of the question mark (?) in the following equation?

49 G 69 D 3 B 12 C 5 = ?

- Ans**
- 1. 64
 - 2. 13
 - 3. 37
 - 4. 86

Question ID : 264330154686
Option 1 ID : 264330606209
Option 2 ID : 264330606207
Option 3 ID : 264330606208
Option 4 ID : 264330606210
Status : Answered
Chosen Option : 4

Q.19 What should come in place of ? in the given series based on the English alphabetical order?

SIY, VHA, YGC, BFE, ?

- Ans
- 1. DEG
 - 2. FEH
 - 3. EEG
 - 4. DFH

Question ID : 264330155800

Option 1 ID : 264330610604

Option 2 ID : 264330610603

Option 3 ID : 264330610606

Option 4 ID : 264330610605

Status : Answered

Chosen Option : 3

Q.20 Which figure should replace the question mark (?) if the following figure series were to be continued?

↑	W	S	T	
W O R S	T ↑	T W 8 R	7 S	?
S 8 8	R R	↑ ↑	8	

Ans

1.

	R	
7	T	8
S		↑

2.

	7	
T	R	↑
8		S

3.

	R	
7	T	↑
8		S

4.

	7	
T	R	8
S		↑

Question ID : 264330154741

Option 1 ID : 264330606428

Option 2 ID : 264330606427

Option 3 ID : 264330606430

Option 4 ID : 264330606429

Status : Answered

Chosen Option : 1

Q.1 In which of the following states is there hardly any differences in day and night temperatures?

- Ans
- 1. Rajasthan
 - 2. Bihar
 - 3. Kerala
 - 4. Punjab

Question ID : 264330160148
Option 1 ID : 264330627932
Option 2 ID : 264330627934
Option 3 ID : 264330627931
Option 4 ID : 264330627933
Status : Answered
Chosen Option : 3

Q.2 For which dance form did Vasundhara Doraswamy get Sangeet Natak Akademi Award (Akademi Puraskar) for the year 2019?

- Ans
- 1. Mohiniyattam
 - 2. Kathakali
 - 3. Bharatanatyam
 - 4. Kathak

Question ID : 264330155480
Option 1 ID : 264330609326
Option 2 ID : 264330609325
Option 3 ID : 264330609323
Option 4 ID : 264330609324
Status : Answered
Chosen Option : 1

Q.3 The dancers Padma Subrahmanyam, Alarmel Valli, Yamini Krishnamurthy and Anita Ratnam are great exponents of _____.

- Ans
- 1. Mohiniyattam
 - 2. Odissi
 - 3. Bharatanatyam
 - 4. Kathak

Question ID : 264330160807
Option 1 ID : 264330630561
Option 2 ID : 264330630559
Option 3 ID : 264330630562
Option 4 ID : 264330630560
Status : Answered
Chosen Option : 3

Q.4 Which of the following states won the Santosh Trophy in Riyadh in March 2023 after a gap of 54 years?

- Ans** 1. Karnataka
 2. Tamil Nadu
 3. Maharashtra
 4. Andhra Pradesh

Question ID : 264330161441
Option 1 ID : 264330633091
Option 2 ID : 264330633092
Option 3 ID : 264330633094
Option 4 ID : 264330633093
Status : Not Answered
Chosen Option : --

Q.5 Which of the following statements is correct about Article 129 of the Constitution of India?

- Ans** 1. It provides for the Supreme Court to give advisory opinion to the President.
 2. It provides for the Supreme Court to be a court of original jurisdiction
 3. It provides for the Supreme Court to be a court of record.
 4. It provides for the Supreme Court to be the highest court of appeal.

Question ID : 264330161291
Option 1 ID : 264330632491
Option 2 ID : 264330632493
Option 3 ID : 264330632494
Option 4 ID : 264330632492
Status : Answered
Chosen Option : 3

Q.6 Indian classical vocalist Pandit Jasraj belonged to which of the following musical gharanas?

- Ans** 1. Patiala Gharana
 2. Dagari Gharana
 3. Gwalior Gharana
 4. Mewati Gharana

Question ID : 264330161768
Option 1 ID : 264330634402
Option 2 ID : 264330634400
Option 3 ID : 264330634401
Option 4 ID : 264330634399
Status : Answered
Chosen Option : 3

Q.7 Articles 29-30 of the Constitution of India deals with _____

- Ans** 1. Cultural and educational rights
 2. Right to freedom
 3. Right to equality
 4. Right to freedom of religion

Question ID : 264330159902
Option 1 ID : 264330626958
Option 2 ID : 264330626956
Option 3 ID : 264330626955
Option 4 ID : 264330626957
Status : Answered
Chosen Option : 1

Q.8 As per the 18th Periodic Labour Force Survey (PLFS), the unemployment rate among females (aged 15 years and above) in urban areas declined to _____ in January-March 2023.

- Ans 1. 9.7%
2. 9.2%
3. 7.8%
4. 8.2%

Question ID : 264330166023
Option 1 ID : 264330651170
Option 2 ID : 264330651169
Option 3 ID : 264330651167
Option 4 ID : 264330651168
Status : Not Answered
Chosen Option : --

Q.9 Which of the following is connected with daily atmospheric weather changes?

- Ans 1. Asthenosphere
2. Stratopause
3. Troposphere
4. Lithosphere

Question ID : 264330161312
Option 1 ID : 264330632578
Option 2 ID : 264330632575
Option 3 ID : 264330632576
Option 4 ID : 264330632577
Status : Answered
Chosen Option : 3

Q.10 According to the Census of India 2011, which of the following states has the lowest literacy rate?

- Ans 1. Kerala
2. Tripura
3. Goa
4. Mizoram

Question ID : 264330160162
Option 1 ID : 264330627990
Option 2 ID : 264330627988
Option 3 ID : 264330627989
Option 4 ID : 264330627987
Status : Answered
Chosen Option : 4

Q.11 In which state is the famous Brihadeshwar temple situated?

- Ans 1. Kerala
2. Karnataka
3. Tamil Nadu
4. Andhra Pradesh

Question ID : 264330160784
Option 1 ID : 264330630468
Option 2 ID : 264330630469
Option 3 ID : 264330630467
Option 4 ID : 264330630470
Status : Answered
Chosen Option : 2

Q.12 In which year did Robert Hooke introduce the term 'cell'?

- Ans
- 1. 1875
 - 2. 1675
 - 3. 1665
 - 4. 1765

Question ID : 264330157811
Option 1 ID : 264330618606
Option 2 ID : 264330618604
Option 3 ID : 264330618603
Option 4 ID : 264330618605
Status : Answered
Chosen Option : 1

Q.13 Which of the following is an example of capital receipt in the government budget?

- Ans
- 1. Sale of government bonds
 - 2. Income from government-owned enterprises
 - 3. Tax revenue collected from citizens
 - 4. Grants received from foreign countries

Question ID : 264330157278
Option 1 ID : 264330616477
Option 2 ID : 264330616478
Option 3 ID : 264330616475
Option 4 ID : 264330616476
Status : Answered
Chosen Option : 3

Q.14 Which of the abhinayas deals with the use of costumes, jewellery, facial make-up etc?

- Ans
- 1. Vachika Abhinaya
 - 2. Aharya Abhinaya
 - 3. Sattvika Abhinaya
 - 4. Angika Abhinaya

Question ID : 264330159052
Option 1 ID : 264330623568
Option 2 ID : 264330623567
Option 3 ID : 264330623570
Option 4 ID : 264330623569
Status : Not Answered
Chosen Option : --

Q.15 Pandit Bhajan Sopori, who died in the year 2022, was a famous player of which musical instrument?

- Ans
- 1. Ravan Hatta
 - 2. Tabla
 - 3. Sitar
 - 4. Santoor

Question ID : 264330155510
Option 1 ID : 264330609445
Option 2 ID : 264330609443
Option 3 ID : 264330609446
Option 4 ID : 264330609444
Status : Answered
Chosen Option : 4

Q.16 Which of the following best defines transfer payments?

- Ans 1. Payments made to individuals in exchange for their labour or services
2. Payments made by the government to individuals without any corresponding production of goods or services
3. Payments made by businesses to their shareholders as a share of profits
4. Payments made by individuals to the government in the form of taxes

Question ID : 264330157317

Option 1 ID : 264330616631

Option 2 ID : 264330616632

Option 3 ID : 264330616633

Option 4 ID : 264330616634

Status : Answered

Chosen Option : 1

Q.17 Who among the following is the author of the book 'Red Earth and Pouring Rain: A Novel'?

- Ans 1. Vikram Chandra
2. Shashi Tharoor
3. Ashwin Sanghi
4. Ruskin Bond

Question ID : 264330155455

Option 1 ID : 264330609224

Option 2 ID : 264330609223

Option 3 ID : 264330609225

Option 4 ID : 264330609226

Status : Not Answered

Chosen Option : --

Q.18 The Nuakhai festival of _____ is observed on Panchami Tithi (fifth day) of the lunar fortnight of Bhadrava (August-September), the day after Ganesh Chaturthi.

- Ans 1. Odisha
2. Assam
3. Meghalaya
4. West Bengal

Question ID : 264330160815

Option 1 ID : 264330630594

Option 2 ID : 264330630591

Option 3 ID : 264330630593

Option 4 ID : 264330630592

Status : Answered

Chosen Option : 1

Q.19 Which country is hosting the ICC 2023 ODI Cricket World Cup?

- Ans 1. Pakistan
2. South Africa
3. India
4. Australia

Question ID : 264330158222

Option 1 ID : 264330620248

Option 2 ID : 264330620250

Option 3 ID : 264330620247

Option 4 ID : 264330620249

Status : Answered

Chosen Option : 3

Q.20 Which of the following is an autobiography of Sachin Tendulkar?

- Ans
- 1. Unbreakable
 - 2. Playing It My Way
 - 3. My Many Trysts with God
 - 4. I Am No Messiah

Question ID : 264330155495
Option 1 ID : 264330609386
Option 2 ID : 264330609385
Option 3 ID : 264330609383
Option 4 ID : 264330609384
Status : Answered
Chosen Option : 2

Q.21 In April 2023, Tamil Nadu passed a bill banning which of the following?

- Ans
- 1. Gutka
 - 2. Online Gambling
 - 3. Lottery
 - 4. Liquor

Question ID : 264330158336
Option 1 ID : 264330620706
Option 2 ID : 264330620704
Option 3 ID : 264330620703
Option 4 ID : 264330620705
Status : Not Answered
Chosen Option : --

Q.22 In which stadium was the final match of ODI Cricket World Cup 2011 played?

- Ans
- 1. Eden Gardens
 - 2. Wankhede Stadium
 - 3. Feroz Shah Kotla Stadium
 - 4. D Y Patil Stadium

Question ID : 264330158231
Option 1 ID : 264330620285
Option 2 ID : 264330620283
Option 3 ID : 264330620286
Option 4 ID : 264330620284
Status : Answered
Chosen Option : 2

Q.23 'Mitra Mela' was a revolutionary organisation founded by:

- Ans
- 1. Bhupendra Nath Bose
 - 2. Khudiram Bose
 - 3. Vinayak Savarkar
 - 4. Sisir Kumar Bose

Question ID : 264330162334
Option 1 ID : 264330636664
Option 2 ID : 264330636666
Option 3 ID : 264330636663
Option 4 ID : 264330636665
Status : Not Answered
Chosen Option : --

Q.24 Which is the Gaussian unit of kinematic viscosity?

- Ans
- 1. Ampere
 - 2. Joule
 - 3. Stokes
 - 4. Darcy

Question ID : 264330157785
Option 1 ID : 264330618500
Option 2 ID : 264330618502
Option 3 ID : 264330618501
Option 4 ID : 264330618499
Status : Answered
Chosen Option : 4

Q.25 Who among the following freedom fighter lawyers from Bengal is known as Deshbandhu?

- Ans
- 1. Chittaranjan Das
 - 2. Durga Mohan Das
 - 3. Bipin Chandra Pal
 - 4. Satish Ranjan Das

Question ID : 264330160889
Option 1 ID : 264330630890
Option 2 ID : 264330630888
Option 3 ID : 264330630887
Option 4 ID : 264330630889
Status : Answered
Chosen Option : 1

Section : English Language and Comprehension

Q.1 Select the option that can be used as a one-word substitute for the underlined group of words.

He studies the subject known as the scientific study of insects.

- Ans
- 1. Entomology
 - 2. Alchemy
 - 3. Biology
 - 4. Etymology

Question ID : 264330153513
Option 1 ID : 264330601563
Option 2 ID : 264330601566
Option 3 ID : 264330601565
Option 4 ID : 264330601564
Status : Answered
Chosen Option : 1

Q.2 The following sentence has been split into four segments. Identify the segment that contains an error.

Harish told me / in the morning / that Gaurav will / come tomorrow.

- Ans
- 1. come tomorrow
 - 2. Harish told me
 - 3. that Gaurav will
 - 4. in the morning

Question ID : 264330155324

Option 1 ID : 264330608738

Option 2 ID : 264330608735

Option 3 ID : 264330608737

Option 4 ID : 264330608736

Status : Answered

Chosen Option : 1

Q.3 Identify the INCORRECTLY spelt word in the following sentence.

The detective and his agent inspected the krime scene yesterday.

- Ans
- 1. krime
 - 2. yesterday
 - 3. agent
 - 4. detective

Question ID : 264330152601

Option 1 ID : 264330598009

Option 2 ID : 264330598010

Option 3 ID : 264330598008

Option 4 ID : 264330598007

Status : Answered

Chosen Option : 1

Q.4 Select the most appropriate meaning of the given idiom.

Cup of tea

- Ans
- 1. Long held desire
 - 2. A cup brimming with tea
 - 3. Favourite pastime
 - 4. Something one likes/excels in

Question ID : 264330159725

Option 1 ID : 264330626257

Option 2 ID : 264330626256

Option 3 ID : 264330626258

Option 4 ID : 264330626255

Status : Answered

Chosen Option : 4

Q.5 Select the most appropriate segment that can substitute the underlined word in the following sentence.

Iraq was governed by autocracy when Saddam Hussain was the President.

Ans ✓ 1. one man with absolute power

✗ 2. the King and his heir

✗ 3. the wealthy class

✗ 4. the common people

Question ID : 264330152630

Option 1 ID : 264330598126

Option 2 ID : 264330598124

Option 3 ID : 264330598125

Option 4 ID : 264330598123

Status : Answered

Chosen Option : 1

Q.6 Select the most appropriate option to fill in the blank.

Ours is _____ house of all the houses in our area.

Ans ✗ 1. the more bigger

✓ 2. the biggest

✗ 3. the most biggest

✗ 4. the bigger

Question ID : 264330152733

Option 1 ID : 264330598534

Option 2 ID : 264330598531

Option 3 ID : 264330598533

Option 4 ID : 264330598532

Status : Answered

Chosen Option : 2

Q.7 Select the INCORRECTLY spelt word.

Ans ✓ 1. Tastimonial

✗ 2. Ballad

✗ 3. Rampant

✗ 4. Beneficiary

Question ID : 264330152783

Option 1 ID : 264330598724

Option 2 ID : 264330598723

Option 3 ID : 264330598725

Option 4 ID : 264330598726

Status : Answered

Chosen Option : 1

Q.8 Select the most appropriate meaning of the underlined idiom.

The council president is known to play devil's advocate often.

- Ans
- 1. To allow others to rise
 - 2. To play risky games
 - 3. To argue, just for the sake of it
 - 4. Make one's own destiny

Question ID : 264330153148
Option 1 ID : 264330600152
Option 2 ID : 264330600151
Option 3 ID : 264330600153
Option 4 ID : 264330600154
Status : Answered
Chosen Option : 3

Q.9 Select the most appropriate meaning of the underlined segment in the given sentence.
When it comes to playing the guitar, Jim always hits the nail on the head.

- Ans
- 1. Is dishonest
 - 2. Misses the point
 - 3. Does something right
 - 4. Makes a mistake

Question ID : 264330152924
Option 1 ID : 264330599278
Option 2 ID : 264330599275
Option 3 ID : 264330599277
Option 4 ID : 264330599276
Status : Answered
Chosen Option : 3

Q.10 Select the INCORRECTLY spelt word.

- Ans
- 1. Rhyme
 - 2. Relevant
 - 3. Succesful
 - 4. Queue

Question ID : 264330153152
Option 1 ID : 264330600169
Option 2 ID : 264330600168
Option 3 ID : 264330600170
Option 4 ID : 264330600167
Status : Answered
Chosen Option : 3

Q.11 Select the most appropriate meaning of the underlined idiom.

The company was on thin ice.

- Ans
- 1. In a situation of comfort
 - 2. Forcing itself to collaborate
 - 3. Depending on business competitors
 - 4. In a precarious or risky situation

Question ID : 264330153145

Option 1 ID : 264330600139

Option 2 ID : 264330600141

Option 3 ID : 264330600142

Option 4 ID : 264330600140

Status : Answered

Chosen Option : 4

Q.12 The following sentence has been split into four segments. Identify the segment that contains a grammatical error.

She performed / the dance routine / perfect, / impressing everyone.

- Ans
- 1. She performed
 - 2. perfect
 - 3. impressing everyone
 - 4. the dance routine

Question ID : 264330153182

Option 1 ID : 264330600287

Option 2 ID : 264330600289

Option 3 ID : 264330600290

Option 4 ID : 264330600288

Status : Answered

Chosen Option : 2

Q.13 Select the option that will improve the underlined part of the given sentence. In case no improvement is needed, select 'No improvement required'.

With all their little comforts destroyed, the survivors were thrown still farther back into barbarism.

- Ans
- 1. still further back for barbarism
 - 2. still further back into barbarism
 - 3. No improvement required
 - 4. still a little farther into barbarism

Question ID : 264330153611

Option 1 ID : 264330601927

Option 2 ID : 264330601929

Option 3 ID : 264330601930

Option 4 ID : 264330601928

Status : Answered

Chosen Option : 2

Q.14 Parts of the following sentence have been given as options. Select the option that contains an error.

Perhaps my family visit the Taj Mahal next month.

- Ans
- 1. next month
 - 2. Perhaps
 - 3. the Taj Mahal
 - 4. my family visit

Question ID : 264330152814

Option 1 ID : 264330598850

Option 2 ID : 264330598847

Option 3 ID : 264330598849

Option 4 ID : 264330598848

Status : Answered

Chosen Option : 4

Q.15 The following sentence has been split into four segments. Identify the segment that contains a grammatical error.

In America, / most of the people / can speak / the English well.

- Ans
- 1. the English well
 - 2. most of the people
 - 3. can speak
 - 4. In America,

Question ID : 264330153164

Option 1 ID : 264330600218

Option 2 ID : 264330600216

Option 3 ID : 264330600217

Option 4 ID : 264330600215

Status : Answered

Chosen Option : 1

Q.16 Select the most appropriate ANTONYM of the underlined word.
Butterfly was attracted towards the bright flowers.

- Ans
- 1. Reckoned
 - 2. Repulsed
 - 3. Reargued
 - 4. Recurred

Question ID : 264330151818

Option 1 ID : 264330594900

Option 2 ID : 264330594902

Option 3 ID : 264330594899

Option 4 ID : 264330594901

Status : Answered

Chosen Option : 2

Q.17 The following sentence has been split into four segments. Identify the segment that contains a grammatical error.

Please / explain me / how this plan / did not work.

- Ans
- 1. did not work
 - 2. Please
 - 3. how this plan
 - 4. explain me

Question ID : 264330153419

Option 1 ID : 264330601210

Option 2 ID : 264330601207

Option 3 ID : 264330601209

Option 4 ID : 264330601208

Status : Answered

Chosen Option : 1

Q.18 Select the most appropriate option to fill in the blank.

Early childhood experiences have a _____ impact on brain development affecting learning, health, behaviour, and, ultimately, productivity and income.

- Ans
- 1. perfect
 - 2. profound
 - 3. basic
 - 4. superficial

Question ID : 264330151902

Option 1 ID : 264330595225

Option 2 ID : 264330595224

Option 3 ID : 264330595226

Option 4 ID : 264330595223

Status : Answered

Chosen Option : 2

Q.19 Select the most appropriate synonym of the given word.

Fragile

- Ans
- 1. Brittle
 - 2. Sturdy
 - 3. Unkempt
 - 4. Intense

Question ID : 264330151881

Option 1 ID : 264330595144

Option 2 ID : 264330595146

Option 3 ID : 264330595143

Option 4 ID : 264330595145

Status : Answered

Chosen Option : 1

Q.20 Select the most appropriate ANTONYM of the underlined word.
He was admired for introducing welfare programmes.

- Ans 1. Despised
 2. Confessed
 3. Appreciated
 4. Succeeded

Question ID : 264330151815
Option 1 ID : 264330594889
Option 2 ID : 264330594887
Option 3 ID : 264330594888
Option 4 ID : 264330594890
Status : Answered
Chosen Option : 1

Comprehension:

In the following passage, some words have been deleted. Read the passage carefully and select the most appropriate option to fill in each blank.

Fingerprinting is the one of the methods of (1)_____ using the impression made by the minute ridge formation or patterns found on the fingertips. No two persons have exactly the same (2)_____ of ridge patterns, they remain unchanged throughout the life. Fingerprints may be classified and filled on the basis of the ridge patterns, setting up an identification system that is almost (3)_____. Today, law enforcement agencies use computers to (4)_____ record fingerprints and to transmit them electronically to other agencies for comparison. By comparing fingerprints of the criminals with the recorded fingerprints, officials can establish (5)_____ proof of the presence or identity of a person.

SubQuestion No : 21

Q.21 Select the most appropriate option to fill in blank number 1.

- Ans 1. involvement
 2. satisfaction
 3. demonstration
 4. identification

Question ID : 264330152908
Option 1 ID : 264330599218
Option 2 ID : 264330599215
Option 3 ID : 264330599217
Option 4 ID : 264330599216
Status : Answered
Chosen Option : 4

Comprehension:

In the following passage, some words have been deleted. Read the passage carefully and select the most appropriate option to fill in each blank.

Fingerprinting is the one of the methods of (1)_____ using the impression made by the minute ridge formation or patterns found on the fingertips. No two persons have exactly the same (2)_____ of ridge patterns, they remain unchanged throughout the life. Fingerprints may be classified and filled on the basis of the ridge patterns, setting up an identification system that is almost (3)_____. Today, law enforcement agencies use computers to (4)_____ record fingerprints and to transmit them electronically to other agencies for comparison. By comparing fingerprints of the criminals with the recorded fingerprints, officials can establish (5)_____ proof of the presence or identity of a person.

SubQuestion No : 22

Q.22 Select the most appropriate option to fill in blank number 2.

Ans ✓ 1. arrangement

✗ 2. statement

✗ 3. management

✗ 4. settlement

Question ID : 264330152909

Option 1 ID : 264330599219

Option 2 ID : 264330599222

Option 3 ID : 264330599220

Option 4 ID : 264330599221

Status : Answered

Chosen Option : 1

Comprehension:

In the following passage, some words have been deleted. Read the passage carefully and select the most appropriate option to fill in each blank.

Fingerprinting is the one of the methods of (1)_____ using the impression made by the minute ridge formation or patterns found on the fingertips. No two persons have exactly the same (2)_____ of ridge patterns, they remain unchanged throughout the life. Fingerprints may be classified and filled on the basis of the ridge patterns, setting up an identification system that is almost (3)_____. Today, law enforcement agencies use computers to (4)_____ record fingerprints and to transmit them electronically to other agencies for comparison. By comparing fingerprints of the criminals with the recorded fingerprints, officials can establish (5)_____ proof of the presence or identity of a person.

SubQuestion No : 23

Q.23 Select the most appropriate option to fill in blank number 3.

Ans ✗ 1. risky

✓ 2. infallible

✗ 3. unreliable

✗ 4. fallible

Question ID : 264330152910

Option 1 ID : 264330599226

Option 2 ID : 264330599225

Option 3 ID : 264330599223

Option 4 ID : 264330599224

Status : Answered

Chosen Option : 2

Comprehension:

In the following passage, some words have been deleted. Read the passage carefully and select the most appropriate option to fill in each blank.

Fingerprinting is the one of the methods of (1)_____ using the impression made by the minute ridge formation or patterns found on the fingertips. No two persons have exactly the same (2)_____ of ridge patterns, they remain unchanged throughout the life. Fingerprints may be classified and filled on the basis of the ridge patterns, setting up an identification system that is almost (3)_____. Today, law enforcement agencies use computers to (4)_____ record fingerprints and to transmit them electronically to other agencies for comparison. By comparing fingerprints of the criminals with the recorded fingerprints, officials can establish (5)_____ proof of the presence or identity of a person.

SubQuestion No : 24

Q.24 Select the most appropriate option to fill in blank number 4.

- Ans 1. manually
 2. digitally
 3. mentally
 4. physically

Question ID : 264330152911

Option 1 ID : 264330599227

Option 2 ID : 264330599228

Option 3 ID : 264330599230

Option 4 ID : 264330599229

Status : Answered

Chosen Option : 2

Comprehension:

In the following passage, some words have been deleted. Read the passage carefully and select the most appropriate option to fill in each blank.

Fingerprinting is the one of the methods of (1)_____ using the impression made by the minute ridge formation or patterns found on the fingertips. No two persons have exactly the same (2)_____ of ridge patterns, they remain unchanged throughout the life. Fingerprints may be classified and filled on the basis of the ridge patterns, setting up an identification system that is almost (3)_____. Today, law enforcement agencies use computers to (4)_____ record fingerprints and to transmit them electronically to other agencies for comparison. By comparing fingerprints of the criminals with the recorded fingerprints, officials can establish (5)_____ proof of the presence or identity of a person.

SubQuestion No : 25

Q.25 Select the most appropriate option to fill in blank number 5.

- Ans 1. absolute
 2. doubt
 3. unconfirmed
 4. provisional

Question ID : 264330152912

Option 1 ID : 264330599234

Option 2 ID : 264330599231

Option 3 ID : 264330599233

Option 4 ID : 264330599232

Status : Answered

Chosen Option : 1

Multi Tasking Non Technical Staff and Havaladar CBIC and CBN Examination 2023

Roll Number	
Candidate Name	
Venue Name	Webel Human Resource Development Center
Exam Date	01/09/2023
Exam Time	4:00 PM - 6:00 PM
Subject	MTS Non Tech Havaladar CBIC and CBN Examination 2023

Section : Numerical and Mathematical Ability

Q.1 The surface area of a sphere is 5544 cm^2 . If the radius of the sphere is doubled, then find the surface area of the new sphere (in cm^2).

- Ans**
- ✓ 1. 22,176
 - ✗ 2. 22,761
 - ✗ 3. 20,761
 - ✗ 4. 20,176

Question ID : 264330156018

Option 1 ID : 264330611474

Option 2 ID : 264330611472

Option 3 ID : 264330611471

Option 4 ID : 264330611473

Status : Answered

Chosen Option : 1

Q.2 A sailor rows a boat 36 km downstream and 24 km upstream in 6 hours. When it rows 24 km downstream and 36 km upstream the sailor takes 6 and half hours. Then the speed of the current is:

- Ans**
- ✗ 1. 1.5 km/h
 - ✗ 2. 4 km/h
 - ✗ 3. 3 km/h
 - ✓ 4. 2 km/h

Question ID : 264330154057

Option 1 ID : 264330603692

Option 2 ID : 264330603694

Option 3 ID : 264330603693

Option 4 ID : 264330603691

Status : Answered

Chosen Option : 4

Q.3 From a cuboid of dimension of $8 \times 6 \times 6$ units, small cubes of dimension $0.5 \times 0.5 \times 0.5$ unit are cut. How many small cubes can be cut from the big cuboid?

- Ans**
- 1. 576
 - 2. 1152
 - 3. 2304
 - 4. 1552

Question ID : 264330153826
Option 1 ID : 264330602768
Option 2 ID : 264330602769
Option 3 ID : 264330602767
Option 4 ID : 264330602770
Status : Answered
Chosen Option : 3

Q.4 The following table shows the number of students enrolled in a university for higher education in Liberal Arts and in Engineering from 2015 to 2018. Study the table carefully and answer the question that follows.

Year	No. of students	
	Liberal Arts	Engineering
2015	345	650
2016	549	521
2017	477	846
2018	781	695

The average number of students enrolled per year in Liberal Arts is how much more or less than that in Engineering from 2015 to 2018?

- Ans**
- 1. Less, 140
 - 2. Less, 127
 - 3. More, 140
 - 4. More, 127

Question ID : 264330156496
Option 1 ID : 264330613371
Option 2 ID : 264330613373
Option 3 ID : 264330613372
Option 4 ID : 264330613374
Status : Answered
Chosen Option : 1

Q.5 Find the greatest two digit number which on dividing 219, 365, 511 leaves the remainders 3, 5, 7, respectively.

- Ans**
- 1. 63
 - 2. 82
 - 3. 53
 - 4. 72

Question ID : 264330155983
Option 1 ID : 264330611332
Option 2 ID : 264330611331
Option 3 ID : 264330611333
Option 4 ID : 264330611334
Status : Answered
Chosen Option : 4

Q.6 From a container having pure milk, 35% is replaced by water and the process is repeated thrice. At the end of the third operation, the purity of the milk is:

- Ans**
- 1. $21\frac{23}{80}\%$
 - 2. $37\frac{21}{80}\%$
 - 3. $23\frac{37}{80}\%$
 - 4. $27\frac{37}{80}\%$

Question ID : 264330154077

Option 1 ID : 264330603771

Option 2 ID : 264330603773

Option 3 ID : 264330603774

Option 4 ID : 264330603772

Status : Answered

Chosen Option : 3

Q.7 The difference in interests earned on ₹1,50,000 at an 8% rate of interest per annum in a year when the interest is compounded semi-annually and annually, respectively, is ₹_____.

- Ans**
- 1. 360
 - 2. 120
 - 3. 240
 - 4. 420

Question ID : 264330153811

Option 1 ID : 264330602708

Option 2 ID : 264330602709

Option 3 ID : 264330602710

Option 4 ID : 264330602707

Status : Answered

Chosen Option : 3

Q.8 If ₹3,650 amounts to ₹4,526 in 3 years at simple interest, what is the rate of interest per annum?

- Ans**
- 1. 8%
 - 2. 10%
 - 3. 12%
 - 4. 6%

Question ID : 264330156483

Option 1 ID : 264330613321

Option 2 ID : 264330613322

Option 3 ID : 264330613320

Option 4 ID : 264330613319

Status : Answered

Chosen Option : 1

Q.9 The percentage profit earned by selling an article for ₹1,980 is equal to the percentage loss incurred by selling the same article for ₹1,620. At what price should the article be sold to make a 15% profit?

- Ans
- 1. ₹1,863
 - 2. ₹2,277
 - 3. ₹2,070
 - 4. ₹1,800

Question ID : 264330161979
Option 1 ID : 264330635245
Option 2 ID : 264330635244
Option 3 ID : 264330635243
Option 4 ID : 264330635246
Status : Answered
Chosen Option : 3

Q.10 A man travels from point A to point B at a speed of 40 km/h and returns to point A at a speed of 60 km/h. If the total time taken for the journey is 5 hours, what is the distance between point A and point B?

- Ans
- 1. 135 km
 - 2. 120 km
 - 3. 125 km
 - 4. 130 km

Question ID : 264330156273
Option 1 ID : 264330612494
Option 2 ID : 264330612491
Option 3 ID : 264330612492
Option 4 ID : 264330612493
Status : Answered
Chosen Option : 2

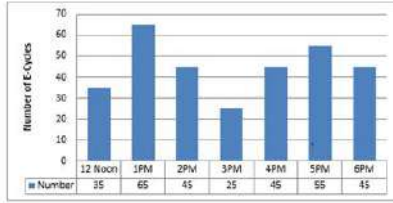
Q.11 Swati starts a business with ₹4,200, and after 5 months, Bani joins Swati as her partner. After a year, the profit is divided among Swati and Bani in the ratio 2 : 5. What is Bani's contribution?

- Ans
- 1. ₹18,000
 - 2. ₹17,050
 - 3. ₹19,000
 - 4. ₹16,500

Question ID : 264330156186
Option 1 ID : 264330612144
Option 2 ID : 264330612143
Option 3 ID : 264330612146
Option 4 ID : 264330612145
Status : Answered
Chosen Option : 1

Q.12 The bar diagram represents the number of E-Cycles parking in a metro station from 12:00 P.M. to 6:00 P.M.

What will be the total collection from 2:00 P.M. to 6:00 P.M. when the parking charge is ₹3 per hour?



- Ans**
- 1. ₹625
 - 2. ₹655
 - 3. ₹645
 - 4. ₹695

Question ID : 264330154063
Option 1 ID : 264330603715
Option 2 ID : 264330603716
Option 3 ID : 264330603717
Option 4 ID : 264330603718
Status : Answered
Chosen Option : 3

Q.13 The income of X is 12% more than that of Y. By how much per cent is Y's income less than that of X?

- Ans**
- 1. $10\frac{4}{7}\%$
 - 2. $10\frac{3}{7}\%$
 - 3. $10\frac{5}{7}\%$
 - 4. $10\frac{2}{7}\%$

Question ID : 264330156216
Option 1 ID : 264330612265
Option 2 ID : 264330612264
Option 3 ID : 264330612266
Option 4 ID : 264330612263
Status : Answered
Chosen Option : 3

Q.14 In what ratio must a grocer mix two varieties of pulses costing ₹18 per kg and ₹22 per kg, respectively, so as to get a mixture worth ₹19.50 per kg?

- Ans**
- 1. 5 : 3
 - 2. 5 : 1
 - 3. 1 : 5
 - 4. 5 : 2

Question ID : 264330156052
Option 1 ID : 264330611609
Option 2 ID : 264330611607
Option 3 ID : 264330611608
Option 4 ID : 264330611610
Status : Answered
Chosen Option : 1

Q.15 If $A : B = 3 : 4$ and $A : C = 9 : 8$, then $A : B : C$ is:

- Ans 1. $9 : 12 : 8$
 2. $3 : 4 : 6$
 3. $9 : 8 : 12$
 4. $9 : 8 : 8$

Question ID : 264330153874
Option 1 ID : 264330602962
Option 2 ID : 264330602959
Option 3 ID : 264330602960
Option 4 ID : 264330602961
Status : Answered
Chosen Option : 1

Q.16 How many kilograms of sugar at ₹3.80 per kg must be mixed with 60 kg of sugar at ₹4.60 per kg, so that by selling the mixture at ₹5.20 per kg there may be a gain of 30%?

- Ans 1. 170 kg
 2. 120 kg
 3. 160 kg
 4. 180 kg

Question ID : 264330156070
Option 1 ID : 264330611681
Option 2 ID : 264330611679
Option 3 ID : 264330611682
Option 4 ID : 264330611680
Status : Answered
Chosen Option : 4

Q.17 Simplify:

$$24 \div 6 \times \left(\frac{3}{4} \text{ of } \frac{1}{3} + \frac{5}{3} \text{ of } \frac{3}{4} \right) = ?$$

- Ans 1. 9
 2. 6
 3. 3
 4. 8

Question ID : 264330156424
Option 1 ID : 264330613087
Option 2 ID : 264330613088
Option 3 ID : 264330613090
Option 4 ID : 264330613089
Status : Answered
Chosen Option : 2

Q.18 A and B can do a piece of work in 9 and 18 days, respectively. They started working together. After some days A left the work and B finished the remaining work in 15 days. After how many days did A leave?

- Ans**
- 1. 1
 - 2. 2
 - 3. 4
 - 4. 3

Question ID : 264330156010
Option 1 ID : 264330611441
Option 2 ID : 264330611442
Option 3 ID : 264330611439
Option 4 ID : 264330611440
Status : Answered
Chosen Option : 1

Q.19 The cost price of an article is ₹1,120. After allowing a discount of ₹205 a gain of 15% was made, then the marked price of the article is:

- Ans**
- 1. ₹1,760
 - 2. ₹1,493
 - 3. ₹1,350
 - 4. ₹1,580

Question ID : 264330156447
Option 1 ID : 264330613182
Option 2 ID : 264330613179
Option 3 ID : 264330613181
Option 4 ID : 264330613180
Status : Answered
Chosen Option : 2

Q.20 12 days are taken by one man and one woman together to complete the work. A man alone can complete the work in 15 days. In how many days can one woman alone complete the work?

- Ans**
- 1. 45 days
 - 2. 30 days
 - 3. 60 days
 - 4. 12 days

Question ID : 264330156063
Option 1 ID : 264330611653
Option 2 ID : 264330611652
Option 3 ID : 264330611654
Option 4 ID : 264330611651
Status : Answered
Chosen Option : 3

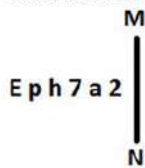
Q.1 What should come in place of '?' in the given series?

10 19 ? 199 775 3079 12295

- Ans
- 1. 63
 - 2. 55
 - 3. 50
 - 4. 61

Question ID : 264330151445
Option 1 ID : 264330593410
Option 2 ID : 264330593408
Option 3 ID : 264330593407
Option 4 ID : 264330593409
Status : Answered
Chosen Option : 2

Q.2 Select the correct mirror image of the given figure when the mirror is placed at MN as shown below.



- Ans
- 1. a 2 7 h q E
 - 2. 2 6 7 h q E
 - 3. 2 6 7 h q E
 - 4. 2 6 7 h q E

Question ID : 264330151509
Option 1 ID : 264330593663
Option 2 ID : 264330593666
Option 3 ID : 264330593665
Option 4 ID : 264330593664
Status : Answered
Chosen Option : 3

Q.3 Seven people, S, T, U, V, W, X and Y are sitting in a straight line, facing north. Only two people sit to the right of W. Only three people sit between S and W. U is the immediate neighbour of T and X. X is not the immediate neighbour of W. V sits third to the right of T.

Who is sitting between W and V?

- Ans
- 1. T
 - 2. Y
 - 3. U
 - 4. X

Question ID : 264330155546
Option 1 ID : 264330609588
Option 2 ID : 264330609587
Option 3 ID : 264330609589
Option 4 ID : 264330609590
Status : Answered
Chosen Option : 2

Q.4 Select the combination of letters that when sequentially placed in the blanks of the given series, will complete the series.

J _ JJ _ _ JM _ _ MJ

- Ans**
- 1. JJMMJ
 - 2. MMJJJ
 - 3. MJJMM
 - 4. JMMJM

Question ID : 264330151649

Option 1 ID : 264330594226

Option 2 ID : 264330594225

Option 3 ID : 264330594223

Option 4 ID : 264330594224

Status : Answered

Chosen Option : 2

Q.5 HM 12 is related to FK 17 in a certain way. In the same way, EK 18 is related to CI 23. To which of the following is GU 14 related to following the same logic?

- Ans**
- 1. ES 19
 - 2. IW 20
 - 3. ER 18
 - 4. FS 19

Question ID : 264330151683

Option 1 ID : 264330594359

Option 2 ID : 264330594360

Option 3 ID : 264330594361

Option 4 ID : 264330594362

Status : Answered

Chosen Option : 1

Q.6 Select the set in which the numbers are related in the same way as are the numbers of the following sets.

(NOTE : Operations should be performed on the whole numbers, without breaking down the numbers into its constituent digits. E.g. 13 – Operations on 13 such as adding / subtracting / multiplying etc. to 13 can be performed.

Breaking down 13 into 1 and 3 and then performing mathematical operations on 1 and 3 is not allowed)

(5, 35, 7)

(9, 27, 3)

- Ans**
- 1. 16, 50, 7
 - 2. 6, 42, 7
 - 3. 4, 10, 5
 - 4. 6, 17, 9

Question ID : 264330151608

Option 1 ID : 264330594061

Option 2 ID : 264330594060

Option 3 ID : 264330594059

Option 4 ID : 264330594062

Status : Answered

Chosen Option : 2

Q.7 In the following number-pairs, the second number is obtained by applying certain mathematical operations to the first number. Select the set in which the numbers are related in the same way as are the numbers of the following sets.

(NOTE: Operations should be performed on the whole numbers, without breaking down the numbers into its constituent digits. E.g. 13 – Operations on 13 such as adding /deleting /multiplying etc. to 13 can be performed. Breaking down 13 into 1 and 3 and then performing mathematical operations on 1 and 3 is not allowed)

16 : 95

6 : 35

- Ans**
- 1. 8 : 48
 - 2. 13 : 77
 - 3. 2 : 13
 - 4. 17 : 23

Question ID : 264330154653

Option 1 ID : 264330606077

Option 2 ID : 264330606078

Option 3 ID : 264330606076

Option 4 ID : 264330606075

Status : Answered

Chosen Option : 2

Q.8 Read the given statements and conclusions carefully. You have to take the given statements to be true even if they seem to be at variance from commonly known facts. You have to decide which conclusion/s logically follow/s from the given statements.

Statements: Some photos are vases. All vases are tall. Some tall are buildings.

Conclusion I: Some photos are buildings.

Conclusion II: All tall are vases.

- Ans**
- 1. Both conclusions (I) and (II) are follow.
 - 2. Only conclusion (I) is follow.
 - 3. Only conclusion (II) is follow.
 - 4. Neither conclusion (I) nor (II) is follow.

Question ID : 264330155915

Option 1 ID : 264330611066

Option 2 ID : 264330611063

Option 3 ID : 264330611064

Option 4 ID : 264330611065

Status : Answered

Chosen Option : 4

Q.9 What should come in place of ? in the given series based on the English alphabetical order?

JPX, GNU, DLR, AJO, ?

- Ans**
- 1. XHL
 - 2. ZGL
 - 3. YIL
 - 4. YGM

Question ID : 264330155787

Option 1 ID : 264330610551

Option 2 ID : 264330610554

Option 3 ID : 264330610553

Option 4 ID : 264330610552

Status : Answered

Chosen Option : 1

Q.10 In a certain code language, 'LED' is coded as '15-22-23' and 'BMW' is coded as '25-14-4'. What is the code for 'QUE' in the given code language?

- Ans**
- 1. 9-4-21
 - 2. 10-6-21
 - 3. 11-5-20
 - 4. 9-5-20

Question ID : 264330155818
Option 1 ID : 264330610675
Option 2 ID : 264330610678
Option 3 ID : 264330610676
Option 4 ID : 264330610677
Status : Answered
Chosen Option : 2

Q.11 What should come in place of ? in the given series?

11 14 20 29 41 ?

- Ans**
- 1. 54
 - 2. 61
 - 3. 56
 - 4. 64

Question ID : 264330151717
Option 1 ID : 264330594497
Option 2 ID : 264330594496
Option 3 ID : 264330594495
Option 4 ID : 264330594498
Status : Answered
Chosen Option : 3

বাংলা

Q.12

Select the option figure in which the given figure (X) is embedded as its part (rotation is NOT allowed).



(X)

Ans

✗ 1.



✗ 2.



✓ 3.



✗ 4.



Question ID : 264330151726

Option 1 ID : 264330594531

Option 2 ID : 264330594533

Option 3 ID : 264330594532

Option 4 ID : 264330594534

Status : Answered

Chosen Option : 3

Q.13 In a certain code language, 'DEAN' is coded as '2458' and 'LEND' is coded as '8352'. What is the code for 'L' in the given code language?

- Ans**
- 1. 5
 - 2. 3
 - 3. 8
 - 4. 2

Question ID : 264330151689
Option 1 ID : 264330594386
Option 2 ID : 264330594384
Option 3 ID : 264330594383
Option 4 ID : 264330594385
Status : Answered
Chosen Option : 2

Q.14 If 6 July 2011 is a Wednesday, then what will be the day of the week on 16 February 2010?

- Ans**
- 1. Monday
 - 2. Thursday
 - 3. Tuesday
 - 4. Saturday

Question ID : 264330154353
Option 1 ID : 264330604876
Option 2 ID : 264330604877
Option 3 ID : 264330604875
Option 4 ID : 264330604878
Status : Answered
Chosen Option : 4

Q.15 What should come in place of the question mark (?) in the given series based on the English alphabetical order?

DJS, HNT, LRU, PVV, ?

- Ans**
- 1. SRV
 - 2. UTV
 - 3. TZW
 - 4. USV

Question ID : 264330156298
Option 1 ID : 264330612591
Option 2 ID : 264330612593
Option 3 ID : 264330612592
Option 4 ID : 264330612594
Status : Answered
Chosen Option : 3

Q.16 What should come in place of '?' in the given series?

7 41 177 721 2897 ?

- Ans
- 1. 12589
 - 2. 11601
 - 3. 11283
 - 4. 10631

Question ID : 264330151462
Option 1 ID : 264330593478
Option 2 ID : 264330593477
Option 3 ID : 264330593476
Option 4 ID : 264330593475
Status : Answered
Chosen Option : 2

Q.17 What will come in the place of '?' in the following equation, if '+' and '-' are interchanged and 'x' and '/' are interchanged?

$$121 \times 11 + 7 - 15 + 23 = ?$$

- Ans
- 1. 69
 - 2. 49
 - 3. 59
 - 4. 79

Question ID : 264330155675
Option 1 ID : 264330610103
Option 2 ID : 264330610106
Option 3 ID : 264330610104
Option 4 ID : 264330610105
Status : Answered
Chosen Option : 1

Q.18 Read the given statements and conclusions carefully. You have to take the given statements to be true even if they seem to be at variance from commonly known facts. You have to decide which conclusion/s logically follow/s from the given statements.

Statements: All bed are covers. Some covers are thick. Some thick is juice.

Conclusion I: All covers are beds.

Conclusion II: Some thick are covers.

- Ans
- 1. Neither conclusion (I) nor (II) is follow.
 - 2. Only conclusion (II) is follow.
 - 3. Both conclusions (I) and (II) are follow.
 - 4. Only conclusion (I) is follow.

Question ID : 264330155900
Option 1 ID : 264330611005
Option 2 ID : 264330611004
Option 3 ID : 264330611006
Option 4 ID : 264330611003
Status : Answered
Chosen Option : 2

Q.19 Which figure should replace the question mark (?) if the following figure series were to be continued?

Z	O	K	B	U	Z	△	K	
B	U	L	K	O	L	△	Z	K
↑	△	U	↑	O	9	B	O	?

Ans

✗ 1.

B	O
△	9 L K
Z	U

✓ 2.

B	U
△	K L 9
Z	A

✗ 3.

B	A
△	O L 9
Z	U

✗ 4.

B	△
U	Z L 9
O	K

Question ID : 264330154751

Option 1 ID : 264330606467

Option 2 ID : 264330606469

Option 3 ID : 264330606470

Option 4 ID : 264330606468

Status : Answered

Chosen Option : 2

Q.20 What will come in place of '?' in the following equation, if '+' and '×' are interchanged and '-' and '+' are interchanged?

$$2 \times 4 - 1 + 6 + 8 = ?$$

Ans ✗ 1. -13

✓ 2. -42

✗ 3. -18

✗ 4. -24

Question ID : 264330154660

Option 1 ID : 264330606103

Option 2 ID : 264330606105

Option 3 ID : 264330606106

Option 4 ID : 264330606104

Status : Answered

Chosen Option : 2

Q.1 If 7 N force is applied on a brick and it moves through 5 m, then what will be the work done?

- Ans
- 1. 25 J
 - 2. 40 J
 - 3. 35 J
 - 4. 35 Erg

Question ID : 264330156582
Option 1 ID : 264330613715
Option 2 ID : 264330613718
Option 3 ID : 264330613716
Option 4 ID : 264330613717
Status : Answered
Chosen Option : 3

Q.2 _____ is celebrated in Jharkhand immediately after Diwali on the new moon day in the honour of cattle.

- Ans
- 1. Bhagta Parab
 - 2. Makar
 - 3. Rohini
 - 4. Sohrai

Question ID : 264330160837
Option 1 ID : 264330630681
Option 2 ID : 264330630680
Option 3 ID : 264330630682
Option 4 ID : 264330630679
Status : Answered
Chosen Option : 4

Q.3 Which of the following novels is NOT written by Mulk Raj Anand?

- Ans
- 1. The Sword and the Sickle
 - 2. Coolie
 - 3. Private Life of an Indian Prince
 - 4. The Guide

Question ID : 264330155499
Option 1 ID : 264330609400
Option 2 ID : 264330609399
Option 3 ID : 264330609402
Option 4 ID : 264330609401
Status : Answered
Chosen Option : 2

Q.4 Which of the dance was immediately preceded by a practice session called sevakali and undertaken in the precincts of a temple?

- Ans 1. Kathakali
 2. Kathak
 3. Odissi
 4. Kuchipudi

Question ID : 264330159054
Option 1 ID : 264330623577
Option 2 ID : 264330623576
Option 3 ID : 264330623575
Option 4 ID : 264330623578
Status : Not Answered
Chosen Option : --

Q.5 Which of the following is a duty of the Attorney General of India?

- Ans 1. To give advice to the Government of India on legal matters
 2. To act as a judge in the Supreme Court
 3. To advise the State Government
 4. To represent India in international bodies

Question ID : 264330161286
Option 1 ID : 264330632472
Option 2 ID : 264330632473
Option 3 ID : 264330632471
Option 4 ID : 264330632474
Status : Answered
Chosen Option : 1

Q.6 The cultural heritage of Siddhis from _____ dates back to almost 300 years and their Siddhi Dhamal dance is an exquisite art form.

- Ans 1. Uttar Pradesh
 2. Gujarat
 3. Madhya Pradesh
 4. Rajasthan

Question ID : 264330160795
Option 1 ID : 264330630514
Option 2 ID : 264330630511
Option 3 ID : 264330630513
Option 4 ID : 264330630512
Status : Answered
Chosen Option : 2

Q.7 Which of the following locations experiences the lowest amount of rainfall during the monsoon season?

- Ans 1. Kerala
 2. Assam
 3. Leh
 4. Meghalaya

Question ID : 264330157827
Option 1 ID : 264330618667
Option 2 ID : 264330618668
Option 3 ID : 264330618669
Option 4 ID : 264330618670
Status : Answered
Chosen Option : 3

Q.8 In which of the following cities was the 2023 IPL final match held?

- Ans**
- 1. Kolkata
 - 2. Chennai
 - 3. Mumbai
 - 4. Ahmedabad

Question ID : 264330161148
Option 1 ID : 264330631925
Option 2 ID : 264330631924
Option 3 ID : 264330631926
Option 4 ID : 264330631923
Status : Answered
Chosen Option : 4

Q.9 Who among the following was the director of Kathak Kendra and also opened his own dance school named 'Kalashram'?

- Ans**
- 1. Pandit Lachhu Maharaj
 - 2. Pandit Shambhu Maharaj
 - 3. Pandit Birju Maharaj
 - 4. Pandit Acchan Maharaj

Question ID : 264330155476
Option 1 ID : 264330609309
Option 2 ID : 264330609308
Option 3 ID : 264330609307
Option 4 ID : 264330609310
Status : Answered
Chosen Option : 3

Q.10 What is a budget deficit?

- Ans**
- 1. The excess of government revenue over expenditure
 - 2. The amount of money allocated for defence spending
 - 3. The amount of money allocated for social welfare programmes
 - 4. The excess of government expenditure over revenue

Question ID : 264330157271
Option 1 ID : 264330616447
Option 2 ID : 264330616449
Option 3 ID : 264330616450
Option 4 ID : 264330616448
Status : Answered
Chosen Option : 4

Q.11 What is a revenue expenditure?

- Ans**
- 1. Money spent on day-to-day government operations
 - 2. Money spent on debt repayment
 - 3. Money spent on purchasing assets
 - 4. Money spent on construction of roads

Question ID : 264330157273
Option 1 ID : 264330616458
Option 2 ID : 264330616457
Option 3 ID : 264330616455
Option 4 ID : 264330616456
Status : Answered
Chosen Option : 4

Q.12 Which Indian musician won the Grammy award for 'A Meeting by The River' with Ry Cooder in 1994?

- Ans
- 1. Ravi Shankar
 - 2. Vishwa Mohan Bhatt
 - 3. Hariprasad Chaurasia
 - 4. Zakir Hussain

Question ID : 264330155471
Option 1 ID : 264330609289
Option 2 ID : 264330609288
Option 3 ID : 264330609290
Option 4 ID : 264330609287
Status : Answered
Chosen Option : 4

Q.13 The holy mountain 'Kailash' is located in which neighbouring country of India?

- Ans
- 1. Pakistan
 - 2. Afghanistan
 - 3. Bangladesh
 - 4. China

Question ID : 264330161562
Option 1 ID : 264330633576
Option 2 ID : 264330633577
Option 3 ID : 264330633578
Option 4 ID : 264330633575
Status : Answered
Chosen Option : 4

Q.14 In which of the following states of India the 'Loo' wind does NOT blow during the summer season?

- Ans
- 1. Punjab
 - 2. Rajasthan
 - 3. Goa
 - 4. Haryana

Question ID : 264330161520
Option 1 ID : 264330633408
Option 2 ID : 264330633407
Option 3 ID : 264330633410
Option 4 ID : 264330633409
Status : Answered
Chosen Option : 3

Q.15 The Wild Life (Protection) Amendment Act, 2022 seeks to implement the Convention on International Trade in Endangered Species of Wild Fauna and Flora (CITES). Which of the following statements is correct about CITES?

1. CITES is an agreement between governments to ensure that international trade in the specimens of wild animals and plants does not threaten the survival of the species.
2. Under CITES, plant and animal specimens are classified into five categories based on the threat to their extinction.
3. The Convention requires countries to regulate the trade of all listed specimens through permits.
4. It also seeks to regulate the possession of live animal specimens.

Ans 1. 1, 2 and 4

2. 1, 3 and 4

3. 2, 3 and 4

4. 1, 2 and 3

Question ID : 264330161413

Option 1 ID : 264330632982

Option 2 ID : 264330632980

Option 3 ID : 264330632981

Option 4 ID : 264330632979

Status : Answered

Chosen Option : 2

Q.16 'My Story' is the autobiography of which female writer?

Ans 1. Amrita Pritam

2. Pratibha Ray

3. Kamala Das

4. Ashapura Devi

Question ID : 264330160964

Option 1 ID : 264330631188

Option 2 ID : 264330631189

Option 3 ID : 264330631187

Option 4 ID : 264330631190

Status : Answered

Chosen Option : 1

Q.17 Which age group of the population are covered under the Deen Dayal Upadhyaya Grameen Kaushalya Yojana (DDU-GKY) scheme of the Government of India?

Ans 1. 25 to 60 years

2. 30 to 60 years

3. 15 to 35 years

4. 14 to 40 years

Question ID : 264330161576

Option 1 ID : 264330633632

Option 2 ID : 264330633631

Option 3 ID : 264330633633

Option 4 ID : 264330633634

Status : Answered

Chosen Option : 3

Q.18 Who was the founder of Naujawan Bharat Sabha?

- Ans 1. Chandra Shekhar Azad
 2. Ajeet Singh
 3. Lala Lajpat Rai
 4. Bhagat Singh

Question ID : 264330162332
Option 1 ID : 264330636657
Option 2 ID : 264330636655
Option 3 ID : 264330636656
Option 4 ID : 264330636658
Status : Answered
Chosen Option : 1

Q.19 Which gland gets enlarged in the goitre due to which there is a swelling in the front part of the throat?

- Ans 1. Adrenal gland
 2. Thyroid gland
 3. Pineal gland
 4. Pituitary gland

Question ID : 264330161073
Option 1 ID : 264330631623
Option 2 ID : 264330631626
Option 3 ID : 264330631624
Option 4 ID : 264330631625
Status : Answered
Chosen Option : 2

Q.20 In which state is the Bhitari temple situated?

- Ans 1. Uttar Pradesh
 2. Odisha
 3. Jharkhand
 4. Bihar

Question ID : 264330160780
Option 1 ID : 264330630453
Option 2 ID : 264330630451
Option 3 ID : 264330630452
Option 4 ID : 264330630454
Status : Answered
Chosen Option : 2

Q.21 Shubman Gill was in the news for creating a record in his sport. What sport does he play?

- Ans 1. Chess
 2. Cricket
 3. Hockey
 4. Badminton

Question ID : 264330158354
Option 1 ID : 264330620778
Option 2 ID : 264330620777
Option 3 ID : 264330620776
Option 4 ID : 264330620775
Status : Answered
Chosen Option : 2

Q.22 Which of the following does NOT come under Fundamental Duties?

- Ans 1. To develop the scientific temper
 2. To pay taxes
 3. To promote harmony
 4. To respect National Anthem

Question ID : 264330159899
Option 1 ID : 264330626946
Option 2 ID : 264330626943
Option 3 ID : 264330626945
Option 4 ID : 264330626944
Status : Marked For Review
Chosen Option : 1

Q.23 Who among the following was a world famous 'Sitar' player?

- Ans 1. Pandit Ravi Shankar
 2. Ustad Shafaat Ahmed Khan
 3. Rajaratanam Pillai
 4. Ali Ahmad Hussain

Question ID : 264330155509
Option 1 ID : 264330609442
Option 2 ID : 264330609439
Option 3 ID : 264330609441
Option 4 ID : 264330609440
Status : Answered
Chosen Option : 1

Q.24 Which of the following institutions bagged the maximum medals at the third edition of Khelo India University Games?

- Ans 1. Panjab University
 2. University of Kerala
 3. Guru Nanak Dev University
 4. Jain University

Question ID : 264330161134
Option 1 ID : 264330631870
Option 2 ID : 264330631869
Option 3 ID : 264330631868
Option 4 ID : 264330631867
Status : Answered
Chosen Option : 1

Q.25 In which year did the All-India Muslim League move a resolution demanding 'Independent States' for Muslims in the north-western and eastern areas of the country?

- Ans 1. 1942
 2. 1940
 3. 1939
 4. 1941

Question ID : 264330161740
Option 1 ID : 264330634290
Option 2 ID : 264330634288
Option 3 ID : 264330634287
Option 4 ID : 264330634289
Status : Answered
Chosen Option : 3

Section : English Language and Comprehension

Q.1 Parts of the following sentence have been given as options. Select the option that contains an error.

A soothe voice must convey both confidence and intimacy, qualities which can be attributed to a few key components.

- Ans 1. few key components
 2. A soothe voice
 3. convey both confidence
 4. which can be

Question ID : 264330153615
Option 1 ID : 264330601946
Option 2 ID : 264330601943
Option 3 ID : 264330601944
Option 4 ID : 264330601945
Status : Answered
Chosen Option : 2

Q.2 Select the most appropriate ANTONYM of the given word.
Empathetic

- Ans 1. Lonely
 2. Merciless
 3. Charismatic
 4. Frustrated

Question ID : 264330151915
Option 1 ID : 264330595276
Option 2 ID : 264330595277
Option 3 ID : 264330595275
Option 4 ID : 264330595278
Status : Answered
Chosen Option : 2

Q.3 Select the most appropriate meaning of the underlined idiom.
The police inspector knows the ins and outs of the murder case.

- Ans
- 1. laws
 - 2. all the witnesses
 - 3. lawyers and judges
 - 4. full details

Question ID : 264330152753
Option 1 ID : 264330598613
Option 2 ID : 264330598611
Option 3 ID : 264330598614
Option 4 ID : 264330598612
Status : Answered
Chosen Option : 4

Q.4 The following sentence has been split into four segments. Identify the segment that contains an error.
He told me / that he goes / to the market / to buy a laptop.

- Ans
- 1. He told me
 - 2. to buy a laptop
 - 3. to the market
 - 4. that he goes

Question ID : 264330151288
Option 1 ID : 264330592787
Option 2 ID : 264330592790
Option 3 ID : 264330592789
Option 4 ID : 264330592788
Status : Answered
Chosen Option : 4

Q.5 Select the most appropriate option that can substitute the underlined word in the following sentence.
The energetic kitten is playful after having his breakfast.

- Ans
- 1. its
 - 2. it's
 - 3. it
 - 4. it is

Question ID : 264330152575
Option 1 ID : 264330597903
Option 2 ID : 264330597905
Option 3 ID : 264330597904
Option 4 ID : 264330597906
Status : Answered
Chosen Option : 1

Q.6 The following sentence has been split into four segments. Identify the segment that contains a grammatical error.
It is commonly believed / that Democracy is / the best form / of the government.

- Ans** ✓ 1. of the government
✗ 2. It is commonly believed
✗ 3. that Democracy is
✗ 4. the best form

Question ID : 264330153167
Option 1 ID : 264330600230
Option 2 ID : 264330600227
Option 3 ID : 264330600228
Option 4 ID : 264330600229
Status : Answered
Chosen Option : 1

Q.7 Four words of the following sentence have been underlined and given as options.
Select the option that contains a spelling error.
Ozone is a reactiev gas that is not only important in protecting us from harmful ultraviolet radiation but is also a greenhouse gas and, at high smog-level concentrations, harmful to human health and vegetation.

- Ans** ✓ 1. reactiev
✗ 2. radiation
✗ 3. concentrations
✗ 4. vegetation

Question ID : 264330151931
Option 1 ID : 264330595339
Option 2 ID : 264330595340
Option 3 ID : 264330595341
Option 4 ID : 264330595342
Status : Answered
Chosen Option : 1

Q.8 Select the most appropriate option that can substitute the underlined segment in the given sentence.
He said that I have finished my work.

- Ans** ✓ 1. he had finished his work
✗ 2. he has finished his work
✗ 3. I had finished my work
✗ 4. he was finished his work

Question ID : 264330152707
Option 1 ID : 264330598429
Option 2 ID : 264330598430
Option 3 ID : 264330598428
Option 4 ID : 264330598427
Status : Answered
Chosen Option : 1

Q.9 Parts of the following sentence have been underlined and given as options. Select the option that contains a misspelt word.

A piano teacher described an interesting encounter she had with a young lady who came to inquire about music lessons.

- Ans
- 1. interesting
 - 2. inquire
 - 3. piano
 - 4. encounter

Question ID : 264330151834
Option 1 ID : 264330594964
Option 2 ID : 264330594966
Option 3 ID : 264330594963
Option 4 ID : 264330594965
Status : Answered
Chosen Option : 4

Q.10 Select the most appropriate meaning of the underlined idiom.

The executives were running around in circles, without any success.

- Ans
- 1. Achieving maximum mileage
 - 2. Suffering huge profits and losses
 - 3. Successfully accomplishing the target
 - 4. Putting efforts into something that does not give a worthwhile result

Question ID : 264330153143
Option 1 ID : 264330600133
Option 2 ID : 264330600134
Option 3 ID : 264330600132
Option 4 ID : 264330600131
Status : Answered
Chosen Option : 4

Q.11 Select the most appropriate option that can substitute the underlined segment in the given sentence. If there is no need to substitute it, select 'No substitution required'.
Many great people born in that small village.

- Ans
- 1. was born
 - 2. No substitution required
 - 3. is born
 - 4. were born

Question ID : 264330152729
Option 1 ID : 264330598516
Option 2 ID : 264330598518
Option 3 ID : 264330598515
Option 4 ID : 264330598517
Status : Answered
Chosen Option : 4

Q.12 The given sentence contains an error. Select the option that correctly rectifies the error.

He was carefulest while stealing the crown jewels.

- Ans
- 1. He was more careful while stealing the crown jewels.
 - 2. He was most carefuller while stealing the crown jewels.
 - 3. He was carefuller while stealing the crown jewels.
 - 4. He was most careful while stealing the crown jewels.

Question ID : 264330152610

Option 1 ID : 264330598044

Option 2 ID : 264330598046

Option 3 ID : 264330598043

Option 4 ID : 264330598045

Status : Answered

Chosen Option : 4

Q.13 Select the most appropriate synonym of the given word.

Hesitate

- Ans
- 1. Blabber
 - 2. Recoil
 - 3. Conceal
 - 4. Falter

Question ID : 264330151878

Option 1 ID : 264330595133

Option 2 ID : 264330595131

Option 3 ID : 264330595132

Option 4 ID : 264330595134

Status : Answered

Chosen Option : 2

Q.14 The sentence given below has spelling errors. Select the sentence without spelling errors.

We can also contribute to presarvation of water bodies by not dumping our garbage in them.

- Ans
- 1. We can also contribute to presarvation of water bodies by not dumpeing our garbage in them.
 - 2. We can also contribute to preservation of water bodies by not dumping our garbage in them.
 - 3. We can also contribut to presarvation of water bodies by not dumping our garbage in them.
 - 4. We can also contribute to presarvation of water bodies by not dumping our garbag in them.

Question ID : 264330151840

Option 1 ID : 264330594989

Option 2 ID : 264330594988

Option 3 ID : 264330594987

Option 4 ID : 264330594990

Status : Answered

Chosen Option : 2

Q.15 Select the most appropriate meaning of the given idiom.

Call it a day

- Ans 1. To have the greatest day ever
 2. To stop working
 3. To be very straightforward
 4. To refer to something as something else

Question ID : 264330153014

Option 1 ID : 264330599627

Option 2 ID : 264330599628

Option 3 ID : 264330599630

Option 4 ID : 264330599629

Status : Answered

Chosen Option : 2

Q.16 Select the most appropriate ANTONYM of the given word.

Stern

- Ans 1. Stable
 2. Sincere
 3. Profound
 4. Lenient

Question ID : 264330152678

Option 1 ID : 264330598318

Option 2 ID : 264330598316

Option 3 ID : 264330598315

Option 4 ID : 264330598317

Status : Answered

Chosen Option : 4

Q.17 Select the most appropriate option that can substitute the underlined segment in the given sentence.

His older brothers were quite willing that he should went to sea.

- Ans 1. had go to
 2. have gone in
 3. gone to
 4. go to

Question ID : 264330153486

Option 1 ID : 264330601461

Option 2 ID : 264330601462

Option 3 ID : 264330601460

Option 4 ID : 264330601459

Status : Answered

Chosen Option : 4

Q.18 Select the most appropriate option that can substitute the underlined segment in the given sentence. If there is no need to substitute it, select 'No improvement required'. It is true that learning English is essential for professionals to survived the national and international competitions.

- Ans
- 1. to be survive
 - 2. having to survive
 - 3. No improvement required
 - 4. for surviving

Question ID : 264330153536
Option 1 ID : 264330601647
Option 2 ID : 264330601649
Option 3 ID : 264330601650
Option 4 ID : 264330601648
Status : Answered
Chosen Option : 4

Q.19 Select the most appropriate option to fill in the blank. The tigress that was killed by the villagers was not only a man-eater, _____ a mother.

- Ans
- 1. but
 - 2. but also
 - 3. and
 - 4. but often

Question ID : 264330152635
Option 1 ID : 264330598145
Option 2 ID : 264330598143
Option 3 ID : 264330598144
Option 4 ID : 264330598146
Status : Answered
Chosen Option : 2

Q.20 Select the most appropriate meaning of the given idiom. Spill the beans

- Ans
- 1. Excellent health
 - 2. Behave or speak in a rash manner
 - 3. Things always get worse
 - 4. To reveal a secret information unintentionally

Question ID : 264330153281
Option 1 ID : 264330600680
Option 2 ID : 264330600681
Option 3 ID : 264330600682
Option 4 ID : 264330600679
Status : Answered
Chosen Option : 4

Comprehension:

In the following passage, some words have been deleted. Read the passage carefully and select the most appropriate option to fill in each blank.

Photosynthesis is the _____(1) used by plants, algae and some bacteria to turn sunlight into energy. The process chemically _____(2) carbon dioxide and water into food and oxygen. The chemical reaction often _____(3) on a pigment called chlorophyll, which gives plants their green colour. Photosynthesis is also the _____(4) our planet is blanketed in an oxygen-rich atmosphere. Plants absorb carbon dioxide from the _____(5) air and release water and oxygen via microscopic pores on their leaves called stomata.

SubQuestion No : 21

Q.21 Select the most appropriate option to fill in blank number 1.

- Ans** 1. process
 2. guess
 3. chaos
 4. area

Question ID : 264330153499
Option 1 ID : 264330601507
Option 2 ID : 264330601509
Option 3 ID : 264330601510
Option 4 ID : 264330601508
Status : Answered
Chosen Option : 1

Comprehension:

In the following passage, some words have been deleted. Read the passage carefully and select the most appropriate option to fill in each blank.

Photosynthesis is the _____(1) used by plants, algae and some bacteria to turn sunlight into energy. The process chemically _____(2) carbon dioxide and water into food and oxygen. The chemical reaction often _____(3) on a pigment called chlorophyll, which gives plants their green colour. Photosynthesis is also the _____(4) our planet is blanketed in an oxygen-rich atmosphere. Plants absorb carbon dioxide from the _____(5) air and release water and oxygen via microscopic pores on their leaves called stomata.

SubQuestion No : 22

Q.22 Select the most appropriate option to fill in blank number 2.

- Ans** 1. converts
 2. exceeds
 3. crates
 4. bows

Question ID : 264330153500
Option 1 ID : 264330601514
Option 2 ID : 264330601512
Option 3 ID : 264330601513
Option 4 ID : 264330601511
Status : Answered
Chosen Option : 1

Comprehension:

In the following passage, some words have been deleted. Read the passage carefully and select the most appropriate option to fill in each blank.

Photosynthesis is the _____(1) used by plants, algae and some bacteria to turn sunlight into energy. The process chemically _____(2) carbon dioxide and water into food and oxygen. The chemical reaction often _____(3) on a pigment called chlorophyll, which gives plants their green colour. Photosynthesis is also the _____(4) our planet is blanketed in an oxygen-rich atmosphere. Plants absorb carbon dioxide from the _____(5) air and release water and oxygen via microscopic pores on their leaves called stomata.

SubQuestion No : 23

Q.23 Select the most appropriate option to fill in blank number 3.

- Ans** 1. relies
 2. creates
 3. hopes
 4. wants

Question ID : 264330153501
Option 1 ID : 264330601517
Option 2 ID : 264330601518
Option 3 ID : 264330601515
Option 4 ID : 264330601516
Status : Answered
Chosen Option : 1

Comprehension:

In the following passage, some words have been deleted. Read the passage carefully and select the most appropriate option to fill in each blank.

Photosynthesis is the _____(1) used by plants, algae and some bacteria to turn sunlight into energy. The process chemically _____(2) carbon dioxide and water into food and oxygen. The chemical reaction often _____(3) on a pigment called chlorophyll, which gives plants their green colour. Photosynthesis is also the _____(4) our planet is blanketed in an oxygen-rich atmosphere. Plants absorb carbon dioxide from the _____(5) air and release water and oxygen via microscopic pores on their leaves called stomata.

SubQuestion No : 24

Q.24 Select the most appropriate option to fill in blank number 4.

- Ans** 1. goal
 2. sense
 3. reason
 4. occasion

Question ID : 264330153502
Option 1 ID : 264330601522
Option 2 ID : 264330601519
Option 3 ID : 264330601520
Option 4 ID : 264330601521
Status : Answered
Chosen Option : 3

Comprehension:

In the following passage, some words have been deleted. Read the passage carefully and select the most appropriate option to fill in each blank.

Photosynthesis is the _____(1) used by plants, algae and some bacteria to turn sunlight into energy. The process chemically _____(2) carbon dioxide and water into food and oxygen. The chemical reaction often _____(3) on a pigment called chlorophyll, which gives plants their green colour. Photosynthesis is also the _____(4) our planet is blanketed in an oxygen-rich atmosphere. Plants absorb carbon dioxide from the _____(5) air and release water and oxygen via microscopic pores on their leaves called stomata.

SubQuestion No : 25

Q.25 Select the most appropriate option to fill in blank number 5.

- Ans** 1. afar
 2. distant
 3. surrounding
 4. close

Question ID : 264330153503

Option 1 ID : 264330601525

Option 2 ID : 264330601523

Option 3 ID : 264330601524

Option 4 ID : 264330601526

Status : Answered

Chosen Option : 3

Adda247

বাংলা

Multi Tasking Non Technical Staff and Havaladar CBIC and CBN Examination 2023

Roll Number	
Candidate Name	
Venue Name	iON Digital Zone iDZ Chandigarh
Exam Date	04/09/2023
Exam Time	9:00 AM - 11:00 AM
Subject	MTS Non Tech Havaladar CBIC and CBN Examination 2023

Section : Numerical and Mathematical Ability

Q.1 Find the area of an equilateral triangle, each of whose sides measures 12 cm.

- Ans
- ✓ 1. $36\sqrt{3} \text{ cm}^2$
 - ✗ 2. $3\sqrt{3} \text{ cm}^2$
 - ✗ 3. $\frac{36}{\sqrt{3}} \text{ cm}^2$
 - ✗ 4. $\frac{72}{\sqrt{3}} \text{ cm}^2$

Question ID : 264330153893

Option 1 ID : 264330603037

Option 2 ID : 264330603035

Option 3 ID : 264330603038

Option 4 ID : 264330603036

Status : Answered

Chosen Option : 1

Q.2 The radius and the height of a right circular cone are in the ratio 3 : 4. If its volume is 301.44 m^3 , find the slant height (use $\pi = 3.14$).

- Ans
- ✗ 1. 5 cm
 - ✗ 2. 20 cm
 - ✓ 3. 10 cm
 - ✗ 4. 15 cm

Question ID : 264330156370

Option 1 ID : 264330612882

Option 2 ID : 264330612879

Option 3 ID : 264330612881

Option 4 ID : 264330612880

Status : Answered

Chosen Option : 3

Q.3 At what rate of interest per annum, compounded annually, will an amount of ₹8,000 yield a compound interest of ₹904.2 in 2 years?

- Ans**
- 1. 6%
 - 2. 8%
 - 3. 10%
 - 4. 5.5%

Question ID : 264330156346
Option 1 ID : 264330612783
Option 2 ID : 264330612784
Option 3 ID : 264330612786
Option 4 ID : 264330612785
Status : Answered
Chosen Option : 4

Q.4 The average of the first 10 prime number is:

- Ans**
- 1. 12.9
 - 2. 9.7
 - 3. 11.9
 - 4. 13.4

Question ID : 264330154075
Option 1 ID : 264330603765
Option 2 ID : 264330603764
Option 3 ID : 264330603763
Option 4 ID : 264330603766
Status : Answered
Chosen Option : 1

Q.5 A manufacturer earns a profit of 10% on selling his products to a wholesale dealer. The wholesale dealer earns a profit of 15% by selling it to a retailer. The retailer, in turn, earns a profit of 25% from the customer. What is the actual cost of production of an article for which the customer pays ₹12,650?

- Ans**
- 1. ₹8,000
 - 2. ₹8,500
 - 3. ₹9,000
 - 4. ₹7,000

Question ID : 264330154123
Option 1 ID : 264330603956
Option 2 ID : 264330603957
Option 3 ID : 264330603958
Option 4 ID : 264330603955
Status : Answered
Chosen Option : 1

Q.6 Number of eggs produced by five farms:

Year	Farm				
	L	M	N	O	P
2019	825	925	670	740	480
2020	928	768	781	530	864
2021	765	635	922	515	940
2022	832	526	623	618	745

What is the respective ratio of the dozens of eggs produced by farm M to farm P in the year 2020?

- Ans
- ✓ 1. 8 : 9
 - ✗ 2. 9 : 8
 - ✗ 3. 7 : 8
 - ✗ 4. 4 : 3

Question ID : 264330155761

Option 1 ID : 264330610447

Option 2 ID : 264330610450

Option 3 ID : 264330610448

Option 4 ID : 264330610449

Status : Answered

Chosen Option : 1

Q.7 The average of the first 69 natural numbers is:

- Ans
- ✗ 1. 34
 - ✓ 2. 35
 - ✗ 3. 33
 - ✗ 4. 36

Question ID : 264330156209

Option 1 ID : 264330612236

Option 2 ID : 264330612237

Option 3 ID : 264330612235

Option 4 ID : 264330612238

Status : Answered

Chosen Option : 2

Q.8 By selling a TV set for ₹16,800, a salesman gains a profit of 20%. If the production cost is increased by 20%, find the new selling price of the set so as to gain 20%.

- Ans
- ✗ 1. ₹18,160
 - ✗ 2. ₹18,480
 - ✓ 3. ₹20,160
 - ✗ 4. ₹20,480

Question ID : 264330155999

Option 1 ID : 264330611395

Option 2 ID : 264330611397

Option 3 ID : 264330611398

Option 4 ID : 264330611396

Status : Answered

Chosen Option : 3

Q.9 A mixture contains milk and water in the ratio 9 : 7. If it contains 4 litres more milk than water, then find the quantity of milk (in litres) in the mixture.

- Ans** 1. 18
 2. 15
 3. 21
 4. 14

Question ID : 264330156051
Option 1 ID : 264330611603
Option 2 ID : 264330611605
Option 3 ID : 264330611606
Option 4 ID : 264330611604
Status : Answered
Chosen Option : 1

Q.10 Juli and Rahul can simultaneously finish the work of painting a room in 12 days. If Juli alone can paint the room in 20 days, in how many days can Rahul alone complete the same work of painting the room?

- Ans** 1. 30
 2. 25
 3. 40
 4. 35

Question ID : 264330155719
Option 1 ID : 264330610280
Option 2 ID : 264330610279
Option 3 ID : 264330610282
Option 4 ID : 264330610281
Status : Answered
Chosen Option : 1

Q.11 The mean proportion of $(3+2\sqrt{2})^2$ and $(3-2\sqrt{2})^2$ is:

- Ans** 1. $3 + 2\sqrt{2}$
 2. 5
 3. $2\sqrt{2}$
 4. 1

Question ID : 264330154052
Option 1 ID : 264330603674
Option 2 ID : 264330603671
Option 3 ID : 264330603672
Option 4 ID : 264330603673
Status : Answered
Chosen Option : 4

Q.12 Three measuring tapes are 64 cm, 72 cm and 96 cm, respectively. What is the least length that can be measured by any of the tapes exactly (in cm)?

- Ans**
- 1. 575
 - 2. 570
 - 3. 576
 - 4. 525

Question ID : 264330155984

Option 1 ID : 264330611337

Option 2 ID : 264330611335

Option 3 ID : 264330611336

Option 4 ID : 264330611338

Status : Answered

Chosen Option : 3

Q.13 A work can be completed by P and Q working separately in 12 and 18 days, respectively. But they work on alternate days beginning with P. How many days will it take to complete the work?

- Ans**
- 1. $14\frac{1}{12}$
 - 2. 15
 - 3. $14\frac{1}{3}$
 - 4. $14\frac{1}{4}$

Question ID : 264330154059

Option 1 ID : 264330603702

Option 2 ID : 264330603700

Option 3 ID : 264330603701

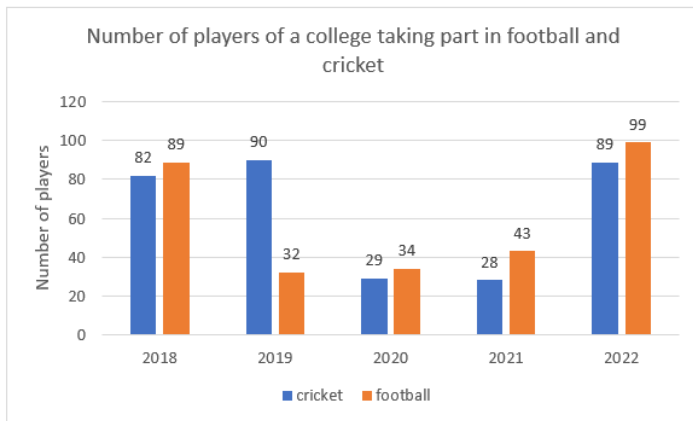
Option 4 ID : 264330603699

Status : Answered

Chosen Option : 3

বাংলা

Q.14 The bar graph shows the number of players of a college taking part in two games for five years:



What is the total number of players playing cricket and football in 2019 and 2020?

- Ans
- 1. 190
 - 2. 195
 - 3. 185
 - 4. 180

Question ID : 264330154100

Option 1 ID : 264330603864

Option 2 ID : 264330603865

Option 3 ID : 264330603863

Option 4 ID : 264330603866

Status : Answered

Chosen Option : 3

Q.15 P and Q start from point A to point B, at the same time at speeds of 32 km/h and 40 km/h, respectively. If in covering the journey P takes 15 minutes longer than Q, the total distance AB of the journey is:

- Ans
- 1. 36 km
 - 2. 32 km
 - 3. 40 km
 - 4. 44 km

Question ID : 264330156366

Option 1 ID : 264330612865

Option 2 ID : 264330612866

Option 3 ID : 264330612864

Option 4 ID : 264330612863

Status : Answered

Chosen Option : 3

Q.16 Simplify

$$108 \div 36 \times 4 + 2.5 \times 4 \div 0.5 - 10$$

- Ans
- 1. 10
 - 2. 22
 - 3. 21
 - 4. 20

Question ID : 264330156049
Option 1 ID : 264330611595
Option 2 ID : 264330611598
Option 3 ID : 264330611597
Option 4 ID : 264330611596
Status : Answered
Chosen Option : 2

Q.17 A car dealer borrows ₹20,000 from a bank for a period of 2 years at a simple interest rate of 8% per annum. If he repays the loan in full at the end of the 2-year period, how much will he have to pay?

- Ans
- 1. ₹3,600
 - 2. ₹23,600
 - 3. ₹23,200
 - 4. ₹3,200

Question ID : 264330156269
Option 1 ID : 264330612478
Option 2 ID : 264330612476
Option 3 ID : 264330612475
Option 4 ID : 264330612477
Status : Answered
Chosen Option : 3

Q.18 A lady invests ₹27,600 in three shares in the ratio 3 : 4 : 5 which pay dividends of 20%, 15% and 5% on her investment for that year, respectively. What is the total dividend?

- Ans
- 1. ₹3,852
 - 2. ₹3,335
 - 3. ₹3,125
 - 4. ₹2,535

Question ID : 264330154087
Option 1 ID : 264330603813
Option 2 ID : 264330603814
Option 3 ID : 264330603812
Option 4 ID : 264330603811
Status : Answered
Chosen Option : 2

Q.19 Two trains of length 200 m and 325 m long are running on parallel rail tracks at speeds of 78 km/h and 60 km/h, respectively. In how much time (in seconds) the faster train cross the slower one if they are running in the same direction?

- Ans** 1. 105
 2. 100
 3. 115
 4. 110

Question ID : 264330156233
Option 1 ID : 264330612332
Option 2 ID : 264330612331
Option 3 ID : 264330612334
Option 4 ID : 264330612333
Status : Answered
Chosen Option : 1

Q.20 A college student spends 75% of his pocket money. When the pocket money increased by 20%, the expenditure also increased by 15%. What is the increase in the savings?

- Ans** 1. 25%
 2. 55%
 3. 35%
 4. 45%

Question ID : 264330154044
Option 1 ID : 264330603640
Option 2 ID : 264330603642
Option 3 ID : 264330603641
Option 4 ID : 264330603639
Status : Answered
Chosen Option : 3

Section : Reasoning Ability and Problem Solving

Q.1 What should come in place of '?' in the given series?

4 22 112 562 2812 ?

- Ans** 1. 13423
 2. 13948
 3. 14062
 4. 13684

Question ID : 264330151464
Option 1 ID : 264330593483
Option 2 ID : 264330593485
Option 3 ID : 264330593486
Option 4 ID : 264330593484
Status : Answered
Chosen Option : 3

Q.2 What should come in place of '?' in the given series?

16 110 ? 5374 37616 263310 1843168

- Ans
- 1. 792
 - 2. 800
 - 3. 804
 - 4. 768

Question ID : 264330151481

Option 1 ID : 264330593552

Option 2 ID : 264330593553

Option 3 ID : 264330593554

Option 4 ID : 264330593551

Status : Answered

Chosen Option : 4

Q.3 Read the given statements and conclusions carefully. You have to take the given statements to be true even if they seem to be at variance from commonly known facts. You have to decide which conclusion/s logically follow/s from the given statements.

Statements: All ropes are forks. Some forks are spoons. Some spoons are chopsticks.

Conclusion I: Some ropes are spoons.

Conclusion II: All forks are chopsticks.

- Ans
- 1. Only conclusion (II) is follow.
 - 2. Only conclusion (I) is follow.
 - 3. Both conclusions (I) and (II) are follow.
 - 4. Neither conclusion (I) nor (II) is follow.

Question ID : 264330155927

Option 1 ID : 264330611112

Option 2 ID : 264330611111

Option 3 ID : 264330611114

Option 4 ID : 264330611113

Status : Answered

Chosen Option : 4

Q.4 In the following number-pairs, the second number is obtained by applying certain mathematical operations to the first number. Select the set in which the numbers are related in the same way as are the numbers of the following sets. (NOTE: Operations should be performed on the whole numbers, without breaking down the numbers into its constituent digits. E.g. 13 – Operations on 13 such as adding /deleting /multiplying etc. to 13 can be performed. Breaking down 13 into 1 and 3 and then performing mathematical operations on 1 and 3 is not allowed)

8 : 50

4 : 30

- Ans
- 1. 20 : 40
 - 2. 6 : 20
 - 3. 7 : 45
 - 4. 5 : 8

Question ID : 264330154646

Option 1 ID : 264330606050

Option 2 ID : 264330606048

Option 3 ID : 264330606047

Option 4 ID : 264330606049

Status : Marked For Review

Chosen Option : 2

Q.5 What will come in the place of '?' in the following equation, if '+' and '-' are interchanged and '×' and '÷' are interchanged?

$$729 \times 81 - 96 + 13 + 8 = ?$$

- Ans**
- ✓ 1. 1
 - ✗ 2. 11
 - ✗ 3. 8
 - ✗ 4. 9

Question ID : 264330155680

Option 1 ID : 264330610124

Option 2 ID : 264330610123

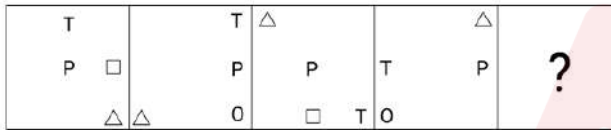
Option 3 ID : 264330610126

Option 4 ID : 264330610125

Status : Answered

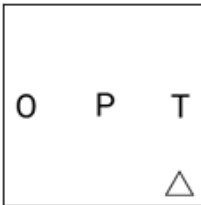
Chosen Option : 1

Q.6 Which figure should replace the question mark (?) if the following figure series were to be continued?



Ans

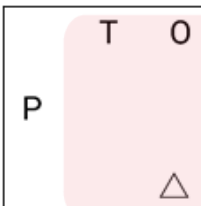
✗ 1.



✗ 2.



✗ 3.



✓ 4.



Question ID : 264330154758

Option 1 ID : 264330606497

Option 2 ID : 264330606495

Option 3 ID : 264330606496

Option 4 ID : 264330606498

Status : Answered

Chosen Option : 4

Q.7 In a certain code language, 'COIN' is coded as '9735' and 'ONCE' is coded as '3459'. What is the code for 'E' in the given code language?

- Ans**
- 1. 5
 - 2. 3
 - 3. 4
 - 4. 9

Question ID : 264330151693

Option 1 ID : 264330594402

Option 2 ID : 264330594400

Option 3 ID : 264330594399

Option 4 ID : 264330594401

Status : Answered

Chosen Option : 3

Q.8 Read the given statements and conclusions carefully. You have to take the given statements to be true even if they seem to be at variance from commonly known facts. You have to decide which conclusion/s logically follow/s from the given statements.

Statements: All computers are laptops. Some laptops are heavy. All heavy is wood.

Conclusion I: All laptops are computers.

Conclusion II: Some heavy are laptops.

- Ans**
- 1. Neither conclusion (I) nor (II) is follow.
 - 2. Only conclusion (I) is follow.
 - 3. Both conclusions (I) and (II) are follow.
 - 4. Only conclusion (II) is follow.

Question ID : 264330155908

Option 1 ID : 264330611037

Option 2 ID : 264330611035

Option 3 ID : 264330611038

Option 4 ID : 264330611036

Status : Answered

Chosen Option : 4

Q.9 Six people, Karan, Dilip, Rahul, Prabhat, Alok and Sandeep are sitting in a straight line, facing north. Karan sits 2nd from the left end. Dilip sits 3rd to the right of Karan. Rahul sits 2nd to the left of Dilip. Prabhat sits 3rd to the right of Rahul. Sandeep sits 2nd to the left of Prabhat. Who sits 2nd to the right of Karan?

- Ans**
- 1. Rahul
 - 2. Sandeep
 - 3. Prabhat
 - 4. Alok

Question ID : 264330161848

Option 1 ID : 264330634720

Option 2 ID : 264330634721

Option 3 ID : 264330634722

Option 4 ID : 264330634719

Status : Answered

Chosen Option : 2

Q.10 What should come in place of ? in the given series based on the English alphabetical order?

MAG, QXE, UUC, YRA, ?

- Ans
- 1. CNX
 - 2. COY
 - 3. DNY
 - 4. DMX

Question ID : 264330155806
Option 1 ID : 264330610630
Option 2 ID : 264330610627
Option 3 ID : 264330610629
Option 4 ID : 264330610628
Status : Answered
Chosen Option : 2

Q.11 In the following number-pairs, the second number is obtained by applying certain mathematical operations to the first number. Select the set in which the numbers are related in the same way as are the numbers of the following sets.

(NOTE: Operations should be performed on the whole numbers, without breaking down the numbers into its constituent digits. E.g. 13 – Operations on 13 such as adding / subtracting / multiplying etc. to 13 can be performed.

Breaking down 13 into 1 and 3 and then performing mathematical operations on 1 and 3 is not allowed)

5, 128

9, 732

- Ans
- 1. 5, 50
 - 2. 3, 30
 - 3. 4, 46
 - 4. 2, 13

Question ID : 264330151620
Option 1 ID : 264330594110
Option 2 ID : 264330594108
Option 3 ID : 264330594109
Option 4 ID : 264330594107
Status : Answered
Chosen Option : 2

Q.12 What should come in place of '?' in the given series?

5 15 35 75 155 ?

- Ans
- 1. 315
 - 2. 305
 - 3. 325
 - 4. 335

Question ID : 264330151456
Option 1 ID : 264330593452
Option 2 ID : 264330593451
Option 3 ID : 264330593453
Option 4 ID : 264330593454
Status : Answered
Chosen Option : 1

Q.13 Select the correct mirror image of the given figure when the mirror is placed at MN as shown below.



- Ans
- 1. $\bar{y} R 4 6 h K a$
 - 2. $\bar{a} K h 6 4 R y$
 - 3. $\bar{a} K h 6 4 R y$
 - 4. $\bar{y} R 4 6 h K a$

Question ID : 264330151528

Option 1 ID : 264330593739

Option 2 ID : 264330593741

Option 3 ID : 264330593740

Option 4 ID : 264330593742

Status : Answered

Chosen Option : 3

Q.14 What will come in the place of the question mark (?) in the following equation, if '+' and '-' are interchanged and 'x' and '÷' are interchanged?
 $39 + 5 + 8 - 99 \times 9 = ?$

- Ans
- 1. 168
 - 2. 198
 - 3. 158
 - 4. 178

Question ID : 264330154614

Option 1 ID : 264330605920

Option 2 ID : 264330605922

Option 3 ID : 264330605919

Option 4 ID : 264330605921

Status : Answered

Chosen Option : 2

Q.15 What should come in place of the question mark (?) in the given series based on the English alphabetical order?

EMT, ILX, MKB, QJF, ?

- Ans
- 1. UHL
 - 2. VJL
 - 3. UIJ
 - 4. VHK

Question ID : 264330156300

Option 1 ID : 264330612599

Option 2 ID : 264330612600

Option 3 ID : 264330612602

Option 4 ID : 264330612601

Status : Answered

Chosen Option : 3

Q.16 What should come in place of ? in the given series based on the English alphabetical order?

NBE, JXA, FTW, BPS, ?

- Ans
- 1. XMP
 - 2. YMN
 - 3. XLO
 - 4. YNP

Question ID : 264330155771

Option 1 ID : 264330610490

Option 2 ID : 264330610488

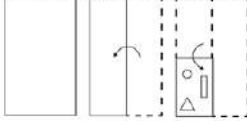
Option 3 ID : 264330610489

Option 4 ID : 264330610487

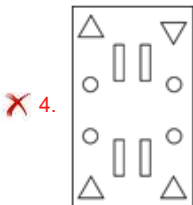
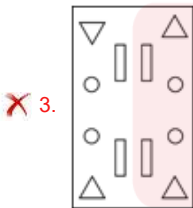
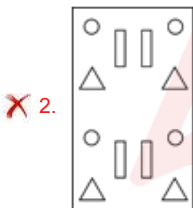
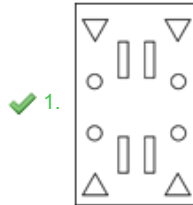
Status : Answered

Chosen Option : 3

Q.17 The sequence of folding a piece of paper and the manner in which the folded paper is cut is shown in the following figures. How would this paper look when unfolded?



Ans



Question ID : 264330155607

Option 1 ID : 264330609831

Option 2 ID : 264330609834

Option 3 ID : 264330609832

Option 4 ID : 264330609833

Status : Answered

Chosen Option : 1

Q.18 In a certain code language, 'BLANCH' is coded as '36' and 'ARAB' is coded as '24'. What is the code for 'CORRECT' in the given code language?

- Ans
- 1. 41
 - 2. 39
 - 3. 42
 - 4. 40

Question ID : 264330155825
Option 1 ID : 264330610704
Option 2 ID : 264330610706
Option 3 ID : 264330610703
Option 4 ID : 264330610705
Status : Answered
Chosen Option : 3

Q.19 DKJE is related to IPOJ in a certain way based on the English alphabetical order. In the same way, GTSM is related to LYXR. To which of the following is RBNF related to, following the same logic?

- Ans
- 1. WGSK
 - 2. XERJ
 - 3. WEQK
 - 4. VGQI

Question ID : 264330151656
Option 1 ID : 264330594253
Option 2 ID : 264330594254
Option 3 ID : 264330594251
Option 4 ID : 264330594252
Status : Answered
Chosen Option : 1

Q.20 The position of how many letters will remain unchanged if each of the letter in the word 'BACHELOR' is arranged in alphabetical order?

- Ans
- 1. One
 - 2. Five
 - 3. Four
 - 4. Two

Question ID : 264330154324
Option 1 ID : 264330604759
Option 2 ID : 264330604761
Option 3 ID : 264330604760
Option 4 ID : 264330604762
Status : Answered
Chosen Option : 3

Section : General Awareness

Q.1 The Padma Shri awardee Guru K Kalyanasundaram Pillai, the man who is keeping an ancient tradition alive, was awarded the Padma Shri 2023 for his contribution to the field of _____.

- Ans
- 1. Kuchipudi
 - 2. Kathakali
 - 3. Bharatanatyam
 - 4. Mohiniyattam

Question ID : 264330160805
Option 1 ID : 264330630551
Option 2 ID : 264330630554
Option 3 ID : 264330630553
Option 4 ID : 264330630552
Status : Answered
Chosen Option : 3

Q.2 Who appoints the State Election Commissioner?

- Ans
- 1. Governor
 - 2. Speaker
 - 3. Chief Minister
 - 4. Advocate General

Question ID : 264330159924
Option 1 ID : 264330627043
Option 2 ID : 264330627045
Option 3 ID : 264330627044
Option 4 ID : 264330627046
Status : Answered
Chosen Option : 1

Q.3 In which river has the National Waterways-2 (NW-2) been developed in India?

- Ans
- 1. Brahmaputra
 - 2. Krishna
 - 3. Ganga
 - 4. Narmada

Question ID : 264330161512
Option 1 ID : 264330633377
Option 2 ID : 264330633376
Option 3 ID : 264330633378
Option 4 ID : 264330633375
Status : Answered
Chosen Option : 1

Q.4 In India, Micro Finance Institutions primarily target which segment of the population?

- Ans
- 1. Non-resident Indians (NRIs)
 - 2. Large corporations
 - 3. Low-income individuals and small businesses
 - 4. High-income individuals

Question ID : 264330157287
Option 1 ID : 264330616514
Option 2 ID : 264330616512
Option 3 ID : 264330616513
Option 4 ID : 264330616511
Status : Answered
Chosen Option : 3

Q.5 What is the name of the scheme launched by Himachal Pradesh government for dairy farmers?

- Ans**
- 1. Dhugdh Dhan
 - 2. Pashu Poshan
 - 3. Dhoodh aur Dhan
 - 4. Sanjeevani

Question ID : 264330158327
Option 1 ID : 264330620669
Option 2 ID : 264330620667
Option 3 ID : 264330620670
Option 4 ID : 264330620668
Status : Answered
Chosen Option : 3

Q.6 Which of the following States will host the 37th National Games?

- Ans**
- 1. Odisha
 - 2. Andhra Pradesh
 - 3. Goa
 - 4. Karnataka

Question ID : 264330161150
Option 1 ID : 264330631934
Option 2 ID : 264330631932
Option 3 ID : 264330631933
Option 4 ID : 264330631931
Status : Answered
Chosen Option : 2

Q.7 Kalidas Samman is a prestigious arts award presented annually by the government of _____.

- Ans**
- 1. Madhya Pradesh
 - 2. Rajasthan
 - 3. Kerala
 - 4. Karnataka

Question ID : 264330161911
Option 1 ID : 264330634973
Option 2 ID : 264330634974
Option 3 ID : 264330634971
Option 4 ID : 264330634972
Status : Answered
Chosen Option : 1

Q.8 How many countries will participate in ICC 2023 ODI Cricket World Cup?

- Ans
- 1. 12
 - 2. 10
 - 3. 6
 - 4. 8

Question ID : 264330158226
Option 1 ID : 264330620266
Option 2 ID : 264330620265
Option 3 ID : 264330620263
Option 4 ID : 264330620264
Status : Answered
Chosen Option : 2

Q.9 Whose autobiography is titled 'Born Again on the Mountain: a story of losing everything and finding it back'?

- Ans
- 1. Bachendri Pal
 - 2. Dicky Dolma
 - 3. Santosh Yadav
 - 4. Arunima Sinha

Question ID : 264330155451
Option 1 ID : 264330609207
Option 2 ID : 264330609209
Option 3 ID : 264330609210
Option 4 ID : 264330609208
Status : Answered
Chosen Option : 4

Q.10 Which of the following is NOT a characteristic of money?

- Ans
- 1. Portability
 - 2. Perishability
 - 3. Divisibility
 - 4. Durability

Question ID : 264330157303
Option 1 ID : 264330616576
Option 2 ID : 264330616578
Option 3 ID : 264330616577
Option 4 ID : 264330616575
Status : Answered
Chosen Option : 2

Q.11 Among the given options, which one causes an echo?

- Ans
- 1. When sound is reflected
 - 2. When sound waves travel through a solid medium
 - 3. When sound waves travel through a liquid medium
 - 4. When sound waves travel through a vacuum

Question ID : 264330157786
Option 1 ID : 264330618506
Option 2 ID : 264330618505
Option 3 ID : 264330618504
Option 4 ID : 264330618503
Status : Answered
Chosen Option : 1

Q.12 _____ has two traditions: one is the sankeertana (which is the devotional aspect) and the other is the raasa.

- Ans
- 1. Odissi
 - 2. Sattriya
 - 3. Manipuri dance
 - 4. Chhau

Question ID : 264330160791
Option 1 ID : 264330630495
Option 2 ID : 264330630496
Option 3 ID : 264330630498
Option 4 ID : 264330630497
Status : Not Answered
Chosen Option : --

Q.13 Which of the following lakes is a saltwater lake ?

- Ans
- 1. Superior
 - 2. Chilika
 - 3. Malawi
 - 4. Titicaca

Question ID : 264330161325
Option 1 ID : 264330632628
Option 2 ID : 264330632627
Option 3 ID : 264330632629
Option 4 ID : 264330632630
Status : Answered
Chosen Option : 2

Q.14 'Wings of Fire' is an autobiography of whom?

- Ans
- 1. Ratan Tata
 - 2. Indira Gandhi
 - 3. Subhash Chandra Bose
 - 4. APJ Abdul Kalam

Question ID : 264330155491
Option 1 ID : 264330609370
Option 2 ID : 264330609369
Option 3 ID : 264330609368
Option 4 ID : 264330609367
Status : Answered
Chosen Option : 4

Q.15 The _____ of the Indian Constitution defines the Fundamental Duties of Indian Citizens.

- Ans
- 1. Article 51A
 - 2. Article 41B
 - 3. Article 49C
 - 4. Article 21A

Question ID : 264330162245
Option 1 ID : 264330636310
Option 2 ID : 264330636308
Option 3 ID : 264330636309
Option 4 ID : 264330636307
Status : Answered
Chosen Option : 1

Q.16 Dr. Bhupendra Kumar Hazarika won the Bharat Ratna award in the field of _____ in 2019.

- Ans
- 1. Literature
 - 2. Music
 - 3. Games
 - 4. Science

Question ID : 264330155506
Option 1 ID : 264330609428
Option 2 ID : 264330609429
Option 3 ID : 264330609430
Option 4 ID : 264330609427
Status : Answered
Chosen Option : 1

Q.17 What type of vegetation is represented by Sundarbans, the world's largest delta located in the Bay of Bengal?

- Ans
- 1. Tropical Thorn Forests
 - 2. Montane Forests
 - 3. Mangrove Forests
 - 4. Semi Evergreen Forests

Question ID : 264330160994
Option 1 ID : 264330631310
Option 2 ID : 264330631309
Option 3 ID : 264330631308
Option 4 ID : 264330631307
Status : Answered
Chosen Option : 3

Q.18 The Mumbai High region in Arabian Sea is known for mining _____.

- Ans
- 1. uranium
 - 2. coal
 - 3. copper
 - 4. mineral oil

Question ID : 264330161526
Option 1 ID : 264330633431
Option 2 ID : 264330633434
Option 3 ID : 264330633432
Option 4 ID : 264330633433
Status : Answered
Chosen Option : 2

Q.19 In which of the following years was the Child Marriage Restraint Act passed?

- Ans
- 1. 1949
 - 2. 1939
 - 3. 1950
 - 4. 1929

Question ID : 264330161751
Option 1 ID : 264330634333
Option 2 ID : 264330634332
Option 3 ID : 264330634334
Option 4 ID : 264330634331
Status : Answered
Chosen Option : 3

Q.20 According to the Census of India 2011, identify the correct pair of State and Union Territories which recorded the highest literacy rate.

- Ans
- 1. Mizoram and Lakshadweep
 - 2. Kerala and Chandigarh
 - 3. Goa and Puducherry
 - 4. Kerala and Lakshadweep

Question ID : 264330161558
Option 1 ID : 264330633559
Option 2 ID : 264330633561
Option 3 ID : 264330633562
Option 4 ID : 264330633560
Status : Answered
Chosen Option : 4

Q.21 The sal tree assumes great significance in a number of tribal communities scattered across eastern India. For instance, _____ festival is celebrated in honour of the tree in Jharkhand.

- Ans
- 1. Karma
 - 2. Tusu Parab
 - 3. Sarhul
 - 4. Sohrai

Question ID : 264330160836
Option 1 ID : 264330630677
Option 2 ID : 264330630678
Option 3 ID : 264330630676
Option 4 ID : 264330630675
Status : Answered
Chosen Option : 3

Q.22 Geto Sora won the Arena Junior (Boys) International Badminton Championship. He belongs to which state?

- Ans
- 1. Arunachal Pradesh
 - 2. Mizoram
 - 3. Sikkim
 - 4. Meghalaya

Question ID : 264330158369
Option 1 ID : 264330620836
Option 2 ID : 264330620837
Option 3 ID : 264330620838
Option 4 ID : 264330620835
Status : Answered
Chosen Option : 4

Q.23 Identify the Chhau dancer from the following, who received the Sangeet Natak Akademi Award-2021 (given in February 2023)?

- Ans**
- 1. Bharathi Vithal
 - 2. Kumkum Dhar
 - 3. Bhuvan Kumar
 - 4. Rabindra Atibudhi

Question ID : 264330155519
Option 1 ID : 264330609481
Option 2 ID : 264330609480
Option 3 ID : 264330609479
Option 4 ID : 264330609482
Status : Answered
Chosen Option : 2

Q.24 Which of the following Indian musicians was referred to as 'Ghazal King'?

- Ans**
- 1. Ghulam Ali
 - 2. Jagjit Singh
 - 3. Pankaj Udhas
 - 4. Mehdi Hassan

Question ID : 264330161774
Option 1 ID : 264330634424
Option 2 ID : 264330634426
Option 3 ID : 264330634425
Option 4 ID : 264330634423
Status : Answered
Chosen Option : 1

Q.25 On 8th April 1929, who among the following two revolutionists threw a bomb in the Central Legislative Assembly?

- Ans**
- 1. Bhagat Singh and Rajguru
 - 2. Bhagat Singh and Ram Prasad Bismil
 - 3. Bhagat Singh and Batukeshwar Dutt
 - 4. Bhagat Singh and Sukhdev

Question ID : 264330161746
Option 1 ID : 264330634313
Option 2 ID : 264330634312
Option 3 ID : 264330634311
Option 4 ID : 264330634314
Status : Answered
Chosen Option : 1

Q.1 Select the option that can be used as a one-word substitute for the given group of words.

To go away suddenly and secretly in order to escape from somewhere

Ans 1. Abscond

2. Vanish

3. Excavate

4. Extradite

Question ID : 264330151871

Option 1 ID : 264330595106

Option 2 ID : 264330595104

Option 3 ID : 264330595103

Option 4 ID : 264330595105

Status : Answered

Chosen Option : 1

Q.2 Select the most appropriate meaning of the underlined idiom.
My friend's business has grown by leaps and bounds.

Ans 1. rapidly

2. aimlessly

3. perfectly

4. slowly

Question ID : 264330152751

Option 1 ID : 264330598603

Option 2 ID : 264330598606

Option 3 ID : 264330598605

Option 4 ID : 264330598604

Status : Answered

Chosen Option : 1

Q.3 Select the most appropriate option that can substitute the underlined segment in the given sentence.

Peer pressure is bound to effect most of us both positively and negatively.

Ans 1. to invoke most of us

2. to affect most of us

3. to impede most of us

4. to prompt most of us

Question ID : 264330151809

Option 1 ID : 264330594865

Option 2 ID : 264330594863

Option 3 ID : 264330594866

Option 4 ID : 264330594864

Status : Answered

Chosen Option : 2

Q.4 Select the most appropriate synonym of the given word.
Peculiar

- Ans** 1. Neat
 2. Normal
 3. Strange
 4. Jovial

Question ID : 264330151923
Option 1 ID : 264330595309
Option 2 ID : 264330595308
Option 3 ID : 264330595307
Option 4 ID : 264330595310
Status : Answered
Chosen Option : 3

Q.5 Select the sentence that has NO spelling errors.

- Ans** 1. The teacher was impressed with the student's insightfull analysis of the novel, which demonstrated a deep understanding of the complex theames and motifs.
 2. The teacher was impressed with the student's insightful analysis of the novel, which demonstrated a deep understanding of the complex themes and motifs.
 3. The teacher was impressed with the student's insightul analysis of the novel, which demonstrated a deep understanding of the complex themes and motifs.
 4. The teacher was impresed with the student's insightful analysis of the novel, which demonstredted a deep understanding of the complex themes and motifs.

Question ID : 264330152650
Option 1 ID : 264330598205
Option 2 ID : 264330598206
Option 3 ID : 264330598204
Option 4 ID : 264330598203
Status : Answered
Chosen Option : 2

Q.6 Select the INCORRECTLY spelt word.

- Ans** 1. Beginning
 2. Writting
 3. Argument
 4. Amateur

Question ID : 264330152646
Option 1 ID : 264330598189
Option 2 ID : 264330598187
Option 3 ID : 264330598190
Option 4 ID : 264330598188
Status : Answered
Chosen Option : 4

Q.7 Select the most appropriate meaning of the underlined idiom in the following sentence.

Tim joined the family business as he failed in his final degree examination. Seeing the growth of the family business now, it seems like Tim's earlier failure was a blessing in disguise.

- Ans
- 1. A difficult time
 - 2. A mistake
 - 3. Something good that isn't recognised at first
 - 4. A good decision

Question ID : 264330153047
Option 1 ID : 264330599756
Option 2 ID : 264330599755
Option 3 ID : 264330599757
Option 4 ID : 264330599758
Status : Answered
Chosen Option : 3

Q.8 The following sentence has been split into four segments. Identify the segment that contains a grammatical error and select the option which rectifies that error.

AI fiction is a constantly / evolving genre that gives us an peek / into the potential upsides and downsides / of intelligent machines.

- Ans
- 1. AI fiction is an constantly
 - 2. into a potential upside and downside
 - 3. evolving genre that gives us a peek
 - 4. of intelligent machine.

Question ID : 264330141341
Option 1 ID : 264330553701
Option 2 ID : 264330553702
Option 3 ID : 264330553699
Option 4 ID : 264330553700
Status : Answered
Chosen Option : 3

Q.9 Parts of the following sentence have been underlined and given as options. Select the option that contains an error.

If he will come early, we will leave on time.

- Ans
- 1. will come
 - 2. If he
 - 3. on time
 - 4. we will

Question ID : 264330144888
Option 1 ID : 264330567808
Option 2 ID : 264330567807
Option 3 ID : 264330567810
Option 4 ID : 264330567809
Status : Answered
Chosen Option : 1

Q.10 Select the most appropriate meaning of the underlined idiom in the following sentence.

I ordered a dozen doughnuts, but the kind baker gave me a baker's dozen.

- Ans
- 1. A group of 12 bakery items
 - 2. A group of 12 bakers
 - 3. A group of 13
 - 4. A group of 12

Question ID : 264330153076
Option 1 ID : 264330599869
Option 2 ID : 264330599870
Option 3 ID : 264330599867
Option 4 ID : 264330599868
Status : Answered
Chosen Option : 3

Q.11 Parts of the following sentence have been underlined and given as options. Select the option that contains an error.

They had two bedrooms among them, one for the girls and one for the boys.

- Ans
- 1. girls and one
 - 2. them, one for
 - 3. bedrooms among
 - 4. had two

Question ID : 264330153210
Option 1 ID : 264330600401
Option 2 ID : 264330600399
Option 3 ID : 264330600402
Option 4 ID : 264330600400
Status : Answered
Chosen Option : 1

Q.12 Select the INCORRECTLY spelt word.

- Ans
- 1. Adopt
 - 2. Advertisement
 - 3. Contantment
 - 4. Container

Question ID : 264330152945
Option 1 ID : 264330599360
Option 2 ID : 264330599359
Option 3 ID : 264330599361
Option 4 ID : 264330599362
Status : Answered
Chosen Option : 3

Q.13 Select the most appropriate ANTONYM of the given word.
Wisdom

- Ans 1. Stupidity
 2. Experience
 3. Modesty
 4. Intelligence

Question ID : 264330152657
Option 1 ID : 264330598232
Option 2 ID : 264330598233
Option 3 ID : 264330598234
Option 4 ID : 264330598231
Status : Answered
Chosen Option : 1

Q.14 Select the option that will improve the underlined part of the given sentence. In case no improvement is needed, select 'No improvement required'.
Jack being the wiser and bolder among the two of us, took the lead, carrying the axe on his shoulder.

- Ans 1. bolder between
 2. boldest among
 3. No improvement required
 4. boldest between

Question ID : 264330153199
Option 1 ID : 264330600356
Option 2 ID : 264330600355
Option 3 ID : 264330600358
Option 4 ID : 264330600357
Status : Answered
Chosen Option : 1

Q.15 Select the option that can be used as a one-word substitute for the underlined group of words.
Many people fought to put an end to slavery during the civil war.

- Ans 1. abolish
 2. absorb
 3. abide
 4. abduct

Question ID : 264330152705
Option 1 ID : 264330598421
Option 2 ID : 264330598419
Option 3 ID : 264330598422
Option 4 ID : 264330598420
Status : Answered
Chosen Option : 1

Q.16 Select the most appropriate ANTONYM of the word given in brackets to fill in the blank.

The doctor said that the patient named Rumi is in the _____ (initial) stage of lung cancer.

- Ans
- 1. terminal
 - 2. innermost
 - 3. early
 - 4. outermost

Question ID : 264330152695
Option 1 ID : 264330598386
Option 2 ID : 264330598383
Option 3 ID : 264330598384
Option 4 ID : 264330598385
Status : Answered
Chosen Option : 4

Q.17 Select the most appropriate option to fill in the blank.
He generally avoids arguments as he is _____ by nature.

- Ans
- 1. questionable
 - 2. reliable
 - 3. quick-minded
 - 4. peaceful

Question ID : 264330153549
Option 1 ID : 264330601697
Option 2 ID : 264330601698
Option 3 ID : 264330601695
Option 4 ID : 264330601696
Status : Answered
Chosen Option : 4

Q.18 Select the most appropriate option that can substitute the underlined segment in the given sentence. If there is no need to substitute it, select 'No substitution required'.
The pandemic has challenged education systems to ensure learning continuity, substantially increasing the demands placed on teachers.

- Ans
- 1. education systems to ensuring learning
 - 2. education systems for ensure learning
 - 3. education systems in ensure learning
 - 4. No substitution required

Question ID : 264330151901
Option 1 ID : 264330595219
Option 2 ID : 264330595221
Option 3 ID : 264330595220
Option 4 ID : 264330595222
Status : Answered
Chosen Option : 4

Q.19 Select the most appropriate idiom from the given options to fill in the blank.
We broke the traffic rules unknowingly while coming back from the party, now we have to _____ sooner or later.

- Ans
- 1. face the music
 - 2. look sharp
 - 3. cry for the moon
 - 4. bid defiance

Question ID : 264330152687
Option 1 ID : 264330598354
Option 2 ID : 264330598353
Option 3 ID : 264330598351
Option 4 ID : 264330598352
Status : Answered
Chosen Option : 1

Q.20 The following sentence has been split into four segments. Identify the segment that contains a grammatical error.

Guard over / making mistakes / by carefully checking / the assigned task.

- Ans
- 1. Guard over
 - 2. by carefully checking
 - 3. the assigned task
 - 4. making mistakes

Question ID : 264330155428
Option 1 ID : 264330609119
Option 2 ID : 264330609121
Option 3 ID : 264330609122
Option 4 ID : 264330609120
Status : Answered
Chosen Option : 2

Comprehension:

In the following passage some words have been deleted. Read the passage carefully and select the most appropriate option to fill in each blank.

_____ (1) university or college degree has long been the traditional hallmark of a _____ (2) candidate in the professional arena. While it historically provided the most widely accepted standard of qualification and skill for professionals, many companies today _____ (3) their hiring process and considering a broader list of criteria to judge a candidate's ability. Organisations are reducing their reliance on college degrees as a sole marker of competence and instead placing greater emphasis _____ (4) the practical skills candidates have acquired through work experience. This shift in hiring is of particular relevance to India, which has the _____ (5) youth population in the world.

SubQuestion No : 21

Q.21 Select the most appropriate option to fill in blank number 1.

- Ans
- 1. The
 - 2. That
 - 3. A
 - 4. An

Question ID : 264330152766
Option 1 ID : 264330598657
Option 2 ID : 264330598658
Option 3 ID : 264330598655
Option 4 ID : 264330598656
Status : Answered
Chosen Option : 1

Comprehension:

In the following passage some words have been deleted. Read the passage carefully and select the most appropriate option to fill in each blank.

_____ (1) university or college degree has long been the traditional hallmark of a
_____ (2) candidate in the professional arena. While it historically provided the most widely accepted standard of qualification and skill for professionals, many companies today
_____ (3) their hiring process and considering a broader list of criteria to judge a candidate's ability. Organisations are reducing their reliance on college degrees as a sole marker of competence and instead placing greater emphasis _____ (4) the practical skills candidates have acquired through work experience. This shift in hiring is of particular relevance to India, which has the _____ (5) youth population in the world.

SubQuestion No : 22

Q.22 Select the most appropriate option to fill in blank number 2.

- Ans 1. was qualify
 2. qualify
 3. qualification
 4. qualified

Question ID : 264330152767

Option 1 ID : 264330598662

Option 2 ID : 264330598660

Option 3 ID : 264330598661

Option 4 ID : 264330598659

Status : Answered

Chosen Option : 4

Comprehension:

In the following passage some words have been deleted. Read the passage carefully and select the most appropriate option to fill in each blank.

_____ (1) university or college degree has long been the traditional hallmark of a
_____ (2) candidate in the professional arena. While it historically provided the most widely accepted standard of qualification and skill for professionals, many companies today
_____ (3) their hiring process and considering a broader list of criteria to judge a candidate's ability. Organisations are reducing their reliance on college degrees as a sole marker of competence and instead placing greater emphasis _____ (4) the practical skills candidates have acquired through work experience. This shift in hiring is of particular relevance to India, which has the _____ (5) youth population in the world.

SubQuestion No : 23

Q.23 Select the most appropriate option to fill in blank number 3.

- Ans 1. was changed
 2. was changing
 3. changing
 4. are changing

Question ID : 264330152768

Option 1 ID : 264330598663

Option 2 ID : 264330598664

Option 3 ID : 264330598666

Option 4 ID : 264330598665

Status : Answered

Chosen Option : 4

Comprehension:

In the following passage some words have been deleted. Read the passage carefully and select the most appropriate option to fill in each blank.

_____ (1) university or college degree has long been the traditional hallmark of a _____ (2) candidate in the professional arena. While it historically provided the most widely accepted standard of qualification and skill for professionals, many companies today _____ (3) their hiring process and considering a broader list of criteria to judge a candidate's ability. Organisations are reducing their reliance on college degrees as a sole marker of competence and instead placing greater emphasis _____ (4) the practical skills candidates have acquired through work experience. This shift in hiring is of particular relevance to India, which has the _____ (5) youth population in the world.

SubQuestion No : 24

Q.24 Select the most appropriate option to fill in blank number 4.

Ans 1. about

2. for

3. with

4. on

Question ID : 264330152769

Option 1 ID : 264330598669

Option 2 ID : 264330598670

Option 3 ID : 264330598668

Option 4 ID : 264330598667

Status : Answered

Chosen Option : 4

Comprehension:

In the following passage some words have been deleted. Read the passage carefully and select the most appropriate option to fill in each blank.

_____ (1) university or college degree has long been the traditional hallmark of a _____ (2) candidate in the professional arena. While it historically provided the most widely accepted standard of qualification and skill for professionals, many companies today _____ (3) their hiring process and considering a broader list of criteria to judge a candidate's ability. Organisations are reducing their reliance on college degrees as a sole marker of competence and instead placing greater emphasis _____ (4) the practical skills candidates have acquired through work experience. This shift in hiring is of particular relevance to India, which has the _____ (5) youth population in the world.

SubQuestion No : 25

Q.25 Select the most appropriate option to fill in blank number 5.

Ans 1. largest

2. longest

3. biggest

4. most highest

Question ID : 264330152770

Option 1 ID : 264330598673

Option 2 ID : 264330598674

Option 3 ID : 264330598672

Option 4 ID : 264330598671

Status : Answered

Chosen Option : 1

Multi Tasking Non Technical Staff and Havaladar CBIC and CBN Examination 2023

Roll Number	
Candidate Name	
Venue Name	R K Digital Computer Centre 1
Exam Date	04/09/2023
Exam Time	12:30 PM - 2:30 PM
Subject	MTS Non Tech Havaladar CBIC and CBN Examination 2023

Section : Numerical and Mathematical Ability

Q.1 A sum invested at the rate of 6% simple interest per annum grows to ₹1,13,880 in 5 years. What is the simple interest, if the same amount is invested for 8 years at the rate of 9% per annum?

- Ans** ✓ 1. ₹63,072
✗ 2. ₹60,565
✗ 3. ₹65,392
✗ 4. ₹58,050

Question ID : 264330158753

Option 1 ID : 264330622371

Option 2 ID : 264330622374

Option 3 ID : 264330622373

Option 4 ID : 264330622372

Status : Answered

Chosen Option : 1

Q.2 Find the compound interest (Compounded annually) on ₹2,000 for $2\frac{1}{2}$ years at 10% per annum.

- Ans** ✗ 1. ₹ 561
✗ 2. ₹ 500
✗ 3. ₹ 521
✓ 4. ₹ 541

Question ID : 264330156078

Option 1 ID : 264330611711

Option 2 ID : 264330611713

Option 3 ID : 264330611714

Option 4 ID : 264330611712

Status : Answered

Chosen Option : 3

Q.3 Study the given table and answer the question that follows.
The table shows the number of voters in four different villages P, Q, R, S.

Villages	Total number of registered voters	Percentage of people who voted (Out of the total number of registered voters)
P	1100	68
Q	1450	62
R	1200	73
S	1124	87

The number of people who did not vote in village P is what percentage more than that who did not vote in village R?

- Ans
- 1. $6\frac{52}{81}\%$
 - 2. $8\frac{52}{81}\%$
 - 3. $7\frac{52}{81}\%$
 - 4. $9\frac{52}{81}\%$

Question ID : 264330157907
Option 1 ID : 264330618987
Option 2 ID : 264330618989
Option 3 ID : 264330618988
Option 4 ID : 264330618990

Status : Answered

Chosen Option : 3

Q.4 Find the total surface area of a cuboid whose dimensions are 18 m, 6 m and 3 m.

- Ans
- 1. 90 m^2
 - 2. 180 m^2
 - 3. 324 m^2
 - 4. 360 m^2

Question ID : 264330153898
Option 1 ID : 264330603056
Option 2 ID : 264330603055
Option 3 ID : 264330603058
Option 4 ID : 264330603057

Status : Answered

Chosen Option : 4

Q.5 Yug covers a certain distance with a speed of 56 km/h in $\frac{3}{2}$ hours. If he wants to cover the same distance in 7 hours, what would be his speed (in km/h)?

- Ans**
- 1. 16
 - 2. 20
 - 3. 14
 - 4. 12

Question ID : 264330155752
Option 1 ID : 264330610413
Option 2 ID : 264330610414
Option 3 ID : 264330610412
Option 4 ID : 264330610411
Status : Answered
Chosen Option : 4

Q.6 Vikram saves 13% of his monthly salary. If his monthly expenditure is ₹5,220, then his monthly savings is:

- Ans**
- 1. ₹680
 - 2. ₹580
 - 3. ₹349
 - 4. ₹780

Question ID : 264330156430
Option 1 ID : 264330613112
Option 2 ID : 264330613114
Option 3 ID : 264330613111
Option 4 ID : 264330613113
Status : Answered
Chosen Option : 4

Q.7 20 men can complete a piece of work in 40 days, and 40 women can do the same work in 60 days. If 10 men and 20 women work together, then in how many days will the work be completed?

- Ans**
- 1. 60
 - 2. 50
 - 3. 48
 - 4. 40

Question ID : 264330156012
Option 1 ID : 264330611447
Option 2 ID : 264330611450
Option 3 ID : 264330611449
Option 4 ID : 264330611448
Status : Answered
Chosen Option : 3

Q.8 A grocery seller mixes two varieties of tea costing ₹300 per kg and ₹160 per kg in such a ratio that by selling this mixture at the rate of ₹187 per kg the shopkeeper earns 10% profit. In what respective ratio does the grocery seller mix the two varieties of tea?

- Ans**
- 1. 2 : 13
 - 2. 13 : 3
 - 3. 13 : 2
 - 4. 1 : 13

Question ID : 264330154118

Option 1 ID : 264330603936

Option 2 ID : 264330603937

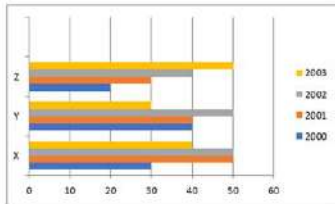
Option 3 ID : 264330603935

Option 4 ID : 264330603938

Status : Answered

Chosen Option : 1

Q.9 The following bar graph indicates the production of cement by 3 companies X, Y and Z during the years 2000 - 2003. The quantity is in lakh bags. Study the bar graph carefully and answer the question.



What is the ratio of the average production of company X during the period 2000 – 2003 to the production of company Y during the same period (in lakh bags).

- Ans**
- 1. 17 : 16
 - 2. 8 : 7
 - 3. 12 : 17
 - 4. 10 : 7

Question ID : 264330153858

Option 1 ID : 264330602897

Option 2 ID : 264330602895

Option 3 ID : 264330602898

Option 4 ID : 264330602896

Status : Answered

Chosen Option : 3

Q.10 The least common multiple (LCM) of p and q is r . The LCM of p^2q and pq^2 is _____.

- Ans**
- 1. pqr^3
 - 2. pqr
 - 3. pq
 - 4. pqr^2

Question ID : 264330156247

Option 1 ID : 264330612390

Option 2 ID : 264330612388

Option 3 ID : 264330612387

Option 4 ID : 264330612389

Status : Answered

Chosen Option : 2

Q.11 Two trains started from a station, at the same time in the same direction, at speeds of 90 km/h and 80 km/h. What will be the distance between the two trains after 5 hours?

- Ans**
- 1. 55 km
 - 2. 50 km
 - 3. 45 km
 - 4. 40 km

Question ID : 264330155971
Option 1 ID : 264330611285
Option 2 ID : 264330611283
Option 3 ID : 264330611286
Option 4 ID : 264330611284
Status : Answered
Chosen Option : 2

Q.12 A solid piece of metal, cuboidal in shape, with dimensions 12 cm, 9 cm and 2 cm is recast into a cube. What is the lateral surface area (in cm^2) of the cube?

- Ans**
- 1. 144
 - 2. 216
 - 3. 204
 - 4. 162

Question ID : 264330153793
Option 1 ID : 264330602636
Option 2 ID : 264330602635
Option 3 ID : 264330602638
Option 4 ID : 264330602637
Status : Answered
Chosen Option : 1

Q.13 A person buys a table fan for ₹2,800 and sells it at a loss of 12%. What is the selling price of the table fan?

- Ans**
- 1. ₹2,466
 - 2. ₹2,468
 - 3. ₹2,462
 - 4. ₹2,464

Question ID : 264330156220
Option 1 ID : 264330612281
Option 2 ID : 264330612282
Option 3 ID : 264330612279
Option 4 ID : 264330612280
Status : Answered
Chosen Option : 4

Q.14 If $A : B = 7 : 9$ and $B : C = 5 : 6$, Find the ratio of C and A respectively.

- Ans
- 1. 15 : 14
 - 2. 14 : 15
 - 3. 54 : 35
 - 4. 35 : 54

Question ID : 264330153767
Option 1 ID : 264330602534
Option 2 ID : 264330602533
Option 3 ID : 264330602532
Option 4 ID : 264330602531
Status : Answered
Chosen Option : 4

Q.15 The average weight of 17 men is 63 kg and the average weight of 36 women is 54 kg. What is the average weight (in kg) of all the men and women together? (Rounded off to the nearest integer)

- Ans
- 1. 59
 - 2. 62
 - 3. 57
 - 4. 52

Question ID : 264330155727
Option 1 ID : 264330610312
Option 2 ID : 264330610311
Option 3 ID : 264330610313
Option 4 ID : 264330610314
Status : Answered
Chosen Option : 1

Q.16 A vessel contains liquid A and liquid B in the ratio 4 : 9. If 8 litres of liquid A is added to the vessel, the new ratio becomes 8 : 9. Find the quantity of liquid A (in litres) in the original mixture.

- Ans
- 1. 12
 - 2. 9
 - 3. 8
 - 4. 6

Question ID : 264330155729
Option 1 ID : 264330610319
Option 2 ID : 264330610320
Option 3 ID : 264330610321
Option 4 ID : 264330610322
Status : Answered
Chosen Option : 3

Q.17 Which of the following expressions has value equal to 0?

Ans

✗ 1. $(2 \times 3 + 5 - (1 - 2(3 - 2 \times 2)))$

✗ 2. $(2 \times 3 - 5 - (1 + 2(3 - 2 \times 2)))$

✓ 3. $(2 \times 3 - 5 + (1 + 2(3 - 2 \times 2)))$

✗ 4. $(2 \times 3 - 5 - (1 - 2(3 - 2 \times 2)))$

Question ID : 264330153796

Option 1 ID : 264330602650

Option 2 ID : 264330602648

Option 3 ID : 264330602649

Option 4 ID : 264330602647

Status : Answered

Chosen Option : 3

Q.18 Two numbers are in the ratio of 6 : 7. If the difference between these numbers is 16, then find the numbers.

Ans

✓ 1. 96, 112

✗ 2. 80, 96

✗ 3. 120, 136

✗ 4. 104, 120

Question ID : 264330153876

Option 1 ID : 264330602967

Option 2 ID : 264330602969

Option 3 ID : 264330602968

Option 4 ID : 264330602970

Status : Answered

Chosen Option : 1

Q.19 A, B and C can complete a work in 10, 15 and 20 days, respectively. They work on alternate days such that 1st day A, 2nd day B and 3rd day C. Again 4th day A, 5th day B and so on. If they work in the same way, in how many days will the work be completed?

Ans

✗ 1. $13 \frac{1}{4}$

✗ 2. 15

✗ 3. 14

✓ 4. $13 \frac{1}{2}$

Question ID : 264330154060

Option 1 ID : 264330603704

Option 2 ID : 264330603705

Option 3 ID : 264330603703

Option 4 ID : 264330603706

Status : Answered

Chosen Option : 4

Q.20 A grocer purchased 50 kg of sugar at ₹40 per kg and mixed with 70 kg of sugar at ₹30 per kg. At what rate should he sell the mixture (per kg) to gain 20%?

- Ans**
- 1. ₹60
 - 2. ₹20
 - 3. ₹35
 - 4. ₹41

Question ID : 264330155997
Option 1 ID : 264330611387
Option 2 ID : 264330611389
Option 3 ID : 264330611388
Option 4 ID : 264330611390
Status : Answered
Chosen Option : 4

Section : Reasoning Ability and Problem Solving

Q.1 2 is related to 40 following a certain logic. Following the same logic, 5 is related to 250. To which of the following is 7 related to, following the same logic?

- Ans**
- 1. 470
 - 2. 490
 - 3. 450
 - 4. 400

Question ID : 264330151579
Option 1 ID : 264330593945
Option 2 ID : 264330593946
Option 3 ID : 264330593944
Option 4 ID : 264330593943
Status : Answered
Chosen Option : 2

Q.2 Select the combination of letters that when sequentially placed in the blanks of the given series, will complete the series.

R _ _ RT _ R _ R _ TR

- Ans**
- 1. RTRRT
 - 2. TTTRR
 - 3. TRRTR
 - 4. RTTTR

Question ID : 264330151641
Option 1 ID : 264330594194
Option 2 ID : 264330594191
Option 3 ID : 264330594193
Option 4 ID : 264330594192
Status : Answered
Chosen Option : 3

Q.3 J, K, P, Q, R and M are sitting around a circular table facing the centre.
J is sitting to the immediate left of M. R is sitting 2nd to the left of J. K is sitting 3rd to the right of J. P sits to the immediate right of R.
Who sits 2nd to the left of K?

- Ans**
- 1. R
 - 2. Q
 - 3. M
 - 4. P

Question ID : 264330155651
Option 1 ID : 264330610007
Option 2 ID : 264330610010
Option 3 ID : 264330610009
Option 4 ID : 264330610008
Status : Answered
Chosen Option : 3

Q.4 What should come in place of '?' in the given series?

3 20 54 ? 258 530 1074

- Ans**
- 1. 122
 - 2. 128
 - 3. 118
 - 4. 124

Question ID : 264330151499
Option 1 ID : 264330593624
Option 2 ID : 264330593626
Option 3 ID : 264330593623
Option 4 ID : 264330593625
Status : Answered
Chosen Option : 1

Q.5 Read the given statements and conclusions carefully. You have to take the given statements to be true even if they seem to be at variance from commonly known facts. You have to decide which conclusion/s logically follow/s from the given statements.

Statements: All crows are sparrows. Some sparrows are parrots. All parrots are yellow.

Conclusion I: Some crows are parrots.

Conclusion II: Some yellow are parrots.

- Ans**
- 1. Only conclusion (II) is follow.
 - 2. Both conclusions (I) and (II) are follow.
 - 3. Only conclusion (I) is follow.
 - 4. Neither conclusion (I) nor (II) is follow.

Question ID : 264330155929
Option 1 ID : 264330611120
Option 2 ID : 264330611122
Option 3 ID : 264330611119
Option 4 ID : 264330611121
Status : Answered
Chosen Option : 1

Q.6 The position of how many letters will remain unchanged if each of the letter in the word 'CATEGORY' is arranged in alphabetical order?

- Ans**
- 1. Three
 - 2. Two
 - 3. None
 - 4. One

Question ID : 264330154327
Option 1 ID : 264330604774
Option 2 ID : 264330604771
Option 3 ID : 264330604773
Option 4 ID : 264330604772
Status : Answered
Chosen Option : 4

Q.7 What should come in place of ? in the given series?

978 967 956 945 934 ?

- Ans**
- 1. 922
 - 2. 923
 - 3. 921
 - 4. 924

Question ID : 264330151553
Option 1 ID : 264330593840
Option 2 ID : 264330593841
Option 3 ID : 264330593839
Option 4 ID : 264330593842
Status : Answered
Chosen Option : 2

Q.8 What should come in place of ? in the given series based on the English alphabetical order?

ETM, AWO, WZQ, SCS, ?

- Ans**
- 1. MEU
 - 2. NFV
 - 3. OFU
 - 4. MEV

Question ID : 264330155807
Option 1 ID : 264330610632
Option 2 ID : 264330610631
Option 3 ID : 264330610634
Option 4 ID : 264330610633
Status : Answered
Chosen Option : 3

Q.9 In a certain code language, 'YJM' is coded as '26-11-14' and 'SOP' is coded as '20-16-17'. What is the code for 'BTX' in the given code language?

- Ans**
- ✓ 1. 3-21-25
 - ✗ 2. 5-22-24
 - ✗ 3. 5-23-25
 - ✗ 4. 4-22-24

Question ID : 264330155822
Option 1 ID : 264330610691
Option 2 ID : 264330610694
Option 3 ID : 264330610693
Option 4 ID : 264330610692
Status : Answered
Chosen Option : 1

Q.10 If G means '-', D means '×', A means '+', B means '÷', then what will come in place of the question mark (?) in the following equation?

$$19 \text{ D } 6 \text{ B } 34 \text{ A } 2 \text{ G } 27 = ?$$

- Ans**
- ✗ 1. 126
 - ✓ 2. 104
 - ✗ 3. 65
 - ✗ 4. 83

Question ID : 264330154688
Option 1 ID : 264330606218
Option 2 ID : 264330606217
Option 3 ID : 264330606216
Option 4 ID : 264330606215
Status : Answered
Chosen Option : 2

Q.11 In a certain code language, 'LIAR' is coded as '5148' and 'REAL' is coded as '1582'. What is the code for 'E' in the given code language?

- Ans**
- ✗ 1. 5
 - ✗ 2. 8
 - ✓ 3. 2
 - ✗ 4. 1

Question ID : 264330151702
Option 1 ID : 264330594437
Option 2 ID : 264330594436
Option 3 ID : 264330594438
Option 4 ID : 264330594435
Status : Answered
Chosen Option : 3

Q.12 Select the combination of letters that when sequentially placed in the blanks of the given series will make it logically complete.

KC_OK_PO_YSOKWV_ K_YO

- Ans**
- 1. MDHTV
 - 2. LJMST
 - 3. KJNVL
 - 4. MAKOU

Question ID : 264330156319

Option 1 ID : 264330612676

Option 2 ID : 264330612677

Option 3 ID : 264330612675

Option 4 ID : 264330612678

Status : Answered

Chosen Option : 2

Q.13 In the following number-pairs, the second number is obtained by applying certain mathematical operations to the first number. Select the set in which the numbers are related in the same way as are the numbers of the following sets.

(NOTE: Operations should be performed on the whole numbers, without breaking down the numbers into its constituent digits. E.g. 13 – Operations on 13 such as adding / subtracting / multiplying etc. to 13 can be performed.

Breaking down 13 into 1 and 3 and then performing mathematical operations on 1 and 3 is not allowed)

65, 74

87, 96

- Ans**
- 1. 75, 123
 - 2. 63, 157
 - 3. 81, 156
 - 4. 92, 101

Question ID : 264330151622

Option 1 ID : 264330594117

Option 2 ID : 264330594118

Option 3 ID : 264330594116

Option 4 ID : 264330594115

Status : Answered

Chosen Option : 4

Q.14 What should come in place of '?' in the given series?

13 52 169 520 1573 ?

- Ans**
- 1. 4781
 - 2. 4732
 - 3. 4895
 - 4. 4863

Question ID : 264330151477

Option 1 ID : 264330593536

Option 2 ID : 264330593535

Option 3 ID : 264330593538

Option 4 ID : 264330593537

Status : Answered

Chosen Option : 2

Q.15 Which figure should replace the question mark (?) if the following figure series were to be continued?

P	E	8	↑	8	3	3	8	↑	E	↑	□	?
	□		P		□				3			
↑	A	3	□	E	A	E	A	□	8	A		

Ans

✗ 1.

□	↑	E
	□	
8	A	3

✓ 2.

□	↑	E
	L	
8	A	□

✗ 3.

□	E	↑
	□	
8	A	3

✗ 4.

□	E	↑
	L	
8	A	□

Question ID : 264330154734

Option 1 ID : 264330606400

Option 2 ID : 264330606402

Option 3 ID : 264330606401

Option 4 ID : 264330606399

Status : Answered

Chosen Option : 2

Q.16 उस शब्द-युग्म का चयन कीजिए जो नीचे दिए गए शब्दों के युग्म में व्यक्त किए गए समान संबंध का सबसे अच्छा निरूपण करता है।

(शब्दों को अर्थपूर्ण हिंदी शब्दों के रूप में माना जाना चाहिए और उन्हें शब्द में अक्षरों की संख्या/व्यंजन/स्वरों की संख्या के आधार पर एक दूसरे से संबंधित नहीं किया जाना चाहिए।)

सराहना : प्रशंसा करना

Ans

- ✓ 1. दावत देना : खातिर करना
- ✗ 2. रिझाना : ठुकरा देना
- ✗ 3. सुंदर बनाना : तरोताज़ा करना
- ✗ 4. सिखाना : सीखना

Question ID : 264330154640

Option 1 ID : 264330606023

Option 2 ID : 264330606026

Option 3 ID : 264330606025

Option 4 ID : 264330606024

Status : Answered

Chosen Option : 1

Q.17 Read the given statement(s) and conclusions carefully. Assuming that the information given in the statements is true, even if it appears to be at variance with commonly known facts, decide which of the given conclusions logically follow(s) from the statement(s).

Statements: All the actors are girls. All the girls are beautiful.

Conclusions:

(I) All the actors are beautiful.

(II) Some girls are actors.

Ans

- ✓ 1. Both conclusions (I) and (II) are follows.
- ✗ 2. Only conclusion (II) is follows.
- ✗ 3. Only conclusion (I) is follows.
- ✗ 4. Neither conclusion (I) nor (II) is follows.

Question ID : 264330154431

Option 1 ID : 264330605190

Option 2 ID : 264330605188

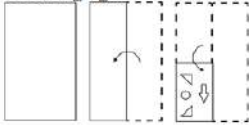
Option 3 ID : 264330605187

Option 4 ID : 264330605189

Status : Answered

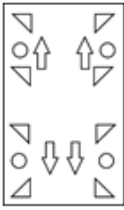
Chosen Option : 1

Q.18 The sequence of folding a piece of paper and the manner in which the folded paper is cut is shown in the following figures. How would this paper look when unfolded?

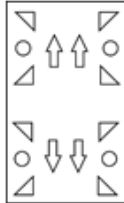


Ans

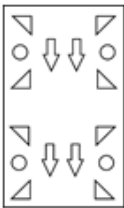
✗ 1.



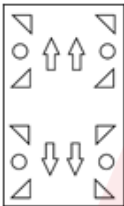
✓ 2.



✗ 3.



✗ 4.



Question ID : 264330155613

Option 1 ID : 264330609857

Option 2 ID : 264330609858

Option 3 ID : 264330609855

Option 4 ID : 264330609856

Status : Answered

Chosen Option : 2

Q.19 What will come in place of '?' in the following equation, if '+' and '×' are interchanged and '-1' and '+1' are interchanged?

$$18 - 9 + 4 \times 3 + 5 = ?$$

Ans ✗ 1. 17

✓ 2. 13

✗ 3. 18

✗ 4. 19

Question ID : 264330154670

Option 1 ID : 264330606145

Option 2 ID : 264330606143

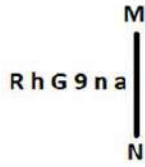
Option 3 ID : 264330606144

Option 4 ID : 264330606146

Status : Answered

Chosen Option : 2

Q.20 Select the correct mirror image of the given figure when the mirror is placed at MN as shown below.



- Ans
- 1. R h G 9 n a
 - 2. a n e 9 G h R
 - 3. a n e 9 h R
 - 4. R h e n a

Question ID : 264330151512

Option 1 ID : 264330593676

Option 2 ID : 264330593675

Option 3 ID : 264330593677

Option 4 ID : 264330593678

Status : Answered

Chosen Option : 3

Section : General Awareness

Q.1 The Gua and Noamundi mines are located in with state of India?

- Ans
- 1. Assam
 - 2. Haryana
 - 3. Rajasthan
 - 4. Jharkhand

Question ID : 264330161527

Option 1 ID : 264330633435

Option 2 ID : 264330633438

Option 3 ID : 264330633437

Option 4 ID : 264330633436

Status : Answered

Chosen Option : 4

Q.2 What is a fiscal year?

- Ans
- 1. A year that represents the financial reporting period for the government
 - 2. A year with a surplus in government revenue
 - 3. A year with a deficit in government revenue
 - 4. A year in which tax rates are increased

Question ID : 264330157272

Option 1 ID : 264330616454

Option 2 ID : 264330616451

Option 3 ID : 264330616452

Option 4 ID : 264330616453

Status : Answered

Chosen Option : 1

Q.3 The Constitution (Scheduled Castes and Scheduled Tribes) Order (Second Amendment) Bill, 2022, was passed in December 2022 and is related to which state?

- Ans
- 1. Bihar
 - 2. Uttarakhand
 - 3. Uttar Pradesh
 - 4. Karnataka

Question ID : 264330158334
Option 1 ID : 264330620698
Option 2 ID : 264330620696
Option 3 ID : 264330620695
Option 4 ID : 264330620697
Status : Not Answered
Chosen Option : --

Q.4 Identify the Kuchipudi dancer from following, who was awarded with 'Padma Shri' in the year 2022.

- Ans
- 1. Vidyanand Sarek
 - 2. Padmaja Reddy
 - 3. Dr. Veeraswamy Seshiah
 - 4. KV Rabiya

Question ID : 264330155528
Option 1 ID : 264330609516
Option 2 ID : 264330609517
Option 3 ID : 264330609515
Option 4 ID : 264330609518
Status : Answered
Chosen Option : 2

Q.5 Buddha Purnima is marked on a full moon day in the Hindu month of _____.

- Ans
- 1. Vaisakh
 - 2. Jyaistha
 - 3. Bhadra
 - 4. Ashadha

Question ID : 264330160830
Option 1 ID : 264330630651
Option 2 ID : 264330630652
Option 3 ID : 264330630654
Option 4 ID : 264330630653
Status : Not Answered
Chosen Option : --

Q.6 Which of the following is the official language of Afghanistan?

- Ans
- 1. Sinhala
 - 2. Burmese
 - 3. Dari
 - 4. Dzongkha

Question ID : 264330160175
Option 1 ID : 264330628040
Option 2 ID : 264330628042
Option 3 ID : 264330628039
Option 4 ID : 264330628041
Status : Answered
Chosen Option : 3

Q.7 Who started the temple entry movement in 1927?

- Ans
- 1. Mahadev Govind Ranade
 - 2. Bhimrao Ambedkar
 - 3. Mahatma Gandhi
 - 4. Annie Besant

Question ID : 264330162350
Option 1 ID : 264330636729
Option 2 ID : 264330636728
Option 3 ID : 264330636727
Option 4 ID : 264330636730
Status : Answered
Chosen Option : 2

Q.8 In which state is Gobind Sagar (Bhakra Nangal Project) located?

- Ans
- 1. Himachal Pradesh
 - 2. Gujarat
 - 3. Rajasthan
 - 4. Punjab

Question ID : 264330160140
Option 1 ID : 264330627900
Option 2 ID : 264330627902
Option 3 ID : 264330627901
Option 4 ID : 264330627899
Status : Answered
Chosen Option : 1

Q.9 Pandit Ravi Shankar is known worldwide for playing which of the following musical instruments?

- Ans
- 1. Mohan Veena
 - 2. Sarod
 - 3. Been
 - 4. Sitar

Question ID : 264330161771
Option 1 ID : 264330634414
Option 2 ID : 264330634413
Option 3 ID : 264330634411
Option 4 ID : 264330634412
Status : Answered
Chosen Option : 4

Q.10 The Arabian Sea is an extension of which of the following oceans?

- Ans
- 1. Pacific Ocean
 - 2. Southern Ocean
 - 3. Arctic Ocean
 - 4. Indian ocean

Question ID : 264330157836
Option 1 ID : 264330618703
Option 2 ID : 264330618706
Option 3 ID : 264330618705
Option 4 ID : 264330618704
Status : Answered
Chosen Option : 4

Q.11 Which of the following is a dimension of microfinance institutions (MFIs) in India?

- Ans 1. Outreach to rural areas
 2. Loan interest rates
 3. Investment in the stock market
 4. Availability of credit cards

Question ID : 264330157292
Option 1 ID : 264330616534
Option 2 ID : 264330616531
Option 3 ID : 264330616533
Option 4 ID : 264330616532
Status : Answered
Chosen Option : 2

Q.12 Shambhu Maharaj was a renowned guru of which of the following Gharanas of Kathak?

- Ans 1. Lucknow
 2. Jaipur
 3. Raigarh
 4. Banaras

Question ID : 264330160810
Option 1 ID : 264330630572
Option 2 ID : 264330630571
Option 3 ID : 264330630574
Option 4 ID : 264330630573
Status : Answered
Chosen Option : 1

Q.13 Which is the oldest Stupa of the Buddhist Period?

- Ans 1. Dhamek Stupa
 2. Mahabodhi Stupa
 3. Kesariya Stupa
 4. Sanchi Stupa

Question ID : 264330160761
Option 1 ID : 264330630378
Option 2 ID : 264330630375
Option 3 ID : 264330630376
Option 4 ID : 264330630377
Status : Not Answered
Chosen Option : --

Q.14 Who conducts elections for both the houses of Parliament in India?

- Ans 1. Ministry of Parliamentary Affairs
 2. Election Commission
 3. President
 4. Prime Minister

Question ID : 264330160860
Option 1 ID : 264330630773
Option 2 ID : 264330630771
Option 3 ID : 264330630774
Option 4 ID : 264330630772
Status : Answered
Chosen Option : 2

Q.15 The third battle of Panipat was fought in which of the following years?

- Ans 1. 1761
 2. 1707
 3. 1786
 4. 1751

Question ID : 264330161734
Option 1 ID : 264330634264
Option 2 ID : 264330634263
Option 3 ID : 264330634266
Option 4 ID : 264330634265
Status : Answered
Chosen Option : 1

Q.16 'Untouchable' is a novel written by:

- Ans 1. Mulk Raj Anand
 2. RC Majumdar
 3. Premchand
 4. Bankim Chandra Chattopadhyay

Question ID : 264330155498
Option 1 ID : 264330609395
Option 2 ID : 264330609396
Option 3 ID : 264330609398
Option 4 ID : 264330609397
Status : Answered
Chosen Option : 2

Q.17 Which dance form is associated with Natwari Dance?

- Ans 1. Kathak
 2. Kuchipudi
 3. Odissi
 4. Kathakali

Question ID : 264330159053
Option 1 ID : 264330623572
Option 2 ID : 264330623574
Option 3 ID : 264330623571
Option 4 ID : 264330623573
Status : Not Answered
Chosen Option : --

Q.18 Birsa Munda hockey stadium is one of the India's largest hockey stadium. In which state is this stadium situated?

- Ans 1. Madhya Pradesh
 2. Bihar
 3. Odisha
 4. Chhattisgarh

Question ID : 264330158355
Option 1 ID : 264330620781
Option 2 ID : 264330620779
Option 3 ID : 264330620782
Option 4 ID : 264330620780
Status : Answered
Chosen Option : 3

Q.19 The directive principles are largely classified into three broad categories. Which of the following is NOT the part of this classification?

- Ans
- 1. Liberal
 - 2. Socialistic
 - 3. Gandhian
 - 4. Authoritative

Question ID : 264330160859
Option 1 ID : 264330630769
Option 2 ID : 264330630767
Option 3 ID : 264330630768
Option 4 ID : 264330630770
Status : Answered
Chosen Option : 4

Q.20 Which of the following countries did India defeat to clinch its maiden Women's Junior Hockey Asia Cup title?

- Ans
- 1. Japan
 - 2. Chinese Taipei
 - 3. Malaysia
 - 4. South Korea

Question ID : 264330161129
Option 1 ID : 264330631848
Option 2 ID : 264330631850
Option 3 ID : 264330631849
Option 4 ID : 264330631847
Status : Answered
Chosen Option : 2

Q.21 Who among the following is the author of the book 'Sita: An Illustrated Retelling of the Ramayana'?

- Ans
- 1. Ravinder Singh
 - 2. Devdutt Pattanaik
 - 3. Amish Tripathi
 - 4. Durjoy Datta

Question ID : 264330155457
Option 1 ID : 264330609234
Option 2 ID : 264330609233
Option 3 ID : 264330609231
Option 4 ID : 264330609232
Status : Not Answered
Chosen Option : --

Q.22 Which soft metal in group 1 of the periodic table tarnishes within a few seconds of exposure to air?

- Ans 1. Barium
 2. Sodium
 3. Strontium
 4. Francium

Question ID : 264330161054
Option 1 ID : 264330631548
Option 2 ID : 264330631549
Option 3 ID : 264330631547
Option 4 ID : 264330631550
Status : Answered
Chosen Option : 1

Q.23 The 'Ka Shad Mastieh' or victory dance of the _____ tribe of Meghalaya is an ancient war dance performed during the prominent festival of the tribe.

- Ans 1. Bhoi
 2. War
 3. Khasi
 4. Jaintia

Question ID : 264330161345
Option 1 ID : 264330632709
Option 2 ID : 264330632710
Option 3 ID : 264330632708
Option 4 ID : 264330632707
Status : Answered
Chosen Option : 3

Q.24 What is the weight of the ball in handball for men?

- Ans 1. 425 to 475 gm
 2. 325 to 375 gm
 3. 525 to 575 gm
 4. 225 to 275 gm

Question ID : 264330158248
Option 1 ID : 264330620353
Option 2 ID : 264330620351
Option 3 ID : 264330620354
Option 4 ID : 264330620352
Status : Not Answered
Chosen Option : --

Q.25 Which vitamin is needed for a healthy immune system, low-light vision, and healthy skin?

- Ans 1. Vitamin K
 2. Vitamin B2
 3. Vitamin B9
 4. Vitamin A

Question ID : 264330160991
Option 1 ID : 264330631296
Option 2 ID : 264330631298
Option 3 ID : 264330631297
Option 4 ID : 264330631295
Status : Answered
Chosen Option : 4

Section : English Language and Comprehension

Q.1 Select the option that can be used as a one-word substitute for the given group of words.

Study of sound and sound waves

- Ans 1. Botany
 2. Physics
 3. Demography
 4. Acoustics

Question ID : 264330152772
Option 1 ID : 264330598679
Option 2 ID : 264330598681
Option 3 ID : 264330598680
Option 4 ID : 264330598682
Status : Answered
Chosen Option : 4

Q.2 Select the most appropriate option to fill in the blank.

The students of class 7 gave their teacher a gift, which was _____ to her.

- Ans 1. revealing
 2. shocking
 3. confusing
 4. surprising

Question ID : 264330152580
Option 1 ID : 264330597923
Option 2 ID : 264330597925
Option 3 ID : 264330597926
Option 4 ID : 264330597924
Status : Answered
Chosen Option : 4

Q.3 Select the most appropriate synonym of the given word.
Obsession

- Ans** 1. Discrimination
 2. Fascination
 3. Unconcern
 4. Sympathy

Question ID : 264330153559
Option 1 ID : 264330601736
Option 2 ID : 264330601737
Option 3 ID : 264330601735
Option 4 ID : 264330601738
Status : Answered
Chosen Option : 2

Q.4 The following sentence has been split into four segments. Identify the segment that contains a grammatical error and select the option which rectifies that error.

A lot of adulterants / are chemicals that can lead / to an range of health problems / in both children and adults.

- Ans** 1. to a range of health problems
 2. are chemical that can lead
 3. A lot of adulterant
 4. in both children and adult.

Question ID : 264330141340
Option 1 ID : 264330553696
Option 2 ID : 264330553695
Option 3 ID : 264330553697
Option 4 ID : 264330553698
Status : Answered
Chosen Option : 1

Q.5 Select the most appropriate option that can substitute the underlined segment in the given sentence.

They would find someone drive the wagon back across the desert.

- Ans** 1. in drive in the
 2. to drive
 3. to drive the
 4. in driving

Question ID : 264330153482
Option 1 ID : 264330601446
Option 2 ID : 264330601445
Option 3 ID : 264330601443
Option 4 ID : 264330601444
Status : Answered
Chosen Option : 3

Q.6 The following sentence has been split into four segments. Identify the segment that contains a grammatical error.

The ball / I kicked / went highly / in the sky.

- Ans
- 1. The ball
 - 2. went highly
 - 3. in the sky
 - 4. I kicked

Question ID : 264330153184
Option 1 ID : 264330600295
Option 2 ID : 264330600297
Option 3 ID : 264330600298
Option 4 ID : 264330600296
Status : Answered
Chosen Option : 2

Q.7 Select the most appropriate idiom to fill in the blank.

Rajat is known for his notorious nature. He will be friendly to your face but likes

_____.

- Ans
- 1. to blow his trumpet
 - 2. to stab you in the back
 - 3. to paint the whole town red
 - 4. to get all bent out of the shape

Question ID : 264330153562
Option 1 ID : 264330601750
Option 2 ID : 264330601748
Option 3 ID : 264330601749
Option 4 ID : 264330601747
Status : Answered
Chosen Option : 2

Q.8 Select the most appropriate meaning of the given idiom.

Barking up the wrong tree

- Ans
- 1. Provoke trouble
 - 2. To make a bad situation worse
 - 3. Getting a good start is important
 - 4. To be mistaken, to be looking for solutions in the wrong place

Question ID : 264330153280
Option 1 ID : 264330600677
Option 2 ID : 264330600676
Option 3 ID : 264330600678
Option 4 ID : 264330600675
Status : Answered
Chosen Option : 4

Q.9 Select the option that can be used as a one-word substitute for the given group of words.

A creature which depends on others

- Ans
- 1. Microbes
 - 2. Virus
 - 3. Parasite
 - 4. Bacteria

Question ID : 264330152586

Option 1 ID : 264330597949

Option 2 ID : 264330597947

Option 3 ID : 264330597950

Option 4 ID : 264330597948

Status : Answered

Chosen Option : 3

Q.10 Select the most appropriate idiom to fill in the blank.
The play I saw last night was a _____.

- Ans
- 1. hit the road
 - 2. hit the hay
 - 3. smash hit
 - 4. hit the roof

Question ID : 264330153099

Option 1 ID : 264330599962

Option 2 ID : 264330599959

Option 3 ID : 264330599960

Option 4 ID : 264330599961

Status : Answered

Chosen Option : 3

Q.11 Select the most appropriate option to fill in the blank.
He is _____ of many chain snatching cases in Dariyaganj.

- Ans
- 1. ackused
 - 2. acxused
 - 3. akused
 - 4. accused

Question ID : 264330153306

Option 1 ID : 264330600781

Option 2 ID : 264330600780

Option 3 ID : 264330600779

Option 4 ID : 264330600782

Status : Answered

Chosen Option : 4

Q.12 The following sentence has been split into four segments. Identify the segment that contains a grammatical error.
Despite the setbacks and obstacles we faced, / our team rallied together and achieved our goals, / which teach us the importance of / teamwork, resilience, and determination.

- Ans
- 1. Despite the setbacks and obstacles we faced,
 - 2. teamwork, resilience, and determination
 - 3. which teach us the importance of
 - 4. our team rallied together and achieved our goals,

Question ID : 264330144181
Option 1 ID : 264330564987
Option 2 ID : 264330564990
Option 3 ID : 264330564989
Option 4 ID : 264330564988
Status : Answered
Chosen Option : 3

Q.13 Select the option that correctly rectifies the spelling error that is underlined.
The questionnaire used by the researcher was of top quality.

- Ans
- 1. questionnaire
 - 2. questionnaire
 - 3. questionairre
 - 4. questionnairee

Question ID : 264330153422
Option 1 ID : 264330601219
Option 2 ID : 264330601220
Option 3 ID : 264330601221
Option 4 ID : 264330601222
Status : Answered
Chosen Option : 2

Q.14 The given sentence contains an error. Select the option that correctly rectifies the error.
That career competition was the difficultest exam he had ever given.

- Ans
- 1. That career competition was the difficultest exam than any he had ever given.
 - 2. That career competition was the most difficult exam than any he had ever given.
 - 3. That career competition was the most difficultest exam he had ever given.
 - 4. That career competition was the most difficult exam he had ever given.

Question ID : 264330152607
Option 1 ID : 264330598034
Option 2 ID : 264330598032
Option 3 ID : 264330598031
Option 4 ID : 264330598033
Status : Answered
Chosen Option : 4

Q.15 Select the most appropriate idiom for the following sentence.
Shweta organises the sale of handmade pottery at a cheap rate.

- Ans 1. Hush money
 2. Go for a song
 3. Having one's cake and eating it too
 4. Making a fuss out of something

Question ID : 264330141303
Option 1 ID : 264330553547
Option 2 ID : 264330553548
Option 3 ID : 264330553549
Option 4 ID : 264330553550
Status : Answered
Chosen Option : 2

Q.16 Select the most appropriate ANTONYM of the given word.
Guilty

- Ans 1. Responsible
 2. Innocent
 3. Criminal
 4. Patient

Question ID : 264330153364
Option 1 ID : 264330601009
Option 2 ID : 264330601008
Option 3 ID : 264330601010
Option 4 ID : 264330601007
Status : Answered
Chosen Option : 2

Q.17 Identify the INCORRECTLY spelt word in the following sentence and select its correct spelling from the given options.
The colours of the rainbow seemed to shine through the triangular prism as the sun hit the object.

- Ans 1. rainbouw
 2. son
 3. triangular
 4. object

Question ID : 264330153110
Option 1 ID : 264330600003
Option 2 ID : 264330600005
Option 3 ID : 264330600004
Option 4 ID : 264330600006
Status : Answered
Chosen Option : 3

Q.18 Select the most appropriate option that can substitute the underlined segment in the given sentence.

The intrepid group of adventurers climbed the mountain despite of bad weather and road closures.

- Ans
- 1. despite
 - 2. in spite
 - 3. in view of
 - 4. due to

Question ID : 264330151854
Option 1 ID : 264330595035
Option 2 ID : 264330595036
Option 3 ID : 264330595037
Option 4 ID : 264330595038
Status : Answered
Chosen Option : 1

Q.19 Select the most appropriate option that can substitute the underlined segment in the given sentence.

The airplane flowed over the mountains, offering the passengers a breath-taking view of the majestic peaks below.

- Ans
- 1. flew beyond
 - 2. flew over
 - 3. flowed above
 - 4. flowed beyond

Question ID : 264330151858
Option 1 ID : 264330595054
Option 2 ID : 264330595053
Option 3 ID : 264330595052
Option 4 ID : 264330595051
Status : Answered
Chosen Option : 2

Q.20 Select the most appropriate ANTONYM of the given word.
Ecstasy

- Ans
- 1. Euphoria
 - 2. Coarse
 - 3. Natural
 - 4. Despair

Question ID : 264330152676
Option 1 ID : 264330598307
Option 2 ID : 264330598309
Option 3 ID : 264330598308
Option 4 ID : 264330598310
Status : Answered
Chosen Option : 4

Comprehension:

In the following passage, some words have been deleted. Read the passage carefully and select the most appropriate option to fill in each blank.

As a boy, I was always exploring lonely places—neglected gardens and orchards, unoccupied houses, patches of scrub or wasteland, the fields outside the town, the fringes of the forest. On one of my rambles (1)_____the bungalow, I pushed my way through a thicket of lantana bushes and stumbled over a thick stone slab, twisting my ankle slightly as I fell. For some time, I sat on the grass massaging my foot. When the pain eased, I looked more (2)_____ at the stone slab and was surprised to find that it was a gravestone. It was almost entirely covered by ivy; obviously no one had been near it for years. I tugged at the ivy and some of it came away in my hands. There was some (3)_____ lettering on the grave, half-obscured by grass and moss. I could make out a name—Rose—but little more. I sat there for some time, (4)_____ over my discovery. I was wondering why 'Rose' should have been buried at so lonely a spot when there was a (5)_____ not far away.

SubQuestion No : 21

Q.21 Select the most appropriate option to fill in blank number 1.

- Ans 1. before
 2. behind
 3. by dint of
 4. below

Question ID : 264330153544

Option 1 ID : 264330601676

Option 2 ID : 264330601678

Option 3 ID : 264330601677

Option 4 ID : 264330601675

Status : Answered

Chosen Option : 2

Comprehension:

In the following passage, some words have been deleted. Read the passage carefully and select the most appropriate option to fill in each blank.

As a boy, I was always exploring lonely places—neglected gardens and orchards, unoccupied houses, patches of scrub or wasteland, the fields outside the town, the fringes of the forest. On one of my rambles (1)_____the bungalow, I pushed my way through a thicket of lantana bushes and stumbled over a thick stone slab, twisting my ankle slightly as I fell. For some time, I sat on the grass massaging my foot. When the pain eased, I looked more (2)_____ at the stone slab and was surprised to find that it was a gravestone. It was almost entirely covered by ivy; obviously no one had been near it for years. I tugged at the ivy and some of it came away in my hands. There was some (3)_____ lettering on the grave, half-obscured by grass and moss. I could make out a name—Rose—but little more. I sat there for some time, (4)_____ over my discovery. I was wondering why 'Rose' should have been buried at so lonely a spot when there was a (5)_____ not far away.

SubQuestion No : 22

Q.22 Select the most appropriate option to fill in blank number 2.

- Ans 1. closely
 2. emptyly
 3. frankly
 4. lawfully

Question ID : 264330153545

Option 1 ID : 264330601681

Option 2 ID : 264330601679

Option 3 ID : 264330601680

Option 4 ID : 264330601682

Status : Answered

Chosen Option : 1

Comprehension:

In the following passage, some words have been deleted. Read the passage carefully and select the most appropriate option to fill in each blank.

As a boy, I was always exploring lonely places—neglected gardens and orchards, unoccupied houses, patches of scrub or wasteland, the fields outside the town, the fringes of the forest. On one of my rambles (1)_____the bungalow, I pushed my way through a thicket of lantana bushes and stumbled over a thick stone slab, twisting my ankle slightly as I fell. For some time, I sat on the grass massaging my foot. When the pain eased, I looked more (2)_____ at the stone slab and was surprised to find that it was a gravestone. It was almost entirely covered by ivy; obviously no one had been near it for years. I tugged at the ivy and some of it came away in my hands. There was some (3)_____ lettering on the grave, half-obscured by grass and moss. I could make out a name—Rose—but little more. I sat there for some time, (4)_____ over my discovery. I was wondering why 'Rose' should have been buried at so lonely a spot when there was a (5)_____ not far away.

SubQuestion No : 23

Q.23 Select the most appropriate option to fill in blank number 3.

- Ans 1. idiotic
 2. sturdy
 3. blurred
 4. nomadic

Question ID : 264330153546

Option 1 ID : 264330601686

Option 2 ID : 264330601683

Option 3 ID : 264330601684

Option 4 ID : 264330601685

Status : Answered

Chosen Option : 3

Comprehension:

In the following passage, some words have been deleted. Read the passage carefully and select the most appropriate option to fill in each blank.

As a boy, I was always exploring lonely places—neglected gardens and orchards, unoccupied houses, patches of scrub or wasteland, the fields outside the town, the fringes of the forest. On one of my rambles (1)_____the bungalow, I pushed my way through a thicket of lantana bushes and stumbled over a thick stone slab, twisting my ankle slightly as I fell. For some time, I sat on the grass massaging my foot. When the pain eased, I looked more (2)_____ at the stone slab and was surprised to find that it was a gravestone. It was almost entirely covered by ivy; obviously no one had been near it for years. I tugged at the ivy and some of it came away in my hands. There was some (3)_____ lettering on the grave, half-obscured by grass and moss. I could make out a name—Rose—but little more. I sat there for some time, (4)_____ over my discovery. I was wondering why 'Rose' should have been buried at so lonely a spot when there was a (5)_____ not far away.

SubQuestion No : 24

Q.24 Select the most appropriate option to fill in blank number 4.

- Ans 1. sleeping
 2. pondering
 3. being
 4. pulling

Question ID : 264330153547

Option 1 ID : 264330601690

Option 2 ID : 264330601687

Option 3 ID : 264330601688

Option 4 ID : 264330601689

Status : Answered

Chosen Option : 2

Comprehension:

In the following passage, some words have been deleted. Read the passage carefully and select the most appropriate option to fill in each blank.

As a boy, I was always exploring lonely places—neglected gardens and orchards, unoccupied houses, patches of scrub or wasteland, the fields outside the town, the fringes of the forest. On one of my rambles (1)_____the bungalow, I pushed my way through a thicket of lantana bushes and stumbled over a thick stone slab, twisting my ankle slightly as I fell. For some time, I sat on the grass massaging my foot. When the pain eased, I looked more (2)_____ at the stone slab and was surprised to find that it was a gravestone. It was almost entirely covered by ivy; obviously no one had been near it for years. I tugged at the ivy and some of it came away in my hands. There was some (3)_____ lettering on the grave, half-obscured by grass and moss. I could make out a name—Rose—but little more. I sat there for some time, (4)_____ over my discovery. I was wondering why 'Rose' should have been buried at so lonely a spot when there was a (5)_____ not far away.

SubQuestion No : 25

Q.25 Select the most appropriate option to fill in blank number 5.

- Ans
- 1. dormitory
 - 2. kennel
 - 3. sanctuary
 - 4. cemetery

Question ID : 264330153548

Option 1 ID : 264330601694

Option 2 ID : 264330601691

Option 3 ID : 264330601692

Option 4 ID : 264330601693

Status : Answered

Chosen Option : 4

Adda247

বাংলা