

TCSiON CAE

Notations :

- Options shown in green color and with ✓ icon are correct.
- Options shown in red color and with ✗ icon are incorrect.

Question Paper Name :	GSMA 15th MAY SHIFT1
Subject Name :	GSMA
Calculator :	None
Magnifying Glass Required? :	No
Ruler Required? :	No
Eraser Required? :	No
Scratch Pad Required? :	No
Rough Sketch/Notepad Required? :	No
Protractor Required? :	No
Show Watermark on Console? :	Yes
Highlighter :	No
Auto Save on Console?	Yes
Change Font Color :	No
Change Background Color :	No
Change Theme :	No
Help Button :	No
Show Reports :	No
Show Progress Bar :	No
Is this Group for Examiner? :	No
Examiner permission :	Cant View
Show Progress Bar? :	No
Enable Mark as Answered Mark for Review and Clear Response :	Yes
Maximum Instruction Time :	0

Question Number : 1 Question Id : 63068075085 Is Question Mandatory : No Calculator : None Response Time : N.A Think Time : N.A Minimum Instruction Time : 0

Correct Marks : 1

Xiomara Castro was sworn in as the first female President of _____ in 2022.

Options :

- ✓ Honduras
- ✗ Cyprus
- ✗ Bulgaria
- ✗ Tunisia

Question Number : 2 Question Id : 63068075086 Is Question Mandatory : No Calculator : None Response Time : N.A Think Time : N.A Minimum Instruction Time : 0

Correct Marks : 1

Why was Roberta Metsola in the news in January 2022?

Options :

- ✗ She was elected as the president of the World Bank.
- ✗ She was elected as the president of the INTERPOL.
- ✓ She was elected as the president of the European Parliament.
- ✗ She was elected as the president of UNICEF.

Question Number : 3 Question Id : 63068075087 Is Question Mandatory : No Calculator : None Response Time : N.A Think Time : N.A Minimum Instruction Time : 0

Correct Marks : 1

Prime Minister Narendra Modi was honoured with the Ngadag Pel gi Khorlo award in December 2021. This is the highest civilian award in which country?

Options :

1. ✘ Cambodia
2. ✘ Indonesia
3. ✔ Bhutan
4. ✘ Myanmar

Question Number : 4 Question Id : 63068075088 Is Question Mandatory : No Calculator : None Response Time : N.A Think Time : N.A Minimum Instruction Time : 0

Correct Marks : 1

In November 2021, Barbados was declared a new republic after how many years of British rule?

Options :

1. ✘ 100 years
2. ✘ 200 years
3. ✘ 300 years
4. ✔ 400 years

Question Number : 5 Question Id : 63068075089 Is Question Mandatory : No Calculator : None Response Time : N.A Think Time : N.A Minimum Instruction Time : 0

Correct Marks : 1

The new CEO of Twitter, Parag Agrawal, has graduated from which IIT?

Options :

1. ✔ IIT-Bombay
2. ✘ IIT-Madras
3. ✘ IIT-Kharagpur
4. ✘ IIT-Delhi

Question Number : 6 Question Id : 63068075090 Is Question Mandatory : No Calculator : None Response Time : N.A Think Time : N.A Minimum Instruction Time : 0

Correct Marks : 1

Which country hosted the G-7 Foreign Ministers' meeting in December 2021?

Options :

1. ✔ The UK
2. ✘ Canada
3. ✘ France
4. ✘ Italy

Question Number : 7 Question Id : 63068075091 Is Question Mandatory : No Calculator : None Response Time : N.A Think Time : N.A Minimum Instruction Time : 0

Correct Marks : 1

After winning the finals of the men's singles title at the Australian Open 2021, Rafael Nadal set a new record of winning _____ titles in Grand Slam singles.

Options :

1. ✔ 21
2. ✘ 19
3. ✘ 17
4. ✘ 15

Question Number : 8 Question Id : 63068075092 Is Question Mandatory : No Calculator : None Response Time : N.A Think Time : N.A Minimum Instruction Time : 0

Correct Marks : 1

In November 2021, India was re-elected to the Executive Board of the United Nations' Cultural and Education Organization (UNESCO) for a term of _____ years.

Options :

1. ✓ four
2. ✗ three
3. ✗ five
4. ✗ six

Question Number : 9 Question Id : 63068075093 Is Question Mandatory : No Calculator : None Response Time : N.A Think Time : N.A Minimum Instruction Time : 0

Correct Marks : 1

Which government body has recently (January 2022) constituted a 'Fly Ash Management and Utilization Mission' with the objective of coordinating and monitoring the issues related to handling and disposal of fly ash and other associated issues?

Options :

1. ✗ Central Ground Water Board (CGWB)
2. ✗ Central Pollution Control Board (CPCB)
3. ✓ National Green Tribunal (NGT)
4. ✗ Indian Forest Service (IFS)

Question Number : 10 Question Id : 63068075094 Is Question Mandatory : No Calculator : None Response Time : N.A Think Time : N.A Minimum Instruction Time : 0

Correct Marks : 1

Which research institute secured the second rank in the National Ranking Index-2020?

Options :

1. ✓ IISc, Bangalore
2. ✗ CSIR, Delhi
3. ✗ NIN, Hyderabad
4. ✗ C-DAC, Pune

Question Number : 11 Question Id : 63068075095 Is Question Mandatory : No Calculator : None Response Time : N.A Think Time : N.A Minimum Instruction Time : 0

Correct Marks : 1

How many new high yielding varieties of field crops were released by the Indian Council of Agricultural Research during 2019 to 2021?

Options :

1. ✗ 462
2. ✓ 562
3. ✗ 362
4. ✗ 262

Question Number : 12 Question Id : 63068075096 Is Question Mandatory : No Calculator : None Response Time : N.A Think Time : N.A Minimum Instruction Time : 0

Correct Marks : 1

The Central Government is set to roll out a digital system called 'OSM' from 1 April 2022 in a bid to bring in operational efficiency in storage, movement and distribution of food grains under the Targeted Public Distribution System (TPDS). The full form of OSM is:

Options :

1. ✓ Online Storage Management
2. ✗ Output Storage Management
3. ✗ Outsource Storage Management
4. ✗ Onset Storage Management

Question Number : 13 Question Id : 63068075097 Is Question Mandatory : No Calculator : None Response Time : N.A Think Time : N.A Minimum Instruction Time : 0

Correct Marks : 1

According to the International Trade Administration (ITA), India emerged as the _____ largest manufacturer of mobile handsets in the world in 2021.

Options :

1. ✓ second
2. ✗ third
3. ✗ fourth
4. ✗ fifth

Question Number : 14 Question Id : 63068075098 Is Question Mandatory : No Calculator : None Response Time : N.A Think Time : N.A Minimum Instruction Time : 0

Correct Marks : 1

On 27 September 2021, DRDO tested a new version of the Akash Missile equipped with an active Radio Frequency (RF) seeker for improved accuracy. What is the name of this new version of Akash missile?

Options :

1. ✗ Akash Next
2. ✓ Akash Prime
3. ✗ Akash Apex
4. ✗ Akash Blaze

Question Number : 15 Question Id : 63068075099 Is Question Mandatory : No Calculator : None Response Time : N.A Think Time : N.A Minimum Instruction Time : 0

Correct Marks : 1

In July 2021, ISRO announced the launch of its geo-imaging satellite that will enable near-real time monitoring of natural disasters, such as floods and cyclones. The name of this satellite is:

Options :

1. ✓ EOS-03
2. ✗ EOS-04
3. ✗ EOS-05
4. ✗ EOS-06

Question Number : 16 Question Id : 63068075100 Is Question Mandatory : No Calculator : None Response Time : N.A Think Time : N.A Minimum Instruction Time : 0

Correct Marks : 1

Which state ranked first among the larger states in primary education in the Index on Foundational Literacy and Numeracy 2021?

Options :

1. ✓ West Bengal
2. ✗ Rajasthan
3. ✗ Uttar Pradesh
4. ✗ Madhya Pradesh

Question Number : 17 Question Id : 63068075101 Is Question Mandatory : No Calculator : None Response Time : N.A Think Time : N.A Minimum Instruction Time : 0

Correct Marks : 1

Which of the following states did NOT get an A++ rank in the Performance Grading Index (PGI) of the States/UTs 2021?

Options :

1. ✗ Kerala
2. ✗ Punjab
3. ✗ Tamil Nadu
4. ✓ Rajasthan

Question Number : 18 Question Id : 63068075102 Is Question Mandatory : No Calculator : None Response Time : N.A Think Time : N.A Minimum Instruction Time : 0

Correct Marks : 1

For the effective implementation of various schemes and programmes of the Ministry of Women and Child Development, all the major

schemes of the Ministry have been classified under how many umbrella schemes?

Options :

1. ✓ Three
2. ✗ Four
3. ✗ Five
4. ✗ Six

Question Number : 19 Question Id : 63068075103 Is Question Mandatory : No Calculator : None Response Time : N.A Think Time : N.A Minimum Instruction Time : 0

Correct Marks : 1

What amount was allocated for child protection and welfare services under Mission VATSALYA in the 2021-22 Union Budget of India?

Options :

1. ✗ ₹700 crore
2. ✓ ₹900 crore
3. ✗ ₹600 crore
4. ✗ ₹300 crore

Question Number : 20 Question Id : 63068075104 Is Question Mandatory : No Calculator : None Response Time : N.A Think Time : N.A Minimum Instruction Time : 0

Correct Marks : 1

What amount was allocated for the Social Justice and Empowerment Ministry, the ministry that caters to the welfare of the backward classes and those with disabilities, in the Union Budget 2022-23?

Options :

1. ✗ ₹10,134 crore
2. ✗ ₹11,134 crore
3. ✗ ₹12,134 crore
4. ✓ ₹13,134 crore

Question Number : 21 Question Id : 63068075105 Is Question Mandatory : No Calculator : None Response Time : N.A Think Time : N.A Minimum Instruction Time : 0

Correct Marks : 1

According to the reports of the Ministry of Electronics and IT, approximately how much e-waste was collected and processed in the financial year 2021?

Options :

1. ✓ 3.54 lakh tonnes
2. ✗ 2.54 lakh tonnes
3. ✗ 1.54 lakh tonnes
4. ✗ 4.54 lakh tonnes

Question Number : 22 Question Id : 63068075106 Is Question Mandatory : No Calculator : None Response Time : N.A Think Time : N.A Minimum Instruction Time : 0

Correct Marks : 1

As of December 2021, what was the total number of Primary Health Centres (PHCs) in India?

Options :

1. ✓ 23,391
2. ✗ 31,391
3. ✗ 11,391
4. ✗ 41,391

Question Number : 23 Question Id : 63068075107 Is Question Mandatory : No Calculator : None Response Time : N.A Think Time : N.A Minimum Instruction Time : 0

Correct Marks : 1

According to the reports of Centre for Monitoring Indian Economy (CMIE), how many Indians were unemployed as of December 2021?

Options :

1. ✘ 23 million
2. ✘ 33 million
3. ✘ 43 million
4. ✔ 53 million

Question Number : 24 Question Id : 63068075108 Is Question Mandatory : No Calculator : None Response Time : N.A Think Time : N.A Minimum Instruction Time : 0

Correct Marks : 1

Recently (January 2022), the Union Cabinet extended the National Commission for Safai Karamcharis for how many more years?

Options :

1. ✘ One
2. ✘ Four
3. ✘ Two
4. ✔ Three

Question Number : 25 Question Id : 63068075109 Is Question Mandatory : No Calculator : None Response Time : N.A Think Time : N.A Minimum Instruction Time : 0

Correct Marks : 1

PVC is a polymer used in a variety of applications in building and construction, health care, electronics, automobile and other sectors, in products ranging from piping and siding to blood bags and tubing. The full form of PVC is:

Options :

1. ✔ Poly Vinyl Chloride
2. ✘ Poly Vinyl Carbide
3. ✘ Poly Vinyl Carbonate
4. ✘ Poly Vanadium Chloride

Question Number : 26 Question Id : 63068075110 Is Question Mandatory : No Calculator : None Response Time : N.A Think Time : N.A Minimum Instruction Time : 0

Correct Marks : 1

Coral reefs are large underwater structures composed of the skeletons of colonial marine invertebrates called 'coral'. The major chemical component of these coral reefs is:

Options :

1. ✘ Ammonium chloride
2. ✘ Zinc carbonate
3. ✔ Calcium carbonate
4. ✘ Cellulose

Question Number : 27 Question Id : 63068075111 Is Question Mandatory : No Calculator : None Response Time : N.A Think Time : N.A Minimum Instruction Time : 0

Correct Marks : 1

Which of the following diseases is NOT generally caused by contaminated water and poor sanitation?

Options :

1. ✘ Cholera
2. ✘ Diarrhoea
3. ✘ Dysentery
4. ✔ Kwashiorkor

Question Number : 28 Question Id : 63068075112 Is Question Mandatory : No Calculator : None Response Time : N.A Think Time : N.A Minimum Instruction Time : 0

Correct Marks : 1

Which of the following gases is NOT a greenhouse gas?

Options :

1. ✔ Nitrogen
2. ✘ Carbon dioxide

3. ✘ Nitrous oxide
4. ✘ Water vapour

Question Number : 29 Question Id : 63068075113 Is Question Mandatory : No Calculator : None Response Time : N.A Think Time : N.A Minimum Instruction Time : 0

Correct Marks : 1

TEFLON is a polymer used for making non-stick cooking utensils. It is chemically known as:

Options :

1. ✔ polytetrafluoroethylene
2. ✘ polytetrafluoropropylene
3. ✘ polytetrafluorobutylene
4. ✘ polytetrafluoropentylene

Question Number : 30 Question Id : 63068075114 Is Question Mandatory : No Calculator : None Response Time : N.A Think Time : N.A Minimum Instruction Time : 0

Correct Marks : 1

Which of the following diseases is caused in humans by a severe lack of proteins and calories in the diet?

Options :

1. ✔ Marasmus
2. ✘ Scurvy
3. ✘ Goitre
4. ✘ Mumps

Question Number : 31 Question Id : 63068075115 Is Question Mandatory : No Calculator : None Response Time : N.A Think Time : N.A Minimum Instruction Time : 0

Correct Marks : 1

The deficiency of which vitamin in human diet causes sore throat with swelling and redness of the mouth, cheilosis, stomatitis, glossitis and dermatitis?

Options :

1. ✘ Ascorbic acid
2. ✘ Retinol
3. ✔ Riboflavin
4. ✘ Cyanocobalamin

Question Number : 32 Question Id : 63068075116 Is Question Mandatory : No Calculator : None Response Time : N.A Think Time : N.A Minimum Instruction Time : 0

Correct Marks : 1

Which cranial nerve in humans is the largest and has both, sensory and motor functions?

Options :

1. ✔ Trigeminal nerve
2. ✘ Vagus nerve
3. ✘ Abducens nerve
4. ✘ Hypoglossal nerve

Question Number : 33 Question Id : 63068075117 Is Question Mandatory : No Calculator : None Response Time : N.A Think Time : N.A Minimum Instruction Time : 0

Correct Marks : 1

Which enzyme helps in the digestion of fats in the gut of humans?

Options :

1. ✘ Amylase
2. ✔ Lipase
3. ✘ Lactase
4. ✘ Helicase

Question Number : 34 Question Id : 63068075118 Is Question Mandatory : No Calculator : None Response Time : N.A Think Time : N.A Minimum Instruction Time : 0

Correct Marks : 1

Which gland in the human body continuously supplies tear fluid that is wiped across the surface of the eyes each time the eyelids are blinked?

Options :

1. ✓ Lacrimal gland
2. ✗ Thyroid gland
3. ✗ Salivary gland
4. ✗ Pituitary gland

Question Number : 35 Question Id : 63068075119 Is Question Mandatory : No Calculator : None Response Time : N.A Think Time : N.A Minimum Instruction Time : 0

Correct Marks : 1

An organism free from the interference of other species that can use a full range of biotic and abiotic resources in which it can survive and reproduce is known as:

Options :

1. ✓ niche
2. ✗ nemo
3. ✗ putrid
4. ✗ aphid

Question Number : 36 Question Id : 63068075120 Is Question Mandatory : No Calculator : None Response Time : N.A Think Time : N.A Minimum Instruction Time : 0

Correct Marks : 1

How much percentage of the total area of India is in Seismic Zones III-V and vulnerable to earthquakes of moderate to high densities?

Options :

1. ✓ 56%
2. ✗ 46%
3. ✗ 36%
4. ✗ 26%

Question Number : 37 Question Id : 63068075121 Is Question Mandatory : No Calculator : None Response Time : N.A Think Time : N.A Minimum Instruction Time : 0

Correct Marks : 1

The most significant chemical accidents recorded in history was the 1984 Bhopal Gas tragedy, in which more than 3000 people were killed after a toxic gas was released from the Union Carbide pesticides factory. What was the toxic gas that was released?

Options :

1. ✓ Methyl isocyanate
2. ✗ Trinitrotoluene
3. ✗ Hydrogen cyanide
4. ✗ Hydrogen sulphide

Question Number : 38 Question Id : 63068075122 Is Question Mandatory : No Calculator : None Response Time : N.A Think Time : N.A Minimum Instruction Time : 0

Correct Marks : 1

To detect unclaimed radioactive materials/substances and save the public from its hazardous effects, the National Disaster Management Authority has chalked out a plan to provide the States/UTs with MRDS to be deployed in metros/all capital cities and big cities in India. The full form of MRDS is:

Options :

1. ✗ Metal Radiation Detection Systems
2. ✓ Mobile Radiation Detection Systems
3. ✗ Mobile Radiation Drainage Systems
4. ✗ Mobile Radiation Detection Scanner

Question Number : 39 Question Id : 63068075123 Is Question Mandatory : No Calculator : None Response Time : N.A Think Time : N.A Minimum Instruction Time : 0

Correct Marks : 1

The National Disaster Response Force (NDRF) is a specialised force that is responsible for disaster response and relief. For 2021-22, the budget estimate for the NDRF was:

Options :

1. ✘ ₹1,409 crore
2. ✘ ₹1,309 crore
3. ✘ ₹1,109 crore
4. ✔ ₹1,209 crore

Question Number : 40 Question Id : 63068075124 Is Question Mandatory : No Calculator : None Response Time : N.A Think Time : N.A Minimum Instruction Time : 0

Correct Marks : 1

Radar Satellite-1 (RISAT-1) is a state-of-the-art Microwave Remote Sensing Satellite carrying a Synthetic Aperture Radar (SAR) Payload operating in C-band (5.35 GHz) that enables imaging of the surface features during both, day and night under all weather conditions. What is the vehicle used by ISRO to launch this satellite?

Options :

1. ✘ PSLV- C17
2. ✘ PSLV- C18
3. ✔ PSLV- C19
4. ✘ PSLV- C20

Question Number : 41 Question Id : 63068075125 Is Question Mandatory : No Calculator : None Response Time : N.A Think Time : N.A Minimum Instruction Time : 0

Correct Marks : 1

In India, in which seismic zone does New Delhi fall?

Options :

1. ✔ Zone IV
2. ✘ Zone III
3. ✘ Zone II
4. ✘ Zone I

Question Number : 42 Question Id : 63068075126 Is Question Mandatory : No Calculator : None Response Time : N.A Think Time : N.A Minimum Instruction Time : 0

Correct Marks : 1

As per a study by National Disaster Management Authority, what is the length of the coastline in India that is prone to cyclones/high wind velocity?

Options :

1. ✘ 6000 km
2. ✘ 7000 km
3. ✔ 5700 km
4. ✘ 5000 km

Question Number : 43 Question Id : 63068075127 Is Question Mandatory : No Calculator : None Response Time : N.A Think Time : N.A Minimum Instruction Time : 0

Correct Marks : 1

According to the 'Global Climate Risk Index' report 2019, India is the _____ most vulnerable country in the world due to extreme weather-related events.

Options :

1. ✘ 10th
2. ✘ 12th
3. ✔ 14th
4. ✘ 16th

Question Number : 44 Question Id : 63068075128 Is Question Mandatory : No Calculator : None Response Time : N.A Think Time : N.A Minimum Instruction Time : 0

Correct Marks : 1

According to India Meteorological Department (IMD), the average yearly temperature in 2020 was:

Options :

1. ✘ 22.78°C
2. ✘ 23.78°C
3. ✘ 24.78°C
4. ✔ 25.78°C

Question Number : 45 Question Id : 63068075129 Is Question Mandatory : No Calculator : None Response Time : N.A Think Time : N.A Minimum Instruction Time : 0

Correct Marks : 1

According to Internal Displacement Monitoring Centre (IDMC), India suffered several disasters such as floods, storms and cyclones in 2020 and 2021 till May and India is the _____ worst climate-induced disaster hit country in the world.

Options :

1. ✘ fourth
2. ✘ fifth
3. ✘ sixth
4. ✔ seventh

Question Number : 46 Question Id : 63068075130 Is Question Mandatory : No Calculator : None Response Time : N.A Think Time : N.A Minimum Instruction Time : 0

Correct Marks : 1

In which year did the Government of India launch National Clean Air Programme in order to address the increasing air pollution across the country in a comprehensive manner?

Options :

1. ✔ 2019
2. ✘ 2018
3. ✘ 2017
4. ✘ 2016

Question Number : 47 Question Id : 63068075131 Is Question Mandatory : No Calculator : None Response Time : N.A Think Time : N.A Minimum Instruction Time : 0

Correct Marks : 1

The 'Namami Gange Mission' is a key policy launched by the Indian government with an objective of achieving which Sustainable Development Goal (SDG) adopted by the United Nations?

Options :

1. ✘ SDG 5
2. ✔ SDG 6
3. ✘ SDG 7
4. ✘ SDG 8

Question Number : 48 Question Id : 63068075132 Is Question Mandatory : No Calculator : None Response Time : N.A Think Time : N.A Minimum Instruction Time : 0

Correct Marks : 1

How many Sustainable Development Goals (SDGs) were adopted by the United Nations as a universal call to action to end poverty, protect the planet and ensure attainment of SDGs by 2030?

Options :

1. ✔ 17
2. ✘ 15
3. ✘ 13
4. ✘ 11

Question Number : 49 Question Id : 63068075133 Is Question Mandatory : No Calculator : None Response Time : N.A Think Time : N.A Minimum Instruction Time : 0

Correct Marks : 1

Among the Sustainable Development Goals (SDGs) adopted by the United Nations, the second goal is:

Options :

1. ✘ no poverty
2. ✔ zero hunger
3. ✘ gender equality
4. ✘ quality education

Question Number : 50 Question Id : 63068075134 Is Question Mandatory : No Calculator : None Response Time : N.A Think Time : N.A Minimum Instruction Time : 0

Correct Marks : 1

The National Food Security Mission (NFSM) launched by the Government of India in 2007 aimed at an increase in the annual production of:

Options :

1. ✔ rice, wheat and pulses
2. ✘ fish and milk
3. ✘ potatoes
4. ✘ sugarcane

Question Number : 51 Question Id : 63068075135 Is Question Mandatory : No Calculator : None Response Time : N.A Think Time : N.A Minimum Instruction Time : 0

Correct Marks : 1

In 2021, the Ministry of Housing and Urban Affairs initiated GHTC-India that aims to identify and make mainstream a basket of innovative construction technologies from across the globe for housing construction sector that are sustainable, eco-friendly and disaster-resilient. The full form of GHTC is:

Options :

1. ✔ Global Housing Technology Challenge
2. ✘ Global Housing Technology Council
3. ✘ Global Housing Technology Commission
4. ✘ Great Housing Technology Challenge

Question Number : 52 Question Id : 63068075136 Is Question Mandatory : No Calculator : None Response Time : N.A Think Time : N.A Minimum Instruction Time : 0

Correct Marks : 1

Pradhan Mantri Awas Yojana – Urban (PMAY-U), the mission that addresses urban housing shortage among the EWS/LIG and MIG categories including the slum dwellers by ensuring a pucca house to all eligible, was launched in which year?

Options :

1. ✔ 2015
2. ✘ 2012
3. ✘ 2011
4. ✘ 2013

Question Number : 53 Question Id : 63068075137 Is Question Mandatory : No Calculator : None Response Time : N.A Think Time : N.A Minimum Instruction Time : 0

Correct Marks : 1

What is the name given to the imaginary line that runs along Earth's surface from the North Pole to the South Pole in the middle of the Pacific Ocean?

Options :

1. ✔ International Date Line
2. ✘ International Index Line
3. ✘ International Standard Line
4. ✘ International Climate Line

Question Number : 54 Question Id : 63068075138 Is Question Mandatory : No Calculator : None Response Time : N.A Think Time : N.A Minimum Instruction Time : 0

Correct Marks : 1

Where is the Sonoran desert located?

Options :

1. ✓ USA/Mexico
2. ✗ Germany/Austria
3. ✗ South Korea/North Korea
4. ✗ USA/Brazil

Question Number : 55 Question Id : 63068075139 Is Question Mandatory : No Calculator : None Response Time : N.A Think Time : N.A Minimum Instruction Time : 0

Correct Marks : 1

What is the height of the world's highest waterfall 'Angel Falls' located in Venezuela?

Options :

1. ✗ 5212 feet
2. ✗ 2212 feet
3. ✓ 3212 feet
4. ✗ 4212 feet

Question Number : 56 Question Id : 63068075140 Is Question Mandatory : No Calculator : None Response Time : N.A Think Time : N.A Minimum Instruction Time : 0

Correct Marks : 1

A total of nine countries share borders with India. Out of these, how many countries share sea borders with India?

Options :

1. ✗ One
2. ✓ Two
3. ✗ Three
4. ✗ Four

Question Number : 57 Question Id : 63068075141 Is Question Mandatory : No Calculator : None Response Time : N.A Think Time : N.A Minimum Instruction Time : 0

Correct Marks : 1

Which of the following Indian states does NOT share a land border with Myanmar?

Options :

1. ✗ Arunachal Pradesh
2. ✗ Mizoram
3. ✓ Assam
4. ✗ Nagaland

Question Number : 58 Question Id : 63068075142 Is Question Mandatory : No Calculator : None Response Time : N.A Think Time : N.A Minimum Instruction Time : 0

Correct Marks : 1

The total length of the land border (international) of India is:

Options :

1. ✓ 15106.7 km
2. ✗ 14106.7 km
3. ✗ 13106.7 km
4. ✗ 12106.7 km

Question Number : 59 Question Id : 63068075143 Is Question Mandatory : No Calculator : None Response Time : N.A Think Time : N.A Minimum Instruction Time : 0

Correct Marks : 1

Which of the following lakes holds the distinction of being both, the deepest lake in the world and the largest freshwater lake?

Options :

- ✘ Lake Malawi, East Africa
- ✘ Great Slave Lake, Canada
- ✔ Lake Baikal, Russia
- ✘ Lake Loch Ness, Scotland

Question Number : 60 Question Id : 63068075144 Is Question Mandatory : No Calculator : None Response Time : N.A Think Time : N.A Minimum Instruction Time : 0

Correct Marks : 1

The Dead Sea, located on the border of Jordan and Israel, is the lowest location on land dipping down to _____ feet below the sea level.

Options :

- ✘ 1178 feet
- ✔ 1385 feet
- ✘ 1278 feet
- ✘ 1478 feet

Question Number : 61 Question Id : 63068075145 Is Question Mandatory : No Calculator : None Response Time : N.A Think Time : N.A Minimum Instruction Time : 0

Correct Marks : 1

In which year was the President's rule first imposed in the state of Andhra Pradesh?

Options :

- ✔ 1973
- ✘ 1977
- ✘ 1983
- ✘ 1987

Question Number : 62 Question Id : 63068075146 Is Question Mandatory : No Calculator : None Response Time : N.A Think Time : N.A Minimum Instruction Time : 0

Correct Marks : 1

Who among the following NEVER served as the Chief Minister of Andhra Pradesh?

Options :

- ✘ Bhavanam Venkataram
- ✘ Bezawada Gopala Reddy
- ✘ Marri Chenna Reddy
- ✔ Pingali Venkayya

Question Number : 63 Question Id : 63068075147 Is Question Mandatory : No Calculator : None Response Time : N.A Think Time : N.A Minimum Instruction Time : 0

Correct Marks : 1

Given are some political parties based in Andhra Pradesh and their founders. Choose the INCORRECT pair.

Options :

- ✘ Praja Rajyam – Chiranjeevi
- ✘ Lok Satta – Jai Prakash Narayana
- ✘ Mahajana Socialist Party – Manda Krishna Madiga
- ✔ Praja Shanti Party – YS Sharmila

Question Number : 64 Question Id : 63068075148 Is Question Mandatory : No Calculator : None Response Time : N.A Think Time : N.A Minimum Instruction Time : 0

Correct Marks : 1

What was the code name of the police action taken by the Indian government against the Nizam of Hyderabad for merging Hyderabad with the Indian union in 1948?

Options :

- ✔ Operation Polo

2. ✘ Operation Tiger
3. ✘ Operation Pearl
4. ✘ Operation Sultan

Question Number : 65 Question Id : 63068075149 Is Question Mandatory : No Calculator : None Response Time : N.A Think Time : N.A Minimum Instruction Time : 0

Correct Marks : 1

What was the capital city of the Andhra state that was separated from the Madras state in 1953?

Options :

1. ✘ Warangal
2. ✘ Kakinada
3. ✘ Visakhapatnam
4. ✔ Kurnool

Question Number : 66 Question Id : 63068075150 Is Question Mandatory : No Calculator : None Response Time : N.A Think Time : N.A Minimum Instruction Time : 0

Correct Marks : 1

Who was the chairman of the commission appointed by the Government of India in 1948 to examine if the states could be set up on linguistic basis, referring to the possibility of the creation of states of Maharashtra, Andhra, Karnataka and Kerala?

Options :

1. ✘ Narendran
2. ✘ Kothari
3. ✔ SK Dhar
4. ✘ Sakariya

Question Number : 67 Question Id : 63068075151 Is Question Mandatory : No Calculator : None Response Time : N.A Think Time : N.A Minimum Instruction Time : 0

Correct Marks : 1

Who was the first governor of the Andhra Pradesh state that came into being on 1 November 1956?

Options :

1. ✘ Bhim Sen Sachar
2. ✔ Chandulala Madhavlal Trivedi
3. ✘ Satyavant Mallanah Sri Nagesh
4. ✘ Pattom A Thanu Pillai

Question Number : 68 Question Id : 63068075152 Is Question Mandatory : No Calculator : None Response Time : N.A Think Time : N.A Minimum Instruction Time : 0

Correct Marks : 1

Which of the following statements is true regarding Tanguturi Prakasham?

Options :

1. ✔ He was the first chief minister of Andhra State.
2. ✘ He was the first governor of Andhra State.
3. ✘ He was the first chief minister of integrated Andhra Pradesh State.
4. ✘ He did two months of hunger strike demanding a separate Andhra state in 1952.

Question Number : 69 Question Id : 63068075153 Is Question Mandatory : No Calculator : None Response Time : N.A Think Time : N.A Minimum Instruction Time : 0

Correct Marks : 1

'Gabbilam' (1941) is the famous literary work of which poet of Andhra Pradesh?

Options :

1. ✔ Gurrām Jashuva
2. ✘ Srirangam Srinivasa Rao
3. ✘ T Ramaswami Chowdhary
4. ✘ Garimella Satyanarayana

Question Number : 70 Question Id : 63068075154 Is Question Mandatory : No Calculator : None Response Time : N.A Think Time : N.A Minimum Instruction Time : 0

Correct Marks : 1

Who among the following tried to establish a magazine called 'Prakasika' in 1896?

Options :

1. ✘ Gidugu Ramamurthy
2. ✘ Raghupathi Venkayya Naidu
3. ✘ Kandukuri Veereshalingam
4. ✔ Gurajada Appa Rao

Question Number : 71 Question Id : 63068075155 Is Question Mandatory : No Calculator : None Response Time : N.A Think Time : N.A Minimum Instruction Time : 0

Correct Marks : 1

Before 1947, coastal Andhra and Rayalaseema were a part of the Madras presidency and Hyderabad was a separate state. What was the official language of the Madras presidency?

Options :

1. ✘ English
2. ✘ Telugu
3. ✔ Tamil
4. ✘ Urdu

Question Number : 72 Question Id : 63068075156 Is Question Mandatory : No Calculator : None Response Time : N.A Think Time : N.A Minimum Instruction Time : 0

Correct Marks : 1

The Congress party at its Jaipur conclave in 1949 accepted the principle of the formation of the states on linguistic lines and constituted a committee to reconsider this important issue of reorganisation of states. Who among the following was NOT a member of that committee?

Options :

1. ✘ Pattabhi SITHaramayya
2. ✘ Jawaharlal Nehru
3. ✘ Sardar Vallabhai Patel
4. ✔ Neelam Sanjeeva Reddy

Question Number : 73 Question Id : 63068075157 Is Question Mandatory : No Calculator : None Response Time : N.A Think Time : N.A Minimum Instruction Time : 0

Correct Marks : 1

Which of the following e-governance initiatives was first launched in the state of Andhra Pradesh?

Options :

1. ✘ Skill Delivery Platform
2. ✘ Khanij Online
3. ✘ Integrated Financial Management System
4. ✔ Real Time Governance

Question Number : 74 Question Id : 63068075158 Is Question Mandatory : No Calculator : None Response Time : N.A Think Time : N.A Minimum Instruction Time : 0

Correct Marks : 1

In which year was the Centre for Good Governance (CGG) set up in Andhra Pradesh?

Options :

1. ✔ 2001
2. ✘ 1999
3. ✘ 2005
4. ✘ 2007

Question Number : 75 Question Id : 63068075159 Is Question Mandatory : No Calculator : None Response Time : N.A Think Time

: N.A Minimum Instruction Time : 0

Correct Marks : 1

The Centre for Good Governance (CGG) was set up in Andhra Pradesh in collaboration with _____.

Options :

1. ✓ DFID and World Bank
2. ✗ Asian Bank of Development
3. ✗ Asian Infrastructure Investment Bank
4. ✗ New Development Bank

Question Number : 76 Question Id : 63068075160 Is Question Mandatory : No Calculator : None Response Time : N.A Think Time : N.A Minimum Instruction Time : 0

Correct Marks : 1

Name the first village in Andhra Pradesh where 'Rajiv Internet Village' scheme was launched to make public services affordable, transparent and accessible to the rural population.

Options :

1. ✗ Raphadu
2. ✗ Kurumaddali
3. ✓ Chiluvuru
4. ✗ Ichoda

Question Number : 77 Question Id : 63068075161 Is Question Mandatory : No Calculator : None Response Time : N.A Think Time : N.A Minimum Instruction Time : 0

Correct Marks : 1

The health scheme AAROGYASRI, launched in 2007 to provide free tertiary healthcare services to citizens below poverty line, is named after:

Options :

1. ✗ Indira Gandhi
2. ✓ Rajiv Gandhi
3. ✗ Lal Bahadur Shastri
4. ✗ Tanguturi Prakasham

Question Number : 78 Question Id : 63068075162 Is Question Mandatory : No Calculator : None Response Time : N.A Think Time : N.A Minimum Instruction Time : 0

Correct Marks : 1

SERP was established by the Government of Andhra Pradesh (AP) as a sensitive support structure to facilitate poverty reduction through social mobilisation and improvement of livelihoods of the rural poor in Andhra Pradesh. The full form of SERP is:

Options :

1. ✗ Society for Engaging Rural Poor
2. ✗ Social Equality for Rural Poor
3. ✓ Society for Elimination of Rural Poverty
4. ✗ Society for Education of Rural Poverty

Question Number : 79 Question Id : 63068075163 Is Question Mandatory : No Calculator : None Response Time : N.A Think Time : N.A Minimum Instruction Time : 0

Correct Marks : 1

The goal of the IKP project launched in Andhra Pradesh is to reduce poverty of the Below Poverty Level households through sustainable community based women organisations by introducing livelihood interventions through institution building, human resource capacity building and community investment fund. The full form of IKP is:

Options :

1. ✗ Indira Kishore Patham
2. ✓ Indira Kranthi Patham
3. ✗ Indira Kanthi Patham
4. ✗ Indira Kalyan Patham

Question Number : 80 Question Id : 63068075164 Is Question Mandatory : No Calculator : None Response Time : N.A Think Time : N.A Minimum Instruction Time : 0

Correct Marks : 1

Under the YSR Rythu Bharosa scheme launched by the Andhra Pradesh government, how much yearly financial assistance was promised to the farmers?

Options :

1. ✘ ₹25,500/-
2. ✔ ₹13,500/-
3. ✘ ₹35,000/-
4. ✘ ₹5,500/-

Question Number : 81 Question Id : 63068075165 Is Question Mandatory : No Calculator : None Response Time : N.A Think Time : N.A Minimum Instruction Time : 0

Correct Marks : 1

With a view to encourage families with school-going children, the present Andhra Pradesh government has launched a scheme called 'Amma Vodi'. How much financial assistance will be provided to all the mothers who send their children to school?

Options :

1. ✔ ₹15,000/-
2. ✘ ₹25,000/-
3. ✘ ₹20,000/-
4. ✘ ₹18,000/-

Question Number : 82 Question Id : 63068075166 Is Question Mandatory : No Calculator : None Response Time : N.A Think Time : N.A Minimum Instruction Time : 0

Correct Marks : 1

In December 2020, Andhra Pradesh High Court had sought the assistance of the State Government asking whether it can record a finding that 'the constitutional machinery has broken down there'. Which Article of the Constitution of India has provisions in case of failure of constitutional machinery in state?

Options :

1. ✘ Article 350
2. ✘ Article 352
3. ✘ Article 354
4. ✔ Article 356

Question Number : 83 Question Id : 63068075167 Is Question Mandatory : No Calculator : None Response Time : N.A Think Time : N.A Minimum Instruction Time : 0

Correct Marks : 1

The AP State Commission for SCs and STs was established in 2016 by reconstituting the AP State Commission for SCs & STs amending the Act. 9 of _____.

Options :

1. ✔ 2003
2. ✘ 2001
3. ✘ 1997
4. ✘ 2005

Question Number : 84 Question Id : 63068075168 Is Question Mandatory : No Calculator : None Response Time : N.A Think Time : N.A Minimum Instruction Time : 0

Correct Marks : 1

The Andhra Pradesh Social Welfare Fund, which provides financial assistance to encourage, help, foster and strengthen the registered voluntary organisation that are engaged in Social Welfare Activities, was established in:

Options :

1. ✔ 1975
2. ✘ 1977
3. ✘ 1981
4. ✘ 1983

Question Number : 85 Question Id : 63068075169 Is Question Mandatory : No Calculator : None Response Time : N.A Think Time : N.A Minimum Instruction Time : 0

Correct Marks : 1

In terms of area, which is the largest district (before new districts formation in 2022) in Andhra Pradesh?

Options :

1. ✘ Krishna
2. ✘ West Godavari
3. ✘ East Godavari
4. ✔ Anantapur

Question Number : 86 Question Id : 63068075170 Is Question Mandatory : No Calculator : None Response Time : N.A Think Time : N.A Minimum Instruction Time : 0

Correct Marks : 1

Andhra Pradesh has the _____ largest mangrove eco-system in the country.

Options :

1. ✘ second
2. ✘ third
3. ✔ fourth
4. ✘ fifth

Question Number : 87 Question Id : 63068075171 Is Question Mandatory : No Calculator : None Response Time : N.A Think Time : N.A Minimum Instruction Time : 0

Correct Marks : 1

As of December 2021, what is the total number of wildlife sanctuaries in Andhra Pradesh?

Options :

1. ✘ 10
2. ✘ 11
3. ✘ 15
4. ✔ 13

Question Number : 88 Question Id : 63068075172 Is Question Mandatory : No Calculator : None Response Time : N.A Think Time : N.A Minimum Instruction Time : 0

Correct Marks : 1

The river Tungabhadra, which forms the boundary between Karnataka and Andhra Pradesh for the length of 58 kms, is a tributary of the river:

Options :

1. ✘ Godavari
2. ✔ Krishna
3. ✘ Penna
4. ✘ Vamshadhara

Question Number : 89 Question Id : 63068075173 Is Question Mandatory : No Calculator : None Response Time : N.A Think Time : N.A Minimum Instruction Time : 0

Correct Marks : 1

The Pennar river, which originates in the south-west region of Andhra Pradesh, finally merges in the Bay of Bengal in which district of Andhra Pradesh?

Options :

1. ✔ Nellore district
2. ✘ East Godavari district
3. ✘ West Godavari district
4. ✘ Srikakulam district

Question Number : 90 Question Id : 63068075174 Is Question Mandatory : No Calculator : None Response Time : N.A Think Time

: N.A Minimum Instruction Time : 0

Correct Marks : 1

How much of the total length of the Krishna River flows through Andhra Pradesh?

Options :

1. ✘ 425 km
2. ✘ 445 km
3. ✔ 485 km
4. ✘ 465 km

Question Number : 91 Question Id : 63068075175 Is Question Mandatory : No Calculator : None Response Time : N.A Think Time : N.A Minimum Instruction Time : 0

Correct Marks : 1

What is the total length of the coastline of Andhra Pradesh?

Options :

1. ✔ 974 km
2. ✘ 954 km
3. ✘ 934 km
4. ✘ 924 km

Question Number : 92 Question Id : 63068075176 Is Question Mandatory : No Calculator : None Response Time : N.A Think Time : N.A Minimum Instruction Time : 0

Correct Marks : 1

As of March 2022, Andhra Pradesh is the largest producer of marine products with _____ share in the country's exports.

Options :

1. ✘ 50%
2. ✘ 30%
3. ✔ 40%
4. ✘ 55%

Question Number : 93 Question Id : 63068075177 Is Question Mandatory : No Calculator : None Response Time : N.A Think Time : N.A Minimum Instruction Time : 0

Correct Marks : 1

Of which mineral is the state of Andhra Pradesh the sole producer in India?

Options :

1. ✘ Tin ore
2. ✘ Calcite
3. ✘ Dolomite
4. ✔ Apatite

Question Number : 94 Question Id : 63068075178 Is Question Mandatory : No Calculator : None Response Time : N.A Think Time : N.A Minimum Instruction Time : 0

Correct Marks : 1

In terms of geographical area, Andhra Pradesh is the _____ largest state in India.

Options :

1. ✘ seventh
2. ✔ eighth
3. ✘ ninth
4. ✘ tenth

Question Number : 95 Question Id : 63068075179 Is Question Mandatory : No Calculator : None Response Time : N.A Think Time : N.A Minimum Instruction Time : 0

Correct Marks : 1

After the separation of Telangana, the flower that was chosen as the state flower of Andhra Pradesh is:

Options :

1. ✓ jasmine
2. ✗ marigold
3. ✗ gerbera
4. ✗ carnation

Question Number : 96 Question Id : 63068075180 Is Question Mandatory : No Calculator : None Response Time : N.A Think Time : N.A Minimum Instruction Time : 0

Correct Marks : 1

According to the 17th India State of Forest Report (ISFR) 2021 released by the Union Minister for Environment, Forest and Climate Change, Andhra Pradesh has recorded an increase of ____ in its forest cover.

Options :

1. ✗ 347 sq km
2. ✗ 447 sq km
3. ✗ 547 sq km
4. ✓ 647 sq km

Question Number : 97 Question Id : 63068075181 Is Question Mandatory : No Calculator : None Response Time : N.A Think Time : N.A Minimum Instruction Time : 0

Correct Marks : 1

After the bifurcation of Andhra Pradesh, the Central Government has promised to set up a new railway zone at which place in Andhra Pradesh?

Options :

1. ✗ Kakinada
2. ✗ Guntur
3. ✓ Visakhapatnam
4. ✗ Tirupati

Question Number : 98 Question Id : 63068075182 Is Question Mandatory : No Calculator : None Response Time : N.A Think Time : N.A Minimum Instruction Time : 0

Correct Marks : 1

The Andhra Pradesh Reorganisation Bill, 2014 proposed consequential amendments to The Representation of the People Act of:

Options :

1. ✓ 1950
2. ✗ 1952
3. ✗ 1954
4. ✗ 1956

Question Number : 99 Question Id : 63068075183 Is Question Mandatory : No Calculator : None Response Time : N.A Think Time : N.A Minimum Instruction Time : 0

Correct Marks : 1

The Andhra Pradesh Reorganisation Bill, 2014 has proposed the Delimitation of Parliamentary and Assembly Constituencies Order that was passed in the year:

Options :

1. ✗ 2006
2. ✓ 2008
3. ✗ 2004
4. ✗ 2002

Question Number : 100 Question Id : 63068075184 Is Question Mandatory : No Calculator : None Response Time : N.A Think Time : N.A Minimum Instruction Time : 0

Correct Marks : 1

The Andhra Pradesh Reorganisation Bill, 2014 has proposed the amendment of which Schedules of the Constitution of India?

Options :

1. ✗ Second and Third

2. ✓ First and Fourth
3. ✗ Fifth and Sixth
4. ✗ Eighth and Ninth

Question Number : 101 Question Id : 63068075185 Is Question Mandatory : No Calculator : None Response Time : N.A Think Time : N.A Minimum Instruction Time : 0

Correct Marks : 1

The Krishna Waters Dispute Tribunal awarded shares in the Krishna waters to three states - Maharashtra, Karnataka and Andhra Pradesh. How much share was allocated to united Andhra Pradesh?

Options :

1. ✗ 500 TMC
2. ✗ 600 TMC
3. ✓ 800 TMC
4. ✗ 700 TMC

Question Number : 102 Question Id : 63068075186 Is Question Mandatory : No Calculator : None Response Time : N.A Think Time : N.A Minimum Instruction Time : 0

Correct Marks : 1

The Pranahita project in the Telangana region will require 3466 MW power, almost _____ of the current total installed power generation capacity of Andhra Pradesh.

Options :

1. ✓ one-third
2. ✗ one-fourth
3. ✗ one-fifth
4. ✗ one-sixth

Question Number : 103 Question Id : 63068075187 Is Question Mandatory : No Calculator : None Response Time : N.A Think Time : N.A Minimum Instruction Time : 0

Correct Marks : 1

Under which Section of the Andhra Pradesh Reorganisation Act, 2014 did Andhra's petition request the Union Government to notify the jurisdiction of the Krishna River Management Board (KRMB) over the use of Krishna waters?

Options :

1. ✗ Section 83
2. ✗ Section 85
3. ✓ Section 87
4. ✗ Section 89

Question Number : 104 Question Id : 63068075188 Is Question Mandatory : No Calculator : None Response Time : N.A Think Time : N.A Minimum Instruction Time : 0

Correct Marks : 1

In 2014, Andhra Pradesh and Telangana had agreed to split the water of the Krishna River on a temporary or ad-hoc basis in what ratio?

Options :

1. ✓ 66 : 34
2. ✗ 56 : 44
3. ✗ 76 : 24
4. ✗ 51 : 49

Question Number : 105 Question Id : 63068075189 Is Question Mandatory : No Calculator : None Response Time : N.A Think Time : N.A Minimum Instruction Time : 0

Correct Marks : 1

The maintenance of which of the following projects was claimed by Telangana after the bifurcation of Andhra Pradesh?

Options :

1. ✗ Srisailem project
2. ✗ Pulichintala project

3. ✘ Prakasham barrage
4. ✔ Jurala project

Question Number : 106 Question Id : 63068075190 Is Question Mandatory : No Calculator : None Response Time : N.A Think Time : N.A Minimum Instruction Time : 0

Correct Marks : 1

For what reason did the Andhra Pradesh government protest Telangana's use of the Srisailem reservoir water in June 2021?

Options :

1. ✔ Telangana is generating power below 834 feet
2. ✘ Telangana is generating power above 834 feet
3. ✘ Telangana is generating power above 1200 feet
4. ✘ Telangana is generating power above 1000 feet

Question Number : 107 Question Id : 63068075191 Is Question Mandatory : No Calculator : None Response Time : N.A Think Time : N.A Minimum Instruction Time : 0

Correct Marks : 1

During the bifurcation of Andhra Pradesh, the Central Government constituted an 'apex council' to supervise the functioning of the Godavari River Management Board and the Krishna River Management Board. The council consisted of:

Options :

1. ✔ Union Minister of Water Resources and Chief Ministers of respective states
2. ✘ Union Minister of Home and Chief Ministers of respective states
3. ✘ Union Minister of Water Resources and Home Ministers of respective states
4. ✘ Union Minister of Home affairs and Home Ministers of respective states

Question Number : 108 Question Id : 63068075192 Is Question Mandatory : No Calculator : None Response Time : N.A Think Time : N.A Minimum Instruction Time : 0

Correct Marks : 1

As per the Andhra Pradesh Reorganisation Bill, 2014, the resources allocated by the _____ Finance Commission to the existing state of Andhra Pradesh will be apportioned between the two successor states based on population ratio and other parameters.

Options :

1. ✔ 13th
2. ✘ 12th
3. ✘ 11th
4. ✘ 10th

Question Number : 109 Question Id : 63068075193 Is Question Mandatory : No Calculator : None Response Time : N.A Think Time : N.A Minimum Instruction Time : 0

Correct Marks : 1

According to NITI Aayog, the agricultural sector in Andhra Pradesh contributes to more than _____ of the Gross State Domestic Product.

Options :

1. ✘ one-fourth
2. ✔ one-third
3. ✘ one-fifth
4. ✘ one-sixth

Question Number : 110 Question Id : 63068075194 Is Question Mandatory : No Calculator : None Response Time : N.A Think Time : N.A Minimum Instruction Time : 0

Correct Marks : 1

The scheme of Andhra Pradesh Industrial Development Policy (APIDP) 2020-23 is NOT applicable in the Municipal Corporation limits of:

Options :

1. ✘ Cuddapah
2. ✘ Ongole

3. ✘ Kakinada
4. ✔ Vijayawada

Question Number : 111 Question Id : 63068075195 Is Question Mandatory : No Calculator : None Response Time : N.A Think Time : N.A Minimum Instruction Time : 0

Correct Marks : 1

SDP is a Government of Andhra Pradesh initiative to promote conducive business processes through transparency and time-bound information. The full form of SDP is:

Options :

1. ✘ Single Dynamic Portal
2. ✘ Single Digit Portal
3. ✘ Single Division Portal
4. ✔ Single Desk Portal

Question Number : 112 Question Id : 63068075196 Is Question Mandatory : No Calculator : None Response Time : N.A Think Time : N.A Minimum Instruction Time : 0

Correct Marks : 1

What is the rank of Andhra Pradesh in India in terms of the FDI inflows between October 2019 and March 2021?

Options :

1. ✘ 10th
2. ✔ 12th
3. ✘ 14th
4. ✘ 15th

Question Number : 113 Question Id : 63068075197 Is Question Mandatory : No Calculator : None Response Time : N.A Think Time : N.A Minimum Instruction Time : 0

Correct Marks : 1

The Andhra Pradesh government increased its health budget by _____ by allocating ₹13,830.44 crore in the 2021-22 Budget for Health, Medical and Family Welfare.

Options :

1. ✔ 21.1%
2. ✘ 11.1%
3. ✘ 31.1%
4. ✘ 41.1%

Question Number : 114 Question Id : 63068075198 Is Question Mandatory : No Calculator : None Response Time : N.A Think Time : N.A Minimum Instruction Time : 0

Correct Marks : 1

What was the increase in the Gross State Domestic Product (GSDP) of Andhra Pradesh in 2020-21?

Options :

1. ✔ 1.58%
2. ✘ 0.58%
3. ✘ 0.28%
4. ✘ 1.15%

Question Number : 115 Question Id : 63068075199 Is Question Mandatory : No Calculator : None Response Time : N.A Think Time : N.A Minimum Instruction Time : 0

Correct Marks : 1

As per the reports of the Socio-Economic Survey (SES) brought out by the Planning Department, what was the per capita income of Andhra Pradesh in 2020-2021?

Options :

1. ✘ ₹1.10 lakh per annum
2. ✘ ₹1.20 lakh per annum
3. ✔ ₹1.70 lakh per annum

4. ✘ ₹1.40 lakh per annum

Question Number : 116 Question Id : 63068075200 Is Question Mandatory : No Calculator : None Response Time : N.A Think Time : N.A Minimum Instruction Time : 0

Correct Marks : 1

In the rankings by NITI Aayog 2020-21, what is the rank of Andhra Pradesh in SDG goal-1 (eradication of poverty)?

Options :

1. ✔ Third
2. ✘ Fourth
3. ✘ Fifth
4. ✘ Sixth

Question Number : 117 Question Id : 63068075201 Is Question Mandatory : No Calculator : None Response Time : N.A Think Time : N.A Minimum Instruction Time : 0

Correct Marks : 1

On 7 September 2020, the Andhra Pradesh State Government signed an MoU with which country in food processing, marketing and technologies to benefit the horticulture and aquaculture farmers across the State?

Options :

1. ✘ Japan
2. ✘ Indonesia
3. ✔ Netherlands
4. ✘ New Zealand

Question Number : 118 Question Id : 63068075202 Is Question Mandatory : No Calculator : None Response Time : N.A Think Time : N.A Minimum Instruction Time : 0

Correct Marks : 1

What was the rank of Andhra Pradesh in egg production in the country in 2018-19?

Options :

1. ✔ First
2. ✘ Second
3. ✘ Third
4. ✘ Fourth

Question Number : 119 Question Id : 63068075203 Is Question Mandatory : No Calculator : None Response Time : N.A Think Time : N.A Minimum Instruction Time : 0

Correct Marks : 1

How much percentage of the total value of sea food export from the country was contributed by Andhra Pradesh by the end of 2018-19?

Options :

1. ✘ 46%
2. ✘ 16%
3. ✘ 26%
4. ✔ 36%

Question Number : 120 Question Id : 63068075204 Is Question Mandatory : No Calculator : None Response Time : N.A Think Time : N.A Minimum Instruction Time : 0

Correct Marks : 1

In February 2021, the Andhra Pradesh State Government approved how many new ESI (Employees' State Insurance) hospitals?

Options :

1. ✘ Eleven
2. ✘ Nine
3. ✔ Seven
4. ✘ Thirteen

Question Number : 121 Question Id : 63068075205 Is Question Mandatory : No Calculator : None Response Time : N.A Think

Time : N.A Minimum Instruction Time : 0

Correct Marks : 1

Six colleagues, namely Anchal, Yamuna, Chitra, Divija, Eshan and Prachi, joined a famous yoga centre. On their first day of yoga classes, they sat together in the same line. Chitra sat between Anchal and Eshan. Divija was not at the end. Yamuna sat to the immediate right of Eshan. Prachi was not at the right end. Divija sat fourth to the left of Yamuna.

Who was at the left end if they were facing towards the north?

Options :

1. ✓ Prachi
2. ✗ Anchal
3. ✗ Yamuna
4. ✗ Chitra

Question Number : 122 Question Id : 63068075206 Is Question Mandatory : No Calculator : None Response Time : N.A Think Time : N.A Minimum Instruction Time : 0

Correct Marks : 1

Eight executive officers, Biswan, Manoj, Nipun, Diksha, Piyush, Chetan, Ravi and Eshan, are sitting around a circular table at equal distances from each other. They all are facing the centre of the table. Diksha is to the immediate right of Biswan and third to the left of Piyush. Manoj is the immediate neighbour of Chetan but not of Nipun. Piyush is the immediate neighbour of Eshan and second to the right of Manoj. Nipun is not the immediate neighbour of Biswan.

Who is sitting diagonally opposite to Manoj?

Options :

1. ✗ Biswan
2. ✓ Nipun
3. ✗ Ravi
4. ✗ Eshan

Question Number : 123 Question Id : 63068075207 Is Question Mandatory : No Calculator : None Response Time : N.A Think Time : N.A Minimum Instruction Time : 0

Correct Marks : 1

There are 23 students in a yoga class, and the trainer has planned for an arrangement of all the students in a single row on stage on the occasion of International Yoga Day. Rupak is to be at the 10th position from the left side of the row and Raghu is to be at the 21st position from the right side of the row. Find the number of students who will be sitting between the Rupak and Raghu?

Options :

1. ✗ 5
2. ✓ 6
3. ✗ 7
4. ✗ 8

Question Number : 124 Question Id : 63068075208 Is Question Mandatory : No Calculator : None Response Time : N.A Think Time : N.A Minimum Instruction Time : 0

Correct Marks : 1

Read the given statements and conclusions carefully. Assuming that the information given in the statements are true, even if they appear to be at variance with commonly known facts, decide which of the given conclusions logically follow(s) from the statements

Statements:

Some jammers are anchors.
Some anchors are bakers.
All the bakers are consultants.

Conclusions:

I. Some consultants are anchors.
II. Some bakers are jammers.
III. No baker is a jammer.
IV. Some anchors are jammers.

Options :

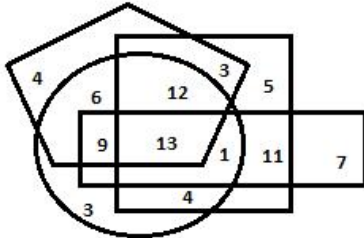
1. ✗ Only conclusions I and II follow

2. ✘ Only conclusions II and IV follow
3. ✘ Only conclusions II and III follow
4. ✔ Both conclusions I and IV and either conclusion II or conclusion III follow

Question Number : 125 Question Id : 63068075209 Is Question Mandatory : No Calculator : None Response Time : N.A Think Time : N.A Minimum Instruction Time : 0

Correct Marks : 1

In the given Venn diagram, the square represents 'boys', the circle represents 'tall persons', the pentagon represents 'North Indians' and the rectangle represents 'food lovers'. The numbers given in the diagram represent the number of persons of that particular category.



How many North Indian boys are tall persons but not food lovers?

Options :

1. ✔ 12
2. ✘ 13
3. ✘ 25
4. ✘ 16

Question Number : 126 Question Id : 63068075210 Is Question Mandatory : No Calculator : None Response Time : N.A Think Time : N.A Minimum Instruction Time : 0

Correct Marks : 1

Amongst six badminton players, Neha, Rajiv, Tilak, Komal, Udit and Prachi, each has a different age. Prachi's age is not an even number. Neha's age is more than that of only Udit and Prachi. Komal's age is less than that of only one person. Rajiv's age is 65 years, and Tilak's age is 49 years. The youngest person's age is 26 years.

Who among the following is the youngest badminton player?

Options :

1. ✔ Udit
2. ✘ Prachi
3. ✘ Tilak
4. ✘ Komal

Question Number : 127 Question Id : 63068075211 Is Question Mandatory : No Calculator : None Response Time : N.A Think Time : N.A Minimum Instruction Time : 0

Correct Marks : 1

Refer to the given letter, number, symbol series and answer the following question.

(Left) G C & W % 9 D 4 @ 6 K & 2 R Y # 3 5 E * S \$ 2 (Right)

How many such symbols are there which are immediately preceded by a letter and also immediately followed by a number?

Options :

1. ✘ One
2. ✘ Two
3. ✘ Three
4. ✔ Four

Question Number : 128 Question Id : 63068075212 Is Question Mandatory : No Calculator : None Response Time : N.A Think Time : N.A Minimum Instruction Time : 0

Correct Marks : 1

In a code language, 'LOCATE' is written as 'OIXUGY' and 'SYNTAX' is written as 'HSMNZR'. How will 'MONKEY' be written in that language?

Options :

1. ✘ HIMEUS
2. ✘ NMIVES
3. ✘ NJMFVR
4. ✔ NIMEVS

Question Number : 129 Question Id : 63068075213 Is Question Mandatory : No Calculator : None Response Time : N.A Think Time : N.A Minimum Instruction Time : 0

Correct Marks : 1

In a certain code language, 'TRACK' is coded as '14642123' and 'SLOPE' is coded as '819181522'. How will 'MASTER' be coded in that language?

Options :

1. ✘ 1228223416
2. ✔ 2182322416
3. ✘ 2128223146
4. ✘ 1822223146

Question Number : 130 Question Id : 63068075214 Is Question Mandatory : No Calculator : None Response Time : N.A Think Time : N.A Minimum Instruction Time : 0

Correct Marks : 1

Rakesh started from his home towards north and walked for 1km. He then turned left and walked for 500 m before he turned left and walked for 1 km. Finally, he turned right and walked for 1 km. What is the direction of his home from his present position?

Options :

1. ✘ South
2. ✘ West
3. ✘ North
4. ✔ East

Question Number : 131 Question Id : 63068075215 Is Question Mandatory : No Calculator : None Response Time : N.A Think Time : N.A Minimum Instruction Time : 0

Correct Marks : 1

Vilas starts walking from his home and walks 30 m towards south. From there, he turns left and walks 40 m. After that, he turns right and walks 45 m. Then, he turns left and walks 30 m. He then turns left and walks 50 m. Finally, he turns left and walks 70 m. How far is he now from his home and in which direction with reference to his home?

Options :

1. ✘ 25 m, north
2. ✘ 5 m, north
3. ✘ 5 m, south
4. ✔ 25 m, south

Question Number : 132 Question Id : 63068075216 Is Question Mandatory : No Calculator : None Response Time : N.A Think Time : N.A Minimum Instruction Time : 0

Correct Marks : 1

There is a family of six persons – P,Q,R,S,T and U. P is the daughter of S and mother of R. R is the sister of U. Q is the son-in-law of T's husband S. How is T related to U?

Options :

1. ✘ Sister
2. ✘ Mother-in-law
3. ✘ Mother
4. ✔ Grandmother

Question Number : 133 Question Id : 63068075217 Is Question Mandatory : No Calculator : None Response Time : N.A Think Time : N.A Minimum Instruction Time : 0

Correct Marks : 1

'A + B' means 'A is the father of B'.

'A - B' means 'A is the husband of B'.

'A × B' means 'A is the daughter of B'.

'A ÷ B' means 'A is the sister of B'.

If $P + M ÷ Q × N × T - U$, then how is P related to N?

Options :

1. ✘ Brother
2. ✘ Son
3. ✔ Husband
4. ✘ Father-in-law

Question Number : 134 Question Id : 63068075218 Is Question Mandatory : No Calculator : None Response Time : N.A Think Time : N.A Minimum Instruction Time : 0

Correct Marks : 1

Four pairs of letter-clusters have been given, out of which three are alike in some manner and one is different. Select the one that is different.

Options :


1. ✘ MDIL : HEPI
2. ✔ NAIG : ECMI
3. ✘ TLSI : MHWP
4. ✘ PKIN : MGRL

Question Number : 135 Question Id : 63068075219 Is Question Mandatory : No Calculator : None Response Time : N.A Think Time : N.A Minimum Instruction Time : 0

Correct Marks : 1

Study the given pie diagram and answer the following question.

The following pie chart represents the different subject books issued by the librarian in a school. There are 600 books in total, and each subject has equal number of books.



What percentage of total books were issued to the students (approximately)?

Options :

1. ✘ 77%
2. ✘ 85%
3. ✔ 90%
4. ✘ 95%

Question Number : 136 Question Id : 63068075220 Is Question Mandatory : No Calculator : None Response Time : N.A Think Time : N.A Minimum Instruction Time : 0

Correct Marks : 1

The following table shows the number of intermediate students who appeared and passed from four different districts in Telangana over the years.

Year	Warangal		Mahbubnagar		Nalgonda		Karimnagar	
	Appeared	Passed	Appeared	Passed	Appeared	Passed	Appeared	Passed
2014	2568	1763	3568	3230	1569	1083	1056	980
2015	3679	2848	4698	4600	2345	1896	1534	856
2016	4789	3654	6568	6300	2896	2525	1256	1083
2017	5639	4564	7435	6809	5326	3598	1458	1023
2018	4743	3789	8546	7843	3986	2985	1653	1523
2019	3967	3014	9678	8456	4015	3289	2543	1895
2020	4586	3985	9756	8543	4125	3856	2495	1986

From which of the following districts was there a continuous increase in the number of both appeared and passed students?

Options :

1. ✓ Mahbubnagar
2. ✗ Warangal
3. ✗ Nalgonda
4. ✗ Karimnagar

Question Number : 137 Question Id : 63068075221 Is Question Mandatory : No Calculator : None Response Time : N.A Think Time : N.A Minimum Instruction Time : 0

Correct Marks : 1

The following table shows the number of intermediate students who appeared and passed from four different districts in Telangana over the years.

Year	Warangal		Mahbubnagar		Nalgonda		Karimnagar	
	Appeared	Passed	Appeared	Passed	Appeared	Passed	Appeared	Passed
2014	2568	1763	3568	3230	1569	1083	1056	980
2015	3679	2848	4698	4600	2345	1896	1534	856
2016	4789	3654	6568	6300	2896	2525	1256	1083
2017	5639	4564	7435	6809	5326	3598	1458	1023
2018	4743	3789	8546	7843	3986	2985	1653	1523
2019	3967	3014	9678	8456	4015	3289	2543	1895
2020	4586	3985	9756	8543	4125	3856	2495	1986

In which of the following years was the percentage of passed to appeared students from Nalgonda district the least?

Options :

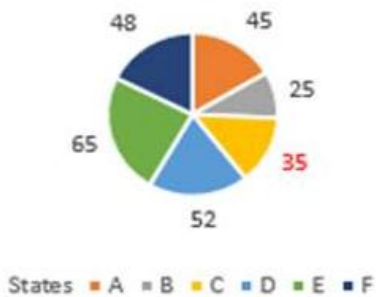
1. ✓ 2014
2. ✗ 2016
3. ✗ 2018
4. ✗ 2020

Question Number : 138 Question Id : 63068075222 Is Question Mandatory : No Calculator : None Response Time : N.A Think Time : N.A Minimum Instruction Time : 0

Correct Marks : 1

The following pie chart shows the proportion of literate population of six states in 2018. The total number of literates in the six states is 256734.

Proportion of literate population of six states in 2018



What is the ratio of the number of literates in states C and E, respectively?

Options :

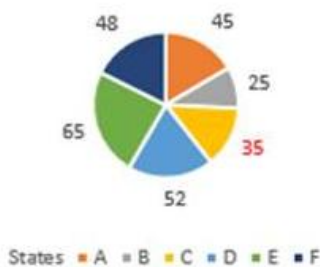
1. ✘ 15 : 7
2. ✔ 7 : 13
3. ✘ 7 : 15
4. ✘ 4 : 3

Question Number : 139 Question Id : 63068075223 Is Question Mandatory : No Calculator : None Response Time : N.A Think Time : N.A Minimum Instruction Time : 0

Correct Marks : 1

The following pie chart shows the proportion of literate population of six states in 2018. The total number of literates in the six states is 256734.

Proportion of literate population of six states in 2018



Find the average of the number of literates from states B, D and F.

Options :

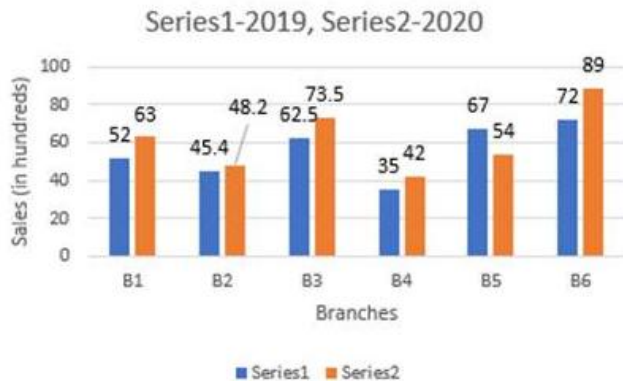
1. ✔ 39,619.44
2. ✘ 1,18,858.33
3. ✘ 49,916.66

4. ✘ 36,916.44

Question Number : 140 Question Id : 63068075224 Is Question Mandatory : No Calculator : None Response Time : N.A Think Time : N.A Minimum Instruction Time : 0

Correct Marks : 1

The following bar graph gives the sales (in hundreds) of a particular brand of television set from six branches (B1-B6) of a city during two consecutive years, 2019 and 2020.



What is the average sales (in hundreds) of all the branches in the year 2019?

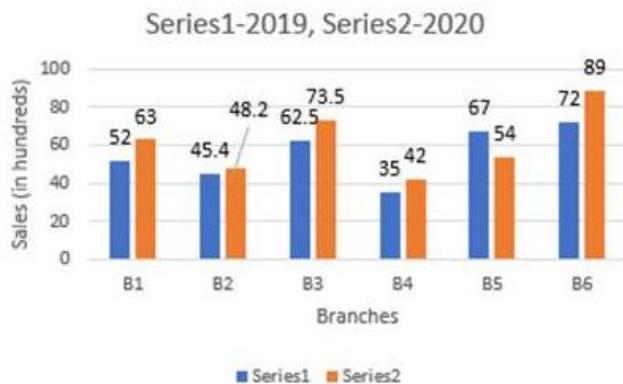
Options :

1. ✘ 53.65
2. ✘ 54.56
3. ✔ 55.65
4. ✘ 56.65

Question Number : 141 Question Id : 63068075225 Is Question Mandatory : No Calculator : None Response Time : N.A Think Time : N.A Minimum Instruction Time : 0

Correct Marks : 1

The following bar graph gives the sales (in hundreds) of a particular brand of television set from six branches (B1-B6) of a city during two consecutive years, 2019 and 2020.



What percentage of the average sales of branches B2, B4 and B6 in 2019 is the average sales of branches B1, B3 and B5 in 2020?

Options :

1. ✘ 80.04%

2. ✘ 32.05%
3. ✘ 113.56%
4. ✔ 124.94%

Question Number : 142 Question Id : 63068075226 Is Question Mandatory : No Calculator : None Response Time : N.A Think Time : N.A Minimum Instruction Time : 0

Correct Marks : 1

Calculate the arithmetic mean by assumed mean method from the following data.

Marks	0-10	10-20	20-30	30-40	40-50
No. of students	5	15	25	30	20

Options :

1. ✘ 28.5634
2. ✘ 25.3768
3. ✔ 29.7368
4. ✘ 28.7431

Question Number : 143 Question Id : 63068075227 Is Question Mandatory : No Calculator : None Response Time : N.A Think Time : N.A Minimum Instruction Time : 0

Correct Marks : 1

Find the value of the mode for the following frequency distribution.

x	1	2	3	4	5	6	7	8
f	4	9	16	25	22	15	7	3

Options :

1. ✔ 4
2. ✘ 5
3. ✘ 6
4. ✘ 3

Question Number : 144 Question Id : 63068075228 Is Question Mandatory : No Calculator : None Response Time : N.A Think Time : N.A Minimum Instruction Time : 0

Correct Marks : 1

Find the mode from the following data showing the marks obtained by 10 students.

10, 27, 24, 12, 27, 27, 20, 18, 15, 30

Options :

1. ✘ 30
2. ✔ 27

3. ✘ 24

4. ✘ 20

Question Number : 145 Question Id : 63068075229 Is Question Mandatory : No Calculator : None Response Time : N.A Think Time : N.A Minimum Instruction Time : 0

Correct Marks : 1

Compute the mode from the following data.

Size	0 -10	10-20	20 -30	30-40	40-50	50-60	60-70
Frequency	5	15	20	20	32	14	14

Options :

1. ✘ 38

2. ✘ 40

3. ✘ 42

4. ✔ 44

Question Number : 146 Question Id : 63068075230 Is Question Mandatory : No Calculator : None Response Time : N.A Think Time : N.A Minimum Instruction Time : 0

Correct Marks : 1

For a distribution of group of 100 students, the mean marks and median marks are found to be 62.80 and 65.20, respectively. What are the modal marks?

Options :

1. ✔ 70.0

2. ✘ 70.5

3. ✘ 70.25

4. ✘ 70.45

Question Number : 147 Question Id : 63068075231 Is Question Mandatory : No Calculator : None Response Time : N.A Think Time : N.A Minimum Instruction Time : 0

Correct Marks : 1

Calculate the coefficient of range from the following data.

Marks	10-20	20-30	30-40	40-50	50-60
No. of students	8	10	12	8	4

Options :

1. ✘ 0.752

2. ✘ 0.725

3. ✓ 0.714

4. ✗ 0.754

Question Number : 148 Question Id : 63068075232 Is Question Mandatory : No Calculator : None Response Time : N.A Think Time : N.A Minimum Instruction Time : 0

Correct Marks : 1

The following are the prices of the shares of a company from Monday to Saturday. Find the range of the data given.

Days	Monday	Tuesday	Wednesday	Thursday	Friday	Saturday
Price (in ₹)	200	210	208	160	220	250

Options :

1. ✗ ₹85

2. ✓ ₹90

3. ✗ ₹89

4. ✗ ₹91

Question Number : 149 Question Id : 63068075233 Is Question Mandatory : No Calculator : None Response Time : N.A Think Time : N.A Minimum Instruction Time : 0

Correct Marks : 1

The arithmetic mean and standard deviation of a set of 8 items are 42 and 4, respectively. If an item of value 26 is added to the set, find the standard deviation of the 8 items.

Options :

1. ✗ 14.89

2. ✗ 14.56

3. ✗ 6.62

4. ✓ 6.48

Question Number : 150 Question Id : 63068075234 Is Question Mandatory : No Calculator : None Response Time : N.A Think Time : N.A Minimum Instruction Time : 0

Correct Marks : 1

Calculate the variance of the following observations.

40.12, 40.13, 40.15, 40.17, 40.22 and 40.21

Options :

1. ✓ 0.0014

2. ✗ 0.0016

3. ✗ 0.0031

4. ✖ 0.0035